

Multi Tasking Non Technical Staff and Havaladar CBIC and CBN Examination 2023

Roll Number	
Candidate Name	
Venue Name	iON Digital Zone iDZ Thondamuthur
Exam Date	01/09/2023
Exam Time	9:00 AM - 11:00 AM
Subject	MTS Non Tech Havaladar CBIC and CBN Examination 2023

Section : Numerical and Mathematical Ability

Q.1 If the first number is 20% less than the third number and the ratio of the second to the third number is 7 : 10, then the average of the first and the third number is how much per cent more than the second number?

- Ans**
- 1. $26\frac{4}{7}$
 - 2. $28\frac{2}{7}$
 - 3. $28\frac{4}{7}$
 - 4. $24\frac{2}{7}$

Question ID : 264330155958

Option 1 ID : 264330611234

Option 2 ID : 264330611232

Option 3 ID : 264330611231

Option 4 ID : 264330611233

Status : Answered

Chosen Option : 3

Q.2 Geeta deposited a certain sum of money in her bank account which amounted to ₹27,783 in 3 years at 5% per annum, the interest being compounded annually. What amount did she deposit?

- Ans**
- 1. ₹25,500
 - 2. ₹25,000
 - 3. ₹26,000
 - 4. ₹24,000

Question ID : 264330154129

Option 1 ID : 264330603980

Option 2 ID : 264330603981

Option 3 ID : 264330603979

Option 4 ID : 264330603982

Status : Answered

Chosen Option : 4

Q.3 A truck driver drove 60 km/h for three hours. Then he stopped for one hour and did not go anywhere. Then, he drove four more hours at 60 km/h. What was the driver's average speed (in km/h)?

- Ans**
- ✓ 1. 52.5
 - ✗ 2. 62.4
 - ✗ 3. 50.5
 - ✗ 4. 42.8

Question ID : 264330156099

Option 1 ID : 264330611796

Option 2 ID : 264330611798

Option 3 ID : 264330611795

Option 4 ID : 264330611797

Status : Answered

Chosen Option : 1

Q.4 The following table indicates the number of candidates who appeared in an entrance examination from four different cities A, B, C, D and the ratio of passing and failing. Study the table carefully and answer the question.

City	No. of candidates appeared	Ratio of passing and failing
A	660	5 : 6
B	650	2 : 3
C	500	3 : 2
D	630	4 : 5

Which city has the highest number of candidates who failed in the entrance examination and find its rate of per cent in that city, respectively?

- Ans**
- ✗ 1. A, 50%
 - ✓ 2. B, 60%
 - ✗ 3. D, 60%
 - ✗ 4. C, 50%

Question ID : 264330156014

Option 1 ID : 264330611456

Option 2 ID : 264330611457

Option 3 ID : 264330611455

Option 4 ID : 264330611458

Status : Answered

Chosen Option : 2

Q.5 Disha invested an amount of ₹20,000 for 9 years at a simple interest per annum and obtain the total amount of ₹33,500. What is the rate of interest?

- Ans**
- ✗ 1. 8%
 - ✗ 2. 8.5%
 - ✓ 3. 7.5%
 - ✗ 4. 9%

Question ID : 264330156188

Option 1 ID : 264330612154

Option 2 ID : 264330612153

Option 3 ID : 264330612152

Option 4 ID : 264330612151

Status : Answered

Chosen Option : 3

Q.6 Simplify:

$$(13 \div 13 \text{ of } 13 + 13) / (13 \div 13 \times 13 + 13)$$

- Ans
- 1. $\frac{1}{26}$
 - 2. $\frac{15}{26}$
 - 3. $\frac{13}{96}$
 - 4. $\frac{85}{169}$

Question ID : 264330156088

Option 1 ID : 264330611751

Option 2 ID : 264330611752

Option 3 ID : 264330611754

Option 4 ID : 264330611753

Status : Answered

Chosen Option : 4

Q.7 The cost price of an item is ₹4,350. What is the profit percentage (rounded off to 1 decimal place) if it is sold at ₹5,680?

- Ans
- 1. 28.5%
 - 2. 40.7%
 - 3. 36.8%
 - 4. 30.6%

Question ID : 264330156475

Option 1 ID : 264330613290

Option 2 ID : 264330613287

Option 3 ID : 264330613288

Option 4 ID : 264330613289

Status : Answered

Chosen Option : 4

Q.8 In a class of 37 students, there are 22 girls. The average weight of these girls is 46 kg and the average weight of the whole class is 50 kg. What is the average weight (in kg) of the boys in that class? (Rounded off to 2 decimal places)

- Ans
- 1. 60.74
 - 2. 55.87
 - 3. 61.35
 - 4. 58.25

Question ID : 264330155728

Option 1 ID : 264330610317

Option 2 ID : 264330610315

Option 3 ID : 264330610318

Option 4 ID : 264330610316

Status : Answered

Chosen Option : 2

Q.9 A boat takes 20 hours for travelling downstream from point A to point B and comes back to a midpoint C between A and B. The speed of the stream is 5 km/h and the speed of the boat in still water is 10 km/h. Find the distance between A and B (in km).

- Ans**
- 1. 100
 - 2. 120
 - 3. 150
 - 4. 75

Question ID : 264330153854
 Option 1 ID : 264330602880
 Option 2 ID : 264330602879
 Option 3 ID : 264330602881
 Option 4 ID : 264330602882
 Status : Answered
 Chosen Option : 2

Q.10 Raju sold an article to Ravi at 10% gain. Ravi sold the article to Ramu at a loss of 10%. If Ramu paid ₹1,485 to Ravi, find the selling price of Raju to Ravi.

- Ans**
- 1. ₹1,200
 - 2. ₹1,500
 - 3. ₹1,650
 - 4. ₹1,600

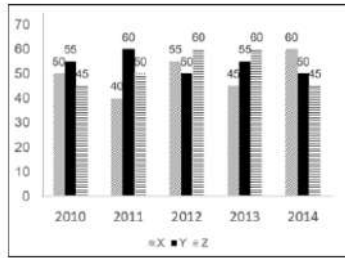
Question ID : 264330153840
 Option 1 ID : 264330602825
 Option 2 ID : 264330602823
 Option 3 ID : 264330602826
 Option 4 ID : 264330602824
 Status : Answered
 Chosen Option : 3

Q.11 A and B can do a piece of work in 4 days, B and C can do the same work in 5 days, A and C can do it in 10 days. If A, B, C work together, in how many days can they complete the work?

- Ans**
- 1. $3\frac{11}{7}$
 - 2. $11\frac{3}{7}$
 - 3. $3\frac{7}{11}$
 - 4. $11\frac{7}{3}$

Question ID : 264330156009
 Option 1 ID : 264330611437
 Option 2 ID : 264330611436
 Option 3 ID : 264330611438
 Option 4 ID : 264330611435
 Status : Answered
 Chosen Option : 3

Q.12 The graph shows the production of tyres (in Lakhs) by three different companies X, Y, and Z over the years.
Directions: Study the following graph carefully to answer the question given below it.



What is the difference between the average production per year of the company with the highest average production and that of the company with the lowest average production in Lakhs?

- Ans
- 1. 2
 - 2. 6
 - 3. 8
 - 4. 4

Question ID : 264330153891
Option 1 ID : 264330603027
Option 2 ID : 264330603029
Option 3 ID : 264330603030
Option 4 ID : 264330603028
Status : Answered
Chosen Option : 4

Q.13 What is the mean proportional of 9.61 and 3.61?

- Ans
- 1. 3.17
 - 2. 5.89
 - 3. 4.87
 - 4. 6.78

Question ID : 264330154085
Option 1 ID : 264330603803
Option 2 ID : 264330603805
Option 3 ID : 264330603804
Option 4 ID : 264330603806
Status : Answered
Chosen Option : 2

Q.14 Two numbers A and B are such that the sum of 6% of A and 4% of B is two-fifth of the sum of 7% of A and 11% of B, then the ratio A : B is:

- Ans
- 1. 3 : 7
 - 2. 5 : 8
 - 3. 1 : 8
 - 4. 1 : 7

Question ID : 264330154088
Option 1 ID : 264330603816
Option 2 ID : 264330603818
Option 3 ID : 264330603817
Option 4 ID : 264330603815
Status : Answered
Chosen Option : 3

Q.15 Two trains of length 110 m and 85 m are moving in the same direction at 12 m/s and 7 m/s, respectively. Find the time (in seconds) taken by the faster train to cross the slower train.

- Ans** ✓ 1. 39
✗ 2. 35
✗ 3. 19
✗ 4. 29

Question ID : 264330155753
Option 1 ID : 264330610418
Option 2 ID : 264330610417
Option 3 ID : 264330610415
Option 4 ID : 264330610416
Status : Answered
Chosen Option : 1

Q.16 In what ratio must a grocer mix two varieties of rice costing ₹128 and ₹143 per kg, respectively, to get a mixture of rice worth ₹137.75 per kg?

- Ans** ✗ 1. 12:5
✓ 2. 7:13
✗ 3. 5:4
✗ 4. 6:7

Question ID : 264330153759
Option 1 ID : 264330602499
Option 2 ID : 264330602500
Option 3 ID : 264330602501
Option 4 ID : 264330602502
Status : Answered
Chosen Option : 2

Q.17 Two persons take steps of 77 cm and 88 cm, respectively. If they start in step, then what is the minimum distance (in cm) they should cover so that both of them can cover the distance in complete steps?

- Ans** ✗ 1. 968
✗ 2. 828
✓ 3. 616
✗ 4. 560

Question ID : 264330156295
Option 1 ID : 264330612581
Option 2 ID : 264330612580
Option 3 ID : 264330612582
Option 4 ID : 264330612579
Status : Answered
Chosen Option : 3

Q.18 The surface area of a sphere is 616 cm^2 , find its diameter.

Take $\pi = \frac{22}{7}$

- Ans
- 1. 14 cm
 - 2. 2 cm
 - 3. 4 cm
 - 4. 3 cm

Question ID : 264330156369
Option 1 ID : 264330612875
Option 2 ID : 264330612876
Option 3 ID : 264330612878
Option 4 ID : 264330612877
Status : Answered
Chosen Option : 1

Q.19 The diameter of a metallic sphere is 6 cm. It is melted and drawn into a wire having a diameter of the cross section as 0.4 cm. Find the length of the wire (in metres).

- Ans
- 1. 18
 - 2. 9
 - 3. 12
 - 4. 10

Question ID : 264330153866
Option 1 ID : 264330602930
Option 2 ID : 264330602929
Option 3 ID : 264330602928
Option 4 ID : 264330602927
Status : Answered
Chosen Option : 2

Q.20 A, B and C can do a piece of work in 10, 15, 12 days, respectively. A and B worked alternately for 5 days each and left. Then C joined and completed the work. In how many days did C complete the remaining work?

- Ans
- 1. 3
 - 2. 1
 - 3. 4
 - 4. 2

Question ID : 264330153856
Option 1 ID : 264330602888
Option 2 ID : 264330602890
Option 3 ID : 264330602887
Option 4 ID : 264330602889
Status : Answered
Chosen Option : 4

Q.1 287 is related to 398 following a certain logic. Following the same logic, 378 is related to 489. To which of the following is 852 related to, following the same logic?

- Ans**
- 1. 643
 - 2. 963
 - 3. 346
 - 4. 543

Question ID : 264330151602
Option 1 ID : 264330594036
Option 2 ID : 264330594035
Option 3 ID : 264330594038
Option 4 ID : 264330594037
Status : Answered
Chosen Option : 2

Q.2 If 'A' stands for '+', 'B' stands for '×', 'C' stands for '+' and 'D' stands for '-', what will come in place of the question mark (?) in the following equation?
(87 A 29) B 14 D 24 C 14 C 6 B 5 = ?

- Ans**
- 1. 68
 - 2. 74
 - 3. 62
 - 4. 56

Question ID : 264330151805
Option 1 ID : 264330594848
Option 2 ID : 264330594850
Option 3 ID : 264330594849
Option 4 ID : 264330594847
Status : Answered
Chosen Option : 3

Q.3 What should come in place of '?' in the given series?

9 15 33 87 ? 735 2193

- Ans**
- 1. 241
 - 2. 249
 - 3. 237
 - 4. 225

Question ID : 264330151483
Option 1 ID : 264330593561
Option 2 ID : 264330593562
Option 3 ID : 264330593560
Option 4 ID : 264330593559
Status : Answered
Chosen Option : 2

Q.4 What should come in place of ? in the given series based on the English alphabetical order?

CNT, FQU, ITV, LWW, ?

- Ans
- 1. OZX
 - 2. NYY
 - 3. MXZ
 - 4. LYX

Question ID : 264330155786

Option 1 ID : 264330610550

Option 2 ID : 264330610549

Option 3 ID : 264330610548

Option 4 ID : 264330610547

Status : Answered

Chosen Option : 1

Q.5 38 is related to 49 following a certain logic. Following the same logic, 64 is related to 75. To which of the following is 83 related to, following the same logic?

- Ans
- 1. 93
 - 2. 95
 - 3. 92
 - 4. 94

Question ID : 264330151593

Option 1 ID : 264330594000

Option 2 ID : 264330594002

Option 3 ID : 264330593999

Option 4 ID : 264330594001

Status : Answered

Chosen Option : 4

Q.6 What should come in place of '?' in the given series?

3 9 45 261 1557 ?

- Ans
- 1. 9555
 - 2. 8572
 - 3. 9433
 - 4. 9333

Question ID : 264330151451

Option 1 ID : 264330593434

Option 2 ID : 264330593431

Option 3 ID : 264330593433

Option 4 ID : 264330593432

Status : Answered

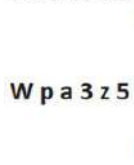
Chosen Option : 4

Q.7 What will come in the place of '?' in the following equation, if '+' and '-' are interchanged and '×' and '÷' are interchanged?
 $32 - 512 \times 64 \div 8 + 64 = ?$

- Ans
- 1. 42
 - 2. 22
 - 3. 32
 - 4. 52

Question ID : 264330155677
 Option 1 ID : 264330610113
 Option 2 ID : 264330610111
 Option 3 ID : 264330610112
 Option 4 ID : 264330610114
 Status : Answered
 Chosen Option : 3

Q.8 Select the correct mirror image of the given figure when the mirror is placed at MN as shown below.



- Ans
- 1. 5z3 ɛp W
 - 2. z5ɛ ɛp M
 - 3. 2z3 ɛb M
 - 4. 2zɛ ɛq W

Question ID : 264330151510
 Option 1 ID : 264330593667
 Option 2 ID : 264330593670
 Option 3 ID : 264330593668
 Option 4 ID : 264330593669
 Status : Answered
 Chosen Option : 4

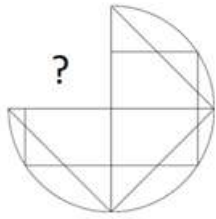
Q.9 What should come in place of '?' in the given series?

16 65 261 1045 4181 ?

- Ans
- 1. 16945
 - 2. 16273
 - 3. 16725
 - 4. 16892

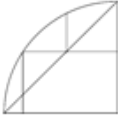
Question ID : 264330151475
 Option 1 ID : 264330593530
 Option 2 ID : 264330593527
 Option 3 ID : 264330593528
 Option 4 ID : 264330593529
 Status : Answered
 Chosen Option : 3

Q.10 Identify the figure that completes the pattern (rotation is NOT allowed).



Ans

✗ 1.



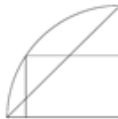
✗ 2.



✗ 3.



✓ 4.



Question ID : 264330154514

Option 1 ID : 264330605521

Option 2 ID : 264330605520

Option 3 ID : 264330605519

Option 4 ID : 264330605522

Status : Answered

Chosen Option : 4

Q.11 Select the word-pair that best represents a similar relationship to the one expressed in the pair of words given below.

(The words must be considered as meaningful English words and must not be related to each other based on the number of letters/number of consonants/vowels in the word)

Reflection : Light

Ans ✗ 1. Sentiment : Feeling

✓ 2. Echo : Sound

✗ 3. Iris : Sight

✗ 4. Movie : Scene

Question ID : 264330154638

Option 1 ID : 264330606017

Option 2 ID : 264330606016

Option 3 ID : 264330606018

Option 4 ID : 264330606015

Status : Answered

Chosen Option : 2

Q.12 Read the given statements and conclusions carefully. You have to take the given statements to be true even if they seem to be at variance from commonly known facts. You have to decide which conclusion/s logically follow/s from the given statements.

Statements: All rags are carpets. Some carpets are steel. Some steel are bottles.

Conclusion I: All carpets are rags.

Conclusion II: Some carpets are bottles.

- Ans**
- 1. Only conclusion (I) is follow.
 - 2. Both conclusions (I) and (II) are follow.
 - 3. Only conclusion (II) is follow.
 - 4. Neither conclusion (I) nor (II) is follow.

Question ID : 264330155925

Option 1 ID : 264330611103

Option 2 ID : 264330611106

Option 3 ID : 264330611104

Option 4 ID : 264330611105

Status : Answered

Chosen Option : 4

Q.13 Find out the correct alternative that when filled in the blanks in the same sequence will make the series logically complete.

X _AL ZH_L _KAL DNA_ _QAL

- Ans**
- 1. FBPSB
 - 2. FABLE
 - 3. EABLF
 - 4. EBFLA

Question ID : 264330154726

Option 1 ID : 264330606370

Option 2 ID : 264330606368

Option 3 ID : 264330606369

Option 4 ID : 264330606367

Status : Answered

Chosen Option : 3

Q.14 The position of how many letters will remain unchanged if each of the letter in the word 'FINGER' is arranged in alphabetical order?

- Ans**
- 1. Two
 - 2. One
 - 3. Three
 - 4. Four

Question ID : 264330154326

Option 1 ID : 264330604769

Option 2 ID : 264330604770

Option 3 ID : 264330604768

Option 4 ID : 264330604767

Status : Answered

Chosen Option : 2

Q.15 In a certain code language, 'BLUE' is coded as '1542' and 'ABLE' is coded as '1745'. What is the code for 'A' in the given code language?

- Ans**
- ✓ 1. 7
 - ✗ 2. 1
 - ✗ 3. 4
 - ✗ 4. 5

Question ID : 264330151690
Option 1 ID : 264330594390
Option 2 ID : 264330594387
Option 3 ID : 264330594389
Option 4 ID : 264330594388
Status : Answered
Chosen Option : 1

Q.16 Read the given statement(s) and conclusions carefully. Assuming that the information given in the statements is true, even if it appears to be at variance with commonly known facts, decide which of the given conclusions logically follow(s) from the statement(s).

Statements: All chocolates are sweets. Some sweets are harmful.

Conclusions:

- (I) All Chocolates are harmful.
- (II) Some harmful are chocolates.

- Ans**
- ✓ 1. Neither conclusion (I) nor (II) is follows.
 - ✗ 2. Both conclusions (I) and (II) are follows.
 - ✗ 3. Only conclusion (II) is follows.
 - ✗ 4. Only conclusion (I) is follows.

Question ID : 264330154433
Option 1 ID : 264330605197
Option 2 ID : 264330605198
Option 3 ID : 264330605196
Option 4 ID : 264330605195
Status : Answered
Chosen Option : 1

Q.19 Six people, P, Q, R, S, T and U are sitting in a straight line, facing north. U sits fourth to the right of R. R is not sitting at the extreme end of the line. T is the immediate neighbour of U and S. Q sits third to the left of S.

Who is sitting immediately to the right of R?

- Ans**
- 1. S
 - 2. T
 - 3. Q
 - 4. P

Question ID : **264330155549**
 Option 1 ID : **264330609601**
 Option 2 ID : **264330609602**
 Option 3 ID : **264330609599**
 Option 4 ID : **264330609600**
 Status : **Answered**
 Chosen Option : **4**

Q.20 Select the combination of letters that when sequentially placed in the blanks of the given series, will complete the series.

P _ _ P O _ P _ P _ O P

- Ans**
- 1. POPPO
 - 2. POOOP
 - 3. OOOPP
 - 4. OPPOP

Question ID : **264330151650**
 Option 1 ID : **264330594227**
 Option 2 ID : **264330594229**
 Option 3 ID : **264330594230**
 Option 4 ID : **264330594228**
 Status : **Answered**
 Chosen Option : **4**

Section : **General Awareness**

Q.1 FIFA U-17 Women's World Cup 2022 matches were NOT held in which state?

- Ans**
- 1. Maharashtra
 - 2. Odisha
 - 3. Goa
 - 4. Gujarat

Question ID : **264330158223**
 Option 1 ID : **264330620251**
 Option 2 ID : **264330620254**
 Option 3 ID : **264330620252**
 Option 4 ID : **264330620253**
 Status : **Not Answered**
 Chosen Option : **--**

Q.2 Who among the following is one of the co-authors of the book, 'Cracking The Code:My Journey in Bollywood'?

- Ans
- 1. Harshvardhan Kapoor
 - 2. Nawazuddin Siddique
 - 3. Ayushmann Khurrana
 - 4. Rajkumar Rao

Question ID : 264330161906
Option 1 ID : 264330634954
Option 2 ID : 264330634951
Option 3 ID : 264330634953
Option 4 ID : 264330634952
Status : Not Answered
Chosen Option : --

Q.3 In 1873, who published the first photograph of nerve tissue stained with the black reaction technique, describing a whole nerve cell?

- Ans
- 1. Gunter Blobel
 - 2. Camillo Golgi
 - 3. William Harvey
 - 4. Paul Ehrlich

Question ID : 264330161088
Option 1 ID : 264330631686
Option 2 ID : 264330631685
Option 3 ID : 264330631683
Option 4 ID : 264330631684
Status : Not Answered
Chosen Option : --

Q.4 In October 2022, Virat Kohli became the first Indian to complete how many runs in T20 cricket history?

- Ans
- 1. 11000
 - 2. 9000
 - 3. 5000
 - 4. 15000

Question ID : 264330158362
Option 1 ID : 264330620809
Option 2 ID : 264330620808
Option 3 ID : 264330620807
Option 4 ID : 264330620810
Status : Not Answered
Chosen Option : --

Q.5 According to Sikh literature, the birth anniversary of Guru Nanak Dev is celebrated on the full moon day of the Indian lunar month _____.

- Ans
- 1. Magh
 - 2. Paush
 - 3. Ashada
 - 4. Kartik

Question ID : 264330160833
Option 1 ID : 264330630666
Option 2 ID : 264330630664
Option 3 ID : 264330630663
Option 4 ID : 264330630665
Status : Not Answered
Chosen Option : --

Q.6 Yakshagana is a folk dance that belongs to the state of _____.

- Ans
- 1. Kerala
 - 2. Karnataka
 - 3. Haryana
 - 4. Rajasthan

Question ID : 264330159057
Option 1 ID : 264330623587
Option 2 ID : 264330623588
Option 3 ID : 264330623589
Option 4 ID : 264330623590
Status : Answered
Chosen Option : 2

Q.7 The brick temple of Bhitargaon is situated in which state?

- Ans
- 1. Odisha
 - 2. Jharkhand
 - 3. Uttar Pradesh
 - 4. Madhya Pradesh

Question ID : 264330160781
Option 1 ID : 264330630456
Option 2 ID : 264330630455
Option 3 ID : 264330630458
Option 4 ID : 264330630457
Status : Not Answered
Chosen Option : --

Q.8 Which of the following movements was founded in Bengal?

- Ans
- 1. Ramakrishna Mission
 - 2. Arya Samaj
 - 3. Satyashodhak Samaj
 - 4. Prarthana Samaj

Question ID : 264330160891
Option 1 ID : 264330630896
Option 2 ID : 264330630895
Option 3 ID : 264330630898
Option 4 ID : 264330630897
Status : Answered
Chosen Option : 1

Q.9 On 15 August 1947, the first prime minister of India, Jawaharlal Nehru, raised the Indian National Flag above the _____ of Red Fort in Delhi.

- Ans
- 1. Delhi Gate
 - 2. Kashmiri Gate
 - 3. Ajmeri Gate
 - 4. Lahori Gate

Question ID : 264330161347
Option 1 ID : 264330632717
Option 2 ID : 264330632715
Option 3 ID : 264330632718
Option 4 ID : 264330632716
Status : Answered
Chosen Option : 1

Q.10 'Mandarin' is the official language of which neighbouring country of India?

- Ans
- 1. Afghanistan
 - 2. Bhutan
 - 3. Sri Lanka
 - 4. China

Question ID : 264330161563
Option 1 ID : 264330633579
Option 2 ID : 264330633581
Option 3 ID : 264330633580
Option 4 ID : 264330633582
Status : Answered
Chosen Option : 4

Q.11 Which of the following is used to measure the total output of goods and services in an economy including depreciation during a specific period within country?

- Ans
- 1. Net Domestic Product (NDP)
 - 2. Gross National Product (GNP)
 - 3. Net National Product (NNP)
 - 4. Gross Domestic Product (GDP)

Question ID : 264330157311
Option 1 ID : 264330616610
Option 2 ID : 264330616608
Option 3 ID : 264330616609
Option 4 ID : 264330616607
Status : Answered
Chosen Option : 1

Q.12 Which of the following is NOT related to the sport of swimming?

- Ans
- 1. Breaststroke
 - 2. Back stroke
 - 3. Freestyle
 - 4. Penalty Corner

Question ID : 264330158244
Option 1 ID : 264330620337
Option 2 ID : 264330620336
Option 3 ID : 264330620335
Option 4 ID : 264330620338
Status : Answered
Chosen Option : 4

Q.13 The East-West corridor, which is a part of the Golden Quadrilateral super highways, links which two cities of India from the following?

- Ans
- 1. Ahmadnagar and Imphal
 - 2. Silchar and Porbander
 - 3. Jaipur and Gangtok
 - 4. Gandhi Nagar and Silchar

Question ID : 264330161490
Option 1 ID : 264330633290
Option 2 ID : 264330633289
Option 3 ID : 264330633288
Option 4 ID : 264330633287
Status : Answered
Chosen Option : 2

Q.14 What is the name of the seventh most abundant metal in the earth's crust, which is derived from the medieval Latin word 'Kalium'?

- Ans
- 1. Aluminium
 - 2. Magnesium
 - 3. Calcium
 - 4. Potassium

Question ID : 264330161060
Option 1 ID : 264330631574
Option 2 ID : 264330631571
Option 3 ID : 264330631573
Option 4 ID : 264330631572
Status : Answered
Chosen Option : 4

Q.15 What is the aim of Article 44 of the Indian Constitution?

- Ans
- 1. To protect every monument or place of artistic or historic interest
 - 2. To separate judiciary from the executive in the public services of the State
 - 3. To protect and improve the environment and safeguard the forests and wildlife of the country
 - 4. To secure for the citizen, a uniform civil code through the territory of India

Question ID : 264330162253
Option 1 ID : 264330636341
Option 2 ID : 264330636342
Option 3 ID : 264330636340
Option 4 ID : 264330636339
Status : Answered
Chosen Option : 4

Q.16 Which of the following novels of Kamleshwar was awarded the Sahitya Akademi Award in 2003?

- Ans
- 1. Jalti Hui Nadi
 - 2. Kaali Aandhi
 - 3. Kitne Pakistan
 - 4. Ek Sadak Sattavan Galiyan

Question ID : 264330161762
Option 1 ID : 264330634377
Option 2 ID : 264330634378
Option 3 ID : 264330634376
Option 4 ID : 264330634375
Status : Not Answered
Chosen Option : --

Q.17 Which of the following institutes was founded by MG Ranade and GV Joshi?

- Ans
- 1. Abhinav Bharat
 - 2. The Indian National Congress
 - 3. The Bombay Presidency Association
 - 4. Poona Sarvajanic Sabha

Question ID : 264330160883
Option 1 ID : 264330630866
Option 2 ID : 264330630865
Option 3 ID : 264330630863
Option 4 ID : 264330630864
Status : Answered
Chosen Option : 1

Q.18 Roshan Kumari, Shovana Narayan, Maya Rao and Kumudini Lakhia are eminent _____ artists.

- Ans
- 1. Odissi
 - 2. Kuchipudi
 - 3. Kathak
 - 4. Manipuri

Question ID : 264330160812
Option 1 ID : 264330630580
Option 2 ID : 264330630581
Option 3 ID : 264330630579
Option 4 ID : 264330630582
Status : Answered
Chosen Option : 3

Q.19 Rani Machaiah is a _____ folk dancer who was awarded Padma Shri in 2023.

- Ans
- 1. Ummathat
 - 2. Lambadi
 - 3. Gussadi
 - 4. Dhimsa

Question ID : 264330155487
Option 1 ID : 264330609352
Option 2 ID : 264330609354
Option 3 ID : 264330609351
Option 4 ID : 264330609353
Status : Not Answered
Chosen Option : --

Q.20 What is the difference between a debit card and a credit card?

- Ans 1. Debit cards are used for online transactions, while credit cards are used for in-person purchases.
2. Credit cards require a PIN, while debit cards require a signature.
3. Debit cards withdraw money directly from a bank account, while credit cards allow borrowing up to a certain limit.
4. Debit cards have higher interest rates than credit cards.

Question ID : 264330157309
Option 1 ID : 264330616599
Option 2 ID : 264330616602
Option 3 ID : 264330616600
Option 4 ID : 264330616601
Status : Answered
Chosen Option : 3

Q.21 The Constitution (Scheduled Tribes) Order (Second Amendment) Bill, 2022 has included Narikoravan and Kurivikkaran communities in the list of Scheduled Tribes of which state?

- Ans 1. Bihar
2. Tamil Nadu
3. Chhattisgarh
4. Odisha

Question ID : 264330158333
Option 1 ID : 264330620691
Option 2 ID : 264330620694
Option 3 ID : 264330620693
Option 4 ID : 264330620692
Status : Answered
Chosen Option : 2

Q.22 Which group of musicians were awarded by 'Bharat Ratna' from the following? (As of May 2023.)

- Ans 1. Anu Malik and Udit Narayan
2. Pandit Ravi Shankar and Pandit Bhimsen Joshi
3. Asha Bhosle and Kishore Kumar
4. AR Rahman and Hariprasad Chaurasia

Question ID : 264330155511
Option 1 ID : 264330609449
Option 2 ID : 264330609447
Option 3 ID : 264330609450
Option 4 ID : 264330609448
Status : Answered
Chosen Option : 2

Q.23 Which river is also known as Tsangpo?

- Ans
- 1. Ganga river
 - 2. Gandak river
 - 3. Kaveri river
 - 4. Brahmaputra river

Question ID : 264330160151
Option 1 ID : 264330627943
Option 2 ID : 264330627946
Option 3 ID : 264330627945
Option 4 ID : 264330627944
Status : Answered
Chosen Option : 4

Q.24 What is the destination of the water drained off by the Nile river?

- Ans
- 1. Lake Victoria
 - 2. Indian Ocean
 - 3. Mediterranean Sea
 - 4. Lake Tanganyika

Question ID : 264330161329
Option 1 ID : 264330632646
Option 2 ID : 264330632643
Option 3 ID : 264330632644
Option 4 ID : 264330632645
Status : Answered
Chosen Option : 3

Q.25 Article 149 of the Constitution deals with _____.

- Ans
- 1. the qualifications required for the appointment of the Comptroller and Auditor-General of India
 - 2. the duties and powers of the Comptroller and Auditor-General of India
 - 3. the term of office of the Comptroller and Auditor-General of India
 - 4. the appointment of the Comptroller and Auditor-General of India

Question ID : 264330161287
Option 1 ID : 264330632477
Option 2 ID : 264330632475
Option 3 ID : 264330632478
Option 4 ID : 264330632476
Status : Answered
Chosen Option : 4

Section : English Language and Comprehension

Q.1 Select the most appropriate ANTONYM of the given word.
Feud

- Ans
- 1. Gross
 - 2. Peril
 - 3. Harmony
 - 4. Vigour

Question ID : 264330152677
Option 1 ID : 264330598312
Option 2 ID : 264330598314
Option 3 ID : 264330598313
Option 4 ID : 264330598311
Status : Answered
Chosen Option : 4

Q.2 Parts of the following sentence have been given as options. Select the option that contains an error.

All these things happen/ because she do not / pay heed to my words.

- Ans
- 1. pay heed to my words
 - 2. All these things happen
 - 3. No error
 - 4. because she do not

Question ID : 264330155379
Option 1 ID : 264330608933
Option 2 ID : 264330608931
Option 3 ID : 264330608934
Option 4 ID : 264330608932
Status : Not Answered
Chosen Option : --

Q.3 Select the most appropriate option that can substitute the underlined segment in the given sentence.

Professor said that I will be late for the lecture.

- Ans
- 1. he shall be late for the lecture
 - 2. he is late for the lecture
 - 3. he would be late for the lecture
 - 4. he may be late for the lecture

Question ID : 264330152712
Option 1 ID : 264330598448
Option 2 ID : 264330598449
Option 3 ID : 264330598447
Option 4 ID : 264330598450
Status : Answered
Chosen Option : 3

Q.4 Select the INCORRECTLY spelt word.

- Ans
- 1. Separate
 - 2. Accommodate
 - 3. Definitely
 - 4. Embarass

Question ID : 264330152644
Option 1 ID : 264330598182
Option 2 ID : 264330598179
Option 3 ID : 264330598180
Option 4 ID : 264330598181
Status : Answered
Chosen Option : 1

Q.5 Select the most appropriate meaning of the given idiom.
Sell like hot cakes

- Ans
- 1. Quick sell out
 - 2. Selling cakes
 - 3. Being ignored
 - 4. Eating hot cake

Question ID : 264330152725
Option 1 ID : 264330598500
Option 2 ID : 264330598501
Option 3 ID : 264330598499
Option 4 ID : 264330598502
Status : Answered
Chosen Option : 1

Q.6 Select the most appropriate option that can substitute the underlined segment in the given sentence.

Andrew will playing basketball at the college tournament.

- Ans
- 1. are play the
 - 2. are play
 - 3. is playing
 - 4. is played

Question ID : 264330153473
Option 1 ID : 264330601408
Option 2 ID : 264330601407
Option 3 ID : 264330601409
Option 4 ID : 264330601410
Status : Answered
Chosen Option : 3

Q.7 Select the most appropriate word to fill in the blank.
Hardik Pandya hit four _____ fours and scored 72 runs in the match.

- Ans 1. continuous
 2. consecutive
 3. ongoing
 4. constant

Question ID : 264330153507
Option 1 ID : 264330601540
Option 2 ID : 264330601539
Option 3 ID : 264330601542
Option 4 ID : 264330601541
Status : Answered
Chosen Option : 2

Q.8 Select the sentence that has NO spelling errors.

- Ans 1. The doctor presribed some medicine to alleviate my parsistent cough, which has been boathering me for days.
 2. The doctor prescribted some medicine to aleviate my persistent cough, which has been bothering me for days.
 3. The doctor prescribed some medicine to aleviate my parsistent cough, which has been boathering me for days.
 4. The doctor prescribed some medicine to alleviate my persistent cough, which has been bothering me for days.

Question ID : 264330152649
Option 1 ID : 264330598201
Option 2 ID : 264330598200
Option 3 ID : 264330598202
Option 4 ID : 264330598199
Status : Answered
Chosen Option : 4

Q.9 Select the most appropriate synonym of the bracketed word in the following sentence to fill in the blank.
The athlete's perseverance and mental toughness _____ (facilitate) her to overcome adversity and achieve her goals.

- Ans 1. restricted
 2. enabled
 3. limited
 4. hindered

Question ID : 264330152653
Option 1 ID : 264330598216
Option 2 ID : 264330598218
Option 3 ID : 264330598215
Option 4 ID : 264330598217
Status : Answered
Chosen Option : 2

Q.10 The following sentence has been split into four segments. Identify the segment that contains a grammatical error.
Throughout my career as a journalist, / I covered many important stories and / interviewed numerous individuals, which allow me / to share important information and insights with my readers.

- Ans**
- 1. to share important information and insights with my readers
 - 2. I covered many important stories and
 - 3. Throughout my career as a journalist,
 - 4. interviewed numerous individuals, which allow me

Question ID : 264330144182
 Option 1 ID : 264330564994
 Option 2 ID : 264330564992
 Option 3 ID : 264330564991
 Option 4 ID : 264330564993
 Status : Answered
 Chosen Option : 4

Q.11 The following sentence has been split into four segments. Identify the segment that contains a grammatical error.
Harish says / that his sister / loves to play / harmonium.

- Ans**
- 1. harmonium
 - 2. loves to play
 - 3. Harish says
 - 4. that his sister

Question ID : 264330153165
 Option 1 ID : 264330600222
 Option 2 ID : 264330600221
 Option 3 ID : 264330600219
 Option 4 ID : 264330600220
 Status : Answered
 Chosen Option : 1

Q.12 Select the most appropriate option that can substitute the underlined segment in the following sentence.
Selling, purchasing, and using an illegally copied product is a criminal offence.

- Ans**
- 1. an obsolete
 - 2. a pirated
 - 3. an outlawed
 - 4. a crooked

Question ID : 264330152633
 Option 1 ID : 264330598135
 Option 2 ID : 264330598136
 Option 3 ID : 264330598137
 Option 4 ID : 264330598138
 Status : Answered
 Chosen Option : 2

Q.13 Select the most appropriate option to fill in the blank.
The hiring manager has already offered you the job; now, _____ to accept or decline the offer.

- Ans**
- 1. a penny for your thoughts
 - 2. the ball is in your court
 - 3. pull your leg
 - 4. get your act together

Question ID : 264330151891
Option 1 ID : 264330595184
Option 2 ID : 264330595183
Option 3 ID : 264330595185
Option 4 ID : 264330595186
Status : Answered
Chosen Option : 2

Q.14 Select the most appropriate option to fill in the blank.
Oberon doesn't like the way Demetrius _____ to Helena. (Credit: A Midsummer Night's Dream)

- Ans**
- 1. talked
 - 2. talks
 - 3. talking
 - 4. to talk

Question ID : 264330153511
Option 1 ID : 264330601555
Option 2 ID : 264330601556
Option 3 ID : 264330601557
Option 4 ID : 264330601558
Status : Answered
Chosen Option : 2

Q.15 Select the most appropriate meaning of the given idiom.
Let sleeping dogs lie

- Ans**
- 1. To let somebody sleep
 - 2. To fall sick intentionally
 - 3. Leave an existing situation as it is
 - 4. To care for the pet

Question ID : 264330156172
Option 1 ID : 264330612088
Option 2 ID : 264330612089
Option 3 ID : 264330612090
Option 4 ID : 264330612087
Status : Answered
Chosen Option : 3

Q.16 Select the option that can be used as a one-word substitute for the given group of words.

A cage made for birds.

OR

A place for keeping the birds in a confined space.

- Ans
- 1. Aquarium
 - 2. Apiary
 - 3. Aviary
 - 4. Arena

Question ID : 264330153553

Option 1 ID : 264330601713

Option 2 ID : 264330601711

Option 3 ID : 264330601714

Option 4 ID : 264330601712

Status : Answered

Chosen Option : 3

Q.17 Select the most appropriate synonym of the given word.
Repulsive

- Ans
- 1. Attractive
 - 2. Reliable
 - 3. Disgusting
 - 4. Uniform

Question ID : 264330151922

Option 1 ID : 264330595303

Option 2 ID : 264330595305

Option 3 ID : 264330595304

Option 4 ID : 264330595306

Status : Answered

Chosen Option : 3

Q.18 Select the option that rectifies the spelling of the underlined word in the given sentence.

The sergent brought in a lot of changes as soon as he was given charge.

- Ans
- 1. seargeant
 - 2. sergeannt
 - 3. sergant
 - 4. sergeant

Question ID : 264330153156

Option 1 ID : 264330600185

Option 2 ID : 264330600184

Option 3 ID : 264330600183

Option 4 ID : 264330600186

Status : Answered

Chosen Option : 3

Q.19 The given sentence contains an error. Select the option that correctly rectifies the error.

The boy told his mother that he saw the most tall giraffe at the zoo.

- Ans
- 1. The boy told his mother that he saw the tallest giraffe at the zoo.
 - 2. The boy told his mother that he saw the most taller giraffe at the zoo.
 - 3. The boy told his mother that he saw the most tallest giraffe at the zoo.
 - 4. The boy told his mother that he saw the more taller giraffe at the zoo.

Question ID : 264330152606

Option 1 ID : 264330598030

Option 2 ID : 264330598028

Option 3 ID : 264330598029

Option 4 ID : 264330598027

Status : Answered

Chosen Option : 1

Q.20 Select the most appropriate meaning of the given idiom.

Call the shots

- Ans
- 1. To be a follower that makes less important decision
 - 2. To be in a position to make decisions that influences a situation
 - 3. To be in a powerless position that follows orders
 - 4. To be in a neutral position

Question ID : 264330153073

Option 1 ID : 264330599857

Option 2 ID : 264330599856

Option 3 ID : 264330599858

Option 4 ID : 264330599855

Status : Answered

Chosen Option : 2

Comprehension:

In the following passage, some words have been deleted. Fill in the blanks with the help of the alternatives given. Select the most appropriate option for each blank.

That evening we sat in the courtyard of the hotel once more, (1) _____ the sun sink below the western isles. I told Alexi what had happened that day. I (2) _____ I could glimpse the grey stone wall of Lismore House (3) _____ its island hilltop, the red light of the setting sun glinting from the windows, and from there the wasted frame of Jonathan Blake gazing out across the sea, on nothing, his boy waiting for him to die. But it was my (4) _____, simply the image on my mind, like the image burned on to your eyes when you have (5) _____ too long at the sun, the passing footprint of a creature long gone.

SubQuestion No : 21

Q.21 Select the most appropriate option to fill in blank no. 1.

- Ans
- 1. watching
 - 2. wallowing
 - 3. risking
 - 4. practising

Question ID : 264330153445

Option 1 ID : 264330601299

Option 2 ID : 264330601302

Option 3 ID : 264330601301

Option 4 ID : 264330601300

Status : Answered

Chosen Option : 1

Comprehension:

In the following passage, some words have been deleted. Fill in the blanks with the help of the alternatives given. Select the most appropriate option for each blank.

That evening we sat in the courtyard of the hotel once more, (1) _____ the sun sink below the western isles. I told Alexi what had happened that day. I (2) _____ I could glimpse the grey stone wall of Lismore House (3) _____ its island hilltop, the red light of the setting sun glinting from the windows, and from there the wasted frame of Jonathan Blake gazing out across the sea, on nothing, his boy waiting for him to die. But it was my (4) _____, simply the image on my mind, like the image burned on to your eyes when you have (5) _____ too long at the sun, the passing footprint of a creature long gone.

SubQuestion No : 22

Q.22 Select the most appropriate option to fill in blank no. 2.

- Ans 1. fancied
 2. groped
 3. imbibed
 4. translated

Question ID : 264330153446

Option 1 ID : 264330601305

Option 2 ID : 264330601306

Option 3 ID : 264330601303

Option 4 ID : 264330601304

Status : Answered

Chosen Option : 1

Comprehension:

In the following passage, some words have been deleted. Fill in the blanks with the help of the alternatives given. Select the most appropriate option for each blank.

That evening we sat in the courtyard of the hotel once more, (1) _____ the sun sink below the western isles. I told Alexi what had happened that day. I (2) _____ I could glimpse the grey stone wall of Lismore House (3) _____ its island hilltop, the red light of the setting sun glinting from the windows, and from there the wasted frame of Jonathan Blake gazing out across the sea, on nothing, his boy waiting for him to die. But it was my (4) _____, simply the image on my mind, like the image burned on to your eyes when you have (5) _____ too long at the sun, the passing footprint of a creature long gone.

SubQuestion No : 23

Q.23 Select the most appropriate option to fill in blank no. 3.

- Ans 1. off
 2. on
 3. aside
 4. for

Question ID : 264330153447

Option 1 ID : 264330601307

Option 2 ID : 264330601308

Option 3 ID : 264330601309

Option 4 ID : 264330601310

Status : Answered

Chosen Option : 2

Comprehension:

In the following passage, some words have been deleted. Fill in the blanks with the help of the alternatives given. Select the most appropriate option for each blank.

That evening we sat in the courtyard of the hotel once more, (1) _____ the sun sink below the western isles. I told Alexi what had happened that day. I (2) _____ I could glimpse the grey stone wall of Lismore House (3) _____ its island hilltop, the red light of the setting sun glinting from the windows, and from there the wasted frame of Jonathan Blake gazing out across the sea, on nothing, his boy waiting for him to die. But it was my (4) _____, simply the image on my mind, like the image burned on to your eyes when you have (5) _____ too long at the sun, the passing footprint of a creature long gone.

SubQuestion No : 24

Q.24 Select the most appropriate option to fill in blank no. 4.

- Ans
- 1. dribble
 - 2. straw
 - 3. fantasy
 - 4. habitat

Question ID : 264330153448

Option 1 ID : 264330601312

Option 2 ID : 264330601311

Option 3 ID : 264330601313

Option 4 ID : 264330601314

Status : Answered

Chosen Option : 3

Comprehension:

In the following passage, some words have been deleted. Fill in the blanks with the help of the alternatives given. Select the most appropriate option for each blank.

That evening we sat in the courtyard of the hotel once more, (1) _____ the sun sink below the western isles. I told Alexi what had happened that day. I (2) _____ I could glimpse the grey stone wall of Lismore House (3) _____ its island hilltop, the red light of the setting sun glinting from the windows, and from there the wasted frame of Jonathan Blake gazing out across the sea, on nothing, his boy waiting for him to die. But it was my (4) _____, simply the image on my mind, like the image burned on to your eyes when you have (5) _____ too long at the sun, the passing footprint of a creature long gone.

SubQuestion No : 25

Q.25 Select the most appropriate option to fill in blank no. 5.

- Ans
- 1. resumed
 - 2. rusted
 - 3. blocked
 - 4. stared

Question ID : 264330153449

Option 1 ID : 264330601317

Option 2 ID : 264330601315

Option 3 ID : 264330601316

Option 4 ID : 264330601318

Status : Answered

Chosen Option : 4

Multi Tasking Non Technical Staff and Havaladar CBIC and CBN Examination 2023

Roll Number	
Candidate Name	
Venue Name	iON Digital Zone iDZ 2 Patliputra
Exam Date	01/09/2023
Exam Time	12:30 PM - 2:30 PM
Subject	MTS Non Tech Havaladar CBIC and CBN Examination 2023

Section : Numerical and Mathematical Ability

Q.1 The area of a trapezium shaped field is 1720 m^2 , the distance between its parallel sides is 40 m and the length of one of the parallel sides is 48 m. What is the length (in m) of the other parallel side?

- Ans**
- 1. 56
 - 2. 38
 - 3. 42
 - 4. 34

Question ID : 264330153788

Option 1 ID : 264330602615

Option 2 ID : 264330602616

Option 3 ID : 264330602617

Option 4 ID : 264330602618

Status : Answered

Chosen Option : 2

Q.2 Ram can do a piece of work in 18 hours. Shyam and Naresh can do it in 9 hours. Ram and Naresh can do it in 12 hours. How long will Shyam alone take to do it?

- Ans**
- 1. 15 hours
 - 2. 9 hours
 - 3. 12 hours
 - 4. 11 hours

Question ID : 264330156566

Option 1 ID : 264330613654

Option 2 ID : 264330613651

Option 3 ID : 264330613653

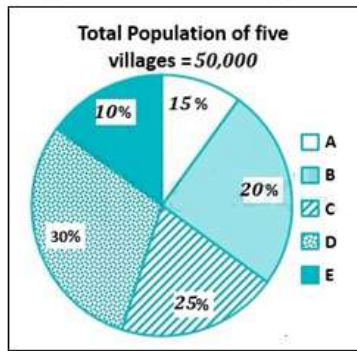
Option 4 ID : 264330613652

Status : Answered

Chosen Option : 3

Q.3 Study the given pie-chart and answer the question that follows.

The pie-chart shows the percentage of the population in five villages in a year.



Find the ratio of population in villages B and D.

- Ans
- 1. 1 : 3
 - 2. 3 : 1
 - 3. 2 : 3
 - 4. 3 : 2

Question ID : 264330156243
Option 1 ID : 264330612371
Option 2 ID : 264330612373
Option 3 ID : 264330612372
Option 4 ID : 264330612374
Status : Answered
Chosen Option : 3

Q.4 Find the fourth proportional to $(a + b)^2 \times (a^3 - b^3)$, $(a^3 + b^3)$, $(a^2 - b^2)$.

- Ans
- 1. $\frac{(a^2 - ab + b^2)}{(a + b)}$
 - 2. $\frac{(a^2 + ab + b^2)}{(a - b)}$
 - 3. $\frac{(a^2 - ab + b^2)}{(a^2 + ab + b^2)}$
 - 4. $\frac{(a^2 + ab + b^2)}{(a^2 - b^2)}$

Question ID : 264330153846
Option 1 ID : 264330602849
Option 2 ID : 264330602848
Option 3 ID : 264330602850
Option 4 ID : 264330602847
Status : Not Attempted and Marked For Review
Chosen Option : --

Q.5 If $(x - 2)$ is a factor of $(2x^2 + 12kx - 25k)$, then what is the value of k ?

- Ans
- 1. 2
 - 2. 8
 - 3. 4
 - 4. 6

Question ID : 264330156203

Option 1 ID : 264330612211

Option 2 ID : 264330612214

Option 3 ID : 264330612212

Option 4 ID : 264330612213

Status : Not Attempted and Marked For Review

Chosen Option : --

Q.6 A 360 m long train running at the speed of 108 km/h crosses another train running in the opposite direction at the speed of 90 km/h in 12 seconds. What is the length (in m) of the other train?

- Ans
- 1. 330
 - 2. 270
 - 3. 300
 - 4. 345

Question ID : 264330156491

Option 1 ID : 264330613351

Option 2 ID : 264330613352

Option 3 ID : 264330613354

Option 4 ID : 264330613353

Status : Answered

Chosen Option : 3

Q.7 A cuboid with dimension $2 \times 4 \times 1$ units is melted and a new cube is made. What is the total surface area of the cube formed in square units?

- Ans
- 1. 32
 - 2. 28
 - 3. 24
 - 4. 16

Question ID : 264330153827

Option 1 ID : 264330602772

Option 2 ID : 264330602771

Option 3 ID : 264330602773

Option 4 ID : 264330602774

Status : Answered

Chosen Option : 3

Q.8 Samridhi sold a gold ring at a loss of 26%. If the cost price of the gold ring is ₹38,500, what is the selling price of the gold ring?

- Ans**
- ✓ 1. ₹28,490
 - ✗ 2. ₹30,500
 - ✗ 3. ₹29,590
 - ✗ 4. ₹38,600

Question ID : 264330156181
Option 1 ID : 264330612125
Option 2 ID : 264330612123
Option 3 ID : 264330612126
Option 4 ID : 264330612124
Status : Answered
Chosen Option : 1

Q.9 Student gets 62, 58, 72, 58 and 83 marks in Sanskrit, English, Mathematics, Social and Computer Science, respectively. His average marks in Mathematics, Social and Computer Science are _____ more than the average marks in Sanskrit, English and Mathematics.

- Ans**
- ✗ 1. 9
 - ✗ 2. 8
 - ✗ 3. 6
 - ✓ 4. 7

Question ID : 264330156251
Option 1 ID : 264330612406
Option 2 ID : 264330612405
Option 3 ID : 264330612403
Option 4 ID : 264330612404
Status : Answered
Chosen Option : 4

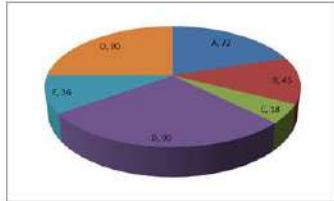
Q.10 P and Q are inversely proportional to each other and P is 10, when Q is 6. What will be the value of Q when P is 15?

- Ans**
- ✗ 1. 9
 - ✓ 2. 4
 - ✗ 3. 10
 - ✗ 4. 5

Question ID : 264330154125
Option 1 ID : 264330603963
Option 2 ID : 264330603964
Option 3 ID : 264330603966
Option 4 ID : 264330603965
Status : Marked For Review
Chosen Option : 2

Q.11 The pie diagram represents the export of different types of fabrics (in degree measure) from India during 2015.

If the income from one ton of fabric A is three times that from the fabric C, then the ratio between the income from A to C is:



- Ans**
- 1. 1 : 3
 - 2. 3 : 1
 - 3. 12 : 1
 - 4. 6 : 1

Question ID : 264330154066
Option 1 ID : 264330603730
Option 2 ID : 264330603727
Option 3 ID : 264330603728
Option 4 ID : 264330603729
Status : Answered
Chosen Option : 3

Q.12 The average marks of 13 students in a subject is 66. If the average of the first seven students is 67 and that of the last seven students is 69, then the marks of the seventh student is:

- Ans**
- 1. 99
 - 2. 91
 - 3. 97
 - 4. 94

Question ID : 264330154076
Option 1 ID : 264330603770
Option 2 ID : 264330603767
Option 3 ID : 264330603769
Option 4 ID : 264330603768
Status : Answered
Chosen Option : 4

Q.13 Shobha purchased a small plot in a residential area for ₹6,00,000 and sold it to Lakshita at a profit of 20%. Lakshita, in turn, sold it to Dinesh at a loss of 10%. How much did Dinesh pay for the plot?

- Ans**
- 1. ₹6,40,000
 - 2. ₹6,48,000
 - 3. ₹6,08,000
 - 4. ₹6,00,000

Question ID : 264330154122
Option 1 ID : 264330603952
Option 2 ID : 264330603951
Option 3 ID : 264330603953
Option 4 ID : 264330603954
Status : Answered
Chosen Option : 2

Q.14 A sum of money deposited at simple interest amounts to ₹1,020 in three years and ₹980 in two years. The sum deposited is:

- Ans
- 1. ₹900
 - 2. ₹880
 - 3. ₹920
 - 4. ₹840

Question ID : 264330158840
Option 1 ID : 264330622721
Option 2 ID : 264330622720
Option 3 ID : 264330622722
Option 4 ID : 264330622719
Status : Answered
Chosen Option : 1

Q.15 A sum of money becomes ₹6,400 in 3 years and ₹8,100 in 5 years on compound interest compounded annually. Find the rate of interest per annum.

- Ans
- 1. $12\frac{3}{8}\%$
 - 2. $12\frac{4}{8}\%$
 - 3. $12\frac{6}{8}\%$
 - 4. $12\frac{5}{8}\%$

Question ID : 264330156228
Option 1 ID : 264330612311
Option 2 ID : 264330612312
Option 3 ID : 264330612314
Option 4 ID : 264330612313
Status : Not Answered
Chosen Option : --

Q.16 There is a 25 litre mixture of milk and water, containing milk and water in the ratio 3 : 2. Find the number of litres of water that should be added to the mixture so that the resultant mixture has 50% water in it.

- Ans
- 1. 10
 - 2. 8
 - 3. 5
 - 4. 12

Question ID : 264330155990
Option 1 ID : 264330611362
Option 2 ID : 264330611360
Option 3 ID : 264330611361
Option 4 ID : 264330611359
Status : Answered
Chosen Option : 3

Q.17 Simplify the following:
 $(16\frac{2}{5} - 12\frac{1}{15}) \div 3\frac{4}{81} = ?$

- Ans
- 1. $1\frac{9}{13}$
 - 2. $1\frac{9}{19}$
 - 3. $1\frac{8}{19}$
 - 4. $2\frac{8}{13}$

Question ID : 264330156334
 Option 1 ID : 264330612738
 Option 2 ID : 264330612735
 Option 3 ID : 264330612737
 Option 4 ID : 264330612736
 Status : Answered
 Chosen Option : 3

Q.18 The price of a fan is first decreased by 28% and then increased by 35%. If the resulting price is ₹1,215, find the original price of the fan.

- Ans
- 1. ₹1,250
 - 2. ₹1,520
 - 3. ₹2,150
 - 4. ₹1,052

Question ID : 264330156555
 Option 1 ID : 264330613608
 Option 2 ID : 264330613609
 Option 3 ID : 264330613610
 Option 4 ID : 264330613607
 Status : Answered
 Chosen Option : 3

Q.19 A can do a piece of work in 36 days, while B can do it in 48 days. B worked on it for 12 days and leaves it. How many days will A take to finish the remaining work?

- Ans
- 1. 21
 - 2. 27
 - 3. 28
 - 4. 32

Question ID : 264330154095
 Option 1 ID : 264330603845
 Option 2 ID : 264330603846
 Option 3 ID : 264330603844
 Option 4 ID : 264330603843
 Status : Answered
 Chosen Option : 2

Q.20 A policeman chases a thief who is 630 metres ahead of him. If they run at a speed of 9.5 km per hour and 6.5 km per hour, respectively, then what distance (in km, rounded off to 1 decimal place) does the thief run before he is nabbed by the policeman?

- Ans**
- 1. 1.8
 - 2. 2.0
 - 3. 1.4
 - 4. 1.2

Question ID : **264330156309**
Option 1 ID : **264330612636**
Option 2 ID : **264330612635**
Option 3 ID : **264330612638**
Option 4 ID : **264330612637**
Status : **Answered**
Chosen Option : **3**


Section : Reasoning Ability and Problem Solving

Q.1 FKQN is related to LQWT in a certain way based on the English alphabetical order. In the same way, CHOJ is related to INUP. To which of the following is DOSG related to, following the same logic?

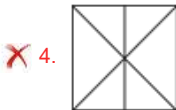
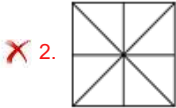
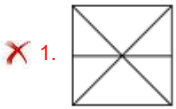
- Ans**
- 1. JSWM
 - 2. JUYM
 - 3. IUVL
 - 4. HQWK

Question ID : **264330151658**
Option 1 ID : **264330594262**
Option 2 ID : **264330594259**
Option 3 ID : **264330594261**
Option 4 ID : **264330594260**
Status : **Answered**
Chosen Option : **2**

Q.2 Identify the figure that completes the pattern (rotation is NOT allowed).



Ans



Question ID : 264330154512

Option 1 ID : 264330605511

Option 2 ID : 264330605512

Option 3 ID : 264330605514

Option 4 ID : 264330605513

Status : Answered

Chosen Option : 3

Q.3 What should come in place of '?' in the given series?

5 11 29 ? 245 731 2189

Ans ✗ 1. 97

✓ 2. 83

✗ 3. 85

✗ 4. 79

Question ID : 264330151491

Option 1 ID : 264330593594

Option 2 ID : 264330593592

Option 3 ID : 264330593593

Option 4 ID : 264330593591

Status : Not Attempted and
Marked For Review

Chosen Option : --

Q.4 What should come in place of '?' in the given series?

25 39 67 123 235 ?

- Ans
- 1. 434
 - 2. 459
 - 3. 378
 - 4. 291

Question ID : 264330151450
 Option 1 ID : 264330593429
 Option 2 ID : 264330593430
 Option 3 ID : 264330593427
 Option 4 ID : 264330593428
 Status : Answered
 Chosen Option : 2

Q.5 What should come in place of '?' in the given series?

7 22 52 112 232 ?

- Ans
- 1. 482
 - 2. 484
 - 3. 462
 - 4. 472

Question ID : 264330151460
 Option 1 ID : 264330593469
 Option 2 ID : 264330593470
 Option 3 ID : 264330593467
 Option 4 ID : 264330593468
 Status : Answered
 Chosen Option : 4

Q.6 Read the given statements and conclusions carefully. You have to take the given statements to be true even if they seem to be at variance from commonly known facts. You have to decide which conclusion/s logically follow/s from the given statements.

Statements: All TVs are radios. Some radios are dryers. All dryers are hot.

Conclusion I: Some TVs are radios.

Conclusion II: Some dryers are TVs.

- Ans
- 1. Neither conclusion (I) nor (II) is follow.
 - 2. Both conclusions (I) and (II) are follow.
 - 3. Only conclusion (I) is follow.
 - 4. Only conclusion (II) is follow.

Question ID : 264330155913
 Option 1 ID : 264330611057
 Option 2 ID : 264330611058
 Option 3 ID : 264330611055
 Option 4 ID : 264330611056
 Status : Answered
 Chosen Option : 3

Q.7 F, G, H, I, J, K, L and M are sitting around a square table facing the centre. Some of them are sitting at the corners of the table while some are sitting at the exact centre of the sides. G, I, H, and J are not sitting in any of the corners. G is sitting to the immediate left of K and immediate right of L. I is sitting to the immediate right of K. F is sitting to the immediate right of I and immediate left of H. J is sitting to the immediate right of M and immediate left of L. Who is sitting to the immediate left of M?

- Ans**
- 1. I
 - 2. H
 - 3. J
 - 4. G

Question ID : 264330155872
 Option 1 ID : 264330610891
 Option 2 ID : 264330610892
 Option 3 ID : 264330610894
 Option 4 ID : 264330610893
 Status : Answered
 Chosen Option : 2

Q.8 Read the given statements and conclusions carefully. You have to take the given statements to be true even if they seem to be at variance from commonly known facts. You have to decide which conclusion/s logically follow/s from the given statements.

Statements: Some cows are animals. All animals are big. No big is a mobile.

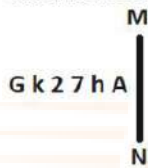
Conclusion I: All cows are animals.

Conclusion II: No big is an animal.

- Ans**
- 1. Only conclusion (I) is follow.
 - 2. Neither conclusion (I) nor (II) is follow.
 - 3. Both conclusions (I) and (II) are follow.
 - 4. Only conclusion (II) is follow.

Question ID : 264330155891
 Option 1 ID : 264330610967
 Option 2 ID : 264330610969
 Option 3 ID : 264330610970
 Option 4 ID : 264330610968
 Status : Answered
 Chosen Option : 2

Q.9 Select the correct mirror image of the given figure when the mirror is placed at MN as shown below.



- Ans**
- 1. A h 7 2 k G
 - 2. V h 7 2 k G
 - 3. A h 2 7 k G
 - 4. A h 7 2 k G

Question ID : 264330151521
 Option 1 ID : 264330593714
 Option 2 ID : 264330593711
 Option 3 ID : 264330593713
 Option 4 ID : 264330593712
 Status : Answered
 Chosen Option : 1

Q.10 In a certain code language, 'ESCORT' is coded as 'GRBNQV' and 'APRON' is coded as 'COQNP'. What is the code for 'CRANKY' in the given code language?

- Ans**
- 1. FPZKNC
 - 2. DQYNKB
 - 3. DPANJB
 - 4. EQZMJA

Question ID : 264330155830
Option 1 ID : 264330610726
Option 2 ID : 264330610723
Option 3 ID : 264330610724
Option 4 ID : 264330610725
Status : Answered
Chosen Option : 4

Q.11 What should come in place of ? in the given series based on the English alphabetical order?

QDS, NET, KFU, HGV, ?

- Ans**
- 1. FGV
 - 2. FHU
 - 3. EHW
 - 4. GHU

Question ID : 264330155795
Option 1 ID : 264330610584
Option 2 ID : 264330610585
Option 3 ID : 264330610583
Option 4 ID : 264330610586
Status : Answered
Chosen Option : 3

Q.12 What will come in place of '?' in the following equation, if '+' and 'x' are interchanged and '-' and '/' are interchanged?

$$14 + 5 + 2 - 1 \times 3 = ?$$

- Ans**
- 1. 23
 - 2. 16
 - 3. 17
 - 4. 71

Question ID : 264330154665
Option 1 ID : 264330606124
Option 2 ID : 264330606125
Option 3 ID : 264330606123
Option 4 ID : 264330606126
Status : Answered
Chosen Option : 4

Q.13 In a certain code language, 'BATH' is coded as '1482' and 'HALT' is coded as '8126'. What is the code for 'L' in the given code language?

- Ans**
- 1. 1
 - 2. 8
 - 3. 2
 - 4. 6

Question ID : 264330151712
Option 1 ID : 264330594477
Option 2 ID : 264330594478
Option 3 ID : 264330594475
Option 4 ID : 264330594476
Status : Answered
Chosen Option : 4

Q.14 If 2nd Oct 2003 is Thursday, then what will be the day of the week on 15th July 2010?

- Ans**
- 1. Monday
 - 2. Friday
 - 3. Thursday
 - 4. Tuesday

Question ID : 264330154334
Option 1 ID : 264330604801
Option 2 ID : 264330604800
Option 3 ID : 264330604802
Option 4 ID : 264330604799
Status : Not Answered
Chosen Option : --

Q.15 Select the combination of letters that when sequentially placed in the blanks of the given series, will complete the series.

HI_H__HI__IH

- Ans**
- 1. HIHHH
 - 2. HIIHI
 - 3. IIIHI
 - 4. IHHH

Question ID : 264330151646
Option 1 ID : 264330594211
Option 2 ID : 264330594213
Option 3 ID : 264330594212
Option 4 ID : 264330594214
Status : Answered
Chosen Option : 1

Q.16 284 is related to 142 following a certain logic. Following the same logic, 612 is related to 306. To which of the following is 522 related to, following the same logic?

- Ans**
- 1. 262
 - 2. 261
 - 3. 263
 - 4. 264

Question ID : **264330151583**
Option 1 ID : **264330593960**
Option 2 ID : **264330593959**
Option 3 ID : **264330593961**
Option 4 ID : **264330593962**
Status : **Answered**
Chosen Option : **2**

Q.17 In the following number-pairs, the second number is obtained by applying certain mathematical operations to the first number. Select the set in which the numbers are related in the same way as are the numbers of the following sets.
(NOTE: Operations should be performed on the whole numbers, without breaking down the numbers into its constituent digits. E.g. 13 – Operations on 13 such as adding / subtracting / multiplying etc. to 13 can be performed. Breaking down 13 into 1 and 3 and then performing mathematical operations on 1 and 3 is not allowed)

5, 24
12, 143

- Ans**
- 1. 27, 345
 - 2. 14, 195
 - 3. 18, 652
 - 4. 21, 126

Question ID : **264330151623**
Option 1 ID : **264330594120**
Option 2 ID : **264330594119**
Option 3 ID : **264330594122**
Option 4 ID : **264330594121**
Status : **Answered**
Chosen Option : **2**

Q.18 If G means '−', C means '×', D means '+', B means '÷' then what will come in place of the question mark (?) in the following equation?

49 G 69 D 3 B 12 C 5 = ?

- Ans**
- 1. 64
 - 2. 13
 - 3. 37
 - 4. 86

Question ID : **264330154686**
Option 1 ID : **264330606209**
Option 2 ID : **264330606207**
Option 3 ID : **264330606208**
Option 4 ID : **264330606210**
Status : **Answered**
Chosen Option : **4**

Q.19 What should come in place of ? in the given series based on the English alphabetical order?

SIY, VHA, YGC, BFE, ?

- Ans
- 1. DEG
 - 2. FEH
 - 3. EEG
 - 4. DFH

Question ID : 264330155800
Option 1 ID : 264330610604
Option 2 ID : 264330610603
Option 3 ID : 264330610606
Option 4 ID : 264330610605
Status : Answered
Chosen Option : 3

Q.20 Which figure should replace the question mark (?) if the following figure series were to be continued?

↑	W	S	T	?
W O R S	T ↑	T W 8 R	7 S	?
S 8 8	R R	↑ ↑	8	

Ans

1.

	R	
7	T	8
S		↑

2.

	7	
T	R	↑
8		S

3.

	R	
7	T	↑
8		S

4.

	7	
T	R	8
S		↑

Question ID : 264330154741
Option 1 ID : 264330606428
Option 2 ID : 264330606427
Option 3 ID : 264330606430
Option 4 ID : 264330606429
Status : Answered
Chosen Option : 1

Q.1 In which of the following states is there hardly any differences in day and night temperatures?

- Ans
- 1. Rajasthan
 - 2. Bihar
 - 3. Kerala
 - 4. Punjab

Question ID : 264330160148
Option 1 ID : 264330627932
Option 2 ID : 264330627934
Option 3 ID : 264330627931
Option 4 ID : 264330627933
Status : Answered
Chosen Option : 3

Q.2 For which dance form did Vasundhara Doraswamy get Sangeet Natak Akademi Award (Akademi Puraskar) for the year 2019?

- Ans
- 1. Mohiniyattam
 - 2. Kathakali
 - 3. Bharatanatyam
 - 4. Kathak

Question ID : 264330155480
Option 1 ID : 264330609326
Option 2 ID : 264330609325
Option 3 ID : 264330609323
Option 4 ID : 264330609324
Status : Answered
Chosen Option : 1

Q.3 The dancers Padma Subrahmanyam, Alarmel Valli, Yamini Krishnamurthy and Anita Ratnam are great exponents of _____.

- Ans
- 1. Mohiniyattam
 - 2. Odissi
 - 3. Bharatanatyam
 - 4. Kathak

Question ID : 264330160807
Option 1 ID : 264330630561
Option 2 ID : 264330630559
Option 3 ID : 264330630562
Option 4 ID : 264330630560
Status : Answered
Chosen Option : 3

Q.4 Which of the following states won the Santosh Trophy in Riyadh in March 2023 after a gap of 54 years?

- Ans 1. Karnataka
 2. Tamil Nadu
 3. Maharashtra
 4. Andhra Pradesh

Question ID : 264330161441
Option 1 ID : 264330633091
Option 2 ID : 264330633092
Option 3 ID : 264330633094
Option 4 ID : 264330633093
Status : Not Answered
Chosen Option : --

Q.5 Which of the following statements is correct about Article 129 of the Constitution of India?

- Ans 1. It provides for the Supreme Court to give advisory opinion to the President.
 2. It provides for the Supreme Court to be a court of original jurisdiction
 3. It provides for the Supreme Court to be a court of record.
 4. It provides for the Supreme Court to be the highest court of appeal.

Question ID : 264330161291
Option 1 ID : 264330632491
Option 2 ID : 264330632493
Option 3 ID : 264330632494
Option 4 ID : 264330632492
Status : Answered
Chosen Option : 3

Q.6 Indian classical vocalist Pandit Jasraj belonged to which of the following musical gharanas?

- Ans 1. Patiala Gharana
 2. Dagari Gharana
 3. Gwalior Gharana
 4. Mewati Gharana

Question ID : 264330161768
Option 1 ID : 264330634402
Option 2 ID : 264330634400
Option 3 ID : 264330634401
Option 4 ID : 264330634399
Status : Answered
Chosen Option : 3

Q.7 Articles 29-30 of the Constitution of India deals with _____

- Ans 1. Cultural and educational rights
 2. Right to freedom
 3. Right to equality
 4. Right to freedom of religion

Question ID : 264330159902
Option 1 ID : 264330626958
Option 2 ID : 264330626956
Option 3 ID : 264330626955
Option 4 ID : 264330626957
Status : Answered
Chosen Option : 1

Q.8 As per the 18th Periodic Labour Force Survey (PLFS), the unemployment rate among females (aged 15 years and above) in urban areas declined to _____ in January-March 2023.

- Ans
- 1. 9.7%
 - 2. 9.2%
 - 3. 7.8%
 - 4. 8.2%

Question ID : 264330166023
Option 1 ID : 264330651170
Option 2 ID : 264330651169
Option 3 ID : 264330651167
Option 4 ID : 264330651168
Status : Not Answered
Chosen Option : --

Q.9 Which of the following is connected with daily atmospheric weather changes?

- Ans
- 1. Asthenosphere
 - 2. Stratopause
 - 3. Troposphere
 - 4. Lithosphere

Question ID : 264330161312
Option 1 ID : 264330632578
Option 2 ID : 264330632575
Option 3 ID : 264330632576
Option 4 ID : 264330632577
Status : Answered
Chosen Option : 3

Q.10 According to the Census of India 2011, which of the following states has the lowest literacy rate?

- Ans
- 1. Kerala
 - 2. Tripura
 - 3. Goa
 - 4. Mizoram

Question ID : 264330160162
Option 1 ID : 264330627990
Option 2 ID : 264330627988
Option 3 ID : 264330627989
Option 4 ID : 264330627987
Status : Answered
Chosen Option : 4

Q.11 In which state is the famous Brihadeshwar temple situated?

- Ans
- 1. Kerala
 - 2. Karnataka
 - 3. Tamil Nadu
 - 4. Andhra Pradesh

Question ID : 264330160784
Option 1 ID : 264330630468
Option 2 ID : 264330630469
Option 3 ID : 264330630467
Option 4 ID : 264330630470
Status : Answered
Chosen Option : 2

Q.12 In which year did Robert Hooke introduce the term 'cell'?

- Ans
- 1. 1875
 - 2. 1675
 - 3. 1665
 - 4. 1765

Question ID : 264330157811
Option 1 ID : 264330618606
Option 2 ID : 264330618604
Option 3 ID : 264330618603
Option 4 ID : 264330618605
Status : Answered
Chosen Option : 1

Q.13 Which of the following is an example of capital receipt in the government budget?

- Ans
- 1. Sale of government bonds
 - 2. Income from government-owned enterprises
 - 3. Tax revenue collected from citizens
 - 4. Grants received from foreign countries

Question ID : 264330157278
Option 1 ID : 264330616477
Option 2 ID : 264330616478
Option 3 ID : 264330616475
Option 4 ID : 264330616476
Status : Answered
Chosen Option : 3

Q.14 Which of the abhinayas deals with the use of costumes, jewellery, facial make-up etc?

- Ans
- 1. Vachika Abhinaya
 - 2. Aharya Abhinaya
 - 3. Sattvika Abhinaya
 - 4. Angika Abhinaya

Question ID : 264330159052
Option 1 ID : 264330623568
Option 2 ID : 264330623567
Option 3 ID : 264330623570
Option 4 ID : 264330623569
Status : Not Answered
Chosen Option : --

Q.15 Pandit Bhajan Sopori, who died in the year 2022, was a famous player of which musical instrument?

- Ans
- 1. Ravan Hatta
 - 2. Tabla
 - 3. Sitar
 - 4. Santoor

Question ID : 264330155510
Option 1 ID : 264330609445
Option 2 ID : 264330609443
Option 3 ID : 264330609446
Option 4 ID : 264330609444
Status : Answered
Chosen Option : 4

Q.16 Which of the following best defines transfer payments?

- Ans
- 1. Payments made to individuals in exchange for their labour or services
 - 2. Payments made by the government to individuals without any corresponding production of goods or services
 - 3. Payments made by businesses to their shareholders as a share of profits
 - 4. Payments made by individuals to the government in the form of taxes

Question ID : 264330157317
Option 1 ID : 264330616631
Option 2 ID : 264330616632
Option 3 ID : 264330616633
Option 4 ID : 264330616634
Status : Answered
Chosen Option : 1

Q.17 Who among the following is the author of the book 'Red Earth and Pouring Rain: A Novel'?

- Ans
- 1. Vikram Chandra
 - 2. Shashi Tharoor
 - 3. Ashwin Sanghi
 - 4. Ruskin Bond

Question ID : 264330155455
Option 1 ID : 264330609224
Option 2 ID : 264330609223
Option 3 ID : 264330609225
Option 4 ID : 264330609226
Status : Not Answered
Chosen Option : --

Q.18 The Nuakhai festival of _____ is observed on Panchami Tithi (fifth day) of the lunar fortnight of Bhadrava (August-September), the day after Ganesh Chaturthi.

- Ans
- 1. Odisha
 - 2. Assam
 - 3. Meghalaya
 - 4. West Bengal

Question ID : 264330160815
Option 1 ID : 264330630594
Option 2 ID : 264330630591
Option 3 ID : 264330630593
Option 4 ID : 264330630592
Status : Answered
Chosen Option : 1

Q.19 Which country is hosting the ICC 2023 ODI Cricket World Cup?

- Ans
- 1. Pakistan
 - 2. South Africa
 - 3. India
 - 4. Australia

Question ID : 264330158222
Option 1 ID : 264330620248
Option 2 ID : 264330620250
Option 3 ID : 264330620247
Option 4 ID : 264330620249
Status : Answered
Chosen Option : 3

Q.20 Which of the following is an autobiography of Sachin Tendulkar?

- Ans
- 1. Unbreakable
 - 2. Playing It My Way
 - 3. My Many Trysts with God
 - 4. I Am No Messiah

Question ID : 264330155495
Option 1 ID : 264330609386
Option 2 ID : 264330609385
Option 3 ID : 264330609383
Option 4 ID : 264330609384
Status : Answered
Chosen Option : 2

Q.21 In April 2023, Tamil Nadu passed a bill banning which of the following?

- Ans
- 1. Gutka
 - 2. Online Gambling
 - 3. Lottery
 - 4. Liquor

Question ID : 264330158336
Option 1 ID : 264330620706
Option 2 ID : 264330620704
Option 3 ID : 264330620703
Option 4 ID : 264330620705
Status : Not Answered
Chosen Option : --

Q.22 In which stadium was the final match of ODI Cricket World Cup 2011 played?

- Ans
- 1. Eden Gardens
 - 2. Wankhede Stadium
 - 3. Feroz Shah Kotla Stadium
 - 4. D Y Patil Stadium

Question ID : 264330158231
Option 1 ID : 264330620285
Option 2 ID : 264330620283
Option 3 ID : 264330620286
Option 4 ID : 264330620284
Status : Answered
Chosen Option : 2

Q.23 'Mitra Mela' was a revolutionary organisation founded by:

- Ans
- 1. Bhupendra Nath Bose
 - 2. Khudiram Bose
 - 3. Vinayak Savarkar
 - 4. Sisir Kumar Bose

Question ID : 264330162334
Option 1 ID : 264330636664
Option 2 ID : 264330636666
Option 3 ID : 264330636663
Option 4 ID : 264330636665
Status : Not Answered
Chosen Option : --

Q.24 Which is the Gaussian unit of kinematic viscosity?

- Ans
- 1. Ampere
 - 2. Joule
 - 3. Stokes
 - 4. Darcy

Question ID : 264330157785
Option 1 ID : 264330618500
Option 2 ID : 264330618502
Option 3 ID : 264330618501
Option 4 ID : 264330618499
Status : Answered
Chosen Option : 4

Q.25 Who among the following freedom fighter lawyers from Bengal is known as Deshbandhu?

- Ans
- 1. Chittaranjan Das
 - 2. Durga Mohan Das
 - 3. Bipin Chandra Pal
 - 4. Satish Ranjan Das

Question ID : 264330160889
Option 1 ID : 264330630890
Option 2 ID : 264330630888
Option 3 ID : 264330630887
Option 4 ID : 264330630889
Status : Answered
Chosen Option : 1

Section : English Language and Comprehension

Q.1 Select the option that can be used as a one-word substitute for the underlined group of words.
He studies the subject known as the scientific study of insects.

- Ans
- 1. Entomology
 - 2. Alchemy
 - 3. Biology
 - 4. Etymology

Question ID : 264330153513
Option 1 ID : 264330601563
Option 2 ID : 264330601566
Option 3 ID : 264330601565
Option 4 ID : 264330601564
Status : Answered
Chosen Option : 1

Q.2 The following sentence has been split into four segments. Identify the segment that contains an error.
Harish told me / in the morning / that Gaurav will / come tomorrow.

- Ans
- 1. come tomorrow
 - 2. Harish told me
 - 3. that Gaurav will
 - 4. in the morning

Question ID : 264330155324
Option 1 ID : 264330608738
Option 2 ID : 264330608735
Option 3 ID : 264330608737
Option 4 ID : 264330608736
Status : Answered
Chosen Option : 1

Q.3 Identify the INCORRECTLY spelt word in the following sentence.
The detective and his agent inspected the krime scene yesterday.

- Ans
- 1. krime
 - 2. yesterday
 - 3. agent
 - 4. detective

Question ID : 264330152601
Option 1 ID : 264330598009
Option 2 ID : 264330598010
Option 3 ID : 264330598008
Option 4 ID : 264330598007
Status : Answered
Chosen Option : 1

Q.4 Select the most appropriate meaning of the given idiom.
Cup of tea

- Ans
- 1. Long held desire
 - 2. A cup brimming with tea
 - 3. Favourite pastime
 - 4. Something one likes/excels in

Question ID : 264330159725
Option 1 ID : 264330626257
Option 2 ID : 264330626256
Option 3 ID : 264330626258
Option 4 ID : 264330626255
Status : Answered
Chosen Option : 4

Q.5 Select the most appropriate segment that can substitute the underlined word in the following sentence.

Iraq was governed by autocracy when Saddam Hussain was the President.

Ans ✓ 1. one man with absolute power

✗ 2. the King and his heir

✗ 3. the wealthy class

✗ 4. the common people

Question ID : 264330152630

Option 1 ID : 264330598126

Option 2 ID : 264330598124

Option 3 ID : 264330598125

Option 4 ID : 264330598123

Status : Answered

Chosen Option : 1

Q.6 Select the most appropriate option to fill in the blank.
Ours is _____ house of all the houses in our area.

Ans ✗ 1. the more bigger

✓ 2. the biggest

✗ 3. the most biggest

✗ 4. the bigger

Question ID : 264330152733

Option 1 ID : 264330598534

Option 2 ID : 264330598531

Option 3 ID : 264330598533

Option 4 ID : 264330598532

Status : Answered

Chosen Option : 2

Q.7 Select the INCORRECTLY spelt word.

Ans ✓ 1. Tastimonial

✗ 2. Ballad

✗ 3. Rampant

✗ 4. Beneficiary

Question ID : 264330152783

Option 1 ID : 264330598724

Option 2 ID : 264330598723

Option 3 ID : 264330598725

Option 4 ID : 264330598726

Status : Answered

Chosen Option : 1

Q.8 Select the most appropriate meaning of the underlined idiom.

The council president is known to play devil's advocate often.

- Ans
- 1. To allow others to rise
 - 2. To play risky games
 - 3. To argue, just for the sake of it
 - 4. Make one's own destiny

Question ID : 264330153148
Option 1 ID : 264330600152
Option 2 ID : 264330600151
Option 3 ID : 264330600153
Option 4 ID : 264330600154
Status : Answered
Chosen Option : 3

Q.9 Select the most appropriate meaning of the underlined segment in the given sentence.
When it comes to playing the guitar, Jim always hits the nail on the head.

- Ans
- 1. Is dishonest
 - 2. Misses the point
 - 3. Does something right
 - 4. Makes a mistake

Question ID : 264330152924
Option 1 ID : 264330599278
Option 2 ID : 264330599275
Option 3 ID : 264330599277
Option 4 ID : 264330599276
Status : Answered
Chosen Option : 3

Q.10 Select the INCORRECTLY spelt word.

- Ans
- 1. Rhyme
 - 2. Relevant
 - 3. Succesful
 - 4. Queue

Question ID : 264330153152
Option 1 ID : 264330600169
Option 2 ID : 264330600168
Option 3 ID : 264330600170
Option 4 ID : 264330600167
Status : Answered
Chosen Option : 3

Q.11 Select the most appropriate meaning of the underlined idiom.

The company was on thin ice.

- Ans
- 1. In a situation of comfort
 - 2. Forcing itself to collaborate
 - 3. Depending on business competitors
 - 4. In a precarious or risky situation

Question ID : 264330153145
Option 1 ID : 264330600139
Option 2 ID : 264330600141
Option 3 ID : 264330600142
Option 4 ID : 264330600140
Status : Answered
Chosen Option : 4

Q.12 The following sentence has been split into four segments. Identify the segment that contains a grammatical error.

She performed / the dance routine / perfect, / impressing everyone.

- Ans
- 1. She performed
 - 2. perfect
 - 3. impressing everyone
 - 4. the dance routine

Question ID : 264330153182
Option 1 ID : 264330600287
Option 2 ID : 264330600289
Option 3 ID : 264330600290
Option 4 ID : 264330600288
Status : Answered
Chosen Option : 2

Q.13 Select the option that will improve the underlined part of the given sentence. In case no improvement is needed, select 'No improvement required'.

With all their little comforts destroyed, the survivors were thrown still farther back into barbarism.

- Ans
- 1. still further back for barbarism
 - 2. still further back into barbarism
 - 3. No improvement required
 - 4. still a little farther into barbarism

Question ID : 264330153611
Option 1 ID : 264330601927
Option 2 ID : 264330601929
Option 3 ID : 264330601930
Option 4 ID : 264330601928
Status : Answered
Chosen Option : 2

Q.14 Parts of the following sentence have been given as options. Select the option that contains an error.
Perhaps my family visit the Taj Mahal next month.

- Ans
- 1. next month
 - 2. Perhaps
 - 3. the Taj Mahal
 - 4. my family visit

Question ID : 264330152814
Option 1 ID : 264330598850
Option 2 ID : 264330598847
Option 3 ID : 264330598849
Option 4 ID : 264330598848
Status : Answered
Chosen Option : 4

Q.15 The following sentence has been split into four segments. Identify the segment that contains a grammatical error.
In America, / most of the people / can speak / the English well.

- Ans
- 1. the English well
 - 2. most of the people
 - 3. can speak
 - 4. In America,

Question ID : 264330153164
Option 1 ID : 264330600218
Option 2 ID : 264330600216
Option 3 ID : 264330600217
Option 4 ID : 264330600215
Status : Answered
Chosen Option : 1

Q.16 Select the most appropriate ANTONYM of the underlined word.
Butterfly was attracted towards the bright flowers.

- Ans
- 1. Reckoned
 - 2. Repulsed
 - 3. Reargued
 - 4. Recurred

Question ID : 264330151818
Option 1 ID : 264330594900
Option 2 ID : 264330594902
Option 3 ID : 264330594899
Option 4 ID : 264330594901
Status : Answered
Chosen Option : 2

Q.17 The following sentence has been split into four segments. Identify the segment that contains a grammatical error.
Please / explain me / how this plan / did not work.

- Ans
- 1. did not work
 - 2. Please
 - 3. how this plan
 - 4. explain me

Question ID : 264330153419
Option 1 ID : 264330601210
Option 2 ID : 264330601207
Option 3 ID : 264330601209
Option 4 ID : 264330601208
Status : Answered
Chosen Option : 1

Q.18 Select the most appropriate option to fill in the blank.
Early childhood experiences have a _____ impact on brain development affecting learning, health, behaviour, and, ultimately, productivity and income.

- Ans
- 1. perfect
 - 2. profound
 - 3. basic
 - 4. superficial

Question ID : 264330151902
Option 1 ID : 264330595225
Option 2 ID : 264330595224
Option 3 ID : 264330595226
Option 4 ID : 264330595223
Status : Answered
Chosen Option : 2

Q.19 Select the most appropriate synonym of the given word.
Fragile

- Ans
- 1. Brittle
 - 2. Sturdy
 - 3. Unkempt
 - 4. Intense

Question ID : 264330151881
Option 1 ID : 264330595144
Option 2 ID : 264330595146
Option 3 ID : 264330595143
Option 4 ID : 264330595145
Status : Answered
Chosen Option : 1

Q.20 Select the most appropriate ANTONYM of the underlined word.
He was admired for introducing welfare programmes.

- Ans
- 1. Despised
 - 2. Confessed
 - 3. Appreciated
 - 4. Succeeded

Question ID : 264330151815
Option 1 ID : 264330594889
Option 2 ID : 264330594887
Option 3 ID : 264330594888
Option 4 ID : 264330594890
Status : Answered
Chosen Option : 1

Comprehension:

In the following passage, some words have been deleted. Read the passage carefully and select the most appropriate option to fill in each blank.

Fingerprinting is the one of the methods of (1)_____ using the impression made by the minute ridge formation or patterns found on the fingertips. No two persons have exactly the same (2)_____ of ridge patterns, they remain unchanged throughout the life. Fingerprints may be classified and filled on the basis of the ridge patterns, setting up an identification system that is almost (3)_____. Today, law enforcement agencies use computers to (4)_____ record fingerprints and to transmit them electronically to other agencies for comparison. By comparing fingerprints of the criminals with the recorded fingerprints, officials can establish (5)_____ proof of the presence or identity of a person.

SubQuestion No : 21

Q.21 Select the most appropriate option to fill in blank number 1.

- Ans
- 1. involvement
 - 2. satisfaction
 - 3. demonstration
 - 4. identification

Question ID : 264330152908
Option 1 ID : 264330599218
Option 2 ID : 264330599215
Option 3 ID : 264330599217
Option 4 ID : 264330599216
Status : Answered
Chosen Option : 4

Comprehension:

In the following passage, some words have been deleted. Read the passage carefully and select the most appropriate option to fill in each blank.

Fingerprinting is the one of the methods of (1)_____ using the impression made by the minute ridge formation or patterns found on the fingertips. No two persons have exactly the same (2)_____ of ridge patterns, they remain unchanged throughout the life. Fingerprints may be classified and filled on the basis of the ridge patterns, setting up an identification system that is almost (3)_____. Today, law enforcement agencies use computers to (4)_____ record fingerprints and to transmit them electronically to other agencies for comparison. By comparing fingerprints of the criminals with the recorded fingerprints, officials can establish (5)_____ proof of the presence or identity of a person.

SubQuestion No : 22

Q.22 Select the most appropriate option to fill in blank number 2.

- Ans 1. arrangement
 2. statement
 3. management
 4. settlement

Question ID : 264330152909

Option 1 ID : 264330599219

Option 2 ID : 264330599222

Option 3 ID : 264330599220

Option 4 ID : 264330599221

Status : Answered

Chosen Option : 1

Comprehension:

In the following passage, some words have been deleted. Read the passage carefully and select the most appropriate option to fill in each blank.

Fingerprinting is the one of the methods of (1)_____ using the impression made by the minute ridge formation or patterns found on the fingertips. No two persons have exactly the same (2)_____ of ridge patterns, they remain unchanged throughout the life. Fingerprints may be classified and filled on the basis of the ridge patterns, setting up an identification system that is almost (3)_____. Today, law enforcement agencies use computers to (4)_____ record fingerprints and to transmit them electronically to other agencies for comparison. By comparing fingerprints of the criminals with the recorded fingerprints, officials can establish (5)_____ proof of the presence or identity of a person.

SubQuestion No : 23

Q.23 Select the most appropriate option to fill in blank number 3.

- Ans 1. risky
 2. infallible
 3. unreliable
 4. fallible

Question ID : 264330152910

Option 1 ID : 264330599226

Option 2 ID : 264330599225

Option 3 ID : 264330599223

Option 4 ID : 264330599224

Status : Answered

Chosen Option : 2

Comprehension:

In the following passage, some words have been deleted. Read the passage carefully and select the most appropriate option to fill in each blank.

Fingerprinting is the one of the methods of (1)_____ using the impression made by the minute ridge formation or patterns found on the fingertips. No two persons have exactly the same (2)_____ of ridge patterns, they remain unchanged throughout the life. Fingerprints may be classified and filled on the basis of the ridge patterns, setting up an identification system that is almost (3)_____. Today, law enforcement agencies use computers to (4)_____ record fingerprints and to transmit them electronically to other agencies for comparison. By comparing fingerprints of the criminals with the recorded fingerprints, officials can establish (5)_____ proof of the presence or identity of a person.

SubQuestion No : 24

Q.24 Select the most appropriate option to fill in blank number 4.

- Ans 1. manually
 2. digitally
 3. mentally
 4. physically

Question ID : 264330152911

Option 1 ID : 264330599227

Option 2 ID : 264330599228

Option 3 ID : 264330599230

Option 4 ID : 264330599229

Status : Answered

Chosen Option : 2

Comprehension:

In the following passage, some words have been deleted. Read the passage carefully and select the most appropriate option to fill in each blank.

Fingerprinting is the one of the methods of (1)_____ using the impression made by the minute ridge formation or patterns found on the fingertips. No two persons have exactly the same (2)_____ of ridge patterns, they remain unchanged throughout the life. Fingerprints may be classified and filled on the basis of the ridge patterns, setting up an identification system that is almost (3)_____. Today, law enforcement agencies use computers to (4)_____ record fingerprints and to transmit them electronically to other agencies for comparison. By comparing fingerprints of the criminals with the recorded fingerprints, officials can establish (5)_____ proof of the presence or identity of a person.

SubQuestion No : 25

Q.25 Select the most appropriate option to fill in blank number 5.

- Ans 1. absolute
 2. doubt
 3. unconfirmed
 4. provisional

Question ID : 264330152912

Option 1 ID : 264330599234

Option 2 ID : 264330599231

Option 3 ID : 264330599233

Option 4 ID : 264330599232

Status : Answered

Chosen Option : 1

Multi Tasking Non Technical Staff and Havaladar CBIC and CBN Examination 2023

Roll Number	
Candidate Name	
Venue Name	Webel Human Resource Development Center
Exam Date	01/09/2023
Exam Time	4:00 PM - 6:00 PM
Subject	MTS Non Tech Havaladar CBIC and CBN Examination 2023

Section : Numerical and Mathematical Ability

Q.1 The surface area of a sphere is 5544 cm^2 . If the radius of the sphere is doubled, then find the surface area of the new sphere (in cm^2).

- Ans**
- ✓ 1. 22,176
 - ✗ 2. 22,761
 - ✗ 3. 20,761
 - ✗ 4. 20,176

Question ID : 264330156018
Option 1 ID : 264330611474
Option 2 ID : 264330611472
Option 3 ID : 264330611471
Option 4 ID : 264330611473
Status : Answered
Chosen Option : 1

Q.2 A sailor rows a boat 36 km downstream and 24 km upstream in 6 hours. When it rows 24 km downstream and 36 km upstream the sailor takes 6 and half hours. Then the speed of the current is:

- Ans**
- ✗ 1. 1.5 km/h
 - ✗ 2. 4 km/h
 - ✗ 3. 3 km/h
 - ✓ 4. 2 km/h

Question ID : 264330154057
Option 1 ID : 264330603692
Option 2 ID : 264330603694
Option 3 ID : 264330603693
Option 4 ID : 264330603691
Status : Answered
Chosen Option : 4

Q.3 From a cuboid of dimension of $8 \times 6 \times 6$ units, small cubes of dimension $0.5 \times 0.5 \times 0.5$ unit are cut. How many small cubes can be cut from the big cuboid?

- Ans**
- 1. 576
 - 2. 1152
 - 3. 2304
 - 4. 1552

Question ID : 264330153826
Option 1 ID : 264330602768
Option 2 ID : 264330602769
Option 3 ID : 264330602767
Option 4 ID : 264330602770
Status : Answered
Chosen Option : 3

Q.4 The following table shows the number of students enrolled in a university for higher education in Liberal Arts and in Engineering from 2015 to 2018. Study the table carefully and answer the question that follows.

Year	No. of students	
	Liberal Arts	Engineering
2015	345	650
2016	549	521
2017	477	846
2018	781	695

The average number of students enrolled per year in Liberal Arts is how much more or less than that in Engineering from 2015 to 2018?

- Ans**
- 1. Less, 140
 - 2. Less, 127
 - 3. More, 140
 - 4. More, 127

Question ID : 264330156496
Option 1 ID : 264330613371
Option 2 ID : 264330613373
Option 3 ID : 264330613372
Option 4 ID : 264330613374
Status : Answered
Chosen Option : 1

Q.5 Find the greatest two digit number which on dividing 219, 365, 511 leaves the remainders 3, 5, 7, respectively.

- Ans**
- 1. 63
 - 2. 82
 - 3. 53
 - 4. 72

Question ID : 264330155983
Option 1 ID : 264330611332
Option 2 ID : 264330611331
Option 3 ID : 264330611333
Option 4 ID : 264330611334
Status : Answered
Chosen Option : 4

Q.6 From a container having pure milk, 35% is replaced by water and the process is repeated thrice. At the end of the third operation, the purity of the milk is:

- Ans**
- 1. $21\frac{23}{80}\%$
 - 2. $37\frac{21}{80}\%$
 - 3. $23\frac{37}{80}\%$
 - 4. $27\frac{37}{80}\%$

Question ID : 264330154077
Option 1 ID : 264330603771
Option 2 ID : 264330603773
Option 3 ID : 264330603774
Option 4 ID : 264330603772
Status : Answered
Chosen Option : 3

Q.7 The difference in interests earned on ₹1,50,000 at an 8% rate of interest per annum in a year when the interest is compounded semi-annually and annually, respectively, is ₹_____.

- Ans**
- 1. 360
 - 2. 120
 - 3. 240
 - 4. 420

Question ID : 264330153811
Option 1 ID : 264330602708
Option 2 ID : 264330602709
Option 3 ID : 264330602710
Option 4 ID : 264330602707
Status : Answered
Chosen Option : 3

Q.8 If ₹3,650 amounts to ₹4,526 in 3 years at simple interest, what is the rate of interest per annum?

- Ans**
- 1. 8%
 - 2. 10%
 - 3. 12%
 - 4. 6%

Question ID : 264330156483
Option 1 ID : 264330613321
Option 2 ID : 264330613322
Option 3 ID : 264330613320
Option 4 ID : 264330613319
Status : Answered
Chosen Option : 1

Q.9 The percentage profit earned by selling an article for ₹1,980 is equal to the percentage loss incurred by selling the same article for ₹1,620. At what price should the article be sold to make a 15% profit?

- Ans
- 1. ₹1,863
 - 2. ₹2,277
 - 3. ₹2,070
 - 4. ₹1,800

Question ID : 264330161979
 Option 1 ID : 264330635245
 Option 2 ID : 264330635244
 Option 3 ID : 264330635243
 Option 4 ID : 264330635246
 Status : Answered
 Chosen Option : 3

Q.10 A man travels from point A to point B at a speed of 40 km/h and returns to point A at a speed of 60 km/h. If the total time taken for the journey is 5 hours, what is the distance between point A and point B?

- Ans
- 1. 135 km
 - 2. 120 km
 - 3. 125 km
 - 4. 130 km

Question ID : 264330156273
 Option 1 ID : 264330612494
 Option 2 ID : 264330612491
 Option 3 ID : 264330612492
 Option 4 ID : 264330612493
 Status : Answered
 Chosen Option : 2

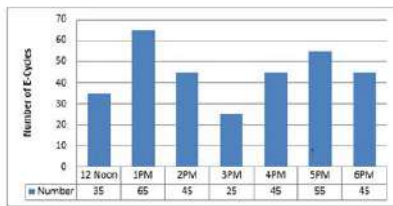
Q.11 Swati starts a business with ₹4,200, and after 5 months, Bani joins Swati as her partner. After a year, the profit is divided among Swati and Bani in the ratio 2 : 5. What is Bani's contribution?

- Ans
- 1. ₹18,000
 - 2. ₹17,050
 - 3. ₹19,000
 - 4. ₹16,500

Question ID : 264330156186
 Option 1 ID : 264330612144
 Option 2 ID : 264330612143
 Option 3 ID : 264330612146
 Option 4 ID : 264330612145
 Status : Answered
 Chosen Option : 1

Q.12 The bar diagram represents the number of E-Cycles parking in a metro station from 12:00 P.M. to 6:00 P.M.

What will be the total collection from 2:00 P.M. to 6:00 P.M. when the parking charge is ₹3 per hour?



- Ans
- 1. ₹625
 - 2. ₹655
 - 3. ₹645
 - 4. ₹695

Question ID : 264330154063

Option 1 ID : 264330603715

Option 2 ID : 264330603716

Option 3 ID : 264330603717

Option 4 ID : 264330603718

Status : Answered

Chosen Option : 3

Q.13 The income of X is 12% more than that of Y. By how much per cent is Y's income less than that of X?

- Ans
- 1. $10\frac{4}{7}\%$
 - 2. $10\frac{3}{7}\%$
 - 3. $10\frac{5}{7}\%$
 - 4. $10\frac{2}{7}\%$

Question ID : 264330156216

Option 1 ID : 264330612265

Option 2 ID : 264330612264

Option 3 ID : 264330612266

Option 4 ID : 264330612263

Status : Answered

Chosen Option : 3

Q.14 In what ratio must a grocer mix two varieties of pulses costing ₹18 per kg and ₹22 per kg, respectively, so as to get a mixture worth ₹19.50 per kg?

- Ans
- 1. 5 : 3
 - 2. 5 : 1
 - 3. 1 : 5
 - 4. 5 : 2

Question ID : 264330156052

Option 1 ID : 264330611609

Option 2 ID : 264330611607

Option 3 ID : 264330611608

Option 4 ID : 264330611610

Status : Answered

Chosen Option : 1

Q.15 If $A : B = 3 : 4$ and $A : C = 9 : 8$, then $A : B : C$ is:

- Ans
- ✓ 1. $9 : 12 : 8$
 - ✗ 2. $3 : 4 : 6$
 - ✗ 3. $9 : 8 : 12$
 - ✗ 4. $9 : 8 : 8$

Question ID : 264330153874
Option 1 ID : 264330602962
Option 2 ID : 264330602959
Option 3 ID : 264330602960
Option 4 ID : 264330602961
Status : Answered
Chosen Option : 1

Q.16 How many kilograms of sugar at ₹3.80 per kg must be mixed with 60 kg of sugar at ₹4.60 per kg, so that by selling the mixture at ₹5.20 per kg there may be a gain of 30%?

- Ans
- ✗ 1. 170 kg
 - ✗ 2. 120 kg
 - ✗ 3. 160 kg
 - ✓ 4. 180 kg

Question ID : 264330156070
Option 1 ID : 264330611681
Option 2 ID : 264330611679
Option 3 ID : 264330611682
Option 4 ID : 264330611680
Status : Answered
Chosen Option : 4

Q.17 Simplify:

$$24 \div 6 \times \left(\frac{3}{4} \text{ of } \frac{1}{3} + \frac{5}{3} \text{ of } \frac{3}{4} \right) = ?$$

- Ans
- ✗ 1. 9
 - ✓ 2. 6
 - ✗ 3. 3
 - ✗ 4. 8

Question ID : 264330156424
Option 1 ID : 264330613087
Option 2 ID : 264330613088
Option 3 ID : 264330613090
Option 4 ID : 264330613089
Status : Answered
Chosen Option : 2

Q.18 A and B can do a piece of work in 9 and 18 days, respectively. They started working together. After some days A left the work and B finished the remaining work in 15 days. After how many days did A leave?

- Ans**
- ✓ 1. 1
 - ✗ 2. 2
 - ✗ 3. 4
 - ✗ 4. 3

Question ID : 264330156010
Option 1 ID : 264330611441
Option 2 ID : 264330611442
Option 3 ID : 264330611439
Option 4 ID : 264330611440
Status : Answered
Chosen Option : 1

Q.19 The cost price of an article is ₹1,120. After allowing a discount of ₹205 a gain of 15% was made, then the marked price of the article is:

- Ans**
- ✗ 1. ₹1,760
 - ✓ 2. ₹1,493
 - ✗ 3. ₹1,350
 - ✗ 4. ₹1,580

Question ID : 264330156447
Option 1 ID : 264330613182
Option 2 ID : 264330613179
Option 3 ID : 264330613181
Option 4 ID : 264330613180
Status : Answered
Chosen Option : 2

Q.20 12 days are taken by one man and one woman together to complete the work. A man alone can complete the work in 15 days. In how many days can one woman alone complete the work?

- Ans**
- ✗ 1. 45 days
 - ✗ 2. 30 days
 - ✓ 3. 60 days
 - ✗ 4. 12 days

Question ID : 264330156063
Option 1 ID : 264330611653
Option 2 ID : 264330611652
Option 3 ID : 264330611654
Option 4 ID : 264330611651
Status : Answered
Chosen Option : 3

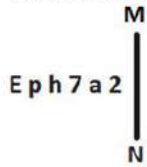
Q.1 What should come in place of '?' in the given series?

10 19 ? 199 775 3079 12295

- Ans
- 1. 63
 - 2. 55
 - 3. 50
 - 4. 61

Question ID : 264330151445
 Option 1 ID : 264330593410
 Option 2 ID : 264330593408
 Option 3 ID : 264330593407
 Option 4 ID : 264330593409
 Status : Answered
 Chosen Option : 2

Q.2 Select the correct mirror image of the given figure when the mirror is placed at MN as shown below.



- Ans
- 1. a 2 7 h q E
 - 2. 2 a 7 h q E
 - 3. 2 a 7 h q E
 - 4. 2 a 7 h q E

Question ID : 264330151509
 Option 1 ID : 264330593663
 Option 2 ID : 264330593666
 Option 3 ID : 264330593665
 Option 4 ID : 264330593664
 Status : Answered
 Chosen Option : 3

Q.3 Seven people, S, T, U, V, W, X and Y are sitting in a straight line, facing north. Only two people sit to the right of W. Only three people sit between S and W. U is the immediate neighbour of T and X. X is not the immediate neighbour of W. V sits third to the right of T.

Who is sitting between W and V?

- Ans
- 1. T
 - 2. Y
 - 3. U
 - 4. X

Question ID : 264330155546
 Option 1 ID : 264330609588
 Option 2 ID : 264330609587
 Option 3 ID : 264330609589
 Option 4 ID : 264330609590
 Status : Answered
 Chosen Option : 2

Q.4 Select the combination of letters that when sequentially placed in the blanks of the given series, will complete the series.

J _ JJ _ _ JM _ _ MJ

- Ans**
- 1. JJMMJ
 - 2. MMJJJ
 - 3. MJJMM
 - 4. JMMJM

Question ID : 264330151649

Option 1 ID : 264330594226

Option 2 ID : 264330594225

Option 3 ID : 264330594223

Option 4 ID : 264330594224

Status : Answered

Chosen Option : 2

Q.5 HM 12 is related to FK 17 in a certain way. In the same way, EK 18 is related to CI 23. To which of the following is GU 14 related to following the same logic?

- Ans**
- 1. ES 19
 - 2. IW 20
 - 3. ER 18
 - 4. FS 19

Question ID : 264330151683

Option 1 ID : 264330594359

Option 2 ID : 264330594360

Option 3 ID : 264330594361

Option 4 ID : 264330594362

Status : Answered

Chosen Option : 1

Q.6 Select the set in which the numbers are related in the same way as are the numbers of the following sets.

(NOTE : Operations should be performed on the whole numbers, without breaking down the numbers into its constituent digits. E.g. 13 – Operations on 13 such as adding / subtracting /multiplying etc. to 13 can be performed.

Breaking down 13 into 1 and 3 and then performing mathematical operations on 1 and 3 is not allowed)

(5, 35, 7)

(9, 27, 3)

- Ans**
- 1. 16, 50, 7
 - 2. 6, 42, 7
 - 3. 4, 10, 5
 - 4. 6, 17, 9

Question ID : 264330151608

Option 1 ID : 264330594061

Option 2 ID : 264330594060

Option 3 ID : 264330594059

Option 4 ID : 264330594062

Status : Answered

Chosen Option : 2

Q.7 In the following number-pairs, the second number is obtained by applying certain mathematical operations to the first number. Select the set in which the numbers are related in the same way as are the numbers of the following sets.

(NOTE: Operations should be performed on the whole numbers, without breaking down the numbers into its constituent digits. E.g. 13 – Operations on 13 such as adding /deleting /multiplying etc. to 13 can be performed. Breaking down 13 into 1 and 3 and then performing mathematical operations on 1 and 3 is not allowed)

16 : 95

6 : 35

- Ans**
- 1. 8 : 48
 - 2. 13 : 77
 - 3. 2 : 13
 - 4. 17 : 23

Question ID : 264330154653
 Option 1 ID : 264330606077
 Option 2 ID : 264330606078
 Option 3 ID : 264330606076
 Option 4 ID : 264330606075
 Status : Answered
 Chosen Option : 2

Q.8 Read the given statements and conclusions carefully. You have to take the given statements to be true even if they seem to be at variance from commonly known facts. You have to decide which conclusion/s logically follow/s from the given statements.

Statements: Some photos are vases. All vases are tall. Some tall are buildings.

Conclusion I: Some photos are buildings.

Conclusion II: All tall are vases.

- Ans**
- 1. Both conclusions (I) and (II) are follow.
 - 2. Only conclusion (I) is follow.
 - 3. Only conclusion (II) is follow.
 - 4. Neither conclusion (I) nor (II) is follow.

Question ID : 264330155915
 Option 1 ID : 264330611066
 Option 2 ID : 264330611063
 Option 3 ID : 264330611064
 Option 4 ID : 264330611065
 Status : Answered
 Chosen Option : 4

Q.9 What should come in place of ? in the given series based on the English alphabetical order?

JPX, GNU, DLR, AJO, ?

- Ans**
- 1. XHL
 - 2. ZGL
 - 3. YIL
 - 4. YGM

Question ID : 264330155787
 Option 1 ID : 264330610551
 Option 2 ID : 264330610554
 Option 3 ID : 264330610553
 Option 4 ID : 264330610552
 Status : Answered
 Chosen Option : 1

Q.10 In a certain code language, 'LED' is coded as '15-22-23' and 'BMW' is coded as '25-14-4'. What is the code for 'QUE' in the given code language?

- Ans**
- 1. 9-4-21
 - 2. 10-6-21
 - 3. 11-5-20
 - 4. 9-5-20

Question ID : 264330155818
Option 1 ID : 264330610675
Option 2 ID : 264330610678
Option 3 ID : 264330610676
Option 4 ID : 264330610677
Status : Answered
Chosen Option : 2

Q.11 What should come in place of ? in the given series?

11 14 20 29 41 ?

- Ans**
- 1. 54
 - 2. 61
 - 3. 56
 - 4. 64

Question ID : 264330151717
Option 1 ID : 264330594497
Option 2 ID : 264330594496
Option 3 ID : 264330594495
Option 4 ID : 264330594498
Status : Answered
Chosen Option : 3

Q.12

Select the option figure in which the given figure (X) is embedded as its part (rotation is NOT allowed).



(X)

Ans


✗ 1.



✗ 2.



✓ 3.



✗ 4.



Question ID : 264330151726

Option 1 ID : 264330594531

Option 2 ID : 264330594533

Option 3 ID : 264330594532

Option 4 ID : 264330594534

Status : Answered

Chosen Option : 3

Q.13 In a certain code language, 'DEAN' is coded as '2458' and 'LEND' is coded as '8352'. What is the code for 'L' in the given code language?

- Ans**
- 1. 5
 - 2. 3
 - 3. 8
 - 4. 2

Question ID : 264330151689
Option 1 ID : 264330594386
Option 2 ID : 264330594384
Option 3 ID : 264330594383
Option 4 ID : 264330594385
Status : Answered
Chosen Option : 2

Q.14 If 6 July 2011 is a Wednesday, then what will be the day of the week on 16 February 2010?

- Ans**
- 1. Monday
 - 2. Thursday
 - 3. Tuesday
 - 4. Saturday

Question ID : 264330154353
Option 1 ID : 264330604876
Option 2 ID : 264330604877
Option 3 ID : 264330604875
Option 4 ID : 264330604878
Status : Answered
Chosen Option : 4

Q.15 What should come in place of the question mark (?) in the given series based on the English alphabetical order?

DJS, HNT, LRU, PVV, ?

- Ans**
- 1. SRV
 - 2. UTV
 - 3. TZW
 - 4. USV

Question ID : 264330156298
Option 1 ID : 264330612591
Option 2 ID : 264330612593
Option 3 ID : 264330612592
Option 4 ID : 264330612594
Status : Answered
Chosen Option : 3

Q.16 What should come in place of '?' in the given series?

7 41 177 721 2897 ?

- Ans
- 1. 12589
 - 2. 11601
 - 3. 11283
 - 4. 10631

Question ID : 264330151462
Option 1 ID : 264330593478
Option 2 ID : 264330593477
Option 3 ID : 264330593476
Option 4 ID : 264330593475
Status : Answered
Chosen Option : 2

Q.17 What will come in the place of '?' in the following equation, if '+' and '-' are interchanged and 'x' and '+' are interchanged?

$$121 \times 11 + 7 - 15 + 23 = ?$$

- Ans
- 1. 69
 - 2. 49
 - 3. 59
 - 4. 79

Question ID : 264330155675
Option 1 ID : 264330610103
Option 2 ID : 264330610106
Option 3 ID : 264330610104
Option 4 ID : 264330610105
Status : Answered
Chosen Option : 1

Q.18 Read the given statements and conclusions carefully. You have to take the given statements to be true even if they seem to be at variance from commonly known facts. You have to decide which conclusion/s logically follow/s from the given statements.

Statements: All bed are covers. Some covers are thick. Some thick is juice.

Conclusion I: All covers are beds.

Conclusion II: Some thick are covers.

- Ans
- 1. Neither conclusion (I) nor (II) is follow.
 - 2. Only conclusion (II) is follow.
 - 3. Both conclusions (I) and (II) are follow.
 - 4. Only conclusion (I) is follow.

Question ID : 264330155900
Option 1 ID : 264330611005
Option 2 ID : 264330611004
Option 3 ID : 264330611006
Option 4 ID : 264330611003
Status : Answered
Chosen Option : 2

Q.19 Which figure should replace the question mark (?) if the following figure series were to be continued?

Z	O	K	B	U	Z	△	K	
B	U	L	K	O	L	△	Z	K
↑	△	U	↑	O	9	B	O	?

Ans

✗ 1.

B	O
△	9 L K
Z	U

✓ 2.

B	U
△	K L 9
Z	A

✗ 3.

B	A
△	O L 9
Z	U

✗ 4.

B	△
U	Z L 9
O	K

Question ID : 264330154751

Option 1 ID : 264330606467

Option 2 ID : 264330606469

Option 3 ID : 264330606470

Option 4 ID : 264330606468

Status : Answered

Chosen Option : 2

Q.20 What will come in place of '?' in the following equation, if '+' and '×' are interchanged and '−' and '÷' are interchanged?

$$2 \times 4 - 1 \div 6 + 8 = ?$$

Ans

✗ 1. -13

✓ 2. -42

✗ 3. -18

✗ 4. -24

Question ID : 264330154660

Option 1 ID : 264330606103

Option 2 ID : 264330606105

Option 3 ID : 264330606106

Option 4 ID : 264330606104

Status : Answered

Chosen Option : 2

Q.1 If 7 N force is applied on a brick and it moves through 5 m, then what will be the work done?

- Ans
- 1. 25 J
 - 2. 40 J
 - 3. 35 J
 - 4. 35 Erg

Question ID : 264330156582
Option 1 ID : 264330613715
Option 2 ID : 264330613718
Option 3 ID : 264330613716
Option 4 ID : 264330613717
Status : Answered
Chosen Option : 3

Q.2 _____ is celebrated in Jharkhand immediately after Diwali on the new moon day in the honour of cattle.

- Ans
- 1. Bhagta Parab
 - 2. Makar
 - 3. Rohini
 - 4. Sohrai

Question ID : 264330160837
Option 1 ID : 264330630681
Option 2 ID : 264330630680
Option 3 ID : 264330630682
Option 4 ID : 264330630679
Status : Answered
Chosen Option : 4

Q.3 Which of the following novels is NOT written by Mulk Raj Anand?

- Ans
- 1. The Sword and the Sickle
 - 2. Coolie
 - 3. Private Life of an Indian Prince
 - 4. The Guide

Question ID : 264330155499
Option 1 ID : 264330609400
Option 2 ID : 264330609399
Option 3 ID : 264330609402
Option 4 ID : 264330609401
Status : Answered
Chosen Option : 2

Q.4 Which of the dance was immediately preceded by a practice session called sevakali and undertaken in the precincts of a temple?

- Ans 1. Kathakali
 2. Kathak
 3. Odissi
 4. Kuchipudi

Question ID : 264330159054
Option 1 ID : 264330623577
Option 2 ID : 264330623576
Option 3 ID : 264330623575
Option 4 ID : 264330623578
Status : Not Answered
Chosen Option : --

Q.5 Which of the following is a duty of the Attorney General of India?

- Ans 1. To give advice to the Government of India on legal matters
 2. To act as a judge in the Supreme Court
 3. To advise the State Government
 4. To represent India in international bodies

Question ID : 264330161286
Option 1 ID : 264330632472
Option 2 ID : 264330632473
Option 3 ID : 264330632471
Option 4 ID : 264330632474
Status : Answered
Chosen Option : 1

Q.6 The cultural heritage of Siddhis from _____ dates back to almost 300 years and their Siddhi Dhamal dance is an exquisite art form.

- Ans 1. Uttar Pradesh
 2. Gujarat
 3. Madhya Pradesh
 4. Rajasthan

Question ID : 264330160795
Option 1 ID : 264330630514
Option 2 ID : 264330630511
Option 3 ID : 264330630513
Option 4 ID : 264330630512
Status : Answered
Chosen Option : 2

Q.7 Which of the following locations experiences the lowest amount of rainfall during the monsoon season?

- Ans 1. Kerala
 2. Assam
 3. Leh
 4. Meghalaya

Question ID : 264330157827
Option 1 ID : 264330618667
Option 2 ID : 264330618668
Option 3 ID : 264330618669
Option 4 ID : 264330618670
Status : Answered
Chosen Option : 3

Q.8 In which of the following cities was the 2023 IPL final match held?

- Ans
- 1. Kolkata
 - 2. Chennai
 - 3. Mumbai
 - 4. Ahmedabad

Question ID : 264330161148
Option 1 ID : 264330631925
Option 2 ID : 264330631924
Option 3 ID : 264330631926
Option 4 ID : 264330631923
Status : Answered
Chosen Option : 4

Q.9 Who among the following was the director of Kathak Kendra and also opened his own dance school named 'Kalashram'?

- Ans
- 1. Pandit Lachhu Maharaj
 - 2. Pandit Shambhu Maharaj
 - 3. Pandit Birju Maharaj
 - 4. Pandit Acchan Maharaj

Question ID : 264330155476
Option 1 ID : 264330609309
Option 2 ID : 264330609308
Option 3 ID : 264330609307
Option 4 ID : 264330609310
Status : Answered
Chosen Option : 3

Q.10 What is a budget deficit?

- Ans
- 1. The excess of government revenue over expenditure
 - 2. The amount of money allocated for defence spending
 - 3. The amount of money allocated for social welfare programmes
 - 4. The excess of government expenditure over revenue

Question ID : 264330157271
Option 1 ID : 264330616447
Option 2 ID : 264330616449
Option 3 ID : 264330616450
Option 4 ID : 264330616448
Status : Answered
Chosen Option : 4

Q.11 What is a revenue expenditure?

- Ans
- 1. Money spent on day-to-day government operations
 - 2. Money spent on debt repayment
 - 3. Money spent on purchasing assets
 - 4. Money spent on construction of roads

Question ID : 264330157273
Option 1 ID : 264330616458
Option 2 ID : 264330616457
Option 3 ID : 264330616455
Option 4 ID : 264330616456
Status : Answered
Chosen Option : 4

Q.12 Which Indian musician won the Grammy award for 'A Meeting by The River' with Ry Cooder in 1994?

- Ans
- 1. Ravi Shankar
 - 2. Vishwa Mohan Bhatt
 - 3. Hariprasad Chaurasia
 - 4. Zakir Hussain

Question ID : 264330155471
Option 1 ID : 264330609289
Option 2 ID : 264330609288
Option 3 ID : 264330609290
Option 4 ID : 264330609287
Status : Answered
Chosen Option : 4

Q.13 The holy mountain 'Kailash' is located in which neighbouring country of India?

- Ans
- 1. Pakistan
 - 2. Afghanistan
 - 3. Bangladesh
 - 4. China

Question ID : 264330161562
Option 1 ID : 264330633576
Option 2 ID : 264330633577
Option 3 ID : 264330633578
Option 4 ID : 264330633575
Status : Answered
Chosen Option : 4

Q.14 In which of the following states of India the 'Loo' wind does NOT blow during the summer season?

- Ans
- 1. Punjab
 - 2. Rajasthan
 - 3. Goa
 - 4. Haryana

Question ID : 264330161520
Option 1 ID : 264330633408
Option 2 ID : 264330633407
Option 3 ID : 264330633410
Option 4 ID : 264330633409
Status : Answered
Chosen Option : 3

Q.15 The Wild Life (Protection) Amendment Act, 2022 seeks to implement the Convention on International Trade in Endangered Species of Wild Fauna and Flora (CITES). Which of the following statements is correct about CITES?

1. CITES is an agreement between governments to ensure that international trade in the specimens of wild animals and plants does not threaten the survival of the species.
2. Under CITES, plant and animal specimens are classified into five categories based on the threat to their extinction.
3. The Convention requires countries to regulate the trade of all listed specimens through permits.
4. It also seeks to regulate the possession of live animal specimens.

- Ans
- 1. 1, 2 and 4
 - 2. 1, 3 and 4
 - 3. 2, 3 and 4
 - 4. 1, 2 and 3

Question ID : 264330161413

Option 1 ID : 264330632982

Option 2 ID : 264330632980

Option 3 ID : 264330632981

Option 4 ID : 264330632979

Status : Answered

Chosen Option : 2

Q.16 'My Story' is the autobiography of which female writer?

- Ans
- 1. Amrita Pritam
 - 2. Pratibha Ray
 - 3. Kamala Das
 - 4. Ashapura Devi

Question ID : 264330160964

Option 1 ID : 264330631188

Option 2 ID : 264330631189

Option 3 ID : 264330631187

Option 4 ID : 264330631190

Status : Answered

Chosen Option : 1

Q.17 Which age group of the population are covered under the Deen Dayal Upadhyaya Grameen Kaushalya Yojana (DDU-GKY) scheme of the Government of India?

- Ans
- 1. 25 to 60 years
 - 2. 30 to 60 years
 - 3. 15 to 35 years
 - 4. 14 to 40 years

Question ID : 264330161576

Option 1 ID : 264330633632

Option 2 ID : 264330633631

Option 3 ID : 264330633633

Option 4 ID : 264330633634

Status : Answered

Chosen Option : 3

Q.18 Who was the founder of Naujawan Bharat Sabha?

- Ans
- 1. Chandra Shekhar Azad
 - 2. Ajeet Singh
 - 3. Lala Lajpat Rai
 - 4. Bhagat Singh

Question ID : 264330162332
Option 1 ID : 264330636657
Option 2 ID : 264330636655
Option 3 ID : 264330636656
Option 4 ID : 264330636658
Status : Answered
Chosen Option : 1

Q.19 Which gland gets enlarged in the goitre due to which there is a swelling in the front part of the throat?

- Ans
- 1. Adrenal gland
 - 2. Thyroid gland
 - 3. Pineal gland
 - 4. Pituitary gland

Question ID : 264330161073
Option 1 ID : 264330631623
Option 2 ID : 264330631626
Option 3 ID : 264330631624
Option 4 ID : 264330631625
Status : Answered
Chosen Option : 2

Q.20 In which state is the Bhitari temple situated?

- Ans
- 1. Uttar Pradesh
 - 2. Odisha
 - 3. Jharkhand
 - 4. Bihar

Question ID : 264330160780
Option 1 ID : 264330630453
Option 2 ID : 264330630451
Option 3 ID : 264330630452
Option 4 ID : 264330630454
Status : Answered
Chosen Option : 2

Q.21 Shubman Gill was in the news for creating a record in his sport. What sport does he play?

- Ans
- 1. Chess
 - 2. Cricket
 - 3. Hockey
 - 4. Badminton

Question ID : 264330158354
Option 1 ID : 264330620778
Option 2 ID : 264330620777
Option 3 ID : 264330620776
Option 4 ID : 264330620775
Status : Answered
Chosen Option : 2

Q.22 Which of the following does NOT come under Fundamental Duties?

Ans 1. To develop the scientific temper

2. To pay taxes

3. To promote harmony

4. To respect National Anthem

Question ID : 264330159899

Option 1 ID : 264330626946

Option 2 ID : 264330626943

Option 3 ID : 264330626945

Option 4 ID : 264330626944

Status : Marked For Review

Chosen Option : 1

Q.23 Who among the following was a world famous 'Sitar' player?

Ans 1. Pandit Ravi Shankar

2. Ustad Shafaat Ahmed Khan

3. Rajaratanam Pillai

4. Ali Ahmad Hussain

Question ID : 264330155509

Option 1 ID : 264330609442

Option 2 ID : 264330609439

Option 3 ID : 264330609441

Option 4 ID : 264330609440

Status : Answered

Chosen Option : 1

Q.24 Which of the following institutions bagged the maximum medals at the third edition of Khelo India University Games?

Ans 1. Panjab University

2. University of Kerala

3. Guru Nanak Dev University

4. IIT Bombay

Question ID : 264330161134

Option 1 ID : 264330631870

Option 2 ID : 264330631869

Option 3 ID : 264330631868

Option 4 ID : 264330631867

Status : Answered

Chosen Option : 1

Q.25 In which year did the All-India Muslim League move a resolution demanding 'Independent States' for Muslims in the north-western and eastern areas of the country?

- Ans 1. 1942
 2. 1940
 3. 1939
 4. 1941

Question ID : 264330161740
Option 1 ID : 264330634290
Option 2 ID : 264330634288
Option 3 ID : 264330634287
Option 4 ID : 264330634289
Status : Answered
Chosen Option : 3

Section : English Language and Comprehension

Q.1 Parts of the following sentence have been given as options. Select the option that contains an error.
A soothe voice must convey both confidence and intimacy, qualities which can be attributed to a few key components.

- Ans 1. few key components
 2. A soothe voice
 3. convey both confidence
 4. which can be

Question ID : 264330153615
Option 1 ID : 264330601946
Option 2 ID : 264330601943
Option 3 ID : 264330601944
Option 4 ID : 264330601945
Status : Answered
Chosen Option : 2

Q.2 Select the most appropriate ANTONYM of the given word.
Empathetic

- Ans 1. Lonely
 2. Merciless
 3. Charismatic
 4. Frustrated

Question ID : 264330151915
Option 1 ID : 264330595276
Option 2 ID : 264330595277
Option 3 ID : 264330595275
Option 4 ID : 264330595278
Status : Answered
Chosen Option : 2

Q.3 Select the most appropriate meaning of the underlined idiom.
The police inspector knows the ins and outs of the murder case.

- Ans**
- 1. laws
 - 2. all the witnesses
 - 3. lawyers and judges
 - 4. full details

Question ID : 264330152753
 Option 1 ID : 264330598613
 Option 2 ID : 264330598611
 Option 3 ID : 264330598614
 Option 4 ID : 264330598612
 Status : Answered
 Chosen Option : 4

Q.4 The following sentence has been split into four segments. Identify the segment that contains an error.
He told me / that he goes / to the market / to buy a laptop.

- Ans**
- 1. He told me
 - 2. to buy a laptop
 - 3. to the market
 - 4. that he goes

Question ID : 264330151288
 Option 1 ID : 264330592787
 Option 2 ID : 264330592790
 Option 3 ID : 264330592789
 Option 4 ID : 264330592788
 Status : Answered
 Chosen Option : 4

Q.5 Select the most appropriate option that can substitute the underlined word in the following sentence.
The energetic kitten is playful after having his breakfast.

- Ans**
- 1. its
 - 2. it's
 - 3. it
 - 4. it is

Question ID : 264330152575
 Option 1 ID : 264330597903
 Option 2 ID : 264330597905
 Option 3 ID : 264330597904
 Option 4 ID : 264330597906
 Status : Answered
 Chosen Option : 1

Q.6 The following sentence has been split into four segments. Identify the segment that contains a grammatical error.
It is commonly believed / that Democracy is / the best form / of the government.

- Ans**
- ✓ 1. of the government
 - ✗ 2. It is commonly believed
 - ✗ 3. that Democracy is
 - ✗ 4. the best form

Question ID : 264330153167
Option 1 ID : 264330600230
Option 2 ID : 264330600227
Option 3 ID : 264330600228
Option 4 ID : 264330600229
Status : Answered
Chosen Option : 1

Q.7 Four words of the following sentence have been underlined and given as options.
Select the option that contains a spelling error.
Ozone is a reactiev gas that is not only important in protecting us from harmful ultraviolet radiation but is also a greenhouse gas and, at high smog-level concentrations, harmful to human health and vegetation.

- Ans**
- ✓ 1. reactiev
 - ✗ 2. radiation
 - ✗ 3. concentrations
 - ✗ 4. vegetation

Question ID : 264330151931
Option 1 ID : 264330595339
Option 2 ID : 264330595340
Option 3 ID : 264330595341
Option 4 ID : 264330595342
Status : Answered
Chosen Option : 1

Q.8 Select the most appropriate option that can substitute the underlined segment in the given sentence.
He said that I have finished my work.

- Ans**
- ✓ 1. he had finished his work
 - ✗ 2. he has finished his work
 - ✗ 3. I had finished my work
 - ✗ 4. he was finished his work

Question ID : 264330152707
Option 1 ID : 264330598429
Option 2 ID : 264330598430
Option 3 ID : 264330598428
Option 4 ID : 264330598427
Status : Answered
Chosen Option : 1

Q.9 Parts of the following sentence have been underlined and given as options. Select the option that contains a misspelt word.

A piano teacher described an interesting encounter she had with a young lady who came to inquire about music lessons.

- Ans
- 1. interesting
 - 2. inquire
 - 3. piano
 - 4. encounter

Question ID : 264330151834
 Option 1 ID : 264330594964
 Option 2 ID : 264330594966
 Option 3 ID : 264330594963
 Option 4 ID : 264330594965
 Status : Answered
 Chosen Option : 4

Q.10 Select the most appropriate meaning of the underlined idiom.

The executives were running around in circles, without any success.

- Ans
- 1. Achieving maximum mileage
 - 2. Suffering huge profits and losses
 - 3. Successfully accomplishing the target
 - 4. Putting efforts into something that does not give a worthwhile result

Question ID : 264330153143
 Option 1 ID : 264330600133
 Option 2 ID : 264330600134
 Option 3 ID : 264330600132
 Option 4 ID : 264330600131
 Status : Answered
 Chosen Option : 4

Q.11 Select the most appropriate option that can substitute the underlined segment in the given sentence. If there is no need to substitute it, select 'No substitution required'.
 Many great people born in that small village.

- Ans
- 1. was born
 - 2. No substitution required
 - 3. is born
 - 4. were born

Question ID : 264330152729
 Option 1 ID : 264330598516
 Option 2 ID : 264330598518
 Option 3 ID : 264330598515
 Option 4 ID : 264330598517
 Status : Answered
 Chosen Option : 4

Q.12 The given sentence contains an error. Select the option that correctly rectifies the error.

He was carefulest while stealing the crown jewels.

- Ans
- 1. He was more careful while stealing the crown jewels.
 - 2. He was most carefuller while stealing the crown jewels.
 - 3. He was carefuller while stealing the crown jewels.
 - 4. He was most careful while stealing the crown jewels.

Question ID : 264330152610
Option 1 ID : 264330598044
Option 2 ID : 264330598046
Option 3 ID : 264330598043
Option 4 ID : 264330598045
Status : Answered
Chosen Option : 4

Q.13 Select the most appropriate synonym of the given word.

Hesitate

- Ans
- 1. Blabber
 - 2. Recoil
 - 3. Conceal
 - 4. Falter

Question ID : 264330151878
Option 1 ID : 264330595133
Option 2 ID : 264330595131
Option 3 ID : 264330595132
Option 4 ID : 264330595134
Status : Answered
Chosen Option : 2

Q.14 The sentence given below has spelling errors. Select the sentence without spelling errors.

We can also contribute to presarvation of water bodies by not dumping our garbage in them.

- Ans
- 1. We can also contribute to presarvation of water bodies by not dumpeing our garbage in them.
 - 2. We can also contribute to preservation of water bodies by not dumping our garbage in them.
 - 3. We can also contribut to presarvation of water bodies by not dumping our garbage in them.
 - 4. We can also contribute to presarvation of water bodies by not dumping our garbag in them.

Question ID : 264330151840
Option 1 ID : 264330594989
Option 2 ID : 264330594988
Option 3 ID : 264330594987
Option 4 ID : 264330594990
Status : Answered
Chosen Option : 2

Q.15 Select the most appropriate meaning of the given idiom.

Call it a day

- Ans 1. To have the greatest day ever
 2. To stop working
 3. To be very straightforward
 4. To refer to something as something else

Question ID : 264330153014
Option 1 ID : 264330599627
Option 2 ID : 264330599628
Option 3 ID : 264330599630
Option 4 ID : 264330599629
Status : Answered
Chosen Option : 2

Q.16 Select the most appropriate ANTONYM of the given word.
Stern

- Ans 1. Stable
 2. Sincere
 3. Profound
 4. Lenient

Question ID : 264330152678
Option 1 ID : 264330598318
Option 2 ID : 264330598316
Option 3 ID : 264330598315
Option 4 ID : 264330598317
Status : Answered
Chosen Option : 4

Q.17 Select the most appropriate option that can substitute the underlined segment in the given sentence.

His older brothers were quite willing that he should went to sea.

- Ans 1. had go to
 2. have gone in
 3. gone to
 4. go to

Question ID : 264330153486
Option 1 ID : 264330601461
Option 2 ID : 264330601462
Option 3 ID : 264330601460
Option 4 ID : 264330601459
Status : Answered
Chosen Option : 4

Q.18 Select the most appropriate option that can substitute the underlined segment in the given sentence. If there is no need to substitute it, select 'No improvement required'.
It is true that learning English is essential for professionals to survived the national and international competitions.

- Ans
- 1. to be survive
 - 2. having to survive
 - 3. No improvement required
 - 4. for surviving

Question ID : 264330153536
Option 1 ID : 264330601647
Option 2 ID : 264330601649
Option 3 ID : 264330601650
Option 4 ID : 264330601648
Status : Answered
Chosen Option : 4

Q.19 Select the most appropriate option to fill in the blank.
The tigress that was killed by the villagers was not only a man-eater, _____ a mother.

- Ans
- 1. but
 - 2. but also
 - 3. and
 - 4. but often

Question ID : 264330152635
Option 1 ID : 264330598145
Option 2 ID : 264330598143
Option 3 ID : 264330598144
Option 4 ID : 264330598146
Status : Answered
Chosen Option : 2

Q.20 Select the most appropriate meaning of the given idiom.
Spill the beans

- Ans
- 1. Excellent health
 - 2. Behave or speak in a rash manner
 - 3. Things always get worse
 - 4. To reveal a secret information unintentionally

Question ID : 264330153281
Option 1 ID : 264330600680
Option 2 ID : 264330600681
Option 3 ID : 264330600682
Option 4 ID : 264330600679
Status : Answered
Chosen Option : 4

Comprehension:

In the following passage, some words have been deleted. Read the passage carefully and select the most appropriate option to fill in each blank.

Photosynthesis is the _____(1) used by plants, algae and some bacteria to turn sunlight into energy. The process chemically _____(2) carbon dioxide and water into food and oxygen. The chemical reaction often _____(3) on a pigment called chlorophyll, which gives plants their green colour. Photosynthesis is also the _____(4) our planet is blanketed in an oxygen-rich atmosphere. Plants absorb carbon dioxide from the _____(5) air and release water and oxygen via microscopic pores on their leaves called stomata.

SubQuestion No : 21

Q.21 Select the most appropriate option to fill in blank number 1.

Ans ✓ 1. process

✗ 2. guess

✗ 3. chaos

✗ 4. area

Question ID : 264330153499

Option 1 ID : 264330601507

Option 2 ID : 264330601509

Option 3 ID : 264330601510

Option 4 ID : 264330601508

Status : Answered

Chosen Option : 1

Comprehension:

In the following passage, some words have been deleted. Read the passage carefully and select the most appropriate option to fill in each blank.

Photosynthesis is the _____(1) used by plants, algae and some bacteria to turn sunlight into energy. The process chemically _____(2) carbon dioxide and water into food and oxygen. The chemical reaction often _____(3) on a pigment called chlorophyll, which gives plants their green colour. Photosynthesis is also the _____(4) our planet is blanketed in an oxygen-rich atmosphere. Plants absorb carbon dioxide from the _____(5) air and release water and oxygen via microscopic pores on their leaves called stomata.

SubQuestion No : 22

Q.22 Select the most appropriate option to fill in blank number 2.

Ans ✓ 1. converts

✗ 2. exceeds

✗ 3. crates

✗ 4. bows

Question ID : 264330153500

Option 1 ID : 264330601514

Option 2 ID : 264330601512

Option 3 ID : 264330601513

Option 4 ID : 264330601511

Status : Answered

Chosen Option : 1

Comprehension:

In the following passage, some words have been deleted. Read the passage carefully and select the most appropriate option to fill in each blank.

Photosynthesis is the _____(1) used by plants, algae and some bacteria to turn sunlight into energy. The process chemically _____(2) carbon dioxide and water into food and oxygen. The chemical reaction often _____(3) on a pigment called chlorophyll, which gives plants their green colour. Photosynthesis is also the _____(4) our planet is blanketed in an oxygen-rich atmosphere. Plants absorb carbon dioxide from the _____(5) air and release water and oxygen via microscopic pores on their leaves called stomata.

SubQuestion No : 23

Q.23 Select the most appropriate option to fill in blank number 3.

- Ans 1. relies
 2. creates
 3. hopes
 4. wants

Question ID : 264330153501
 Option 1 ID : 264330601517
 Option 2 ID : 264330601518
 Option 3 ID : 264330601515
 Option 4 ID : 264330601516
 Status : Answered
 Chosen Option : 1

Comprehension:

In the following passage, some words have been deleted. Read the passage carefully and select the most appropriate option to fill in each blank.

Photosynthesis is the _____(1) used by plants, algae and some bacteria to turn sunlight into energy. The process chemically _____(2) carbon dioxide and water into food and oxygen. The chemical reaction often _____(3) on a pigment called chlorophyll, which gives plants their green colour. Photosynthesis is also the _____(4) our planet is blanketed in an oxygen-rich atmosphere. Plants absorb carbon dioxide from the _____(5) air and release water and oxygen via microscopic pores on their leaves called stomata.

SubQuestion No : 24

Q.24 Select the most appropriate option to fill in blank number 4.

- Ans 1. goal
 2. sense
 3. reason
 4. occasion

Question ID : 264330153502
 Option 1 ID : 264330601522
 Option 2 ID : 264330601519
 Option 3 ID : 264330601520
 Option 4 ID : 264330601521
 Status : Answered
 Chosen Option : 3

Comprehension:

In the following passage, some words have been deleted. Read the passage carefully and select the most appropriate option to fill in each blank.

Photosynthesis is the _____(1) used by plants, algae and some bacteria to turn sunlight into energy. The process chemically _____(2) carbon dioxide and water into food and oxygen. The chemical reaction often _____(3) on a pigment called chlorophyll, which gives plants their green colour. Photosynthesis is also the _____(4) our planet is blanketed in an oxygen-rich atmosphere. Plants absorb carbon dioxide from the _____(5) air and release water and oxygen via microscopic pores on their leaves called stomata.

SubQuestion No : 25

Q.25 Select the most appropriate option to fill in blank number 5.

- Ans
- 1. afar
 - 2. distant
 - 3. surrounding
 - 4. close

Question ID : 264330153503

Option 1 ID : 264330601525

Option 2 ID : 264330601523

Option 3 ID : 264330601524

Option 4 ID : 264330601526

Status : Answered

Chosen Option : 3

ixamBee

Prepare 50% Faster

Multi Tasking Non Technical Staff and Havaladar CBIC and CBN Examination 2023

Roll Number	
Candidate Name	
Venue Name	iON Digital Zone iDZ Chandigarh
Exam Date	04/09/2023
Exam Time	9:00 AM - 11:00 AM
Subject	MTS Non Tech Havaladar CBIC and CBN Examination 2023

Section : Numerical and Mathematical Ability

Q.1 Find the area of an equilateral triangle, each of whose sides measures 12 cm.

- Ans
- ✓ 1. $36\sqrt{3} \text{ cm}^2$
 - ✗ 2. $3\sqrt{3} \text{ cm}^2$
 - ✗ 3. $\frac{36}{\sqrt{3}} \text{ cm}^2$
 - ✗ 4. $\frac{72}{\sqrt{3}} \text{ cm}^2$

Question ID : 264330153893
Option 1 ID : 264330603037
Option 2 ID : 264330603035
Option 3 ID : 264330603038
Option 4 ID : 264330603036
Status : Answered
Chosen Option : 1

Q.2 The radius and the height of a right circular cone are in the ratio 3 : 4. If its volume is 301.44 m^3 , find the slant height (use $\pi = 3.14$).

- Ans
- ✗ 1. 5 cm
 - ✗ 2. 20 cm
 - ✓ 3. 10 cm
 - ✗ 4. 15 cm

Question ID : 264330156370
Option 1 ID : 264330612882
Option 2 ID : 264330612879
Option 3 ID : 264330612881
Option 4 ID : 264330612880
Status : Answered
Chosen Option : 3

Q.3 At what rate of interest per annum, compounded annually, will an amount of ₹8,000 yield a compound interest of ₹904.2 in 2 years?

- Ans**
- 1. 6%
 - 2. 8%
 - 3. 10%
 - 4. 5.5%

Question ID : 264330156346
Option 1 ID : 264330612783
Option 2 ID : 264330612784
Option 3 ID : 264330612786
Option 4 ID : 264330612785
Status : Answered
Chosen Option : 4

Q.4 The average of the first 10 prime number is:

- Ans**
- 1. 12.9
 - 2. 9.7
 - 3. 11.9
 - 4. 13.4

Question ID : 264330154075
Option 1 ID : 264330603765
Option 2 ID : 264330603764
Option 3 ID : 264330603763
Option 4 ID : 264330603766
Status : Answered
Chosen Option : 1

Q.5 A manufacturer earns a profit of 10% on selling his products to a wholesale dealer. The wholesale dealer earns a profit of 15% by selling it to a retailer. The retailer, in turn, earns a profit of 25% from the customer. What is the actual cost of production of an article for which the customer pays ₹12,650?

- Ans**
- 1. ₹8,000
 - 2. ₹8,500
 - 3. ₹9,000
 - 4. ₹7,000

Question ID : 264330154123
Option 1 ID : 264330603956
Option 2 ID : 264330603957
Option 3 ID : 264330603958
Option 4 ID : 264330603955
Status : Answered
Chosen Option : 1

Q.6 Number of eggs produced by five farms:

Year	Farm				
	L	M	N	O	P
2019	825	925	670	740	480
2020	928	768	781	530	864
2021	765	635	922	515	940
2022	832	526	623	618	745

What is the respective ratio of the dozens of eggs produced by farm M to farm P in the year 2020?

- Ans**
- ✓ 1. 8 : 9
 - ✗ 2. 9 : 8
 - ✗ 3. 7 : 8
 - ✗ 4. 4 : 3

Question ID : 264330155761
 Option 1 ID : 264330610447
 Option 2 ID : 264330610450
 Option 3 ID : 264330610448
 Option 4 ID : 264330610449
 Status : Answered
 Chosen Option : 1

Q.7 The average of the first 69 natural numbers is:

- Ans**
- ✗ 1. 34
 - ✓ 2. 35
 - ✗ 3. 33
 - ✗ 4. 36

Question ID : 264330156209
 Option 1 ID : 264330612236
 Option 2 ID : 264330612237
 Option 3 ID : 264330612235
 Option 4 ID : 264330612238
 Status : Answered
 Chosen Option : 2

Q.8 By selling a TV set for ₹16,800, a salesman gains a profit of 20%. If the production cost is increased by 20%, find the new selling price of the set so as to gain 20%.

- Ans**
- ✗ 1. ₹18,160
 - ✗ 2. ₹18,480
 - ✓ 3. ₹20,160
 - ✗ 4. ₹20,480

Question ID : 264330155999
 Option 1 ID : 264330611395
 Option 2 ID : 264330611397
 Option 3 ID : 264330611398
 Option 4 ID : 264330611396
 Status : Answered
 Chosen Option : 3

Q.9 A mixture contains milk and water in the ratio 9 : 7. If it contains 4 litres more milk than water, then find the quantity of milk (in litres) in the mixture.

- Ans**
- 1. 18
 - 2. 15
 - 3. 21
 - 4. 14

Question ID : 264330156051
Option 1 ID : 264330611603
Option 2 ID : 264330611605
Option 3 ID : 264330611606
Option 4 ID : 264330611604
Status : Answered
Chosen Option : 1

Q.10 Juli and Rahul can simultaneously finish the work of painting a room in 12 days. If Juli alone can paint the room in 20 days, in how many days can Rahul alone complete the same work of painting the room?

- Ans**
- 1. 30
 - 2. 25
 - 3. 40
 - 4. 35

Question ID : 264330155719
Option 1 ID : 264330610280
Option 2 ID : 264330610279
Option 3 ID : 264330610282
Option 4 ID : 264330610281
Status : Answered
Chosen Option : 1

Q.11 The mean proportion of $(3+2\sqrt{2})^2$ and $(3-2\sqrt{2})^2$ is:

- Ans**
- 1. $3 + 2\sqrt{2}$
 - 2. 5
 - 3. $2\sqrt{2}$
 - 4. 1

Question ID : 264330154052
Option 1 ID : 264330603674
Option 2 ID : 264330603671
Option 3 ID : 264330603672
Option 4 ID : 264330603673
Status : Answered
Chosen Option : 4

Q.12 Three measuring tapes are 64 cm, 72 cm and 96 cm, respectively. What is the least length that can be measured by any of the tapes exactly (in cm)?

- Ans**
- 1. 575
 - 2. 570
 - 3. 576
 - 4. 525

Question ID : **264330155984**
Option 1 ID : **264330611337**
Option 2 ID : **264330611335**
Option 3 ID : **264330611336**
Option 4 ID : **264330611338**
Status : **Answered**
Chosen Option : **3**

Q.13 A work can be completed by P and Q working separately in 12 and 18 days, respectively. But they work on alternate days beginning with P. How many days will it take to complete the work?

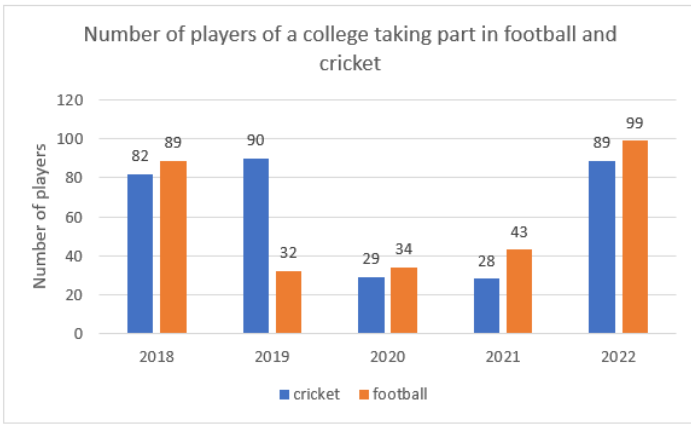
- Ans**
- 1. $14\frac{1}{12}$
 - 2. 15
 - 3. $14\frac{1}{3}$
 - 4. $14\frac{1}{4}$

Question ID : **264330154059**
Option 1 ID : **264330603702**
Option 2 ID : **264330603700**
Option 3 ID : **264330603701**
Option 4 ID : **264330603699**
Status : **Answered**
Chosen Option : **3**

ixamBee

Prepare 50% Faster

Q.14 The bar graph shows the number of players of a college taking part in two games for five years:



What is the total number of players playing cricket and football in 2019 and 2020?

- Ans
- 1. 190
 - 2. 195
 - 3. 185
 - 4. 180

Question ID : 264330154100

Option 1 ID : 264330603864

Option 2 ID : 264330603865

Option 3 ID : 264330603863

Option 4 ID : 264330603866

Status : Answered

Chosen Option : 3

Q.15 P and Q start from point A to point B, at the same time at speeds of 32 km/h and 40 km/h, respectively. If in covering the journey P takes 15 minutes longer than Q, the total distance AB of the journey is:

- Ans
- 1. 36 km
 - 2. 32 km
 - 3. 40 km
 - 4. 44 km

Question ID : 264330156366

Option 1 ID : 264330612865

Option 2 ID : 264330612866

Option 3 ID : 264330612864

Option 4 ID : 264330612863

Status : Answered

Chosen Option : 3

Q.16 Simplify

$$108 \div 36 \times 4 + 2.5 \times 4 \div 0.5 - 10$$

- Ans
- 1. 10
 - 2. 22
 - 3. 21
 - 4. 20

Question ID : 264330156049
Option 1 ID : 264330611595
Option 2 ID : 264330611598
Option 3 ID : 264330611597
Option 4 ID : 264330611596
Status : Answered
Chosen Option : 2

Q.17 A car dealer borrows ₹20,000 from a bank for a period of 2 years at a simple interest rate of 8% per annum. If he repays the loan in full at the end of the 2-year period, how much will he have to pay?

- Ans
- 1. ₹3,600
 - 2. ₹23,600
 - 3. ₹23,200
 - 4. ₹3,200

Question ID : 264330156269
Option 1 ID : 264330612478
Option 2 ID : 264330612476
Option 3 ID : 264330612475
Option 4 ID : 264330612477
Status : Answered
Chosen Option : 3

Q.18 A lady invests ₹27,600 in three shares in the ratio 3 : 4 : 5 which pay dividends of 20%, 15% and 5% on her investment for that year, respectively. What is the total dividend?

- Ans
- 1. ₹3,852
 - 2. ₹3,335
 - 3. ₹3,125
 - 4. ₹2,535

Question ID : 264330154087
Option 1 ID : 264330603813
Option 2 ID : 264330603814
Option 3 ID : 264330603812
Option 4 ID : 264330603811
Status : Answered
Chosen Option : 2

Q.19 Two trains of length 200 m and 325 m long are running on parallel rail tracks at speeds of 78 km/h and 60 km/h, respectively. In how much time (in seconds) the faster train cross the slower one if they are running in the same direction?

- Ans** 1. 105
 2. 100
 3. 115
 4. 110

Question ID : 264330156233
 Option 1 ID : 264330612332
 Option 2 ID : 264330612331
 Option 3 ID : 264330612334
 Option 4 ID : 264330612333
 Status : Answered
 Chosen Option : 1

Q.20 A college student spends 75% of his pocket money. When the pocket money increased by 20%, the expenditure also increased by 15%. What is the increase in the savings?

- Ans** 1. 25%
 2. 55%
 3. 35%
 4. 45%

Question ID : 264330154044
 Option 1 ID : 264330603640
 Option 2 ID : 264330603642
 Option 3 ID : 264330603641
 Option 4 ID : 264330603639
 Status : Answered
 Chosen Option : 3

Section : Reasoning Ability and Problem Solving

Q.1 What should come in place of '?' in the given series?

4 22 112 562 2812 ?

- Ans** 1. 13423
 2. 13948
 3. 14062
 4. 13684

Question ID : 264330151464
 Option 1 ID : 264330593483
 Option 2 ID : 264330593485
 Option 3 ID : 264330593486
 Option 4 ID : 264330593484
 Status : Answered
 Chosen Option : 3

Q.2 What should come in place of '?' in the given series?

16 110 ? 5374 37616 263310 1843168

- Ans
- 1. 792
 - 2. 800
 - 3. 804
 - 4. 768

Question ID : 264330151481
Option 1 ID : 264330593552
Option 2 ID : 264330593553
Option 3 ID : 264330593554
Option 4 ID : 264330593551
Status : Answered
Chosen Option : 4

Q.3 Read the given statements and conclusions carefully. You have to take the given statements to be true even if they seem to be at variance from commonly known facts. You have to decide which conclusion/s logically follow/s from the given statements.

Statements: All ropes are forks. Some forks are spoons. Some spoons are chopsticks.

Conclusion I: Some ropes are spoons.

Conclusion II: All forks are chopsticks.

- Ans
- 1. Only conclusion (II) is follow.
 - 2. Only conclusion (I) is follow.
 - 3. Both conclusions (I) and (II) are follow.
 - 4. Neither conclusion (I) nor (II) is follow.

Question ID : 264330155927
Option 1 ID : 264330611112
Option 2 ID : 264330611111
Option 3 ID : 264330611114
Option 4 ID : 264330611113
Status : Answered
Chosen Option : 4

Q.4 In the following number-pairs, the second number is obtained by applying certain mathematical operations to the first number. Select the set in which the numbers are related in the same way as are the numbers of the following sets.
(NOTE: Operations should be performed on the whole numbers, without breaking down the numbers into its constituent digits. E.g. 13 – Operations on 13 such as adding /deleting /multiplying etc. to 13 can be performed. Breaking down 13 into 1 and 3 and then performing mathematical operations on 1 and 3 is not allowed)

8 : 50
4 : 30

- Ans
- 1. 20 : 40
 - 2. 6 : 20
 - 3. 7 : 45
 - 4. 5 : 8

Question ID : 264330154646
Option 1 ID : 264330606050
Option 2 ID : 264330606048
Option 3 ID : 264330606047
Option 4 ID : 264330606049
Status : Marked For Review
Chosen Option : 2

Q.5 What will come in the place of '?' in the following equation, if '+' and '-' are interchanged and '×' and '÷' are interchanged?
 $729 \times 81 - 96 \div 13 + 8 = ?$

- Ans**
- ✓ 1. 1
 - ✗ 2. 11
 - ✗ 3. 8
 - ✗ 4. 9

Question ID : 264330155680
 Option 1 ID : 264330610124
 Option 2 ID : 264330610123
 Option 3 ID : 264330610126
 Option 4 ID : 264330610125
 Status : Answered
 Chosen Option : 1

Q.6 Which figure should replace the question mark (?) if the following figure series were to be continued?

T	T △	△	?
P □	P P	T P	?
△ △	O □ T O		

Ans

✗ 1.

O	P	T
		△

✗ 2.

□	P	△
		T

✗ 3.

	T	O
P		
		△

✓ 4.

□	P	T
		△

Question ID : 264330154758
 Option 1 ID : 264330606497
 Option 2 ID : 264330606495
 Option 3 ID : 264330606496
 Option 4 ID : 264330606498
 Status : Answered
 Chosen Option : 4

Q.7 In a certain code language, 'COIN' is coded as '9735' and 'ONCE' is coded as '3459'. What is the code for 'E' in the given code language?

- Ans**
- 1. 5
 - 2. 3
 - 3. 4
 - 4. 9

Question ID : 264330151693
Option 1 ID : 264330594402
Option 2 ID : 264330594400
Option 3 ID : 264330594399
Option 4 ID : 264330594401
Status : Answered
Chosen Option : 3

Q.8 Read the given statements and conclusions carefully. You have to take the given statements to be true even if they seem to be at variance from commonly known facts. You have to decide which conclusion/s logically follow/s from the given statements.

Statements: All computers are laptops. Some laptops are heavy. All heavy is wood.

Conclusion I: All laptops are computers.

Conclusion II: Some heavy are laptops.

- Ans**
- 1. Neither conclusion (I) nor (II) is follow.
 - 2. Only conclusion (I) is follow.
 - 3. Both conclusions (I) and (II) are follow.
 - 4. Only conclusion (II) is follow.

Question ID : 264330155908
Option 1 ID : 264330611037
Option 2 ID : 264330611035
Option 3 ID : 264330611038
Option 4 ID : 264330611036
Status : Answered
Chosen Option : 4

Q.9 Six people, Karan, Dilip, Rahul, Prabhat, Alok and Sandeep are sitting in a straight line, facing north. Karan sits 2nd from the left end. Dilip sits 3rd to the right of Karan. Rahul sits 2nd to the left of Dilip. Prabhat sits 3rd to the right of Rahul. Sandeep sits 2nd to the left of Prabhat. Who sits 2nd to the right of Karan?

- Ans**
- 1. Rahul
 - 2. Sandeep
 - 3. Prabhat
 - 4. Alok

Question ID : 264330161848
Option 1 ID : 264330634720
Option 2 ID : 264330634721
Option 3 ID : 264330634722
Option 4 ID : 264330634719
Status : Answered
Chosen Option : 2

Q.10 What should come in place of ? in the given series based on the English alphabetical order?

MAG, QXE, UUC, YRA, ?

- Ans
- 1. CNX
 - 2. COY
 - 3. DNY
 - 4. DMX

Question ID : 264330155806

Option 1 ID : 264330610630

Option 2 ID : 264330610627

Option 3 ID : 264330610629

Option 4 ID : 264330610628

Status : Answered

Chosen Option : 2

Q.11 In the following number-pairs, the second number is obtained by applying certain mathematical operations to the first number. Select the set in which the numbers are related in the same way as are the numbers of the following sets.

(NOTE: Operations should be performed on the whole numbers, without breaking down the numbers into its constituent digits. E.g. 13 – Operations on 13 such as adding / subtracting / multiplying etc. to 13 can be performed. Breaking down 13 into 1 and 3 and then performing mathematical operations on 1 and 3 is not allowed)

5, 128

9, 732

- Ans
- 1. 5, 50
 - 2. 3, 30
 - 3. 4, 46
 - 4. 2, 13

Question ID : 264330151620

Option 1 ID : 264330594110

Option 2 ID : 264330594108

Option 3 ID : 264330594109

Option 4 ID : 264330594107

Status : Answered

Chosen Option : 2

Q.12 What should come in place of '?' in the given series?

5 15 35 75 155 ?

- Ans
- 1. 315
 - 2. 305
 - 3. 325
 - 4. 335

Question ID : 264330151456

Option 1 ID : 264330593452

Option 2 ID : 264330593451

Option 3 ID : 264330593453

Option 4 ID : 264330593454

Status : Answered

Chosen Option : 1

Q.13 Select the correct mirror image of the given figure when the mirror is placed at MN as shown below.



- Ans
- 1. $\bar{y} R 4 6 h K a$
 - 2. $\bar{a} K h 6 R y$
 - 3. $\bar{a} K h 6 R y$
 - 4. $\bar{y} R 4 6 h K a$

Question ID : 264330151528

Option 1 ID : 264330593739

Option 2 ID : 264330593741

Option 3 ID : 264330593740

Option 4 ID : 264330593742

Status : Answered

Chosen Option : 3

Q.14 What will come in the place of the question mark (?) in the following equation, if '+' and '-' are interchanged and 'x' and '÷' are interchanged?

$$39 + 5 + 8 - 99 \times 9 = ?$$

- Ans
- 1. 168
 - 2. 198
 - 3. 158
 - 4. 178

Question ID : 264330154614

Option 1 ID : 264330605920

Option 2 ID : 264330605922

Option 3 ID : 264330605919

Option 4 ID : 264330605921

Status : Answered

Chosen Option : 2

Q.15 What should come in place of the question mark (?) in the given series based on the English alphabetical order?

EMT, ILX, MKB, QJF, ?

- Ans
- 1. UHL
 - 2. VJL
 - 3. UIJ
 - 4. VHK

Question ID : 264330156300

Option 1 ID : 264330612599

Option 2 ID : 264330612600

Option 3 ID : 264330612602

Option 4 ID : 264330612601

Status : Answered

Chosen Option : 3

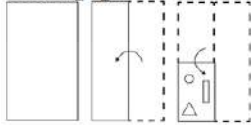
Q.16 What should come in place of ? in the given series based on the English alphabetical order?

NBE, JXA, FTW, BPS, ?

- Ans
- ✗ 1. XMP
 - ✗ 2. YMN
 - ✓ 3. XLO
 - ✗ 4. YNP

Question ID : 264330155771
Option 1 ID : 264330610490
Option 2 ID : 264330610488
Option 3 ID : 264330610489
Option 4 ID : 264330610487
Status : Answered
Chosen Option : 3

Q.17 The sequence of folding a piece of paper and the manner in which the folded paper is cut is shown in the following figures. How would this paper look when unfolded?



Ans

- ✓ 1.
- ✗ 2.
- ✗ 3.
- ✗ 4.

Question ID : 264330155607
Option 1 ID : 264330609831
Option 2 ID : 264330609834
Option 3 ID : 264330609832
Option 4 ID : 264330609833
Status : Answered
Chosen Option : 1

Q.18 In a certain code language, 'BLANCH' is coded as '36' and 'ARAB' is coded as '24'. What is the code for 'CORRECT' in the given code language?

- Ans**
- 1. 41
 - 2. 39
 - 3. 42
 - 4. 40

Question ID : **264330155825**
Option 1 ID : **264330610704**
Option 2 ID : **264330610706**
Option 3 ID : **264330610703**
Option 4 ID : **264330610705**
Status : **Answered**
Chosen Option : **3**

Q.19 DKJE is related to IPOJ in a certain way based on the English alphabetical order. In the same way, GTSM is related to LYXR. To which of the following is RBNF related to, following the same logic?

- Ans**
- 1. WGSK
 - 2. XERJ
 - 3. WEQK
 - 4. VGQI

Question ID : **264330151656**
Option 1 ID : **264330594253**
Option 2 ID : **264330594254**
Option 3 ID : **264330594251**
Option 4 ID : **264330594252**
Status : **Answered**
Chosen Option : **1**

Q.20 The position of how many letters will remain unchanged if each of the letter in the word 'BACHELOR' is arranged in alphabetical order?

- Ans**
- 1. One
 - 2. Five
 - 3. Four
 - 4. Two

Question ID : **264330154324**
Option 1 ID : **264330604759**
Option 2 ID : **264330604761**
Option 3 ID : **264330604760**
Option 4 ID : **264330604762**
Status : **Answered**
Chosen Option : **3**

Section : **General Awareness**

Q.1 The Padma Shri awardee Guru K Kalyanasundaram Pillai, the man who is keeping an ancient tradition alive, was awarded the Padma Shri 2023 for his contribution to the field of _____.

- Ans
- 1. Kuchipudi
 - 2. Kathakali
 - 3. Bharatanatyam
 - 4. Mohiniyattam

Question ID : 264330160805
Option 1 ID : 264330630551
Option 2 ID : 264330630554
Option 3 ID : 264330630553
Option 4 ID : 264330630552
Status : Answered
Chosen Option : 3

Q.2 Who appoints the State Election Commissioner?

- Ans
- 1. Governor
 - 2. Speaker
 - 3. Chief Minister
 - 4. Advocate General

Question ID : 264330159924
Option 1 ID : 264330627043
Option 2 ID : 264330627045
Option 3 ID : 264330627044
Option 4 ID : 264330627046
Status : Answered
Chosen Option : 1

Q.3 In which river has the National Waterways-2 (NW-2) been developed in India?

- Ans
- 1. Brahmaputra
 - 2. Krishna
 - 3. Ganga
 - 4. Narmada

Question ID : 264330161512
Option 1 ID : 264330633377
Option 2 ID : 264330633376
Option 3 ID : 264330633378
Option 4 ID : 264330633375
Status : Answered
Chosen Option : 1

Q.4 In India, Micro Finance Institutions primarily target which segment of the population?

- Ans
- 1. Non-resident Indians (NRIs)
 - 2. Large corporations
 - 3. Low-income individuals and small businesses
 - 4. High-income individuals

Question ID : 264330157287
Option 1 ID : 264330616514
Option 2 ID : 264330616512
Option 3 ID : 264330616513
Option 4 ID : 264330616511
Status : Answered
Chosen Option : 3

Q.5 What is the name of the scheme launched by Himachal Pradesh government for dairy farmers?

- Ans
- 1. Dhughd Dhan
 - 2. Pashu Poshan
 - 3. Dhoodh aur Dhan
 - 4. Sanjeevani

Question ID : 264330158327
Option 1 ID : 264330620669
Option 2 ID : 264330620667
Option 3 ID : 264330620670
Option 4 ID : 264330620668
Status : Answered
Chosen Option : 3

Q.6 Which of the following States will host the 37th National Games?

- Ans
- 1. Odisha
 - 2. Andhra Pradesh
 - 3. Goa
 - 4. Karnataka

Question ID : 264330161150
Option 1 ID : 264330631934
Option 2 ID : 264330631932
Option 3 ID : 264330631933
Option 4 ID : 264330631931
Status : Answered
Chosen Option : 2

Q.7 Kalidas Samman is a prestigious arts award presented annually by the government of _____.

- Ans
- 1. Madhya Pradesh
 - 2. Rajasthan
 - 3. Kerala
 - 4. Karnataka

Question ID : 264330161911
Option 1 ID : 264330634973
Option 2 ID : 264330634974
Option 3 ID : 264330634971
Option 4 ID : 264330634972
Status : Answered
Chosen Option : 1

Q.8 How many countries will participate in ICC 2023 ODI Cricket World Cup?

Ans 1. 12

2. 10

3. 6

4. 8

Question ID : 264330158226

Option 1 ID : 264330620266

Option 2 ID : 264330620265

Option 3 ID : 264330620263

Option 4 ID : 264330620264

Status : Answered

Chosen Option : 2

Q.9 Whose autobiography is titled 'Born Again on the Mountain: a story of losing everything and finding it back'?

Ans 1. Bachendri Pal

2. Dicky Dolma

3. Santosh Yadav

4. Arunima Sinha

Question ID : 264330155451

Option 1 ID : 264330609207

Option 2 ID : 264330609209

Option 3 ID : 264330609210

Option 4 ID : 264330609208

Status : Answered

Chosen Option : 4

Q.10 Which of the following is NOT a characteristic of money?

Ans 1. Portability

2. Perishability

3. Divisibility

4. Durability

Question ID : 264330157303

Option 1 ID : 264330616576

Option 2 ID : 264330616578

Option 3 ID : 264330616577

Option 4 ID : 264330616575

Status : Answered

Chosen Option : 2

Q.11 Among the given options, which one causes an echo?

Ans 1. When sound is reflected

2. When sound waves travel through a solid medium

3. When sound waves travel through a liquid medium

4. When sound waves travel through a vacuum

Question ID : 264330157786

Option 1 ID : 264330618506

Option 2 ID : 264330618505

Option 3 ID : 264330618504

Option 4 ID : 264330618503

Status : Answered

Chosen Option : 1

Q.12 _____ has two traditions: one is the sankeertana (which is the devotional aspect) and the other is the raasa.

- Ans
- 1. Odissi
 - 2. Sattriya
 - 3. Manipuri dance
 - 4. Chhau

Question ID : 264330160791
Option 1 ID : 264330630495
Option 2 ID : 264330630496
Option 3 ID : 264330630498
Option 4 ID : 264330630497
Status : Not Answered
Chosen Option : --

Q.13 Which of the following lakes is a saltwater lake ?

- Ans
- 1. Superior
 - 2. Chilika
 - 3. Malawi
 - 4. Titicaca

Question ID : 264330161325
Option 1 ID : 264330632628
Option 2 ID : 264330632627
Option 3 ID : 264330632629
Option 4 ID : 264330632630
Status : Answered
Chosen Option : 2

Q.14 'Wings of Fire' is an autobiography of whom?

- Ans
- 1. Ratan Tata
 - 2. Indira Gandhi
 - 3. Subhash Chandra Bose
 - 4. APJ Abdul Kalam

Question ID : 264330155491
Option 1 ID : 264330609370
Option 2 ID : 264330609369
Option 3 ID : 264330609368
Option 4 ID : 264330609367
Status : Answered
Chosen Option : 4

Q.15 The _____ of the Indian Constitution defines the Fundamental Duties of Indian Citizens.

- Ans
- 1. Article 51A
 - 2. Article 41B
 - 3. Article 49C
 - 4. Article 21A

Question ID : 264330162245
Option 1 ID : 264330636310
Option 2 ID : 264330636308
Option 3 ID : 264330636309
Option 4 ID : 264330636307
Status : Answered
Chosen Option : 1

Q.16 Dr. Bhupendra Kumar Hazarika won the Bharat Ratna award in the field of _____ in 2019.

- Ans
- 1. Literature
 - 2. Music
 - 3. Games
 - 4. Science

Question ID : 264330155506
Option 1 ID : 264330609428
Option 2 ID : 264330609429
Option 3 ID : 264330609430
Option 4 ID : 264330609427
Status : Answered
Chosen Option : 1

Q.17 What type of vegetation is represented by Sundarbans, the world's largest delta located in the Bay of Bengal?

- Ans
- 1. Tropical Thorn Forests
 - 2. Montane Forests
 - 3. Mangrove Forests
 - 4. Semi Evergreen Forests

Question ID : 264330160994
Option 1 ID : 264330631310
Option 2 ID : 264330631309
Option 3 ID : 264330631308
Option 4 ID : 264330631307
Status : Answered
Chosen Option : 3

Q.18 The Mumbai High region in Arabian Sea is known for mining _____.

- Ans
- 1. uranium
 - 2. coal
 - 3. copper
 - 4. mineral oil

Question ID : 264330161526
Option 1 ID : 264330633431
Option 2 ID : 264330633434
Option 3 ID : 264330633432
Option 4 ID : 264330633433
Status : Answered
Chosen Option : 2

Q.19 In which of the following years was the Child Marriage Restraint Act passed?

- Ans
- 1. 1949
 - 2. 1939
 - 3. 1950
 - 4. 1929

Question ID : 264330161751
Option 1 ID : 264330634333
Option 2 ID : 264330634332
Option 3 ID : 264330634334
Option 4 ID : 264330634331
Status : Answered
Chosen Option : 3

Q.20 According to the Census of India 2011, identify the correct pair of State and Union Territories which recorded the highest literacy rate.

- Ans
- 1. Mizoram and Lakshadweep
 - 2. Kerala and Chandigarh
 - 3. Goa and Puducherry
 - 4. Kerala and Lakshadweep

Question ID : 264330161558
Option 1 ID : 264330633559
Option 2 ID : 264330633561
Option 3 ID : 264330633562
Option 4 ID : 264330633560
Status : Answered
Chosen Option : 4

Q.21 The sal tree assumes great significance in a number of tribal communities scattered across eastern India. For instance, _____ festival is celebrated in honour of the tree in Jharkhand.

- Ans
- 1. Karma
 - 2. Tusu Parab
 - 3. Sarhul
 - 4. Sohrai

Question ID : 264330160836
Option 1 ID : 264330630677
Option 2 ID : 264330630678
Option 3 ID : 264330630676
Option 4 ID : 264330630675
Status : Answered
Chosen Option : 3

Q.22 Geto Sora won the Arena Junior (Boys) International Badminton Championship. He belongs to which state?

- Ans
- 1. Arunachal Pradesh
 - 2. Mizoram
 - 3. Sikkim
 - 4. Meghalaya

Question ID : 264330158369
Option 1 ID : 264330620836
Option 2 ID : 264330620837
Option 3 ID : 264330620838
Option 4 ID : 264330620835
Status : Answered
Chosen Option : 4

Q.23 Identify the Chhau dancer from the following, who received the Sangeet Natak Akademi Award-2021 (given in February 2023)?

- Ans**
- 1. Bharathi Vithal
 - 2. Kumkum Dhar
 - 3. Bhuvan Kumar
 - 4. Rabindra Atibudhi

Question ID : 264330155519
Option 1 ID : 264330609481
Option 2 ID : 264330609480
Option 3 ID : 264330609479
Option 4 ID : 264330609482
Status : Answered
Chosen Option : 2

Q.24 Which of the following Indian musicians was referred to as 'Ghazal King'?

- Ans**
- 1. Ghulam Ali
 - 2. Jagjit Singh
 - 3. Pankaj Udhas
 - 4. Mehdi Hassan

Question ID : 264330161774
Option 1 ID : 264330634424
Option 2 ID : 264330634426
Option 3 ID : 264330634425
Option 4 ID : 264330634423
Status : Answered
Chosen Option : 1

Q.25 On 8th April 1929, who among the following two revolutionists threw a bomb in the Central Legislative Assembly?

- Ans**
- 1. Bhagat Singh and Rajguru
 - 2. Bhagat Singh and Ram Prasad Bismil
 - 3. Bhagat Singh and Batukeshwar Dutt
 - 4. Bhagat Singh and Sukhdev

Question ID : 264330161746
Option 1 ID : 264330634313
Option 2 ID : 264330634312
Option 3 ID : 264330634311
Option 4 ID : 264330634314
Status : Answered
Chosen Option : 1

Section : English Language and Comprehension

Q.1 Select the option that can be used as a one-word substitute for the given group of words.

To go away suddenly and secretly in order to escape from somewhere

- Ans
- 1. Abscond
 - 2. Vanish
 - 3. Excavate
 - 4. Extradite

Question ID : 264330151871
Option 1 ID : 264330595106
Option 2 ID : 264330595104
Option 3 ID : 264330595103
Option 4 ID : 264330595105
Status : Answered
Chosen Option : 1

Q.2 Select the most appropriate meaning of the underlined idiom.
My friend's business has grown by leaps and bounds.

- Ans
- 1. rapidly
 - 2. aimlessly
 - 3. perfectly
 - 4. slowly

Question ID : 264330152751
Option 1 ID : 264330598603
Option 2 ID : 264330598606
Option 3 ID : 264330598605
Option 4 ID : 264330598604
Status : Answered
Chosen Option : 1

Q.3 Select the most appropriate option that can substitute the underlined segment in the given sentence.
Peer pressure is bound to effect most of us both positively and negatively.

- Ans
- 1. to invoke most of us
 - 2. to affect most of us
 - 3. to impede most of us
 - 4. to prompt most of us

Question ID : 264330151809
Option 1 ID : 264330594865
Option 2 ID : 264330594863
Option 3 ID : 264330594866
Option 4 ID : 264330594864
Status : Answered
Chosen Option : 2

Q.4 Select the most appropriate synonym of the given word.
Peculiar

- Ans 1. Neat
 2. Normal
 3. Strange
 4. Jovial

Question ID : 264330151923
Option 1 ID : 264330595309
Option 2 ID : 264330595308
Option 3 ID : 264330595307
Option 4 ID : 264330595310
Status : Answered
Chosen Option : 3

Q.5 Select the sentence that has NO spelling errors.

- Ans 1. The teacher was impressed with the student's insightfull analysis of the novel, which demonstrated a deep understanding of the complex theames and motifs.
 2. The teacher was impressed with the student's insightful analysis of the novel, which demonstrated a deep understanding of the complex themes and motifs.
 3. The teacher was impressed with the student's insightul analysis of the novel, which demonstrated a deep understanding of the complex themes and motifs.
 4. The teacher was impressed with the student's insightful analysis of the novel, which demonstreted a deep understanding of the complex themes and motifs.

Question ID : 264330152650
Option 1 ID : 264330598205
Option 2 ID : 264330598206
Option 3 ID : 264330598204
Option 4 ID : 264330598203
Status : Answered
Chosen Option : 2

Q.6 Select the INCORRECTLY spelt word.

- Ans 1. Beginning
 2. Writting
 3. Argument
 4. Amateur

Question ID : 264330152646
Option 1 ID : 264330598189
Option 2 ID : 264330598187
Option 3 ID : 264330598190
Option 4 ID : 264330598188
Status : Answered
Chosen Option : 4

Q.7 Select the most appropriate meaning of the underlined idiom in the following sentence.

Tim joined the family business as he failed in his final degree examination. Seeing the growth of the family business now, it seems like Tim's earlier failure was a blessing in disguise.

- Ans
- 1. A difficult time
 - 2. A mistake
 - 3. Something good that isn't recognised at first
 - 4. A good decision

Question ID : 264330153047
Option 1 ID : 264330599756
Option 2 ID : 264330599755
Option 3 ID : 264330599757
Option 4 ID : 264330599758
Status : Answered
Chosen Option : 3

Q.8 The following sentence has been split into four segments. Identify the segment that contains a grammatical error and select the option which rectifies that error.

AI fiction is a constantly / evolving genre that gives us an peek / into the potential upsides and downsides / of intelligent machines.

- Ans
- 1. AI fiction is an constantly
 - 2. into a potential upside and downside
 - 3. evolving genre that gives us a peek
 - 4. of intelligent machine.

Question ID : 264330141341
Option 1 ID : 264330553701
Option 2 ID : 264330553702
Option 3 ID : 264330553699
Option 4 ID : 264330553700
Status : Answered
Chosen Option : 3

Q.9 Parts of the following sentence have been underlined and given as options. Select the option that contains an error.

If he will come early, we will leave on time.

- Ans
- 1. will come
 - 2. If he
 - 3. on time
 - 4. we will

Question ID : 264330144888
Option 1 ID : 264330567808
Option 2 ID : 264330567807
Option 3 ID : 264330567810
Option 4 ID : 264330567809
Status : Answered
Chosen Option : 1

Q.10 Select the most appropriate meaning of the underlined idiom in the following sentence.

I ordered a dozen doughnuts, but the kind baker gave me a baker's dozen.

- Ans
- 1. A group of 12 bakery items
 - 2. A group of 12 bakers
 - 3. A group of 13
 - 4. A group of 12

Question ID : 264330153076
Option 1 ID : 264330599869
Option 2 ID : 264330599870
Option 3 ID : 264330599867
Option 4 ID : 264330599868
Status : Answered
Chosen Option : 3

Q.11 Parts of the following sentence have been underlined and given as options. Select the option that contains an error.

They had two bedrooms among them, one for the girls and one for the boys.

- Ans
- 1. girls and one
 - 2. them, one for
 - 3. bedrooms among
 - 4. had two

Question ID : 264330153210
Option 1 ID : 264330600401
Option 2 ID : 264330600399
Option 3 ID : 264330600402
Option 4 ID : 264330600400
Status : Answered
Chosen Option : 1

Q.12 Select the INCORRECTLY spelt word.

- Ans
- 1. Adopt
 - 2. Advertisement
 - 3. Contantment
 - 4. Container

Question ID : 264330152945
Option 1 ID : 264330599360
Option 2 ID : 264330599359
Option 3 ID : 264330599361
Option 4 ID : 264330599362
Status : Answered
Chosen Option : 3

Q.13 Select the most appropriate ANTONYM of the given word.
Wisdom

- Ans 1. Stupidity
 2. Experience
 3. Modesty
 4. Intelligence

Question ID : 264330152657
Option 1 ID : 264330598232
Option 2 ID : 264330598233
Option 3 ID : 264330598234
Option 4 ID : 264330598231
Status : Answered
Chosen Option : 1

Q.14 Select the option that will improve the underlined part of the given sentence. In case no improvement is needed, select 'No improvement required'.
Jack being the wiser and bolder among the two of us, took the lead, carrying the axe on his shoulder.

- Ans 1. bolder between
 2. boldest among
 3. No improvement required
 4. boldest between

Question ID : 264330153199
Option 1 ID : 264330600356
Option 2 ID : 264330600355
Option 3 ID : 264330600358
Option 4 ID : 264330600357
Status : Answered
Chosen Option : 1

Q.15 Select the option that can be used as a one-word substitute for the underlined group of words.
Many people fought to put an end to slavery during the civil war.

- Ans 1. abolish
 2. absorb
 3. abide
 4. abduct

Question ID : 264330152705
Option 1 ID : 264330598421
Option 2 ID : 264330598419
Option 3 ID : 264330598422
Option 4 ID : 264330598420
Status : Answered
Chosen Option : 1

Q.16 Select the most appropriate ANTONYM of the word given in brackets to fill in the blank.

The doctor said that the patient named Rumi is in the _____(initial) stage of lung cancer.

- Ans
- 1. terminal
 - 2. innermost
 - 3. early
 - 4. outermost

Question ID : 264330152695

Option 1 ID : 264330598386

Option 2 ID : 264330598383

Option 3 ID : 264330598384

Option 4 ID : 264330598385

Status : Answered

Chosen Option : 4

Q.17 Select the most appropriate option to fill in the blank.

He generally avoids arguments as he is _____ by nature.

- Ans
- 1. questionable
 - 2. reliable
 - 3. quick-minded
 - 4. peaceful

Question ID : 264330153549

Option 1 ID : 264330601697

Option 2 ID : 264330601698

Option 3 ID : 264330601695

Option 4 ID : 264330601696

Status : Answered

Chosen Option : 4

Q.18 Select the most appropriate option that can substitute the underlined segment in the given sentence. If there is no need to substitute it, select 'No substitution required'.

The pandemic has challenged education systems to ensure learning continuity, substantially increasing the demands placed on teachers.

- Ans
- 1. education systems to ensuring learning
 - 2. education systems for ensure learning
 - 3. education systems in ensure learning
 - 4. No substitution required

Question ID : 264330151901

Option 1 ID : 264330595219

Option 2 ID : 264330595221

Option 3 ID : 264330595220

Option 4 ID : 264330595222

Status : Answered

Chosen Option : 4

Q.19 Select the most appropriate idiom from the given options to fill in the blank.
We broke the traffic rules unknowingly while coming back from the party, now we have to _____ sooner or later.

- Ans**
- 1. face the music
 - 2. look sharp
 - 3. cry for the moon
 - 4. bid defiance

Question ID : **264330152687**
Option 1 ID : **264330598354**
Option 2 ID : **264330598353**
Option 3 ID : **264330598351**
Option 4 ID : **264330598352**
Status : **Answered**
Chosen Option : **1**

Q.20 The following sentence has been split into four segments. Identify the segment that contains a grammatical error.

Guard over / making mistakes / by carefully checking / the assigned task.

- Ans**
- 1. Guard over
 - 2. by carefully checking
 - 3. the assigned task
 - 4. making mistakes

Question ID : **264330155428**
Option 1 ID : **264330609119**
Option 2 ID : **264330609121**
Option 3 ID : **264330609122**
Option 4 ID : **264330609120**
Status : **Answered**
Chosen Option : **2**

Comprehension:

In the following passage some words have been deleted. Read the passage carefully and select the most appropriate option to fill in each blank.

_____ (1) university or college degree has long been the traditional hallmark of a
_____ (2) candidate in the professional arena. While it historically provided the most widely accepted standard of qualification and skill for professionals, many companies today
_____ (3) their hiring process and considering a broader list of criteria to judge a candidate's ability. Organisations are reducing their reliance on college degrees as a sole marker of competence and instead placing greater emphasis _____ (4) the practical skills candidates have acquired through work experience. This shift in hiring is of particular relevance to India, which has the _____ (5) youth population in the world.

SubQuestion No : 21

Q.21 Select the most appropriate option to fill in blank number 1.

- Ans**
- 1. The
 - 2. That
 - 3. A
 - 4. An

Question ID : **264330152766**
Option 1 ID : **264330598657**
Option 2 ID : **264330598658**
Option 3 ID : **264330598655**
Option 4 ID : **264330598656**
Status : **Answered**
Chosen Option : **1**

Comprehension:

In the following passage some words have been deleted. Read the passage carefully and select the most appropriate option to fill in each blank.

_____ (1) university or college degree has long been the traditional hallmark of a _____ (2) candidate in the professional arena. While it historically provided the most widely accepted standard of qualification and skill for professionals, many companies today _____ (3) their hiring process and considering a broader list of criteria to judge a candidate's ability. Organisations are reducing their reliance on college degrees as a sole marker of competence and instead placing greater emphasis _____ (4) the practical skills candidates have acquired through work experience. This shift in hiring is of particular relevance to India, which has the _____ (5) youth population in the world.

SubQuestion No : 22

Q.22 Select the most appropriate option to fill in blank number 2.

- Ans
- 1. was qualify
 - 2. qualify
 - 3. qualification
 - 4. qualified

Question ID : 264330152767

Option 1 ID : 264330598662

Option 2 ID : 264330598660

Option 3 ID : 264330598661

Option 4 ID : 264330598659

Status : Answered

Chosen Option : 4

Comprehension:

In the following passage some words have been deleted. Read the passage carefully and select the most appropriate option to fill in each blank.

_____ (1) university or college degree has long been the traditional hallmark of a _____ (2) candidate in the professional arena. While it historically provided the most widely accepted standard of qualification and skill for professionals, many companies today _____ (3) their hiring process and considering a broader list of criteria to judge a candidate's ability. Organisations are reducing their reliance on college degrees as a sole marker of competence and instead placing greater emphasis _____ (4) the practical skills candidates have acquired through work experience. This shift in hiring is of particular relevance to India, which has the _____ (5) youth population in the world.

SubQuestion No : 23

Q.23 Select the most appropriate option to fill in blank number 3.

- Ans
- 1. was changed
 - 2. was changing
 - 3. changing
 - 4. are changing

Question ID : 264330152768

Option 1 ID : 264330598663

Option 2 ID : 264330598664

Option 3 ID : 264330598666

Option 4 ID : 264330598665

Status : Answered

Chosen Option : 4

Comprehension:

In the following passage some words have been deleted. Read the passage carefully and select the most appropriate option to fill in each blank.

_____ (1) university or college degree has long been the traditional hallmark of a _____ (2) candidate in the professional arena. While it historically provided the most widely accepted standard of qualification and skill for professionals, many companies today _____ (3) their hiring process and considering a broader list of criteria to judge a candidate's ability. Organisations are reducing their reliance on college degrees as a sole marker of competence and instead placing greater emphasis _____ (4) the practical skills candidates have acquired through work experience. This shift in hiring is of particular relevance to India, which has the _____ (5) youth population in the world.

SubQuestion No : 24

Q.24 Select the most appropriate option to fill in blank number 4.

- Ans
- 1. about
 - 2. for
 - 3. with
 - 4. on

Question ID : 264330152769

Option 1 ID : 264330598669

Option 2 ID : 264330598670

Option 3 ID : 264330598668

Option 4 ID : 264330598667

Status : Answered

Chosen Option : 4

Comprehension:

In the following passage some words have been deleted. Read the passage carefully and select the most appropriate option to fill in each blank.

_____ (1) university or college degree has long been the traditional hallmark of a _____ (2) candidate in the professional arena. While it historically provided the most widely accepted standard of qualification and skill for professionals, many companies today _____ (3) their hiring process and considering a broader list of criteria to judge a candidate's ability. Organisations are reducing their reliance on college degrees as a sole marker of competence and instead placing greater emphasis _____ (4) the practical skills candidates have acquired through work experience. This shift in hiring is of particular relevance to India, which has the _____ (5) youth population in the world.

SubQuestion No : 25

Q.25 Select the most appropriate option to fill in blank number 5.

- Ans
- 1. largest
 - 2. longest
 - 3. biggest
 - 4. most highest

Question ID : 264330152770

Option 1 ID : 264330598673

Option 2 ID : 264330598674

Option 3 ID : 264330598672

Option 4 ID : 264330598671

Status : Answered

Chosen Option : 1

Multi Tasking Non Technical Staff and Havaladar CBIC and CBN Examination 2023

Roll Number	
Candidate Name	
Venue Name	R K Digital Computer Centre 1
Exam Date	04/09/2023
Exam Time	12:30 PM - 2:30 PM
Subject	MTS Non Tech Havaladar CBIC and CBN Examination 2023

Section : Numerical and Mathematical Ability

Q.1 A sum invested at the rate of 6% simple interest per annum grows to ₹1,13,880 in 5 years. What is the simple interest, if the same amount is invested for 8 years at the rate of 9% per annum?

- Ans** 1. ₹63,072
 2. ₹60,565
 3. ₹65,392
 4. ₹58,050

Question ID : 264330158753

Option 1 ID : 264330622371

Option 2 ID : 264330622374

Option 3 ID : 264330622373

Option 4 ID : 264330622372

Status : Answered

Chosen Option : 1

Q.2 Find the compound interest (Compounded annually) on ₹2,000 for $2\frac{1}{2}$ years at 10% per annum.

- Ans** 1. ₹ 561
 2. ₹ 500
 3. ₹ 521
 4. ₹ 541

Question ID : 264330156078

Option 1 ID : 264330611711

Option 2 ID : 264330611713

Option 3 ID : 264330611714

Option 4 ID : 264330611712

Status : Answered

Chosen Option : 3

Q.3 Study the given table and answer the question that follows.
The table shows the number of voters in four different villages P, Q, R, S.

Villages	Total number of registered voters	Percentage of people who voted (Out of the total number of registered voters)
P	1100	68
Q	1450	62
R	1200	73
S	1124	87

The number of people who did not vote in village P is what percentage more than that who did not vote in village R?

- Ans
- 1. $6\frac{52}{81}\%$
 - 2. $8\frac{52}{81}\%$
 - 3. $7\frac{52}{81}\%$
 - 4. $9\frac{52}{81}\%$

Question ID : 264330157907
Option 1 ID : 264330618987
Option 2 ID : 264330618989
Option 3 ID : 264330618988
Option 4 ID : 264330618990
Status : Answered
Chosen Option : 3

Q.4 Find the total surface area of a cuboid whose dimensions are 18 m, 6 m and 3 m.

- Ans
- 1. 90 m^2
 - 2. 180 m^2
 - 3. 324 m^2
 - 4. 360 m^2

Question ID : 264330153898
Option 1 ID : 264330603056
Option 2 ID : 264330603055
Option 3 ID : 264330603058
Option 4 ID : 264330603057
Status : Answered
Chosen Option : 4

Q.5 Yug covers a certain distance with a speed of 56 km/h in $\frac{3}{2}$ hours. If he wants to cover the same distance in 7 hours, what would be his speed (in km/h)?

- Ans**
- 1. 16
 - 2. 20
 - 3. 14
 - 4. 12

Question ID : 264330155752
 Option 1 ID : 264330610413
 Option 2 ID : 264330610414
 Option 3 ID : 264330610412
 Option 4 ID : 264330610411
 Status : Answered
 Chosen Option : 4

Q.6 Vikram saves 13% of his monthly salary. If his monthly expenditure is ₹5,220, then his monthly savings is:

- Ans**
- 1. ₹680
 - 2. ₹580
 - 3. ₹349
 - 4. ₹780

Question ID : 264330156430
 Option 1 ID : 264330613112
 Option 2 ID : 264330613114
 Option 3 ID : 264330613111
 Option 4 ID : 264330613113
 Status : Answered
 Chosen Option : 4

Q.7 20 men can complete a piece of work in 40 days, and 40 women can do the same work in 60 days. If 10 men and 20 women work together, then in how many days will the work be completed?

- Ans**
- 1. 60
 - 2. 50
 - 3. 48
 - 4. 40

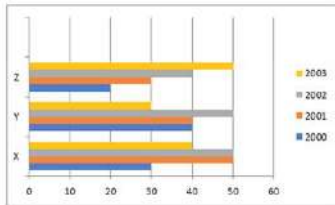
Question ID : 264330156012
 Option 1 ID : 264330611447
 Option 2 ID : 264330611450
 Option 3 ID : 264330611449
 Option 4 ID : 264330611448
 Status : Answered
 Chosen Option : 3

Q.8 A grocery seller mixes two varieties of tea costing ₹300 per kg and ₹160 per kg in such a ratio that by selling this mixture at the rate of ₹187 per kg the shopkeeper earns 10% profit. In what respective ratio does the grocery seller mix the two varieties of tea?

- Ans**
- 1. 2 : 13
 - 2. 13 : 3
 - 3. 13 : 2
 - 4. 1 : 13

Question ID : 264330154118
 Option 1 ID : 264330603936
 Option 2 ID : 264330603937
 Option 3 ID : 264330603935
 Option 4 ID : 264330603938
 Status : Answered
 Chosen Option : 1

Q.9 The following bar graph indicates the production of cement by 3 companies X, Y and Z during the years 2000 - 2003. The quantity is in lakh bags. Study the bar graph carefully and answer the question.



What is the ratio of the average production of company X during the period 2000 – 2003 to the production of company Y during the same period (in lakh bags).

- Ans**
- 1. 17 : 16
 - 2. 8 : 7
 - 3. 12 : 17
 - 4. 10 : 7

Question ID : 264330153858
 Option 1 ID : 264330602897
 Option 2 ID : 264330602895
 Option 3 ID : 264330602898
 Option 4 ID : 264330602896
 Status : Answered
 Chosen Option : 3

Q.10 The least common multiple (LCM) of p and q is r . The LCM of p^2q and pq^2 is _____.

- Ans**
- 1. pqr^3
 - 2. pqr
 - 3. pq
 - 4. pqr^2

Question ID : 264330156247
 Option 1 ID : 264330612390
 Option 2 ID : 264330612388
 Option 3 ID : 264330612387
 Option 4 ID : 264330612389
 Status : Answered
 Chosen Option : 2

Q.11 Two trains started from a station, at the same time in the same direction, at speeds of 90 km/h and 80 km/h. What will be the distance between the two trains after 5 hours?

- Ans**
- 1. 55 km
 - 2. 50 km
 - 3. 45 km
 - 4. 40 km

Question ID : **264330155971**
Option 1 ID : **264330611285**
Option 2 ID : **264330611283**
Option 3 ID : **264330611286**
Option 4 ID : **264330611284**
Status : **Answered**
Chosen Option : **2**

Q.12 A solid piece of metal, cuboidal in shape, with dimensions 12 cm, 9 cm and 2 cm is recast into a cube. What is the lateral surface area (in cm^2) of the cube?

- Ans**
- 1. 144
 - 2. 216
 - 3. 204
 - 4. 162

Question ID : **264330153793**
Option 1 ID : **264330602636**
Option 2 ID : **264330602635**
Option 3 ID : **264330602638**
Option 4 ID : **264330602637**
Status : **Answered**
Chosen Option : **1**

Q.13 A person buys a table fan for ₹2,800 and sells it at a loss of 12%. What is the selling price of the table fan?

- Ans**
- 1. ₹2,466
 - 2. ₹2,468
 - 3. ₹2,462
 - 4. ₹2,464

Question ID : **264330156220**
Option 1 ID : **264330612281**
Option 2 ID : **264330612282**
Option 3 ID : **264330612279**
Option 4 ID : **264330612280**
Status : **Answered**
Chosen Option : **4**

Q.14 If $A : B = 7 : 9$ and $B : C = 5 : 6$, Find the ratio of C and A respectively.

- Ans
- 1. 15 : 14
 - 2. 14 : 15
 - 3. 54 : 35
 - 4. 35 : 54

Question ID : 264330153767
Option 1 ID : 264330602534
Option 2 ID : 264330602533
Option 3 ID : 264330602532
Option 4 ID : 264330602531
Status : Answered
Chosen Option : 4

Q.15 The average weight of 17 men is 63 kg and the average weight of 36 women is 54 kg. What is the average weight (in kg) of all the men and women together? (Rounded off to the nearest integer)

- Ans
- 1. 59
 - 2. 62
 - 3. 57
 - 4. 52

Question ID : 264330155727
Option 1 ID : 264330610312
Option 2 ID : 264330610311
Option 3 ID : 264330610313
Option 4 ID : 264330610314
Status : Answered
Chosen Option : 1

Q.16 A vessel contains liquid A and liquid B in the ratio 4 : 9. If 8 litres of liquid A is added to the vessel, the new ratio becomes 8 : 9. Find the quantity of liquid A (in litres) in the original mixture.

- Ans
- 1. 12
 - 2. 9
 - 3. 8
 - 4. 6

Question ID : 264330155729
Option 1 ID : 264330610319
Option 2 ID : 264330610320
Option 3 ID : 264330610321
Option 4 ID : 264330610322
Status : Answered
Chosen Option : 3

Q.17 Which of the following expressions has value equal to 0?

- Ans
- 1. $(2 \times 3 + 5 - (1 - 2(3 - 2 \times 2)))$
 - 2. $(2 \times 3 - 5 - (1 + 2(3 - 2 \times 2)))$
 - 3. $(2 \times 3 - 5 + (1 + 2(3 - 2 \times 2)))$
 - 4. $(2 \times 3 - 5 - (1 - 2(3 - 2 \times 2)))$

Question ID : 264330153796

Option 1 ID : 264330602650

Option 2 ID : 264330602648

Option 3 ID : 264330602649

Option 4 ID : 264330602647

Status : Answered

Chosen Option : 3

Q.18 Two numbers are in the ratio of 6 : 7. If the difference between these numbers is 16, then find the numbers.

- Ans
- 1. 96, 112
 - 2. 80, 96
 - 3. 120, 136
 - 4. 104, 120

Question ID : 264330153876

Option 1 ID : 264330602967

Option 2 ID : 264330602969

Option 3 ID : 264330602968

Option 4 ID : 264330602970

Status : Answered

Chosen Option : 1

Q.19 A, B and C can complete a work in 10, 15 and 20 days, respectively. They work on alternate days such that 1st day A, 2nd day B and 3rd day C. Again 4th day A, 5th day B and so on. If they work in the same way, in how many days will the work be completed?

- Ans
- 1. $13 \frac{1}{4}$
 - 2. 15
 - 3. 14
 - 4. $13 \frac{1}{2}$

Question ID : 264330154060

Option 1 ID : 264330603704

Option 2 ID : 264330603705

Option 3 ID : 264330603703

Option 4 ID : 264330603706

Status : Answered

Chosen Option : 4

Q.20 A grocer purchased 50 kg of sugar at ₹40 per kg and mixed with 70 kg of sugar at ₹30 per kg. At what rate should he sell the mixture (per kg) to gain 20%?

- Ans**
- 1. ₹60
 - 2. ₹20
 - 3. ₹35
 - 4. ₹41

Question ID : **264330155997**
Option 1 ID : **264330611387**
Option 2 ID : **264330611389**
Option 3 ID : **264330611388**
Option 4 ID : **264330611390**
Status : **Answered**
Chosen Option : **4**

Section : Reasoning Ability and Problem Solving

Q.1 2 is related to 40 following a certain logic. Following the same logic, 5 is related to 250. To which of the following is 7 related to, following the same logic?

- Ans**
- 1. 470
 - 2. 490
 - 3. 450
 - 4. 400

Question ID : **264330151579**
Option 1 ID : **264330593945**
Option 2 ID : **264330593946**
Option 3 ID : **264330593944**
Option 4 ID : **264330593943**
Status : **Answered**
Chosen Option : **2**

Q.2 Select the combination of letters that when sequentially placed in the blanks of the given series, will complete the series.

R _ RT _ R _ R _ TR

- Ans**
- 1. RTRRT
 - 2. TTTRR
 - 3. TRRTR
 - 4. RTTTR

Question ID : **264330151641**
Option 1 ID : **264330594194**
Option 2 ID : **264330594191**
Option 3 ID : **264330594193**
Option 4 ID : **264330594192**
Status : **Answered**
Chosen Option : **3**

Q.3 J, K, P, Q, R and M are sitting around a circular table facing the centre.
J is sitting to the immediate left of M. R is sitting 2nd to the left of J. K is sitting 3rd to the right of J. P sits to the immediate right of R.
Who sits 2nd to the left of K?

- Ans**
- 1. R
 - 2. Q
 - 3. M
 - 4. P

Question ID : 264330155651
Option 1 ID : 264330610007
Option 2 ID : 264330610010
Option 3 ID : 264330610009
Option 4 ID : 264330610008
Status : Answered
Chosen Option : 3

Q.4 What should come in place of '?' in the given series?

3 20 54 ? 258 530 1074

- Ans**
- 1. 122
 - 2. 128
 - 3. 118
 - 4. 124

Question ID : 264330151499
Option 1 ID : 264330593624
Option 2 ID : 264330593626
Option 3 ID : 264330593623
Option 4 ID : 264330593625
Status : Answered
Chosen Option : 1

Q.5 Read the given statements and conclusions carefully. You have to take the given statements to be true even if they seem to be at variance from commonly known facts. You have to decide which conclusion/s logically follow/s from the given statements.

Statements: All crows are sparrows. Some sparrows are parrots. All parrots are yellow.

Conclusion I: Some crows are parrots.

Conclusion II: Some yellow are parrots.

- Ans**
- 1. Only conclusion (II) is follow.
 - 2. Both conclusions (I) and (II) are follow.
 - 3. Only conclusion (I) is follow.
 - 4. Neither conclusion (I) nor (II) is follow.

Question ID : 264330155929
Option 1 ID : 264330611120
Option 2 ID : 264330611122
Option 3 ID : 264330611119
Option 4 ID : 264330611121
Status : Answered
Chosen Option : 1

Q.6 The position of how many letters will remain unchanged if each of the letter in the word 'CATEGORY' is arranged in alphabetical order?

- Ans**
- 1. Three
 - 2. Two
 - 3. None
 - 4. One

Question ID : 264330154327
Option 1 ID : 264330604774
Option 2 ID : 264330604771
Option 3 ID : 264330604773
Option 4 ID : 264330604772
Status : Answered
Chosen Option : 4

Q.7 What should come in place of ? in the given series?

978 967 956 945 934 ?

- Ans**
- 1. 922
 - 2. 923
 - 3. 921
 - 4. 924

Question ID : 264330151553
Option 1 ID : 264330593840
Option 2 ID : 264330593841
Option 3 ID : 264330593839
Option 4 ID : 264330593842
Status : Answered
Chosen Option : 2

Q.8 What should come in place of ? in the given series based on the English alphabetical order?

ETM, AWO, WZQ, SCS, ?

- Ans**
- 1. MEU
 - 2. NFV
 - 3. OFU
 - 4. MEV

Question ID : 264330155807
Option 1 ID : 264330610632
Option 2 ID : 264330610631
Option 3 ID : 264330610634
Option 4 ID : 264330610633
Status : Answered
Chosen Option : 3

Q.9 In a certain code language, 'YJM' is coded as '26-11-14' and 'SOP' is coded as '20-16-17'. What is the code for 'BTX' in the given code language?

- Ans**
- ✓ 1. 3-21-25
 - ✗ 2. 5-22-24
 - ✗ 3. 5-23-25
 - ✗ 4. 4-22-24

Question ID : 264330155822
Option 1 ID : 264330610691
Option 2 ID : 264330610694
Option 3 ID : 264330610693
Option 4 ID : 264330610692
Status : Answered
Chosen Option : 1

Q.10 If G means '-', D means 'x', A means '+', B means '+', then what will come in place of the question mark (?) in the following equation?

19 D 6 B 34 A 2 G 27 = ?

- Ans**
- ✗ 1. 126
 - ✓ 2. 104
 - ✗ 3. 65
 - ✗ 4. 83

Question ID : 264330154688
Option 1 ID : 264330606218
Option 2 ID : 264330606217
Option 3 ID : 264330606216
Option 4 ID : 264330606215
Status : Answered
Chosen Option : 2

Q.11 In a certain code language, 'LIAR' is coded as '5148' and 'REAL' is coded as '1582'. What is the code for 'E' in the given code language?

- Ans**
- ✗ 1. 5
 - ✗ 2. 8
 - ✓ 3. 2
 - ✗ 4. 1

Question ID : 264330151702
Option 1 ID : 264330594437
Option 2 ID : 264330594436
Option 3 ID : 264330594438
Option 4 ID : 264330594435
Status : Answered
Chosen Option : 3

Q.12 Select the combination of letters that when sequentially placed in the blanks of the given series will make it logically complete.

KC_OK_PO_YSOKWV_ K_YO

- Ans**
- 1. MDHTV
 - 2. LJMST
 - 3. KJNVL
 - 4. MAKOU

Question ID : 264330156319
Option 1 ID : 264330612676
Option 2 ID : 264330612677
Option 3 ID : 264330612675
Option 4 ID : 264330612678
Status : Answered
Chosen Option : 2

Q.13 In the following number-pairs, the second number is obtained by applying certain mathematical operations to the first number. Select the set in which the numbers are related in the same way as are the numbers of the following sets.

(NOTE: Operations should be performed on the whole numbers, without breaking down the numbers into its constituent digits. E.g. 13 – Operations on 13 such as adding / subtracting / multiplying etc. to 13 can be performed. Breaking down 13 into 1 and 3 and then performing mathematical operations on 1 and 3 is not allowed)

65, 74

87, 96

- Ans**
- 1. 75, 123
 - 2. 63, 157
 - 3. 81, 156
 - 4. 92, 101

Question ID : 264330151622
Option 1 ID : 264330594117
Option 2 ID : 264330594118
Option 3 ID : 264330594116
Option 4 ID : 264330594115
Status : Answered
Chosen Option : 4

Q.14 What should come in place of '?' in the given series?

13 52 169 520 1573 ?

- Ans**
- 1. 4781
 - 2. 4732
 - 3. 4895
 - 4. 4863

Question ID : 264330151477
Option 1 ID : 264330593536
Option 2 ID : 264330593535
Option 3 ID : 264330593538
Option 4 ID : 264330593537
Status : Answered
Chosen Option : 2

Q.15 Which figure should replace the question mark (?) if the following figure series were to be continued?

P	E	8	↑	8	3	3	8	↑	E	↑	□	?
	□			P			□			3		
↑	A	3	□	E	A	E	A	□	8	A		

Ans

✗ 1.

□	↑	E
	□	
8	A	3

✓ 2.

□	↑	E
	L	
8	A	□

✗ 3.

□	E	↑
	□	
8	A	3

✗ 4.

□	E	↑
	L	
8	A	□

Question ID : 264330154734

Option 1 ID : 264330606400

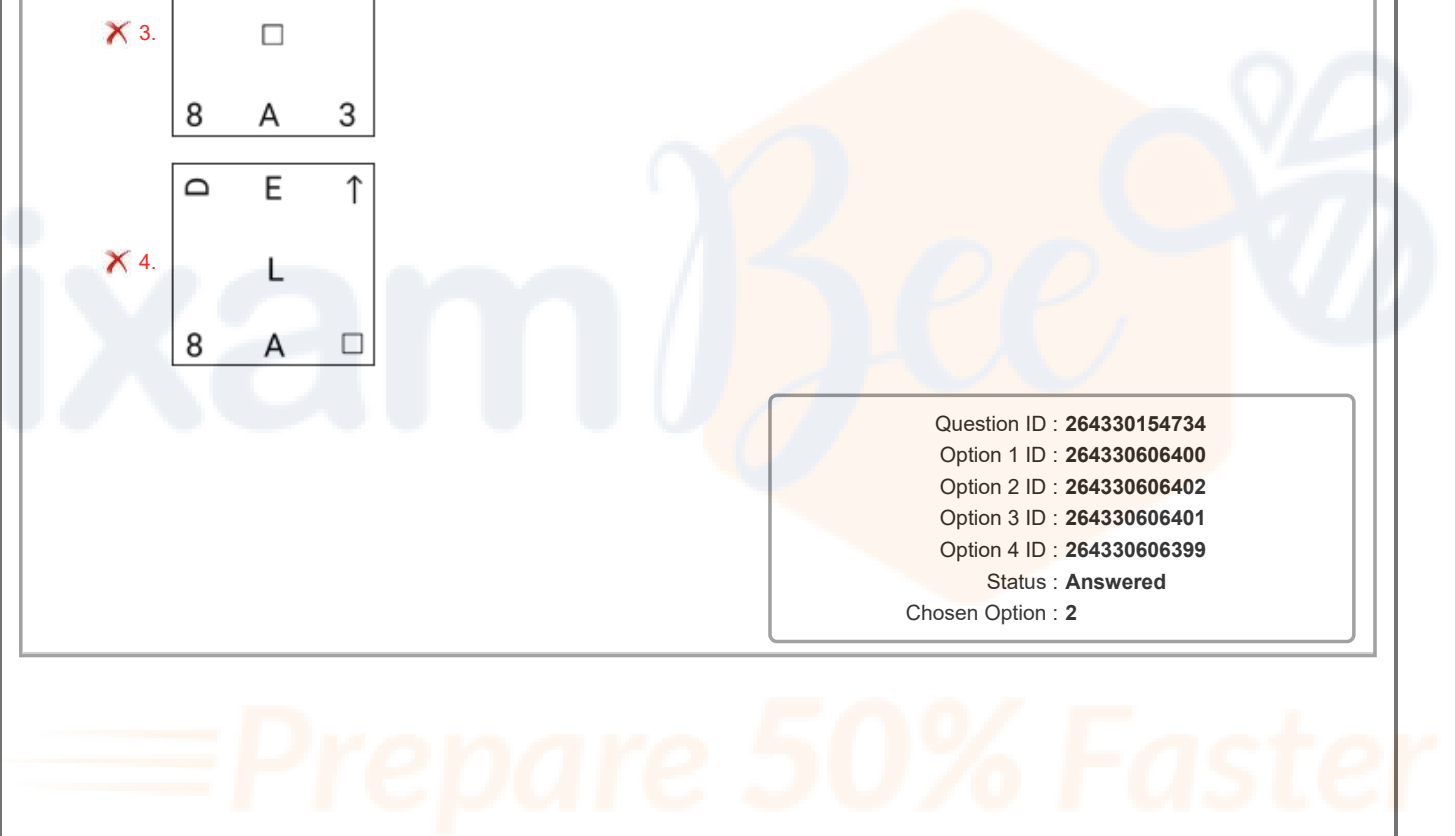
Option 2 ID : 264330606402

Option 3 ID : 264330606401

Option 4 ID : 264330606399

Status : Answered

Chosen Option : 2



Q.16 उस शब्द-युग्म का चयन कीजिए जो नीचे दिए गए शब्दों के युग्म में व्यक्त किए गए समान संबंध का सबसे अच्छा निरूपण करता है।

(शब्दों को अर्थपूर्ण हिंदी शब्दों के रूप में माना जाना चाहिए और उन्हें शब्द में अक्षरों की संख्या/व्यंजन/स्वरों की संख्या के आधार पर एक दूसरे से संबंधित नहीं किया जाना चाहिए।)

सराहना : प्रशंसा करना

Ans

- ✓ 1. दावत देना : खातिर करना
- ✗ 2. रिझाना : ठुकरा देना
- ✗ 3. सुंदर बनाना : तरोताज़ा करना
- ✗ 4. सिखाना : सीखना

Question ID : 264330154640

Option 1 ID : 264330606023

Option 2 ID : 264330606026

Option 3 ID : 264330606025

Option 4 ID : 264330606024

Status : Answered

Chosen Option : 1

Q.17 Read the given statement(s) and conclusions carefully. Assuming that the information given in the statements is true, even if it appears to be at variance with commonly known facts, decide which of the given conclusions logically follow(s) from the statement(s).

Statements: All the actors are girls. All the girls are beautiful.

Conclusions:

- (I) All the actors are beautiful.
- (II) Some girls are actors.

Ans

- ✓ 1. Both conclusions (I) and (II) are follows.
- ✗ 2. Only conclusion (II) is follows.
- ✗ 3. Only conclusion (I) is follows.
- ✗ 4. Neither conclusion (I) nor (II) is follows.

Question ID : 264330154431

Option 1 ID : 264330605190

Option 2 ID : 264330605188

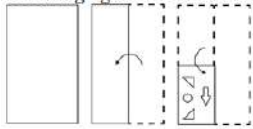
Option 3 ID : 264330605187

Option 4 ID : 264330605189

Status : Answered

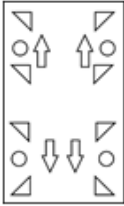
Chosen Option : 1

Q.18 The sequence of folding a piece of paper and the manner in which the folded paper is cut is shown in the following figures. How would this paper look when unfolded?

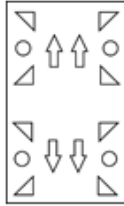


Ans

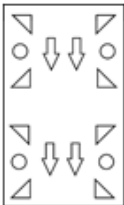
✗ 1.



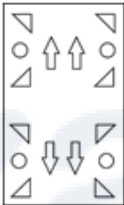
✓ 2.



✗ 3.



✗ 4.



Question ID : 264330155613

Option 1 ID : 264330609857

Option 2 ID : 264330609858

Option 3 ID : 264330609855

Option 4 ID : 264330609856

Status : Answered

Chosen Option : 2

Q.19 What will come in place of '?' in the following equation, if '+' and 'x' are interchanged and '-' and '+' are interchanged?

$$18 - 9 + 4 \times 3 + 5 = ?$$

Ans ✗ 1. 17

✓ 2. 13

✗ 3. 18

✗ 4. 19

Question ID : 264330154670

Option 1 ID : 264330606145

Option 2 ID : 264330606143

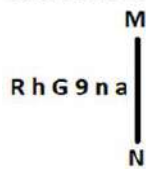
Option 3 ID : 264330606144

Option 4 ID : 264330606146

Status : Answered

Chosen Option : 2

Q.20 Select the correct mirror image of the given figure when the mirror is placed at MN as shown below.



- Ans
- 1. a u e ǝ h ʀ
 - 2. ǝ u e G h ʀ
 - 3. a u e ǝ h R
 - 4. ǝ n e ǝ h ʀ

Question ID : 264330151512
Option 1 ID : 264330593676
Option 2 ID : 264330593675
Option 3 ID : 264330593677
Option 4 ID : 264330593678
Status : Answered
Chosen Option : 3

Section : General Awareness

Q.1 The Gua and Noamundi mines are located in with state of India?

- Ans
- 1. Assam
 - 2. Haryana
 - 3. Rajasthan
 - 4. Jharkhand

Question ID : 264330161527
Option 1 ID : 264330633435
Option 2 ID : 264330633438
Option 3 ID : 264330633437
Option 4 ID : 264330633436
Status : Answered
Chosen Option : 4

Q.2 What is a fiscal year?

- Ans
- 1. A year that represents the financial reporting period for the government
 - 2. A year with a surplus in government revenue
 - 3. A year with a deficit in government revenue
 - 4. A year in which tax rates are increased

Question ID : 264330157272
Option 1 ID : 264330616454
Option 2 ID : 264330616451
Option 3 ID : 264330616452
Option 4 ID : 264330616453
Status : Answered
Chosen Option : 1

Q.3 The Constitution (Scheduled Castes and Scheduled Tribes) Order (Second Amendment) Bill, 2022, was passed in December 2022 and is related to which state?

- Ans
- 1. Bihar
 - 2. Uttarakhand
 - 3. Uttar Pradesh
 - 4. Karnataka

Question ID : 264330158334
Option 1 ID : 264330620698
Option 2 ID : 264330620696
Option 3 ID : 264330620695
Option 4 ID : 264330620697
Status : Not Answered
Chosen Option : --

Q.4 Identify the Kuchipudi dancer from following, who was awarded with 'Padma Shri' in the year 2022.

- Ans
- 1. Vidyanand Sarek
 - 2. Padmaja Reddy
 - 3. Dr. Veeraswamy Seshiah
 - 4. KV Rabiya

Question ID : 264330155528
Option 1 ID : 264330609516
Option 2 ID : 264330609517
Option 3 ID : 264330609515
Option 4 ID : 264330609518
Status : Answered
Chosen Option : 2

Q.5 Buddha Purnima is marked on a full moon day in the Hindu month of _____.

- Ans
- 1. Vaisakh
 - 2. Jaistha
 - 3. Bhadra
 - 4. Ashadha

Question ID : 264330160830
Option 1 ID : 264330630651
Option 2 ID : 264330630652
Option 3 ID : 264330630654
Option 4 ID : 264330630653
Status : Not Answered
Chosen Option : --

Q.6 Which of the following is the official language of Afghanistan?

- Ans
- 1. Sinhala
 - 2. Burmese
 - 3. Dari
 - 4. Dzongkha

Question ID : 264330160175
Option 1 ID : 264330628040
Option 2 ID : 264330628042
Option 3 ID : 264330628039
Option 4 ID : 264330628041
Status : Answered
Chosen Option : 3

Q.7 Who started the temple entry movement in 1927?

Ans 1. Mahadev Govind Ranade

2. Bhimrao Ambedkar

3. Mahatma Gandhi

4. Annie Besant

Question ID : 264330162350

Option 1 ID : 264330636729

Option 2 ID : 264330636728

Option 3 ID : 264330636727

Option 4 ID : 264330636730

Status : Answered

Chosen Option : 2

Q.8 In which state is Gobind Sagar (Bhakra Nangal Project) located?

Ans 1. Himachal Pradesh

2. Gujarat

3. Rajasthan

4. Punjab

Question ID : 264330160140

Option 1 ID : 264330627900

Option 2 ID : 264330627902

Option 3 ID : 264330627901

Option 4 ID : 264330627899

Status : Answered

Chosen Option : 1

Q.9 Pandit Ravi Shankar is known worldwide for playing which of the following musical instruments?

Ans 1. Mohan Veena

2. Sarod

3. Been

4. Sitar

Question ID : 264330161771

Option 1 ID : 264330634414

Option 2 ID : 264330634413

Option 3 ID : 264330634411

Option 4 ID : 264330634412

Status : Answered

Chosen Option : 4

Q.10 The Arabian Sea is an extension of which of the following oceans?

Ans 1. Pacific Ocean

2. Southern Ocean

3. Arctic Ocean

4. Indian ocean

Question ID : 264330157836

Option 1 ID : 264330618703

Option 2 ID : 264330618706

Option 3 ID : 264330618705

Option 4 ID : 264330618704

Status : Answered

Chosen Option : 4

Q.11 Which of the following is a dimension of microfinance institutions (MFIs) in India?

- Ans 1. Outreach to rural areas
 2. Loan interest rates
 3. Investment in the stock market
 4. Availability of credit cards

Question ID : 264330157292
Option 1 ID : 264330616534
Option 2 ID : 264330616531
Option 3 ID : 264330616533
Option 4 ID : 264330616532
Status : Answered
Chosen Option : 2

Q.12 Shambhu Maharaj was a renowned guru of which of the following Gharanas of Kathak?

- Ans 1. Lucknow
 2. dipur
 3. Raigarh
 4. Banaras

Question ID : 264330160810
Option 1 ID : 264330630572
Option 2 ID : 264330630571
Option 3 ID : 264330630574
Option 4 ID : 264330630573
Status : Answered
Chosen Option : 1

Q.13 Which is the oldest Stupa of the Buddhist Period?

- Ans 1. Dhamek Stupa
 2. Mahabodhi Stupa
 3. Kesariya Stupa
 4. Sanchi Stupa

Question ID : 264330160761
Option 1 ID : 264330630378
Option 2 ID : 264330630375
Option 3 ID : 264330630376
Option 4 ID : 264330630377
Status : Not Answered
Chosen Option : --

Q.14 Who conducts elections for both the houses of Parliament in India?

- Ans 1. Ministry of Parliamentary Affairs
 2. Election Commission
 3. President
 4. Prime Minister

Question ID : 264330160860
Option 1 ID : 264330630773
Option 2 ID : 264330630771
Option 3 ID : 264330630774
Option 4 ID : 264330630772
Status : Answered
Chosen Option : 2

Q.15 The third battle of Panipat was fought in which of the following years?

Ans 1. 1761

2. 1707

3. 1786

4. 1751

Question ID : 264330161734

Option 1 ID : 264330634264

Option 2 ID : 264330634263

Option 3 ID : 264330634266

Option 4 ID : 264330634265

Status : Answered

Chosen Option : 1

Q.16 'Untouchable' is a novel written by:

Ans 1. Mulk Raj Anand

2. RC Majumdar

3. Premchand

4. Bankim Chandra Chattopadhyay

Question ID : 264330155498

Option 1 ID : 264330609395

Option 2 ID : 264330609396

Option 3 ID : 264330609398

Option 4 ID : 264330609397

Status : Answered

Chosen Option : 2

Q.17 Which dance form is associated with Natwari Dance?

Ans 1. Kathak

2. Kuchipudi

3. Odissi

4. Kathakali

Question ID : 264330159053

Option 1 ID : 264330623572

Option 2 ID : 264330623574

Option 3 ID : 264330623571

Option 4 ID : 264330623573

Status : Not Answered

Chosen Option : --

Q.18 Birsa Munda hockey stadium is one of the India's largest hockey stadium. In which state is this stadium situated?

Ans 1. Madhya Pradesh

2. Bihar

3. Odisha

4. Chhattisgarh

Question ID : 264330158355

Option 1 ID : 264330620781

Option 2 ID : 264330620779

Option 3 ID : 264330620782

Option 4 ID : 264330620780

Status : Answered

Chosen Option : 3

Q.19 The directive principles are largely classified into three broad categories. Which of the following is NOT the part of this classification?

- Ans
- 1. Liberal
 - 2. Socialistic
 - 3. Gandhian
 - 4. Authoritative

Question ID : 264330160859
Option 1 ID : 264330630769
Option 2 ID : 264330630767
Option 3 ID : 264330630768
Option 4 ID : 264330630770
Status : Answered
Chosen Option : 4

Q.20 Which of the following countries did India defeat to clinch its maiden Women's Junior Hockey Asia Cup title?

- Ans
- 1. Japan
 - 2. Chinese Taipei
 - 3. Malaysia
 - 4. South Korea

Question ID : 264330161129
Option 1 ID : 264330631848
Option 2 ID : 264330631850
Option 3 ID : 264330631849
Option 4 ID : 264330631847
Status : Answered
Chosen Option : 2

Q.21 Who among the following is the author of the book 'Sita: An Illustrated Retelling of the Ramayana'?

- Ans
- 1. Ravinder Singh
 - 2. Devdutt Pattanaik
 - 3. Amish Tripathi
 - 4. Durjoy Datta

Question ID : 264330155457
Option 1 ID : 264330609234
Option 2 ID : 264330609233
Option 3 ID : 264330609231
Option 4 ID : 264330609232
Status : Not Answered
Chosen Option : --

Q.22 Which soft metal in group 1 of the periodic table tarnishes within a few seconds of exposure to air?

- Ans 1. Barium
 2. Sodium
 3. Strontium
 4. Francium

Question ID : 264330161054
Option 1 ID : 264330631548
Option 2 ID : 264330631549
Option 3 ID : 264330631547
Option 4 ID : 264330631550
Status : Answered
Chosen Option : 1

Q.23 The 'Ka Shad Mastieh' or victory dance of the _____ tribe of Meghalaya is an ancient war dance performed during the prominent festival of the tribe.

- Ans 1. Bhoi
 2. War
 3. Khasi
 4. dintia

Question ID : 264330161345
Option 1 ID : 264330632709
Option 2 ID : 264330632710
Option 3 ID : 264330632708
Option 4 ID : 264330632707
Status : Answered
Chosen Option : 3

Q.24 What is the weight of the ball in handball for men?

- Ans 1. 425 to 475 gm
 2. 325 to 375 gm
 3. 525 to 575 gm
 4. 225 to 275 gm

Question ID : 264330158248
Option 1 ID : 264330620353
Option 2 ID : 264330620351
Option 3 ID : 264330620354
Option 4 ID : 264330620352
Status : Not Answered
Chosen Option : --

Q.25 Which vitamin is needed for a healthy immune system, low-light vision, and healthy skin?

- Ans
- 1. Vitamin K
 - 2. Vitamin B2
 - 3. Vitamin B9
 - 4. Vitamin A

Question ID : 264330160991
Option 1 ID : 264330631296
Option 2 ID : 264330631298
Option 3 ID : 264330631297
Option 4 ID : 264330631295
Status : Answered
Chosen Option : 4

Section : English Language and Comprehension

Q.1 Select the option that can be used as a one-word substitute for the given group of words.
Study of sound and sound waves

- Ans
- 1. Botany
 - 2. Physics
 - 3. Demography
 - 4. Acoustics

Question ID : 264330152772
Option 1 ID : 264330598679
Option 2 ID : 264330598681
Option 3 ID : 264330598680
Option 4 ID : 264330598682
Status : Answered
Chosen Option : 4

Q.2 Select the most appropriate option to fill in the blank.
The students of class 7 gave their teacher a gift, which was _____ to her.

- Ans
- 1. revealing
 - 2. shocking
 - 3. confusing
 - 4. surprising

Question ID : 264330152580
Option 1 ID : 264330597923
Option 2 ID : 264330597925
Option 3 ID : 264330597926
Option 4 ID : 264330597924
Status : Answered
Chosen Option : 4

Q.3 Select the most appropriate synonym of the given word.
Obsession

- Ans
- 1. Discrimination
 - 2. Fascination
 - 3. Unconcern
 - 4. Sympathy

Question ID : 264330153559
Option 1 ID : 264330601736
Option 2 ID : 264330601737
Option 3 ID : 264330601735
Option 4 ID : 264330601738
Status : Answered
Chosen Option : 2

Q.4 The following sentence has been split into four segments. Identify the segment that contains a grammatical error and select the option which rectifies that error.

A lot of adulterants / are chemicals that can lead / to an range of health problems / in both children and adults.

- Ans
- 1. to a range of health problems
 - 2. are chemical that can lead
 - 3. A lot of adulterant
 - 4. in both children and adult.

Question ID : 264330141340
Option 1 ID : 264330553696
Option 2 ID : 264330553695
Option 3 ID : 264330553697
Option 4 ID : 264330553698
Status : Answered
Chosen Option : 1

Q.5 Select the most appropriate option that can substitute the underlined segment in the given sentence.

They would find someone drive the wagon back across the desert.

- Ans
- 1. in drive in the
 - 2. to drive
 - 3. to drive the
 - 4. in driving

Question ID : 264330153482
Option 1 ID : 264330601446
Option 2 ID : 264330601445
Option 3 ID : 264330601443
Option 4 ID : 264330601444
Status : Answered
Chosen Option : 3

Q.6 The following sentence has been split into four segments. Identify the segment that contains a grammatical error.
The ball / I kicked / went highly / in the sky.

- Ans**
- 1. The ball
 - 2. went highly
 - 3. in the sky
 - 4. I kicked

Question ID : 264330153184
Option 1 ID : 264330600295
Option 2 ID : 264330600297
Option 3 ID : 264330600298
Option 4 ID : 264330600296
Status : Answered
Chosen Option : 2

Q.7 Select the most appropriate idiom to fill in the blank.
Rajat is known for his notorious nature. He will be friendly to your face but likes _____.

- Ans**
- 1. to blow his trumpet
 - 2. to stab you in the back
 - 3. to paint the whole town red
 - 4. to get all bent out of the shape

Question ID : 264330153562
Option 1 ID : 264330601750
Option 2 ID : 264330601748
Option 3 ID : 264330601749
Option 4 ID : 264330601747
Status : Answered
Chosen Option : 2

Q.8 Select the most appropriate meaning of the given idiom.
Barking up the wrong tree

- Ans**
- 1. Provoke trouble
 - 2. To make a bad situation worse
 - 3. Getting a good start is important
 - 4. To be mistaken, to be looking for solutions in the wrong place

Question ID : 264330153280
Option 1 ID : 264330600677
Option 2 ID : 264330600676
Option 3 ID : 264330600678
Option 4 ID : 264330600675
Status : Answered
Chosen Option : 4

Q.9 Select the option that can be used as a one-word substitute for the given group of words.

A creature which depends on others

- Ans
- 1. Microbes
 - 2. Virus
 - 3. Parasite
 - 4. Bacteria

Question ID : 264330152586

Option 1 ID : 264330597949

Option 2 ID : 264330597947

Option 3 ID : 264330597950

Option 4 ID : 264330597948

Status : Answered

Chosen Option : 3

Q.10 Select the most appropriate idiom to fill in the blank.

The play I saw last night was a _____.

- Ans
- 1. hit the road
 - 2. hit the hay
 - 3. smash hit
 - 4. hit the roof

Question ID : 264330153099

Option 1 ID : 264330599962

Option 2 ID : 264330599959

Option 3 ID : 264330599960

Option 4 ID : 264330599961

Status : Answered

Chosen Option : 3

Q.11 Select the most appropriate option to fill in the blank.

He is _____ of many chain snatching cases in Dariyaganj.

- Ans
- 1. ackused
 - 2. acxused
 - 3. akused
 - 4. accused

Question ID : 264330153306

Option 1 ID : 264330600781

Option 2 ID : 264330600780

Option 3 ID : 264330600779

Option 4 ID : 264330600782

Status : Answered

Chosen Option : 4

Q.12 The following sentence has been split into four segments. Identify the segment that contains a grammatical error.
Despite the setbacks and obstacles we faced, / our team rallied together and achieved our goals, / which teach us the importance of / teamwork, resilience, and determination.

- Ans**
- 1. Despite the setbacks and obstacles we faced,
 - 2. teamwork, resilience, and determination
 - 3. which teach us the importance of
 - 4. our team rallied together and achieved our goals,

Question ID : 264330144181
Option 1 ID : 264330564987
Option 2 ID : 264330564990
Option 3 ID : 264330564989
Option 4 ID : 264330564988
Status : Answered
Chosen Option : 3

Q.13 Select the option that correctly rectifies the spelling error that is underlined.
The questionaire used by the researcher was of top quality.

- Ans**
- 1. questionnaire
 - 2. questionnaire
 - 3. questionairre
 - 4. questionaiee

Question ID : 264330153422
Option 1 ID : 264330601219
Option 2 ID : 264330601220
Option 3 ID : 264330601221
Option 4 ID : 264330601222
Status : Answered
Chosen Option : 2

Q.14 The given sentence contains an error. Select the option that correctly rectifies the error.
That career competition was the difficultest exam he had ever given.

- Ans**
- 1. That career competition was the difficultest exam than any he had ever given.
 - 2. That career competition was the most difficult exam than any he had ever given.
 - 3. That career competition was the most difficultest exam he had ever given.
 - 4. That career competition was the most difficult exam he had ever given.

Question ID : 264330152607
Option 1 ID : 264330598034
Option 2 ID : 264330598032
Option 3 ID : 264330598031
Option 4 ID : 264330598033
Status : Answered
Chosen Option : 4

Q.15 Select the most appropriate idiom for the following sentence.
Shweta organises the sale of handmade pottery at a cheap rate.

- Ans
- 1. Hush money
 - 2. Go for a song
 - 3. Having one's cake and eating it too
 - 4. Making a fuss out of something

Question ID : 264330141303
Option 1 ID : 264330553547
Option 2 ID : 264330553548
Option 3 ID : 264330553549
Option 4 ID : 264330553550
Status : Answered
Chosen Option : 2

Q.16 Select the most appropriate ANTONYM of the given word.
Guilty

- Ans
- 1. Responsible
 - 2. Innocent
 - 3. Criminal
 - 4. Patient

Question ID : 264330153364
Option 1 ID : 264330601009
Option 2 ID : 264330601008
Option 3 ID : 264330601010
Option 4 ID : 264330601007
Status : Answered
Chosen Option : 2

Q.17 Identify the INCORRECTLY spelt word in the following sentence and select its correct spelling from the given options.
The colours of the rainbow seemed to shine through the triangular prism as the sun hit the object.

- Ans
- 1. rainbouw
 - 2. son
 - 3. triangular
 - 4. object

Question ID : 264330153110
Option 1 ID : 264330600003
Option 2 ID : 264330600005
Option 3 ID : 264330600004
Option 4 ID : 264330600006
Status : Answered
Chosen Option : 3

Q.18 Select the most appropriate option that can substitute the underlined segment in the given sentence.

The intrepid group of adventurers climbed the mountain despite of bad weather and road closures.

- Ans
- 1. despite
 - 2. in spite
 - 3. in view of
 - 4. due to

Question ID : 264330151854
Option 1 ID : 264330595035
Option 2 ID : 264330595036
Option 3 ID : 264330595037
Option 4 ID : 264330595038
Status : Answered
Chosen Option : 1

Q.19 Select the most appropriate option that can substitute the underlined segment in the given sentence.

The airplane flowed over the mountains, offering the passengers a breath-taking view of the majestic peaks below.

- Ans
- 1. flew beyond
 - 2. flew over
 - 3. flowed above
 - 4. flowed beyond

Question ID : 264330151858
Option 1 ID : 264330595054
Option 2 ID : 264330595053
Option 3 ID : 264330595052
Option 4 ID : 264330595051
Status : Answered
Chosen Option : 2

Q.20 Select the most appropriate ANTONYM of the given word.
Ecstasy

- Ans
- 1. Euphoria
 - 2. Coarse
 - 3. Natural
 - 4. Despair

Question ID : 264330152676
Option 1 ID : 264330598307
Option 2 ID : 264330598309
Option 3 ID : 264330598308
Option 4 ID : 264330598310
Status : Answered
Chosen Option : 4

Comprehension:

In the following passage, some words have been deleted. Read the passage carefully and select the most appropriate option to fill in each blank.

As a boy, I was always exploring lonely places—neglected gardens and orchards, unoccupied houses, patches of scrub or wasteland, the fields outside the town, the fringes of the forest. On one of my rambles (1)_____the bungalow, I pushed my way through a thicket of lantana bushes and stumbled over a thick stone slab, twisting my ankle slightly as I fell. For some time, I sat on the grass massaging my foot. When the pain eased, I looked more (2)_____ at the stone slab and was surprised to find that it was a gravestone. It was almost entirely covered by ivy; obviously no one had been near it for years. I tugged at the ivy and some of it came away in my hands. There was some (3)_____ lettering on the grave, half-observed by grass and moss. I could make out a name—Rose—but little more. I sat there for some time, (4)_____ over my discovery. I was wondering why 'Rose' should have been buried at so lonely a spot when there was a (5)_____ not far away.

SubQuestion No : 21

Q.21 Select the most appropriate option to fill in blank number 1.

- Ans 1. before
 2. behind
 3. by dint of
 4. below

Question ID : 264330153544

Option 1 ID : 264330601676

Option 2 ID : 264330601678

Option 3 ID : 264330601677

Option 4 ID : 264330601675

Status : Answered

Chosen Option : 2

Comprehension:

In the following passage, some words have been deleted. Read the passage carefully and select the most appropriate option to fill in each blank.

As a boy, I was always exploring lonely places—neglected gardens and orchards, unoccupied houses, patches of scrub or wasteland, the fields outside the town, the fringes of the forest. On one of my rambles (1)_____the bungalow, I pushed my way through a thicket of lantana bushes and stumbled over a thick stone slab, twisting my ankle slightly as I fell. For some time, I sat on the grass massaging my foot. When the pain eased, I looked more (2)_____ at the stone slab and was surprised to find that it was a gravestone. It was almost entirely covered by ivy; obviously no one had been near it for years. I tugged at the ivy and some of it came away in my hands. There was some (3)_____ lettering on the grave, half-observed by grass and moss. I could make out a name—Rose—but little more. I sat there for some time, (4)_____ over my discovery. I was wondering why 'Rose' should have been buried at so lonely a spot when there was a (5)_____ not far away.

SubQuestion No : 22

Q.22 Select the most appropriate option to fill in blank number 2.

- Ans 1. closely
 2. emptyly
 3. frankly
 4. lawfully

Question ID : 264330153545

Option 1 ID : 264330601681

Option 2 ID : 264330601679

Option 3 ID : 264330601680

Option 4 ID : 264330601682

Status : Answered

Chosen Option : 1

Comprehension:

In the following passage, some words have been deleted. Read the passage carefully and select the most appropriate option to fill in each blank.

As a boy, I was always exploring lonely places—neglected gardens and orchards, unoccupied houses, patches of scrub or wasteland, the fields outside the town, the fringes of the forest. On one of my rambles (1)_____the bungalow, I pushed my way through a thicket of lantana bushes and stumbled over a thick stone slab, twisting my ankle slightly as I fell. For some time, I sat on the grass massaging my foot. When the pain eased, I looked more (2)_____ at the stone slab and was surprised to find that it was a gravestone. It was almost entirely covered by ivy; obviously no one had been near it for years. I tugged at the ivy and some of it came away in my hands. There was some (3)_____ lettering on the grave, half-observed by grass and moss. I could make out a name—Rose—but little more. I sat there for some time, (4)_____ over my discovery. I was wondering why 'Rose' should have been buried at so lonely a spot when there was a (5)_____ not far away.

SubQuestion No : 23

Q.23 Select the most appropriate option to fill in blank number 3.

- Ans 1. idiotic
 2. sturdy
 3. blurred
 4. nomadic

Question ID : 264330153546

Option 1 ID : 264330601686

Option 2 ID : 264330601683

Option 3 ID : 264330601684

Option 4 ID : 264330601685

Status : Answered

Chosen Option : 3

Comprehension:

In the following passage, some words have been deleted. Read the passage carefully and select the most appropriate option to fill in each blank.

As a boy, I was always exploring lonely places—neglected gardens and orchards, unoccupied houses, patches of scrub or wasteland, the fields outside the town, the fringes of the forest. On one of my rambles (1)_____the bungalow, I pushed my way through a thicket of lantana bushes and stumbled over a thick stone slab, twisting my ankle slightly as I fell. For some time, I sat on the grass massaging my foot. When the pain eased, I looked more (2)_____ at the stone slab and was surprised to find that it was a gravestone. It was almost entirely covered by ivy; obviously no one had been near it for years. I tugged at the ivy and some of it came away in my hands. There was some (3)_____ lettering on the grave, half-observed by grass and moss. I could make out a name—Rose—but little more. I sat there for some time, (4)_____ over my discovery. I was wondering why 'Rose' should have been buried at so lonely a spot when there was a (5)_____ not far away.

SubQuestion No : 24

Q.24 Select the most appropriate option to fill in blank number 4.

- Ans 1. sleeping
 2. pondering
 3. being
 4. pulling

Question ID : 264330153547

Option 1 ID : 264330601690

Option 2 ID : 264330601687

Option 3 ID : 264330601688

Option 4 ID : 264330601689

Status : Answered

Chosen Option : 2

Comprehension:

In the following passage, some words have been deleted. Read the passage carefully and select the most appropriate option to fill in each blank.

As a boy, I was always exploring lonely places—neglected gardens and orchards, unoccupied houses, patches of scrub or wasteland, the fields outside the town, the fringes of the forest. On one of my rambles (1)_____the bungalow, I pushed my way through a thicket of lantana bushes and stumbled over a thick stone slab, twisting my ankle slightly as I fell. For some time, I sat on the grass massaging my foot. When the pain eased, I looked more (2)_____ at the stone slab and was surprised to find that it was a gravestone. It was almost entirely covered by ivy; obviously no one had been near it for years. I tugged at the ivy and some of it came away in my hands. There was some (3)_____ lettering on the grave, half-obscured by grass and moss. I could make out a name—Rose—but little more. I sat there for some time, (4)_____ over my discovery. I was wondering why 'Rose' should have been buried at so lonely a spot when there was a (5)_____ not far away.

SubQuestion No : 25

Q.25 Select the most appropriate option to fill in blank number 5.

- Ans
- 1. dormitory
 - 2. kennel
 - 3. sanctuary
 - 4. cemetery

Question ID : 264330153548

Option 1 ID : 264330601694

Option 2 ID : 264330601691

Option 3 ID : 264330601692

Option 4 ID : 264330601693

Status : Answered

Chosen Option : 4

Multi Tasking Non Technical Staff and Havaladar CBIC and CBN Examination 2023

Roll Number	
Candidate Name	
Venue Name	iON Digital Zone iDZ Sonai Road
Exam Date	04/09/2023
Exam Time	4:00 PM - 6:00 PM
Subject	MTS Non Tech Havaladar CBIC and CBN Examination 2023

Section : Numerical and Mathematical Ability

Q.1 Simplify the given expression.

$$71 - (-3)\{-2 - (\overline{8 - 3})\} + 3\{5 + (-2)(-1)\}$$

- Ans
- 1. 30
 - 2. 119
 - 3. 50
 - 4. 71

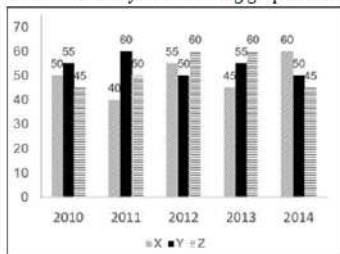
Question ID : 264330157321
Option 1 ID : 264330616650
Option 2 ID : 264330616648
Option 3 ID : 264330616647
Option 4 ID : 264330616649
Status : Answered
Chosen Option : 4

Q.2 Find the mean proportional between 0.08 and 0.32.

- Ans
- 1. 16
 - 2. 0.016
 - 3. 0.16
 - 4. 1.6

Question ID : 264330153845
Option 1 ID : 264330602844
Option 2 ID : 264330602846
Option 3 ID : 264330602843
Option 4 ID : 264330602845
Status : Answered
Chosen Option : 3

Q.3 The graph shows the production of tyres (in Lakhs) by three different companies X, Y, and Z over the years.
Directions: Study the following graph carefully to answer the question given below it.



The total production of company Z in 2012 and 2013 is what percentage of the total production of company X in 2010 and 2011?

- Ans**
- 1. 126.3%
 - 2. 133.3%
 - 3. 75%
 - 4. 111.1%

Question ID : 264330153890
Option 1 ID : 264330603025
Option 2 ID : 264330603023
Option 3 ID : 264330603024
Option 4 ID : 264330603026
Status : Answered
Chosen Option : 2

Q.4 What is the largest number that divides 627, 15630 and 3128 and leaves remainders of 2, 5 and 3, respectively?

- Ans**
- 1. 775
 - 2. 650
 - 3. 625
 - 4. 1225

Question ID : 264330156089
Option 1 ID : 264330611757
Option 2 ID : 264330611758
Option 3 ID : 264330611755
Option 4 ID : 264330611756
Status : Answered
Chosen Option : 3

Q.5 If P can finish a job in 3 hours and Q can finish the same job in 6 hours independently, then they together will finish the job in x minutes. Find the value of x .

- Ans**
- 1. 160
 - 2. 100
 - 3. 150
 - 4. 120

Question ID : 264330155972
Option 1 ID : 264330611289
Option 2 ID : 264330611290
Option 3 ID : 264330611287
Option 4 ID : 264330611288
Status : Answered
Chosen Option : 4

Q.6 The ratio of principal and amount is 5 : 6 for one year. Find the rate of simple interest per annum?

- Ans**
- 1. 10%
 - 2. 11%
 - 3. 15%
 - 4. 20%

Question ID : 264330158842
Option 1 ID : 264330622727
Option 2 ID : 264330622729
Option 3 ID : 264330622728
Option 4 ID : 264330622730
Status : Answered
Chosen Option : 4

Q.7 A boatman goes 6 km against the current of the stream in 2 hours and goes 1.5 km along the current in 7.5 minutes. How long will (in hours) it take to go 30 km in still water?

- Ans**
- 1. 2.5
 - 2. 3.5
 - 3. 3.0
 - 4. 4.0

Question ID : 264330153776
Option 1 ID : 264330602569
Option 2 ID : 264330602570
Option 3 ID : 264330602568
Option 4 ID : 264330602567
Status : Answered
Chosen Option : 4

Q.8 The average height of 25 boys was calculated to be 150 cm. It was detected later that one value of 160 cm was wrongly copied as 135 cm for the computation of the mean. Find the correct mean height (in cm).

- Ans**
- 1. 152
 - 2. 158
 - 3. 154
 - 4. 151

Question ID : 264330156097
Option 1 ID : 264330611790
Option 2 ID : 264330611789
Option 3 ID : 264330611787
Option 4 ID : 264330611788
Status : Answered
Chosen Option : 4

Q.9 The marked price of mustard oil is 10% more than its cost price. At what percentage less than the marked price should it be sold to have no profit and no loss?

- Ans**
- 1. $9\frac{3}{11}\%$
 - 2. $9\frac{2}{11}\%$
 - 3. $9\frac{1}{11}\%$
 - 4. $9\frac{4}{11}\%$

Question ID : 264330156219
Option 1 ID : 264330612277
Option 2 ID : 264330612276
Option 3 ID : 264330612275
Option 4 ID : 264330612278
Status : Answered
Chosen Option : 3

Q.10 A woman jogged every month in 2022 as per the given table. Study the table and answer the question that follows.

Month	Jan	Feb	March	April	May	June	July	Aug	Sept	Oct	Nov	Dec
Distance jogged (in km)	90	60	30	30	30	60	60	90	30	60	90	30

What is the mean distance jogged by the woman in the year 2022?

- Ans**
- 1. 52.5 km
 - 2. 55 km
 - 3. 50 km
 - 4. 60 km

Question ID : 264330156290
Option 1 ID : 264330612562
Option 2 ID : 264330612559
Option 3 ID : 264330612561
Option 4 ID : 264330612560
Status : Answered
Chosen Option : 2

Q.11 The area of a trapezium is 180 cm^2 and two parallel sides are 28 cm and 12 cm. The distance between these parallel sides is:

- Ans**
- 1. 9 cm
 - 2. 12 cm
 - 3. 18 cm
 - 4. 15 cm

Question ID : 264330154138
Option 1 ID : 264330604016
Option 2 ID : 264330604015
Option 3 ID : 264330604017
Option 4 ID : 264330604018
Status : Answered
Chosen Option : 1

Q.12 Water is pouring into a cuboidal reservoir at the rate of 50 litres per minute. The volume of the reservoir is 120 m^3 . How many hours will it take to fill the reservoir?

- Ans**
- 1. 35
 - 2. 45
 - 3. 40
 - 4. 30

Question ID : **264330153864**
Option 1 ID : **264330602922**
Option 2 ID : **264330602919**
Option 3 ID : **264330602920**
Option 4 ID : **264330602921**
Status : **Answered**
Chosen Option : **3**

Q.13 The difference between the compound interest (Compounded annually) and simple interest for an amount of ₹85,000 in 2 years is ₹850. Find the rate of interest per annum.

- Ans**
- 1. 5%
 - 2. 10%
 - 3. 8%
 - 4. 12%

Question ID : **264330156229**
Option 1 ID : **264330612315**
Option 2 ID : **264330612317**
Option 3 ID : **264330612316**
Option 4 ID : **264330612318**
Status : **Answered**
Chosen Option : **2**

Q.14 ₹3,600 is divided such that half of the first part, one-third of the second part and one-fifth of the third part are the same. The value of the third part is:

- Ans**
- 1. 1080
 - 2. 1000
 - 3. 2400
 - 4. 1800

Question ID : **264330154050**
Option 1 ID : **264330603665**
Option 2 ID : **264330603666**
Option 3 ID : **264330603663**
Option 4 ID : **264330603664**
Status : **Answered**
Chosen Option : **4**

Q.15 A store sells an item for ₹500, making a profit of 25%. Later, the store reduces the price of the item by 20% to clear out old inventory. What is the new percentage profit or loss for the store?

- Ans**
- 1. 2% profit
 - 2. 5% profit
 - 3. 5% loss
 - 4. No profit, no loss

Question ID : **264330156264**
Option 1 ID : **264330612457**
Option 2 ID : **264330612455**
Option 3 ID : **264330612456**
Option 4 ID : **264330612458**
Status : **Answered**
Chosen Option : **4**

Q.16 Two trains 120 metres and 150 metres long, respectively, are running in the same direction with speeds of 70 km/h and 52 km/h, respectively. In how much time will the first train cross the second? (in seconds)

- Ans**
- 1. 52
 - 2. 60
 - 3. 48
 - 4. 54

Question ID : **264330156008**
Option 1 ID : **264330611431**
Option 2 ID : **264330611434**
Option 3 ID : **264330611432**
Option 4 ID : **264330611433**
Status : **Answered**
Chosen Option : **4**

Q.17 A cyclist travels 15 km at a speed of 10 km/h and then travels another 15 km at a speed of 20 km/h. What is the average speed of the cyclist for the entire journey? (round to two places of decimals)

- Ans**
- 1. 12.32km/h
 - 2. 13.74 km/h
 - 3. 12.72 km/h
 - 4. 13.33 km/h

Question ID : **264330156257**
Option 1 ID : **264330612427**
Option 2 ID : **264330612430**
Option 3 ID : **264330612428**
Option 4 ID : **264330612429**
Status : **Answered**
Chosen Option : **4**

Q.18 Susanth purchased 3 packs of oil at the rate of ₹20 each, 4 packs of oil at ₹21 each and 3 packs of oil at the rate of ₹22 each. What is the average cost of one pack of oil?

- Ans**
- 1. ₹21.5
 - 2. ₹20
 - 3. ₹20.5
 - 4. ₹21

Question ID : 264330153870
Option 1 ID : 264330602946
Option 2 ID : 264330602943
Option 3 ID : 264330602944
Option 4 ID : 264330602945
Status : Answered
Chosen Option : 4

Q.19 A man can finish a work in 12 days and a woman can finish the same in 10 days. 2 men and 3 women work on alternate days and men start the first day. The work will be finished in _____ days.

- Ans**
- 1. $\frac{22}{3}$
 - 2. $\frac{24}{5}$
 - 3. $\frac{22}{5}$
 - 4. $\frac{21}{5}$

Question ID : 264330153815
Option 1 ID : 264330602725
Option 2 ID : 264330602723
Option 3 ID : 264330602726
Option 4 ID : 264330602724
Status : Answered
Chosen Option : 3

Q.20 During the first year, the population of a town increased by 10% and during the next year, the population decreased by 10%. If the total population of the town was 19,800 at the end of the second year, find the population size at the beginning of the first year.

- Ans**
- 1. 20,800
 - 2. 21,000
 - 3. 20,000
 - 4. 21,800

Question ID : 264330155994
Option 1 ID : 264330611377
Option 2 ID : 264330611376
Option 3 ID : 264330611378
Option 4 ID : 264330611375
Status : Answered
Chosen Option : 3

Q.1 In a certain code language, 'GLOAT' is coded as 'EJMYR' and 'INCUR' is coded as 'GLASP'. What is the code for 'PANDA' in the given code language?

- Ans**
- 1. MZMCZ
 - 2. MYMCX
 - 3. NXNBY
 - 4. NYLBY

Question ID : 264330155816
 Option 1 ID : 264330610667
 Option 2 ID : 264330610669
 Option 3 ID : 264330610670
 Option 4 ID : 264330610668
 Status : Answered
 Chosen Option : 4

Q.2 Q, R, S, T, U, V, W and X are sitting around a square table facing the center of the table. Some of them are sitting at the corners while some are sitting at the exact center of the sides. X sits second to the left of W. W sits in one of the corners. V is the immediate neighbour of T and U. R sits third to the left of T. U does not sit in one of the corners. U is neither the neighbour of X nor W. Q is not the neighbour of X.

How many people sit between S and V, when counted from the left of S?

- Ans**
- 1. One
 - 2. Three
 - 3. Four
 - 4. Two

Question ID : 264330155535
 Option 1 ID : 264330609546
 Option 2 ID : 264330609544
 Option 3 ID : 264330609543
 Option 4 ID : 264330609545
 Status : Answered
 Chosen Option : 4

Q.3 What will come in place of '?' in the following equation, if '+' and '×' are interchanged and '-÷' and '÷+' are interchanged?

$$1 \times 1 - 1 \div 1 + 1 = ?$$

- Ans**
- 1. 11
 - 2. 1
 - 3. 10
 - 4. 21

Question ID : 264330154656
 Option 1 ID : 264330606089
 Option 2 ID : 264330606088
 Option 3 ID : 264330606087
 Option 4 ID : 264330606090
 Status : Answered
 Chosen Option : 2

Q.4 Find out the correct alternative that when filled in the blanks in the same sequence will make the series logically complete.

EFS_ JK_M OPRS _US_ YZ_B

- Ans**
- ✓ 1. HSTWS
 - ✗ 2. HTBSW
 - ✗ 3. JSTBW
 - ✗ 4. JTBWS

Question ID : 264330154727
Option 1 ID : 264330606372
Option 2 ID : 264330606371
Option 3 ID : 264330606373
Option 4 ID : 264330606374
Status : Answered
Chosen Option : 1

Q.5 If 7th May 2000 is Sunday, then what will be the day of the week on 15th July 2010?

- Ans**
- ✗ 1. Sunday
 - ✗ 2. Monday
 - ✗ 3. Friday
 - ✓ 4. Thursday

Question ID : 264330154331
Option 1 ID : 264330604788
Option 2 ID : 264330604787
Option 3 ID : 264330604789
Option 4 ID : 264330604790
Status : Answered
Chosen Option : 4

Q.6 Read the given statements and conclusions carefully. You have to take the given statements to be true even if they seem to be at variance from commonly known facts. You have to decide which conclusion/s logically follow/s from the given statements.

Statements: Some doughnuts are rocks. All rocks are papers. Some papers are oil.

Conclusion I: Some doughnuts are papers.

Conclusion II: Some rocks are oil.

- Ans**
- ✗ 1. Neither conclusion (I) nor (II) is follow.
 - ✗ 2. Both conclusions (I) and (II) are follow.
 - ✗ 3. Only conclusion (II) is follow.
 - ✓ 4. Only conclusion (I) is follow.

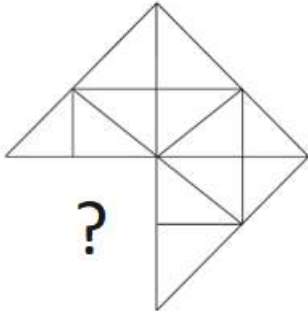
Question ID : 264330155926
Option 1 ID : 264330611109
Option 2 ID : 264330611110
Option 3 ID : 264330611108
Option 4 ID : 264330611107
Status : Answered
Chosen Option : 4

Q.7 What will come in the place of '?' in the following equation, if '+' and '-' are interchanged and '×' and '÷' are interchanged?
 $147 \times 7 \div 8 + 32 - 6 = ?$

- Ans**
- 1. 132
 - 2. 152
 - 3. 122
 - 4. 142

Question ID : 264330155676
 Option 1 ID : 264330610109
 Option 2 ID : 264330610107
 Option 3 ID : 264330610108
 Option 4 ID : 264330610110
 Status : Answered
 Chosen Option : 4

Q.8 Identify the figure that completes the pattern (rotation is NOT allowed).



Ans

- 1.
- 2.
- 3.
- 4.

Question ID : 264330154520
 Option 1 ID : 264330605545
 Option 2 ID : 264330605543
 Option 3 ID : 264330605544
 Option 4 ID : 264330605546
 Status : Answered
 Chosen Option : 1

Q.9 Select the set in which the numbers are related in the same way as are the numbers of the following sets.
(NOTE: Operations should be performed on the whole numbers, without breaking down the numbers into its constituent digits. E.g. 13 – Operations on 13 such as adding / subtracting /multiplying etc. to 13 can be performed. Breaking down 13 into 1 and 3 and then performing mathematical operations on 1 and 3 is not allowed)
(4, 55, 7)
(2, 35, 5)

- Ans**
- 1. 41, 156, 7
 - 2. 12, 346, 9
 - 3. 32, 175, 3
 - 4. 19, 122, 8

Question ID : 264330151617
Option 1 ID : 264330594098
Option 2 ID : 264330594095
Option 3 ID : 264330594097
Option 4 ID : 264330594096
Status : Answered
Chosen Option : 3

Q.10 What should come in place of '?' in the given series?

10 52 262 1312 6562 ?

- Ans**
- 1. 32954
 - 2. 31726
 - 3. 32812
 - 4. 31458

Question ID : 264330151472
Option 1 ID : 264330593518
Option 2 ID : 264330593516
Option 3 ID : 264330593517
Option 4 ID : 264330593515
Status : Answered
Chosen Option : 3

Q.11 What should come in place of '?' in the given series?

37 325 2917 ? 236197 2125765 19131877

- Ans**
- 1. 27894
 - 2. 28953
 - 3. 28741
 - 4. 26245

Question ID : 264330151447
Option 1 ID : 264330593416
Option 2 ID : 264330593418
Option 3 ID : 264330593417
Option 4 ID : 264330593415
Status : Answered
Chosen Option : 4

Q.12 DK 18 is related to EM 22 in a certain way. In the same way, ME 25 is related to NG 29. To which of the following is UL 14 related to following the same logic?

- Ans**
- 1. VM 19
 - 2. WN 18
 - 3. XO 17
 - 4. VN 18

Question ID : 264330151667
Option 1 ID : 264330594297
Option 2 ID : 264330594298
Option 3 ID : 264330594296
Option 4 ID : 264330594295
Status : Answered
Chosen Option : 4

Q.13 In a certain code language, 'MINT' is coded as '4735' and 'TIME' is coded as '5483'. What is the code for 'E' in the given code language?

- Ans**
- 1. 8
 - 2. 5
 - 3. 4
 - 4. 3

Question ID : 264330151703
Option 1 ID : 264330594439
Option 2 ID : 264330594440
Option 3 ID : 264330594442
Option 4 ID : 264330594441
Status : Answered
Chosen Option : 1

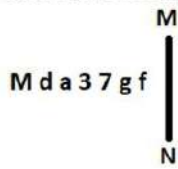
Q.14 Find out the correct alternative that when filled in the blanks in the same sequence will make the series logically complete.

A_BY CZ_Y _ZFY GZH_IZ_Y

- Ans**
- 1. HCJNR
 - 2. ZJDBV
 - 3. BHDKU
 - 4. ZDEYJ

Question ID : 264330154721
Option 1 ID : 264330606350
Option 2 ID : 264330606347
Option 3 ID : 264330606348
Option 4 ID : 264330606349
Status : Answered
Chosen Option : 4

Q.15 Select the correct mirror image of the given figure when the mirror is placed at MN as shown below.



- Ans
- 1. $\text{f g } \angle \text{ } \epsilon \text{ a b M}$
 - 2. $\text{g f } \nabla \text{ } 3 \text{ } \epsilon \text{ P M}$
 - 3. $\text{f g } \nabla \text{ } \epsilon \text{ } \epsilon \text{ b W}$
 - 4. $\text{f g } \nabla \text{ } \epsilon \text{ } \epsilon \text{ b M}$

Question ID : 264330151530

Option 1 ID : 264330593748

Option 2 ID : 264330593750

Option 3 ID : 264330593747

Option 4 ID : 264330593749

Status : Answered

Chosen Option : 4

Q.16 What should come in place of '?' in the given series?

2 24 ? 948 5700 34212 205284

- Ans
- 1. 156
 - 2. 184
 - 3. 119
 - 4. 136

Question ID : 264330151482

Option 1 ID : 264330593557

Option 2 ID : 264330593558

Option 3 ID : 264330593555

Option 4 ID : 264330593556

Status : Answered

Chosen Option : 1

Q.17 Which figure should replace the question mark (?) if the following figure series were to be continued?

V	=	3	△	V	3	0	△	
0		=		C		3		?
△	3	0	V	△	0	C	V	

Ans

✗ 1.

	V	C
	0	
△	3	

✗ 2.

	C	0
	I	
V	△	

✓ 3.

	V	0
	I	
△	C	

✗ 4.

	0	C
	3	
△	V	

Question ID : 264330154743

Option 1 ID : 264330606436

Option 2 ID : 264330606435

Option 3 ID : 264330606437

Option 4 ID : 264330606438

Status : Answered

Chosen Option : 3

Q.18 13 is related to 174 following a certain logic. Following the same logic, 15 is related to 230. To which of the following is 17 related to, following the same logic?

Ans ✗ 1. 291

✗ 2. 292

✗ 3. 293

✓ 4. 294

Question ID : 264330151596

Option 1 ID : 264330594011

Option 2 ID : 264330594012

Option 3 ID : 264330594013

Option 4 ID : 264330594014

Status : Answered

Chosen Option : 4

Q.19 What should come in place of ? in the given series based on the English alphabetical order?

DQK, CPJ, BOI, ANH, ?

- Ans
- 1. XMF
 - 2. YLF
 - 3. YNF
 - 4. ZMG

Question ID : 264330155768

Option 1 ID : 264330610475

Option 2 ID : 264330610476

Option 3 ID : 264330610478

Option 4 ID : 264330610477

Status : Answered

Chosen Option : 4

Q.20 Read the given statements and conclusions carefully. You have to take the given statements to be true even if they seem to be at variance from commonly known facts. You have to decide which conclusion/s logically follow/s from the given statements.

Statements: Some glass are pink. All pink are bags. Some bags are flowers.

Conclusion I: Some pink are glass.

Conclusion II: Some flowers are bags.

- Ans
- 1. Only conclusion (II) is follow.
 - 2. Neither conclusion (I) nor (II) is follow.
 - 3. Only conclusion (I) is follow.
 - 4. Both conclusions (I) and (II) are follow.

Question ID : 264330155896

Option 1 ID : 264330610988

Option 2 ID : 264330610989

Option 3 ID : 264330610987

Option 4 ID : 264330610990

Status : Answered

Chosen Option : 4

Section : General Awareness

Q.1 What is the most powerful weapon that enables the Parliament to ensure executive accountability?

- Ans
- 1. Approval or refusal of laws
 - 2. The no-confidence motion
 - 3. Confirmation of treaties
 - 4. Deliberation and discussion

Question ID : 264330161293

Option 1 ID : 264330632500

Option 2 ID : 264330632502

Option 3 ID : 264330632501

Option 4 ID : 264330632499

Status : Not Attempted and Marked For Review

Chosen Option : --

Q.2 Where is the Mahabodhi temple situated?

- Ans 1. Varanasi
 2. Bodh Gaya
 3. Patna
 4. Agra

Question ID : 264330160762
Option 1 ID : 264330630379
Option 2 ID : 264330630382
Option 3 ID : 264330630381
Option 4 ID : 264330630380
Status : Answered
Chosen Option : 2

Q.3 Which African leader wrote the autobiography ' Long Walk to Freedom'?

- Ans 1. Robert Mugabe
 2. Nelson Mandela
 3. Muammar Gaddafi
 4. Desmond Tutu

Question ID : 264330160959
Option 1 ID : 264330631169
Option 2 ID : 264330631167
Option 3 ID : 264330631170
Option 4 ID : 264330631168
Status : Answered
Chosen Option : 2

Q.4 In which year was the Training of Rural Youth for Self Employment (TRYSEM) scheme launched by Government of India?

- Ans 1. 1991
 2. 2000
 3. 1979
 4. 1965

Question ID : 264330161575
Option 1 ID : 264330633628
Option 2 ID : 264330633630
Option 3 ID : 264330633627
Option 4 ID : 264330633629
Status : Not Attempted and Marked For Review
Chosen Option : --

Q.5 Under the Chief Minister Learn and Earn Scheme of Madhya Pradesh, the government will NOT provide which of the following?

- Ans 1. Financial assistance
 2. Training
 3. Laptops
 4. Employable skills

Question ID : 264330158331
Option 1 ID : 264330620684
Option 2 ID : 264330620686
Option 3 ID : 264330620685
Option 4 ID : 264330620683
Status : Answered
Chosen Option : 1

Q.6 Noted dance historian Dr. Sunil Kothari was awarded Madhabdev Award in 2019 by the Government of Assam for popularising which dance form of the state?

- Ans**
- 1. Bihu
 - 2. Bagurumba
 - 3. Sattriya
 - 4. Ojapali

Question ID : 264330155488

Option 1 ID : 264330609355

Option 2 ID : 264330609358

Option 3 ID : 264330609356

Option 4 ID : 264330609357

Status : **Not Attempted and Marked For Review**

Chosen Option : --

Q.7 What is the usual term used to describe the climate of India?

- Ans**
- 1. Polar climate
 - 2. Tropical monsoon
 - 3. Desert climate
 - 4. Arid climate

Question ID : 264330157825

Option 1 ID : 264330618660

Option 2 ID : 264330618662

Option 3 ID : 264330618659

Option 4 ID : 264330618661

Status : **Answered**

Chosen Option : 2

Q.8 Dandari (Dancing) troupes perform _____ during the festival of Diwali for a fortnight with participation from Kolam and Raj Gond tribes.

- Ans**
- 1. Chhau
 - 2. Baiga Pardhoni
 - 3. Ghusadi
 - 4. Rout Nacha

Question ID : 264330160853

Option 1 ID : 264330630745

Option 2 ID : 264330630746

Option 3 ID : 264330630744

Option 4 ID : 264330630743

Status : **Answered**

Chosen Option : 4

Q.9 How many gold medals did India win at the ISSF Junior World Cup 2023?

- Ans
- 1. 7
 - 2. 8
 - 3. 5
 - 4. 6

Question ID : 264330161130

Option 1 ID : 264330631852

Option 2 ID : 264330631854

Option 3 ID : 264330631853

Option 4 ID : 264330631851

Status : Not Attempted and
Marked For Review

Chosen Option : --

Q.10 _____ is the first Indian woman to have won a Grammy.

- Ans
- 1. Tanvi Shah
 - 2. Shalmali Kholgade
 - 3. Palak Muchhal
 - 4. Shilpa Rao

Question ID : 264330155472

Option 1 ID : 264330609293

Option 2 ID : 264330609291

Option 3 ID : 264330609292

Option 4 ID : 264330609294

Status : Answered

Chosen Option : 1

Q.11 Which Indian musician personality's native place is West Bengal?

- Ans
- 1. Naushad
 - 2. OP Nayyar
 - 3. Ilayaraja
 - 4. Bappi Lahiri

Question ID : 264330162236

Option 1 ID : 264330636273

Option 2 ID : 264330636274

Option 3 ID : 264330636272

Option 4 ID : 264330636271

Status : Answered

Chosen Option : 4

Q.12 According to the Census of India 2011, which State/Union Territory has the lowest sex ratio?

- Ans
- 1. Punjab
 - 2. Lakshadweep
 - 3. Daman and Diu
 - 4. Haryana

Question ID : 264330160154
Option 1 ID : 264330627955
Option 2 ID : 264330627956
Option 3 ID : 264330627957
Option 4 ID : 264330627958
Status : Answered
Chosen Option : 4

Q.13 Which of the following is an autobiography of the famous cricketer Sourav Ganguly?

- Ans
- 1. A Shot at History
 - 2. The Dream of Revolution
 - 3. A Century is not enough
 - 4. Memories of My Life and Times

Question ID : 264330162283
Option 1 ID : 264330636459
Option 2 ID : 264330636460
Option 3 ID : 264330636461
Option 4 ID : 264330636462
Status : Answered
Chosen Option : 3

Q.14 Consider the following statement about the Government of India Act, 1935.

1. This act was enacted by the British Parliament.
2. This Act was divided into two separate acts for India and Burma Government.
3. This act was commenced from the 1 April 1935.

Select the correct statement(s) using the code given below.

- Ans
- 1. Both 1 and 2
 - 2. 1, 2 and 3
 - 3. Both 2 and 3
 - 4. Both 1 and 3

Question ID : 264330160879
Option 1 ID : 264330630847
Option 2 ID : 264330630850
Option 3 ID : 264330630849
Option 4 ID : 264330630848
Status : Not Attempted and Marked For Review
Chosen Option : --

Q.15 Who among the following established a unit of horsepower that is equal to one horse doing 33,000 foot - pounds of work in one minute?

- Ans
- 1. James Black
 - 2. James Croll
 - 3. James Watt
 - 4. James Dwight Dana

Question ID : 264330161401
Option 1 ID : 264330632932
Option 2 ID : 264330632933
Option 3 ID : 264330632931
Option 4 ID : 264330632934
Status : Answered
Chosen Option : 3

Q.16 In which year was the 42nd Constitutional Amendment Act passed?

- Ans
- 1. 1978
 - 2. 1976
 - 3. 1998
 - 4. 1986

Question ID : 264330159898
Option 1 ID : 264330626940
Option 2 ID : 264330626939
Option 3 ID : 264330626942
Option 4 ID : 264330626941
Status : Answered
Chosen Option : 2

Q.17 Who among the following leaders led the Revolt of 1857 in Bihar?

- Ans
- 1. Rajendra Prasad
 - 2. Devi Singh
 - 3. Rajkumar Shukla
 - 4. Kunwar Singh

Question ID : 264330162325
Option 1 ID : 264330636629
Option 2 ID : 264330636627
Option 3 ID : 264330636630
Option 4 ID : 264330636628
Status : Answered
Chosen Option : 4

Q.18 Shri Jagannathji Mela is held at _____.

- Ans
- 1. Cuttack
 - 2. Sambalpur
 - 3. Jaipur
 - 4. Alwar

Question ID : 264330159087
Option 1 ID : 264330623708
Option 2 ID : 264330623710
Option 3 ID : 264330623709
Option 4 ID : 264330623707
Status : Answered
Chosen Option : 1

Q.19 _____ literally means 'dance of the enchantress'. It is one of the most striking in the Indian classical dance repertoire.

- Ans
- 1. Kuchipudi
 - 2. Mohiniyattam
 - 3. Kathakali
 - 4. Bharatanatyam

Question ID : 264330160789
Option 1 ID : 264330630490
Option 2 ID : 264330630488
Option 3 ID : 264330630487
Option 4 ID : 264330630489
Status : Answered
Chosen Option : 3

Q.20 The important milestones of the SHG Bank linkage movement was spearheaded by _____ with support from RBI.

- Ans
- 1. SEBI
 - 2. Indian Bank
 - 3. NABARD
 - 4. Cooperative Bank

Question ID : 264330161454
Option 1 ID : 264330633144
Option 2 ID : 264330633143
Option 3 ID : 264330633145
Option 4 ID : 264330633146
Status : Not Attempted and Marked For Review
Chosen Option : --

Q.21 Narendra Modi Cricket Stadium is one of the premier stadiums in India located at _____.

- Ans
- 1. Ahmedabad
 - 2. New Delhi
 - 3. Baroda
 - 4. Surat

Question ID : 264330158241
Option 1 ID : 264330620323
Option 2 ID : 264330620324
Option 3 ID : 264330620325
Option 4 ID : 264330620326
Status : Answered
Chosen Option : 1

Q.22 The pre-monsoon showers are known as _____ in Kerala and Karnataka.

- Ans
- 1. tea showers
 - 2. grapes showers
 - 3. banana showers
 - 4. mango showers

Question ID : 264330161515

Option 1 ID : 264330633387

Option 2 ID : 264330633390

Option 3 ID : 264330633389

Option 4 ID : 264330633388

Status : Not Attempted and
Marked For Review

Chosen Option : --

Q.23 Insufficient levels of parathyroid hormone and low amount of calcium in the blood causes which of the following conditions?

- Ans
- 1. Malaria
 - 2. Anaemia
 - 3. Diabetes
 - 4. Hypocalcemia

Question ID : 264330156612

Option 1 ID : 264330613838

Option 2 ID : 264330613836

Option 3 ID : 264330613837

Option 4 ID : 264330613835

Status : Not Attempted and
Marked For Review

Chosen Option : --

Q.24 Team Rest of India won Irani Cup in 2023. Irani Cup was hosted in which state?

- Ans
- 1. Madhya Pradesh
 - 2. West Bengal
 - 3. Bihar
 - 4. Uttar Pradesh

Question ID : 264330158353

Option 1 ID : 264330620772

Option 2 ID : 264330620774

Option 3 ID : 264330620771

Option 4 ID : 264330620773

Status : Answered

Chosen Option : 1

Q.25 What is a dimension related to the sustainability of microfinance institutions in India?

Ans 1. Dependency on donor funding

2. Limited social impact

3. High-profit margins

4. Excessive interest rates

Question ID : 264330157294

Option 1 ID : 264330616540

Option 2 ID : 264330616542

Option 3 ID : 264330616539

Option 4 ID : 264330616541

Status : Answered

Chosen Option : 1

Section : English Language and Comprehension

Q.1 The sentence given below contains some spelling errors. Select the option that has the correct spellings.

Members of the association have successfully climbed several peaks of the Himalayan range.

Ans 1. Members of the associattion have succesfully climbed several paeks of the Himalayan range.

2. Meembers of the associatiion have successfully climbed several peaks of the Himalayan range.

3. Members of the associasion have succesfully climbed several paiks of the Himalayan range.

4. Members of the association have successfully climbed several peaks of the Himalayan range.

Question ID : 264330153541

Option 1 ID : 264330601667

Option 2 ID : 264330601669

Option 3 ID : 264330601670

Option 4 ID : 264330601668

Status : Answered

Chosen Option : 4

Q.2 Choose the sentence that contains an error.

Ans 1. The Mona Lisa is a famous painting by Leonardo da Vinci.

2. She is the only person who can speak five languages fluently.

3. He is a doctor who specialises in the treating rare diseases.

4. I saw the movie that won the Academy Award for Best Picture.

Question ID : 264330155180

Option 1 ID : 264330608179

Option 2 ID : 264330608181

Option 3 ID : 264330608182

Option 4 ID : 264330608180

Status : Answered

Chosen Option : 3

Q.3 The following sentence has been split into four segments. Identify the segment that contains a spelling error.
The conference / attempts to / trace the processes and / consequences of climate change.

- Ans 1. consequences of climate change
 2. The conference
 3. attempts to
 4. trace the processes and

Question ID : 264330155314
Option 1 ID : 264330608698
Option 2 ID : 264330608695
Option 3 ID : 264330608696
Option 4 ID : 264330608697
Status : Answered
Chosen Option : 2

Q.4 Select the word segment which substitutes the bracketed word correctly and completes the sentence meaningfully.
Mathematics (are not) easy to learn.

- Ans 1. were not
 2. was not
 3. has not
 4. is not

Question ID : 264330152567
Option 1 ID : 264330597873
Option 2 ID : 264330597872
Option 3 ID : 264330597874
Option 4 ID : 264330597871
Status : Answered
Chosen Option : 4

Q.5 Select the option that can be used as a one-word substitute for the given group of words.

The action of formally accusing a public official of a serious offence

- Ans 1. Impeachment
 2. Condemnation
 3. Summon
 4. Allegation

Question ID : 264330151870
Option 1 ID : 264330595099
Option 2 ID : 264330595101
Option 3 ID : 264330595100
Option 4 ID : 264330595102
Status : Answered
Chosen Option : 1

Q.6 Select the option that can be used as a one-word substitute for the given group of words.

A number which is used to divide another number

- Ans
- 1. Divisible
 - 2. Quotient
 - 3. Remainder
 - 4. Divisor

Question ID : 264330153456

Option 1 ID : 264330601341

Option 2 ID : 264330601340

Option 3 ID : 264330601342

Option 4 ID : 264330601339

Status : Answered

Chosen Option : 4

Q.7 Select the most appropriate meaning of the given idiom.

To cut someone some slack

- Ans
- 1. Avoid talking about problems till the very end
 - 2. To get the conversation going
 - 3. To criticise someone very strictly
 - 4. To not manage someone very strictly or critically

Question ID : 264330153009

Option 1 ID : 264330599608

Option 2 ID : 264330599609

Option 3 ID : 264330599607

Option 4 ID : 264330599610

Status : Answered

Chosen Option : 3

Q.8 Select the most appropriate idiom to fill in the blank.
Our trainer asked for _____ on her for the next informative session.

- Ans
- 1. chasing rainbows
 - 2. being around the bend
 - 3. all eyes and ears
 - 4. going bananas

Question ID : 264330153561

Option 1 ID : 264330601745

Option 2 ID : 264330601744

Option 3 ID : 264330601743

Option 4 ID : 264330601746

Status : Answered

Chosen Option : 3

Q.9 Select the INCORRECTLY spelt word in the given sentence.
Children below the age of 14 were not allowed to participate in the cooking competition.

- Ans
- 1. Competition
 - 2. Partisipate
 - 3. Children
 - 4. Allowed

Question ID : 264330153301
Option 1 ID : 264330600762
Option 2 ID : 264330600761
Option 3 ID : 264330600759
Option 4 ID : 264330600760
Status : Answered
Chosen Option : 2

Q.10 The following sentence has been split into four segments. Identify the segment that contains a grammatical error.
After I complete my training program / I will have been joining a team of astronauts / and preparing to / embark on a mission to Mars.

- Ans
- 1. I will have been joining a team of astronauts
 - 2. embark on a mission to Mars
 - 3. and preparing to
 - 4. After I complete my training program

Question ID : 264330144176
Option 1 ID : 264330564968
Option 2 ID : 264330564970
Option 3 ID : 264330564969
Option 4 ID : 264330564967
Status : Answered
Chosen Option : 3

Q.11 The given sentence contains an error. Select the option that correctly rectifies the error.
Earlier, he was feeling better, but things took a turn for the bad.

- Ans
- 1. Earlier, he was feeling better, but things took a turn for the worst.
 - 2. Earlier, he was feeling good, but things took a turn for the bad.
 - 3. Earlier, he was feeling well, but things took a turn for the ill.
 - 4. Earlier, he was feeling better, but things took a turn for the ill.

Question ID : 264330152609
Option 1 ID : 264330598040
Option 2 ID : 264330598041
Option 3 ID : 264330598039
Option 4 ID : 264330598042
Status : Answered
Chosen Option : 1

Q.12 Select the most appropriate meaning of the given idiom.

Blessing in disguise

- Ans 1. Something that seems good but is harmful for you
 2. Something that seems bad but provides some benefit
 3. Something that cannot be hidden from anyone
 4. Something that remains hidden from everyone

Question ID : 264330153010
Option 1 ID : 264330599611
Option 2 ID : 264330599612
Option 3 ID : 264330599613
Option 4 ID : 264330599614
Status : Answered
Chosen Option : 2

Q.13 Select the most appropriate ANTONYM of the given word.

Break

- Ans 1. Divide
 2. Mend
 3. Split
 4. Breach

Question ID : 264330153556
Option 1 ID : 264330601725
Option 2 ID : 264330601724
Option 3 ID : 264330601726
Option 4 ID : 264330601723
Status : Answered
Chosen Option : 2

Q.14 Select the option that can be used as a one-word substitute for the given group of words.

A place of burial

- Ans 1. Building
 2. Laboratory
 3. Cemetery
 4. Observatory

Question ID : 264330153360
Option 1 ID : 264330600994
Option 2 ID : 264330600992
Option 3 ID : 264330600991
Option 4 ID : 264330600993
Status : Answered
Chosen Option : 3

Q.15 Select the most appropriate ANTONYM of the given word.
Forthcoming

- Ans
- 1. Large
 - 2. Extensive
 - 3. Adventurous
 - 4. Past

Question ID : 264330151912
Option 1 ID : 264330595265
Option 2 ID : 264330595264
Option 3 ID : 264330595266
Option 4 ID : 264330595263
Status : Answered
Chosen Option : 4

Q.16 Parts of the following sentence have been given as options. Select the option that contains an error.

I will celebrating New Year at my old residence as usual.

- Ans
- 1. I
 - 2. will celebrating
 - 3. New Year
 - 4. at my old residence as usual.

Question ID : 264330155229
Option 1 ID : 264330608371
Option 2 ID : 264330608372
Option 3 ID : 264330608373
Option 4 ID : 264330608374
Status : Answered
Chosen Option : 2

Q.17 The following sentence has been divided into parts. One of them may contain an error. Select the part that contains the error from the given options. If you don't find any error, mark 'No error' as your answer.
Why don't / you throw this / paper on the dust bin?

- Ans
- 1. paper on the dust bin
 - 2. No error
 - 3. you throw this
 - 4. Why don't

Question ID : 264330150527
Option 1 ID : 264330589753
Option 2 ID : 264330589754
Option 3 ID : 264330589752
Option 4 ID : 264330589751
Status : Answered
Chosen Option : 1

Q.18 Select the most appropriate meaning of the given idiom.
Beat around the bush

- Ans**
- 1. To be persistent in pursuing a goal
 - 2. To be impatient and short-tempered
 - 3. To be direct and formal
 - 4. To avoid addressing a topic correctly

Question ID : 264330143943
Option 1 ID : 264330564037
Option 2 ID : 264330564038
Option 3 ID : 264330564035
Option 4 ID : 264330564036
Status : Answered
Chosen Option : 4

Q.19 Select the most appropriate option to fill in the blank.
Her stories paid _____ to her mother, whom she regarded as the goddess of bravery.

- Ans**
- 1. frustration
 - 2. sainthood
 - 3. absoluteness
 - 4. homage

Question ID : 264330153552
Option 1 ID : 264330601707
Option 2 ID : 264330601710
Option 3 ID : 264330601708
Option 4 ID : 264330601709
Status : Answered
Chosen Option : 4

Q.20 Select the most appropriate synonym of the given word.
Amicable

- Ans**
- 1. Friendly
 - 2. Proud
 - 3. Generous
 - 4. Harsh

Question ID : 264330152749
Option 1 ID : 264330598596
Option 2 ID : 264330598597
Option 3 ID : 264330598598
Option 4 ID : 264330598595
Status : Answered
Chosen Option : 1

Comprehension:

In the following passage, some words have been deleted. Read the passage carefully and select the most appropriate option to fill in each blank.

Once, there was a boy who became bored when he watched over the village sheep (1)_____ on the hillside. To entertain himself, he sang out, "Wolf! Wolf! The wolf is chasing the sheep!" When the villagers heard the cry, they came (2)_____ the hill to drive the wolf away. But, when they arrived, they saw no wolf. The boy was amused when seeing their angry faces. "Don't scream wolf, boy," warned the villagers, "when there is no wolf!" They angrily went back down the hill. Later, the shepherd boy cried out once again, "Wolf! Wolf! The wolf is chasing the sheep!" When the villagers came, they saw there was no wolf, they said strictly, "Save your (3)_____ cry for when there is really a wolf! Don't cry 'wolf' when there is no wolf!" Later, the boy saw a real wolf sneaking around his flock. Alarmed, he jumped on his feet and cried out as loud as he could, "Wolf! Wolf!" But the villagers thought he was (4)_____ them again, and so they didn't come to help. At sunset, the villagers went looking for the boy who hadn't returned with their sheep. When they went up the hill, they found him (5)_____ as all the sheep were dead.

SubQuestion No : 21

Q.21 Select the most appropriate option to fill in blank number 1.

- Ans 1. laughing
 2. receiving
 3. assisting
 4. grazing

Question ID : 264330153531

Option 1 ID : 264330601627

Option 2 ID : 264330601630

Option 3 ID : 264330601628

Option 4 ID : 264330601629

Status : Answered

Chosen Option : 4

Comprehension:

In the following passage, some words have been deleted. Read the passage carefully and select the most appropriate option to fill in each blank.

Once, there was a boy who became bored when he watched over the village sheep (1)_____ on the hillside. To entertain himself, he sang out, "Wolf! Wolf! The wolf is chasing the sheep!" When the villagers heard the cry, they came (2)_____ the hill to drive the wolf away. But, when they arrived, they saw no wolf. The boy was amused when seeing their angry faces. "Don't scream wolf, boy," warned the villagers, "when there is no wolf!" They angrily went back down the hill. Later, the shepherd boy cried out once again, "Wolf! Wolf! The wolf is chasing the sheep!" When the villagers came, they saw there was no wolf, they said strictly, "Save your (3)_____ cry for when there is really a wolf! Don't cry 'wolf' when there is no wolf!" Later, the boy saw a real wolf sneaking around his flock. Alarmed, he jumped on his feet and cried out as loud as he could, "Wolf! Wolf!" But the villagers thought he was (4)_____ them again, and so they didn't come to help. At sunset, the villagers went looking for the boy who hadn't returned with their sheep. When they went up the hill, they found him (5)_____ as all the sheep were dead.

SubQuestion No : 22

Q.22 Select the most appropriate option to fill in blank number 2.

- Ans 1. driving
 2. walking down
 3. running down
 4. running up

Question ID : 264330153532

Option 1 ID : 264330601632

Option 2 ID : 264330601633

Option 3 ID : 264330601634

Option 4 ID : 264330601631

Status : Answered

Chosen Option : 4

Comprehension:

In the following passage, some words have been deleted. Read the passage carefully and select the most appropriate option to fill in each blank.

Once, there was a boy who became bored when he watched over the village sheep (1)_____ on the hillside. To entertain himself, he sang out, "Wolf! Wolf! The wolf is chasing the sheep!" When the villagers heard the cry, they came (2)_____ the hill to drive the wolf away. But, when they arrived, they saw no wolf. The boy was amused when seeing their angry faces. "Don't scream wolf, boy," warned the villagers, "when there is no wolf!" They angrily went back down the hill. Later, the shepherd boy cried out once again, "Wolf! Wolf! The wolf is chasing the sheep!" When the villagers came, they saw there was no wolf, they said strictly, "Save your (3)_____ cry for when there is really a wolf! Don't cry 'wolf' when there is no wolf!" Later, the boy saw a real wolf sneaking around his flock. Alarmed, he jumped on his feet and cried out as loud as he could, "Wolf! Wolf!" But the villagers thought he was (4)_____ them again, and so they didn't come to help. At sunset, the villagers went looking for the boy who hadn't returned with their sheep. When they went up the hill, they found him (5)_____ as all the sheep were dead.

SubQuestion No : 23

Q.23 Select the most appropriate option to fill in blank number 3.

Ans 1. frightened

2. laughable

3. funny

4. muffled

Question ID : 264330153533

Option 1 ID : 264330601636

Option 2 ID : 264330601637

Option 3 ID : 264330601635

Option 4 ID : 264330601638

Status : Answered

Chosen Option : 1

Comprehension:

In the following passage, some words have been deleted. Read the passage carefully and select the most appropriate option to fill in each blank.

Once, there was a boy who became bored when he watched over the village sheep (1)_____ on the hillside. To entertain himself, he sang out, "Wolf! Wolf! The wolf is chasing the sheep!" When the villagers heard the cry, they came (2)_____ the hill to drive the wolf away. But, when they arrived, they saw no wolf. The boy was amused when seeing their angry faces. "Don't scream wolf, boy," warned the villagers, "when there is no wolf!" They angrily went back down the hill. Later, the shepherd boy cried out once again, "Wolf! Wolf! The wolf is chasing the sheep!" When the villagers came, they saw there was no wolf, they said strictly, "Save your (3)_____ cry for when there is really a wolf! Don't cry 'wolf' when there is no wolf!" Later, the boy saw a real wolf sneaking around his flock. Alarmed, he jumped on his feet and cried out as loud as he could, "Wolf! Wolf!" But the villagers thought he was (4)_____ them again, and so they didn't come to help. At sunset, the villagers went looking for the boy who hadn't returned with their sheep. When they went up the hill, they found him (5)_____ as all the sheep were dead.

SubQuestion No : 24

Q.24 Select the most appropriate option to fill in blank number 4.

Ans 1. fooling

2. questioning

3. fighting

4. seeing

Question ID : 264330153534

Option 1 ID : 264330601642

Option 2 ID : 264330601640

Option 3 ID : 264330601639

Option 4 ID : 264330601641

Status : Answered

Chosen Option : 1

Comprehension:

In the following passage, some words have been deleted. Read the passage carefully and select the most appropriate option to fill in each blank.

Once, there was a boy who became bored when he watched over the village sheep (1)_____ on the hillside. To entertain himself, he sang out, "Wolf! Wolf! The wolf is chasing the sheep!" When the villagers heard the cry, they came (2)_____ the hill to drive the wolf away. But, when they arrived, they saw no wolf. The boy was amused when seeing their angry faces. "Don't scream wolf, boy," warned the villagers, "when there is no wolf!" They angrily went back down the hill. Later, the shepherd boy cried out once again, "Wolf! Wolf! The wolf is chasing the sheep!" When the villagers came, they saw there was no wolf, they said strictly, "Save your (3)_____ cry for when there is really a wolf! Don't cry 'wolf' when there is no wolf!" Later, the boy saw a real wolf sneaking around his flock. Alarmed, he jumped on his feet and cried out as loud as he could, "Wolf! Wolf!" But the villagers thought he was (4)_____ them again, and so they didn't come to help. At sunset, the villagers went looking for the boy who hadn't returned with their sheep. When they went up the hill, they found him (5)_____ as all the sheep were dead.

SubQuestion No : 25

Q.25 Select the most appropriate option to fill in blank number 5.

- Ans 1. singing
 2. happy
 3. dancing
 4. weeping

Question ID : 264330153535

Option 1 ID : 264330601644

Option 2 ID : 264330601646

Option 3 ID : 264330601645

Option 4 ID : 264330601643

Status : Answered

Chosen Option : 4

Multi Tasking Non Technical Staff and Havaladar CBIC and CBN Examination 2023

Roll Number	
Candidate Name	
Venue Name	iON Digital Zone iDZ Karsua
Exam Date	05/09/2023
Exam Time	9:00 AM - 11:00 AM
Subject	MTS Non Tech Havaladar CBIC and CBN Examination 2023

Section : Numerical and Mathematical Ability

Q.1 Apples are bought at 25 for ₹250 and sold at 30 for ₹390. What is the profit/loss percentage in this transaction?

- Ans**
- 1. 25% Profit
 - 2. 30% Profit
 - 3. 25% Loss
 - 4. 30% Loss

Question ID : 264330155707
Option 1 ID : 264330610231
Option 2 ID : 264330610233
Option 3 ID : 264330610232
Option 4 ID : 264330610234
Status : Answered
Chosen Option : 1

Q.2 The average height of a class of 50 students is 170 cm. What will be the average height (in cm, rounded off to the nearest integer) of the rest of the students if the average height of 15 of the students is 180 cm?

- Ans**
- 1. 162
 - 2. 166
 - 3. 175
 - 4. 174

Question ID : 264330153761
Option 1 ID : 264330602510
Option 2 ID : 264330602508
Option 3 ID : 264330602507
Option 4 ID : 264330602509
Status : Answered
Chosen Option : 2

Q.3 A sum of ₹5,345, when invested at a certain rate of simple interest per annum for 10 years, earns an interest of ₹2,672.50 on maturity. What is the rate of simple interest per annum?

- Ans**
- 1. 4.5%
 - 2. 8%
 - 3. 5%
 - 4. 6.5%

Question ID : 264330156486
Option 1 ID : 264330613333
Option 2 ID : 264330613331
Option 3 ID : 264330613332
Option 4 ID : 264330613334
Status : Answered
Chosen Option : 3

Q.4 Find the number of solid lead balls each 2 cm in diameter that can be made from solid sphere made up of lead of diameter 14 cm.

- Ans**
- 1. 433
 - 2. 343
 - 3. 430
 - 4. 340

Question ID : 264330156017
Option 1 ID : 264330611469
Option 2 ID : 264330611468
Option 3 ID : 264330611467
Option 4 ID : 264330611470
Status : Answered
Chosen Option : 2

Q.5 The speed of a boat in still water is 30 km/h and the speed of the stream is 7.5 km/h. What is the time in hours taken by the boat in the stream to go from point A to B and then back to A covering a total distance of 90 km?

- Ans**
- 1. 3.2
 - 2. 2.8
 - 3. 3.4
 - 4. 3.0

Question ID : 264330153814
Option 1 ID : 264330602721
Option 2 ID : 264330602719
Option 3 ID : 264330602722
Option 4 ID : 264330602720
Status : Answered
Chosen Option : 2

Q.6 What is the average of the first 13 multiples of 3?

- Ans
- 1. 21
 - 2. 39
 - 3. 42
 - 4. 35

Question ID : 264330155725
 Option 1 ID : 264330610304
 Option 2 ID : 264330610303
 Option 3 ID : 264330610306
 Option 4 ID : 264330610305
 Status : Answered
 Chosen Option : 1

Q.7 ₹1,250 at 12% per annum compounded annually will amount to ₹1,568 in:

- Ans
- 1. 4 years
 - 2. 1 year
 - 3. 2 years
 - 4. 3 years

Question ID : 264330153880
 Option 1 ID : 264330602986
 Option 2 ID : 264330602983
 Option 3 ID : 264330602984
 Option 4 ID : 264330602985
 Status : Not Answered
 Chosen Option : --

Q.8 The speed of a car is 90 km/h. The distance covered by the car in 7 Seconds will be:

- Ans
- 1. 172 metres
 - 2. 175 metres
 - 3. 170 metres
 - 4. 180 metres

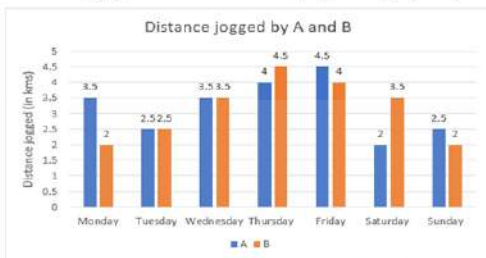
Question ID : 264330155968
 Option 1 ID : 264330611274
 Option 2 ID : 264330611273
 Option 3 ID : 264330611272
 Option 4 ID : 264330611271
 Status : Answered
 Chosen Option : 2

Q.9 Anil works 3 times as fast as Sumit. If Sumit can complete a work in 12 days independently, then the number of days in which Anil and Sumit can together finish the work will be:

- Ans**
- 1. 2
 - 2. 3
 - 3. 4
 - 4. 5

Question ID : 264330156236
Option 1 ID : 264330612343
Option 2 ID : 264330612344
Option 3 ID : 264330612345
Option 4 ID : 264330612346
Status : Answered
Chosen Option : 2

Q.10 The following graph refers to the distance jogged daily by two persons A and B.



If 100 calories are burnt by jogging 1 km, what is the difference between the calories burnt by A and B in the given week?

- Ans**
- 1. 150 calories
 - 2. 10 calories
 - 3. 100 calories
 - 4. 50 calories

Question ID : 264330154099
Option 1 ID : 264330603861
Option 2 ID : 264330603862
Option 3 ID : 264330603860
Option 4 ID : 264330603859
Status : Answered
Chosen Option : 4

Q.11 Vaishali booked a bus ticket for ₹1,260. Because of her ill health, she had to cancel the ticket. She got a refund of ₹945 in this process. What is the percentage loss that Vaishali had to face?

- Ans**
- 1. 23%
 - 2. 15%
 - 3. 25%
 - 4. 33%

Question ID : 264330155703
Option 1 ID : 264330610216
Option 2 ID : 264330610215
Option 3 ID : 264330610217
Option 4 ID : 264330610218
Status : Answered
Chosen Option : 3

Q.12 Three numbers are in the ratio of 3 : 4 : 5 and their HCF is 18. What is the sum of these numbers?

- Ans**
- 1. 198
 - 2. 216
 - 3. 234
 - 4. 180

Question ID : **264330155683**
Option 1 ID : **264330610136**
Option 2 ID : **264330610137**
Option 3 ID : **264330610138**
Option 4 ID : **264330610135**
Status : **Answered**
Chosen Option : **2**

Q.13 If two varieties of a grain worth ₹202 per kg and ₹250 per kg, respectively, are mixed in the ratio of 7 : 5, then what is the cost (in ₹) of the resulting mixture per kg?

- Ans**
- 1. 225
 - 2. 218
 - 3. 222
 - 4. 220

Question ID : **264330155693**
Option 1 ID : **264330610178**
Option 2 ID : **264330610175**
Option 3 ID : **264330610177**
Option 4 ID : **264330610176**
Status : **Not Answered**
Chosen Option : **--**

Q.14 Akash is thrice as good a workman as Arvind and therefore is able to finish a job in 30 days less than Arvind. If they work together, in how many days can they finish the job?

- Ans**
- 1. $11\frac{1}{4}$
 - 2. $11\frac{3}{4}$
 - 3. $12\frac{3}{4}$
 - 4. $12\frac{1}{4}$

Question ID : **264330156117**
Option 1 ID : **264330611867**
Option 2 ID : **264330611868**
Option 3 ID : **264330611870**
Option 4 ID : **264330611869**
Status : **Not Answered**
Chosen Option : **--**

Q.15 Find the value of x if $15\frac{2}{3} \times 3\frac{1}{6} + 6\frac{1}{3} = 11\frac{7}{18} + x$

- Ans
- 1. $137\frac{4}{9}$
 - 2. $44\frac{5}{9}$
 - 3. $29\frac{7}{9}$
 - 4. $39\frac{5}{9}$

Question ID : 264330156335
Option 1 ID : 264330612740
Option 2 ID : 264330612742
Option 3 ID : 264330612741
Option 4 ID : 264330612739
Status : Answered
Chosen Option : 2

Q.16 The following table gives the number of employees in different departments of an organisation and percentage of females and males. Study the table carefully and answer the question.

Department	Total No. of employees	% of females	% of males
IT	640	45	55
Accounts	220	40	60
Production	800	30	70
HR	360	65	35
Marketing	400	40	60

Find the ratio of the number of females in production and HR departments together to the number of males in the IT and Accounts departments together.

- Ans
- 1. 237 : 242
 - 2. 227 : 323
 - 3. 235 : 330
 - 4. 235 : 340

Question ID : 264330156013
Option 1 ID : 264330611453
Option 2 ID : 264330611452
Option 3 ID : 264330611451
Option 4 ID : 264330611454
Status : Answered
Chosen Option : 1

Q.17 What is the total surface area (in cm^2) of a cone with a base radius of 28 cm and height of 45 cm? (use $\pi = \frac{22}{7}$)

- Ans
- 1. 8168
 - 2. 6288
 - 3. 7128
 - 4. 9216

Question ID : 264330156540
 Option 1 ID : 264330613547
 Option 2 ID : 264330613550
 Option 3 ID : 264330613548
 Option 4 ID : 264330613549
 Status : Answered
 Chosen Option : 4

Q.18 Arrange the ratios in ascending order $5 : 3\frac{1}{3}$, $6\frac{1}{4} : 3\frac{1}{8}$ and $3.5 : 4.5$.

- Ans
- 1. $3.5 : 4.5 < 5 : 3\frac{1}{3} < 6\frac{1}{4} : 3\frac{1}{8}$
 - 2. $6\frac{1}{4} : 3\frac{1}{8} < 5 : 3\frac{1}{3} < 3.5 : 4.5$
 - 3. $5 : 3\frac{1}{3} < 3.5 : 4.5 < 6\frac{1}{4} : 3\frac{1}{8}$
 - 4. $5 : 3\frac{1}{3} < 6\frac{1}{4} : 3\frac{1}{8} < 3.5 : 4.5$

Question ID : 264330153766
 Option 1 ID : 264330602530
 Option 2 ID : 264330602527
 Option 3 ID : 264330602528
 Option 4 ID : 264330602529
 Status : Not Answered
 Chosen Option : --

Q.19 If $15x = 24y = 32z$, then $x : y : z$ is equal to:

- Ans
- 1. 32 : 15 : 20
 - 2. 15 : 24 : 32
 - 3. 32 : 20 : 15
 - 4. 24 : 15 : 4

Question ID : 264330153875
 Option 1 ID : 264330602965
 Option 2 ID : 264330602964
 Option 3 ID : 264330602966
 Option 4 ID : 264330602963
 Status : Not Answered
 Chosen Option : --

Q.20 The incomes of P, Q and R are in the ratio of 9 : 15 : 10 and their savings are in the ratio is 10 : 15 : 12. If R spends 60% of his income, what is the ratio of the expenditures of P, Q and R?

- Ans**
- 1. 18 : 17 : 30
 - 2. 17 : 30 : 18
 - 3. 17 : 18 : 30
 - 4. 18 : 30 : 17

Question ID : 264330153763
Option 1 ID : 264330602518
Option 2 ID : 264330602517
Option 3 ID : 264330602516
Option 4 ID : 264330602515
Status : Not Answered
Chosen Option : --

Section : Reasoning Ability and Problem Solving

Q.1 What should come in place of the question mark (?) in the given series based on the English alphabetical order?

MQA, NRE, OSI, PTM, ?

- Ans**
- 1. RVO
 - 2. QWN
 - 3. QUQ
 - 4. SUM

Question ID : 264330156297
Option 1 ID : 264330612588
Option 2 ID : 264330612587
Option 3 ID : 264330612589
Option 4 ID : 264330612590
Status : Answered
Chosen Option : 3

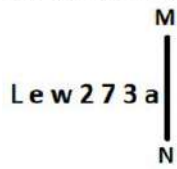
Q.2 Select the combination of letters that when sequentially placed in the blanks of the given series, will complete the series.

_ML_MLLM_L__

- Ans**
- 1. MLMML
 - 2. MMLMM
 - 3. LLLML
 - 4. LLMLM

Question ID : 264330151639
Option 1 ID : 264330594186
Option 2 ID : 264330594184
Option 3 ID : 264330594183
Option 4 ID : 264330594185
Status : Answered
Chosen Option : 3

Q.3 Select the correct mirror image of the given figure when the mirror is placed at MN as shown below.



- Ans
- 1.
 - 2.
 - 3.
 - 4.

Question ID : 264330151502

Option 1 ID : 264330593635

Option 2 ID : 264330593637

Option 3 ID : 264330593636

Option 4 ID : 264330593638

Status : Answered

Chosen Option : 2

Q.4 Read the given statements and conclusions carefully. You have to take the given statements to be true even if they seem to be at variance from commonly known facts. You have to decide which conclusion/s logically follow/s from the given statements.

Statements: All needles are pins. Some pins are wood. All wood are cups.

Conclusion I: Some needles are wood.

Conclusion II: All cups are pins.

- Ans
- 1. Neither conclusion (I) nor (II) is follow.
 - 2. Only conclusion (II) is follow.
 - 3. Both conclusions (I) and (II) are follow.
 - 4. Only conclusion (I) is follow.

Question ID : 264330155930

Option 1 ID : 264330611125

Option 2 ID : 264330611124

Option 3 ID : 264330611126

Option 4 ID : 264330611123

Status : Answered

Chosen Option : 1

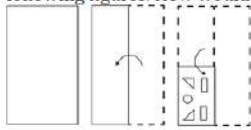
Prepare 50% Faster

Q.5 In the following number-pairs, the second number is obtained by applying certain mathematical operations to the first number. Select the set in which the numbers are related in the same way as are the numbers of the following sets.
(NOTE: Operations should be performed on the whole numbers, without breaking down the numbers into its constituent digits. E.g. 13 – Operations on 13 such as adding /deleting /multiplying etc. to 13 can be performed. Breaking down 13 into 1 and 3 and then performing mathematical operations on 1 and 3 is not allowed)
11 : 60
13 : 70

- Ans**
- 1. 19 : 90
 - 2. 15 : 80
 - 3. 17 : 85
 - 4. 21 : 100

Question ID : 264330154649
 Option 1 ID : 264330606062
 Option 2 ID : 264330606059
 Option 3 ID : 264330606060
 Option 4 ID : 264330606061
 Status : Answered
 Chosen Option : 2

Q.6 The sequence of folding a piece of paper and the manner in which the folded paper is cut is shown in the following figures. How would this paper look when unfolded?



Ans

- 1.
- 2.
- 3.
- 4.

Question ID : 264330155612
 Option 1 ID : 264330609852
 Option 2 ID : 264330609851
 Option 3 ID : 264330609853
 Option 4 ID : 264330609854
 Status : Answered
 Chosen Option : 3

Q.7 In a certain code language, 'get more sleep' is coded as 'wo bt gk' and 'less is more' is coded as 'ap gk cm'. How is 'more' coded in the given language?

- Ans**
- 1. wo
 - 2. cm
 - 3. bt
 - 4. gk

Question ID : 264330151704
Option 1 ID : 264330594446
Option 2 ID : 264330594444
Option 3 ID : 264330594443
Option 4 ID : 264330594445
Status : Answered
Chosen Option : 4

Q.8 In a certain code language, 'PING' is coded as '62' and 'HAZE' is coded as '68'. What is the code for 'GOAT' in the given code language?

- Ans**
- 1. 67
 - 2. 65
 - 3. 66
 - 4. 69

Question ID : 264330155833
Option 1 ID : 264330610736
Option 2 ID : 264330610738
Option 3 ID : 264330610737
Option 4 ID : 264330610735
Status : Answered
Chosen Option : 4

Q.9 Read the given statements and conclusions carefully. You have to take the given statements to be true even if they seem to be at variance from commonly known facts. You have to decide which conclusion/s logically follow/s from the given statements.

Statements: All jars are plastic. Some plastic are spoons. No spoon is a fork.

Conclusion I: Some plastic are jars.

Conclusion II: Some forks are spoons.

- Ans**
- 1. Only conclusion (II) is follow.
 - 2. Neither conclusion (I) nor (II) is follow.
 - 3. Only conclusion (I) is follow.
 - 4. Both conclusions (I) and (II) are follow.

Question ID : 264330155899
Option 1 ID : 264330611000
Option 2 ID : 264330611001
Option 3 ID : 264330610999
Option 4 ID : 264330611002
Status : Answered
Chosen Option : 3

Q.10 What should come in place of '?' in the given series?

11 44 143 440 1331 ?

- Ans
- 1. 3996
 - 2. 4118
 - 3. 4266
 - 4. 4004

Question ID : 264330151476
Option 1 ID : 264330593531
Option 2 ID : 264330593533
Option 3 ID : 264330593534
Option 4 ID : 264330593532
Status : Answered
Chosen Option : 4

Q.11 If G means '-', A means '×', F means '+', B means '+', then what will come in place of the question mark (?) in the following equation?

37 B 16 A 3 G 88 F 8 = ?

- Ans
- 1. 74
 - 2. 69
 - 3. 93
 - 4. 51

Question ID : 264330154685
Option 1 ID : 264330606205
Option 2 ID : 264330606204
Option 3 ID : 264330606206
Option 4 ID : 264330606203
Status : Answered
Chosen Option : 1

Q.12 KGTO is related to HDQL in a certain way based on the English alphabetical order. In the same way, YFSH is related to VCPE. To which of the following is GUMS related to, following the same logic?

- Ans
- 1. JXOU
 - 2. DSKP
 - 3. ESKU
 - 4. DRJP

Question ID : 264330151677
Option 1 ID : 264330594338
Option 2 ID : 264330594335
Option 3 ID : 264330594337
Option 4 ID : 264330594336
Status : Answered
Chosen Option : 4

Q.13 Select the combination of letters that when sequentially placed in the blanks of the given series, will complete the series.

_KL_K_KK__KL

- Ans**
- 1. KLLK
 - 2. LLKL
 - 3. KLLK
 - 4. LKLL

Question ID : 264330151636

Option 1 ID : 264330594171

Option 2 ID : 264330594174

Option 3 ID : 264330594173

Option 4 ID : 264330594172

Status : Answered

Chosen Option : 1

Q.14 What should come in place of '?' in the given series?

2 9 30 93 282 ?

- Ans**
- 1. 813
 - 2. 849
 - 3. 861
 - 4. 857

Question ID : 264330151465

Option 1 ID : 264330593487

Option 2 ID : 264330593488

Option 3 ID : 264330593490

Option 4 ID : 264330593489

Status : Answered

Chosen Option : 2

Q.15 N, O, P, Q, R, S, T and U are sitting around a square table facing the center of the table. Some of them are sitting at the corners while some are sitting at the exact center of the sides. N sits third to the left of U. U sits in any of the corners. O sits third to the right of T. T sits in one of the corners. Q is the immediate neighbour of P and U. P is not the neighbour of N. R is not T's neighbour.

How many people sit between P and R, when counted from the right of P?

- Ans**
- 1. Two
 - 2. Four
 - 3. One
 - 4. Three

Question ID : 264330155541

Option 1 ID : 264330609568

Option 2 ID : 264330609570

Option 3 ID : 264330609567

Option 4 ID : 264330609569

Status : Answered

Chosen Option : 3

Q.16 What will come in place of '?' in the following equation, if '+' and '-' are interchanged and 'x' and '+' are interchanged?

$$7 + 3 - 6 + 4 \times 4 = ?$$

- Ans
- ✓ 1. 10
 - ✗ 2. 7
 - ✗ 3. 4
 - ✗ 4. 15

Question ID : 264330154668
 Option 1 ID : 264330606138
 Option 2 ID : 264330606135
 Option 3 ID : 264330606136
 Option 4 ID : 264330606137
 Status : Answered
 Chosen Option : 1

Q.17 Which figure should replace the question mark (?) if the following figure series were to be continued?

X	□	L	B	X	F	3	C	X	□	3	L	
	3			L			B			X		?
8	C	F	C	□	3	□	F	L	F	C	8	

Ans

- ✓ 1.

8	F	3
	□	
C	L	X
- ✗ 2.

3	L	F
	□	
C	8	X
- ✗ 3.

F	C	3
	□	
X	8	L
- ✗ 4.

8	L	3
	□	
C	F	X

Question ID : 264330154760
 Option 1 ID : 264330606505
 Option 2 ID : 264330606503
 Option 3 ID : 264330606506
 Option 4 ID : 264330606504
 Status : Answered
 Chosen Option : 1

Q.18 Select the set in which the numbers are related in the same way as are the numbers of the following sets.
(NOTE: Operations should be performed on the whole numbers, without breaking down the numbers into its constituent digits. E.g. 13 – Operations on 13 such as adding / subtracting /multiplying etc. to 13 can be performed. Breaking down 13 into 1 and 3 and then performing mathematical operations on 1 and 3 is not allowed)
(2, 14, 28)
(7, 11, 77)

- Ans
- 1. 4, 7, 23
 - 2. 6, 9, 54
 - 3. 1, 7, 45
 - 4. 8, 6, 98

Question ID : 264330151614
Option 1 ID : 264330594083
Option 2 ID : 264330594085
Option 3 ID : 264330594084
Option 4 ID : 264330594086
Status : Answered
Chosen Option : 2

Q.19 What should come in place of '?' in the given series?

10 41 165 661 2645 ?

- Ans
- 1. 10597
 - 2. 10581
 - 3. 10604
 - 4. 10378

Question ID : 264330151480
Option 1 ID : 264330593549
Option 2 ID : 264330593548
Option 3 ID : 264330593550
Option 4 ID : 264330593547
Status : Answered
Chosen Option : 2

Q.20 If 5 October 2003 is a Sunday, then what will be the day of the week on 14 July 2010?

- Ans
- 1. Friday
 - 2. Monday
 - 3. Wednesday
 - 4. Saturday

Question ID : 264330154356
Option 1 ID : 264330604888
Option 2 ID : 264330604889
Option 3 ID : 264330604890
Option 4 ID : 264330604887
Status : Not Answered
Chosen Option : --

Q.1 What does the term 'interest' refer to in banking?

- Ans** 1. The additional amount earned on a loan or deposit
 2. The amount of money deposited into a bank account
 3. The value of a currency in relation to other currencies
 4. The fee charged for withdrawing money from an ATM

Question ID : 264330157299
Option 1 ID : 264330616561
Option 2 ID : 264330616560
Option 3 ID : 264330616562
Option 4 ID : 264330616559
Status : Answered
Chosen Option : 1

Q.2 Bihu is a folk dance of which state?

- Ans** 1. Bihar
 2. Assam
 3. Chhattisgarh
 4. Arunachal Pradesh

Question ID : 264330159055
Option 1 ID : 264330623579
Option 2 ID : 264330623581
Option 3 ID : 264330623582
Option 4 ID : 264330623580
Status : Answered
Chosen Option : 1

Q.3 In which year did Lord Curzon announce the partition of Bengal during the British rule in India?

- Ans** 1. 1904
 2. 1906
 3. 1905
 4. 1907

Question ID : 264330161737
Option 1 ID : 264330634275
Option 2 ID : 264330634277
Option 3 ID : 264330634276
Option 4 ID : 264330634278
Status : Answered
Chosen Option : 3

Q.4 Which of the following statements are correct regarding the Power Sector's Revamped Distribution Sector Scheme?

- 1) The Prime Minister launched the Ministry of Power's flagship Revamped Distribution Sector Scheme in 2022.
- 2) This scheme is aimed at improving the operational efficiencies and financial sustainability of distribution companies.
- 3) From FY 2022-23 to FY 2027-28, the scheme aims to provide financial assistance to DISCOMs.
- 4) This scheme proposes to provide 25 crore Smart Prepaid meters to consumers all over the country.

- Ans
- 1. 1, 3 and 4
 - 2. 1, 2 and 4
 - 3. 2, 3 and 4
 - 4. 1, 2 and 3

Question ID : 264330161404
Option 1 ID : 264330632944
Option 2 ID : 264330632945
Option 3 ID : 264330632946
Option 4 ID : 264330632943
Status : Answered
Chosen Option : 2

Q.5 'Mein Kampf' is the autobiography of which world personality?

- Ans
- 1. Adolf Hitler
 - 2. Robert Mugabe
 - 3. Albert Einstein
 - 4. Charlie Chaplin

Question ID : 264330160966
Option 1 ID : 264330631196
Option 2 ID : 264330631198
Option 3 ID : 264330631197
Option 4 ID : 264330631195
Status : Answered
Chosen Option : 1

Q.6 What is the geographic location of the world's largest coral reef, known as the Great Barrier Reef?

- Ans
- 1. Switzerland
 - 2. Australia
 - 3. China
 - 4. Ireland

Question ID : 264330161313
Option 1 ID : 264330632580
Option 2 ID : 264330632581
Option 3 ID : 264330632582
Option 4 ID : 264330632579
Status : Answered
Chosen Option : 2

Q.7 To which Gharana did Gangubai Hangal primarily belong?

- Ans
- 1. Patiala
 - 2. Agra
 - 3. Banaras
 - 4. Kirana

Question ID : 264330155467

Option 1 ID : 264330609273

Option 2 ID : 264330609274

Option 3 ID : 264330609271

Option 4 ID : 264330609272

Status : **Not Attempted and Marked For Review**

Chosen Option : --

Q.8 Popular since ancient eras for the trading of livestock, _____, which is a month-long event, takes place on the auspicious occasion of Kartik Purnima in the month of November near Harihar Nath temple.

- Ans
- 1. Sonepur Mela
 - 2. Rajgir Mela
 - 3. Pushkar Mela
 - 4. Ardhkumbh Mela

Question ID : 264330160835

Option 1 ID : 264330630671

Option 2 ID : 264330630673

Option 3 ID : 264330630672

Option 4 ID : 264330630674

Status : **Answered**

Chosen Option : 1

Q.9 How many states were selected in Garib Kalyan Rojgar Abhiyaan (GKRA) 2020?

- Ans
- 1. 16 states
 - 2. 6 states
 - 3. 10 states
 - 4. 8 states

Question ID : 264330160170

Option 1 ID : 264330628022

Option 2 ID : 264330628019

Option 3 ID : 264330628021

Option 4 ID : 264330628020

Status : **Not Answered**

Chosen Option : --

Q.10 The celebrated folk artist Gulabo Sapera, recipient of Padma Shri Award in 2016, is an exponent of _____ dance.

- Ans
- 1. Kalbeliya
 - 2. Tippani
 - 3. Bhavai
 - 4. Dandiya

Question ID : 264330155485
Option 1 ID : 264330609345
Option 2 ID : 264330609344
Option 3 ID : 264330609346
Option 4 ID : 264330609343
Status : Answered
Chosen Option : 4

Q.11 Which Indian musician was awarded the Grammy award for his Album 'Planet Drum'?

- Ans
- 1. Zakir Hussain
 - 2. Sivamani
 - 3. Darshan Doshi
 - 4. Trilok Gurtu

Question ID : 264330155461
Option 1 ID : 264330609247
Option 2 ID : 264330609248
Option 3 ID : 264330609250
Option 4 ID : 264330609249
Status : Answered
Chosen Option : 1

Q.12 Which of the following is NOT a part of the six communication mail channels in India?

- Ans
- 1. Metro channel
 - 2. Monthly channel
 - 3. Rajdhani channel
 - 4. Business channel

Question ID : 264330160144
Option 1 ID : 264330627918
Option 2 ID : 264330627916
Option 3 ID : 264330627915
Option 4 ID : 264330627917
Status : Answered
Chosen Option : 2

Q.13 Which of the following is an example of a non-debt capital receipt in the government budget?

- Ans 1. Sale of government-owned land
 2. Loans from international financial institutions
 3. Interest payment on government bonds
 4. Tax revenue collected from citizens

Question ID : 264330157279
Option 1 ID : 264330616480
Option 2 ID : 264330616479
Option 3 ID : 264330616482
Option 4 ID : 264330616481
Status : Answered
Chosen Option : 3

Q.14 Visva Bharati a famous educational institute was founded in 1921 by:

- Ans 1. Rabindranath Tagore
 2. Vinoba Bhave
 3. Mother Teresa
 4. Swami Chinmayananda

Question ID : 264330160885
Option 1 ID : 264330630874
Option 2 ID : 264330630872
Option 3 ID : 264330630873
Option 4 ID : 264330630871
Status : Answered
Chosen Option : 1

Q.15 How many women boxers from India won gold medals in the Women's World Boxing Championship 2023?

- Ans 1. 2
 2. 3
 3. 1
 4. 4

Question ID : 264330158225
Option 1 ID : 264330620260
Option 2 ID : 264330620261
Option 3 ID : 264330620259
Option 4 ID : 264330620262
Status : Answered
Chosen Option : 3

Q.16 Famous Bollywood actress Hema Malini is a trained _____ dancer.

- Ans 1. Kathak
 2. Bharatanatyam
 3. Odissi
 4. Kuchipudi

Question ID : 264330159066
Option 1 ID : 264330623626
Option 2 ID : 264330623625
Option 3 ID : 264330623624
Option 4 ID : 264330623623
Status : Answered
Chosen Option : 1

Q.17 Whose prior recommendation is required to introduce money bills in state legislature?

- Ans
- 1. Speaker of the House
 - 2. Chief Minister
 - 3. Governor
 - 4. Advocate General

Question ID : 264330159923
Option 1 ID : 264330627041
Option 2 ID : 264330627039
Option 3 ID : 264330627040
Option 4 ID : 264330627042
Status : Answered
Chosen Option : 3

Q.18 RK Narayan is the author of _____.

- Ans
- 1. The Guide
 - 2. Far From the Madding Crowd
 - 3. Godan
 - 4. Untouchable

Question ID : 264330160971
Option 1 ID : 264330631218
Option 2 ID : 264330631217
Option 3 ID : 264330631215
Option 4 ID : 264330631216
Status : Answered
Chosen Option : 2

Q.19 Where is the Qutub Minar situated?

- Ans
- 1. Delhi
 - 2. Agra
 - 3. Lucknow
 - 4. Chandigarh

Question ID : 264330160767
Option 1 ID : 264330630401
Option 2 ID : 264330630402
Option 3 ID : 264330630400
Option 4 ID : 264330630399
Status : Answered
Chosen Option : 1

Q.20 Which is the most obvious symptom of infantile jaundice that usually appears between the second and fourth day after birth?

- Ans
- 1. Cracking and irritation at the corners of mouth
 - 2. Swollen or puffy ankles
 - 3. Yellowing of the skin and the whites of the eyes
 - 4. Swelling and bleeding of the gums

Question ID : 264330161080
Option 1 ID : 264330631653
Option 2 ID : 264330631651
Option 3 ID : 264330631652
Option 4 ID : 264330631654
Status : Answered
Chosen Option : 3

Q.21 The Units of Linear momentum are measured in _____.

- Ans
- 1. $\text{kg}^2 \text{ m/s}$
 - 2. kg m/s^2
 - 3. $\text{k}^2\text{g m/s}$
 - 4. kg m/s

Question ID : 264330157779
Option 1 ID : 264330618476
Option 2 ID : 264330618477
Option 3 ID : 264330618478
Option 4 ID : 264330618475
Status : Answered
Chosen Option : 2

Q.22 In which of the following cities the 2023 SAFF Championship was held?

- Ans
- 1. Mumbai
 - 2. Bengaluru
 - 3. Kochi
 - 4. Ahmedabad

Question ID : 264330161149
Option 1 ID : 264330631927
Option 2 ID : 264330631929
Option 3 ID : 264330631928
Option 4 ID : 264330631930
Status : Answered
Chosen Option : 2

Q.23 Mirabai Chanu was selected as BBC Indian Sportswoman of the Year 2022. She is related to which sport?

- Ans
- 1. Discus throw
 - 2. Javelin throw
 - 3. Boxing
 - 4. Weightlifting

Question ID : 264330158367
Option 1 ID : 264330620830
Option 2 ID : 264330620829
Option 3 ID : 264330620827
Option 4 ID : 264330620828
Status : Answered
Chosen Option : 4

Q.24 Punjab state is rich in which natural resource from the following?

- Ans
- 1. Coal
 - 2. Petroleum
 - 3. Silicon
 - 4. Fertile soil

Question ID : 264330161493
Option 1 ID : 264330633301
Option 2 ID : 264330633299
Option 3 ID : 264330633302
Option 4 ID : 264330633300
Status : Answered
Chosen Option : 4

Q.25 How many schedules are there in our Constitution as of June 2023?

- Ans
- 1. 8
 - 2. 9
 - 3. 12
 - 4. 10

Question ID : 264330159895
Option 1 ID : 264330626927
Option 2 ID : 264330626930
Option 3 ID : 264330626929
Option 4 ID : 264330626928
Status : Answered
Chosen Option : 3

Section : English Language and Comprehension

Q.1 Select the most appropriate synonym of the given word.
Diminish

- Ans
- 1. Demote
 - 2. Relegate
 - 3. Prevent
 - 4. Weaken

Question ID : 264330151879
Option 1 ID : 264330595135
Option 2 ID : 264330595137
Option 3 ID : 264330595138
Option 4 ID : 264330595136
Status : Answered
Chosen Option : 1

Q.2 Select the option that can be used as a one-word substitute for the given group of words.

A person who loves or collects books

- Ans
- 1. Anglophile
 - 2. Heliophile
 - 3. Paedophile
 - 4. Bibliophile

Question ID : 264330151866
Option 1 ID : 264330595085
Option 2 ID : 264330595086
Option 3 ID : 264330595084
Option 4 ID : 264330595083
Status : Answered
Chosen Option : 4

Q.3 The following sentence has been divided into four parts. Identify the part that contains an error.

(A) We are living / (B) here since / (C) the summer / (D) of last year.

Ans ✓ 1. A

✗ 2. C

✗ 3. B

✗ 4. D

Question ID : 264330152627

Option 1 ID : 264330598114

Option 2 ID : 264330598111

Option 3 ID : 264330598112

Option 4 ID : 264330598113

Status : Answered

Chosen Option : 3

Q.4 Select the most appropriate option to fill in the blank.
Suresh has been learning Tamil _____ two months.

Ans ✗ 1. from

✗ 2. since

✗ 3. before

✓ 4. for

Question ID : 264330152732

Option 1 ID : 264330598527

Option 2 ID : 264330598528

Option 3 ID : 264330598530

Option 4 ID : 264330598529

Status : Answered

Chosen Option : 1

Q.5 Select the most appropriate meaning of the underlined idiom in the given sentence.

Rina's house is at a stone's throw from the school.

Ans ✗ 1. A very long distance

✗ 2. Next to

✓ 3. A very short distance

✗ 4. Not very close to

Question ID : 264330152877

Option 1 ID : 264330599099

Option 2 ID : 264330599101

Option 3 ID : 264330599100

Option 4 ID : 264330599102

Status : Answered

Chosen Option : 3

Q.6 Select the INCORRECTLY spelt word.

- Ans 1. Wrestler
 2. Accompaniment
 3. Debatable
 4. Discrepancy

Question ID : 264330152786
Option 1 ID : 264330598737
Option 2 ID : 264330598738
Option 3 ID : 264330598735
Option 4 ID : 264330598736
Status : Answered
Chosen Option : 2

Q.7 Select the most appropriate option to substitute the underlined segment in the given sentence.

Mohan unknowingly altered salt instead of sugar to the dessert making it taste terrible.

- Ans 1. added salt instead of sugar
 2. anguished salt instead of sugar
 3. amplified salt instead of sugar
 4. abridged salt instead of sugar

Question ID : 264330153435
Option 1 ID : 264330601266
Option 2 ID : 264330601264
Option 3 ID : 264330601263
Option 4 ID : 264330601265
Status : Answered
Chosen Option : 3

Q.8 Select the most appropriate meaning of the underlined idiom.

The actor decided to live life in the fast lane.

- Ans 1. Dropping charges of crime
 2. A life filled with excitement
 3. Racing away to the moon
 4. A life of extreme speed

Question ID : 264330153144
Option 1 ID : 264330600137
Option 2 ID : 264330600138
Option 3 ID : 264330600136
Option 4 ID : 264330600135
Status : Answered
Chosen Option : 4

Q.9 Parts of the following sentence have been given as options. Select the option that contains an error.
Sanjana rubbed her eyes hardly.

- Ans
- 1. Sanjana
 - 2. rubbed
 - 3. hardly
 - 4. her eyes

Question ID : 264330152807
Option 1 ID : 264330598819
Option 2 ID : 264330598820
Option 3 ID : 264330598822
Option 4 ID : 264330598821
Status : Answered
Chosen Option : 3

Q.10 Select the most appropriate idiom to fill in the blank.
I asked my friend to _____ against her employers who are doing wrong to her.

- Ans
- 1. fine words butter no parsnips
 - 2. finders keepers, losers weepers
 - 3. fight the good fight
 - 4. fight fire with fire

Question ID : 264330153297
Option 1 ID : 264330600746
Option 2 ID : 264330600744
Option 3 ID : 264330600743
Option 4 ID : 264330600745
Status : Answered
Chosen Option : 4

Q.11 Parts of the following sentence have been underlined and given as options. Select the option that contains a misspelt word.
The single most important factor that distinguishes those of us who succed in any venture and those of us who don't is this 'instant coffee' attitude.

- Ans
- 1. venture
 - 2. attitude
 - 3. distinguishes
 - 4. succed

Question ID : 264330151835
Option 1 ID : 264330594969
Option 2 ID : 264330594970
Option 3 ID : 264330594967
Option 4 ID : 264330594968
Status : Answered
Chosen Option : 4

Q.12 The following sentence has been divided into parts. One of them may contain an error. Select the part that contains the error from the given options. If you don't find any error, mark 'No error' as your answer.
A night alone / in a hotel / can be lonely prospect.

- Ans 1. can be lonely prospect
 2. A night alone
 3. No error
 4. in a hotel

Question ID : 264330153195
Option 1 ID : 264330600341
Option 2 ID : 264330600339
Option 3 ID : 264330600342
Option 4 ID : 264330600340
Status : Answered
Chosen Option : 1

Q.13 Parts of the given sentence have been underlined. One of them contains an error. The underlined parts are given as options with some changes. Select the option that correctly rectifies the error.
The new restaurant on Main Street is cheap than the old one.

- Ans 1. the older one
 2. in Main Street
 3. newer restaurant
 4. is cheaper than

Question ID : 264330153171
Option 1 ID : 264330600246
Option 2 ID : 264330600244
Option 3 ID : 264330600243
Option 4 ID : 264330600245
Status : Answered
Chosen Option : 4

Q.14 Parts of the following sentence have been underlined and given as options. Select the option that contains an error.
My relatives shall have reached Amritsar by now.

- Ans 1. My
 2. by now
 3. shall
 4. reached

Question ID : 264330153189
Option 1 ID : 264330600315
Option 2 ID : 264330600318
Option 3 ID : 264330600316
Option 4 ID : 264330600317
Status : Answered
Chosen Option : 3

Q.15 Select the option that can be used as a one-word substitute for the given group of words.

Group of bees

- Ans
- 1. Gaggle
 - 2. Shoal
 - 3. Swarm
 - 4. Pack

Question ID : 264330151814

Option 1 ID : 264330594883

Option 2 ID : 264330594884

Option 3 ID : 264330594885

Option 4 ID : 264330594886

Status : Answered

Chosen Option : 3

Q.16 Select the most appropriate ANTONYM of the given word.

Crude

- Ans
- 1. Patient
 - 2. Refined
 - 3. Primitive
 - 4. Observant

Question ID : 264330153365

Option 1 ID : 264330601013

Option 2 ID : 264330601011

Option 3 ID : 264330601012

Option 4 ID : 264330601014

Status : Answered

Chosen Option : 2

Q.17 Select the most appropriate option to fill in the blank.

Can you quote any _____ in your favour?

- Ans
- 1. answer
 - 2. summary
 - 3. lines
 - 4. precedent

Question ID : 264330153357

Option 1 ID : 264330600981

Option 2 ID : 264330600979

Option 3 ID : 264330600982

Option 4 ID : 264330600980

Status : Answered

Chosen Option : 1

Q.18 Select the INCORRECTLY spelt word.

- Ans
- 1. Insurance
 - 2. Assassin
 - 3. Mischievous
 - 4. Inexpressible

Question ID : 264330152691
Option 1 ID : 264330598368
Option 2 ID : 264330598369
Option 3 ID : 264330598367
Option 4 ID : 264330598370
Status : Answered
Chosen Option : 2

Q.19 Select the most appropriate meaning of the underlined segment in the given sentence.
Buying a new car can cost an arm and a leg.

- Ans
- 1. Be free
 - 2. Be affordable
 - 3. Be reasonable
 - 4. Be expensive

Question ID : 264330152926
Option 1 ID : 264330599284
Option 2 ID : 264330599285
Option 3 ID : 264330599286
Option 4 ID : 264330599283
Status : Answered
Chosen Option : 4

Q.20 Select the most appropriate synonym of the given word.
Insist

- Ans
- 1. Persist
 - 2. Resist
 - 3. Heist
 - 4. Assist

Question ID : 264330151824
Option 1 ID : 264330594926
Option 2 ID : 264330594924
Option 3 ID : 264330594923
Option 4 ID : 264330594925
Status : Answered
Chosen Option : 2

Comprehension:

In the following passage, some words have been deleted. Read the passage carefully and select the most appropriate option to fill in each blank.

There are several reasons why people might 1)_____ that homework is an unnecessary burden on children. Firstly, there is evidence to support the idea that homework 2)_____ nothing to improve educational outcomes. Countries such as Finland, where school children are not given homework, regularly top international educational league tables and outperform nations where setting homework is the norm. Secondly, many parents would agree that the school day is already 3)_____, and leaves their children too tired to do further study when they return home. 4)_____, it is recognised that play time is just as 5)_____ as study time from the perspective of brain development.

SubQuestion No : 21

Q.21 Select the most appropriate option to fill in blank 1.

- Ans 1. be argues
 2. have argue
 3. argues
 4. argue

Question ID : 264330153600

Option 1 ID : 264330601886

Option 2 ID : 264330601885

Option 3 ID : 264330601884

Option 4 ID : 264330601883

Status : Answered

Chosen Option : 1

Comprehension:

In the following passage, some words have been deleted. Read the passage carefully and select the most appropriate option to fill in each blank.

There are several reasons why people might 1)_____ that homework is an unnecessary burden on children. Firstly, there is evidence to support the idea that homework 2)_____ nothing to improve educational outcomes. Countries such as Finland, where school children are not given homework, regularly top international educational league tables and outperform nations where setting homework is the norm. Secondly, many parents would agree that the school day is already 3)_____, and leaves their children too tired to do further study when they return home. 4)_____, it is recognised that play time is just as 5)_____ as study time from the perspective of brain development.

SubQuestion No : 22

Q.22 Select the most appropriate option to fill in blank 2.

- Ans 1. will does
 2. has do
 3. does
 4. do

Question ID : 264330153601

Option 1 ID : 264330601890

Option 2 ID : 264330601887

Option 3 ID : 264330601889

Option 4 ID : 264330601888

Status : Answered

Chosen Option : 4

Comprehension:

In the following passage, some words have been deleted. Read the passage carefully and select the most appropriate option to fill in each blank.

There are several reasons why people might 1)_____ that homework is an unnecessary burden on children. Firstly, there is evidence to support the idea that homework 2)_____ nothing to improve educational outcomes. Countries such as Finland, where school children are not given homework, regularly top international educational league tables and outperform nations where setting homework is the norm. Secondly, many parents would agree that the school day is already 3)_____, and leaves their children too tired to do further study when they return home. 4)_____, it is recognised that play time is just as 5)_____ as study time from the perspective of brain development.

SubQuestion No : 23

Q.23 Select the most appropriate option to fill in blank 3.

- Ans 1. long enough
 2. big enough
 3. not enough
 4. enough of

Question ID : 264330153602
 Option 1 ID : 264330601892
 Option 2 ID : 264330601891
 Option 3 ID : 264330601894
 Option 4 ID : 264330601893
 Status : Answered
 Chosen Option : 1

Comprehension:

In the following passage, some words have been deleted. Read the passage carefully and select the most appropriate option to fill in each blank.

There are several reasons why people might 1)_____ that homework is an unnecessary burden on children. Firstly, there is evidence to support the idea that homework 2)_____ nothing to improve educational outcomes. Countries such as Finland, where school children are not given homework, regularly top international educational league tables and outperform nations where setting homework is the norm. Secondly, many parents would agree that the school day is already 3)_____, and leaves their children too tired to do further study when they return home. 4)_____, it is recognised that play time is just as 5)_____ as study time from the perspective of brain development.

SubQuestion No : 24

Q.24 Select the most appropriate option to fill in blank 4.

- Ans 1. Similarly
 2. Normally
 3. Finally
 4. Usually

Question ID : 264330153603
 Option 1 ID : 264330601897
 Option 2 ID : 264330601895
 Option 3 ID : 264330601898
 Option 4 ID : 264330601896
 Status : Answered
 Chosen Option : 4

Comprehension:

In the following passage, some words have been deleted. Read the passage carefully and select the most appropriate option to fill in each blank.

There are several reasons why people might 1)_____ that homework is an unnecessary burden on children. Firstly, there is evidence to support the idea that homework 2)_____ nothing to improve educational outcomes. Countries such as Finland, where school children are not given homework, regularly top international educational league tables and outperform nations where setting homework is the norm. Secondly, many parents would agree that the school day is already 3)_____, and leaves their children too tired to do further study when they return home. 4)_____, it is recognised that play time is just as 5)_____ as study time from the perspective of brain development.

SubQuestion No : 25

Q.25 Select the most appropriate option to fill in blank 5.

- Ans 1. soon
 2. beneficial
 3. bad
 4. confidential

Question ID : 264330153604

Option 1 ID : 264330601899

Option 2 ID : 264330601900

Option 3 ID : 264330601902

Option 4 ID : 264330601901

Status : Answered

Chosen Option : 2

Multi Tasking Non Technical Staff and Havaladar CBIC and CBN Examination 2023

Roll Number	
Candidate Name	
Venue Name	ION DIGITAL ZONE IDZ TUPUDANA
Exam Date	05/09/2023
Exam Time	12:30 PM - 2:30 PM
Subject	MTS Non Tech Havaladar CBIC and CBN Examination 2023

Section : Numerical and Mathematical Ability

Q.1 A right circular cone is 9.8 cm high with the radius of its base 4 cm. It is melted and recast into a right circular cone with the radius of its base 3.5 cm. Find its height (use $\pi = \frac{22}{7}$).

- Ans**
- 1. 21.8 cm
 - 2. 28.1 cm
 - 3. 12.8 cm
 - 4. 18.2 cm

Question ID : 264330156293

Option 1 ID : 264330612574

Option 2 ID : 264330612573

Option 3 ID : 264330612572

Option 4 ID : 264330612571

Status : Answered

Chosen Option : 3

Q.2 Profit of ₹29,120 is divided among A, B and C so that A's share is $2\frac{1}{2}$ times B's and B's share is $1\frac{1}{5}$ times C. Find B's share.

- Ans**
- 1. ₹6,940
 - 2. ₹7,820
 - 3. ₹6,720
 - 4. ₹7,140

Question ID : 264330156268

Option 1 ID : 264330612472

Option 2 ID : 264330612474

Option 3 ID : 264330612471

Option 4 ID : 264330612473

Status : Answered

Chosen Option : 3

Q.3 Tushar, Megha, Punam and Richa can complete a piece of work in 10 days, 12 days, 15 days and 18 days, respectively. In how many days will the work be completed if each of them work on alternate days starting with Megha on first day, Punam on second day, Richa on third day, Tushar on fourth day and then again Megha on fifth day and so on.

- Ans**
- 1. 12
 - 2. 13
 - 3. 10
 - 4. 14

Question ID : 264330156195
 Option 1 ID : 264330612180
 Option 2 ID : 264330612182
 Option 3 ID : 264330612179
 Option 4 ID : 264330612181
 Status : Answered
 Chosen Option : 2

Q.4 The table below represents marks obtained by four students A, B, C, and D in four subjects in an examination. The maximum marks for each subject are 100.

Student	English	Hindi	Math	Science
A	90	89	100	93
B	85	86	88	95
C	94	92	96	89
D	87	90	97	82

The average marks of Math and Hindi taken together of the four students is what per cent more/less (rounded off to 1 decimal place) than the average marks of English and Science taken together?

- Ans**
- 1. More, 3.2%
 - 2. More, 2.4%
 - 3. Less, 2.4%
 - 4. Less, 3.2%

Question ID : 264330153779
 Option 1 ID : 264330602579
 Option 2 ID : 264330602581
 Option 3 ID : 264330602582
 Option 4 ID : 264330602580
 Status : Answered
 Chosen Option : 1

Q.5 The average age of a family of three members (mother, father and Son) is 44 years. After the son's marriage, the average age of the family becomes 39 years. What is the age of the daughter-in-law?

- Ans**
- 1. 24 years
 - 2. 25 years
 - 3. 23 years
 - 4. 22 years

Question ID : 264330154116
 Option 1 ID : 264330603928
 Option 2 ID : 264330603927
 Option 3 ID : 264330603929
 Option 4 ID : 264330603930
 Status : Answered
 Chosen Option : 1

Q.6 Using the middle points of sides of a square with an area of 36 square units, another square is made. What is the area of a new square made in square units?

- Ans**
- 1. 24
 - 2. 27
 - 3. 18
 - 4. 21

Question ID : 264330153824
Option 1 ID : 264330602761
Option 2 ID : 264330602760
Option 3 ID : 264330602759
Option 4 ID : 264330602762
Status : Answered
Chosen Option : 3

Q.7 Find the amount of ₹75,000 for one year at the rate of 16% per annum, if the interest is compounded quarterly. (rounded off to two decimal places)

- Ans**
- 1. ₹87,379.40
 - 2. ₹89,773.40
 - 3. ₹87,937.40
 - 4. ₹87,739.40

Question ID : 264330156364
Option 1 ID : 264330612857
Option 2 ID : 264330612858
Option 3 ID : 264330612856
Option 4 ID : 264330612855
Status : Answered
Chosen Option : 4

Q.8 How much simple interest will ₹6,000 earn in 15 months at the rate of 12% per annum?

- Ans**
- 1. ₹900
 - 2. ₹600
 - 3. ₹750
 - 4. ₹800

Question ID : 264330155965
Option 1 ID : 264330611262
Option 2 ID : 264330611260
Option 3 ID : 264330611259
Option 4 ID : 264330611261
Status : Answered
Chosen Option : 1

Q.9 Nikita made two investments; she earns 10% on one investment and lost 20% on the second investment. If the investments were in the ratio 2 : 3, then she got a:

- Ans**
- ✓ 1. loss of 8%
 - ✗ 2. profit of 15%
 - ✗ 3. profit of 8%
 - ✗ 4. loss of 15%

Question ID : 264330154046
Option 1 ID : 264330603650
Option 2 ID : 264330603647
Option 3 ID : 264330603649
Option 4 ID : 264330603648
Status : Answered
Chosen Option : 1

Q.10 Simplify the given expression.

$$2 \div [2 + 2 \div \{2 + 2 \div (2 + 2 \div 3)\}]$$

- Ans**
- ✓ 1. $\frac{11}{15}$
 - ✗ 2. $\frac{19}{15}$
 - ✗ 3. $\frac{17}{15}$
 - ✗ 4. $\frac{13}{15}$

Question ID : 264330156068
Option 1 ID : 264330611673
Option 2 ID : 264330611674
Option 3 ID : 264330611672
Option 4 ID : 264330611671
Status : Answered
Chosen Option : 1

Q.11 Reena, Ritu and Sita can independently complete a piece of work in 6 hours, 9 hours and 18 hours, respectively. If they work together, then how much time (in hours) will they take to complete that piece of work?

- Ans**
- ✓ 1. 3
 - ✗ 2. 5
 - ✗ 3. 4
 - ✗ 4. 2

Question ID : 264330156237
Option 1 ID : 264330612348
Option 2 ID : 264330612350
Option 3 ID : 264330612349
Option 4 ID : 264330612347
Status : Answered
Chosen Option : 1

Q.12 The mean proportion of a and $\frac{a}{b^2}$ is _____.

- Ans
- 1. ab
 - 2. $\frac{b}{a}$
 - 3. $\frac{a}{b}$
 - 4. $\frac{a}{2b}$

Question ID : 264330153808
Option 1 ID : 264330602698
Option 2 ID : 264330602697
Option 3 ID : 264330602695
Option 4 ID : 264330602696
Status : Answered
Chosen Option : 3

Q.13 A school has two sections of a class. Section A has 30 students and Section B has 20 students. The average score of the students in Section A is 85, and the average score of the students in Section B is 70. What is the overall average score of the class?

- Ans
- 1. 81
 - 2. 80
 - 3. 79
 - 4. 78

Question ID : 264330156254
Option 1 ID : 264330612415
Option 2 ID : 264330612416
Option 3 ID : 264330612417
Option 4 ID : 264330612418
Status : Answered
Chosen Option : 3

Q.14 The HCF of three numbers is 57. If they are in the ratio of 4 : 5 : 6, then find the numbers.

- Ans
- 1. 228, 285, 342
 - 2. 236, 295, 354
 - 3. 240, 300, 360
 - 4. 232, 290, 348

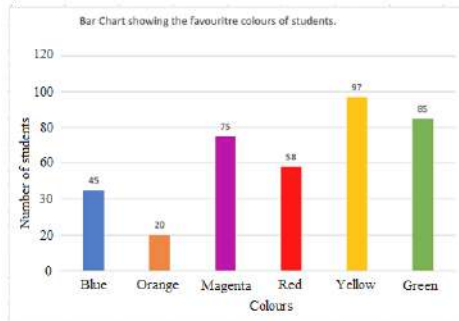
Question ID : 264330155722
Option 1 ID : 264330610293
Option 2 ID : 264330610291
Option 3 ID : 264330610294
Option 4 ID : 264330610292
Status : Answered
Chosen Option : 1

Q.15 The strength of a school increases and decreases every alternate year by 20%. It started with an increase in the year 2015 and the initial strength was 3000. Find the strength of the school in the year 2017 and also the percentage of increase in strength, respectively.

- Ans**
- ✓ 1. 3456, 15.2%
 - ✗ 2. 4456, 14.2%
 - ✗ 3. 4556, 17.2%
 - ✗ 4. 3556, 16.2%

Question ID : 264330155996
Option 1 ID : 264330611385
Option 2 ID : 264330611383
Option 3 ID : 264330611386
Option 4 ID : 264330611384
Status : Answered
Chosen Option : 1

Q.16 The Bar Chart below shows the favourite colours of 380 students in a class. Study the bar chart and answer the question based on it.



The total number of students whose favourite colours are blue, magenta, red and yellow is what per cent (rounded off to the nearest integer) of the total number of students in the class?

- Ans**
- ✗ 1. 77%
 - ✗ 2. 69%
 - ✗ 3. 64%
 - ✓ 4. 72%

Question ID : 264330153782
Option 1 ID : 264330602593
Option 2 ID : 264330602592
Option 3 ID : 264330602591
Option 4 ID : 264330602594
Status : Answered
Chosen Option : 4

Q.17 The total journey is of 800 km. A car travels the first 320 km of the journey at the speed of 64 km/hr. What should be the speed of the next 480 km so that average speed will become 80 km/hr?

- Ans**
- ✓ 1. 96 km/hr
 - ✗ 2. 69 km/hr
 - ✗ 3. 86 km/hr
 - ✗ 4. 89 km/hr

Question ID : 264330156550
Option 1 ID : 264330613590
Option 2 ID : 264330613587
Option 3 ID : 264330613588
Option 4 ID : 264330613589
Status : Answered
Chosen Option : 1

Q.18 एक आदमी साइकिल से एक स्थान तक जाने और वहां से स्कूटर से वापस आने में 8 घंटे 30 मिनट का समय लेता है। यदि वह दोनों ओर की यात्रा साइकिल से करता है, तो उसे 10 घंटे लगते हैं। उसे स्कूटर से दोनों ओर की यात्रा करने में कितना समय लगेगा (घंटों में)?

- Ans**
- 1. $4\frac{1}{2}$
 - 2. 7
 - 3. $3\frac{1}{2}$
 - 4. 4

Question ID : 264330156007
 Option 1 ID : 264330611427
 Option 2 ID : 264330611430
 Option 3 ID : 264330611428
 Option 4 ID : 264330611429
 Status : Answered
 Chosen Option : 3

Q.19 Divya bought six candies for a rupee. How many candies for a rupee must she sell to gain 50%?

- Ans**
- 1. Four
 - 2. Three
 - 3. One
 - 4. Two

Question ID : 264330155704
 Option 1 ID : 264330610222
 Option 2 ID : 264330610221
 Option 3 ID : 264330610219
 Option 4 ID : 264330610220
 Status : Answered
 Chosen Option : 2

Q.20 एक सिपाही एक चोर को 185 m की दूरी से देखता है। चोर भागने लगता है और सिपाही उसका पीछा करता है। चोर और सिपाही क्रमशः 8 m/s और 9 m/s की चाल से दौड़ते हैं। 2 मिनट बाद उनके बीच की दूरी कितनी है?

- Ans**
- 1. 65 m
 - 2. 92 m
 - 3. 120 m
 - 4. 130 m

Question ID : 264330153882
 Option 1 ID : 264330602991
 Option 2 ID : 264330602993
 Option 3 ID : 264330602992
 Option 4 ID : 264330602994
 Status : Answered
 Chosen Option : 3


Q.1 What should come in place of ? in the given series based on the English alphabetical order?

SDJ, UGL, WJN, YMP, ?

- Ans
- 1. CPS
 - 2. BQS
 - 3. APR
 - 4. BOR

Question ID : 264330155779
Option 1 ID : 264330610522
Option 2 ID : 264330610520
Option 3 ID : 264330610519
Option 4 ID : 264330610521
Status : Answered
Chosen Option : 3

Q.2 Identify the figure that completes the pattern (rotation is NOT allowed).



Ans

- 1.
- 2.
- 3.
- 4.

Question ID : 264330154518
Option 1 ID : 264330605537
Option 2 ID : 264330605538
Option 3 ID : 264330605536
Option 4 ID : 264330605535
Status : Answered
Chosen Option : 1

Q.3 JR 11 is related to KT 16 in a certain way. In the same way, VM 22 is related to WO 27. To which of the following is DS 18 related to following the same logic?

- Ans**
- 1. CQ 24
 - 2. EU 23
 - 3. FU 23
 - 4. FT 22

Question ID : 264330151678
Option 1 ID : 264330594342
Option 2 ID : 264330594340
Option 3 ID : 264330594339
Option 4 ID : 264330594341
Status : Answered
Chosen Option : 3

Q.4 Read the given statements and conclusions carefully. You have to take the given statements to be true even if they seem to be at variance from commonly known facts. You have to decide which conclusion/s logically follow/s from the given statements.

Statements: Some walls are stone. All stones are diamonds. All diamonds are bricks.

Conclusion I: Some stones are walls.

Conclusion II: Some stones are bricks.

- Ans**
- 1. Neither conclusion (I) nor (II) is follow.
 - 2. Both conclusions (I) and (II) are follow.
 - 3. Only conclusion (II) is follow.
 - 4. Only conclusion (I) is follow.

Question ID : 264330155932
Option 1 ID : 264330611133
Option 2 ID : 264330611134
Option 3 ID : 264330611132
Option 4 ID : 264330611131
Status : Answered
Chosen Option : 4

Q.5 Manu, Ram, Gaurav, Shivam, Umesh and Veer are sitting around a circular table facing the centre. Manu is sitting 2nd to the left of Ram. Gaurav is sitting 3rd to the right of Ram. Shivam is sitting 3rd to the left of Manu. Umesh is sitting 2nd to the left of Shivam. Who is sitting 2nd to the left of Manu?

- Ans**
- 1. Gaurav
 - 2. Ram
 - 3. Veer
 - 4. Umesh

Question ID : 264330155647
Option 1 ID : 264330609991
Option 2 ID : 264330609994
Option 3 ID : 264330609992
Option 4 ID : 264330609993
Status : Not Answered
Chosen Option : --

Q.6 What should come in place of ? in the given series?

31 32 35 36 39 ?

- Ans
- 1. 41
 - 2. 42
 - 3. 43
 - 4. 40

Question ID : 264330151547
Option 1 ID : 264330593816
Option 2 ID : 264330593817
Option 3 ID : 264330593818
Option 4 ID : 264330593815
Status : Answered
Chosen Option : 4

Q.7 What should come in place of '?' in the given series?

7 30 122 490 1962 ?

- Ans
- 1. 7760
 - 2. 7850
 - 3. 7872
 - 4. 7896

Question ID : 264330151494
Option 1 ID : 264330593603
Option 2 ID : 264330593604
Option 3 ID : 264330593605
Option 4 ID : 264330593606
Status : Answered
Chosen Option : 2

Q.8 What should come in place of ? in the given series based on the English alphabetical order?

FVZ, GXA, HZB, IBC, ?

- Ans
- 1. IED
 - 2. JDD
 - 3. IEF
 - 4. KDF

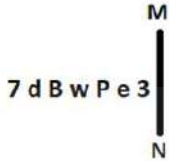
Question ID : 264330155767
Option 1 ID : 264330610472
Option 2 ID : 264330610471
Option 3 ID : 264330610473
Option 4 ID : 264330610474
Status : Answered
Chosen Option : 2

Q.9 In a certain code language, 'ETHOS' is coded as '15' and 'CHEERFUL' is coded as '24'. What is the code for 'CHIMNEY' in the given code language?

- Ans
- 1. 18
 - 2. 21
 - 3. 19
 - 4. 23

Question ID : 264330155821
Option 1 ID : 264330610690
Option 2 ID : 264330610689
Option 3 ID : 264330610688
Option 4 ID : 264330610687
Status : Answered
Chosen Option : 2

Q.10 Select the correct mirror image of the given figure when the mirror is placed at MN as shown below.



- Ans
- 1. 3 e P w B b 7
 - 2. 3 e P w B b 7
 - 3. 3 e P w B b 7
 - 4. 3 e P w B b 7

Question ID : 264330151519
Option 1 ID : 264330593704
Option 2 ID : 264330593703
Option 3 ID : 264330593705
Option 4 ID : 264330593706
Status : Answered
Chosen Option : 3

Q.11 यदि '+' और '-' को आपस में बदल दिया जाए तथा 'x' और '÷' को आपस में बदल दिया जाए तो निम्नलिखित समीकरण में (?) के स्थान पर क्या आएगा?

$$52 \div 6 + 71 - 168 \times 8 = ?$$

- Ans
- 1. 310
 - 2. 313
 - 3. 262
 - 4. 211

Question ID : 264330154619
Option 1 ID : 264330605939
Option 2 ID : 264330605942
Option 3 ID : 264330605941
Option 4 ID : 264330605940
Status : Answered
Chosen Option : 3

Q.12 In the following number-pairs, the second number is obtained by applying certain mathematical operations to the first number. Select the set in which the numbers are related in the same way as are the numbers of the following sets.
(NOTE : Operations should be performed on the whole numbers, without breaking down the numbers into its constituent digits. E.g. 13 – Operations on 13 such as adding /deleting /multiplying etc. to 13 can be performed. Breaking down 13 into 1 and 3 and then performing mathematical operations on 1 and 3 is not allowed)
12 : 144
13 : 169

- Ans**
- 1. 9 : 80
 - 2. 10 : 90
 - 3. 15 : 225
 - 4. 14 : 182

Question ID : 264330154647
 Option 1 ID : 264330606054
 Option 2 ID : 264330606051
 Option 3 ID : 264330606053
 Option 4 ID : 264330606052
 Status : Answered
 Chosen Option : 3

Q.13 Which figure should replace the question mark (?) if the following figure series were to be continued?

B R A I D	R B D A I	I A S B	R A I R S B	?
-----------	-----------	---------	-------------	---

Ans

- 1. I R T S A
- 2. B S T I A
- 3. B A I R S
- 4. S B T A I

Question ID : 264330154767
 Option 1 ID : 264330606534
 Option 2 ID : 264330606531
 Option 3 ID : 264330606532
 Option 4 ID : 264330606533
 Status : Answered
 Chosen Option : 3

Q.14 What should come in place of '?' in the given series?

16 31 76 ? 616 1831 5476

- Ans
- 1. 217
 - 2. 201
 - 3. 207
 - 4. 211

Question ID : 264330151446
Option 1 ID : 264330593414
Option 2 ID : 264330593411
Option 3 ID : 264330593412
Option 4 ID : 264330593413
Status : Answered
Chosen Option : 1

Q.15 In a certain code language, 'make your life' is coded as 'uk ox zt' and 'life is good' is coded as 'qr uk va'. How is 'life' coded in the given language?

- Ans
- 1. zt
 - 2. ox
 - 3. uk
 - 4. qr

Question ID : 264330151692
Option 1 ID : 264330594395
Option 2 ID : 264330594398
Option 3 ID : 264330594397
Option 4 ID : 264330594396
Status : Answered
Chosen Option : 3

Q.16 Select the combination of letters that when sequentially placed in the blanks of the given series will make it logically complete.

F_HTFKO_ _RVTFY_TF_JT

- Ans
- 1. UJHNH
 - 2. DHJNF
 - 3. JFJMH
 - 4. DTECF

Question ID : 264330156320
Option 1 ID : 264330612682
Option 2 ID : 264330612681
Option 3 ID : 264330612679
Option 4 ID : 264330612680
Status : Answered
Chosen Option : 4

Q.17 If G means '-', C means 'x', D means '+', E means '^', then what will come in place of the question mark (?) in the following equation?

$$64 \text{ D } 4 \text{ G } 37 \text{ E } 12 \text{ C } 7 = ?$$

- Ans**
- 1. 71
 - 2. 63
 - 3. 36
 - 4. 89

Question ID : **264330154691**
Option 1 ID : **264330606229**
Option 2 ID : **264330606228**
Option 3 ID : **264330606227**
Option 4 ID : **264330606230**
Status : **Answered**
Chosen Option : **2**

Q.18 5 is related to 19 following a certain logic. Following the same logic, 8 is related to 31. To which of the following is 13 related to, following the same logic?

- Ans**
- 1. 51
 - 2. 52
 - 3. 53
 - 4. 50

Question ID : **264330151605**
Option 1 ID : **264330594048**
Option 2 ID : **264330594049**
Option 3 ID : **264330594050**
Option 4 ID : **264330594047**
Status : **Answered**
Chosen Option : **1**

Q.19 If 3 May 2010 is a Monday, then what will be the day of the week on 16 December 2014?

- Ans**
- 1. Tuesday
 - 2. Saturday
 - 3. Friday
 - 4. Sunday

Question ID : **264330154352**
Option 1 ID : **264330604874**
Option 2 ID : **264330604871**
Option 3 ID : **264330604872**
Option 4 ID : **264330604873**
Status : **Answered**
Chosen Option : **3**

Q.20 Read the given statement(s) and conclusions carefully. Assuming that the information given in the statements is true, even if it appears to be at variance with commonly known facts, decide which of the given conclusions logically follow(s) from the statement(s).

Statements: All orchids are flowers. Some orchids are beautiful.

Conclusions:

(I) Some flowers are beautiful.

(II) All beautiful are flowers.

- Ans**
- 1. Only conclusion (II) is follows.
 - 2. Both conclusions (I) and (II) are follows.
 - 3. Neither conclusion (I) nor (II) is follows.
 - 4. Only conclusion (I) is follows.

Question ID : 264330154434

Option 1 ID : 264330605200

Option 2 ID : 264330605202

Option 3 ID : 264330605201

Option 4 ID : 264330605199

Status : Answered

Chosen Option : 4

Section : General Awareness

Q.1 दूध, समुद्री भोजन, मेवे और साबुत अनाज में कौन-सा खनिज उच्च मात्रा में होता है जो हड्डियों के स्वास्थ्य और हमारे शरीर की मरम्मत प्रक्रिया में सहायता करता है?

- Ans**
- 1. फ्लोराइड
 - 2. पोटैशियम
 - 3. फॉस्फोरस
 - 4. जिंक

Question ID : 264330161074

Option 1 ID : 264330631630

Option 2 ID : 264330631629

Option 3 ID : 264330631628

Option 4 ID : 264330631627

Status : Answered

Chosen Option : 2

Q.2 पूंजीगत व्यय क्या है?

- Ans**
- 1. हेल्थकेयर कार्यक्रमों पर व्यय की गई धनराशि
 - 2. ऋण चुकाने पर व्यय की गई धनराशि
 - 3. किसानों के लिए सब्सिडी पर व्यय की गई धनराशि
 - 4. अवसंरचना (infrastructure) के विकास पर व्यय की गई धनराशि

Question ID : 264330157274

Option 1 ID : 264330616460

Option 2 ID : 264330616459

Option 3 ID : 264330616462

Option 4 ID : 264330616461

Status : Answered

Chosen Option : 4

Q.3 Which physiographic division of India from the following is formed of alluvial soil?

- Ans
- 1. The Peninsular Plateau
 - 2. The Himalayan Mountains
 - 3. The Islands
 - 4. The Northern Plains

Question ID : 264330161531

Option 1 ID : 264330633452

Option 2 ID : 264330633454

Option 3 ID : 264330633453

Option 4 ID : 264330633451

Status : Answered

Chosen Option : 2

Q.4 ऑस्कर पुरस्कार (2023) विजेता गीत 'नाटू नाटू' के संगीत निर्देशक कौन हैं?

- Ans
- 1. उत्तम सिंह
 - 2. ए.आर. रहमान
 - 3. एम.एम. कीरावनी
 - 4. अनु मलिक

Question ID : 264330155504

Option 1 ID : 264330609419

Option 2 ID : 264330609421

Option 3 ID : 264330609422

Option 4 ID : 264330609420

Status : Answered

Chosen Option : 3

Q.5 Laterite soil develops as a result of which of the following reasons?

- Ans
- 1. Compaction
 - 2. Leaching
 - 3. High temperature only
 - 4. Sedimentation

Question ID : 264330161315

Option 1 ID : 264330632589

Option 2 ID : 264330632588

Option 3 ID : 264330632590

Option 4 ID : 264330632587

Status : Answered

Chosen Option : 2

Q.6 भीतरगांव ईंट मंदिर (Bhitargaon Brick temple) निम्नलिखित में से किस काल की वास्तुकला का एक अच्छा उदाहरण है?

- Ans
- 1. मुगल काल
 - 2. गुप्त काल
 - 3. मौर्य काल
 - 4. चोल काल

Question ID : 264330160782
Option 1 ID : 264330630461
Option 2 ID : 264330630460
Option 3 ID : 264330630459
Option 4 ID : 264330630462
Status : Answered
Chosen Option : 2

Q.7 खेरो इंडिया यूनिवर्सिटी गोम्स के तीसरे संस्करण के शुभंकर का नाम क्या है?

- Ans
- 1. शेरा (Shera)
 - 2. सावज (Savaj)
 - 3. जीतू (Jitu)
 - 4. मोगा (Moga)

Question ID : 264330161133
Option 1 ID : 264330631864
Option 2 ID : 264330631866
Option 3 ID : 264330631863
Option 4 ID : 264330631865
Status : Answered
Chosen Option : 3

Q.8 ऑटोबायोग्राफी ऑफ ए योगी (Autobiography of a Yogi) _____ की आत्मकथा है।

- Ans
- 1. स्वामी दयानंद सरस्वती
 - 2. परमहंस योगानंद
 - 3. रामकृष्ण परमहंस
 - 4. स्वामी विवेकानंद

Question ID : 264330160961
Option 1 ID : 264330631176
Option 2 ID : 264330631177
Option 3 ID : 264330631178
Option 4 ID : 264330631175
Status : Answered
Chosen Option : 2

Q.9 झारखंड का पाइका नृत्य (Paika dance) आमतौर पर _____ जनजाति द्वारा विशेष सम्मानित अतिथियों के स्वागत के लिए या धार्मिक जुलूस (शोभा यात्रा) के दौरान किया जाता है।

- Ans
- 1. संथाल (Santhal)
 - 2. मुंडा (Munda)
 - 3. ओरांव (Oraon)
 - 4. भूमिज (Bhumij)

Question ID : 264330160799
Option 1 ID : 264330630527
Option 2 ID : 264330630529
Option 3 ID : 264330630530
Option 4 ID : 264330630528
Status : Answered
Chosen Option : 1

Q.10 'My Country My Life' is an autobiography of _____.

- Ans
- 1. Jaswant Singh
 - 2. Amit Shah
 - 3. LK Advani
 - 4. Rajnath Singh

Question ID : 264330155492
Option 1 ID : 264330609373
Option 2 ID : 264330609371
Option 3 ID : 264330609374
Option 4 ID : 264330609372
Status : Answered
Chosen Option : 1

Q.11 As per the Census of India 2011, which state recorded a negative population growth rate?

- Ans
- 1. Sikkim
 - 2. Kerala
 - 3. Arunachal Pradesh
 - 4. Nagaland

Question ID : 264330161552
Option 1 ID : 264330633537
Option 2 ID : 264330633535
Option 3 ID : 264330633536
Option 4 ID : 264330633538
Status : Answered
Chosen Option : 4

Q.12 In March 2023, Rajasthan became the first state in India to provide right to ___ for its people.

- Ans
- 1. accommodation
 - 2. education
 - 3. telecommunication
 - 4. health

Question ID : 264330158335
Option 1 ID : 264330620700
Option 2 ID : 264330620699
Option 3 ID : 264330620702
Option 4 ID : 264330620701
Status : Answered
Chosen Option : 3

Q.13 सुभाष चंद्र बोस के राजनीतिक गुरु कौन थे?

- Ans
- 1. एम. जी. रानाडे
 - 2. महात्मा गांधी
 - 3. जवाहर लाल नेहरू
 - 4. चितरंजन दास

Question ID : 264330162344
Option 1 ID : 264330636705
Option 2 ID : 264330636703
Option 3 ID : 264330636704
Option 4 ID : 264330636706
Status : Answered
Chosen Option : 4

Q.14 शास्त्रीय नृत्य के राष्ट्रीय पुरस्कार को _____ कहा जाता है।

- Ans
- 1. जातीय नृत्य सम्मान
 - 2. भारतीय पुरस्कार
 - 3. अभिनंदन सरोजा पुरस्कार
 - 4. शास्त्रीय सम्मान

Question ID : 264330160983
Option 1 ID : 264330631264
Option 2 ID : 264330631266
Option 3 ID : 264330631265
Option 4 ID : 264330631263
Status : Answered
Chosen Option : 3

Q.15 Which state has the maximum number of Jute mills (as of 2022)?

- Ans
- 1. Tripura
 - 2. Uttar Pradesh
 - 3. Assam
 - 4. West Bengal

Question ID : 264330161491
Option 1 ID : 264330633294
Option 2 ID : 264330633291
Option 3 ID : 264330633293
Option 4 ID : 264330633292
Status : Answered
Chosen Option : 4

Q.16 अर्थव्यवस्था में व्यावसायिक बैंकों (commercial banks) की मुख्य भूमिका क्या है?

- Ans
- 1. आर्थिक वृद्धि और विकास को बढ़ावा देना
 - 2. शेयर बाज़ार को विनियमित करना
 - 3. महंगाई पर नियंत्रण
 - 4. विदेशी मुद्रा भंडार का प्रबंधन

Question ID : 264330157307
Option 1 ID : 264330616593
Option 2 ID : 264330616592
Option 3 ID : 264330616591
Option 4 ID : 264330616594
Status : Answered
Chosen Option : 1

Q.17 गौर मारिया (Gaur Maria), _____ राज्य की एक नृत्य शैली, आनंद और आह्वान का एक प्रसिद्ध कला शैली है। यह एक समूह नृत्य है और इस नृत्य में पुरुष और महिलाएं दोनों उत्साहपूर्वक भाग लेते हैं।

- Ans
- 1. महाराष्ट्र
 - 2. राजस्थान
 - 3. गुजरात
 - 4. छत्तीसगढ़

Question ID : 264330160794
Option 1 ID : 264330630507
Option 2 ID : 264330630509
Option 3 ID : 264330630508
Option 4 ID : 264330630510
Status : Answered
Chosen Option : 4

Q.18 Born on _____, Mohandas Karamchand Gandhi whose birthday is celebrated as Gandhi Jayanti, successfully led India's non-violence movement against the British.

- Ans
- 1. 2 October 1868
 - 2. 2 October 1870
 - 3. 2 October 1867
 - 4. 2 October 1869

Question ID : 264330160856
Option 1 ID : 264330630756
Option 2 ID : 264330630758
Option 3 ID : 264330630755
Option 4 ID : 264330630757
Status : Answered
Chosen Option : 4

Q.19 ISSF जूनियर विश्व कप 2023 में भारत पदक तालिका में शीर्ष पर रहा। यह प्रतियोगिता कहां आयोजित की गई थी?

- Ans
- 1. इटली
 - 2. ऑस्ट्रेलिया
 - 3. आज़रबाइजान
 - 4. जर्मनी

Question ID : 264330161145
Option 1 ID : 264330631911
Option 2 ID : 264330631912
Option 3 ID : 264330631913
Option 4 ID : 264330631914
Status : Answered
Chosen Option : 3

Q.20 निम्नलिखित में से कौन-सी कैबिनेट समिति नहीं है?

- Ans
- 1. कैबिनेट की नियुक्ति समिति (Appointment Committee of the Cabinet)
 - 2. राजनीतिक मामलों की समिति (Committee on Political Affairs)
 - 3. निवेश और विकास संबंधी समिति (Committee on Investment and Growth)
 - 4. मंत्रियों के बीच विवाद पर समिति (Committee on Conflicts among Ministers)

Question ID : 264330160862

Option 1 ID : 264330630780

Option 2 ID : 264330630779

Option 3 ID : 264330630781

Option 4 ID : 264330630782

Status : Answered

Chosen Option : 2

Q.21 शिक्षा और संस्कृति को बढ़ावा देने के लिए भारतीय विद्या भवन की स्थापना किसने की?

- Ans
- 1. डॉ. कन्हैयालाल मानेकलाल मुंशी
 - 2. डॉ. आत्माराम पांडुरंग
 - 3. गोपाल कृष्ण गोखले
 - 4. डॉ. बाबासाहेब अम्बेडकर

Question ID : 264330160882

Option 1 ID : 264330630861

Option 2 ID : 264330630860

Option 3 ID : 264330630859

Option 4 ID : 264330630862

Status : Answered

Chosen Option : 1

Q.22 भारतीय संविधान का कौन-सा अनुच्छेद सभी श्रमिकों के लिए जीवनयापन योग्य वेतन और सामाजिक और सांस्कृतिक अवसरों के साथ एक सभ्य जीवन स्तर सुरक्षित करता है?

- Ans
- 1. अनुच्छेद 43
 - 2. अनुच्छेद 40
 - 3. अनुच्छेद 39
 - 4. अनुच्छेद 41

Question ID : 264330161398

Option 1 ID : 264330632922

Option 2 ID : 264330632920

Option 3 ID : 264330632919

Option 4 ID : 264330632921

Status : Answered

Chosen Option : 1

Q.23 Which of the following is a white to yellowish solid with a weak aromatic odour purified by the process of sublimation?

- Ans
- 1. Titanyl
 - 2. Orthovanadate
 - 3. Anthracene
 - 4. Dysprosium

Question ID : 264330161056

Option 1 ID : 264330631557

Option 2 ID : 264330631558

Option 3 ID : 264330631555

Option 4 ID : 264330631556

Status : Answered

Chosen Option : 3

Q.24 95 वर्षीय भगवानी देवी और 106 वर्षीय रामबाई को उनकी उपलब्धियों के लिए संयुक्त रूप से बीबीसी विशेष ट्रॉफी (BBC special trophy) से सम्मानित किया गया, जहां देवी ने फिनलैंड के टाम्पेरे (Tampere) में _____ में 100 मीटर स्प्रिंट में स्वर्ण पदक जीता।

- Ans
- 1. 2022 राष्ट्रीय सीनियर खेल (2022 National Senior Games)
 - 2. सीनियर स्पोर्ट्स इंटरनेशनल मीट 2022 (Senior Sports International Meet 2022)
 - 3. हंट्समैन वर्ल्ड सीनियर गेम्स 2022 (Huntsman World Senior Games 2022)
 - 4. 2022 विश्व मास्टर्स एथलेटिक्स चैंपियनशिप (2022 World Masters Athletics Championships)

Question ID : 264330161438
 Option 1 ID : 264330633080
 Option 2 ID : 264330633079
 Option 3 ID : 264330633082
 Option 4 ID : 264330633081
 Status : Answered
 Chosen Option : 2

Q.25 टी.एन. राजरत्नम पिल्लई (TN Rajarathnam Pillai) निम्नलिखित में से कौन-से संगीत वाद्ययंत्र के वादक हैं?

- Ans
- 1. घटम
 - 2. सारंगी
 - 3. नादस्वरम
 - 4. शहनाई

Question ID : 264330155466
 Option 1 ID : 264330609269
 Option 2 ID : 264330609267
 Option 3 ID : 264330609268
 Option 4 ID : 264330609270
 Status : Answered
 Chosen Option : 3

Section : English Language and Comprehension

Q.1 The following sentence has been split into four segments. Identify the segment that contains a spelling error.

Several days later, / he received a written / comeunication from the magistrate / that the case has been dropped.

- Ans
- 1. Several days later,
 - 2. he received a written
 - 3. comeunication from the magistrate
 - 4. that the case has been dropped

Question ID : 264330152983
 Option 1 ID : 264330599503
 Option 2 ID : 264330599504
 Option 3 ID : 264330599505
 Option 4 ID : 264330599506
 Status : Answered
 Chosen Option : 3

Q.2 Select the option that can be used as a one-word substitute for the given group of words.

A man whose wife is dead

- Ans
- 1. Widower
 - 2. Ascetic
 - 3. Widow
 - 4. Bachelor

Question ID : 264330152735

Option 1 ID : 264330598540

Option 2 ID : 264330598541

Option 3 ID : 264330598539

Option 4 ID : 264330598542

Status : Answered

Chosen Option : 1

Q.3 Select the most appropriate option that can substitute the underlined segment in the given sentence.

No sooner did he finished his examination than he left for his cricket training centre.

- Ans
- 1. no sooner did he finish
 - 2. no sooner than he finished
 - 3. no sooner than he did finished
 - 4. no sooner had he finish

Question ID : 264330153505

Option 1 ID : 264330601534

Option 2 ID : 264330601533

Option 3 ID : 264330601532

Option 4 ID : 264330601531

Status : Answered

Chosen Option : 1

Q.4 Parts of the following sentence have been given as options. Select the option that contains an error.

They will start their journey after the breakfast.

- Ans
- 1. will start
 - 2. their journey
 - 3. They
 - 4. after the breakfast

Question ID : 264330152793

Option 1 ID : 264330598764

Option 2 ID : 264330598765

Option 3 ID : 264330598763

Option 4 ID : 264330598766

Status : Answered

Chosen Option : 4

Q.5 Select the INCORRECTLY spelt word.

- Ans
- 1. Wholeness
 - 2. Overwhelming
 - 3. Legandry
 - 4. Inclusive

Question ID : 264330152782
Option 1 ID : 264330598722
Option 2 ID : 264330598719
Option 3 ID : 264330598721
Option 4 ID : 264330598720
Status : Answered
Chosen Option : 3

Q.6 Select the most appropriate ANTONYM of the given word.
Humane

- Ans
- 1. Proud
 - 2. Kind
 - 3. Cruel
 - 4. Imperfect

Question ID : 264330152741
Option 1 ID : 264330598565
Option 2 ID : 264330598563
Option 3 ID : 264330598564
Option 4 ID : 264330598566
Status : Answered
Chosen Option : 3

Q.7 Select the correctly spelt word.

- Ans
- 1. Prevenseon
 - 2. Prevention
 - 3. Previnsion
 - 4. Prevension

Question ID : 264330153086
Option 1 ID : 264330599909
Option 2 ID : 264330599910
Option 3 ID : 264330599908
Option 4 ID : 264330599907
Status : Answered
Chosen Option : 2

Q.8 Parts of the given sentence have been underlined. One of them contains an error. The underlined parts are given as options with some changes. Select the option that correctly rectifies the error.

He is good at playing the guitar than his brother.

- Ans
- 1. is better
 - 2. in playing
 - 3. guitar
 - 4. to

Question ID : 264330153172
Option 1 ID : 264330600247
Option 2 ID : 264330600248
Option 3 ID : 264330600249
Option 4 ID : 264330600250
Status : Answered
Chosen Option : 1

Q.9 Select the most appropriate ANTONYM of the word given in brackets to fill in the blank.

The company is looking for some _____(idle) workers who can join the organisation immediately.

- Ans
- 1. diligent
 - 2. coy
 - 3. callous
 - 4. sober

Question ID : 264330152694
Option 1 ID : 264330598381
Option 2 ID : 264330598380
Option 3 ID : 264330598379
Option 4 ID : 264330598382
Status : Answered
Chosen Option : 1

Q.10 Select the option that can be used as a one-word substitute for the underlined group of words.

He simply continued to say something in order to convey information in a calm voice.

- Ans
- 1. dictate
 - 2. teach
 - 3. speak
 - 4. spell

Question ID : 264330152706
Option 1 ID : 264330598424
Option 2 ID : 264330598426
Option 3 ID : 264330598423
Option 4 ID : 264330598425
Status : Answered
Chosen Option : 1

Q.11 Select the most appropriate meaning of the underlined idiom.
After years of rivalry, the two families decided to bury the hatchet.

- Ans
- 1. To continue an old quarrel
 - 2. To end a quarrel by never talking to each other
 - 3. To end a quarrel and become friendly
 - 4. To start a new quarrel

Question ID : 264330153411
Option 1 ID : 264330601181
Option 2 ID : 264330601180
Option 3 ID : 264330601182
Option 4 ID : 264330601179
Status : Answered
Chosen Option : 3

Q.12 The following sentence has been split into four segments. Identify the segment that contains an error.
Did / her friend / went to / school yesterday?

- Ans
- 1. went to
 - 2. school yesterday
 - 3. her friend
 - 4. Did

Question ID : 264330155318
Option 1 ID : 264330608713
Option 2 ID : 264330608714
Option 3 ID : 264330608712
Option 4 ID : 264330608711
Status : Answered
Chosen Option : 1

Q.13 Select the most appropriate option that can substitute the underlined segment in the given sentence.
The Delhi administration is seriously worried about the warning to civic health posed by the polluted waters of Yamuna.

- Ans
- 1. a peril to civic health
 - 2. the notice to civic health
 - 3. the plague to civic health
 - 4. the threat to civic health

Question ID : 264330151810
Option 1 ID : 264330594868
Option 2 ID : 264330594870
Option 3 ID : 264330594869
Option 4 ID : 264330594867
Status : Answered
Chosen Option : 4

Q.14 The following sentence has been split into four segments. Identify the segment that contains a grammatical error.
Mohan is respected / by everyone / because he works / hardly.

- Ans
- 1. by everyone
 - 2. because he works
 - 3. hardly
 - 4. Mohan is respected

Question ID : 264330153181
Option 1 ID : 264330600284
Option 2 ID : 264330600285
Option 3 ID : 264330600286
Option 4 ID : 264330600283
Status : Answered
Chosen Option : 3

Q.15 Select the most appropriate meaning of the given idiom.
Day and night

- Ans
- 1. Continuously
 - 2. Clumsily
 - 3. Adversely
 - 4. Diligently

Question ID : 264330151828
Option 1 ID : 264330594939
Option 2 ID : 264330594942
Option 3 ID : 264330594941
Option 4 ID : 264330594940
Status : Answered
Chosen Option : 1

Q.16 Select the most appropriate ANTONYM of the given word.
Humility

- Ans
- 1. Shyness
 - 2. Timidity
 - 3. Arrogance
 - 4. Obedience

Question ID : 264330152776
Option 1 ID : 264330598696
Option 2 ID : 264330598698
Option 3 ID : 264330598695
Option 4 ID : 264330598697
Status : Answered
Chosen Option : 3

Q.17 The following sentence has been split into four segments. Identify the segment that contains an error.

They had been dancing / for an hour / when our dance teacher / had arrived.

- Ans
- 1. when our dance teacher
 - 2. They had been dancing
 - 3. for an hour
 - 4. had arrived

Question ID : 264330143055
Option 1 ID : 264330560497
Option 2 ID : 264330560495
Option 3 ID : 264330560496
Option 4 ID : 264330560498
Status : Answered
Chosen Option : 3

Q.18 Select the most appropriate idiom to fill in the blank.

Jane, please don't tell me fairy tales; I just want to know the real matter _____.

- Ans
- 1. in the cold
 - 2. in a fortnight
 - 3. in the long run
 - 4. in a nutshell

Question ID : 264330153098
Option 1 ID : 264330599957
Option 2 ID : 264330599956
Option 3 ID : 264330599958
Option 4 ID : 264330599955
Status : Answered
Chosen Option : 2

Q.19 Select the most appropriate meaning of the underlined idiom.

The shopkeeper was sly as a fox and tried to sell off the old stock.

- Ans
- 1. smart and clever
 - 2. slow
 - 3. suspicious
 - 4. in confusion or disagreement

Question ID : 264330153643
Option 1 ID : 264330602043
Option 2 ID : 264330602044
Option 3 ID : 264330602046
Option 4 ID : 264330602045
Status : Answered
Chosen Option : 1

Q.20 Select the most appropriate option to fill in the blank.
Bhanu, the security guard, asks everyone entering my building to show their _____ card.

- Ans**
- 1. identity
 - 2. place
 - 3. self
 - 4. name

Question ID : **264330152582**
Option 1 ID : **264330597932**
Option 2 ID : **264330597933**
Option 3 ID : **264330597934**
Option 4 ID : **264330597931**
Status : **Answered**
Chosen Option : **1**

Comprehension:

In the following passage, some words have been deleted. Read the passage carefully and select the most appropriate option to fill in each blank.
Effective communication is about more than just exchanging information. It's about understanding the emotion and intentions (1)_____ the information. As well as being able to clearly convey a message, you need to also (2)_____ in a way that gains the full meaning of what's being said and makes the other person feel heard and understood. For many of us, communicating more clearly and effectively requires learning some (3)_____ skills. Whether you're trying to improve communication with your spouse, kids, boss, or coworkers, learning these skills can (4)_____ your connections to others, build greater trust and respect, and (5)_____ teamwork, problem solving, and your overall social and emotional health.

SubQuestion No : 21

Q.21 Select the most appropriate option to fill in blank number 1.

- Ans**
- 1. behind
 - 2. in front of
 - 3. above
 - 4. below

Question ID : **264330153016**
Option 1 ID : **264330599632**
Option 2 ID : **264330599634**
Option 3 ID : **264330599631**
Option 4 ID : **264330599633**
Status : **Answered**
Chosen Option : **1**

Comprehension:

In the following passage, some words have been deleted. Read the passage carefully and select the most appropriate option to fill in each blank.

Effective communication is about more than just exchanging information. It's about understanding the emotion and intentions (1)_____ the information. As well as being able to clearly convey a message, you need to also (2)_____ in a way that gains the full meaning of what's being said and makes the other person feel heard and understood. For many of us, communicating more clearly and effectively requires learning some (3)_____ skills. Whether you're trying to improve communication with your spouse, kids, boss, or coworkers, learning these skills can (4)_____ your connections to others, build greater trust and respect, and (5)_____ teamwork, problem solving, and your overall social and emotional health.

SubQuestion No : 22

Q.22 Select the most appropriate option to fill in blank number 2.

- Ans 1. think
 2. talk
 3. listen
 4. speak

Question ID : 264330153017
 Option 1 ID : 264330599638
 Option 2 ID : 264330599637
 Option 3 ID : 264330599635
 Option 4 ID : 264330599636
 Status : Answered
 Chosen Option : 3

Comprehension:

In the following passage, some words have been deleted. Read the passage carefully and select the most appropriate option to fill in each blank.

Effective communication is about more than just exchanging information. It's about understanding the emotion and intentions (1)_____ the information. As well as being able to clearly convey a message, you need to also (2)_____ in a way that gains the full meaning of what's being said and makes the other person feel heard and understood. For many of us, communicating more clearly and effectively requires learning some (3)_____ skills. Whether you're trying to improve communication with your spouse, kids, boss, or coworkers, learning these skills can (4)_____ your connections to others, build greater trust and respect, and (5)_____ teamwork, problem solving, and your overall social and emotional health.

SubQuestion No : 23

Q.23 Select the most appropriate option to fill in blank number 3.

- Ans 1. boring
 2. trivial
 3. wasteful
 4. important

Question ID : 264330153018
 Option 1 ID : 264330599639
 Option 2 ID : 264330599642
 Option 3 ID : 264330599641
 Option 4 ID : 264330599640
 Status : Answered
 Chosen Option : 4

Comprehension:

In the following passage, some words have been deleted. Read the passage carefully and select the most appropriate option to fill in each blank.

Effective communication is about more than just exchanging information. It's about understanding the emotion and intentions (1)_____ the information. As well as being able to clearly convey a message, you need to also (2)_____ in a way that gains the full meaning of what's being said and makes the other person feel heard and understood. For many of us, communicating more clearly and effectively requires learning some (3)_____ skills. Whether you're trying to improve communication with your spouse, kids, boss, or coworkers, learning these skills can (4)_____ your connections to others, build greater trust and respect, and (5)_____ teamwork, problem solving, and your overall social and emotional health.

SubQuestion No : 24

Q.24 Select the most appropriate option to fill in blank number 4.

- Ans
- 1. hamper
 - 2. trivialise
 - 3. disturb
 - 4. deepen

Question ID : 264330153019

Option 1 ID : 264330599645

Option 2 ID : 264330599643

Option 3 ID : 264330599644

Option 4 ID : 264330599646

Status : Answered

Chosen Option : 4

Comprehension:

In the following passage, some words have been deleted. Read the passage carefully and select the most appropriate option to fill in each blank.

Effective communication is about more than just exchanging information. It's about understanding the emotion and intentions (1)_____ the information. As well as being able to clearly convey a message, you need to also (2)_____ in a way that gains the full meaning of what's being said and makes the other person feel heard and understood. For many of us, communicating more clearly and effectively requires learning some (3)_____ skills. Whether you're trying to improve communication with your spouse, kids, boss, or coworkers, learning these skills can (4)_____ your connections to others, build greater trust and respect, and (5)_____ teamwork, problem solving, and your overall social and emotional health.

SubQuestion No : 25

Q.25 Select the most appropriate option to fill in blank number 5.

- Ans
- 1. hamper
 - 2. hasten
 - 3. improve
 - 4. disturb

Question ID : 264330153020

Option 1 ID : 264330599648

Option 2 ID : 264330599649

Option 3 ID : 264330599647

Option 4 ID : 264330599650

Status : Answered

Chosen Option : 3

Multi Tasking Non Technical Staff and Havaladar CBIC and CBN Examination 2023

Roll Number	
Candidate Name	
Venue Name	Skymoon IT Point Pvt. Ltd
Exam Date	05/09/2023
Exam Time	4:00 PM - 6:00 PM
Subject	MTS Non Tech Havaladar CBIC and CBN Examination 2023

Section : Numerical and Mathematical Ability

Q.1 In how many years will a sum of ₹18,000 at 20% per annum compounded half yearly becomes ₹23,958?

- Ans**
- ✓ 1. $1\frac{1}{2}$
 - ✗ 2. $3\frac{1}{2}$
 - ✗ 3. $1\frac{1}{4}$
 - ✗ 4. $2\frac{1}{2}$

Question ID : 264330154089

Option 1 ID : 264330603820

Option 2 ID : 264330603821

Option 3 ID : 264330603822

Option 4 ID : 264330603819

Status : Answered

Chosen Option : 1

Q.2 Rashmi and Tina can do a piece of work in 20 and 30 days, respectively. If they work at it on alternate days with Rashmi beginning, then, in how many days will the work be over?

- Ans**
- ✗ 1. 28
 - ✗ 2. 26
 - ✓ 3. 24
 - ✗ 4. 12

Question ID : 264330156119

Option 1 ID : 264330611878

Option 2 ID : 264330611877

Option 3 ID : 264330611876

Option 4 ID : 264330611875

Status : Answered

Chosen Option : 3

Q.3 A swimmer swims downstream from point A to point B in 4 hours. It covers the same distance upstream in 5 hours. If the speed of the stream is 2 km/h, what is the distance between A and B:

- Ans**
- ✓ 1. 80 km
 - ✗ 2. 72 km
 - ✗ 3. 60 km
 - ✗ 4. 100 km

Question ID : 264330154058
Option 1 ID : 264330603697
Option 2 ID : 264330603698
Option 3 ID : 264330603695
Option 4 ID : 264330603696
Status : Answered
Chosen Option : 1

Q.4 The average of the two numbers is 48. If 3 is added to a smaller number, then the ratio between them is 11 : 20. Find the larger number. (Round up to two decimal places).

- Ans**
- ✗ 1. 40.87
 - ✗ 2. 3.87
 - ✓ 3. 63.87
 - ✗ 4. 70.87

Question ID : 264330156343
Option 1 ID : 264330612771
Option 2 ID : 264330612773
Option 3 ID : 264330612772
Option 4 ID : 264330612774
Status : Answered
Chosen Option : 3

Q.5 In a group of people, 70% are men and 30% are women. The average age of the men is 50 years and that of the women is 40 years. Find the average age of all the members in the group (in years).

- Ans**
- ✗ 1. 48
 - ✓ 2. 47
 - ✗ 3. 46
 - ✗ 4. 45

Question ID : 264330153835
Option 1 ID : 264330602804
Option 2 ID : 264330602805
Option 3 ID : 264330602803
Option 4 ID : 264330602806
Status : Answered
Chosen Option : 2

Q.6 Simplify: $\frac{1}{3} \div \frac{1}{3} \times \frac{1}{3} = ?$
 $\frac{1}{3} + \frac{1}{3} - \frac{1}{3}$

- Ans
- 1. 3
 - 2. $\frac{1}{9}$
 - 3. 1
 - 4. $\frac{1}{3}$

Question ID : 264330154040
 Option 1 ID : 264330603625
 Option 2 ID : 264330603626
 Option 3 ID : 264330603624
 Option 4 ID : 264330603623
 Status : Answered
 Chosen Option : 3

Q.7 A man and a boy can do a piece of work in 12 days. If the man works alone for the last 3 days, it is completed in 13 days. How long would the boy take to do it alone?

- Ans
- 1. 36 days
 - 2. 18 days
 - 3. 72 days
 - 4. 30 days

Question ID : 264330156194
 Option 1 ID : 264330612176
 Option 2 ID : 264330612178
 Option 3 ID : 264330612175
 Option 4 ID : 264330612177
 Status : Answered
 Chosen Option : 1

Q.8 A sum of money becomes seven times in 16 years at simple interest per annum. Find the per annum rate of interest.

- Ans
- 1. 25.8%
 - 2. 39.2%
 - 3. 20.3%
 - 4. 37.5%

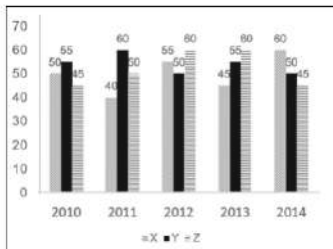
Question ID : 264330155746
 Option 1 ID : 264330610388
 Option 2 ID : 264330610390
 Option 3 ID : 264330610387
 Option 4 ID : 264330610389
 Status : Answered
 Chosen Option : 4

Q.9 A train covers a certain distance with a speed of 72 km/h in the first two hours of its journey and 120 km in the next 1.5 hours. What is its average speed (in km/h, rounded off to the nearest integer) for the entire journey?

- Ans**
- ✓ 1. 75
 - ✗ 2. 78
 - ✗ 3. 73
 - ✗ 4. 79

Question ID : 264330156471
Option 1 ID : 264330613274
Option 2 ID : 264330613272
Option 3 ID : 264330613273
Option 4 ID : 264330613271
Status : Answered
Chosen Option : 3

Q.10 The graph shows the production of tyres (in Lakhs) by three different companies X, Y, and Z over the years. Directions: Study the following graph carefully to answer the question given below it.



What is the percentage increase in production of company X from 2011 to 2012?

- Ans**
- ✓ 1. 37.5%
 - ✗ 2. 32.5%
 - ✗ 3. 38.25%
 - ✗ 4. 35%

Question ID : 264330153889
Option 1 ID : 264330603021
Option 2 ID : 264330603022
Option 3 ID : 264330603019
Option 4 ID : 264330603020
Status : Answered
Chosen Option : 1

Q.11 By selling 8 items, a shopkeeper gains the selling price of 2 items. The gain percentage of the shopkeeper is:

- Ans**
- ✗ 1. 25%
 - ✗ 2. $16\frac{2}{3}\%$
 - ✓ 3. $33\frac{1}{3}\%$
 - ✗ 4. 30%

Question ID : 264330161981
Option 1 ID : 264330635254
Option 2 ID : 264330635253
Option 3 ID : 264330635252
Option 4 ID : 264330635251
Status : Answered
Chosen Option : 3

Q.12 Zeenat earns 20% on an investment, but she loses 10% on another investment. If the two investments are respectively in the ratio of 3 : 5, then what is the percentage gain or loss for Zeenat on the two investments taken together?

- Ans**
- ✓ 1. 1.25% Gain
 - ✗ 2. 2.25% Loss
 - ✗ 3. 1.25% Loss
 - ✗ 4. 2.25% Gain

Question ID : 264330155705
Option 1 ID : 264330610224
Option 2 ID : 264330610225
Option 3 ID : 264330610223
Option 4 ID : 264330610226
Status : Answered
Chosen Option : 1

Q.13 Find the arithmetic mean of 28, 21, 39, 33, 36, 23.

- Ans**
- ✓ 1. 30
 - ✗ 2. 32
 - ✗ 3. 26
 - ✗ 4. 28

Question ID : 264330155953
Option 1 ID : 264330611211
Option 2 ID : 264330611213
Option 3 ID : 264330611214
Option 4 ID : 264330611212
Status : Answered
Chosen Option : 1

Q.14 An athlete crosses a 3000-m distance in 10 minutes. What is his speed (in km/h)?

- Ans**
- ✗ 1. 16
 - ✗ 2. 12
 - ✗ 3. 14
 - ✓ 4. 18

Question ID : 264330156231
Option 1 ID : 264330612325
Option 2 ID : 264330612323
Option 3 ID : 264330612324
Option 4 ID : 264330612326
Status : Answered
Chosen Option : 4

Q.15 The diameter of the base of a right circular cylinder is 36 cm and its height is 21 cm. Find the volume of the cylinder.

(Take $\pi = \frac{22}{7}$)

- Ans**
- 1. 2376 cm³
 - 2. 85536 cm³
 - 3. 21384 cm³
 - 4. 5346 cm³

Question ID : 264330156437

Option 1 ID : 264330613141

Option 2 ID : 264330613139

Option 3 ID : 264330613142

Option 4 ID : 264330613140

Status : Answered

Chosen Option : 3

Q.16 Rupees 66,000 is to be divided amongst Asha, Bhupinder and Gargi in such a way that the ratio of their shares is to be: Asha : Bhupinder = 9 : 5 and Bhupinder : Gargi = 2 : 1. How much should Asha get?

- Ans**
- 1. ₹38,000
 - 2. ₹36,000
 - 3. ₹32,000
 - 4. ₹34,000

Question ID : 264330154124

Option 1 ID : 264330603962

Option 2 ID : 264330603961

Option 3 ID : 264330603959

Option 4 ID : 264330603960

Status : Answered

Chosen Option : 2

Q.17 Three numbers are in the ratio 3 : 5 : 7. If their LCM is 2625, find their HCF.

- Ans**
- 1. 100
 - 2. 125
 - 3. 50
 - 4. 25

Question ID : 264330155986

Option 1 ID : 264330611345

Option 2 ID : 264330611346

Option 3 ID : 264330611343

Option 4 ID : 264330611344

Status : Answered

Chosen Option : 4

Q.18 The table below shows the marks obtained by students A, B and C in French and Geography in an examination. The maximum marks for each subject are 100. Study the table carefully and answer the question that follows.

Student	French	Geography
A	98	100
B	89	98
C	92	99

What is the ratio of the average marks of the three students in Geography to that in French?

- Ans
- 1. 32 : 28
 - 2. 28 : 32
 - 3. 33 : 31
 - 4. 31 : 33

Question ID : 264330156497
Option 1 ID : 264330613375
Option 2 ID : 264330613376
Option 3 ID : 264330613377
Option 4 ID : 264330613378
Status : Answered
Chosen Option : 3

Q.19 A contractor reduces the working time of a week (Monday to Saturday) from 48 hours to 36 hours for his workers without changing the payment. What is the percentage increase in the hourly rate?

- Ans
- 1. $30\frac{1}{3}\%$
 - 2. $33\frac{1}{3}\%$
 - 3. $67\frac{2}{3}\%$
 - 4. $70\frac{2}{3}\%$

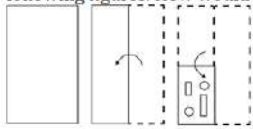
Question ID : 264330156473
Option 1 ID : 264330613281
Option 2 ID : 264330613279
Option 3 ID : 264330613280
Option 4 ID : 264330613282
Status : Answered
Chosen Option : 2

Q.20 The length of the median of an equilateral triangle is $6\sqrt{3}$ cm. The area of the triangle is:

- Ans
- 1. $36\sqrt{3}$ cm²
 - 2. 36 cm²
 - 3. 72 cm²
 - 4. $72\sqrt{3}$ cm²

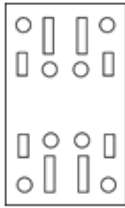
Question ID : 264330156500
Option 1 ID : 264330613389
Option 2 ID : 264330613388
Option 3 ID : 264330613390
Option 4 ID : 264330613387
Status : Answered
Chosen Option : 1

Q.1 The sequence of folding a piece of paper and the manner in which the folded paper is cut is shown in the following figures. How would this paper look when unfolded?

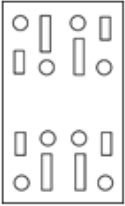


Ans

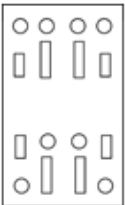
✓ 1.




✗ 2.



✗ 3.



✗ 4.



Question ID : 264330155608

Option 1 ID : 264330609837

Option 2 ID : 264330609838

Option 3 ID : 264330609835

Option 4 ID : 264330609836

Status : Answered

Chosen Option : 1

Q.2 21 is related to 147 following a certain logic. Following the same logic, 32 is related to 224. To which of the following is 52 related to, following the same logic?

Ans ✗ 1. 356

✓ 2. 364

✗ 3. 365

✗ 4. 346

Question ID : 264330151590

Option 1 ID : 264330593990

Option 2 ID : 264330593987

Option 3 ID : 264330593988

Option 4 ID : 264330593989

Status : Answered

Chosen Option : 2

Q.3 Find out the correct alternative that when filled in the blanks in the same sequence will make the series logically complete.

LV_J _VFJ T_GJ XVH_ BV_J

- Ans**
- ✓ 1. EPVJI
 - ✗ 2. DVJLE
 - ✗ 3. DBRPE
 - ✗ 4. EJBLR

Question ID : 264330154725
Option 1 ID : 264330606363
Option 2 ID : 264330606365
Option 3 ID : 264330606366
Option 4 ID : 264330606364
Status : Answered
Chosen Option : 1

Q.4 Select the combination of letters that when sequentially placed in the blanks of the given series, will complete the series.

_GGHG__GG_G_

- Ans**
- ✓ 1. HGHHG
 - ✗ 2. GHHGH
 - ✗ 3. HGGHH
 - ✗ 4. HHHGH

Question ID : 264330151640
Option 1 ID : 264330594189
Option 2 ID : 264330594190
Option 3 ID : 264330594187
Option 4 ID : 264330594188
Status : Answered
Chosen Option : 1

Q.5 उस शब्द-युग्म का चयन कीजिए जो नीचे दिए गए शब्दों के युग्म में व्यक्त किए गए समान संबंध का सबसे अच्छा निरूपण करता है।

(शब्दों को अर्थपूर्ण हिंदी शब्दों के रूप में माना जाना चाहिए और उन्हें शब्द में अक्षरों की संख्या/व्यंजन/स्वरों की संख्या के आधार पर एक दूसरे से संबंधित नहीं किया जाना चाहिए।)

हकलाना : बातचीत

- Ans**
- ✓ 1. दृष्टिवैषम्य : दृष्टि
 - ✗ 2. शोर मचाना : सुनना
 - ✗ 3. सुगंध : महक
 - ✗ 4. नोवोकेन : स्पर्श

Question ID : 264330154634
Option 1 ID : 264330606001
Option 2 ID : 264330605999
Option 3 ID : 264330606000
Option 4 ID : 264330606002
Status : Answered
Chosen Option : 1

Q.6 What should come in place of the question mark (?) in the given series based on the English alphabetical order?

FQA, HTE, JWI, LZM, ?

- Ans
- 1. ODR
 - 2. NCQ
 - 3. MDP
 - 4. OEP

Question ID : 264330156296

Option 1 ID : 264330612584

Option 2 ID : 264330612586

Option 3 ID : 264330612583

Option 4 ID : 264330612585

Status : Answered

Chosen Option : 2

Q.7 Which figure should replace the question mark (?) if the following figure series were to be continued?

C	P	A	X	↑	P	P	A	X	C	▷	A	
	▷			C			↑			P		?
X		↑	▷		A	C		▷	↑		X	

Ans

1.

A	P	C
	▷	
X		↑

2.

A	P	X
	▷	
C		↑

3.

A	X	P
	C	
▷		↑

4.

A	X	C
	▷	
P		↑

Question ID : 264330154753

Option 1 ID : 264330606475

Option 2 ID : 264330606477

Option 3 ID : 264330606478

Option 4 ID : 264330606476

Status : Answered

Chosen Option : 4

Q.8 In a certain code language, 'CHEW' is coded as '39' and 'FORE' is coded as '44'. What is the code for 'GLIT' in the given code language?

- Ans** ✓ 1. 48
✗ 2. 51
✗ 3. 50
✗ 4. 52

Question ID : 264330155834
Option 1 ID : 264330610740
Option 2 ID : 264330610741
Option 3 ID : 264330610739
Option 4 ID : 264330610742
Status : Answered
Chosen Option : 1

Q.9 What will come in the place of '?' in the following equation, if '+' and '-' are interchanged and '×' and '÷' are interchanged?

$$92 + 18 \div 2 - 125 \times 25 = ?$$

- Ans** ✓ 1. 61
✗ 2. 41
✗ 3. 51
✗ 4. 71

Question ID : 264330155671
Option 1 ID : 264330610087
Option 2 ID : 264330610089
Option 3 ID : 264330610088
Option 4 ID : 264330610090
Status : Answered
Chosen Option : 1

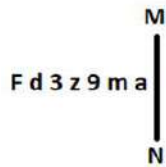
Q.10 What should come in place of '?' in the given series?

22 24 28 36 52 ?

- Ans** ✓ 1. 84
✗ 2. 88
✗ 3. 90
✗ 4. 72

Question ID : 264330151453
Option 1 ID : 264330593440
Option 2 ID : 264330593441
Option 3 ID : 264330593442
Option 4 ID : 264330593439
Status : Answered
Chosen Option : 1

Q.11 Select the correct mirror image of the given figure when the mirror is placed at MN as shown below.



- Ans
- 1. s w e z 3 b 7
 - 2. m a e z 3 b 7
 - 3. s m e z 3 b 7
 - 4. s m e z 3 b 7

Question ID : 264330151516
 Option 1 ID : 264330593693
 Option 2 ID : 264330593694
 Option 3 ID : 264330593692
 Option 4 ID : 264330593691
 Status : Answered
 Chosen Option : 4

Q.12 What will come in the place of the question mark (?) in the following equation, if '+' and '-' are interchanged and 'x' and '÷' are interchanged?
 $93 + 5 + 4 - 45 \times 5 = ?$

- Ans
- 1. 490
 - 2. 470
 - 3. 495
 - 4. 480

Question ID : 264330154613
 Option 1 ID : 264330605917
 Option 2 ID : 264330605915
 Option 3 ID : 264330605918
 Option 4 ID : 264330605916
 Status : Answered
 Chosen Option : 2

Q.13 In a certain code language, 'OPEN' is coded as '4582' and 'PORE' is coded as '2385'. What is the code for 'R' in the given code language?

- Ans
- 1. 8
 - 2. 2
 - 3. 3
 - 4. 5

Question ID : 264330151700
 Option 1 ID : 264330594430
 Option 2 ID : 264330594428
 Option 3 ID : 264330594429
 Option 4 ID : 264330594427
 Status : Answered
 Chosen Option : 3

Q.14 What should come in place of '?' in the given series?

6 25 82 253 766 ?

- Ans
- 1. 2569
 - 2. 2491
 - 3. 2485
 - 4. 2305

Question ID : 264330151473
Option 1 ID : 264330593522
Option 2 ID : 264330593521
Option 3 ID : 264330593520
Option 4 ID : 264330593519
Status : Answered
Chosen Option : 4

Q.15 Six people, C, D, E, F, G and H are sitting in a straight line, facing north. Only three people sit to the right of G. Only two people sit between G and E. C sits to the immediate right of F and to the immediate left of G. H is not the immediate neighbour of E.

Who are sitting between G and E?

- Ans
- 1. F and C
 - 2. C and D
 - 3. H and E
 - 4. H and D

Question ID : 264330155544
Option 1 ID : 264330609579
Option 2 ID : 264330609582
Option 3 ID : 264330609581
Option 4 ID : 264330609580
Status : Answered
Chosen Option : 4

Q.16 In the following number-pairs, the second number is obtained by applying certain mathematical operations to the first number. Select the set in which the numbers are related in the same way as are the numbers of the following sets.

(NOTE: Operations should be performed on the whole numbers, without breaking down the numbers into its constituent digits. E.g. 13 – Operations on 13 such as adding / subtracting / multiplying etc. to 13 can be performed. Breaking down 13 into 1 and 3 and then performing mathematical operations on 1 and 3 is not allowed)

11, 110

19, 190

- Ans
- 1. 31, 310
 - 2. 22, 440
 - 3. 91, 190
 - 4. 51, 150

Question ID : 264330151618
Option 1 ID : 264330594099
Option 2 ID : 264330594101
Option 3 ID : 264330594102
Option 4 ID : 264330594100
Status : Answered
Chosen Option : 1

Q.17 Read the given statements and conclusions carefully. You have to take the given statements to be true even if they seem to be at variance from commonly known facts. You have to decide which conclusion/s logically follow/s from the given statements.

Statements: Some sofas are teapots. All teapots are printers. Some printers are vases.

Conclusion I: Some teapots are sofas.

Conclusion II: Some vases are printers.

- Ans**
- 1. Neither conclusion (I) nor (II) is follow.
 - 2. Only conclusion (II) is follow.
 - 3. Both conclusions (I) and (II) are follow.
 - 4. Only conclusion (I) is follow.

Question ID : 264330155903
Option 1 ID : 264330611017
Option 2 ID : 264330611016
Option 3 ID : 264330611018
Option 4 ID : 264330611015
Status : Answered
Chosen Option : 3

Q.18 The position of how many letters will remain unchanged if each of the letter in the word 'TIMES' is arranged in alphabetical order?

- Ans**
- 1. Two
 - 2. None
 - 3. Four
 - 4. One

Question ID : 264330154325
Option 1 ID : 264330604764
Option 2 ID : 264330604763
Option 3 ID : 264330604765
Option 4 ID : 264330604766
Status : Answered
Chosen Option : 1

Q.19 What should come in place of '?' in the given series?

5 8 17 44 125 ?

- Ans**
- 1. 391
 - 2. 312
 - 3. 368
 - 4. 283

Question ID : 264330151485
Option 1 ID : 264330593570
Option 2 ID : 264330593567
Option 3 ID : 264330593568
Option 4 ID : 264330593569
Status : Answered
Chosen Option : 3

Q.20 Read the given statements and conclusions carefully. You have to take the given statements to be true even if they seem to be at variance from commonly known facts. You have to decide which conclusion/s logically follow/s from the given statements.

Statements: All blenders are microwaves. Some microwaves are toasters. All toasters are lamps.

Conclusion I: Some blenders are microwaves.

Conclusion II: All toasters are blenders.

- Ans**
- 1. Only conclusion (II) is follow.
 - 2. Both conclusions (I) and (II) are follow.
 - 3. Neither conclusion (I) nor (II) is follow.
 - 4. Only conclusion (I) is follow.

Question ID : 264330155911
Option 1 ID : 264330611048
Option 2 ID : 264330611050
Option 3 ID : 264330611049
Option 4 ID : 264330611047
Status : Answered
Chosen Option : 4

Section : General Awareness

Q.1 How many elements are listed in the modern periodic table?

- Ans**
- 1. 107
 - 2. 81
 - 3. 91
 - 4. 118

Question ID : 264330161331
Option 1 ID : 264330632652
Option 2 ID : 264330632654
Option 3 ID : 264330632653
Option 4 ID : 264330632651
Status : Answered
Chosen Option : 4

Q.2 In which of the following States was the third edition of Khelo India University Games held?

- Ans**
- 1. Jharkhand
 - 2. Uttar Pradesh
 - 3. New Delhi
 - 4. Punjab

Question ID : 264330161146
Option 1 ID : 264330631916
Option 2 ID : 264330631918
Option 3 ID : 264330631917
Option 4 ID : 264330631915
Status : Answered
Chosen Option : 2

Q.3 Which country did India beat in the final to win the 2023 Intercontinental Cup Football championship?

- Ans
- 1. Thailand
 - 2. Lebanon
 - 3. Mongolia
 - 4. Vanuatu

Question ID : 264330161139
Option 1 ID : 264330631890
Option 2 ID : 264330631887
Option 3 ID : 264330631889
Option 4 ID : 264330631888
Status : Answered
Chosen Option : 2

Q.4 In which state of India is shifting cultivation known as Bringa?

- Ans
- 1. Andhra Pradesh
 - 2. Manipur
 - 3. Odisha
 - 4. Madhya Pradesh

Question ID : 264330160137
Option 1 ID : 264330627890
Option 2 ID : 264330627889
Option 3 ID : 264330627887
Option 4 ID : 264330627888
Status : Marked For Review
Chosen Option : 3

Q.5 What does the acronym 'ATM' stand for?

- Ans
- 1. Automated Teller Machine
 - 2. Automated Transaction Management
 - 3. Account Tracking Module
 - 4. All-Time Money

Question ID : 264330157302
Option 1 ID : 264330616571
Option 2 ID : 264330616572
Option 3 ID : 264330616574
Option 4 ID : 264330616573
Status : Answered
Chosen Option : 1

Q.6 Who had founded the first Women's University in India?

- Ans
- 1. Dhondo Keshav Karve
 - 2. Ashutosh Mukherjee
 - 3. William Hunter
 - 4. Sayed Ahmed Khan

Question ID : 264330162336
Option 1 ID : 264330636671
Option 2 ID : 264330636672
Option 3 ID : 264330636674
Option 4 ID : 264330636673
Status : Answered
Chosen Option : 3

Q.7 Devendra Jhajharia won which medal/place in World Para Athletics Grand Prix?

- Ans
- 1. Bronze
 - 2. Gold
 - 3. Silver
 - 4. Fourth

Question ID : 264330158364
Option 1 ID : 264330620817
Option 2 ID : 264330620815
Option 3 ID : 264330620816
Option 4 ID : 264330620818
Status : Answered
Chosen Option : 2

Q.8 In the process of cell division, the formation of phragmoplast between the two daughter nuclei occurs during:

- Ans
- 1. the G₀ phase
 - 2. the cytokinesis
 - 3. the S phase
 - 4. the karyokinesis

Question ID : 264330156617
Option 1 ID : 264330613858
Option 2 ID : 264330613855
Option 3 ID : 264330613857
Option 4 ID : 264330613856
Status : Answered
Chosen Option : 4

Q.9 In which type of forests are Mahogany, Rosewood and Cinchona trees found in India?

- Ans
- 1. Tropical Evergreen forests
 - 2. Tropical Deciduous forests
 - 3. Mangrove forests
 - 4. Montane forests

Question ID : 264330160149
Option 1 ID : 264330627937
Option 2 ID : 264330627935
Option 3 ID : 264330627936
Option 4 ID : 264330627938
Status : Answered
Chosen Option : 1

Q.10 Lebang Boomani dance is the harvest dance of _____.

- Ans
- 1. Mizoram
 - 2. Tripura
 - 3. Assam
 - 4. Meghalaya

Question ID : 264330159062
Option 1 ID : 264330623607
Option 2 ID : 264330623610
Option 3 ID : 264330623609
Option 4 ID : 264330623608
Status : Answered
Chosen Option : 4

Q.11 राष्ट्रीय आय लेखांकन में अंतिम और मध्यवर्ती वस्तुओं/सेवाओं के बीच अंतर करना क्यों महत्वपूर्ण है?

- Ans
- 1. यह उपभोक्ता की प्राथमिकताओं और बाजार की मांग में बदलाव को ट्रैक करने में मदद करता है।
 - 2. यह आर्थिक विकास और उत्पादकता की अधिक सटीक माप करने में सहायता करता है।
 - 3. विभिन्न क्षेत्रों के बीच आय के वितरण में अंतर्दृष्टि प्रदान करता है।
 - 4. यह उत्पादित वस्तुओं और सेवाओं की समग्र गुणवत्ता निर्धारित करने में मदद करता है।

Question ID : 264330157314
 Option 1 ID : 264330616622
 Option 2 ID : 264330616620
 Option 3 ID : 264330616621
 Option 4 ID : 264330616619
 Status : Answered
 Chosen Option : 2

Q.12 Which of the following is NOT a directive principle of state policy?

- Ans
- 1. Separation of the judiciary from executive
 - 2. Reside in any part of India
 - 3. Uniform civil code
 - 4. Protection of monuments

Question ID : 264330159907
 Option 1 ID : 264330626978
 Option 2 ID : 264330626977
 Option 3 ID : 264330626975
 Option 4 ID : 264330626976
 Status : Answered
 Chosen Option : 2

Q.13 In which state is the Sanchi Stupa situated?

- Ans
- 1. Bihar
 - 2. Uttar Pradesh
 - 3. Gujarat
 - 4. Madhya Pradesh

Question ID : 264330160759
 Option 1 ID : 264330630370
 Option 2 ID : 264330630369
 Option 3 ID : 264330630367
 Option 4 ID : 264330630368
 Status : Answered
 Chosen Option : 4

Q.14 भारत का नाममात्र कार्यकारी प्राधिकारी (nominal executive authority) कौन है?

- Ans
- 1. उपराष्ट्रपति
 - 2. महान्यायवादी
 - 3. राष्ट्रपति
 - 4. प्रधानमंत्री

Question ID : 264330159910
 Option 1 ID : 264330626990
 Option 2 ID : 264330626989
 Option 3 ID : 264330626988
 Option 4 ID : 264330626987
 Status : Answered
 Chosen Option : 3

Q.15 Who among the following is the author of the book, 'Unfinished: A Memoir'?

- Ans
- 1. Alia Bhatt
 - 2. Priyanka Chopra
 - 3. Deepika Padukone
 - 4. Kareena Kapoor

Question ID : 264330161907
Option 1 ID : 264330634956
Option 2 ID : 264330634957
Option 3 ID : 264330634955
Option 4 ID : 264330634958
Status : Answered
Chosen Option : 2

Q.16 The South China Sea is a part of which of the following oceans?

- Ans
- 1. Arctic Ocean
 - 2. Pacific Ocean
 - 3. Southern Ocean
 - 4. Indian Ocean

Question ID : 264330157835
Option 1 ID : 264330618700
Option 2 ID : 264330618702
Option 3 ID : 264330618701
Option 4 ID : 264330618699
Status : Answered
Chosen Option : 1

Q.17 The official language of which neighbouring country of India is 'Dhivehi'?

- Ans
- 1. Maldives
 - 2. Sri Lanka
 - 3. Bhutan
 - 4. China

Question ID : 264330160174
Option 1 ID : 264330628038
Option 2 ID : 264330628036
Option 3 ID : 264330628037
Option 4 ID : 264330628035
Status : Answered
Chosen Option : 1

Q.18 Under which scheme of Airport Authority of India did the Jammu and Kashmir Lieutenant Governor inaugurate UMEED Market Place at Srinagar international airport for supporting local art and artisans of Self Help Groups of J&K Rural Livelihood Mission?

- Ans 1. AVSAR Scheme
 2. AKASH Scheme
 3. AAKAR Scheme
 4. ASAR Scheme

Question ID : 264330161408
Option 1 ID : 264330632960
Option 2 ID : 264330632961
Option 3 ID : 264330632962
Option 4 ID : 264330632959
Status : Answered
Chosen Option : 1

Q.19 Who was the Iranian ruler who attacked the city of Delhi and took away an immense amount of wealth in 1739?

- Ans 1. Ahmad Shah Qajar
 2. Nadir Shah
 3. Ahmad Shah Abdali
 4. Abbas I

Question ID : 264330161735
Option 1 ID : 264330634268
Option 2 ID : 264330634269
Option 3 ID : 264330634267
Option 4 ID : 264330634270
Status : Answered
Chosen Option : 3

Q.20 Pandit Bhimsen Joshi belonged to the _____ Gharana.

- Ans 1. Banaras
 2. Kirana
 3. Agra
 4. Dilli

Question ID : 264330155463
Option 1 ID : 264330609258
Option 2 ID : 264330609257
Option 3 ID : 264330609256
Option 4 ID : 264330609255
Status : Answered
Chosen Option : 1

Q.21 Mahari Dance and Gotipua Dance belongs to which of the following states?

- Ans 1. Odisha
 2. Haryana
 3. Uttar Pradesh
 4. Bihar

Question ID : 264330159060
Option 1 ID : 264330623599
Option 2 ID : 264330623600
Option 3 ID : 264330623601
Option 4 ID : 264330623602
Status : Answered
Chosen Option : 1

Q.22 Identify the WRONG pair of dancer and the related dance form from the following.

- Ans 1. Meenakshi Chitharanjan - Bharatanatyam
 2. Kumkum Dhar - Kuchipudi
 3. Sruti Bandopadhyay - Manipuri
 4. Trilochan Mohanta - Chhau

Question ID : 264330155529
Option 1 ID : 264330609519
Option 2 ID : 264330609520
Option 3 ID : 264330609521
Option 4 ID : 264330609522
Status : Answered
Chosen Option : 4

Q.23 Which of the following musicians is popularly known as 'Panchamda'?

- Ans 1. Ravi
 2. Khayam
 3. Naushad
 4. RD Burman

Question ID : 264330160974
Option 1 ID : 264330631228
Option 2 ID : 264330631229
Option 3 ID : 264330631230
Option 4 ID : 264330631227
Status : Answered
Chosen Option : 4

Q.24 The 'Mukteshwar' dance festival is held from 14th to 16th January at the Mukteshwar temple in the state of _____.

- Ans 1. Uttarakhand
 2. Odisha
 3. Madhya Pradesh
 4. Himachal Pradesh

Question ID : 264330160839
Option 1 ID : 264330630687
Option 2 ID : 264330630689
Option 3 ID : 264330630690
Option 4 ID : 264330630688
Status : Answered
Chosen Option : 1

Q.25 Select from among the given options the autobiography of Milkha Singh.

- Ans
- 1. A Shot at History
 - 2. The Race of My Life
 - 3. The Test of My Life
 - 4. One Life Is Not Enough

Question ID : 264330155493
Option 1 ID : 264330609375
Option 2 ID : 264330609376
Option 3 ID : 264330609377
Option 4 ID : 264330609378
Status : Answered
Chosen Option : 4

Section : English Language and Comprehension

Q.1 Parts of the following sentence have been underlined and given as options. Select the option that contains an error.

For an all-too-brief period between the late 1980s and the late 2000s, a world was characterised by convergence.

- Ans
- 1. between the late
 - 2. For an all-too-brief
 - 3. characterised by
 - 4. a world was

Question ID : 264330153194
Option 1 ID : 264330600337
Option 2 ID : 264330600335
Option 3 ID : 264330600338
Option 4 ID : 264330600336
Status : Answered
Chosen Option : 4

Q.2 The sentence given below has spelling errors. Select the sentence without spelling errors.

Let us appreciate, support and contribute our might to the promotional efforts of the community in this direction.

- Ans
- 1. Let us appreciate, support and contribute our might to the promotional efforts of the community in this direction.
 - 2. Let us appreciate, suport and contribute our might to the promotional efforts of the community in this direction.
 - 3. Let us appreciate, support and contribute our might to the promotion all efforts of the community in this direction.
 - 4. Let us appreciate, support and contribute our might to the promotional efforts of the community in this direction.

Question ID : 264330151841
Option 1 ID : 264330594994
Option 2 ID : 264330594991
Option 3 ID : 264330594992
Option 4 ID : 264330594993
Status : Answered
Chosen Option : 4

Q.3 Select the most appropriate option to fill in the blank.
The team had a _____ with respect to the proposal given by Mr. Albert.

- Ans
- 1. descussion
 - 2. discusion
 - 3. disckassion
 - 4. discussion

Question ID : 264330153303
Option 1 ID : 264330600770
Option 2 ID : 264330600769
Option 3 ID : 264330600768
Option 4 ID : 264330600767
Status : Answered
Chosen Option : 4

Q.4 Select the option that can be used as a one-word substitute for the given group of words.
A thing which happens every two years

- Ans
- 1. Century
 - 2. Annual
 - 3. Biennial
 - 4. Bi-monthly

Question ID : 264330152584
Option 1 ID : 264330597940
Option 2 ID : 264330597941
Option 3 ID : 264330597939
Option 4 ID : 264330597942
Status : Answered
Chosen Option : 3

Q.5 Select the most appropriate option that can substitute the underlined words in the following sentence.
Ramya's shoes are polish by her granddaughter.

- Ans
- 1. polishes
 - 2. had polished
 - 3. are polished
 - 4. is polish

Question ID : 264330152577
Option 1 ID : 264330597912
Option 2 ID : 264330597914
Option 3 ID : 264330597913
Option 4 ID : 264330597911
Status : Answered
Chosen Option : 3

Q.6 Select the most appropriate idiom to fill in the blank.

I don't think you should go out in the rain, it's _____.

- Ans
- 1. rain on cats and dogs
 - 2. storming cats and dogs
 - 3. raining cats and dogs
 - 4. raining dogs and puppies

Question ID : 264330153079
Option 1 ID : 264330599881
Option 2 ID : 264330599879
Option 3 ID : 264330599880
Option 4 ID : 264330599882
Status : Answered
Chosen Option : 3

Q.7 Select the most appropriate meaning of the given idiom.
To keep one's temper

- Ans
- 1. To meet with disaster
 - 2. To become impatient
 - 3. To become angry
 - 4. To remain calm

Question ID : 264330153522
Option 1 ID : 264330601601
Option 2 ID : 264330601602
Option 3 ID : 264330601600
Option 4 ID : 264330601599
Status : Answered
Chosen Option : 4

Q.8 Select the correct spelling of the underlined word in the following sentence.

Today's lecture had a profond impact on my friend.

- Ans
- 1. profoun
 - 2. prufound
 - 3. prefound
 - 4. profound

Question ID : 264330153083
Option 1 ID : 264330599896
Option 2 ID : 264330599898
Option 3 ID : 264330599897
Option 4 ID : 264330599895
Status : Answered
Chosen Option : 4

Q.9 Select the most appropriate meaning of the given idiom.
To get cold feet

- Ans 1. To be afraid
 2. To fall sick
 3. To be indifferent
 4. To run for life

Question ID : 264330156175
Option 1 ID : 264330612102
Option 2 ID : 264330612099
Option 3 ID : 264330612100
Option 4 ID : 264330612101
Status : Answered
Chosen Option : 1

Q.10 Select the most appropriate ANTONYM of the underlined word.
His amazing performance made him famous.

- Ans 1. Ordinary
 2. Colliery
 3. Adversary
 4. Binary

Question ID : 264330151816
Option 1 ID : 264330594892
Option 2 ID : 264330594894
Option 3 ID : 264330594891
Option 4 ID : 264330594893
Status : Answered
Chosen Option : 1

Q.11 Select the most appropriate option that can substitute the underlined segment in the given sentence.
The food was too salty eat this morning.

- Ans 1. eating
 2. ate
 3. to ate
 4. to eat

Question ID : 264330153396
Option 1 ID : 264330601124
Option 2 ID : 264330601126
Option 3 ID : 264330601125
Option 4 ID : 264330601123
Status : Answered
Chosen Option : 4

Q.12 Select the most appropriate synonym of the given word.
Elegant

- Ans 1. Mighty
 2. Graceful
 3. Ugly
 4. Tall

Question ID : 264330152747
Option 1 ID : 264330598589
Option 2 ID : 264330598587
Option 3 ID : 264330598588
Option 4 ID : 264330598590
Status : Answered
Chosen Option : 2

Q.13 Parts of the following sentence have been underlined and given as options. Select the option that contains an error.

I will going on an official tour next week.

- Ans 1. on
 2. will going
 3. next week
 4. an official tour

Question ID : 264330153188
Option 1 ID : 264330600312
Option 2 ID : 264330600311
Option 3 ID : 264330600314
Option 4 ID : 264330600313
Status : Answered
Chosen Option : 2

Q.14 Parts of the following sentence have been given as options. Select the option that contains an error.

Shelley and Keats are great writers, but I prefer the last.

- Ans 1. the last
 2. are great writers
 3. but I prefer
 4. Shelley and Keats

Question ID : 264330152803
Option 1 ID : 264330598806
Option 2 ID : 264330598804
Option 3 ID : 264330598805
Option 4 ID : 264330598803
Status : Answered
Chosen Option : 1

Q.15 Select the most appropriate synonym of the given word.
Design

- Ans 1. Fabricate
 2. Destroy
 3. Inspect
 4. Copy

Question ID : 264330152779
Option 1 ID : 264330598709
Option 2 ID : 264330598707
Option 3 ID : 264330598708
Option 4 ID : 264330598710
Status : Answered
Chosen Option : 1

Q.16 Select the option that can be used as a one-word substitute for the given phrase.
A person who is known for his hatred towards the entire mankind.

- Ans 1. Insolvent
 2. Philogynist
 3. Mercenary
 4. Misanthrope

Question ID : 264330152672
Option 1 ID : 264330598291
Option 2 ID : 264330598294
Option 3 ID : 264330598293
Option 4 ID : 264330598292
Status : Answered
Chosen Option : 4

Q.17 Parts of the following sentence have been given as options. Select the option that contains an error.
Jaya said that she will become topper in her class.

- Ans 1. in her class
 2. she will become topper
 3. that
 4. Jaya said

Question ID : 264330152821
Option 1 ID : 264330598878
Option 2 ID : 264330598877
Option 3 ID : 264330598876
Option 4 ID : 264330598875
Status : Answered
Chosen Option : 2

Q.18 The following sentence has been split into four segments. Identify the segment that contains a grammatical error.
Some / private banks / pay their employees / good.

- Ans
- 1. private banks
 - 2. Some
 - 3. pay their employees
 - 4. good

Question ID : 264330153180
Option 1 ID : 264330600280
Option 2 ID : 264330600279
Option 3 ID : 264330600281
Option 4 ID : 264330600282
Status : Answered
Chosen Option : 4

Q.19 Select the most appropriate meaning of the given idiom.

Break the ice

- Ans
- 1. To say something that makes strangers uncomfortable
 - 2. To say something that makes people who are meeting for the first time more comfortable
 - 3. To say something that makes people excited for a group project
 - 4. To say something mean to people in a group

Question ID : 264330153072
Option 1 ID : 264330599854
Option 2 ID : 264330599851
Option 3 ID : 264330599853
Option 4 ID : 264330599852
Status : Answered
Chosen Option : 2

Q.20 Select the option that can be used as a one-word substitute for the given phrase.
A poem of lamentation on the death of someone loved and admired.

- Ans
- 1. Soliloquy
 - 2. Elegy
 - 3. Tragedy
 - 4. Epitaph

Question ID : 264330152671
Option 1 ID : 264330598289
Option 2 ID : 264330598290
Option 3 ID : 264330598287
Option 4 ID : 264330598288
Status : Answered
Chosen Option : 2

Comprehension:

In the following passage, some words have been deleted. Read the passage carefully and select the most appropriate option to fill in each blank.

Language is (1)_____ of the most fundamental aspects of human communication and interaction. It allows people from different cultures to connect and (2)_____ ideas. While many individuals grow up learning just one language, there are a variety of reasons why learning a second language can be beneficial. (3)_____, it can improve cognitive abilities, enhance job prospects and facilitate travel and cultural immersion. (4)_____ proficiency in a second language is an invaluable asset for personal growth as well as professional development. Audio-video mediums such as (5)_____ are among the best ways to learn a second language as they allow learners to engage with cultural content.

SubQuestion No : 21

Q.21 Select the most appropriate option to fill in blank number 1.

- Ans 1. three
 2. four
 3. two
 4. one

Question ID : 264330153414

Option 1 ID : 264330601190

Option 2 ID : 264330601187

Option 3 ID : 264330601189

Option 4 ID : 264330601188

Status : Answered

Chosen Option : 4

Comprehension:

In the following passage, some words have been deleted. Read the passage carefully and select the most appropriate option to fill in each blank.

Language is (1)_____ of the most fundamental aspects of human communication and interaction. It allows people from different cultures to connect and (2)_____ ideas. While many individuals grow up learning just one language, there are a variety of reasons why learning a second language can be beneficial. (3)_____, it can improve cognitive abilities, enhance job prospects and facilitate travel and cultural immersion. (4)_____ proficiency in a second language is an invaluable asset for personal growth as well as professional development. Audio-video mediums such as (5)_____ are among the best ways to learn a second language as they allow learners to engage with cultural content.

SubQuestion No : 22

Q.22 Select the most appropriate option to fill in blank number 2.

- Ans 1. sharing
 2. share
 3. shares
 4. shared

Question ID : 264330153415

Option 1 ID : 264330601191

Option 2 ID : 264330601194

Option 3 ID : 264330601193

Option 4 ID : 264330601192

Status : Answered

Chosen Option : 2

Comprehension:

In the following passage, some words have been deleted. Read the passage carefully and select the most appropriate option to fill in each blank.

Language is (1)_____ of the most fundamental aspects of human communication and interaction. It allows people from different cultures to connect and (2)_____ ideas. While many individuals grow up learning just one language, there are a variety of reasons why learning a second language can be beneficial. (3)_____, it can improve cognitive abilities, enhance job prospects and facilitate travel and cultural immersion. (4)_____ proficiency in a second language is an invaluable asset for personal growth as well as professional development. Audio-video mediums such as (5)_____ are among the best ways to learn a second language as they allow learners to engage with cultural content.

SubQuestion No : 23

Q.23 Select the most appropriate option to fill in blank number 3.

- Ans
- 1. Therefore
 - 2. As it is
 - 3. However
 - 4. For example

Question ID : 264330153416

Option 1 ID : 264330601196

Option 2 ID : 264330601198

Option 3 ID : 264330601195

Option 4 ID : 264330601197

Status : Answered

Chosen Option : 4

Comprehension:

In the following passage, some words have been deleted. Read the passage carefully and select the most appropriate option to fill in each blank.

Language is (1)_____ of the most fundamental aspects of human communication and interaction. It allows people from different cultures to connect and (2)_____ ideas. While many individuals grow up learning just one language, there are a variety of reasons why learning a second language can be beneficial. (3)_____, it can improve cognitive abilities, enhance job prospects and facilitate travel and cultural immersion. (4)_____ proficiency in a second language is an invaluable asset for personal growth as well as professional development. Audio-video mediums such as (5)_____ are among the best ways to learn a second language as they allow learners to engage with cultural content.

SubQuestion No : 24

Q.24 Select the most appropriate option to fill in blank number 4.

- Ans
- 1. Acquiring
 - 2. Acquires
 - 3. Acquire
 - 4. Acquired

Question ID : 264330153417

Option 1 ID : 264330601199

Option 2 ID : 264330601202

Option 3 ID : 264330601200

Option 4 ID : 264330601201

Status : Answered

Chosen Option : 1

Comprehension:

In the following passage, some words have been deleted. Read the passage carefully and select the most appropriate option to fill in each blank.

Language is (1)_____ of the most fundamental aspects of human communication and interaction. It allows people from different cultures to connect and (2)_____ ideas. While many individuals grow up learning just one language, there are a variety of reasons why learning a second language can be beneficial. (3)_____, it can improve cognitive abilities, enhance job prospects and facilitate travel and cultural immersion. (4)_____ proficiency in a second language is an invaluable asset for personal growth as well as professional development. Audio-video mediums such as (5)_____ are among the best ways to learn a second language as they allow learners to engage with cultural content.

SubQuestion No : 25

Q.25 Select the most appropriate option to fill in blank number 5.

- Ans
- 1. podcasts
 - 2. images
 - 3. books
 - 4. films

Question ID : 264330153418

Option 1 ID : 264330601203

Option 2 ID : 264330601206

Option 3 ID : 264330601205

Option 4 ID : 264330601204

Status : Answered

Chosen Option : 1

Multi Tasking Non Technical Staff and Havaladar CBIC and CBN Examination 2023

Roll Number	
Candidate Name	
Venue Name	iON Digital Zone iDZ HAZARIBAGH
Exam Date	06/09/2023
Exam Time	9:00 AM - 11:00 AM
Subject	MTS Non Tech Havaladar CBIC and CBN Examination 2023

Section : Numerical and Mathematical Ability

Q.1 A certain sum is to be divided between A, B, and C in the ratio 2 : 5 : 7. But by mistake, it was divided in the ratio 5 : 2 : 7. Thus B loses by ₹150. Find the sum.

- Ans**
- ✓ 1. ₹700
 - ✗ 2. ₹850
 - ✗ 3. ₹900
 - ✗ 4. ₹625

Question ID : 264330156342

Option 1 ID : 264330612768

Option 2 ID : 264330612769

Option 3 ID : 264330612770

Option 4 ID : 264330612767

Status : Answered

Chosen Option : 1

Q.2 Four books and eight pens were bought for ₹260. If the average price of a book is ₹35, then the average price of a pen would be:

- Ans**
- ✗ 1. ₹31
 - ✗ 2. ₹5
 - ✓ 3. ₹15
 - ✗ 4. ₹10

Question ID : 264330153868

Option 1 ID : 264330602936

Option 2 ID : 264330602935

Option 3 ID : 264330602937

Option 4 ID : 264330602938

Status : Answered

Chosen Option : 3

Q.3 The fourth proportional to 1.5, 4.8 and 8 is:

- Ans
- ✓ 1. 25.6
 - ✗ 2. 26.5
 - ✗ 3. 22.6
 - ✗ 4. 24.5

Question ID : 264330153770
 Option 1 ID : 264330602543
 Option 2 ID : 264330602545
 Option 3 ID : 264330602546
 Option 4 ID : 264330602544
 Status : Answered
 Chosen Option : 1

Q.4 X can type 8 pages in 3 minutes, Y can type 3 pages in 5 minutes. Working together, how many pages can they type in 15 minutes?

- Ans
- ✗ 1. 42
 - ✗ 2. 40
 - ✗ 3. 46
 - ✓ 4. 49

Question ID : 264330156239
 Option 1 ID : 264330612356
 Option 2 ID : 264330612355
 Option 3 ID : 264330612357
 Option 4 ID : 264330612358
 Status : Answered
 Chosen Option : 4

Q.5 The average weight of 20 students of a class was 30.5 kg. After 6 new students joined the class, its average weight increased by 2 kg. Find the average weight of the 6 new students who joined the class (rounded off to one decimal place).

- Ans
- ✗ 1. 30.5 kg
 - ✗ 2. 32.5 kg
 - ✓ 3. 39.2 kg
 - ✗ 4. 38.5 kg

Question ID : 264330157323
 Option 1 ID : 264330616657
 Option 2 ID : 264330616656
 Option 3 ID : 264330616658
 Option 4 ID : 264330616655
 Status : Answered
 Chosen Option : 3

Q.6 A batsman makes 96 runs in the 13th innings and thus his average increases by 3. Find his average after 13 innings.

- Ans**
- 1. 65
 - 2. 50
 - 3. 70
 - 4. 60

Question ID : 264330155987
 Option 1 ID : 264330611349
 Option 2 ID : 264330611347
 Option 3 ID : 264330611350
 Option 4 ID : 264330611348
 Status : Answered
 Chosen Option : 4

Q.7 Surjeet alone can finish an assignment in 8 days and Manjeet alone can finish the same assignment in 6 days. Surjeet and Manjeet decided to do this assignment by working on alternate days, starting with Surjeet. In how many days will the assignment be finished?

- Ans**
- 1. 7 days
 - 2. 8.5 days
 - 3. 8 days
 - 4. 7.5 days

Question ID : 264330154134
 Option 1 ID : 264330603999
 Option 2 ID : 264330604002
 Option 3 ID : 264330604001
 Option 4 ID : 264330604000
 Status : Answered
 Chosen Option : 1

Q.8 Two numbers are in the ratio of 2 : 5. Their LCM is 80. Find the numbers.

- Ans**
- 1. 18 , 38
 - 2. 14 , 36
 - 3. 16 , 40
 - 4. 16 , 38

Question ID : 264330156206
 Option 1 ID : 264330612226
 Option 2 ID : 264330612225
 Option 3 ID : 264330612224
 Option 4 ID : 264330612223
 Status : Answered
 Chosen Option : 3

Q.9 Two trains of equal length are running on parallel lines in the same direction at 36 km/h and 54 km/h. The faster train passes the slower train in 48 seconds. The length of each train (in m) is:

- Ans**
- 1. 80
 - 2. 160
 - 3. 240
 - 4. 120

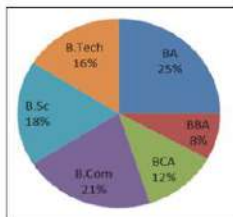
Question ID : 264330156490
Option 1 ID : 264330613349
Option 2 ID : 264330613350
Option 3 ID : 264330613347
Option 4 ID : 264330613348
Status : Answered
Chosen Option : 3

Q.10 If the sides of a triangle are in the ratio 3 : 4 : 5 and its perimeter is 24 m, then find the area of the triangle.

- Ans**
- 1. 32 m²
 - 2. 37 m²
 - 3. 16 m²
 - 4. 24 m²

Question ID : 264330156065
Option 1 ID : 264330611661
Option 2 ID : 264330611662
Option 3 ID : 264330611659
Option 4 ID : 264330611660
Status : Not Answered
Chosen Option : --

Q.11 The pie chart shows the percentage of students studying different courses in a college.
The ratio between the number of students studying in BCA and B.sc, if the total number of students is 1200, is:



- Ans**
- 1. 14 : 27
 - 2. 32 : 63
 - 3. 7 : 9
 - 4. 2 : 3

Question ID : 264330154067
Option 1 ID : 264330603731
Option 2 ID : 264330603733
Option 3 ID : 264330603734
Option 4 ID : 264330603732
Status : Answered
Chosen Option : 4

Q.12 Simplify the following expression.

$$45 - 22 \div 2 + 12 + 70 \div 35 + 0.4 \div 0.8 + 1.5 \div 3 + 1$$

- Ans
- ✓ 1. 50
 - ✗ 2. 50.5
 - ✗ 3. 48.5
 - ✗ 4. 54.5

Question ID : 264330153830
Option 1 ID : 264330602785
Option 2 ID : 264330602783
Option 3 ID : 264330602786
Option 4 ID : 264330602784
Status : Answered
Chosen Option : 1

Q.13 Find the simple interest (in ₹) on ₹5,400 for 7 years at 4% per annum.

- Ans
- ✓ 1. 1,512
 - ✗ 2. 1,230
 - ✗ 3. 1,380
 - ✗ 4. 1,172

Question ID : 264330155744
Option 1 ID : 264330610379
Option 2 ID : 264330610381
Option 3 ID : 264330610380
Option 4 ID : 264330610382
Status : Answered
Chosen Option : 1

Q.14 What is the length of the longest pole that can be placed in an indoor stadium 24 m long, 18 m wide and 16 m high?

- Ans
- ✗ 1. 38 m
 - ✓ 2. 34 m
 - ✗ 3. 42 m
 - ✗ 4. 36 m

Question ID : 264330154108
Option 1 ID : 264330603896
Option 2 ID : 264330603898
Option 3 ID : 264330603895
Option 4 ID : 264330603897
Status : Not Answered
Chosen Option : --

Q.15 Study the given table and answer the question that follows.

The table shows the centre and post-wise number of candidates.

Centre	Officer	Clerk	Supervisor	Field Officer
Mumbai	12000	18000	8000	200
Chennai	8000	10000	6000	100
Hyderabad	10000	12000	7000	150
Bengaluru	9000	6000	5000	80
Kolkata	14000	18000	6500	120

Which centre has the highest number of candidates?

- Ans
- 1. Mumbai
 - 2. Kolkata
 - 3. Chennai
 - 4. Hyderabad

Question ID : 264330155978

Option 1 ID : 264330611313

Option 2 ID : 264330611312

Option 3 ID : 264330611314

Option 4 ID : 264330611311

Status : Answered

Chosen Option : 2

Q.16 A thief is spotted by a policeman from a distance of 108 m. The thief starts running and the policeman chases him. If the speed of the thief and policeman are 21 km/h and 23 km/h, respectively, then how far will the thief have to run (in m) before he is overtaken by the policeman?

- Ans
- 1. 2534
 - 2. 3121
 - 3. 1216
 - 4. 1134

Question ID : 264330154092

Option 1 ID : 264330603832

Option 2 ID : 264330603834

Option 3 ID : 264330603831

Option 4 ID : 264330603833

Status : Not Answered

Chosen Option : --

Q.17 What is the difference between the compound interest, interest compounded half yearly on ₹72,000 for 1.5 years at 10% per annum and its simple interest for 3 years at 5% per annum?

- Ans**
- 1. ₹559
 - 2. ₹549
 - 3. ₹540
 - 4. ₹449

Question ID : 264330154133
Option 1 ID : 264330603996
Option 2 ID : 264330603998
Option 3 ID : 264330603997
Option 4 ID : 264330603995
Status : Not Answered
Chosen Option : --

Q.18 The profit obtained by a vendor on selling goods at ₹3,200 is equal to 7/5th of the profit obtained by selling the same goods at ₹3,000. What is the cost price (in ₹) of the goods?

- Ans**
- 1. 2,500
 - 2. 2,700
 - 3. 2,400
 - 4. 2,900

Question ID : 264330156104
Option 1 ID : 264330611817
Option 2 ID : 264330611816
Option 3 ID : 264330611818
Option 4 ID : 264330611815
Status : Not Answered
Chosen Option : --

Q.19 A spends 20% of the daily income. If the expenditure is ₹250, then the daily income is:

- Ans**
- 1. ₹800
 - 2. ₹1,250
 - 3. ₹2,500
 - 4. ₹1,500

Question ID : 264330154045
Option 1 ID : 264330603646
Option 2 ID : 264330603644
Option 3 ID : 264330603645
Option 4 ID : 264330603643
Status : Answered
Chosen Option : 2

Q.20 By selling a book at some price, Ankita gains 10%. If the book is sold at twice the price, then what will be the gain percentage for Ankita?

- Ans**
- 1. 140%
 - 2. 100%
 - 3. 120%
 - 4. 125%

Question ID : 264330155708
Option 1 ID : 264330610238
Option 2 ID : 264330610235
Option 3 ID : 264330610236
Option 4 ID : 264330610237
Status : Answered
Chosen Option : 2

Section : Reasoning Ability and Problem Solving

Q.1 LCNT is related to NEPV in a certain way based on the English alphabetical order. In the same way, HBER is related to JDGT. To which of the following is OSCF related to, following the same logic?

- Ans**
- 1. PUDJ
 - 2. RVEH
 - 3. QVEI
 - 4. QUEH

Question ID : 264330151682
Option 1 ID : 264330594357
Option 2 ID : 264330594355
Option 3 ID : 264330594356
Option 4 ID : 264330594358
Status : Answered
Chosen Option : 4

Q.2 What will come in the place of '?' in the following equation, if '+' and '-' are interchanged and 'x' and '+' are interchanged?
 $111 \times 3 - 13 + 3 + 26 = ?$

- Ans**
- 1. 50
 - 2. 70
 - 3. 40
 - 4. 60

Question ID : 264330155674
Option 1 ID : 264330610101
Option 2 ID : 264330610102
Option 3 ID : 264330610100
Option 4 ID : 264330610099
Status : Answered
Chosen Option : 1

Q.3 What should come in place of '?' in the given series?

24 103 498 2473 12348 ?

- Ans
- 1. 60983
 - 2. 63487
 - 3. 62457
 - 4. 61723

Question ID : 264330151455
Option 1 ID : 264330593447
Option 2 ID : 264330593450
Option 3 ID : 264330593449
Option 4 ID : 264330593448
Status : Not Answered
Chosen Option : --

Q.4 Select the set in which the numbers are related in the same way as are the numbers of the following sets.
(NOTE : Operations should be performed on the whole numbers, without breaking down the numbers into its constituent digits. E.g. 13 – Operations on 13 such as adding / subtracting / multiplying etc. to 13 can be performed. Breaking down 13 into 1 and 3 and then performing mathematical operations on 1 and 3 is not allowed)
(8, 720, 9)
(16, 800, 5)

- Ans
- 1. 7, 125, 8
 - 2. 13, 169, 5
 - 3. 14, 238, 5
 - 4. 18, 1260, 7

Question ID : 264330151611
Option 1 ID : 264330594071
Option 2 ID : 264330594072
Option 3 ID : 264330594074
Option 4 ID : 264330594073
Status : Answered
Chosen Option : 4

Q.5 What should come in place of ? in the given series based on the English alphabetical order?

LPA, PSY, TVW, XYU, ?

- Ans
- 1. CBR
 - 2. BBS
 - 3. CDS
 - 4. DCR

Question ID : 264330155801
Option 1 ID : 264330610608
Option 2 ID : 264330610607
Option 3 ID : 264330610609
Option 4 ID : 264330610610
Status : Answered
Chosen Option : 2

Q.6 Read the given statement(s) and conclusions carefully. Assuming that the information given in the statements is true, even if it appears to be at variance with commonly known facts, decide which of the given conclusions logically follow(s) from the statement(s).

Statements: All buildings are chalks. No chalk is a toffee.

Conclusions:

(I) No building is a toffee.

(II) All chalks are buildings.

Ans 1. Both conclusions (I) and (II) are follows.

2. Only conclusion (I) is follows.

3. Neither conclusion (I) nor (II) is follows.

4. Only conclusion (II) is follows.

Question ID : 264330154432

Option 1 ID : 264330605194

Option 2 ID : 264330605191

Option 3 ID : 264330605193

Option 4 ID : 264330605192

Status : Answered

Chosen Option : 2

Q.7 In a certain code language, 'NAME' is coded as '2473' and 'MEND' is coded as '7642'. What is the code for 'D' in the given code language?

Ans 1. 4

2. 6

3. 7

4. 2

Question ID : 264330151707

Option 1 ID : 264330594458

Option 2 ID : 264330594457

Option 3 ID : 264330594456

Option 4 ID : 264330594455

Status : Answered

Chosen Option : 2

Q.8 If 4 November 2021 is a Thursday, then what will be the day of the week on 13 May 2023?

Ans 1. Monday

2. Sunday

3. Friday

4. Saturday

Question ID : 264330154358

Option 1 ID : 264330604897

Option 2 ID : 264330604898

Option 3 ID : 264330604896

Option 4 ID : 264330604895

Status : Answered

Chosen Option : 4

Q.9 8 is related to 40 following a certain logic. Following the same logic, 3 is related to 15. To which of the following is 52 related to, following the same logic?

- Ans**
- 1. 261
 - 2. 262
 - 3. 260
 - 4. 263

Question ID : 264330151587
Option 1 ID : 264330593976
Option 2 ID : 264330593977
Option 3 ID : 264330593975
Option 4 ID : 264330593978
Status : Answered
Chosen Option : 3

Q.10 In a certain code language, 'CHORAL' is coded as 'OHCLAR' and 'FOREGO' is coded as 'ROFOGE'. What is the code for 'GALLEY' in the given code language?

- Ans**
- 1. GYALLE
 - 2. ELLAGY
 - 3. LAGYEL
 - 4. YELLAG

Question ID : 264330155809
Option 1 ID : 264330610641
Option 2 ID : 264330610642
Option 3 ID : 264330610639
Option 4 ID : 264330610640
Status : Answered
Chosen Option : 3

Q.11 What should come in place of ? in the given series?

64 61 55 46 34 ?

- Ans**
- 1. 19
 - 2. 24
 - 3. 15
 - 4. 21

Question ID : 264330151722
Option 1 ID : 264330594517
Option 2 ID : 264330594516
Option 3 ID : 264330594518
Option 4 ID : 264330594515
Status : Answered
Chosen Option : 1

Q.12 If 'I' stands for '+', 'J' stands for '×', 'K' stands for '÷' and 'L' stands for '-', what will come in place of the question mark (?) in the following equation?
 $105 \text{ L } (72 \text{ K } 9) \text{ I } 43 \text{ L } (9 \text{ J } 4) = ?$

- Ans**
- ✓ 1. 104
 - ✗ 2. 114
 - ✗ 3. 106
 - ✗ 4. 126

Question ID : 264330151798
Option 1 ID : 264330594822
Option 2 ID : 264330594820
Option 3 ID : 264330594819
Option 4 ID : 264330594821
Status : Answered
Chosen Option : 1

Q.13 E, F, G, H, I and J are sitting around a circular table facing the center. J sits immediate left of I. G sits second to the right of I. E sits second to the right of G. H sits second to the left of F. Who sits third to the right of E?

- Ans**
- ✗ 1. F
 - ✓ 2. H
 - ✗ 3. I
 - ✗ 4. J

Question ID : 264330154472
Option 1 ID : 264330605354
Option 2 ID : 264330605351
Option 3 ID : 264330605353
Option 4 ID : 264330605352
Status : Not Answered
Chosen Option : --

Q.14 What should come in place of '?' in the given series?

77 754 ? 75224 752224 7522224 75222224

- Ans**
- ✗ 1. 7544
 - ✗ 2. 7254
 - ✗ 3. 7425
 - ✓ 4. 7524

Question ID : 264330151443
Option 1 ID : 264330593400
Option 2 ID : 264330593401
Option 3 ID : 264330593402
Option 4 ID : 264330593399
Status : Not Answered
Chosen Option : --

Q.15 Read the given statements and conclusions carefully. You have to take the given statements to be true even if they seem to be at variance from commonly known facts. You have to decide which conclusion/s logically follow/s from the given statements.

Statements: All cakes are biscuits. Some biscuits are tarts. All tarts are puddings.

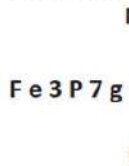
Conclusion I: Some biscuits are cakes.

Conclusion II: Some puddings are biscuits.

- Ans**
- 1. Neither conclusion (I) nor (II) is follow.
 - 2. Both conclusions (I) and (II) are follow.
 - 3. Only conclusion (I) is follow.
 - 4. Only conclusion (II) is follow.

Question ID : 264330155937
 Option 1 ID : 264330611153
 Option 2 ID : 264330611154
 Option 3 ID : 264330611151
 Option 4 ID : 264330611152
 Status : Answered
 Chosen Option : 2

Q.16 Select the correct mirror image of the given figure when the mirror is placed at MN as shown below.



- Ans**
- 1. g 7 P e 3 F
 - 2. g 7 P e 3 F
 - 3. g 7 P e 3 F
 - 4. g 7 P e 3 F

Question ID : 264330151525
 Option 1 ID : 264330593728
 Option 2 ID : 264330593730
 Option 3 ID : 264330593729
 Option 4 ID : 264330593727
 Status : Answered
 Chosen Option : 3

Q.17 Which figure should replace the question mark (?) if the following figure series were to be continued?

6	☆	☆	B	U	H	H	B	
U	B	H	□	6	U	☆	B	Z
Z	□	H	Z	6	□	Z	6	?

Ans

✗ 1.

6		Z
☆	H	□
B		U

✓ 2.

☆		Z
H	B	6
U		□

✗ 3.

6		☆
B	H	Z
□		U

✗ 4.

6		Z
☆	B	□
U		H

Question ID : 264330154740

Option 1 ID : 264330606425

Option 2 ID : 264330606424

Option 3 ID : 264330606423

Option 4 ID : 264330606426

Status : Not Answered

Chosen Option : --

Q.18 What should come in place of ? in the given series based on the English alphabetical order?

UDM, XGP, AJS, DMV, ?

- Ans
- ✓ 1. GPY
 - ✗ 2. FPX
 - ✗ 3. EOX
 - ✗ 4. FOY

Question ID : 264330155764

Option 1 ID : 264330610460

Option 2 ID : 264330610461

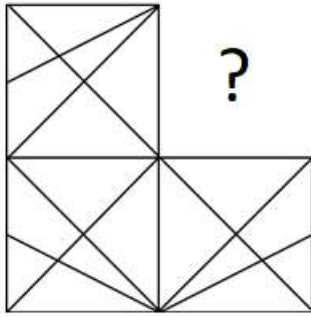
Option 3 ID : 264330610462

Option 4 ID : 264330610459

Status : Answered

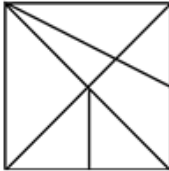
Chosen Option : 1

Q.19 Identify the figure that completes the pattern (rotation is NOT allowed).

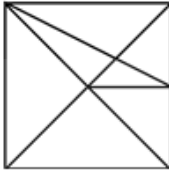


Ans

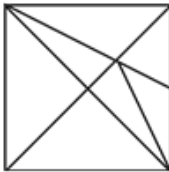
✗ 1.



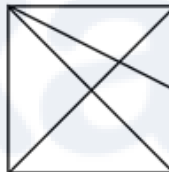
✗ 2.



✗ 3.



✓ 4.



Question ID : 264330154517

Option 1 ID : 264330605532

Option 2 ID : 264330605533

Option 3 ID : 264330605534

Option 4 ID : 264330605531

Status : Answered

Chosen Option : 4

Q.20 What should come in place of ? in the given series based on the English alphabetical order?

TOY, UQB, VSE, WUH, ?

Ans ✗ 1. YVJ

✗ 2. ZWI

✗ 3. YUI

✓ 4. XWK

Question ID : 264330155774

Option 1 ID : 264330610499

Option 2 ID : 264330610502

Option 3 ID : 264330610501

Option 4 ID : 264330610500

Status : Answered

Chosen Option : 4

Q.1 The Guide is a 1958 novel written in English by the Indian author _____.

- Ans
- 1. Mulk Raj Anand
 - 2. Khushwant Singh
 - 3. RK Narayan
 - 4. Nirad Chaudhuri

Question ID : 264330155452
Option 1 ID : 264330609211
Option 2 ID : 264330609212
Option 3 ID : 264330609213
Option 4 ID : 264330609214
Status : Answered
Chosen Option : 1

Q.2 The stretch between Mumbai to Goa of western coast of India is known as _____.

- Ans
- 1. Coromandel coast
 - 2. Konkan coast
 - 3. Malabar Coast
 - 4. Kannada Plain

Question ID : 264330161495
Option 1 ID : 264330633310
Option 2 ID : 264330633309
Option 3 ID : 264330633308
Option 4 ID : 264330633307
Status : Answered
Chosen Option : 2

Q.3 Which of the following autobiographies is NOT correctly matched with the concerned cricketer?

- Ans
- 1. Playing it My Way – VVS Laxman
 - 2. The Test of My Life: From Cricket to Cancer and Back – Yuvraj Singh
 - 3. Straight from the Heart – Kapil Dev
 - 4. Cricket Delightful – Mushtaq Ali

Question ID : 264330161753
Option 1 ID : 264330634341
Option 2 ID : 264330634342
Option 3 ID : 264330634339
Option 4 ID : 264330634340
Status : Answered
Chosen Option : 1

Q.4 What does El Niño refer to?

- Ans
- 1. Hot water current
 - 2. Pressure water current
 - 3. High air pressure
 - 4. Low air pressure

Question ID : 264330161310
Option 1 ID : 264330632567
Option 2 ID : 264330632568
Option 3 ID : 264330632570
Option 4 ID : 264330632569
Status : Answered
Chosen Option : 1

Q.5 Where was the 13th Hockey India senior women's national hockey championship held?

- Ans
- 1. Andhra Pradesh
 - 2. New Delhi
 - 3. Punjab
 - 4. Karnataka

Question ID : 264330161155
Option 1 ID : 264330631951
Option 2 ID : 264330631953
Option 3 ID : 264330631952
Option 4 ID : 264330631954
Status : Not Answered
Chosen Option : --

Q.6 Which Article of the Constitution of India provides for a Council of Ministers with the Prime Minister at the head to aid and advice the President in the exercise of the President's functions?

- Ans
- 1. Article 77
 - 2. Article 74
 - 3. Article 71
 - 4. Article 72

Question ID : 264330161288
Option 1 ID : 264330632482
Option 2 ID : 264330632481
Option 3 ID : 264330632479
Option 4 ID : 264330632480
Status : Answered
Chosen Option : 2

Q.7 Which of the following is a key objective of Micro Finance Institutions in India?

- Ans
- 1. Providing loans exclusively to women entrepreneurs
 - 2. Encouraging large-scale industrialisation
 - 3. Maximising profits for shareholders
 - 4. Promoting financial inclusion and poverty alleviation

Question ID : 264330157288
Option 1 ID : 264330616517
Option 2 ID : 264330616518
Option 3 ID : 264330616515
Option 4 ID : 264330616516
Status : Answered
Chosen Option : 4

Q.8 _____ is one of the most important festivals of Kamakhya temple of Guwahati. It is held every year during the monsoon (mid-June) season, when the temple is closed for three days for tantric rites.

- Ans
- 1. Ambubachi
 - 2. Bihu
 - 3. Baishagu
 - 4. Me-Dum-Me-Phi

Question ID : 264330160821
Option 1 ID : 264330630617
Option 2 ID : 264330630615
Option 3 ID : 264330630616
Option 4 ID : 264330630618
Status : Answered
Chosen Option : 1

Q.9 In which city is the Kamakhya temple situated?

- Ans
- 1. Dehradun
 - 2. Bhopal
 - 3. Guwahati
 - 4. Indore

Question ID : 264330160779
Option 1 ID : 264330630450
Option 2 ID : 264330630447
Option 3 ID : 264330630448
Option 4 ID : 264330630449
Status : Answered
Chosen Option : 3

Q.10 Which of the following statements best defines a Micro Finance Institution (MFI)?

- Ans
- 1. MFIs are investment firms that cater exclusively to high-net-worth individuals.
 - 2. MFIs are non-profit organisations that provide financial services to low-income individuals and small businesses.
 - 3. MFIs are banks that provide loans only to large corporations.
 - 4. MFIs are government agencies that regulate the microfinance sector.

Question ID : 264330157284
Option 1 ID : 264330616502
Option 2 ID : 264330616500
Option 3 ID : 264330616499
Option 4 ID : 264330616501
Status : Answered
Chosen Option : 4

Q.11 Mumbai Indians defeated which team to win Women's Premier League in March, 2023?

- Ans
- 1. UP Warriors
 - 2. Royal Challengers
 - 3. Delhi Capitals
 - 4. Gujarat Giants

Question ID : 264330158352
Option 1 ID : 264330620770
Option 2 ID : 264330620768
Option 3 ID : 264330620769
Option 4 ID : 264330620767
Status : Answered
Chosen Option : 2

Q.12 The Songi Mukhawate dance of _____ celebrates the victory of truth over falsehood. The name of the dance is derived from the two lion masks worn by two dancers who represent Narasimha, an aspect of Lord Vishnu.

- Ans
- 1. Madhya Pradesh
 - 2. Chhattisgarh
 - 3. Maharashtra
 - 4. Gujarat

Question ID : 264330160802
Option 1 ID : 264330630541
Option 2 ID : 264330630542
Option 3 ID : 264330630539
Option 4 ID : 264330630540
Status : Not Answered
Chosen Option : --

Q.13 Who among the following is best known for creating a fusion style of dance by adapting European theatrical techniques to Indian classical dance?

- Ans
- 1. Yamini Krishnamurthy
 - 2. Uday Shankar
 - 3. Gopi Krishna
 - 4. Sonal Mansingh

Question ID : 264330155522
Option 1 ID : 264330609494
Option 2 ID : 264330609492
Option 3 ID : 264330609491
Option 4 ID : 264330609493
Status : Not Answered
Chosen Option : --

Q.14 Where was the Hindustan Socialist Republican Association founded in 1928?

- Ans
- 1. Kanpur
 - 2. Amritsar
 - 3. Lucknow
 - 4. Delhi

Question ID : 264330162324
Option 1 ID : 264330636625
Option 2 ID : 264330636624
Option 3 ID : 264330636623
Option 4 ID : 264330636626
Status : Answered
Chosen Option : 4

Q.15 Which process is sometimes called "reduction division" because it reduces the number of chromosomes to half the normal number to form sperm and eggs?

- Ans
- 1. Amitosis
 - 2. Meiosis
 - 3. Cytokinesis
 - 4. Karyokinesis

Question ID : 264330161089
Option 1 ID : 264330631689
Option 2 ID : 264330631690
Option 3 ID : 264330631687
Option 4 ID : 264330631688
Status : Answered
Chosen Option : 2

Q.16 Which chemical element with atomic number 35 has a dark reddish-brown liquid with a burning pungent odour?

- Ans
- 1. Tennessine
 - 2. Chlorine
 - 3. Astatine
 - 4. Bromine

Question ID : 264330161061
Option 1 ID : 264330631578
Option 2 ID : 264330631575
Option 3 ID : 264330631577
Option 4 ID : 264330631576
Status : Answered
Chosen Option : 2

Q.17 In which year did Pakistan win the Kabaddi (Circle style) World Cup?

- Ans
- 1. 2016
 - 2. 2014
 - 3. 2020
 - 4. 2013

Question ID : 264330158235
Option 1 ID : 264330620301
Option 2 ID : 264330620300
Option 3 ID : 264330620302
Option 4 ID : 264330620299
Status : Not Answered
Chosen Option : --

Q.18 The North-South corridor, which is a part of the Golden Quadrilateral super highways, links which two cities of India from the following?

- Ans
- 1. Delhi and Chennai
 - 2. Leh and Chennai
 - 3. Ammu and Kanyakumari
 - 4. Srinagar and Kanyakumari

Question ID : 264330161489
Option 1 ID : 264330633284
Option 2 ID : 264330633283
Option 3 ID : 264330633286
Option 4 ID : 264330633285
Status : Answered
Chosen Option : 1

Q.19 For which community was a journal Rast Goftar started for the purpose of social-religious reforms?

- Ans
- 1. Sikhs
 - 2. Muslim
 - 3. Parsis
 - 4. Hindu

Question ID : 264330160892
Option 1 ID : 264330630900
Option 2 ID : 264330630901
Option 3 ID : 264330630899
Option 4 ID : 264330630902
Status : Answered
Chosen Option : 3

Q.20 26 January was selected as the date of the inauguration of the Constitution because on the same date in 1930, the Indian National Congress had revealed

- Ans
- 1. Quit India Movement
 - 2. Purna Swaraj Movement
 - 3. Namak Satyagraha
 - 4. Khilafat Movement

Question ID : 264330161346
Option 1 ID : 264330632712
Option 2 ID : 264330632711
Option 3 ID : 264330632713
Option 4 ID : 264330632714
Status : Answered
Chosen Option : 2

Q.21 What is the name of the scheme launched by Uttar Pradesh government to boost milk production?

- Ans
- 1. Nand Baba Milk Mission
 - 2. Gokul Milk Mission
 - 3. Krishna Balram Milk Mission
 - 4. Gua Ras Mission

Question ID : 264330158329
Option 1 ID : 264330620677
Option 2 ID : 264330620678
Option 3 ID : 264330620675
Option 4 ID : 264330620676
Status : Answered
Chosen Option : 2

Q.22 What is the source of Directive Principles of State Policy?

- Ans 1. The instrument of instructions from GOI Act 1919
2. The instrument of instructions from GOI Act 1935
3. The instrument of instructions from GOI Act 1909
4. The instrument of instructions from GOI Act 1947

Question ID : 264330161397

Option 1 ID : 264330632916

Option 2 ID : 264330632917

Option 3 ID : 264330632915

Option 4 ID : 264330632918

Status : Answered

Chosen Option : 2

Q.23 How many classical dance forms does the Sangeet Natak Akademi in India officially recognise, as of August 2021?

- Ans 1. 9
2. 6
3. 7
4. 8

Question ID : 264330160786

Option 1 ID : 264330630478

Option 2 ID : 264330630475

Option 3 ID : 264330630476

Option 4 ID : 264330630477

Status : Answered

Chosen Option : 4

Q.24 According to the Human Development Report 2021-22, what is the rank of India among 191 countries?

- Ans 1. 117
2. 180
3. 148
4. 132

Question ID : 264330160167

Option 1 ID : 264330628010

Option 2 ID : 264330628007

Option 3 ID : 264330628008

Option 4 ID : 264330628009

Status : Answered

Chosen Option : 4

Q.25 Which Indian musical legend is credited with composing Talas such as Trimukhi, Panchamukhi, Saptamukhi and Navamukhi?

- Ans
- ✓ 1. M Balamuralikrishna
 - ✗ 2. Bade Ghulam Ali Khan
 - ✗ 3. KJ Yesudas
 - ✗ 4. Pandit Jasraj

Question ID : 264330155464
Option 1 ID : 264330609260
Option 2 ID : 264330609261
Option 3 ID : 264330609262
Option 4 ID : 264330609259
Status : Not Answered
Chosen Option : --

Section : English Language and Comprehension

Q.1 Select the most appropriate meaning of the underlined idiom.

The Indian team had its back against the wall, but managed to fight back.

- Ans
- ✗ 1. In extreme joy or exhilaration
 - ✓ 2. Stuck in a difficult circumstance with no escape
 - ✗ 3. Forced to indulge in propaganda
 - ✗ 4. Throwing the opposition off guard

Question ID : 264330153142
Option 1 ID : 264330600127
Option 2 ID : 264330600129
Option 3 ID : 264330600128
Option 4 ID : 264330600130
Status : Answered
Chosen Option : 2

Q.2 The following sentence has been split into four segments. Identify the segment that contains a grammatical error.

This is the first time / I ate such / a tasty cake.

- Ans
- ✓ 1. I ate such
 - ✗ 2. This is the first time
 - ✗ 3. No error
 - ✗ 4. a tasty cake

Question ID : 264330153616
Option 1 ID : 264330601948
Option 2 ID : 264330601947
Option 3 ID : 264330601950
Option 4 ID : 264330601949
Status : Answered
Chosen Option : 3

Q.3 Select the option that can be used as a one-word substitute for the given group of words.

A lover of books

- Ans
- 1. Philosopher
 - 2. Librarian
 - 3. Teacher
 - 4. Bibliophile

Question ID : 264330152737

Option 1 ID : 264330598549

Option 2 ID : 264330598548

Option 3 ID : 264330598547

Option 4 ID : 264330598550

Status : Answered

Chosen Option : 4

Q.4 Select the most appropriate option to fill in the blank.

Tom waited until _____ to start working on his term paper but managed to finish it just in time.

- Ans
- 1. the twelfth hour
 - 2. the thirteenth hour
 - 3. the tenth hour
 - 4. the eleventh hour

Question ID : 264330151885

Option 1 ID : 264330595161

Option 2 ID : 264330595162

Option 3 ID : 264330595160

Option 4 ID : 264330595159

Status : Answered

Chosen Option : 4

Q.5 Select the most appropriate synonym of the given word.

Cordial

- Ans
- 1. Unfriendly
 - 2. Friendly
 - 3. Brave
 - 4. Aromatic

Question ID : 264330151918

Option 1 ID : 264330595287

Option 2 ID : 264330595288

Option 3 ID : 264330595290

Option 4 ID : 264330595289

Status : Answered

Chosen Option : 2

Q.6 Select the most appropriate meaning of the given idiom.

Bigger fish to fry

- Ans
- 1. To barely get something done
 - 2. Having something more important to take care of
 - 3. Having work more than one's capacity
 - 4. To be similar to one's parents in some way

Question ID : 264330153013
Option 1 ID : 264330599626
Option 2 ID : 264330599624
Option 3 ID : 264330599623
Option 4 ID : 264330599625
Status : Answered
Chosen Option : 2

Q.7 There is a spelling error in the given sentence. Select the option that contains the INCORRECTLY spelt word.
The hungry goblin scratched the grammar book with a feather.

- Ans
- 1. hungry
 - 2. scratched
 - 3. feather
 - 4. grammar

Question ID : 264330152836
Option 1 ID : 264330598935
Option 2 ID : 264330598936
Option 3 ID : 264330598938
Option 4 ID : 264330598937
Status : Answered
Chosen Option : 1

Q.8 Select the most appropriate option to fill in the blank.
The rusty door made a _____ screeching noise.

- Ans
- 1. low
 - 2. soft
 - 3. harsh
 - 4. smooth

Question ID : 264330152638
Option 1 ID : 264330598157
Option 2 ID : 264330598158
Option 3 ID : 264330598156
Option 4 ID : 264330598155
Status : Answered
Chosen Option : 3

Q.9 Select the most appropriate option to fill in the blank.

The tone of his voice seemed to _____ that he knew more than he was letting on.

- Ans
- 1. incise
 - 2. intent
 - 3. inculcate
 - 4. imply

Question ID : 264330151864
Option 1 ID : 264330595077
Option 2 ID : 264330595078
Option 3 ID : 264330595075
Option 4 ID : 264330595076
Status : Not Answered
Chosen Option : --

Q.10 Select the most appropriate ANTONYM of the given word.
Enormous

- Ans
- 1. Tiny
 - 2. Inapposite
 - 3. Irrelevant
 - 4. Gigantic

Question ID : 264330151876
Option 1 ID : 264330595124
Option 2 ID : 264330595126
Option 3 ID : 264330595125
Option 4 ID : 264330595123
Status : Answered
Chosen Option : 4

Q.11 There is a spelling error in the given sentence. Select the option that contains the INCORRECTLY spelt word.
The questionnaire appeared to be misrably designed.

- Ans
- 1. designed
 - 2. questionnaire
 - 3. misrably
 - 4. appeared

Question ID : 264330152839
Option 1 ID : 264330598950
Option 2 ID : 264330598947
Option 3 ID : 264330598949
Option 4 ID : 264330598948
Status : Answered
Chosen Option : 3

Q.12 Select the most appropriate option to fill in the blank.
COVID-19 _____ structural weaknesses in health systems worldwide and negatively impacted individuals, societies, and economies.

- Ans
- 1. concealed
 - 2. laid
 - 3. hit
 - 4. revealed

Question ID : 264330151903
Option 1 ID : 264330595227
Option 2 ID : 264330595228
Option 3 ID : 264330595229
Option 4 ID : 264330595230
Status : Answered
Chosen Option : 4

Q.13 Select the most appropriate option that can substitute the underlined segment in the given sentence.

She will handling the baby as tenderly as possible.

- Ans
- 1. wills handle
 - 2. shall handles
 - 3. will handle
 - 4. will handled

Question ID : 264330153483
Option 1 ID : 264330601450
Option 2 ID : 264330601447
Option 3 ID : 264330601449
Option 4 ID : 264330601448
Status : Answered
Chosen Option : 3

Q.14 Parts of the following sentence have been given as options. Select the option that contains an error.

A old woman suddenly laughed, sounding just like an amused hen.

- Ans
- 1. like an amused hen
 - 2. sounding just
 - 3. A old woman
 - 4. suddenly laughed

Question ID : 264330153606
Option 1 ID : 264330601910
Option 2 ID : 264330601909
Option 3 ID : 264330601907
Option 4 ID : 264330601908
Status : Answered
Chosen Option : 1

Q.15 Select the most appropriate ANTONYM of the given word.
Annoy

- Ans 1. Gratify
 2. Vex
 3. Irritate
 4. Thrill

Question ID : 264330152593
Option 1 ID : 264330597977
Option 2 ID : 264330597976
Option 3 ID : 264330597975
Option 4 ID : 264330597978
Status : Answered
Chosen Option : 4

Q.16 Four words of the following sentence have been underlined and given as options.
Select the option that contains a spelling error.
All life depends on a healthy planet, but the interwoven systems of atmosphere, oceans, watercourses, land, ice cover and biosphere, which form the natural environment, are threatned by human activities.

- Ans 1. interwoven
 2. threatned
 3. biosphere
 4. watercourses

Question ID : 264330151928
Option 1 ID : 264330595327
Option 2 ID : 264330595330
Option 3 ID : 264330595329
Option 4 ID : 264330595328
Status : Answered
Chosen Option : 1

Q.17 Select the most appropriate meaning of the given idiom.
A storm in a teacup

- Ans 1. Much excitement over something trivial
 2. A signal for upcoming storm
 3. Easy money
 4. Suffering in silence

Question ID : 264330156386
Option 1 ID : 264330612945
Option 2 ID : 264330612943
Option 3 ID : 264330612946
Option 4 ID : 264330612944
Status : Answered
Chosen Option : 1

Q.18 Select the most appropriate option to fill in the blank.
Varun has to _____ his studies for the sake of his ill father.

- Ans 1. sacrifice
 2. imitate
 3. reverse
 4. applaud

Question ID : 264330153551
Option 1 ID : 264330601703
Option 2 ID : 264330601705
Option 3 ID : 264330601704
Option 4 ID : 264330601706
Status : Answered
Chosen Option : 1

Q.19 Parts of the following sentence have been given as options. Select the option that contains an error.
Vikram is very stronger than I am.

- Ans 1. very stronger
 2. I am
 3. Vikram is
 4. than

Question ID : 264330152798
Option 1 ID : 264330598784
Option 2 ID : 264330598786
Option 3 ID : 264330598783
Option 4 ID : 264330598785
Status : Answered
Chosen Option : 2

Q.20 Select the most appropriate option that can substitute the underlined segment in the given sentence.

You are always try with jump over the wall.

- Ans 1. trying in jumping
 2. try to jump
 3. trying to jump
 4. tried with jump

Question ID : 264330153475
Option 1 ID : 264330601415
Option 2 ID : 264330601416
Option 3 ID : 264330601418
Option 4 ID : 264330601417
Status : Answered
Chosen Option : 3

Comprehension:

In the following passage, some words have been deleted. Read the passage carefully and select the most appropriate option to fill in the blanks.

Kasturi went to the garden looking for her mother. Her dog Rex was waiting (1)____ her. Kasturi picked up a stick and threw it. Rex (2)_____ the stick and brought it back. Kasturi ran (3)___ the house. Rex chased her. Kasturi ran through the garden and Rex (4)_____ her. Mother yelled at both of them. She told them to stay (5)_____ of the garden and play somewhere else. Kasturi apologised to her mother. She went for a bike ride while Rex ran next to the bike.

SubQuestion No : 21

Q.21 Select the most appropriate option to fill in blank number 1.

- Ans
- 1. with
 - 2. by
 - 3. to
 - 4. for

Question ID : 264330152950

Option 1 ID : 264330599375

Option 2 ID : 264330599378

Option 3 ID : 264330599377

Option 4 ID : 264330599376

Status : Answered

Chosen Option : 2

Comprehension:

In the following passage, some words have been deleted. Read the passage carefully and select the most appropriate option to fill in the blanks.

Kasturi went to the garden looking for her mother. Her dog Rex was waiting (1)____ her. Kasturi picked up a stick and threw it. Rex (2)_____ the stick and brought it back. Kasturi ran (3)___ the house. Rex chased her. Kasturi ran through the garden and Rex (4)_____ her. Mother yelled at both of them. She told them to stay (5)_____ of the garden and play somewhere else. Kasturi apologised to her mother. She went for a bike ride while Rex ran next to the bike.

SubQuestion No : 22

Q.22 Select the most appropriate option to fill in blank number 2.

- Ans
- 1. chases
 - 2. throws
 - 3. threw
 - 4. chased

Question ID : 264330152951

Option 1 ID : 264330599380

Option 2 ID : 264330599382

Option 3 ID : 264330599379

Option 4 ID : 264330599381

Status : Answered

Chosen Option : 1

Comprehension:

In the following passage, some words have been deleted. Read the passage carefully and select the most appropriate option to fill in the blanks.

Kasturi went to the garden looking for her mother. Her dog Rex was waiting (1)____ her. Kasturi picked up a stick and threw it. Rex (2)_____ the stick and brought it back. Kasturi ran (3)___ the house. Rex chased her. Kasturi ran through the garden and Rex (4)_____ her. Mother yelled at both of them. She told them to stay (5)_____ of the garden and play somewhere else. Kasturi apologised to her mother. She went for a bike ride while Rex ran next to the bike.

SubQuestion No : 23

Q.23 Select the most appropriate option to fill in blank number 3.

- Ans 1. in
 2. around
 3. round
 4. about

Question ID : 264330152952

Option 1 ID : 264330599386

Option 2 ID : 264330599384

Option 3 ID : 264330599383

Option 4 ID : 264330599385

Status : Answered

Chosen Option : 2

Comprehension:

In the following passage, some words have been deleted. Read the passage carefully and select the most appropriate option to fill in the blanks.

Kasturi went to the garden looking for her mother. Her dog Rex was waiting (1)____ her. Kasturi picked up a stick and threw it. Rex (2)_____ the stick and brought it back. Kasturi ran (3)___ the house. Rex chased her. Kasturi ran through the garden and Rex (4)_____ her. Mother yelled at both of them. She told them to stay (5)_____ of the garden and play somewhere else. Kasturi apologised to her mother. She went for a bike ride while Rex ran next to the bike.

SubQuestion No : 24

Q.24 Select the most appropriate option to fill in blank number 4.

- Ans 1. obey
 2. listen
 3. followed
 4. came

Question ID : 264330152953

Option 1 ID : 264330599390

Option 2 ID : 264330599387

Option 3 ID : 264330599388

Option 4 ID : 264330599389

Status : Answered

Chosen Option : 3

Comprehension:

In the following passage, some words have been deleted. Read the passage carefully and select the most appropriate option to fill in the blanks.

Kasturi went to the garden looking for her mother. Her dog Rex was waiting (1)____ her. Kasturi picked up a stick and threw it. Rex (2)_____ the stick and brought it back. Kasturi ran (3)___ the house. Rex chased her. Kasturi ran through the garden and Rex (4)_____ her. Mother yelled at both of them. She told them to stay (5)_____ of the garden and play somewhere else. Kasturi apologised to her mother. She went for a bike ride while Rex ran next to the bike.

SubQuestion No : 25

Q.25 Select the most appropriate option to fill in blank number 5.

- Ans 1. of
 2. in
 3. from
 4. out

Question ID : 264330152954

Option 1 ID : 264330599394

Option 2 ID : 264330599392

Option 3 ID : 264330599393

Option 4 ID : 264330599391

Status : Answered

Chosen Option : 4

ixamBee

Prepare 50% Faster

Multi Tasking Non Technical Staff and Havaladar CBIC and CBN Examination 2023

Roll Number	
Candidate Name	
Venue Name	iON Digital Zone iDZ 1 Patia
Exam Date	06/09/2023
Exam Time	12:30 PM - 2:30 PM
Subject	MTS Non Tech Havaladar CBIC and CBN Examination 2023

Section : Numerical and Mathematical Ability

Q.1 Pradeep is twice as good as Sandeep to complete a work. Working together, they can finish a piece of work in 28 days. In how many day can Pradeep alone finish the work?

- Ans**
- 1. 46
 - 2. 40
 - 3. 44
 - 4. 42

Question ID : 264330156235
Option 1 ID : 264330612342
Option 2 ID : 264330612339
Option 3 ID : 264330612341
Option 4 ID : 264330612340
Status : Answered
Chosen Option : 4

Q.2 A table showing the percentages of the total population of a town by age groups for the year 2016 is given below.

Age Group (in years)	Per cent
up to 15	35
16-30	18.5
30-40	12.5
40-50	25.77
51 and above	8.23

There are 2200 billion people below 40 years. How many billion people are in the age group 40-50?

- Ans**
- 1. 417
 - 2. 1167
 - 3. 274
 - 4. 859

Question ID : 264330153887
Option 1 ID : 264330603012
Option 2 ID : 264330603014
Option 3 ID : 264330603013
Option 4 ID : 264330603011
Status : Answered
Chosen Option : 4

Q.3 Two containers of equal capacity are full of a mixture of milk and water. In the first container, the ratio of milk to water is 3 : 11 and in the second container the ratio is 9 : 11. If both the mixtures are mixed in a container, what is the resulting ratio of milk to water?

- Ans**
- 1. 87 : 197
 - 2. 21 : 87
 - 3. 93 : 187
 - 4. 93 : 179

Question ID : 264330154078
 Option 1 ID : 264330603777
 Option 2 ID : 264330603775
 Option 3 ID : 264330603778
 Option 4 ID : 264330603776
 Status : Answered
 Chosen Option : 3

Q.4 In ABC club, 88% members are men and 12% members are women. If the average age of the men is 25 years and that of the women is 50 years, then what is the average age of all the members?

- Ans**
- 1. 27
 - 2. 28
 - 3. 26
 - 4. 29

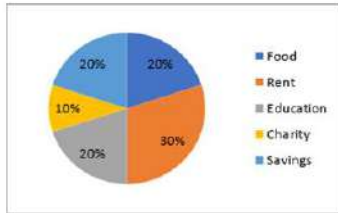
Question ID : 264330156211
 Option 1 ID : 264330612244
 Option 2 ID : 264330612245
 Option 3 ID : 264330612243
 Option 4 ID : 264330612246
 Status : Answered
 Chosen Option : 2

Q.5 A is 25% more than B, and B is 40% less than C. If C is 20% more than D, then by what percentage is A less than D?

- Ans**
- 1. 12%
 - 2. 5%
 - 3. 15%
 - 4. 10%

Question ID : 264330156515
 Option 1 ID : 264330613450
 Option 2 ID : 264330613447
 Option 3 ID : 264330613448
 Option 4 ID : 264330613449
 Status : Answered
 Chosen Option : 4

Q.6 The following pie chart gives the monthly budget of a family on the heads - Food, Rent, Education, Charity and Savings. The total income of the family is ₹9,000. Study the pie chart carefully and answer the question.



What is the total expenditure on the heads - rent, savings, food and education?

- Ans**
- 1. ₹8,200
 - 2. ₹8,100
 - 3. ₹6,300
 - 4. ₹6,500

Question ID : 264330153859
Option 1 ID : 264330602899
Option 2 ID : 264330602902
Option 3 ID : 264330602901
Option 4 ID : 264330602900
Status : Answered
Chosen Option : 2

Q.7 Two tankers contain 850 litres and 680 litres of oil. Find the maximum capacity of a container which can measure the oil of both tankers when used, an exact number of times.

- Ans**
- 1. 425 litres
 - 2. 680 litres
 - 3. 340 litres
 - 4. 170 litres

Question ID : 264330155982
Option 1 ID : 264330611327
Option 2 ID : 264330611329
Option 3 ID : 264330611328
Option 4 ID : 264330611330
Status : Answered
Chosen Option : 4

Q.8 Find the mean proportional between 56 and 14.

- Ans**
- 1. 42
 - 2. 14
 - 3. 35
 - 4. 28

Question ID : 264330153877
Option 1 ID : 264330602974
Option 2 ID : 264330602971
Option 3 ID : 264330602972
Option 4 ID : 264330602973
Status : Answered
Chosen Option : 4

Q.9 A and B can finish a work in $5\frac{1}{2}$ days. A alone can finish this work in 8 days. A and B worked on alternate days (starting with B) to finish this work. In how many days will the work be finished?

- Ans**
- 1. 6 days
 - 2. $11\frac{1}{3}$ days
 - 3. 11 days
 - 4. $6\frac{1}{3}$ days

Question ID : 264330154135
 Option 1 ID : 264330604003
 Option 2 ID : 264330604005
 Option 3 ID : 264330604004
 Option 4 ID : 264330604006
 Status : Answered
 Chosen Option : 1

Q.10 The selling price of 10 articles is equal to the cost price of 13 articles. What is the gain percentage?

- Ans**
- 1. 30%
 - 2. 25%
 - 3. 20%
 - 4. 40%

Question ID : 264330156518
 Option 1 ID : 264330613460
 Option 2 ID : 264330613462
 Option 3 ID : 264330613459
 Option 4 ID : 264330613461
 Status : Answered
 Chosen Option : 1

Q.11 The simple interest on a certain sum for 4 years at the rate of 15% p.a. is ₹4,500 less than the simple interest on the same sum for 6 years at the same rate of interest. Find the sum.

- Ans**
- 1. ₹12,000
 - 2. ₹13,000
 - 3. ₹15,000
 - 4. ₹14,000

Question ID : 264330156227
 Option 1 ID : 264330612307
 Option 2 ID : 264330612308
 Option 3 ID : 264330612310
 Option 4 ID : 264330612309
 Status : Answered
 Chosen Option : 3

Q.12 The average of four consecutive odd numbers is 58. What is the lowest number?

- Ans
- 1. 51
 - 2. 57
 - 3. 55
 - 4. 53

Question ID : 264330156252
Option 1 ID : 264330612407
Option 2 ID : 264330612410
Option 3 ID : 264330612409
Option 4 ID : 264330612408
Status : Answered
Chosen Option : 3

Q.13 At what rate per annum will a sum of ₹6,400 fetch a compound interest (Compounded annually) of ₹1,344 in 2 years?

- Ans
- 1. 10%
 - 2. 8%
 - 3. 12%
 - 4. 5%

Question ID : 264330154130
Option 1 ID : 264330603983
Option 2 ID : 264330603985
Option 3 ID : 264330603984
Option 4 ID : 264330603986
Status : Answered
Chosen Option : 1

Q.14 If $p : q = 5 : 2$, then $p^2 - q^2 : p^2 + q^2 = ?$

- Ans
- 1. 29 : 21
 - 2. 4 : 3
 - 3. 3 : 4
 - 4. 21 : 29

Question ID : 264330154126
Option 1 ID : 264330603968
Option 2 ID : 264330603970
Option 3 ID : 264330603969
Option 4 ID : 264330603967
Status : Answered
Chosen Option : 4

Q.15 Simplify the following.

$$15 \div 5 \text{ of } 3 \times 4 + 8 \div 12 \text{ of } 4 \times 12 - 4 \div 5 \times 20$$

Ans

✗ 1. $\frac{20}{3}$

✓ 2. -10

✗ 3. 12

✗ 4. 1

Question ID : 264330158196

Option 1 ID : 264330620144

Option 2 ID : 264330620143

Option 3 ID : 264330620146

Option 4 ID : 264330620145

Status : Answered

Chosen Option : 2

Q.16 A man takes 30 minutes to cover a certain distance at the speed of 8 km/h. If he walks at a speed of 16 km/h, he covers the same distance in:

Ans

✓ 1. 15 minutes

✗ 2. 30 minutes

✗ 3. 25 minutes

✗ 4. 20 minutes

Question ID : 264330156232

Option 1 ID : 264330612327

Option 2 ID : 264330612330

Option 3 ID : 264330612329

Option 4 ID : 264330612328

Status : Answered

Chosen Option : 1

Q.17 Metallic spheres of radii 6 cm, 8 cm and 10 cm, respectively, are melted to form a single solid sphere. Find the radius of the resulting sphere (in cm).

Ans

✗ 1. 18

✓ 2. 12

✗ 3. 24

✗ 4. 16

Question ID : 264330153865

Option 1 ID : 264330602926

Option 2 ID : 264330602923

Option 3 ID : 264330602924

Option 4 ID : 264330602925

Status : Answered

Chosen Option : 2

Q.18 Each edge of a cube is increased by 30%. What will be the increase in its surface area?

- Ans**
- 1. 90%
 - 2. 60%
 - 3. 30%
 - 4. 69%

Question ID : 264330154070
 Option 1 ID : 264330603745
 Option 2 ID : 264330603743
 Option 3 ID : 264330603746
 Option 4 ID : 264330603744
 Status : Answered
 Chosen Option : 4

Q.19 If there is a profit of 25% on the cost price of an article, the percentage of profit calculated on its selling price will be:

- Ans**
- 1. 20%
 - 2. 15%
 - 3. 18%
 - 4. 22%

Question ID : 264330155961
 Option 1 ID : 264330611244
 Option 2 ID : 264330611245
 Option 3 ID : 264330611246
 Option 4 ID : 264330611243
 Status : Answered
 Chosen Option : 1

Q.20 Trains A and B start at the same time. Train A travels at the speed of 50 km/h from station P to station Q and train B travels at the speed of 70 km/h from station Q to station P. They cross each other after 1 hour 20 minutes. What is the distance (in km) between station P and station Q?

- Ans**
- 1. 180
 - 2. 150
 - 3. 140
 - 4. 160

Question ID : 264330155970
 Option 1 ID : 264330611281
 Option 2 ID : 264330611282
 Option 3 ID : 264330611279
 Option 4 ID : 264330611280
 Status : Answered
 Chosen Option : 4

Q.1 21 is related to 86 following a certain logic. Following the same logic, 33 is related to 134. To which of the following is 25 related to, following the same logic?

- Ans**
- 1. 100
 - 2. 103
 - 3. 102
 - 4. 101

Question ID : 264330151580
Option 1 ID : 264330593947
Option 2 ID : 264330593950
Option 3 ID : 264330593949
Option 4 ID : 264330593948
Status : Answered
Chosen Option : 3

Q.2 If G means '-', A means 'x', D means '+', B means '+', then what will come in place of the question mark (?) in the following equation?

$$12A7G100D5B17=?$$

- Ans**
- 1. 74
 - 2. 93
 - 3. 81
 - 4. 37

Question ID : 264330154687
Option 1 ID : 264330606211
Option 2 ID : 264330606214
Option 3 ID : 264330606212
Option 4 ID : 264330606213
Status : Answered
Chosen Option : 3

Q.3 What should come in place of ? in the given series?

26 39 52 65 ? 91 104

- Ans**
- 1. 78
 - 2. 79
 - 3. 81
 - 4. 80

Question ID : 264330151542
Option 1 ID : 264330593795
Option 2 ID : 264330593796
Option 3 ID : 264330593798
Option 4 ID : 264330593797
Status : Answered
Chosen Option : 1

Q.4 In a certain code language, 'BLAME' is coded as 'CMBNF' and 'CHANGE' is coded as 'DIBOHF'. What is the code for 'DESERT' in the given code language?

- Ans**
- 1. EGTGSV
 - 2. FHSGTV
 - 3. EFTFSU
 - 4. FGRFST

Question ID : 264330155808
Option 1 ID : 264330610635
Option 2 ID : 264330610636
Option 3 ID : 264330610638
Option 4 ID : 264330610637
Status : Answered
Chosen Option : 3

Q.5 Read the given statement(s) and conclusions carefully. Assuming that the information given in the statements is true, even if it appears to be at variance with commonly known facts, decide which of the given conclusions logically follow(s) from the statement(s).

Statements: Some dogs are bats. Some bats are cats

Conclusions:

- (I) Some dogs are cats.
- (II) Some cats are dogs.

- Ans**
- 1. Both conclusions (I) and (II) are follows.
 - 2. Only conclusion (II) is follows.
 - 3. Neither conclusion (I) nor (II) is follows.
 - 4. Only conclusion (I) is follows.

Question ID : 264330154428
Option 1 ID : 264330605178
Option 2 ID : 264330605176
Option 3 ID : 264330605177
Option 4 ID : 264330605175
Status : Answered
Chosen Option : 3

Q.6 Read the given statements and conclusions carefully. You have to take the given statements to be true even if they seem to be at variance from commonly known facts. You have to decide which conclusion/s logically follow/s from the given statements.

Statements: Some paints are cats. All cats are dogs. Some dogs are bananas.

Conclusion I: Some paints are dogs.

Conclusion II: Some cats are bananas.

- Ans**
- 1. Neither conclusion (I) nor (II) is follow.
 - 2. Both conclusions (I) and (II) are follow.
 - 3. Only conclusion (I) is follow.
 - 4. Only conclusion (II) is follow.

Question ID : 264330155917
Option 1 ID : 264330611073
Option 2 ID : 264330611074
Option 3 ID : 264330611071
Option 4 ID : 264330611072
Status : Answered
Chosen Option : 3

Q.7 What should come in place of '?' in the given series?

7 28 91 280 ? 2548 7651

- Ans
- 1. 823
 - 2. 871
 - 3. 861
 - 4. 847

Question ID : 264330151484
 Option 1 ID : 264330593563
 Option 2 ID : 264330593566
 Option 3 ID : 264330593565
 Option 4 ID : 264330593564
 Status : Answered
 Chosen Option : 4

Q.8 What will come in the place of the question mark (?) in the following equation, if '+' and '-' are interchanged and 'x' and '/' are interchanged?

$$3 + 5 + 8 - 505 \times 5 = ?$$

- Ans
- 1. 106
 - 2. 102
 - 3. 104
 - 4. 108

Question ID : 264330154615
 Option 1 ID : 264330605925
 Option 2 ID : 264330605923
 Option 3 ID : 264330605924
 Option 4 ID : 264330605926
 Status : Answered
 Chosen Option : 4

Q.9 Which figure should replace the question mark (?) if the following figure series were to be continued?

D	L	△	3	
N	L	P	P	D
3	△	N	3	D
			N	L
				D
				?

Ans

✓ 1.

	N	
3	D	P
△		L

✗ 2.

	D	
N	P	△
3		L

✗ 3.

	P	
N	L	3
D		△

✗ 4.

	P	
N	D	3
△		L

Question ID : 264330154756

Option 1 ID : 264330606488

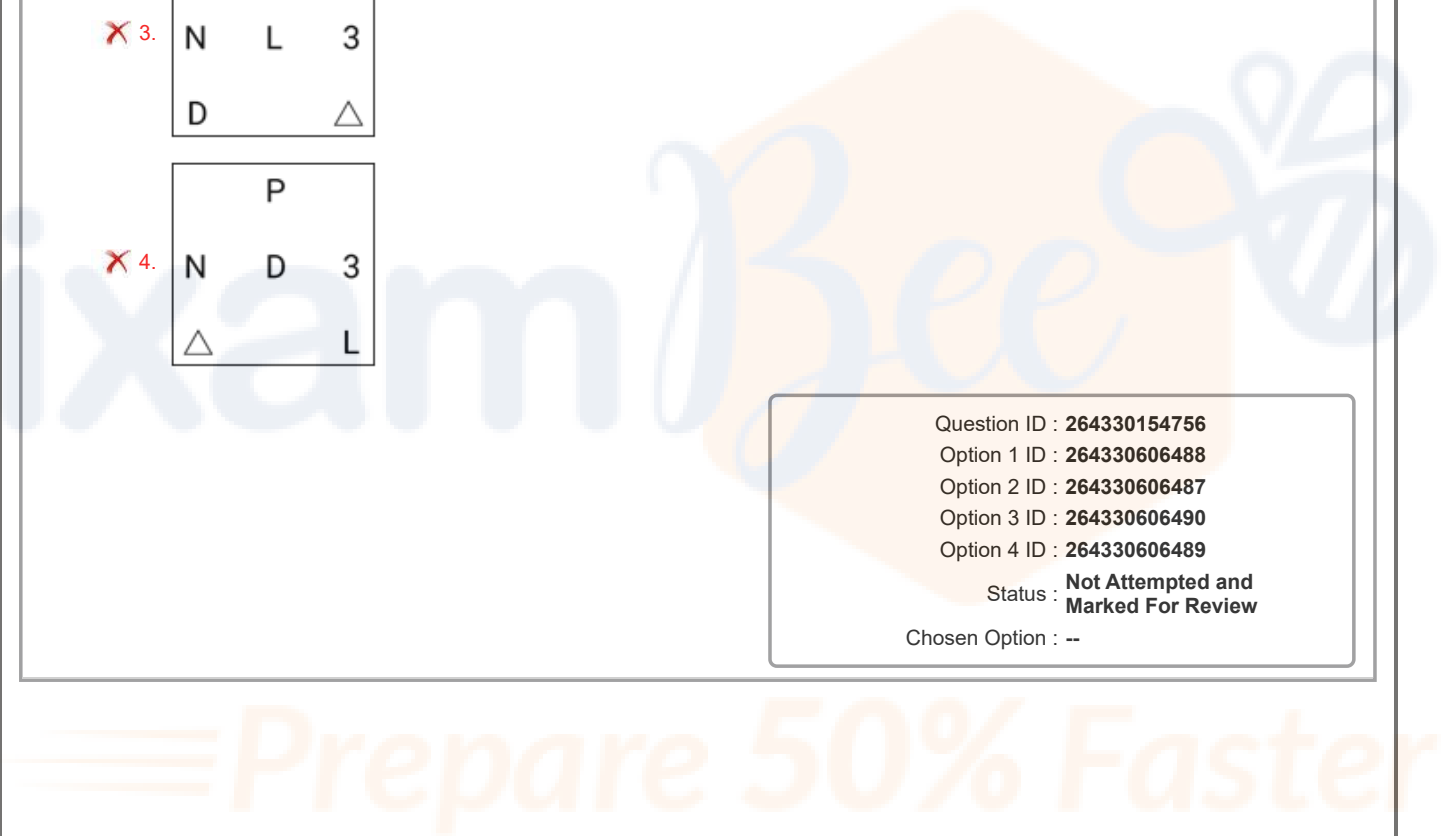
Option 2 ID : 264330606487

Option 3 ID : 264330606490

Option 4 ID : 264330606489

Status : Not Attempted and
Marked For Review

Chosen Option : --



Q.10

Select the option figure in which the given figure (X) is embedded as its part (rotation is NOT allowed).



(X)

Ans

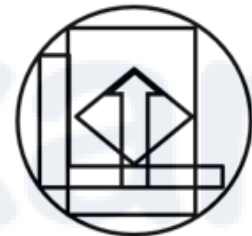
✗ 1.



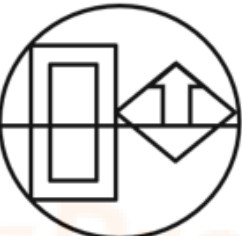
✓ 2.



✗ 3.



✗ 4.



Question ID : 264330151724

Option 1 ID : 264330594523

Option 2 ID : 264330594525

Option 3 ID : 264330594526

Option 4 ID : 264330594524

Status : Answered

Chosen Option : 2

Q.11 What should come in place of '?' in the given series?

11 39 123 375 1131 ?

- Ans
- ✓ 1. 3399
 - ✗ 2. 3499
 - ✗ 3. 3187
 - ✗ 4. 3417

Question ID : 264330151458
Option 1 ID : 264330593460
Option 2 ID : 264330593462
Option 3 ID : 264330593459
Option 4 ID : 264330593461
Status : Answered
Chosen Option : 1

Q.12 What should come in place of ? in the given series based on the English alphabetical order?

ESP, CRN, AQL, YPJ, ?

- Ans
- ✗ 1. YMG
 - ✗ 2. YNI
 - ✓ 3. WOH
 - ✗ 4. ZNG

Question ID : 264330155788
Option 1 ID : 264330610556
Option 2 ID : 264330610555
Option 3 ID : 264330610557
Option 4 ID : 264330610558
Status : Answered
Chosen Option : 3

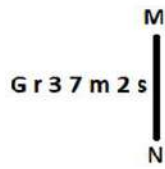
Q.13 Select the combination of letters that when sequentially placed in the blanks of the given series, will complete the series.

A _ AA _ _ AD _ DA

- Ans
- ✗ 1. AADDA
 - ✓ 2. DDAAA
 - ✗ 3. ADDAD
 - ✗ 4. DAADD

Question ID : 264330151638
Option 1 ID : 264330594179
Option 2 ID : 264330594180
Option 3 ID : 264330594181
Option 4 ID : 264330594182
Status : Not Attempted and Marked For Review
Chosen Option : --

Q.14 Select the correct mirror image of the given figure when the mirror is placed at MN as shown below.



- Ans
- 1. 2 7 m 3 r s G
 - 2. 2 5 m 7 8 1 G
 - 3. 2 5 m 7 8 1 0
 - 4. 2 s m 7 8 1 0

Question ID : 264330151529

Option 1 ID : 264330593744

Option 2 ID : 264330593745

Option 3 ID : 264330593746

Option 4 ID : 264330593743

Status : Answered

Chosen Option : 3

Q.15 Seven people, C, F, D, K, O, L, and V are sitting in a straight line, facing south. V sits second to the right of F. Only three people sit to the right of O. K is an immediate neighbour of O and D. Only three people sit between L and V. F is not an immediate neighbour of L.

Who sits to the extreme left of the line?

- Ans
- 1. C
 - 2. F
 - 3. V
 - 4. D

Question ID : 264330161698

Option 1 ID : 264330634121

Option 2 ID : 264330634120

Option 3 ID : 264330634122

Option 4 ID : 264330634119

Status : Not Attempted and Marked For Review

Chosen Option : --

Q.16 The position of how many letters will remain unchanged if each of the letter in the word 'GRAPES' is arranged in alphabetical order?

- Ans
- 1. One
 - 2. None
 - 3. Four
 - 4. Two

Question ID : 264330154321

Option 1 ID : 264330604750

Option 2 ID : 264330604748

Option 3 ID : 264330604747

Option 4 ID : 264330604749

Status : Answered

Chosen Option : 4

Q.17 In a certain code language, 'WHAT' is coded as 5298 and 'THAN' is coded as 9826. What is the code for 'W' in the given code language?

- Ans**
- 1. 8
 - 2. 5
 - 3. 2
 - 4. 6

Question ID : 264330155869
Option 1 ID : 264330610880
Option 2 ID : 264330610882
Option 3 ID : 264330610879
Option 4 ID : 264330610881
Status : Answered
Chosen Option : 2

Q.18 BJTI is related to EMWL in a certain way based on the English alphabetical order. In the same way, HDRL is related to KGUO. To which of the following is OCGM related to, following the same logic?

- Ans**
- 1. RFIO
 - 2. SEKO
 - 3. RFJP
 - 4. QEIR

Question ID : 264330151668
Option 1 ID : 264330594302
Option 2 ID : 264330594301
Option 3 ID : 264330594300
Option 4 ID : 264330594299
Status : Answered
Chosen Option : 3

Q.19 Select the set in which the numbers are related in the same way as are the numbers of the following sets.
(NOTE : Operations should be performed on the whole numbers, without breaking down the numbers into its constituent digits. E.g. 13 – Operations on 13 such as adding / subtracting / multiplying etc. to 13 can be performed. Breaking down 13 into 1 and 3 and then performing mathematical operations on 1 and 3 is not allowed)
(14, 13, 32)
(21, 13, 39)

- Ans**
- 1. 15, 7, 18
 - 2. 19, 12, 36
 - 3. 5, 19, 88
 - 4. 11, 14, 43

Question ID : 264330151609
Option 1 ID : 264330594066
Option 2 ID : 264330594064
Option 3 ID : 264330594065
Option 4 ID : 264330594063
Status : Answered
Chosen Option : 2

Q.20 What should come in place of ? in the given series based on the English alphabetical order?

NBX, MEW, LHV, KKV, ?

- Ans
- 1. HMS
 - 2. JNT
 - 3. IMR
 - 4. HNS

Question ID : 264330155792

Option 1 ID : 264330610571

Option 2 ID : 264330610572

Option 3 ID : 264330610573

Option 4 ID : 264330610574

Status : Answered

Chosen Option : 2

Section : General Awareness

Q.1 Who inaugurated the 2023 World Squash Championships that was held in India?

- Ans
- 1. KN Nehru
 - 2. K Ponmudi
 - 3. EV Velu
 - 4. Udhayanidhi Stalin

Question ID : 264330161128

Option 1 ID : 264330631843

Option 2 ID : 264330631846

Option 3 ID : 264330631845

Option 4 ID : 264330631844

Status : Marked For Review

Chosen Option : 4

Q.2 Who among the following is primarily regarded as a maestro of Hindustani classical music?

- Ans
- 1. Bade Ghulam Ali Khan
 - 2. Mavelikkara Prabhakara Varma
 - 3. Sampagodu Vighnaraja
 - 4. Sai Vignesh

Question ID : 264330155473

Option 1 ID : 264330609295

Option 2 ID : 264330609296

Option 3 ID : 264330609297

Option 4 ID : 264330609298

Status : Answered

Chosen Option : 1

Q.3 What is 'Mahawat' in India?

- Ans
- 1. Cold waves during the winter season
 - 2. Cloud burst during the monsoon season
 - 3. Cyclonic rainfall during the winter season
 - 4. Hot and dry winds during the summer season

Question ID : 264330161521

Option 1 ID : 264330633412

Option 2 ID : 264330633414

Option 3 ID : 264330633411

Option 4 ID : 264330633413

Status : Marked For Review

Chosen Option : 1

Q.4 Who among the following is the author of the book 'Selection Day'?

- Ans
- 1. Vikram Seth
 - 2. Aravind Adiga
 - 3. Chetan Bhagat
 - 4. Amish Tripathi

Question ID : 264330155456

Option 1 ID : 264330609228

Option 2 ID : 264330609227

Option 3 ID : 264330609230

Option 4 ID : 264330609229

Status : Marked For Review

Chosen Option : 2

Q.5 Which Article of the Constitution of India deals with the organization of village panchayat?

- Ans
- 1. Article 38
 - 2. Article 45
 - 3. Article 40
 - 4. Article 36

Question ID : 264330159905

Option 1 ID : 264330626967

Option 2 ID : 264330626969

Option 3 ID : 264330626968

Option 4 ID : 264330626970

Status : Answered

Chosen Option : 3

Q.6 Bharati Shivaji and Kanak Rele are exponents of _____.

- Ans
- 1. Manipuri
 - 2. Mohiniyattam
 - 3. Kathak
 - 4. Odissi

Question ID : 264330160852

Option 1 ID : 264330630742

Option 2 ID : 264330630741

Option 3 ID : 264330630740

Option 4 ID : 264330630739

Status : Marked For Review

Chosen Option : 1

Q.7 Which is the most common ore of oxidised mercury that occurs in granular crusts or veins associated with volcanic activity and hot springs?

- Ans
- 1. Diaspore
 - 2. Siderite
 - 3. Cinnabar
 - 4. Corundum

Question ID : 264330161402
Option 1 ID : 264330632936
Option 2 ID : 264330632935
Option 3 ID : 264330632938
Option 4 ID : 264330632937
Status : Marked For Review
Chosen Option : 3

Q.8 Women's World Boxing Championship 2023 was held in which city in India?

- Ans
- 1. Goa
 - 2. Punjab
 - 3. New Delhi
 - 4. Gujarat

Question ID : 264330158239
Option 1 ID : 264330620318
Option 2 ID : 264330620317
Option 3 ID : 264330620315
Option 4 ID : 264330620316
Status : Answered
Chosen Option : 3

Q.9 Who is regarded as the 'Mother of Indian Revolution'?

- Ans
- 1. Annie Besant
 - 2. Usha Mehta
 - 3. Madame Cama
 - 4. Kasturba Gandhi

Question ID : 264330162343
Option 1 ID : 264330636699
Option 2 ID : 264330636702
Option 3 ID : 264330636700
Option 4 ID : 264330636701
Status : Marked For Review
Chosen Option : 1

Q.10 Which microscopic, single-celled photosynthetic organisms are known as the primary producers of the ocean - the organisms that form the base of the aquatic food chains?

- Ans
- 1. Phytoplankton
 - 2. Zooplankton
 - 3. Bacterioplankton
 - 4. Virioplankton

Question ID : 264330160993
Option 1 ID : 264330631304
Option 2 ID : 264330631305
Option 3 ID : 264330631303
Option 4 ID : 264330631306
Status : Answered
Chosen Option : 1

Q.11 Which of the following novels is correctly paired with its author?

- Ans 1. The Shadow Lines – RK Narayan
 2. Malgudi Days – Vikram Seth
 3. The Namesake – Jhumpa Lahiri
 4. Train to Pakistan – Amitav Ghosh

Question ID : 264330161758
Option 1 ID : 264330634360
Option 2 ID : 264330634361
Option 3 ID : 264330634362
Option 4 ID : 264330634359
Status : Marked For Review
Chosen Option : 3

Q.12 Which of the following is a communication mail channel in India?

- Ans 1. Pink channel
 2. Yellow channel
 3. Red channel
 4. Green channel

Question ID : 264330160145
Option 1 ID : 264330627919
Option 2 ID : 264330627920
Option 3 ID : 264330627921
Option 4 ID : 264330627922
Status : Marked For Review
Chosen Option : 4

Q.13 Under the umbrella of Ujjwal Bharat Ujjwal Bhavishya–Power @ 2047, the PM inaugurated which of the following 100 MW Solar Projects in Telangana?

- Ans 1. Jurala Solar Power Plant
 2. ReNew Solar Power Plant
 3. Ramagundam Floating Solar Project
 4. Dharmaraopet Solar Power Plant

Question ID : 264330161406
Option 1 ID : 264330632953
Option 2 ID : 264330632951
Option 3 ID : 264330632954
Option 4 ID : 264330632952
Status : Marked For Review
Chosen Option : 3

Q.14 What is the name of the geographic feature that serves as a boundary between Europe and Africa?

- Ans 1. Bosphorus Strait
 2. Strait of Gibraltar
 3. Dardanelles Strait
 4. Malacca Strait

Question ID : 264330161327
Option 1 ID : 264330632636
Option 2 ID : 264330632635
Option 3 ID : 264330632638
Option 4 ID : 264330632637
Status : Answered
Chosen Option : 2

Q.15 Who among the following dancers is associated with Indian classical dance form of Kathak?

- Ans
- 1. Amubi Singh
 - 2. Pandit Birju Maharaj
 - 3. Dr. Kanak Rele
 - 4. Dr. Minati Mishra

Question ID : 264330155532
Option 1 ID : 264330609532
Option 2 ID : 264330609531
Option 3 ID : 264330609534
Option 4 ID : 264330609533
Status : Answered
Chosen Option : 2

Q.16 What is the primary purpose of microfinance institutions (MFIs) in India?

- Ans
- 1. To promote consumer spending among middle-class households
 - 2. To offer financial services exclusively to large businesses
 - 3. To provide small loans to low-income individuals
 - 4. To facilitate foreign investment in the Indian economy

Question ID : 264330157289
Option 1 ID : 264330616521
Option 2 ID : 264330616520
Option 3 ID : 264330616519
Option 4 ID : 264330616522
Status : Answered
Chosen Option : 3

Q.17 Which of the following is true about transfer payments in relation to personal income?

- Ans
- 1. Transfer payments are included in personal income.
 - 2. Transfer payments have no impact on personal income.
 - 3. Transfer payments are included in personal income only for businesses.
 - 4. Transfer payments are excluded from personal income.

Question ID : 264330157320
Option 1 ID : 264330616643
Option 2 ID : 264330616645
Option 3 ID : 264330616646
Option 4 ID : 264330616644
Status : Marked For Review
Chosen Option : 1

Q.18 Who among the following reformers initially set up a school for girls in Calcutta?

- Ans
- 1. Narayana Guru
 - 2. Mahatma Phule
 - 3. Swami Dayanand Saraswati
 - 4. Ishwar Chandra Vidyasagar

Question ID : 264330160888
Option 1 ID : 264330630883
Option 2 ID : 264330630886
Option 3 ID : 264330630884
Option 4 ID : 264330630885
Status : Answered
Chosen Option : 4

Q.19 Bharhut Stupa is located in which of the following states?

- Ans 1. Punjab
 2. Madhya Pradesh
 3. Uttar Pradesh
 4. Bihar

Question ID : 264330160757
Option 1 ID : 264330630359
Option 2 ID : 264330630362
Option 3 ID : 264330630360
Option 4 ID : 264330630361
Status : Marked For Review
Chosen Option : 4

Q.20 The most famous of all Jain festivals, Mahamastakabhisheka is performed every 12 years at the Digambara sacred complex at _____ in Karnataka.

- Ans 1. Keelakuilkudi
 2. Jinanathapura
 3. Shravanabelagola
 4. Puliymala

Question ID : 264330161348
Option 1 ID : 264330632719
Option 2 ID : 264330632722
Option 3 ID : 264330632721
Option 4 ID : 264330632720
Status : Marked For Review
Chosen Option : 3

Q.21 Which religion has the maximum number of followers in Bhutan?

- Ans 1. Hindu
 2. Islam
 3. Buddhism
 4. Christian

Question ID : 264330161564
Option 1 ID : 264330633586
Option 2 ID : 264330633583
Option 3 ID : 264330633584
Option 4 ID : 264330633585
Status : Answered
Chosen Option : 3

Q.22 The Madhavpur fair is held at _____.

- Ans 1. Bhatinda
 2. Moradabad
 3. Porbandar
 4. Jaisalmer

Question ID : 264330159085
Option 1 ID : 264330623700
Option 2 ID : 264330623699
Option 3 ID : 264330623701
Option 4 ID : 264330623702
Status : Marked For Review
Chosen Option : 2

Q.23 The former captain of the Indian women's hockey team _____ was conferred with the BBC Lifetime Achievement Award for her contribution to Indian sports and inspiring generations of players.

- Ans**
- 1. Rani Rampal
 - 2. Vandana Katariya
 - 3. Savita Punia
 - 4. Pritam Siwach

Question ID : 264330161436
Option 1 ID : 264330633074
Option 2 ID : 264330633073
Option 3 ID : 264330633072
Option 4 ID : 264330633071
Status : **Marked For Review**
Chosen Option : 1

Q.24 Who among the following is a Bharatanatyam and Kathakali dancer?

- Ans**
- 1. Padma Subrahmanayam
 - 2. Sonal Mansingh
 - 3. Shovana Narayan
 - 4. Mrinalini Sarabhai

Question ID : 264330159065
Option 1 ID : 264330623622
Option 2 ID : 264330623621
Option 3 ID : 264330623620
Option 4 ID : 264330623619
Status : **Marked For Review**
Chosen Option : 4

Q.25 Which Article of the Constitution of India guarantees the right to move the Supreme Court for the enforcement of the fundamental rights?

- Ans**
- 1. Article 21
 - 2. Article 32
 - 3. Article 25
 - 4. Article 29

Question ID : 264330159918
Option 1 ID : 264330627019
Option 2 ID : 264330627022
Option 3 ID : 264330627020
Option 4 ID : 264330627021
Status : **Answered**
Chosen Option : 2

Section : English Language and Comprehension

Q.1 Parts of the following sentence have been given as options. Select the option that contains an error.

Existentialism has a reputation for being angst-ridden and gloomy mostly because of its emphasis on pondering the meaningless of existence.

- Ans
- 1. on pondering the meaningless of existence
 - 2. mostly because of its emphasis
 - 3. Existentialism has a reputation
 - 4. for being angst-ridden and gloomy

Question ID : 264330153605
Option 1 ID : 264330601906
Option 2 ID : 264330601905
Option 3 ID : 264330601903
Option 4 ID : 264330601904
Status : Answered
Chosen Option : 1

Q.2 Select the most appropriate option that can substitute the underlined segment in the given sentence.

To preparing the vine for plant, it should be cut back to 2 ft.

- Ans
- 1. prepares in vine in plant
 - 2. prepare a vine in planting
 - 3. prepared the vine of plant
 - 4. prepare the vine for planting

Question ID : 264330153484
Option 1 ID : 264330601451
Option 2 ID : 264330601453
Option 3 ID : 264330601454
Option 4 ID : 264330601452
Status : Answered
Chosen Option : 4

Q.3 Select the most appropriate ANTONYM of the word given in brackets to fill in the blank.

The student provided her English teacher a short and _____(incoherent) account of her journey to Shimla with her parents.

- Ans
- 1. humble
 - 2. lucid
 - 3. rough
 - 4. genuine

Question ID : 264330152698
Option 1 ID : 264330598395
Option 2 ID : 264330598398
Option 3 ID : 264330598396
Option 4 ID : 264330598397
Status : Answered
Chosen Option : 2

Q.4 The following sentence has been split into four segments. Identify the segment that contains a grammatical error.
I want to / give you / an information about / the missing necklace.

- Ans**
- 1. an information about
 - 2. the missing necklace
 - 3. give you
 - 4. I want to

Question ID : 264330153420
Option 1 ID : 264330601213
Option 2 ID : 264330601214
Option 3 ID : 264330601212
Option 4 ID : 264330601211
Status : **Marked For Review**
Chosen Option : 1

Q.5 Identify the most appropriate meaning of the given word.
Ancient

- Ans**
- 1. Antique
 - 2. Unworn
 - 3. Contemporary
 - 4. Recent

Question ID : 264330152573
Option 1 ID : 264330597895
Option 2 ID : 264330597897
Option 3 ID : 264330597896
Option 4 ID : 264330597898
Status : **Answered**
Chosen Option : 1

Q.6 Select the most appropriate option that can substitute the underlined segment in the given sentence.

They are sell their company's products to people.

- Ans**
- 1. are sell the company
 - 2. are selling their company's
 - 3. was sell the company's
 - 4. is selling they company's

Question ID : 264330153474
Option 1 ID : 264330601414
Option 2 ID : 264330601413
Option 3 ID : 264330601412
Option 4 ID : 264330601411
Status : **Answered**
Chosen Option : 2

Q.7 Select the most appropriate meaning of the underlined idiom.
Mary is a ball of fire and is always engaged in something creative.

- Ans
- 1. An active and energetic person
 - 2. A dull and insipid person
 - 3. To be good and beneficial for someone
 - 4. A talkative person

Question ID : 264330151831
Option 1 ID : 264330594952
Option 2 ID : 264330594951
Option 3 ID : 264330594953
Option 4 ID : 264330594954
Status : Answered
Chosen Option : 1

Q.8 Select the most appropriate idiom to fill in the blank.
By living in a rural area with access to the city, she gets _____.

- Ans
- 1. the best of both worlds
 - 2. to keep an ear to the ground
 - 3. on cloud nine
 - 4. in for a penny in for a pound

Question ID : 264330151890
Option 1 ID : 264330595180
Option 2 ID : 264330595181
Option 3 ID : 264330595179
Option 4 ID : 264330595182
Status : Answered
Chosen Option : 1

Q.9 Select the most appropriate option that can substitute the underlined segment in the given sentence.

The cats food bowl was empty, so he meowed incessantly until his owner finally filled it with fresh kibble.

- Ans
- 1. The cats'
 - 2. A cat's
 - 3. A cats'
 - 4. The cat's

Question ID : 264330151856
Option 1 ID : 264330595043
Option 2 ID : 264330595044
Option 3 ID : 264330595046
Option 4 ID : 264330595045
Status : Answered
Chosen Option : 4

Q.10 Select the most appropriate meaning of the given idiom.
Get your act together

- Ans
- 1. To have patience
 - 2. To stay together
 - 3. To act in a play
 - 4. Get organised and do things better

Question ID : 264330152726
Option 1 ID : 264330598504
Option 2 ID : 264330598506
Option 3 ID : 264330598503
Option 4 ID : 264330598505
Status : Marked For Review
Chosen Option : 4

Q.11 Select the option that can be used as a one-word substitute for the given group of words.
Unpleasant

- Ans
- 1. Nebulous
 - 2. Natal
 - 3. Negligible
 - 4. Nasty

Question ID : 264330151909
Option 1 ID : 264330595253
Option 2 ID : 264330595251
Option 3 ID : 264330595254
Option 4 ID : 264330595252
Status : Answered
Chosen Option : 4

Q.12 The following sentence has been divided into four parts. Identify the part that contains an error.

- (A) The mother exclaimed / (B) when she saw her son / (C) stumble on the race track, / (D) "Look, he fell!"

- Ans
- 1. B
 - 2. D
 - 3. C
 - 4. A

Question ID : 264330152629
Option 1 ID : 264330598122
Option 2 ID : 264330598119
Option 3 ID : 264330598121
Option 4 ID : 264330598120
Status : Marked For Review
Chosen Option : 2

Q.13 Select the most appropriate option that can rectify the underlined segment in the given sentence. If there is no need to rectify it, select 'no rectification needed'.

The conductor said that it was the worse quake he ever knew.

- Ans
- 1. more bad
 - 2. bad
 - 3. no rectification needed
 - 4. worst

Question ID : 264330153466
Option 1 ID : 264330601380
Option 2 ID : 264330601379
Option 3 ID : 264330601382
Option 4 ID : 264330601381
Status : Answered
Chosen Option : 4

Q.14 Select the most appropriate meaning of the underlined idiom in the following sentence.

After having invested so much time and energy into the project, we are now back to square one.

- Ans
- 1. Not ready for the consequence
 - 2. In the same city
 - 3. Fighting with each other
 - 4. Having to start all over again

Question ID : 264330153049
Option 1 ID : 264330599766
Option 2 ID : 264330599763
Option 3 ID : 264330599765
Option 4 ID : 264330599764
Status : Answered
Chosen Option : 4

Q.15 Select the option that can be used as a one-word substitute for the given group of words.

Killing of one's own father

- Ans
- 1. Matricide
 - 2. Filicide
 - 3. Patricide
 - 4. Suicide

Question ID : 264330151813
Option 1 ID : 264330594879
Option 2 ID : 264330594881
Option 3 ID : 264330594880
Option 4 ID : 264330594882
Status : Answered
Chosen Option : 3

Q.16 The sentence given below has spelling errors. Select the sentence without spelling errors.

Though we read and hear a lot on green initiative, we hardly tweak our routines to suite the larger picture.

- Ans 1. Though we read and hear a lot on green initiatives, we hardly tweak our routines to suit the larger picture.
2. Throug we read and hear a lot on green initiatives, we hardly tweak our routines to suite the larger picture.
3. Though we read and hear a lot on green initiatives, we hardly tweek our routines to suite the larger picture.
4. Though we read and hear a lot on green iniciatives, we hardly tweak our routines to suite the larger picture.

Question ID : 264330153221
Option 1 ID : 264330600443
Option 2 ID : 264330600444
Option 3 ID : 264330600446
Option 4 ID : 264330600445
Status : Answered
Chosen Option : 1

Q.17 Select the most appropriate synonym of the bracketed word in the following sentence to fill in the blank.

The athlete's injury was a _____ (defeat) for the team's chances of winning the championship.

- Ans 1. progression
2. breakthrough
3. stress
4. setback

Question ID : 264330152651
Option 1 ID : 264330598209
Option 2 ID : 264330598208
Option 3 ID : 264330598210
Option 4 ID : 264330598207
Status : Answered
Chosen Option : 4

Q.18 Select the INCORRECTLY spelt word.

- Ans 1. Parallel
2. Recommend
3. Irresistable
4. Tomorrow

Question ID : 264330152645
Option 1 ID : 264330598185
Option 2 ID : 264330598183
Option 3 ID : 264330598186
Option 4 ID : 264330598184
Status : Answered
Chosen Option : 4

Q.19 Select the correctly spelt word.

- Ans 1. Millennium
 2. Milennium
 3. Millenum
 4. Milenium

Question ID : 264330152963
Option 1 ID : 264330599427
Option 2 ID : 264330599428
Option 3 ID : 264330599429
Option 4 ID : 264330599430
Status : Answered
Chosen Option : 1

Q.20 Select the most appropriate option that can substitute the underlined segment in the following sentence.

She proposed to write the life history of the famous poet.

- Ans 1. novel
 2. biography
 3. mythology
 4. autobiography

Question ID : 264330152632
Option 1 ID : 264330598134
Option 2 ID : 264330598132
Option 3 ID : 264330598133
Option 4 ID : 264330598131
Status : Answered
Chosen Option : 2

Comprehension:

In the following passage, some words have been deleted. Read the passage carefully and select the most appropriate option to fill in each blank.

Democracy is a form of government where the power lies _____(1) the people. It is based on the principles of equality, freedom and the rule of law. In a democratic society, _____(2) have the right to participate in the decision-making process, _____(3) directly or through elected representatives. Democracy also allows for the _____(4) of individual rights and liberties. While democracy is not without its challenges, such as the need to balance competing interests and the risk of _____(5) movements, it remains one of the most widely embraced forms of government around the world.

SubQuestion No : 21

Q.21 Select the most appropriate option to fill in blank no. 1.

- Ans 1. towards
 2. on
 3. by
 4. with

Question ID : 264330151893
Option 1 ID : 264330595188
Option 2 ID : 264330595187
Option 3 ID : 264330595189
Option 4 ID : 264330595190
Status : Answered
Chosen Option : 2

Comprehension:

In the following passage, some words have been deleted. Read the passage carefully and select the most appropriate option to fill in each blank.

Democracy is a form of government where the power lies _____(1) the people. It is based on the principles of equality, freedom and the rule of law. In a democratic society, _____(2) have the right to participate in the decision-making process, _____(3) directly or through elected representatives. Democracy also allows for the _____(4) of individual rights and liberties. While democracy is not without its challenges, such as the need to balance competing interests and the risk of _____(5) movements, it remains one of the most widely embraced forms of government around the world.

SubQuestion No : 22

Q.22 Select the most appropriate option to fill in blank no. 2.

- Ans
- 1. lawyers
 - 2. humans
 - 3. politicians
 - 4. citizens

Question ID : 264330151894
 Option 1 ID : 264330595193
 Option 2 ID : 264330595194
 Option 3 ID : 264330595191
 Option 4 ID : 264330595192
 Status : Answered
 Chosen Option : 4

Comprehension:

In the following passage, some words have been deleted. Read the passage carefully and select the most appropriate option to fill in each blank.

Democracy is a form of government where the power lies _____(1) the people. It is based on the principles of equality, freedom and the rule of law. In a democratic society, _____(2) have the right to participate in the decision-making process, _____(3) directly or through elected representatives. Democracy also allows for the _____(4) of individual rights and liberties. While democracy is not without its challenges, such as the need to balance competing interests and the risk of _____(5) movements, it remains one of the most widely embraced forms of government around the world.

SubQuestion No : 23

Q.23 Select the most appropriate option to fill in blank no. 3.

- Ans
- 1. either
 - 2. however
 - 3. neither
 - 4. also

Question ID : 264330151895
 Option 1 ID : 264330595196
 Option 2 ID : 264330595197
 Option 3 ID : 264330595198
 Option 4 ID : 264330595195
 Status : Answered
 Chosen Option : 1

Comprehension:

In the following passage, some words have been deleted. Read the passage carefully and select the most appropriate option to fill in each blank.

Democracy is a form of government where the power lies _____(1) the people. It is based on the principles of equality, freedom and the rule of law. In a democratic society, _____(2) have the right to participate in the decision-making process, _____(3) directly or through elected representatives. Democracy also allows for the _____(4) of individual rights and liberties. While democracy is not without its challenges, such as the need to balance competing interests and the risk of _____(5) movements, it remains one of the most widely embraced forms of government around the world.

SubQuestion No : 24

Q.24 Select the most appropriate option to fill in blank no. 4.

- Ans 1. delimitation
 2. protection
 3. diversion
 4. proscription

Question ID : 264330151896
 Option 1 ID : 264330595200
 Option 2 ID : 264330595199
 Option 3 ID : 264330595202
 Option 4 ID : 264330595201
 Status : Answered
 Chosen Option : 2

Comprehension:

In the following passage, some words have been deleted. Read the passage carefully and select the most appropriate option to fill in each blank.

Democracy is a form of government where the power lies _____(1) the people. It is based on the principles of equality, freedom and the rule of law. In a democratic society, _____(2) have the right to participate in the decision-making process, _____(3) directly or through elected representatives. Democracy also allows for the _____(4) of individual rights and liberties. While democracy is not without its challenges, such as the need to balance competing interests and the risk of _____(5) movements, it remains one of the most widely embraced forms of government around the world.

SubQuestion No : 25

Q.25 Select the most appropriate option to fill in blank no. 5.

- Ans 1. marginal
 2. elitist
 3. populist
 4. negligible

Question ID : 264330151897
 Option 1 ID : 264330595204
 Option 2 ID : 264330595203
 Option 3 ID : 264330595206
 Option 4 ID : 264330595205
 Status : Answered
 Chosen Option : 3

Multi Tasking Non Technical Staff and Havaladar CBIC and CBN Examination 2023

Roll Number	
Candidate Name	
Venue Name	iON Digital Zone iDZ 2 Mathura Road
Exam Date	06/09/2023
Exam Time	4:00 PM - 6:00 PM
Subject	MTS Non Tech Havaladar CBIC and CBN Examination 2023

Section : Numerical and Mathematical Ability

Q.1 In what ratio should wheat of ₹34 per kg be mixed with wheat of ₹26 per kg so that on selling the mixture at ₹36 per kg, a profit of 20% is gained?

- Ans**
- ✓ 1. 1 : 1
 - ✗ 2. 2 : 3
 - ✗ 3. 1 : 2
 - ✗ 4. 3 : 4

Question ID : 264330156511

Option 1 ID : 264330613434

Option 2 ID : 264330613432

Option 3 ID : 264330613431

Option 4 ID : 264330613433

Status : Answered

Chosen Option : 1

Q.2 A thief is noticed by a policeman from a distance of 98 m. The thief starts running and the policeman chases him. The thief and policeman run at the speed of 90 km/h and 118.8 km/h, respectively. What is the time taken to catch the thief by a policeman?

- Ans**
- ✗ 1. $14\frac{1}{4}$ sec
 - ✗ 2. $10\frac{1}{2}$ sec
 - ✗ 3. $13\frac{1}{4}$ sec
 - ✓ 4. $12\frac{1}{4}$ sec

Question ID : 264330154091

Option 1 ID : 264330603830

Option 2 ID : 264330603827

Option 3 ID : 264330603828

Option 4 ID : 264330603829

Status : Answered

Chosen Option : 4

Q.3 A cube of side 3 cm is melted and smaller cubes of sides 1 cm each are formed. How many such cubes can be formed?

- Ans**
- 1. 72
 - 2. 64
 - 3. 27
 - 4. 8

Question ID : 264330156085
Option 1 ID : 264330611742
Option 2 ID : 264330611741
Option 3 ID : 264330611739
Option 4 ID : 264330611740
Status : Answered
Chosen Option : 3

Q.4 What is the average of the prime numbers between 46 and 99, correct to two decimal places?

- Ans**
- 1. 80.27
 - 2. 82.70
 - 3. 70.82
 - 4. 72.80

Question ID : 264330156545
Option 1 ID : 264330613567
Option 2 ID : 264330613570
Option 3 ID : 264330613568
Option 4 ID : 264330613569
Status : Answered
Chosen Option : 4

Q.5 If $a : b = 3 : 2$ and $b : c = 5 : 4$, then $a : b : c$ is:

- Ans**
- 1. 11 : 8 : 10
 - 2. 8 : 10 : 15
 - 3. 15 : 10 : 8
 - 4. 7 : 10 : 15

Question ID : 264330154082
Option 1 ID : 264330603791
Option 2 ID : 264330603792
Option 3 ID : 264330603794
Option 4 ID : 264330603793
Status : Answered
Chosen Option : 3

Q.6 Find the least number which when divided by 19, 36 and 54 leaves a remainder of 4 in each case.

Ans ✓ 1. 2056

✗ 2. 1854

✗ 3. 2172

✗ 4. 1925

Question ID : 264330155723

Option 1 ID : 264330610297

Option 2 ID : 264330610295

Option 3 ID : 264330610298

Option 4 ID : 264330610296

Status : Answered

Chosen Option : 1

Q.7 In April, Mr. Khan observed that his balance in his bank account is ₹5,600 for the first 24 days, ₹12,000 for the next two days and ₹37,500 in the last 4 days of the month. What is his daily average balance for April?

Ans ✓ 1. ₹10,280

✗ 2. ₹15,280

✗ 3. ₹10,480

✗ 4. ₹14,280

Question ID : 264330154117

Option 1 ID : 264330603933

Option 2 ID : 264330603931

Option 3 ID : 264330603934

Option 4 ID : 264330603932

Status : Answered

Chosen Option : 1

Q.8 The areas of three adjacent faces of a cuboid are p, q and r unit², respectively. What is its volume?

Ans ✗ 1. $p^3q^3r^3$ unit³

✓ 2. \sqrt{pqr} unit³

✗ 3. p q r unit³

✗ 4. $\sqrt[3]{pqr}$ unit³

Question ID : 264330154139

Option 1 ID : 264330604022

Option 2 ID : 264330604021

Option 3 ID : 264330604020

Option 4 ID : 264330604019

Status : Answered

Chosen Option : 2

Q.9 What will be the amount due on ₹24,000 in 2 years when the rate of simple interest on successive years is 4% per annum and 5% per annum, respectively?

- Ans
- 1. ₹24,960
 - 2. ₹25,200
 - 3. ₹26,208
 - 4. ₹26,160

Question ID : 264330159035
Option 1 ID : 264330623500
Option 2 ID : 264330623502
Option 3 ID : 264330623499
Option 4 ID : 264330623501
Status : Answered
Chosen Option : 4

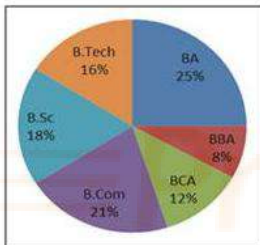
Q.10 Aslam can do a work in 20 days and Bansi in 30 days. If they work on it together for 5 days, then, what is the fraction of the remaining work?

- Ans
- 1. $\frac{7}{13}$
 - 2. $\frac{7}{12}$
 - 3. $\frac{11}{12}$
 - 4. $\frac{5}{12}$

Question ID : 264330156115
Option 1 ID : 264330611862
Option 2 ID : 264330611861
Option 3 ID : 264330611860
Option 4 ID : 264330611859
Status : Answered
Chosen Option : 2

Q.11 The pie chart shows the percentage of students studying in different courses in a college.

The degree measure of angle for students studying in BBA is:



- Ans
- 1. 32°
 - 2. 36°
 - 3. 48.8°
 - 4. 28.8°

Question ID : 264330154068
Option 1 ID : 264330603735
Option 2 ID : 264330603736
Option 3 ID : 264330603738
Option 4 ID : 264330603737
Status : Answered
Chosen Option : 4

Q.12 Sonam covers 230 km in 5 hours. What distance (in km) will she cover in 9 hours?

- Ans
- 1. 484
 - 2. 454
 - 3. 424
 - 4. 414

Question ID : 264330155750
Option 1 ID : 264330610403
Option 2 ID : 264330610404
Option 3 ID : 264330610405
Option 4 ID : 264330610406
Status : Answered
Chosen Option : 4

Q.13 The income of a person first increases by 25% and then decreases by 25%. What % is the new income of the original income?

- Ans
- 1. $91\frac{1}{4}\%$
 - 2. $93\frac{3}{4}\%$
 - 3. $95\frac{3}{4}\%$
 - 4. $92\frac{1}{4}\%$

Question ID : 264330156819
Option 1 ID : 264330614654
Option 2 ID : 264330614653
Option 3 ID : 264330614652
Option 4 ID : 264330614651
Status : Answered
Chosen Option : 2

Q.14 P, Q and R can complete a piece of work in 6 days, 12 days and 15 days, respectively. P starts working alone on 1st, 4th, 7th ..., Q works alone on 2nd, 5th, 8th... and R works alone on 3rd, 6th, 9th... This pattern is continued till the work is completed. In how much time (in days) is the entire work done?

- Ans
- 1. $10\frac{3}{5}$
 - 2. $9\frac{3}{10}$
 - 3. $9\frac{1}{2}$
 - 4. $10\frac{1}{2}$

Question ID : 264330153778
Option 1 ID : 264330602577
Option 2 ID : 264330602576
Option 3 ID : 264330602575
Option 4 ID : 264330602578
Status : Answered
Chosen Option : 2

Q.15 The ratio of cost price to selling price of an article is 186 : 206. The profit per cent on it is:

- Ans
- 1. $12\frac{50}{93}$
 - 2. $12\frac{70}{93}$
 - 3. $10\frac{70}{93}$
 - 4. $10\frac{50}{93}$

Question ID : 264330155960

Option 1 ID : 264330611239

Option 2 ID : 264330611240

Option 3 ID : 264330611242

Option 4 ID : 264330611241

Status : Answered

Chosen Option : 3

Q.16 If $A : B = \frac{1}{3} : \frac{1}{5}$, $B : C = \frac{1}{7} : \frac{1}{8}$ and $C : D = \frac{1}{10} : \frac{1}{21}$, then $A : B : C : D$ is:

- Ans
- 1. 40 : 24 : 21 : 10
 - 2. 48 : 23 : 25 : 8
 - 3. 8 : 3 : 7 : 5
 - 4. 14 : 24 : 28 : 10

Question ID : 264330154083

Option 1 ID : 264330603798

Option 2 ID : 264330603795

Option 3 ID : 264330603797

Option 4 ID : 264330603796

Status : Answered

Chosen Option : 1

Q.17 The table below shows the production of transformers by five different companies in the year 2022 from January to June. Study the table carefully and answer the question that follows.

Month/Company	P	Q	R	S	T
January	145	140	177	163	140
February	178	122	179	188	187
March	185	135	160	130	145
April	150	130	169	148	172
May	146	128	180	137	153
June	128	145	195	148	170

What is the difference between the total production of companies Q and R from the month January to June?

- Ans
- 1. 260
 - 2. 263
 - 3. 280
 - 4. 283

Question ID : 264330156572

Option 1 ID : 264330613675

Option 2 ID : 264330613676

Option 3 ID : 264330613677

Option 4 ID : 264330613678

Status : Answered

Chosen Option : 1

Q.18 Kavita bought a table at 30% discount on its original price. She sold it with 48% increase on the price she bought it. What is the percentage difference between the new sale price and original price? If the original price is ₹8,000, then how much extra money did Kavita get as profit?

- Ans**
- 1. 5.6%; ₹280
 - 2. 3.6%; ₹288
 - 3. 6%; ₹360
 - 4. 4.5%; ₹308

Question ID : **264330156182**
Option 1 ID : **264330612127**
Option 2 ID : **264330612129**
Option 3 ID : **264330612130**
Option 4 ID : **264330612128**
Status : **Not Answered**
Chosen Option : --

Q.19 What sum of money invested at 8% per annum in $1\frac{1}{2}$ years, compounded half-yearly, shall become ₹17,576?

- Ans**
- 1. ₹ 16,500
 - 2. ₹ 15,000
 - 3. ₹ 15,525
 - 4. ₹ 15,625

Question ID : **264330156079**
Option 1 ID : **264330611715**
Option 2 ID : **264330611716**
Option 3 ID : **264330611718**
Option 4 ID : **264330611717**
Status : **Answered**
Chosen Option : 4

Q.20 Simplify:

$$(15 \div 3) \div 5 + (18 \div 9) \times 3 + (24 \div 6) \times (5 \div 4) = ?$$

- Ans**
- 1. 12
 - 2. 1
 - 3. 16
 - 4. 21

Question ID : **264330156427**
Option 1 ID : **264330613102**
Option 2 ID : **264330613099**
Option 3 ID : **264330613101**
Option 4 ID : **264330613100**
Status : **Answered**
Chosen Option : 1

Q.1 CZMB is related to NNAM in a certain way based on the English alphabetical order. In the same way, LKQD is related to WRLO. To which of the following is HNTF related, following the same logic?

- Ans**
- 1. SQOU
 - 2. SUOQ
 - 3. SOUQ
 - 4. SUQO

Question ID : 264330154181
Option 1 ID : 264330604189
Option 2 ID : 264330604188
Option 3 ID : 264330604187
Option 4 ID : 264330604190
Status : Answered
Chosen Option : 2

Q.2 Select the combination of letters that when sequentially placed in the blanks of the given series will make it logically complete.

AC_F GIJ_ M_PR _UVX YA_D

- Ans**
- 1. LODBS
 - 2. DKOBS
 - 3. DLOSB
 - 4. HFBHC

Question ID : 264330156316
Option 1 ID : 264330612666
Option 2 ID : 264330612665
Option 3 ID : 264330612664
Option 4 ID : 264330612663
Status : Answered
Chosen Option : 3

Q.3 If 16 September 1980 is a Tuesday, then what will be the day of the week on 3 September 1985?

- Ans**
- 1. Tuesday
 - 2. Saturday
 - 3. Friday
 - 4. Sunday

Question ID : 264330154349
Option 1 ID : 264330604860
Option 2 ID : 264330604861
Option 3 ID : 264330604859
Option 4 ID : 264330604862
Status : Answered
Chosen Option : 1

Q.4 What will come in the place of '?' in the following equation, if '+' and '-' are interchanged and '×' and '÷' are interchanged?
 $321 \times 3 + 81 - 12 \div 8 = ?$

- Ans**
- 1. 132
 - 2. 122
 - 3. 142
 - 4. 112

Question ID : 264330155672
 Option 1 ID : 264330610092
 Option 2 ID : 264330610091
 Option 3 ID : 264330610093
 Option 4 ID : 264330610094
 Status : Answered
 Chosen Option : 2

Q.5 What should come in place of ? in the given series based on the English alphabetical order?

KFY, LGA, MHC, NIE, ?

- Ans**
- 1. OJG
 - 2. MIH
 - 3. NJG
 - 4. MKI

Question ID : 264330155773
 Option 1 ID : 264330610498
 Option 2 ID : 264330610497
 Option 3 ID : 264330610495
 Option 4 ID : 264330610496
 Status : Answered
 Chosen Option : 1

Q.6 Read the given statements and conclusions carefully. You have to take the given statements to be true even if they seem to be at variance from commonly known facts. You have to decide which conclusion/s logically follow/s from the given statements.

Statements: Some bats are curtains. All curtains are yellow. All yellow are pens.

Conclusion I: All yellow are curtains.

Conclusion II: Some pens are curtains.

- Ans**
- 1. Only conclusion (I) is follow.
 - 2. Both conclusions (I) and (II) are follow.
 - 3. Neither conclusion (I) nor (II) is follow.
 - 4. Only conclusion (II) is follow.

Question ID : 264330155910
 Option 1 ID : 264330611043
 Option 2 ID : 264330611046
 Option 3 ID : 264330611045
 Option 4 ID : 264330611044
 Status : Answered
 Chosen Option : 4

Q.7 What should come in place of ? in the given series based on the English alphabetical order?

HWC, KUD, NSE, QQF, ?

- Ans
- 1. RMH
 - 2. ROF
 - 3. SNH
 - 4. TOG

Question ID : 264330155803

Option 1 ID : 264330610617

Option 2 ID : 264330610618

Option 3 ID : 264330610616

Option 4 ID : 264330610615

Status : Answered

Chosen Option : 4

Q.8 27 is related to 36 following a certain logic. Following the same logic, 69 is related to 78. To which of the following is 53 related to, following the same logic?

- Ans
- 1. 63
 - 2. 64
 - 3. 62
 - 4. 61

Question ID : 264330151598

Option 1 ID : 264330594021

Option 2 ID : 264330594022

Option 3 ID : 264330594020

Option 4 ID : 264330594019

Status : Answered

Chosen Option : 3

Q.9 What should come in place of ? in the given series?

56 54 50 48 44 ?

- Ans
- 1. 40
 - 2. 38
 - 3. 42
 - 4. 36

Question ID : 264330151718

Option 1 ID : 264330594499

Option 2 ID : 264330594501

Option 3 ID : 264330594500

Option 4 ID : 264330594502

Status : Answered

Chosen Option : 3

Q.10 R, S, T, U, V, W, X and Y are sitting around a square table facing the center of the table. Some of them are sitting at the corners while some are sitting at the exact center of the sides. R is the immediate neighbour of X and Y. X sits in any of the corners. W sits third to the right of T. T does not sit in any of the corners. U is the immediate neighbour of Y and W. V is not the neighbour of W.

How many people sit between W and T, when counted from the right of W?

- Ans**
- ✓ 1. Four
 - ✗ 2. Five
 - ✗ 3. Two
 - ✗ 4. Three

Question ID : 264330155540
 Option 1 ID : 264330609564
 Option 2 ID : 264330609563
 Option 3 ID : 264330609566
 Option 4 ID : 264330609565
 Status : Answered
 Chosen Option : 1

Q.11 If 'P' stands for '×', 'Q' stands for '+', 'R' stands for '-' and 'S' stands for '÷', what will come in place of the question mark (?) in the following equation?
 $39 \text{ S } 6 \text{ P } 9 \text{ R } 32 \text{ S } 15 \text{ P } 8 \text{ R } 70 = ?$

- Ans**
- ✓ 1. 111
 - ✗ 2. 88
 - ✗ 3. 91
 - ✗ 4. 119

Question ID : 264330151791
 Option 1 ID : 264330594791
 Option 2 ID : 264330594793
 Option 3 ID : 264330594792
 Option 4 ID : 264330594794
 Status : Answered
 Chosen Option : 1

Q.12 What should come in place of ? in the given series?

101 104 109 116 125 ?

- Ans**
- ✓ 1. 136
 - ✗ 2. 134
 - ✗ 3. 135
 - ✗ 4. 133

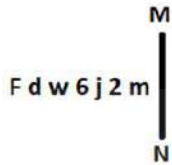
Question ID : 264330151545
 Option 1 ID : 264330593810
 Option 2 ID : 264330593808
 Option 3 ID : 264330593809
 Option 4 ID : 264330593807
 Status : Answered
 Chosen Option : 1

Q.13 28 is related to 12 following a certain logic. Following the same logic, 42 is related to 19. To which of the following is 52 related to, following the same logic?

- Ans
- 1. 23
 - 2. 25
 - 3. 24
 - 4. 22

Question ID : 264330151584
Option 1 ID : 264330593964
Option 2 ID : 264330593966
Option 3 ID : 264330593965
Option 4 ID : 264330593963
Status : Answered
Chosen Option : 3

Q.14 Select the correct mirror image of the given figure when the mirror is placed at MN as shown below.



- Ans
- 1. m 2 j @ w b F
 - 2. 2 m j @ w b F
 - 3. m 2 j @ w b F
 - 4. m 2 j @ m d F

Question ID : 264330151505
Option 1 ID : 264330593648
Option 2 ID : 264330593650
Option 3 ID : 264330593649
Option 4 ID : 264330593647
Status : Answered
Chosen Option : 3

Q.15 In a certain code language, 'MACABRE' is coded as '8' and 'HEDONISM' is coded as '9'. What is the code for 'ERUPT' in the given code language?

- Ans
- 1. 8
 - 2. 6
 - 3. 5
 - 4. 7

Question ID : 264330155823
Option 1 ID : 264330610695
Option 2 ID : 264330610697
Option 3 ID : 264330610696
Option 4 ID : 264330610698
Status : Answered
Chosen Option : 2

Q.16 Read the given statements and conclusions carefully. You have to take the given statements to be true even if they seem to be at variance from commonly known facts. You have to decide which conclusion/s logically follow/s from the given statements.

Statements: All flowers are orange. Some orange is colour. All colours are bright.

Conclusion I: Some orange are flowers.

Conclusion II: All colour is orange.

Ans

- ✓ 1. Only conclusion (I) is follow.
- ✗ 2. Both conclusions (I) and (II) are follow.
- ✗ 3. Only conclusion (II) is follow.
- ✗ 4. Neither conclusion (I) nor (II) is follow.

Question ID : 264330155904

Option 1 ID : 264330611019

Option 2 ID : 264330611022

Option 3 ID : 264330611020

Option 4 ID : 264330611021

Status : Answered

Chosen Option : 1

Q.17 Which figure should replace the question mark (?) if the following figure series were to be continued?

D	X	Y	8	Y	9	9	8	Y	↑	Y	D	
8	↑		D	X		↑	=		9	8		?
		9			↑			D		=		

Ans

✓ 1.

D	↑	Y
=	S	
		9

✗ 2.

9	↑	=
8	Y	
		D

✗ 3.

Y	D	↑
=	S	
		9

✗ 4.

D	↑	Y
=	9	
		8

Question ID : 264330154757

Option 1 ID : 264330606493

Option 2 ID : 264330606492

Option 3 ID : 264330606494

Option 4 ID : 264330606491

Status : Not Answered

Chosen Option : --

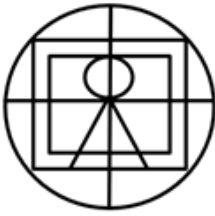
Q.18 Select the option figure in which the given figure (X) is embedded as its part (rotation is NOT allowed).



(X)

Ans

✗ 1.



✓ 2.



✗ 3.



✗ 4.



Question ID : 264330151728

Option 1 ID : 264330594540

Option 2 ID : 264330594539

Option 3 ID : 264330594542

Option 4 ID : 264330594541

Status : Answered

Chosen Option : 2

Q.19 In a certain code language, 'never lose hope' is coded as 'tu fk mb' and 'winners never quit' is coded as 'dg ve fk'. How is 'never' coded in the given language?

Ans ✗ 1. vc

✗ 2. tu

✓ 3. fk

✗ 4. dg

Question ID : 264330151696

Option 1 ID : 264330594414

Option 2 ID : 264330594411

Option 3 ID : 264330594412

Option 4 ID : 264330594413

Status : Answered

Chosen Option : 3

Q.20 What should come in place of ? in the given series?

175 180 185 190 195 ?

- Ans
- 1. 207
 - 2. 204
 - 3. 201
 - 4. 200

Question ID : 264330151544

Option 1 ID : 264330593805

Option 2 ID : 264330593804

Option 3 ID : 264330593803

Option 4 ID : 264330593806

Status : Answered

Chosen Option : 4

Section : General Awareness

Q.1 Which of the following countries did India beat to win the Men's Hockey Junior Asia Cup 2023?

- Ans
- 1. South Korea
 - 2. Thailand
 - 3. Pakistan
 - 4. Japan

Question ID : 264330161135

Option 1 ID : 264330631872

Option 2 ID : 264330631874

Option 3 ID : 264330631871

Option 4 ID : 264330631873

Status : Answered

Chosen Option : 1

Q.2 In the realm of soil science, humus is considered:

- Ans
- 1. synthetic additive
 - 2. decaying organic matter in soil
 - 3. mineral-rich compound
 - 4. inorganic material

Question ID : 264330161317

Option 1 ID : 264330632598

Option 2 ID : 264330632597

Option 3 ID : 264330632595

Option 4 ID : 264330632596

Status : Answered

Chosen Option : 1

Q.3 Which group of crops belong to fibre crops and are produced on a large scale in India?

- Ans
- 1. Gram and tur
 - 2. Jute and hemp
 - 3. Tea and coffee
 - 4. Wheat and rice

Question ID : 264330160138
Option 1 ID : 264330627892
Option 2 ID : 264330627894
Option 3 ID : 264330627893
Option 4 ID : 264330627891
Status : Answered
Chosen Option : 1

Q.4 Name the life-threatening disease caused by protozoa of the genus Trypanosoma that is transmitted to human hosts through the bite of infected tsetse flies.

- Ans
- 1. Sleeping sickness
 - 2. Chagas disease
 - 3. Giardiasis
 - 4. Kala-azar

Question ID : 264330161077
Option 1 ID : 264330631642
Option 2 ID : 264330631639
Option 3 ID : 264330631640
Option 4 ID : 264330631641
Status : Answered
Chosen Option : 4

Q.5 Who is an acclaimed Kathak dancer with many awards to his credit?

- Ans
- 1. Pandit Shiv Kumar Sharma
 - 2. Ustad Alla Rakha
 - 3. Pandit Birju Maharaj
 - 4. Ustad Bismillah Khan

Question ID : 264330160981
Option 1 ID : 264330631255
Option 2 ID : 264330631257
Option 3 ID : 264330631258
Option 4 ID : 264330631256
Status : Answered
Chosen Option : 3

Q.6 'Pinjar' is a novel by _____.

- Ans
- 1. Kiran Desai
 - 2. Kamala Das
 - 3. Anita Desai
 - 4. Amrita Pritam

Question ID : 264330160969
Option 1 ID : 264330631209
Option 2 ID : 264330631210
Option 3 ID : 264330631208
Option 4 ID : 264330631207
Status : Answered
Chosen Option : 1

Q.7 When was the Asian Games organised in India for the second time?

Ans 1. 1994

2. 1986

3. 1982

4. 1998

Question ID : 264330158237

Option 1 ID : 264330620309

Option 2 ID : 264330620307

Option 3 ID : 264330620308

Option 4 ID : 264330620310

Status : Answered

Chosen Option : 1

Q.8 Who nominates members to the Rajya Sabha based on their excellence in literature, science, art and social service?

Ans 1. The Chief Justice of India

2. The President

3. The Chairman of the Rajya Sabha

4. The Prime Minister

Question ID : 264330161292

Option 1 ID : 264330632498

Option 2 ID : 264330632497

Option 3 ID : 264330632496

Option 4 ID : 264330632495

Status : Answered

Chosen Option : 2

Q.9 Which Indian musician is associated with the Flute?

Ans 1. Pandit Hari Prasad Chaurasia

2. Ustad Zakir Hussain

3. Pandit Ravi Shankar

4. Ustad Allahrakha

Question ID : 264330162231

Option 1 ID : 264330636251

Option 2 ID : 264330636254

Option 3 ID : 264330636253

Option 4 ID : 264330636252

Status : Answered

Chosen Option : 1

Q.10 The black soil area of the _____ is known as the Deccan Trap.

Ans 1. Northern Plains

2. Peninsular Plateau

3. Coastal Plains

4. Himalayan Mountains

Question ID : 264330161524

Option 1 ID : 264330633424

Option 2 ID : 264330633423

Option 3 ID : 264330633426

Option 4 ID : 264330633425

Status : Answered

Chosen Option : 2

Q.11 When did the British East India Company start the 'permanent settlement system'?

Ans 1. 1793 CE

2. 1773 CE

3. 1799 CE

4. 1780 CE

Question ID : 264330162317

Option 1 ID : 264330636597

Option 2 ID : 264330636595

Option 3 ID : 264330636598

Option 4 ID : 264330636596

Status : Answered

Chosen Option : 1

Q.12 The word 'Swaraj' was first used by Dadabhai Naoroji in the Congress session held in which place?

Ans 1. Madras

2. Surat

3. Calcutta

4. Lucknow

Question ID : 264330162327

Option 1 ID : 264330636636

Option 2 ID : 264330636635

Option 3 ID : 264330636638

Option 4 ID : 264330636637

Status : Answered

Chosen Option : 3

Q.13 Chhau, identified by the Ministry of Culture as a classical dance, is prevalent in eastern India and has three distinct forms. Which of the following is NOT one of them?

Ans 1. Seraikela Chhau of Jharkhand

2. Marwahi Chhau of Chhattisgarh

3. Purulia Chhau of West Bengal

4. Mayurbhanj Chhau of Odisha

Question ID : 264330160792

Option 1 ID : 264330630500

Option 2 ID : 264330630502

Option 3 ID : 264330630501

Option 4 ID : 264330630499

Status : Answered

Chosen Option : 2

Q.14 According to the Global Multidimensional Poverty Index 2022, which of the following states is NOT included in 10 poorest states?

Ans 1. Gujarat

2. Assam

3. Odisha

4. Uttar Pradesh

Question ID : 264330161502

Option 1 ID : 264330633337

Option 2 ID : 264330633335

Option 3 ID : 264330633338

Option 4 ID : 264330633336

Status : Answered

Chosen Option : 1

Q.15 Which Clause of Article 19 of the Indian Constitution guarantees the 'right to move freely throughout the territory of India'?

- Ans
- 1. Clause (b)
 - 2. Clause (c)
 - 3. Clause (d)
 - 4. Clause (a)

Question ID : 264330162249
Option 1 ID : 264330636324
Option 2 ID : 264330636325
Option 3 ID : 264330636326
Option 4 ID : 264330636323
Status : Answered
Chosen Option : 2

Q.16 Who among the following was a renowned player of the musical instrument called 'Santoor'?

- Ans
- 1. Pandit Hariprasad Chaurasia
 - 2. Pandit Kumar Gandharva
 - 3. Pandit Shivkumar Sharma
 - 4. Pandit Ravi Shankar

Question ID : 264330155462
Option 1 ID : 264330609253
Option 2 ID : 264330609251
Option 3 ID : 264330609254
Option 4 ID : 264330609252
Status : Answered
Chosen Option : 3

Q.17 The President of India conferred the Padma Shri award to Sanathoiba Sharma for his distinguished service in the field of _____ in 2023.

- Ans
- 1. Mukna
 - 2. Khong Kangjei
 - 3. Thang-Ta
 - 4. Yubi Lakpi

Question ID : 264330161444
Option 1 ID : 264330633105
Option 2 ID : 264330633104
Option 3 ID : 264330633103
Option 4 ID : 264330633106
Status : Answered
Chosen Option : 1

Q.18 Rikham pada dance belongs to which of the following states?

- Ans
- 1. Meghalaya
 - 2. Assam
 - 3. Mizoram
 - 4. Arunachal Pradesh

Question ID : 264330159059
Option 1 ID : 264330623597
Option 2 ID : 264330623596
Option 3 ID : 264330623598
Option 4 ID : 264330623595
Status : Answered
Chosen Option : 1

Q.19 Which theory was published by John Dalton in 1808 to explain chemical reactions?

- Ans
- 1. Atomic theory
 - 2. Valence bond theory
 - 3. Quantum field theory
 - 4. Molecular orbital theory

Question ID : 264330161057
Option 1 ID : 264330631559
Option 2 ID : 264330631561
Option 3 ID : 264330631560
Option 4 ID : 264330631562
Status : Answered
Chosen Option : 1

Q.20 What is the main function of money in an economy?

- Ans
- 1. To regulate interest rates
 - 2. To create wealth
 - 3. To facilitate exchange
 - 4. To control inflation

Question ID : 264330157297
Option 1 ID : 264330616554
Option 2 ID : 264330616552
Option 3 ID : 264330616551
Option 4 ID : 264330616553
Status : Answered
Chosen Option : 3

Q.21 Who among the following designed the India Gate?

- Ans
- 1. Lord Wavell
 - 2. Lord Dalhousie
 - 3. Edwin Lutyens
 - 4. John Nash

Question ID : 264330160773
Option 1 ID : 264330630423
Option 2 ID : 264330630425
Option 3 ID : 264330630424
Option 4 ID : 264330630426
Status : Answered
Chosen Option : 3

Q.22 In 2022, the Centre constituted a committee headed by former Union Agriculture Secretary _____ to look into the issues of minimum support price (MSP).

- Ans
- 1. Sanjay Agrawal
 - 2. P Chandrashekhar
 - 3. Radha Mohan Singh
 - 4. JP Sharma

Question ID : 264330161410
Option 1 ID : 264330632968
Option 2 ID : 264330632969
Option 3 ID : 264330632967
Option 4 ID : 264330632970
Status : Answered
Chosen Option : 1

Q.23 One of the prominent festivals celebrated in _____ is the 'Me-Dum-Me-Phi', i.e., the ancestor worship festival.

- Ans 1. Assam
 2. Nagaland
 3. Manipur
 4. Meghalaya

Question ID : 264330160820
Option 1 ID : 264330630611
Option 2 ID : 264330630613
Option 3 ID : 264330630614
Option 4 ID : 264330630612
Status : Answered
Chosen Option : 2

Q.24 निम्नलिखित में से सरकारी बजट में राजस्व व्यय का उदाहरण कौन-सा है?

- Ans 1. नए राजमार्ग का निर्माण
 2. किसी राज्य-स्वामित्व वाली कंपनी में निवेश
 3. सरकारी कर्मचारियों के वेतन का भुगतान
 4. ऋण का पुनर्भुगतान

Question ID : 264330157275
Option 1 ID : 264330616463
Option 2 ID : 264330616466
Option 3 ID : 264330616464
Option 4 ID : 264330616465
Status : Answered
Chosen Option : 2

Q.25 'The Fall of a Sparrow' is an autobiography of _____.

- Ans 1. Salim Ali
 2. Raj Kapoor
 3. Kapil Dev
 4. Atal Bihari Vajpayee

Question ID : 264330155490
Option 1 ID : 264330609364
Option 2 ID : 264330609366
Option 3 ID : 264330609365
Option 4 ID : 264330609363
Status : Answered
Chosen Option : 1

Section : English Language and Comprehension

Q.1 Select the most appropriate meaning of the given idiom.
Be like chalk and cheese

- Ans 1. To be completely different from each other
 2. To be very similar to each other
 3. To have a close relation with another person
 4. To be distantly related to each other

Question ID : 264330153410
Option 1 ID : 264330601175
Option 2 ID : 264330601176
Option 3 ID : 264330601177
Option 4 ID : 264330601178
Status : Answered
Chosen Option : 3

Q.2 Select the most appropriate ANTONYM of the underlined word.
Everyone liked the lively music being played at the restaurant.

- Ans 1. Durable
 2. Cheerful
 3. Speedy
 4. Sombre

Question ID : 264330153408
Option 1 ID : 264330601168
Option 2 ID : 264330601167
Option 3 ID : 264330601169
Option 4 ID : 264330601170
Status : Answered
Chosen Option : 4

Q.3 Select the INCORRECTLY spelt word.

- Ans 1. Fourty
 2. Committee
 3. Hypnotic
 4. Tennessee

Question ID : 264330153219
Option 1 ID : 264330600435
Option 2 ID : 264330600436
Option 3 ID : 264330600438
Option 4 ID : 264330600437
Status : Answered
Chosen Option : 1

Q.4 Select the option that can be used as a one-word substitute for the underlined segment in the following sentence.
Raymond has opted the study of religion as his major subject in graduation.

- Ans
- 1. Psephology
 - 2. Philology
 - 3. Theology
 - 4. Psychology

Question ID : 264330152715
Option 1 ID : 264330598459
Option 2 ID : 264330598461
Option 3 ID : 264330598462
Option 4 ID : 264330598460
Status : Answered
Chosen Option : 3

Q.5 Select the most appropriate idiom from the given options to fill in the blank.
Greta Thunberg _____ when she dared to question about accountability with respect to global warming and climate change.

- Ans
- 1. sowed wild oats
 - 2. kept the pot boiling
 - 3. gave the devil his due
 - 4. hit the nail on the head

Question ID : 264330152685
Option 1 ID : 264330598346
Option 2 ID : 264330598345
Option 3 ID : 264330598343
Option 4 ID : 264330598344
Status : Answered
Chosen Option : 1

Q.6 Select the most appropriate option that can substitute the underlined segment in the given sentence. If there is no need to substitute it, select 'No substitution required'.
When Rajesh was going to college, he meet with an accident.

- Ans
- 1. has met
 - 2. meets
 - 3. met
 - 4. No substitution required

Question ID : 264330152727
Option 1 ID : 264330598508
Option 2 ID : 264330598507
Option 3 ID : 264330598509
Option 4 ID : 264330598510
Status : Answered
Chosen Option : 3

Q.7 Parts of the following sentence have been underlined and given as options. Select the option that contains an error.

As soon as I shall win the lottery, I hope to buy a Ferrari.

- Ans
- 1. hope
 - 2. As soon as
 - 3. shall win
 - 4. a Ferrari

Question ID : 264330159746
Option 1 ID : 264330626341
Option 2 ID : 264330626339
Option 3 ID : 264330626340
Option 4 ID : 264330626342
Status : Answered
Chosen Option : 1

Q.8 Select the most appropriate option to fill in the blank.

Some things are meant to be, and death is _____ for humans.

- Ans
- 1. edible
 - 2. spiral
 - 3. natural
 - 4. viral

Question ID : 264330153497
Option 1 ID : 264330601506
Option 2 ID : 264330601505
Option 3 ID : 264330601504
Option 4 ID : 264330601503
Status : Answered
Chosen Option : 3

Q.9 Select the option that rectifies the spelling of the underlined word in the given sentence.

They complained that their manager was incompietent and knew nothing about the project.

- Ans
- 1. incompitent
 - 2. incompetteant
 - 3. incomepetent
 - 4. incompetent

Question ID : 264330152837
Option 1 ID : 264330598939
Option 2 ID : 264330598941
Option 3 ID : 264330598942
Option 4 ID : 264330598940
Status : Answered
Chosen Option : 4

Q.10 Select the most appropriate synonym of the given word.
Distinguished

- Ans
- 1. Mirrored
 - 2. Dignified
 - 3. Dramatic
 - 4. Mediocre

Question ID : 264330153558
Option 1 ID : 264330601733
Option 2 ID : 264330601731
Option 3 ID : 264330601732
Option 4 ID : 264330601734
Status : Answered
Chosen Option : 2

Q.11 Select the most appropriate ANTONYM of the given word.
Periodic

- Ans
- 1. Holistic
 - 2. Dynamic
 - 3. Irregular
 - 4. Tedious

Question ID : 264330151913
Option 1 ID : 264330595269
Option 2 ID : 264330595267
Option 3 ID : 264330595270
Option 4 ID : 264330595268
Status : Answered
Chosen Option : 1

Q.12 The following sentence has been split into four segments. Identify the segment that contains an error.
Manisha saw an old elephant / in the wildlife reserve / while she was / on safari tour.

- Ans
- 1. on safari tour
 - 2. Manisha saw an old elephant
 - 3. while she was
 - 4. in the wildlife reserve

Question ID : 264330155316
Option 1 ID : 264330608706
Option 2 ID : 264330608703
Option 3 ID : 264330608705
Option 4 ID : 264330608704
Status : Answered
Chosen Option : 3

Q.13 Parts of the following sentence have been given as options. Select the option that contains an error.
In Nepal, the food is more cheaper than in Sri Lanka.

- Ans**
- 1. more cheaper
 - 2. the food is
 - 3. than in Sri Lanka
 - 4. In Nepal

Question ID : 264330152799
Option 1 ID : 264330598789
Option 2 ID : 264330598788
Option 3 ID : 264330598790
Option 4 ID : 264330598787
Status : Answered
Chosen Option : 1

Q.14 Select the most appropriate option to fill in the blank.
Most times, he is sitting alone, immersed in his own _____.

- Ans**
- 1. synagogue
 - 2. monologue
 - 3. mystagogue
 - 4. prologue

Question ID : 264330153436
Option 1 ID : 264330601267
Option 2 ID : 264330601269
Option 3 ID : 264330601270
Option 4 ID : 264330601268
Status : Answered
Chosen Option : 2

Q.15 Identify the INCORRECTLY spelt word in the following sentence and select its correct spelling from the given options.
He has neither the policies nor the persanol charisma to inspire people.

- Ans**
- 1. cherisma
 - 2. polecies
 - 3. personal
 - 4. niether

Question ID : 264330153109
Option 1 ID : 264330600002
Option 2 ID : 264330600000
Option 3 ID : 264330600001
Option 4 ID : 264330599999
Status : Answered
Chosen Option : 3

Q.16 Select the most appropriate meaning of the underlined idiom.

The judge wanted to hear straight from the horse's mouth.

- Ans
- 1. Directly from the lawyer
 - 2. Directly from the person involved
 - 3. In close vicinity to the juror
 - 4. Having ears which never fail

Question ID : 264330153149
Option 1 ID : 264330600156
Option 2 ID : 264330600155
Option 3 ID : 264330600157
Option 4 ID : 264330600158
Status : Answered
Chosen Option : 2

Q.17 Select the most appropriate option that can substitute the underlined segment in the given sentence. If there is no need to substitute it, select 'No substitution required'.
Virtual reality is the creation of a virtual environment presented to our senses in such a way that we experience it as if we were really there.

- Ans
- 1. presenting to our senses
 - 2. presenting in our senses
 - 3. presents to our senses
 - 4. No substitution required

Question ID : 264330151899
Option 1 ID : 264330595212
Option 2 ID : 264330595213
Option 3 ID : 264330595211
Option 4 ID : 264330595214
Status : Answered
Chosen Option : 1

Q.18 Select the most appropriate idiom from the given options to fill in the blank.
Being a journalist, your first duty is to _____ or else your colleagues might surpass you.

- Ans
- 1. eat a humble pie
 - 2. have an axe to grind
 - 3. build castles in the air
 - 4. keep your ear to the ground

Question ID : 264330152686
Option 1 ID : 264330598348
Option 2 ID : 264330598349
Option 3 ID : 264330598347
Option 4 ID : 264330598350
Status : Answered
Chosen Option : 4

Q.19 The following sentence has been divided into four parts. Identify the part that contains an error.

(A) He will come / (B) and receive you / (C) at the station / (D) when you will arrive.

- Ans
- 1. A
 - 2. B
 - 3. C
 - 4. D

Question ID : 264330152626

Option 1 ID : 264330598108

Option 2 ID : 264330598110

Option 3 ID : 264330598109

Option 4 ID : 264330598107

Status : Answered

Chosen Option : 4

Q.20 The following sentence has been split into four segments. Identify the segment that contains a grammatical error.

She is very good / in playing / the guitar / and singing songs.

- Ans
- 1. in playing
 - 2. and singing songs
 - 3. the guitar
 - 4. She is very good

Question ID : 264330155427

Option 1 ID : 264330609116

Option 2 ID : 264330609118

Option 3 ID : 264330609117

Option 4 ID : 264330609115

Status : Answered

Chosen Option : 3

Comprehension:

In the following passage, some words have been deleted. Read the passage carefully and select the most appropriate option to fill in each blank.

Environmental pollution is a growing (1)_____ all around the world as it poses significant risks to human health and ecosystems. The (2)_____ of environmental pollution vary from natural causes such as volcanic emissions to human actions, including industrialisation, transportation, energy production and agricultural practices. (3)_____ of these activities, pollutants are released into the air, water bodies and soil leading to harmful effects such as respiratory diseases, loss of biodiversity and climate change. One of the primary causes of environmental pollution is human attitudes towards sustainability (4)_____ their lack of environmental awareness. Human activities that harm the environment and ecosystem often result from individual choices (5)_____ driving or using single-use plastics.

SubQuestion No : 21

Q.21 Select the most appropriate option to fill in blank number 1.

- Ans
- 1. interest
 - 2. duty
 - 3. concern
 - 4. charge

Question ID : 264330153398

Option 1 ID : 264330601130

Option 2 ID : 264330601128

Option 3 ID : 264330601129

Option 4 ID : 264330601127

Status : Answered

Chosen Option : 3

Comprehension:

In the following passage, some words have been deleted. Read the passage carefully and select the most appropriate option to fill in each blank.

Environmental pollution is a growing (1)_____ all around the world as it poses significant risks to human health and ecosystems. The (2)_____ of environmental pollution vary from natural causes such as volcanic emissions to human actions, including industrialisation, transportation, energy production and agricultural practices. (3)_____ of these activities, pollutants are released into the air, water bodies and soil leading to harmful effects such as respiratory diseases, loss of biodiversity and climate change. One of the primary causes of environmental pollution is human attitudes towards sustainability (4)_____ their lack of environmental awareness. Human activities that harm the environment and ecosystem often result from individual choices (5)_____ driving or using single-use plastics.

SubQuestion No : 22

Q.22 Select the most appropriate option to fill in blank number 2.

- Ans 1. sourcing
 2. sources
 3. sourced
 4. source

Question ID : 264330153399

Option 1 ID : 264330601132

Option 2 ID : 264330601134

Option 3 ID : 264330601133

Option 4 ID : 264330601131

Status : Answered

Chosen Option : 2

Comprehension:

In the following passage, some words have been deleted. Read the passage carefully and select the most appropriate option to fill in each blank.

Environmental pollution is a growing (1)_____ all around the world as it poses significant risks to human health and ecosystems. The (2)_____ of environmental pollution vary from natural causes such as volcanic emissions to human actions, including industrialisation, transportation, energy production and agricultural practices. (3)_____ of these activities, pollutants are released into the air, water bodies and soil leading to harmful effects such as respiratory diseases, loss of biodiversity and climate change. One of the primary causes of environmental pollution is human attitudes towards sustainability (4)_____ their lack of environmental awareness. Human activities that harm the environment and ecosystem often result from individual choices (5)_____ driving or using single-use plastics.

SubQuestion No : 23

Q.23 Select the most appropriate option to fill in blank number 3.

- Ans 1. Since
 2. However
 3. As a result
 4. Therefore

Question ID : 264330153400

Option 1 ID : 264330601136

Option 2 ID : 264330601138

Option 3 ID : 264330601137

Option 4 ID : 264330601135

Status : Answered

Chosen Option : 3

Comprehension:

In the following passage, some words have been deleted. Read the passage carefully and select the most appropriate option to fill in each blank.

Environmental pollution is a growing (1)_____ all around the world as it poses significant risks to human health and ecosystems. The (2)_____ of environmental pollution vary from natural causes such as volcanic emissions to human actions, including industrialisation, transportation, energy production and agricultural practices. (3)_____ of these activities, pollutants are released into the air, water bodies and soil leading to harmful effects such as respiratory diseases, loss of biodiversity and climate change. One of the primary causes of environmental pollution is human attitudes towards sustainability (4)_____ their lack of environmental awareness. Human activities that harm the environment and ecosystem often result from individual choices (5)_____ driving or using single-use plastics.

SubQuestion No : 24

Q.24 Select the most appropriate option to fill in blank number 4.

- Ans 1. and
 2. since
 3. but
 4. because

Question ID : 264330153401

Option 1 ID : 264330601139

Option 2 ID : 264330601141

Option 3 ID : 264330601140

Option 4 ID : 264330601142

Status : Answered

Chosen Option : 1

Comprehension:

In the following passage, some words have been deleted. Read the passage carefully and select the most appropriate option to fill in each blank.

Environmental pollution is a growing (1)_____ all around the world as it poses significant risks to human health and ecosystems. The (2)_____ of environmental pollution vary from natural causes such as volcanic emissions to human actions, including industrialisation, transportation, energy production and agricultural practices. (3)_____ of these activities, pollutants are released into the air, water bodies and soil leading to harmful effects such as respiratory diseases, loss of biodiversity and climate change. One of the primary causes of environmental pollution is human attitudes towards sustainability (4)_____ their lack of environmental awareness. Human activities that harm the environment and ecosystem often result from individual choices (5)_____ driving or using single-use plastics.

SubQuestion No : 25

Q.25 Select the most appropriate option to fill in blank number 5.

- Ans 1. example
 2. while
 3. like
 4. instance

Question ID : 264330153402

Option 1 ID : 264330601144

Option 2 ID : 264330601143

Option 3 ID : 264330601146

Option 4 ID : 264330601145

Status : Answered

Chosen Option : 3

Multi Tasking Non Technical Staff and Havalдар CBIC and CBN Examination 2023

Roll Number	
Candidate Name	
Venue Name	iON Digital Zone IDZ Powai
Exam Date	08/09/2023
Exam Time	9:00 AM - 11:00 AM
Subject	MTS Non Tech Havalдар CBIC and CBN Examination 2023 Extra Time

Section : Numerical and Mathematical Ability

Q.1 There are 48 students in a class. Their average weight is 48 kg. When one student leaves the class, the average weight reduces by 200 grams. What is the weight of the student who left the class?

- Ans**
- ✓ 1. 57.4 kg
 - ✗ 2. 54.7 kg
 - ✗ 3. 45.7 kg
 - ✗ 4. 47.5 kg

Question ID : 264330156547

Option 1 ID : 264330613578

Option 2 ID : 264330613576

Option 3 ID : 264330613575

Option 4 ID : 264330613577

Status : Answered

Chosen Option : 2

Prepare 50% Faster

Q.2 Following marks are obtained by a student in five subjects.

Subjects	Marks (out of 50)
CS	49
History	41
English	49
Science	44
Social Science	47

What is the percentage of marks scored by the student?

- Ans
- 1. 92.5%
 - 2. 45%
 - 3. 93%
 - 4. 92%

Question ID : 264330156537
Option 1 ID : 264330613536
Option 2 ID : 264330613538
Option 3 ID : 264330613537
Option 4 ID : 264330613535
Status : Answered
Chosen Option : 1

Q.3 Simplify:

$$3\frac{2}{7} + 3\frac{2}{11} \times 3\frac{1}{7} \div 4\frac{1}{3}$$

- Ans
- 1. $7\frac{54}{91}$
 - 2. $9\frac{54}{91}$
 - 3. $5\frac{54}{91}$
 - 4. $3\frac{54}{91}$

Question ID : 264330155721
Option 1 ID : 264330610289
Option 2 ID : 264330610290
Option 3 ID : 264330610288
Option 4 ID : 264330610287
Status : Answered
Chosen Option : 2

Q.4 A deposited ₹62,500 at the rate of 8% per annum compounded half yearly, then what is the compound interest at the end of two years?

- Ans**
- 1. ₹18,161.12
 - 2. ₹12,171.72
 - 3. ₹10,821.18
 - 4. ₹10,616.16

Question ID : 264330154090
Option 1 ID : 264330603825
Option 2 ID : 264330603826
Option 3 ID : 264330603823
Option 4 ID : 264330603824
Status : Answered
Chosen Option : 1

Q.5 A man and woman working on alternate days can finish a work in 15 days if the man works on the first day. The same work is finished in 14.5 days if they work on alternate days and if the woman starts on the first day. The work will be finished by a man alone in ____ days.

- Ans**
- 1. 25
 - 2. 21
 - 3. 15
 - 4. 22

Question ID : 264330153816
Option 1 ID : 264330602730
Option 2 ID : 264330602728
Option 3 ID : 264330602727
Option 4 ID : 264330602729
Status : Answered
Chosen Option : 2

Q.6 If the cost price of 12 mangoes is equal to the selling price of 16 mangoes, then the loss percentage is:

- Ans**
- 1. 25%
 - 2. 4%
 - 3. 20%
 - 4. 33%

Question ID : 264330153871
Option 1 ID : 264330602948
Option 2 ID : 264330602947
Option 3 ID : 264330602949
Option 4 ID : 264330602950
Status : Answered
Chosen Option : 4

Q.7 A boat covers a distance of 65 km downstream in 5 hours while it takes 13 hours to cover the same distance upstream.
What is the speed of the boat in still water?

- Ans**
- 1. 8 km/h
 - 2. 11 km/h
 - 3. 6 km/h
 - 4. 9 km/h

Question ID : 264330154093
Option 1 ID : 264330603838
Option 2 ID : 264330603836
Option 3 ID : 264330603835
Option 4 ID : 264330603837
Status : Answered
Chosen Option : 3

Q.8 There are two varieties of rice. Variety 1 costs ₹100 per kg and variety 2 costs ₹120 per kg. The vendor mixed both the varieties and sold for ₹121 per kg and gained 10%. Find the ratio of variety 1 to variety 2 rice in the mixture.

- Ans**
- 1. 1 : 1
 - 2. 3 : 1
 - 3. 2 : 1
 - 4. 1 : 3

Question ID : 264330153837
Option 1 ID : 264330602812
Option 2 ID : 264330602814
Option 3 ID : 264330602813
Option 4 ID : 264330602811
Status : Answered
Chosen Option : 4

Q.9 The average weight of A, B and C is 43 kg. If the average weight of A and B is 40 kg and that of B and C is 41 kg, then the weight (in kg) of B is?

- Ans**
- 1. 41
 - 2. 43
 - 3. 33
 - 4. 37

Question ID : 264330156509
Option 1 ID : 264330613425
Option 2 ID : 264330613426
Option 3 ID : 264330613423
Option 4 ID : 264330613424
Status : Answered
Chosen Option : 1

Q.10 Vinita obtained an amount of ₹23,340 as simple interest on a certain amount at 15% per annum after 8 years. What was the amount invested by Vinita?

- Ans**
- 1. ₹20,450
 - 2. ₹18,650
 - 3. ₹17,490
 - 4. ₹19,450

Question ID : 264330156187
Option 1 ID : 264330612150
Option 2 ID : 264330612148
Option 3 ID : 264330612147
Option 4 ID : 264330612149
Status : Answered
Chosen Option : 4

Q.11 The largest three-digit number which gives the same remainder 2 when divided by 3, 5 and 9 is _____.

- Ans**
- 1. 980
 - 2. 992
 - 3. 995
 - 4. 990

Question ID : 264330156249
Option 1 ID : 264330612398
Option 2 ID : 264330612395
Option 3 ID : 264330612397
Option 4 ID : 264330612396
Status : Answered
Chosen Option : 2

Q.12 Consider the sales of a company in the year 2019, 2020, 2021 and 2022 given in the pie chart.



The difference in angles at the centre by sales in 2022 and 2019 is _____ degrees.

- Ans**
- 1. 50
 - 2. 80
 - 3. 60
 - 4. 70

Question ID : 264330153822
Option 1 ID : 264330602751
Option 2 ID : 264330602754
Option 3 ID : 264330602752
Option 4 ID : 264330602753
Status : Answered
Chosen Option : 2

Q.13 A can complete a piece of work in 20 days. B can complete the same work in 36 days. If A and B work together, then the number of days required to complete the work is:

- Ans
- 1. $10\frac{6}{7}$
 - 2. $12\frac{6}{7}$
 - 3. $12\frac{1}{7}$
 - 4. $10\frac{1}{7}$

Question ID : 264330156492
Option 1 ID : 264330613355
Option 2 ID : 264330613358
Option 3 ID : 264330613356
Option 4 ID : 264330613357
Status : Answered
Chosen Option : 3

Q.14 What is the fourth proportional to 816, 226, 408?

- Ans
- 1. 108
 - 2. 103
 - 3. 113
 - 4. 117

Question ID : 264330154086
Option 1 ID : 264330603807
Option 2 ID : 264330603809
Option 3 ID : 264330603810
Option 4 ID : 264330603808
Status : Answered
Chosen Option : 1

Q.15 If the price of a product is decreased by 50%, then increased by 50% and then again increased by 50%, what is the net increase percentage in the price?

- Ans
- 1. 13.5%
 - 2. 11.5%
 - 3. 12.5%
 - 4. 9.5%

Question ID : 264330156516
Option 1 ID : 264330613453
Option 2 ID : 264330613451
Option 3 ID : 264330613454
Option 4 ID : 264330613452
Status : Answered
Chosen Option : 3

Q.16 The marks scored by a student are directly proportional to the time invested in studies. If the student gets 60 marks when he studies 4 hours a day, then how many hours he should use in his studies daily to get 75 marks?

- Ans
- 1. 4.5
 - 2. 5
 - 3. 5.5
 - 4. 6

Question ID : 264330153810
Option 1 ID : 264330602703
Option 2 ID : 264330602705
Option 3 ID : 264330602704
Option 4 ID : 264330602706
Status : Answered
Chosen Option : 2

Q.17 The distance covered (in km) by a bus in 55 minutes at a speed of 69 km/h is:

- Ans
- 1. 67.75
 - 2. 63.25
 - 3. 65.25
 - 4. 60.75

Question ID : 264330156488
Option 1 ID : 264330613341
Option 2 ID : 264330613342
Option 3 ID : 264330613339
Option 4 ID : 264330613340
Status : Answered
Chosen Option : 1

Q.18 The cost price of an item is ₹4,850. What is the profit percentage (rounded off to 1 decimal place) if it is sold at ₹6,680?

- Ans
- 1. 44.6%
 - 2. 37.7%
 - 3. 39.5%
 - 4. 35.5%

Question ID : 264330163010
Option 1 ID : 264330639356
Option 2 ID : 264330639358
Option 3 ID : 264330639357
Option 4 ID : 264330639355
Status : Answered
Chosen Option : 2

Q.19 The radius of a cone is 10.5 cm and the area of the curved surface is 396 cm^2 . Find it's slant height.

Take $\pi = \frac{22}{7}$

- Ans**
- 1. 9 cm
 - 2. 11.5 cm
 - 3. 12 cm
 - 4. 8.5 cm

Question ID : 264330156371
 Option 1 ID : 264330612884
 Option 2 ID : 264330612885
 Option 3 ID : 264330612886
 Option 4 ID : 264330612883
 Status : Answered
 Chosen Option : 2

Q.20 Find the volume of a cuboid whose dimensions are 12.2 cm, 16 cm and 8.5 cm.

- Ans**
- 1. 3072 cm^3
 - 2. 1659.2 cm^3
 - 3. 832 cm^3
 - 4. 1664 cm^3

Question ID : 264330156087
 Option 1 ID : 264330611749
 Option 2 ID : 264330611748
 Option 3 ID : 264330611747
 Option 4 ID : 264330611750
 Status : Answered
 Chosen Option : 4

Section : Reasoning Ability and Problem Solving

Q.1 What should come in place of ? in the given series based on the English alphabetical order?

ICU, FAT, CYS, ZWR, ?

- Ans**
- 1. VTR
 - 2. VST
 - 3. WVS
 - 4. WUQ

Question ID : 264330155778
 Option 1 ID : 264330610517
 Option 2 ID : 264330610516
 Option 3 ID : 264330610515
 Option 4 ID : 264330610518
 Status : Answered
 Chosen Option : 4

Q.2 In a certain code language, 'YOU' is coded as '20' and 'LIP' is coded as '44'. What is the code for 'ROB' in the given code language?

- Ans**
- 1. 44
 - 2. 46
 - 3. 41
 - 4. 42

Question ID : 264330155820
Option 1 ID : 264330610683
Option 2 ID : 264330610684
Option 3 ID : 264330610686
Option 4 ID : 264330610685
Status : Answered
Chosen Option : 2

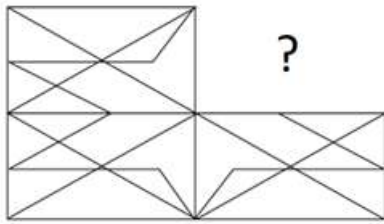
Q.3 In the following number-pairs, the second number is obtained by applying certain mathematical operations to the first number. Select the set in which the numbers are related in the same way as are the numbers of the following sets.
(NOTE: Operations should be performed on the whole numbers, without breaking down the numbers into its constituent digits. E.g. 13 – Operations on 13 such as adding / subtracting / multiplying etc. to 13 can be performed. Breaking down 13 into 1 and 3 and then performing mathematical operations on 1 and 3 is not allowed)

7, 13
18, 35

- Ans**
- 1. 77, 98
 - 2. 22, 43
 - 3. 32, 64
 - 4. 44, 76

Question ID : 264330151624
Option 1 ID : 264330594126
Option 2 ID : 264330594123
Option 3 ID : 264330594124
Option 4 ID : 264330594125
Status : Answered
Chosen Option : 2

Q.4 Identify the figure that completes the pattern (rotation is NOT allowed).



Ans

✓ 1.



✗ 2.



✗ 3.



✗ 4.



Question ID : 264330154519
 Option 1 ID : 264330605541
 Option 2 ID : 264330605540
 Option 3 ID : 264330605539
 Option 4 ID : 264330605542
 Status : Answered
 Chosen Option : 1

Q.5 What should come in place of ? in the given series based on the English alphabetical order?

TEO, RCM, PAK, NYI, ?

Ans

✗ 1. KVH

✗ 2. KUH

✗ 3. LVG

✓ 4. LWG

Question ID : 264330155769
 Option 1 ID : 264330610481
 Option 2 ID : 264330610480
 Option 3 ID : 264330610479
 Option 4 ID : 264330610482
 Status : Answered
 Chosen Option : 4

Q.6 Which figure should replace the question mark (?) if the following figure series were to be continued?

K	R	4	2									
R	S	A	Q	4	S	2	K	A	R	S	K	?
Q	4	K	A	R	S	4	A					

Ans

✗ 1.

A		
G	R	S
2		4

✗ 2.

4		
G	2	A
S		K

✓ 3.

S		
G	4	A
2		K

✗ 4.

4		
G	A	S
2		K

Question ID : 264330154759

Option 1 ID : 264330606500

Option 2 ID : 264330606501

Option 3 ID : 264330606499

Option 4 ID : 264330606502

Status : Answered

Chosen Option : 4

Q.7 If G means '-'; C means '*'; D means '+'; B means '+', then what will come in place of the question mark (?) in the following equation?

$$13 C 8 G 45 B 22 D 2 = ?$$

Ans ✗ 1. 78

✗ 2. 62

✓ 3. 70

✗ 4. 55

Question ID : 264330154682

Option 1 ID : 264330606194

Option 2 ID : 264330606192

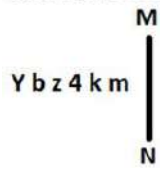
Option 3 ID : 264330606193

Option 4 ID : 264330606191

Status : Answered

Chosen Option : 3

Q.8 Select the correct mirror image of the given figure when the mirror is placed at MN as shown below.



- Ans
- 1. m k P z q A
 - 2. m k P z b Y
 - 3. w k 4 z d Y
 - 4. m k P z d Y

Question ID : 264330151513

Option 1 ID : 264330593682

Option 2 ID : 264330593681

Option 3 ID : 264330593679

Option 4 ID : 264330593680

Status : Answered

Chosen Option : 4

Q.9 Select the word-pair that best represents a similar relationship to the one expressed in the pair of words given below.

(The words must be considered as meaningful English words and must not be related to each other based on the number of letters/number of consonants/vowels in the word)

Cricket : Pitch

- Ans
- 1. Wrestling : Track
 - 2. Ship : Dock
 - 3. Boxing : Ring
 - 4. Boat : Harbour

Question ID : 264330154633

Option 1 ID : 264330605998

Option 2 ID : 264330605995

Option 3 ID : 264330605997

Option 4 ID : 264330605996

Status : Answered

Chosen Option : 3

Q.10 The position of how many letters will remain unchanged if each of the letter in the word 'POCKET' is arranged in alphabetical order?

- Ans
- 1. Two
 - 2. Five
 - 3. Three
 - 4. One

Question ID : 264330154322

Option 1 ID : 264330604752

Option 2 ID : 264330604754

Option 3 ID : 264330604753

Option 4 ID : 264330604751

Status : Answered

Chosen Option : 2

Q.11 What should come in place of ? in the given series?

73 75 77 79 81 ?

- Ans
- 1. 82
 - 2. 83
 - 3. 85
 - 4. 84

Question ID : 264330151540
 Option 1 ID : 264330593787
 Option 2 ID : 264330593788
 Option 3 ID : 264330593790
 Option 4 ID : 264330593789
 Status : Answered
 Chosen Option : 2

Q.12 Seven people, U, M, K, G, B, R and D are sitting in a straight line, facing south. Only two people sit to the left of B. M sits third to the right of G. U is the immediate neighbour of M and B. D sits to the immediate left of K.

Total how many people sit between D and G?

- Ans
- 1. Two
 - 2. Three
 - 3. One
 - 4. Four

Question ID : 264330161695
 Option 1 ID : 264330634108
 Option 2 ID : 264330634109
 Option 3 ID : 264330634107
 Option 4 ID : 264330634110
 Status : Answered
 Chosen Option : 2

Q.13 What should come in place of ? in the given series based on the English alphabetical order?

GUN, DWM, AYL, XAK, ?

- Ans
- 1. VCI
 - 2. VBH
 - 3. UCJ
 - 4. UBI

Question ID : 264330155805
 Option 1 ID : 264330610625
 Option 2 ID : 264330610623
 Option 3 ID : 264330610624
 Option 4 ID : 264330610626
 Status : Answered
 Chosen Option : 3

Q.14 In a certain code language, 'ATOM' is coded as '9613' and 'BOAT' is coded as '1938'. What is the code for 'B' in the given code language?

- Ans**
- 1. 9
 - 2. 8
 - 3. 3
 - 4. 1

Question ID : 264330151705
Option 1 ID : 264330594449
Option 2 ID : 264330594448
Option 3 ID : 264330594447
Option 4 ID : 264330594450
Status : Answered
Chosen Option : 2

Q.15 Read the given statements and conclusions carefully. You have to take the given statements to be true even if they seem to be at variance from commonly known facts. You have to decide which conclusion/s logically follow/s from the given statements.

Statements: All people are tall. Some tall are buildings. No buildings are clocks.

Conclusion I: Some people are buildings.

Conclusion II: No clocks are buildings.

- Ans**
- 1. Only conclusion (II) is follow.
 - 2. Neither conclusion (I) nor (II) is follow.
 - 3. Both conclusions (I) and (II) are follow.
 - 4. Only conclusion (I) is follow.

Question ID : 264330155920
Option 1 ID : 264330611084
Option 2 ID : 264330611085
Option 3 ID : 264330611086
Option 4 ID : 264330611083
Status : Answered
Chosen Option : 1

Q.16 If 'I' stands for '+', 'J' stands for '×', 'K' stands for '÷' and 'L' stands for '-', what will come in place of the question mark (?) in the following equation?
119 I (7 J 3) L (50 K 5) L 45 = ?

- Ans**
- 1. 85
 - 2. 80
 - 3. 75
 - 4. 70

Question ID : 264330151804
Option 1 ID : 264330594844
Option 2 ID : 264330594843
Option 3 ID : 264330594846
Option 4 ID : 264330594845
Status : Answered
Chosen Option : 3

Q.17 In the following number-pairs, the second number is obtained by applying certain mathematical operations to the first number. Select the set in which the numbers are related in the same way as are the numbers of the following sets.

53, 90

79, 116

(NOTE: Operations should be performed on the whole numbers, without breaking down the numbers into its constituent digits. E.g. 13 – Operations on 13 such as adding / subtracting / multiplying etc. to 13 can be performed. Breaking down 13 into 1 and 3 and then performing mathematical operations on 1 and 3 is not allowed)

- Ans**
- ✓ 1. 47, 84
 - ✗ 2. 31, 94
 - ✗ 3. 59, 98
 - ✗ 4. 42, 59

Question ID : 264330154501

Option 1 ID : 264330605470

Option 2 ID : 264330605467

Option 3 ID : 264330605469

Option 4 ID : 264330605468

Status : Answered

Chosen Option : 1

Q.18 What should come in place of '?' in the given series?

11 32 74 158 326 ?

- Ans**
- ✓ 1. 662
 - ✗ 2. 674
 - ✗ 3. 625
 - ✗ 4. 648

Question ID : 264330151474

Option 1 ID : 264330593525

Option 2 ID : 264330593526

Option 3 ID : 264330593523

Option 4 ID : 264330593524

Status : Answered

Chosen Option : 1

Q.19 Read the given statements and conclusions carefully. You have to take the given statements to be true even if they seem to be at variance from commonly known facts. You have to decide which conclusion/s logically follow/s from the given statements.

Statements: Some combs are wood. Some wood are tables. Some tables are plastic.

Conclusion I: Some wood are combs.

Conclusion II: All plastic are tables.

- Ans**
- ✗ 1. Only conclusion (II) is follow.
 - ✗ 2. Both conclusions (I) and (II) are follow.
 - ✓ 3. Only conclusion (I) is follow.
 - ✗ 4. Neither conclusion (I) nor (II) is follow.

Question ID : 264330155901

Option 1 ID : 264330611008

Option 2 ID : 264330611010

Option 3 ID : 264330611007

Option 4 ID : 264330611009

Status : Answered

Chosen Option : 3

Q.20 What should come in place of ? in the given series?

23 28 38 53 73 ?

- Ans
- 1. 95
 - 2. 91
 - 3. 101
 - 4. 98

Question ID : 264330151713
Option 1 ID : 264330594480
Option 2 ID : 264330594482
Option 3 ID : 264330594479
Option 4 ID : 264330594481
Status : Answered
Chosen Option : 4

Section : General Awareness

Q.1 Which Indian Mass Movement began with the famous 'Dandi March' of Mahatma Gandhi?

- Ans
- 1. Civil Disobedience Movement
 - 2. Non-Cooperation Movement
 - 3. Quit India Movement
 - 4. Kheda Movement

Question ID : 264330162326
Option 1 ID : 264330636633
Option 2 ID : 264330636632
Option 3 ID : 264330636631
Option 4 ID : 264330636634
Status : Answered
Chosen Option : 1

Q.2 Whose autobiography is titled 'An Unsuitable Boy'?

- Ans
- 1. Karan Johar
 - 2. Aditya Chopra
 - 3. Hansal Mehta
 - 4. Sanjay Kapoor

Question ID : 264330155448
Option 1 ID : 264330609197
Option 2 ID : 264330609195
Option 3 ID : 264330609196
Option 4 ID : 264330609198
Status : Not Answered
Chosen Option : --

Q.3 The length of the men's kabaddi court is _____ metres.

Ans 1. 10

2. 13

3. 17

4. 15

Question ID : 264330158245

Option 1 ID : 264330620339

Option 2 ID : 264330620340

Option 3 ID : 264330620342

Option 4 ID : 264330620341

Status : Not Answered

Chosen Option : --

Q.4 Who among the following is the author of the book 'The Zoya factor'?

Ans 1. Kiran Desai

2. Sudha Murty

3. Anuja Chauhan

4. Nandini Bajpai

Question ID : 264330155458

Option 1 ID : 264330609235

Option 2 ID : 264330609236

Option 3 ID : 264330609238

Option 4 ID : 264330609237

Status : Answered

Chosen Option : 2

Q.5 Who among the following has NOT received the Sangeet Natak Akademi Award-2021 (given in February 2023) for his/her contribution in dance ?

Ans 1. Neena Prasad

2. Sumitra Guha

3. Jayalakshmi Eshwar

4. Thokchom Ibemubi Devi

Question ID : 264330157837

Option 1 ID : 264330618708

Option 2 ID : 264330618710

Option 3 ID : 264330618707

Option 4 ID : 264330618709

Status : Not Answered

Chosen Option : --

Q.6 Which of the following is NOT a Directive Principle based on the ideals of Mahatma Gandhi?

- Ans
- 1. To promote industrialisation in urban areas
 - 2. To organise village Panchayats
 - 3. To prohibit intoxicating drinks and drugs that are injurious to health
 - 4. To promote cottage industries in rural areas

Question ID : 264330162251
Option 1 ID : 264330636334
Option 2 ID : 264330636331
Option 3 ID : 264330636333
Option 4 ID : 264330636332
Status : Answered
Chosen Option : 3

Q.7 Which of the following methods is used to calculate national income by summing up the total incomes earned by individuals and businesses in an economy?

- Ans
- 1. Value-added method
 - 2. Output method
 - 3. Income method
 - 4. Expenditure method

Question ID : 264330157315
Option 1 ID : 264330616626
Option 2 ID : 264330616625
Option 3 ID : 264330616623
Option 4 ID : 264330616624
Status : Answered
Chosen Option : 2

Q.8 What is personal income?

- Ans
- 1. The income earned by individuals and households after taxes and other deductions
 - 2. The total income earned by businesses and corporations in an economy
 - 3. The income earned by individuals through their own business or self-employment
 - 4. The total income earned by individuals and households before taxes and other deductions

Question ID : 264330157318
Option 1 ID : 264330616637
Option 2 ID : 264330616635
Option 3 ID : 264330616638
Option 4 ID : 264330616636
Status : Answered
Chosen Option : 1

Q.9 Who founded the Hindu reform organisation Brahmo Samaj?

- Ans
- 1. Ramkrishna Paramhans
 - 2. Rabindranath Tagore
 - 3. Atmaram Pandurang
 - 4. Raja Ram Mohan Roy

Question ID : 264330161745
Option 1 ID : 264330634307
Option 2 ID : 264330634309
Option 3 ID : 264330634310
Option 4 ID : 264330634308
Status : Answered
Chosen Option : 4

Q.10 Whom among the following Indian singers is known as 'Gazal King'?

- Ans
- 1. Manna Dey
 - 2. Mukesh
 - 3. Shailendra
 - 4. Jagjit Singh

Question ID : 264330162232
Option 1 ID : 264330636256
Option 2 ID : 264330636255
Option 3 ID : 264330636257
Option 4 ID : 264330636258
Status : Answered
Chosen Option : 3

Q.11 Dree Utsav is celebrated in the state of _____.

- Ans
- 1. Arunachal Pradesh
 - 2. Kerala
 - 3. Assam
 - 4. Andhra Pradesh

Question ID : 264330159082
Option 1 ID : 264330623689
Option 2 ID : 264330623690
Option 3 ID : 264330623688
Option 4 ID : 264330623687
Status : Answered
Chosen Option : 1

Q.12 _____ word of Indian dance is derived from a Sanskrit word and literally means 'taking towards'.

- Ans
- 1. Nritta
 - 2. Laasya
 - 3. Taandava
 - 4. Abhinaya

Question ID : 264330159047
Option 1 ID : 264330623549
Option 2 ID : 264330623547
Option 3 ID : 264330623550
Option 4 ID : 264330623548
Status : Answered
Chosen Option : 1

Q.13 Which of the following is an example of the Western Coast Port?

- Ans
- 1. Tuticorin Port
 - 2. Paradip Port
 - 3. Mumbai Port
 - 4. Vishakhapatnam Port

Question ID : 264330160139
Option 1 ID : 264330627897
Option 2 ID : 264330627896
Option 3 ID : 264330627898
Option 4 ID : 264330627895
Status : Answered
Chosen Option : 3

Q.14 What are the three tiers of the Government in India?

- Ans
- 1. Union government, Judiciary government and Federal government
 - 2. Union government, State Government and Federal Government
 - 3. Union government, State government and Judiciary government
 - 4. Union Government, State Government and Local Government

Question ID : 264330161290
Option 1 ID : 264330632488
Option 2 ID : 264330632490
Option 3 ID : 264330632487
Option 4 ID : 264330632489
Status : Answered
Chosen Option : 4

Q.15 The foundation of Sanchi Stupa was laid by which of the following Kings?

- Ans
- 1. Samudragupta
 - 2. Bimbisara
 - 3. Ashoka
 - 4. Chandragupta Maurya

Question ID : 264330160758
Option 1 ID : 264330630365
Option 2 ID : 264330630363
Option 3 ID : 264330630366
Option 4 ID : 264330630364
Status : Answered
Chosen Option : 3

Q.16 During which months do retreating monsoons occur in India?

- Ans
- 1. January and February
 - 2. May and June
 - 3. October and November
 - 4. March and April

Question ID : 264330160147
Option 1 ID : 264330627930
Option 2 ID : 264330627928
Option 3 ID : 264330627927
Option 4 ID : 264330627929
Status : Answered
Chosen Option : 3

Q.17 Which is the primary structural component responsible for most of the mechanical strength of the cell wall?

- Ans
- 1. Heparin
 - 2. Glycogen
 - 3. Chitin
 - 4. Cellulose

Question ID : 264330161082
Option 1 ID : 264330631662
Option 2 ID : 264330631660
Option 3 ID : 264330631661
Option 4 ID : 264330631659
Status : Answered
Chosen Option : 4

Q.18 Ball and spring model of chemical bonds obey:

- Ans 1. Hooke's law
 2. Charles' law
 3. gravitational law
 4. Newton's law

Question ID : 264330156586
Option 1 ID : 264330613734
Option 2 ID : 264330613732
Option 3 ID : 264330613731
Option 4 ID : 264330613733
Status : Answered
Chosen Option : 2

Q.19 Pandit Janki Prasad was associated with which of the following Gharanas of Kathak?

- Ans 1. Banaras
 2. Raigarh
 3. Jaipur
 4. Lucknow

Question ID : 264330160809
Option 1 ID : 264330630569
Option 2 ID : 264330630570
Option 3 ID : 264330630567
Option 4 ID : 264330630568
Status : Answered
Chosen Option : 4

Q.20 In 2023, Ajay Singh, the chief of SpiceJet was appointed as president of which of the following?

- Ans 1. FICCI
 2. ASSOCHAM
 3. CII
 4. NASSCOM

Question ID : 264330158348
Option 1 ID : 264330620751
Option 2 ID : 264330620752
Option 3 ID : 264330620753
Option 4 ID : 264330620754
Status : Answered
Chosen Option : 1

Q.21 Rohit Sharma became the first ever Indian to play how many T20 cricket matches in October 2022?

- Ans 1. 300
 2. 100
 3. 200
 4. 400

Question ID : 264330158361
Option 1 ID : 264330620805
Option 2 ID : 264330620803
Option 3 ID : 264330620804
Option 4 ID : 264330620806
Status : Answered
Chosen Option : 1

Q.22 Which form of Indian dance is said to be 'soft and suitable for female presentation'?

- Ans
- 1. Nritta
 - 2. Taandava
 - 3. Laasya
 - 4. Nritya

Question ID : 264330161891
Option 1 ID : 264330634892
Option 2 ID : 264330634893
Option 3 ID : 264330634894
Option 4 ID : 264330634891
Status : Answered
Chosen Option : 3

Q.23 Which of the following oceans is surrounded by the continent of North America and South America to the east?

- Ans
- 1. Pacific Ocean
 - 2. Atlantic Ocean
 - 3. Indian Ocean
 - 4. Arctic Ocean

Question ID : 264330161323
Option 1 ID : 264330632620
Option 2 ID : 264330632622
Option 3 ID : 264330632619
Option 4 ID : 264330632621
Status : Answered
Chosen Option : 2

Q.24 The famous 'Pashupatinath Temple' is located in which country from the following?

- Ans
- 1. Nepal
 - 2. Bhutan
 - 3. Maldives
 - 4. Sri Lanka

Question ID : 264330161561
Option 1 ID : 264330633574
Option 2 ID : 264330633571
Option 3 ID : 264330633573
Option 4 ID : 264330633572
Status : Answered
Chosen Option : 1

Q.25 In which of the following years was the first Janjatiya Khel Mahotsav held?

- Ans
- 1. 2023
 - 2. 2021
 - 3. 2020
 - 4. 2022

Question ID : 264330161142
Option 1 ID : 264330631900
Option 2 ID : 264330631901
Option 3 ID : 264330631902
Option 4 ID : 264330631899
Status : Answered
Chosen Option : 1

Q.1 Select the option that can be used as a one-word substitute for the given group of words.

One who does not believe in the existence of God

- Ans
- 1. Atheist
 - 2. Priest
 - 3. Monk
 - 4. Believer

Question ID : 264330153404
Option 1 ID : 264330601152
Option 2 ID : 264330601153
Option 3 ID : 264330601151
Option 4 ID : 264330601154
Status : Answered
Chosen Option : 1

Q.2 Select the most appropriate option that can rectify the underlined segment in the given sentence. If there is no need to rectify it, select 'no rectification needed'.

You are the beautiful woman I have ever seen.

- Ans
- 1. no rectification needed
 - 2. more beautiful
 - 3. beauty
 - 4. most beautiful

Question ID : 264330153465
Option 1 ID : 264330601378
Option 2 ID : 264330601377
Option 3 ID : 264330601375
Option 4 ID : 264330601376
Status : Answered
Chosen Option : 4

Q.3 Choose the option which best expresses the meaning of the given idiom.

By fair means or foul

- Ans
- 1. To work without planning
 - 2. To find difficulty in completing some work
 - 3. To get one's way with honesty or dishonesty
 - 4. To provoke someone into quarrelling

Question ID : 264330153347
Option 1 ID : 264330600939
Option 2 ID : 264330600941
Option 3 ID : 264330600940
Option 4 ID : 264330600942
Status : Answered
Chosen Option : 3

Q.4 The following sentence has been split into four segments. Identify the segment that contains a grammatical error.
My younger daughter, / Kanu prefer / dark chocolate / to yoghurt.

- Ans**
- 1. dark chocolate
 - 2. My younger daughter
 - 3. Kanu prefer
 - 4. to yoghurt

Question ID : 264330147603
Option 1 ID : 264330578633
Option 2 ID : 264330578631
Option 3 ID : 264330578632
Option 4 ID : 264330578634
Status : Answered
Chosen Option : 2

Q.5 Choose the sentence that contains an error.

- Ans**
- 1. I saw a movie that was directed by Steven Spielberg.
 - 2. She is the only person who can solve this difficult math problem.
 - 3. He is an lawyer who works for a prestigious law firm.
 - 4. The Great Wall of China is a popular tourist attraction.

Question ID : 264330155179
Option 1 ID : 264330608176
Option 2 ID : 264330608177
Option 3 ID : 264330608178
Option 4 ID : 264330608175
Status : Answered
Chosen Option : 2

Q.6 Parts of the following sentence have been given as options. Select the option that contains an error.
Ishita will playing Tennis for her favourite team.

- Ans**
- 1. will playing
 - 2. Tennis for
 - 3. her favourite team
 - 4. Ishita

Question ID : 264330152816
Option 1 ID : 264330598856
Option 2 ID : 264330598857
Option 3 ID : 264330598858
Option 4 ID : 264330598855
Status : Answered
Chosen Option : 1

Q.7 Select the most appropriate option that can substitute the underlined segment in the given sentence.

He apologised in her silently before he pushed deeper into her thoughts.

- Ans
- 1. apologise in her
 - 2. apologised with her
 - 3. apologised of her
 - 4. apologised to her

Question ID : 264330153476
Option 1 ID : 264330601421
Option 2 ID : 264330601420
Option 3 ID : 264330601419
Option 4 ID : 264330601422
Status : Answered
Chosen Option : 4

Q.8 Select the correctly spelt word.

- Ans
- 1. Bihavior
 - 2. Behavier
 - 3. Behaviour
 - 4. Behaveor

Question ID : 264330153412
Option 1 ID : 264330601183
Option 2 ID : 264330601186
Option 3 ID : 264330601185
Option 4 ID : 264330601184
Status : Answered
Chosen Option : 3

Q.9 Select the most appropriate synonym of the given word.
Obvious

- Ans
- 1. Clear
 - 2. Murky
 - 3. Ambiguous
 - 4. Opaque

Question ID : 264330151825
Option 1 ID : 264330594930
Option 2 ID : 264330594928
Option 3 ID : 264330594929
Option 4 ID : 264330594927
Status : Answered
Chosen Option : 1

Q.10 Select the most appropriate meaning of the given idiom.
As phony as a three-dollar bill

- Ans
- 1. Something that is attractive
 - 2. Something that is genuine
 - 3. Something that is disgusting
 - 4. Something that is fake

Question ID : 264330153439
Option 1 ID : 264330601280
Option 2 ID : 264330601279
Option 3 ID : 264330601282
Option 4 ID : 264330601281
Status : Answered
Chosen Option : 1

Q.11 Select the most appropriate option to fill in the blank.

They are going to give me a lovely present, but I cannot ____ what it will be.

- Ans
- 1. give
 - 2. gist
 - 3. guess
 - 4. guest

Question ID : 264330153496
Option 1 ID : 264330601502
Option 2 ID : 264330601501
Option 3 ID : 264330601500
Option 4 ID : 264330601499
Status : Answered
Chosen Option : 3

Q.12 Select the INCORRECTLY spelt word.

- Ans
- 1. Important
 - 2. Maintanance
 - 3. Friend
 - 4. Rhythm

Question ID : 264330152643
Option 1 ID : 264330598177
Option 2 ID : 264330598176
Option 3 ID : 264330598178
Option 4 ID : 264330598175
Status : Answered
Chosen Option : 2

Q.13 Select the most appropriate synonym of the given word.
Determined

- Ans
- 1. Flexible
 - 2. Famous
 - 3. Decisive
 - 4. Elevated

Question ID : 264330151919
Option 1 ID : 264330595291
Option 2 ID : 264330595293
Option 3 ID : 264330595294
Option 4 ID : 264330595292
Status : Not Answered
Chosen Option : --

Q.14 Select the most appropriate synonym of the underlined word.
Ray was cynical about love.

- Ans
- 1. prolific
 - 2. obese
 - 3. trusting
 - 4. pessimistic

Question ID : 264330153520
Option 1 ID : 264330601594
Option 2 ID : 264330601593
Option 3 ID : 264330601592
Option 4 ID : 264330601591
Status : Answered
Chosen Option : 4

Q.15 Select the option that rectifies the spelling of the underlined word in the given sentence.

The company sent out a questionaire to its employees to gather feedback on their work environment.

- Ans
- 1. questioneire
 - 2. questionnaire
 - 3. questionnre
 - 4. questionaiare

Question ID : 264330153229
Option 1 ID : 264330600478
Option 2 ID : 264330600476
Option 3 ID : 264330600475
Option 4 ID : 264330600477
Status : Answered
Chosen Option : 2

Q.16 Select the option that can be used as a one-word substitute for the given group of words.

A person who feeds on human flesh

- Ans
- 1. Cannibal
 - 2. Carnivore
 - 3. Nudge
 - 4. Omnivore

Question ID : 264330153405

Option 1 ID : 264330601157

Option 2 ID : 264330601155

Option 3 ID : 264330601156

Option 4 ID : 264330601158

Status : Answered

Chosen Option : 2

Q.17 Select the most appropriate option that can substitute the underlined segment in the given sentence. If there is no need to substitute it, select 'No substitution required'.
Larger emissions of greenhouse gases lead to higher concentrations in the atmosphere.

- Ans
- 1. leaded to higher concentrations
 - 2. have lead to higher concentrations
 - 3. is lead to higher concentrations
 - 4. No substitution required

Question ID : 264330151898

Option 1 ID : 264330595207

Option 2 ID : 264330595208

Option 3 ID : 264330595209

Option 4 ID : 264330595210

Status : Answered

Chosen Option : 4

Q.18 Select the most appropriate meaning of the underlined idiom.
Ramesh always blows his own trumpet.

- Ans
- 1. praises himself
 - 2. criticises himself
 - 3. does his own work
 - 4. depends on others

Question ID : 264330152752

Option 1 ID : 264330598607

Option 2 ID : 264330598608

Option 3 ID : 264330598609

Option 4 ID : 264330598610

Status : Answered

Chosen Option : 1

Q.19 Select the most appropriate meaning of the underlined idiom.
He was on cloud nine when he got admission in Cambridge University.

- Ans
- 1. involved in useless journey
 - 2. very happy
 - 3. unsettled
 - 4. available to be called to go to work

Question ID : 264330153642
Option 1 ID : 264330602042
Option 2 ID : 264330602039
Option 3 ID : 264330602041
Option 4 ID : 264330602040
Status : Answered
Chosen Option : 2

Q.20 Select the option that can be used as a one-word substitute for the given group of words.

An examination of a body after death

- Ans
- 1. Post room
 - 2. Post death
 - 3. Post partum
 - 4. Post mortem

Question ID : 264330152588
Option 1 ID : 264330597958
Option 2 ID : 264330597956
Option 3 ID : 264330597955
Option 4 ID : 264330597957
Status : Answered
Chosen Option : 4

Comprehension:

In the following passage some words have been deleted. Fill in the blanks with the help of the alternatives given. Select the most appropriate option for each number.

One of the (1)_____ tragedies is seeing someone with incredible talent get (2)_____ because he or she lacks some basic skills. This book (3)_____ the number one reason executives derail, and it provides extremely helpful tools to operate in a fast-paced, result-oriented environment. I am impressed by how insightful, (4)_____, well organised and focused it is. It will surely help one (5)_____ several difficult situations.

SubQuestion No : 21

Q.21 Select the most appropriate option to fill in blank number 1.

- Ans
- 1. more great
 - 2. great
 - 3. greater
 - 4. greatest

Question ID : 264330153590
Option 1 ID : 264330601850
Option 2 ID : 264330601847
Option 3 ID : 264330601848
Option 4 ID : 264330601849
Status : Answered
Chosen Option : 4

Comprehension:

In the following passage some words have been deleted. Fill in the blanks with the help of the alternatives given. Select the most appropriate option for each number.

One of the (1)_____ tragedies is seeing someone with incredible talent get (2)_____ because he or she lacks some basic skills. This book (3)_____ the number one reason executives derail, and it provides extremely helpful tools to operate in a fast-paced, result-oriented environment. I am impressed by how insightful, (4)_____, well organised and focused it is. It will surely help one (5)_____ several difficult situations.

SubQuestion No : 22

Q.22 Select the most appropriate option to fill in blank number 2.

- Ans
- 1. uplifted
 - 2. damaged
 - 3. derailed
 - 4. channelised

Question ID : 264330153591

Option 1 ID : 264330601852

Option 2 ID : 264330601851

Option 3 ID : 264330601854

Option 4 ID : 264330601853

Status : Answered

Chosen Option : 3

Comprehension:

In the following passage some words have been deleted. Fill in the blanks with the help of the alternatives given. Select the most appropriate option for each number.

One of the (1)_____ tragedies is seeing someone with incredible talent get (2)_____ because he or she lacks some basic skills. This book (3)_____ the number one reason executives derail, and it provides extremely helpful tools to operate in a fast-paced, result-oriented environment. I am impressed by how insightful, (4)_____, well organised and focused it is. It will surely help one (5)_____ several difficult situations.

SubQuestion No : 23

Q.23 Select the most appropriate option to fill in blank number 3.

- Ans
- 1. demeans
 - 2. devours
 - 3. addresses
 - 4. neglects

Question ID : 264330153592

Option 1 ID : 264330601858

Option 2 ID : 264330601857

Option 3 ID : 264330601855

Option 4 ID : 264330601856

Status : Answered

Chosen Option : 3

Comprehension:

In the following passage some words have been deleted. Fill in the blanks with the help of the alternatives given. Select the most appropriate option for each number.

One of the (1)_____ tragedies is seeing someone with incredible talent get (2)_____ because he or she lacks some basic skills. This book (3)_____ the number one reason executives derail, and it provides extremely helpful tools to operate in a fast-paced, result-oriented environment. I am impressed by how insightful, (4)_____, well organised and focused it is. It will surely help one (5)_____ several difficult situations.

SubQuestion No : 24

Q.24 Select the most appropriate option to fill in blank number 4.

- Ans
- 1. sophisticated
 - 2. pessimistic
 - 3. cumbersome
 - 4. readable

Question ID : 264330153593

Option 1 ID : 264330601862

Option 2 ID : 264330601861

Option 3 ID : 264330601859

Option 4 ID : 264330601860

Status : Answered

Chosen Option : 2

Comprehension:

In the following passage some words have been deleted. Fill in the blanks with the help of the alternatives given. Select the most appropriate option for each number.

One of the (1)_____ tragedies is seeing someone with incredible talent get (2)_____ because he or she lacks some basic skills. This book (3)_____ the number one reason executives derail, and it provides extremely helpful tools to operate in a fast-paced, result-oriented environment. I am impressed by how insightful, (4)_____, well organised and focused it is. It will surely help one (5)_____ several difficult situations.

SubQuestion No : 25

Q.25 Select the most appropriate option to fill in blank number 5.

- Ans
- 1. condemn
 - 2. salvage
 - 3. reject
 - 4. discourage

Question ID : 264330153594

Option 1 ID : 264330601866

Option 2 ID : 264330601864

Option 3 ID : 264330601863

Option 4 ID : 264330601865

Status : Answered

Chosen Option : 2

Multi Tasking Non Technical Staff and Havaladar CBIC and CBN Examination 2023

Roll Number	
Candidate Name	
Venue Name	iON Digital Zone iDZ 2 Duhai
Exam Date	08/09/2023
Exam Time	12:30 PM - 2:30 PM
Subject	MTS Non Tech Havaladar CBIC and CBN Examination 2023

Section : Numerical and Mathematical Ability

Q.1 A boat covers a certain distance downstream in 5 hours but takes 8 hours to return upstream to the starting point. If the speed of the stream is 6 km/h, find the speed of the boat in still water.

- Ans**
- ✓ 1. 26 km/h
 - ✗ 2. 13 km/h
 - ✗ 3. 78 km/h
 - ✗ 4. 39 km/h

Question ID : 264330153884

Option 1 ID : 264330603002

Option 2 ID : 264330603001

Option 3 ID : 264330602999

Option 4 ID : 264330603000

Status : Answered

Chosen Option : 1

Q.2 Three numbers are in the ratio 5 : 2 : 7. The sum of their squares is 3822. The biggest number is:

- Ans**
- ✗ 1. 35
 - ✗ 2. 38
 - ✗ 3. 78
 - ✓ 4. 49

Question ID : 264330154047

Option 1 ID : 264330603654

Option 2 ID : 264330603651

Option 3 ID : 264330603653

Option 4 ID : 264330603652

Status : Answered

Chosen Option : 4

Q.3 A path of uniform width 2.5 m runs around the outside of a rectangular field of dimensions 45 m × 35 m. What is the area of the path (in m^2)?

- Ans**
- 1. 500
 - 2. 425
 - 3. 475
 - 4. 525

Question ID : 264330153787
Option 1 ID : 264330602612
Option 2 ID : 264330602613
Option 3 ID : 264330602614
Option 4 ID : 264330602611
Status : Answered
Chosen Option : 1

Q.4 In a certain time, a sum becomes 5 times at the rate of 6% per annum on simple interest. At what rate of interest, the same sum becomes 8 times in the same duration?

- Ans**
- 1. 8.5%
 - 2. 10.5%
 - 3. 5.5%
 - 4. 12.5%

Question ID : 264330155747
Option 1 ID : 264330610393
Option 2 ID : 264330610392
Option 3 ID : 264330610394
Option 4 ID : 264330610391
Status : Answered
Chosen Option : 2

Q.5 Find the amount if ₹10,200 is invested at the rate of 8% per annum compound interest for $1\frac{1}{2}$ years when interest is compounded half yearly (up to two decimal places).

- Ans**
- 1. ₹11,743.61
 - 2. ₹11,473.61
 - 3. ₹11,764.28
 - 4. ₹11,347.28

Question ID : 264330156363
Option 1 ID : 264330612854
Option 2 ID : 264330612852
Option 3 ID : 264330612853
Option 4 ID : 264330612851
Status : Answered
Chosen Option : 2

Q.6 In what ratio, rice costing ₹185 per kg be mixed with rice costing ₹95 per kg such that by selling the mixture at ₹140 per kg there is a gain of 40%?

- Ans**
- 1. 2 : 19
 - 2. 3 : 23
 - 3. 2 : 13
 - 4. 1 : 17

Question ID : 264330154079
Option 1 ID : 264330603779
Option 2 ID : 264330603780
Option 3 ID : 264330603782
Option 4 ID : 264330603781
Status : Answered
Chosen Option : 4

Q.7 Among four numbers the sum of the smallest and largest is 72 more than the sum of middle two numbers . If the numbers are in the ratio 6 : 7 : 15 : 19, then the smallest number is:

- Ans**
- 1. 72
 - 2. 144
 - 3. 168
 - 4. 216

Question ID : 264330154051
Option 1 ID : 264330603670
Option 2 ID : 264330603669
Option 3 ID : 264330603668
Option 4 ID : 264330603667
Status : Answered
Chosen Option : 3

Q.8 A man runs across an 1800 m long street in 6 min. Calculate his speed in m/sec.

- Ans**
- 1. 5
 - 2. 4
 - 3. 6
 - 4. 8

Question ID : 264330156111
Option 1 ID : 264330611843
Option 2 ID : 264330611845
Option 3 ID : 264330611844
Option 4 ID : 264330611846
Status : Answered
Chosen Option : 1

Q.9 The following marks are obtained by a student in five subjects.

Subjects	Marks
Geography	42
History	43
Civics	51
Hindi	54
CS	50

What is the difference between the minimum and maximum marks scored by the student?

- Ans
- 1. 10
 - 2. 4
 - 3. 2
 - 4. 12

Question ID : 264330156536

Option 1 ID : 264330613533

Option 2 ID : 264330613534

Option 3 ID : 264330613532

Option 4 ID : 264330613531

Status : Answered

Chosen Option : 4

Q.10 The sale of tickets (in thousands) in days of a week is given in the pie chart:



The combined angle made at the centre by which days is equal to the angle made by Saturday?

- Ans
- 1. Sunday, Monday and Tuesday
 - 2. Tuesday, Wednesday and Thursday
 - 3. Monday, Tuesday and Wednesday
 - 4. Wednesday, Thursday and Friday

Question ID : 264330153823

Option 1 ID : 264330602758

Option 2 ID : 264330602756

Option 3 ID : 264330602755

Option 4 ID : 264330602757

Status : Answered

Chosen Option : 1

Q.11 A and B can do a piece of work in 6 and 12 days, respectively. If they work alternately and A begins the work, in how many days will the work be completed?

- Ans
- 1. 9
 - 2. 8
 - 3. $8\frac{1}{2}$
 - 4. $9\frac{1}{2}$

Question ID : 264330153855
Option 1 ID : 264330602883
Option 2 ID : 264330602885
Option 3 ID : 264330602886
Option 4 ID : 264330602884
Status : Answered
Chosen Option : 2

Q.12 A dealer buys some goods for ₹3,600. If the overhead expenses be 5% of the cost price, then at what price should it be sold to earn 15%?

- Ans
- 1. ₹4,347
 - 2. ₹4,734
 - 3. ₹4,437
 - 4. ₹4,743

Question ID : 264330159025
Option 1 ID : 264330623461
Option 2 ID : 264330623462
Option 3 ID : 264330623459
Option 4 ID : 264330623460
Status : Answered
Chosen Option : 1

Q.13 The income of a company increases 25% per annum. If its income is ₹26,64,000 in the year 1999 what was its income in the year 1997?

- Ans
- 1. ₹ 16,50,000
 - 2. ₹ 17,04,960
 - 3. ₹ 15,50,000
 - 4. ₹ 17,50,000

Question ID : 264330156072
Option 1 ID : 264330611689
Option 2 ID : 264330611688
Option 3 ID : 264330611690
Option 4 ID : 264330611687
Status : Answered
Chosen Option : 2

Q.14 The average of a batsman in 20 innings is 41 runs. In the next inning, he scored 41 runs. What will be his new average?

- Ans**
- 1. 39
 - 2. 41
 - 3. 38
 - 4. 36

Question ID : 264330156212
Option 1 ID : 264330612249
Option 2 ID : 264330612250
Option 3 ID : 264330612248
Option 4 ID : 264330612247
Status : Answered
Chosen Option : 2

Q.15 Aisha and Razia can complete a work in 50 days and 75 days, respectively. In how many days will the entire work be completed if both of them work together?

- Ans**
- 1. 32
 - 2. 25
 - 3. 30
 - 4. 28

Question ID : 264330155718
Option 1 ID : 264330610278
Option 2 ID : 264330610275
Option 3 ID : 264330610277
Option 4 ID : 264330610276
Status : Answered
Chosen Option : 3

Q.16 A man sold his cycle at 17% loss. If he had sold it for ₹1,056 more, he would have made 5% profit. The cost price of the cycle is:

- Ans**
- 1. ₹4,700
 - 2. ₹3,800
 - 3. ₹5,100
 - 4. ₹4,800

Question ID : 264330154080
Option 1 ID : 264330603784
Option 2 ID : 264330603783
Option 3 ID : 264330603785
Option 4 ID : 264330603786
Status : Answered
Chosen Option : 4

Q.17 Find the HCF of 230, 276, and 322.

- Ans
- 1. 23
 - 2. 12
 - 3. 46
 - 4. 14

Question ID : 264330156090

Option 1 ID : 264330611759

Option 2 ID : 264330611761

Option 3 ID : 264330611762

Option 4 ID : 264330611760

Status : Answered

Chosen Option : 3

Q.18 On simplifying the following expression, we get _____.

$$\frac{24\sqrt{45} - 16\sqrt{20} + \sqrt{245} - 47\sqrt{5}}{3\frac{1}{5} + 1\frac{2}{5} - 2\frac{1}{6} - 2\frac{1}{5} - 5\frac{2}{5} + 3\frac{1}{6}}$$

- Ans
- 1. 0
 - 2. 3
 - 3. 1
 - 4. 2

Question ID : 264330154114

Option 1 ID : 264330603922

Option 2 ID : 264330603919

Option 3 ID : 264330603921

Option 4 ID : 264330603920

Status : Answered

Chosen Option : 1

Q.19 The speed of a bus from station A to B is 55 km/h, and while coming back from station B to A, the speed of the bus is 95 km/h. The average speed (in km/h) of the bus during the whole journey is:

- Ans
- 1. $72\frac{1}{3}$
 - 2. $67\frac{1}{3}$
 - 3. $62\frac{2}{3}$
 - 4. $69\frac{2}{3}$

Question ID : 264330156512

Option 1 ID : 264330613438

Option 2 ID : 264330613435

Option 3 ID : 264330613436

Option 4 ID : 264330613437

Status : Answered

Chosen Option : 4

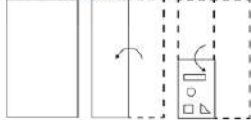
Q.20 What is the total surface area (in cm^2) of a right circular cone of radius 10.5 cm and slant height 13 cm? Take $\pi = \frac{22}{7}$

- Ans**
- 1. 577.5
 - 2. 757.5
 - 3. 775.5
 - 4. 787.5

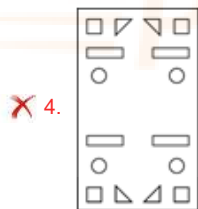
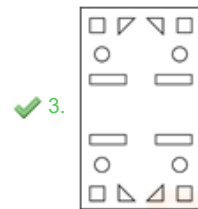
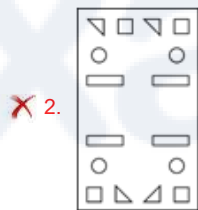
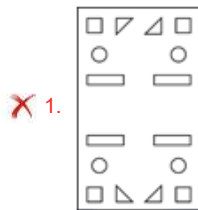
Question ID : 264330153790
 Option 1 ID : 264330602625
 Option 2 ID : 264330602624
 Option 3 ID : 264330602626
 Option 4 ID : 264330602623
 Status : Answered
 Chosen Option : 3

Section : Reasoning Ability and Problem Solving

Q.1 The sequence of folding a piece of paper and the manner in which the folded paper is cut is shown in the following figures. How would this paper look when unfolded?



Ans



Question ID : 264330155606
 Option 1 ID : 264330609830
 Option 2 ID : 264330609828
 Option 3 ID : 264330609829
 Option 4 ID : 264330609827
 Status : Answered
 Chosen Option : 3

Q.2 In a certain code language, 'YOJ' is coded as 'BRM' and 'DSP' is coded as 'GVS'. What is the code for 'ZMC' in the given code language?

- Ans**
- 1. DQE
 - 2. CPF
 - 3. CQF
 - 4. DPG

Question ID : 264330155832
 Option 1 ID : 264330610733
 Option 2 ID : 264330610734
 Option 3 ID : 264330610732
 Option 4 ID : 264330610731
 Status : Answered
 Chosen Option : 2

Q.3 Read the given statement(s) and conclusions carefully. Assuming that the information given in the statements is true, even if it appears to be at variance with commonly known facts, decide which of the given conclusions logically follow(s) from the statement(s).

Statements: All the pencils are pens. All the pens are inks.

Conclusions:

- (I) All the pencils are inks.
- (II) Some inks are pencils.

- Ans**
- 1. Neither conclusion (I) nor (II) is follows.
 - 2. Both conclusions (I) and (II) are follows.
 - 3. Only conclusion (II) is follows.
 - 4. Only conclusion (I) is follows.

Question ID : 264330154427
 Option 1 ID : 264330605173
 Option 2 ID : 264330605174
 Option 3 ID : 264330605172
 Option 4 ID : 264330605171
 Status : Answered
 Chosen Option : 2

Q.4 If 'A' stands for '+', 'B' stands for '×', 'C' stands for '÷' and 'D' stands for '-', what will come in place of the question mark (?) in the following equation?
 (54 A 9) C 34 D (10 B 3) C 46 D 16 = ?

- Ans**
- 1. 40
 - 2. 32
 - 3. 46
 - 4. 54

Question ID : 264330151793
 Option 1 ID : 264330594801
 Option 2 ID : 264330594800
 Option 3 ID : 264330594799
 Option 4 ID : 264330594802
 Status : Answered
 Chosen Option : 1

Q.5 Select the word-pair that best represents a similar relationship to the one expressed in the pair of words given below.

(The words must be considered as meaningful English words and must not be related to each other based on the number of letters/number of consonants/vowels in the word)

Correspond : Letters

- Ans**
- ✓ 1. Barter : Commodities
 - ✗ 2. Trespass : Boundaries
 - ✗ 3. Arbitrate : Controversies
 - ✗ 4. Debate : Problems

Question ID : 264330154639
Option 1 ID : 264330606022
Option 2 ID : 264330606020
Option 3 ID : 264330606019
Option 4 ID : 264330606021
Status : Answered
Chosen Option : 2

Q.6 What should come in place of ? in the given series based on the English alphabetical order?

LVF, IUC, FTZ, CSW, ?

- Ans**
- ✓ 1. ZRT
 - ✗ 2. ZQW
 - ✗ 3. YSX
 - ✗ 4. YQW

Question ID : 264330155790
Option 1 ID : 264330610565
Option 2 ID : 264330610566
Option 3 ID : 264330610563
Option 4 ID : 264330610564
Status : Answered
Chosen Option : 1

Q.7 What should come in place of '?' in the given series?

2 16 86 436 2186 ?

- Ans**
- ✗ 1. 10578
 - ✗ 2. 11032
 - ✗ 3. 11486
 - ✓ 4. 10936

Question ID : 264330151463
Option 1 ID : 264330593479
Option 2 ID : 264330593481
Option 3 ID : 264330593482
Option 4 ID : 264330593480
Status : Answered
Chosen Option : 4

Q.8 In a certain code language, 'good vibes only' is coded as 'vn mj kl' and 'change is good' is coded as 'mj ro dh'. How is 'good' coded in the given language?

- Ans**
- 1. ro
 - 2. dh
 - 3. vn
 - 4. mj

Question ID : **264330151688**
Option 1 ID : **264330594382**
Option 2 ID : **264330594381**
Option 3 ID : **264330594380**
Option 4 ID : **264330594379**
Status : **Answered**
Chosen Option : **4**

Q.9 What should come in place of ? in the given series based on the English alphabetical order?

JAS, HDV, FGY, DJB, ?

- Ans**
- 1. DNE
 - 2. CNF
 - 3. BME
 - 4. CMG

Question ID : **264330155794**
Option 1 ID : **264330610582**
Option 2 ID : **264330610580**
Option 3 ID : **264330610581**
Option 4 ID : **264330610579**
Status : **Answered**
Chosen Option : **3**

Q.10 Which figure should replace the question mark (?) if the following figure series were to be continued?

△	G	S	S	7	B	2	△	7	7	S	G	
	B			△			G			2		?
	7			G			S			△		

Ans

✗ 1.

↑	△	7
	S	
	2	

✗ 2.

↑	7	S
	△	
	G	

✗ 3.

↑	7	S
	△	
	2	

✓ 4.

↑	2	S
	△	
	7	

Question ID : 264330154765
 Option 1 ID : 264330606524
 Option 2 ID : 264330606523
 Option 3 ID : 264330606526
 Option 4 ID : 264330606525

Status : Answered

Chosen Option : 4

Q.11 The position of how many letters will remain unchanged if each of the letter in the word 'DURATION' is arranged in alphabetical order?

- Ans
- ✗ 1. Four
 - ✓ 2. None
 - ✗ 3. Five
 - ✗ 4. One

Question ID : 264330154329
 Option 1 ID : 264330604780
 Option 2 ID : 264330604781
 Option 3 ID : 264330604779
 Option 4 ID : 264330604782

Status : Answered

Chosen Option : 2

Q.12 In the following number-pairs, the second number is obtained by applying certain mathematical operations to the first number. Select the set in which the numbers are related in the same way as are the numbers of the following sets.
(NOTE : Operations should be performed on the whole numbers, without breaking down the numbers into its constituent digits. E.g. 13 – Operations on 13 such as adding / subtracting / multiplying etc. to 13 can be performed. Breaking down 13 into 1 and 3 and then performing mathematical operations on 1 and 3 is not allowed)

2, 7
5, 16

- Ans**
- 1. 14, 45
 - 2. 11, 23
 - 3. 20, 58
 - 4. 15, 46

Question ID : 264330151625
Option 1 ID : 264330594128
Option 2 ID : 264330594127
Option 3 ID : 264330594130
Option 4 ID : 264330594129
Status : Answered
Chosen Option : 4

Q.13 Select the combination of letters that when sequentially placed in the blanks of the given series, will complete the series.

J _ K _ KKJ _ K _ _ K

- Ans**
- 1. JJKJK
 - 2. KJKJK
 - 3. JKJKJ
 - 4. KJKJK

Question ID : 264330151645
Option 1 ID : 264330594209
Option 2 ID : 264330594208
Option 3 ID : 264330594210
Option 4 ID : 264330594207
Status : Answered
Chosen Option : 2

Q.14 Read the given statements and conclusions carefully. You have to take the given statements to be true even if they seem to be at variance from commonly known facts. You have to decide which conclusion/s logically follow/s from the given statements.

Statements: Some beds are telephones. All telephones are pillows. Some pillows are cupboards.

Conclusion I: Some pillows are telephones.

Conclusion II: Some beds are pillows.

- Ans**
- 1. Both conclusions (I) and (II) are follow.
 - 2. Only conclusion (I) is follow.
 - 3. Neither conclusion (I) nor (II) is follow.
 - 4. Only conclusion (II) is follow.

Question ID : 264330155914
Option 1 ID : 264330611062
Option 2 ID : 264330611059
Option 3 ID : 264330611061
Option 4 ID : 264330611060
Status : Answered
Chosen Option : 1

Q.15 What should come in place of ? in the given series?

37 36 33 32 29 ?

- Ans
- ✓ 1. 28
 - ✗ 2. 26
 - ✗ 3. 27
 - ✗ 4. 24

Question ID : 264330151719
Option 1 ID : 264330594506
Option 2 ID : 264330594504
Option 3 ID : 264330594503
Option 4 ID : 264330594505
Status : Answered
Chosen Option : 1

Q.16 16 is related to 29 following a certain logic. Following the same logic, 85 is related to 98. To which of the following is 53 related to, following the same logic?

- Ans
- ✓ 1. 66
 - ✗ 2. 62
 - ✗ 3. 64
 - ✗ 4. 68

Question ID : 264330151594
Option 1 ID : 264330594005
Option 2 ID : 264330594003
Option 3 ID : 264330594004
Option 4 ID : 264330594006
Status : Answered
Chosen Option : 1

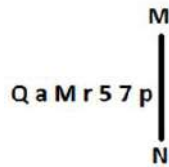
Q.17 What should come in place of '?' in the given series?

20 54 156 ? 1380 4134 12396

- Ans
- ✗ 1. 506
 - ✗ 2. 474
 - ✗ 3. 358
 - ✓ 4. 462

Question ID : 264330151448
Option 1 ID : 264330593422
Option 2 ID : 264330593421
Option 3 ID : 264330593419
Option 4 ID : 264330593420
Status : Answered
Chosen Option : 4

Q.18 Select the correct mirror image of the given figure when the mirror is placed at MN as shown below.



- Ans
- 1. q 7 2 1 W e Q
 - 2. q 7 5 J M a Q
 - 3. q 7 5 1 M 6 Q
 - 4. q 7 2 1 M 6 Q

Question ID : 264330151524

Option 1 ID : 264330593725

Option 2 ID : 264330593724

Option 3 ID : 264330593723

Option 4 ID : 264330593726

Status : Answered

Chosen Option : 4

Q.19 Abeer, Bela, Deepa, Farheen, Heera, and Girish are sitting around a circular table facing the centre. Girish sits 2nd to the right of Deepa. Farheen sits to the immediate left of Girish. Bela sits 2nd to the right of Farheen. Heera is an immediate neighbour of Deepa. Who sits to the immediate right of Bela?

- Ans
- 1. Girish
 - 2. Deepa
 - 3. Heera
 - 4. Abeer

Question ID : 264330155656

Option 1 ID : 264330610030

Option 2 ID : 264330610027

Option 3 ID : 264330610028

Option 4 ID : 264330610029

Status : Answered

Chosen Option : 4

Q.20 If F means '-', C means '+', D means '÷', A means '×', then what will come in place of the question mark (?) in the following equation?

$$65 A 39 D 3 F 23 C 2 = ?$$

- Ans
- 1. 64
 - 2. 32
 - 3. 56
 - 4. 42

Question ID : 264330154689

Option 1 ID : 264330606222

Option 2 ID : 264330606219

Option 3 ID : 264330606221

Option 4 ID : 264330606220

Status : Answered

Chosen Option : 2

Q.1 The 11th Fundamental Duty provides opportunities for education for the _____ age group of children.

- Ans 1. 6-14
 2. 5-15
 3. 2-11
 4. 6-18

Question ID : 264330159901
Option 1 ID : 264330626952
Option 2 ID : 264330626954
Option 3 ID : 264330626953
Option 4 ID : 264330626951
Status : Answered
Chosen Option : 1

Q.2 As per the Census of India 2011, which Union Territory recorded the lowest population growth rate?

- Ans 1. Lakshadweep
 2. Delhi
 3. Daman and Diu
 4. Chandigarh

Question ID : 264330161553
Option 1 ID : 264330633540
Option 2 ID : 264330633541
Option 3 ID : 264330633539
Option 4 ID : 264330633542
Status : Answered
Chosen Option : 1

Q.3 In which year were the Arms Act and Vernacular Press Act passed?

- Ans 1. 1878
 2. 1879
 3. 1877
 4. 1876

Question ID : 264330160876
Option 1 ID : 264330630837
Option 2 ID : 264330630838
Option 3 ID : 264330630836
Option 4 ID : 264330630835
Status : Answered
Chosen Option : 4

Q.4 In which state of India is Kaziranga National Park located?

- Ans 1. Assam
 2. Gujarat
 3. Karnataka
 4. West Bengal

Question ID : 264330161497
Option 1 ID : 264330633315
Option 2 ID : 264330633317
Option 3 ID : 264330633316
Option 4 ID : 264330633318
Status : Answered
Chosen Option : 1

Q.5 Whose autobiography is titled 'Ace against Odds'?

- Ans
- 1. Sania Mirza
 - 2. Saina Nehwal
 - 3. Mirabai Chanu
 - 4. Mary Kom

Question ID : 264330155450
Option 1 ID : 264330609205
Option 2 ID : 264330609204
Option 3 ID : 264330609206
Option 4 ID : 264330609203
Status : Answered
Chosen Option : 1

Q.6 By what name are the flat membrane-enclosed sacs present in the Golgi apparatus known?

- Ans
- 1. Lamellae
 - 2. Cisternae
 - 3. Cristae
 - 4. Stroma

Question ID : 264330161083
Option 1 ID : 264330631663
Option 2 ID : 264330631664
Option 3 ID : 264330631665
Option 4 ID : 264330631666
Status : Answered
Chosen Option : 2

Q.7 The Swarna Jayanti Shahari Rojgar Yojana (SJSRY) was launched in the year _____ by Government of India.

- Ans
- 1. 1990
 - 2. 1997
 - 3. 2010
 - 4. 2004

Question ID : 264330161574
Option 1 ID : 264330633623
Option 2 ID : 264330633624
Option 3 ID : 264330633626
Option 4 ID : 264330633625
Status : Answered
Chosen Option : 4

Q.8 Manna Dey was a famous personality of India in the field of _____.

- Ans
- 1. Science
 - 2. Games
 - 3. Politics
 - 4. Music

Question ID : 264330155512
 Option 1 ID : 264330609453
 Option 2 ID : 264330609454
 Option 3 ID : 264330609452
 Option 4 ID : 264330609451
 Status : Answered
 Chosen Option : 4

Q.9 'Chapchar Kut' is a festival from the state of _____. It is celebrated during March after the completion of the most arduous task of Jhum operation i.e., jungle clearing (clearing of the remnants of burning).

- Ans
- 1. Mizoram
 - 2. Nagaland
 - 3. Jharkhand
 - 4. Chhattisgarh

Question ID : 264330160822
 Option 1 ID : 264330630622
 Option 2 ID : 264330630619
 Option 3 ID : 264330630620
 Option 4 ID : 264330630621
 Status : Not Answered
 Chosen Option : --

Q.10 In which event at the 2023 ISSF Junior World Cup Championships did Amanpreet Singh win a gold medal for India?

- Ans
- 1. Men's 10 m air rifle
 - 2. Men's 10 m air pistol team
 - 3. Men's 25 m pistol
 - 4. Men's 25 m rapid fire pistol

Question ID : 264330161141
 Option 1 ID : 264330631896
 Option 2 ID : 264330631898
 Option 3 ID : 264330631895
 Option 4 ID : 264330631897
 Status : Answered
 Chosen Option : 3

Q.11 In which of the following States was the 2023 World Squash Championship held?

- Ans
- 1. Kerala
 - 2. Tamil Nadu
 - 3. Odisha
 - 4. Karnataka

Question ID : 264330161143
Option 1 ID : 264330631906
Option 2 ID : 264330631905
Option 3 ID : 264330631904
Option 4 ID : 264330631903
Status : Answered
Chosen Option : 4

Q.12 Mumtaz Khan was named 'FIH Women's Rising Star of the Year' in 2022. She plays which of the following sports?

- Ans
- 1. Hockey
 - 2. Fencing
 - 3. Football
 - 4. High Jump

Question ID : 264330158360
Option 1 ID : 264330620800
Option 2 ID : 264330620802
Option 3 ID : 264330620799
Option 4 ID : 264330620801
Status : Answered
Chosen Option : 2

Q.13 Which of the following is a common financial service provided by Micro Finance Institutions?

- Ans
- 1. Mortgage loans for luxury homes
 - 2. Investment advisory services for high-net-worth individuals
 - 3. Credit card issuance
 - 4. Small loans to low-income individuals for entrepreneurial activities

Question ID : 264330157286
Option 1 ID : 264330616508
Option 2 ID : 264330616510
Option 3 ID : 264330616507
Option 4 ID : 264330616509
Status : Answered
Chosen Option : 4

Q.14 The Rathwas, who dwell in the state of _____, perform the Rathwa dance on the occasion of Holi (festival of colours).

- Ans
- 1. Andhra Pradesh
 - 2. Telangana
 - 3. Maharashtra
 - 4. Gujarat

Question ID : 264330160800
Option 1 ID : 264330630532
Option 2 ID : 264330630534
Option 3 ID : 264330630531
Option 4 ID : 264330630533
Status : Answered
Chosen Option : 2

Q.15 Which Article of the Constitution of India provides for a governor for each state?

- Ans
- 1. Article 173
 - 2. Article 157
 - 3. Article 153
 - 4. Article 156

Question ID : 264330161294
Option 1 ID : 264330632506
Option 2 ID : 264330632505
Option 3 ID : 264330632503
Option 4 ID : 264330632504
Status : Answered
Chosen Option : 2

Q.16 Who was the first Woman President of Indian National Congress?

- Ans
- 1. Sarojini Naidu
 - 2. Asaf Ali
 - 3. Annie Besant
 - 4. Usha Mehta

Question ID : 264330162342
Option 1 ID : 264330636695
Option 2 ID : 264330636697
Option 3 ID : 264330636698
Option 4 ID : 264330636696
Status : Answered
Chosen Option : 3

Q.17 _____ was a star of the Kathak dance form described as 'Nritya Samragini' (the empress of dance) by Rabindranath Tagore.

- Ans
- 1. Sitara Devi
 - 2. Rukmini Devi Arundale
 - 3. Mrinalini Sarabhai
 - 4. Mallika Sarabhai

Question ID : 264330160811
Option 1 ID : 264330630577
Option 2 ID : 264330630575
Option 3 ID : 264330630578
Option 4 ID : 264330630576
Status : Answered
Chosen Option : 4

Q.18 Which of the following methods is used to calculate national income by summing up the total spending on final goods and services in an economy?

- Ans
- 1. Value-added method
 - 2. Output method
 - 3. Expenditure method
 - 4. Income method

Question ID : 264330157316
Option 1 ID : 264330616630
Option 2 ID : 264330616629
Option 3 ID : 264330616628
Option 4 ID : 264330616627
Status : Answered
Chosen Option : 3

Q.19 Former Governor of Jharkhand from the year 2004 to 2009, _____, passed away in Lucknow in 2022.

- Ans
- 1. Ramesh Bais
 - 2. Syed Ahmed
 - 3. Syed Sibtey Razi
 - 4. Kateekal Sankaranarayanan

Question ID : 264330161405
Option 1 ID : 264330632950
Option 2 ID : 264330632949
Option 3 ID : 264330632948
Option 4 ID : 264330632947
Status : Answered
Chosen Option : 2

Q.20 According to the IUPAC nomenclature system, which functional group is characterised by the presence of a -OH group, usually in a water-like bent shape?

- Ans
- 1. Carbonyls
 - 2. Amines
 - 3. Alcohols
 - 4. Esters

Question ID : 264330161051
Option 1 ID : 264330631536
Option 2 ID : 264330631538
Option 3 ID : 264330631535
Option 4 ID : 264330631537
Status : Answered
Chosen Option : 1

Q.21 Ajmer Sharif is the shrine of which of the following Sufi saints?

- Ans
- 1. Mohammad Ghori
 - 2. Mohammad Bin Tughlaq
 - 3. Khwaja Moinuddin Chishti
 - 4. Bhaktiyar Khilji

Question ID : 264330160765
Option 1 ID : 264330630394
Option 2 ID : 264330630391
Option 3 ID : 264330630393
Option 4 ID : 264330630392
Status : Answered
Chosen Option : 3

Q.22 Whose autobiography is titled as 'Wings of Fire: An Autobiography'?

- Ans
- 1. E Sreedharan
 - 2. APJ Abdul Kalam
 - 3. Rajender Singh
 - 4. Satyabhama Das Biju

Question ID : 264330155446
Option 1 ID : 264330609188
Option 2 ID : 264330609187
Option 3 ID : 264330609189
Option 4 ID : 264330609190
Status : Answered
Chosen Option : 2

Q.23 Which of the following Carnatic musicians was the first to receive the Bharat Ratna?

- Ans
- 1. Tyagaraja
 - 2. MS Subbulakshmi
 - 3. Syama Sastri
 - 4. KJ Yesudas

Question ID : 264330161767
Option 1 ID : 264330634398
Option 2 ID : 264330634395
Option 3 ID : 264330634397
Option 4 ID : 264330634396
Status : Answered
Chosen Option : 2

Q.24 Which of the following is the highest navigable lake in the world?

- Ans
- 1. Huron
 - 2. Titicaca
 - 3. Superior
 - 4. Como

Question ID : 264330161324
Option 1 ID : 264330632625
Option 2 ID : 264330632624
Option 3 ID : 264330632623
Option 4 ID : 264330632626
Status : Answered
Chosen Option : 2

Q.25 Rukmini Devi Arundale was associated with which Indian classical dance form?

- Ans
- 1. Manipuri
 - 2. Kathak
 - 3. Bharatanatyam
 - 4. Mohiniyattam

Question ID : 264330155520
Option 1 ID : 264330609485
Option 2 ID : 264330609486
Option 3 ID : 264330609483
Option 4 ID : 264330609484
Status : Answered
Chosen Option : 3

Section : English Language and Comprehension

Q.1 Select the option that rectifies the spelling of the underlined word in the given sentence.

He felt priviledged to have received the country's greatest honour.

- Ans
- 1. previllaged
 - 2. privileged
 - 3. privilegede
 - 4. privilaged

Question ID : 264330153225
Option 1 ID : 264330600460
Option 2 ID : 264330600461
Option 3 ID : 264330600459
Option 4 ID : 264330600462
Status : Answered
Chosen Option : 2

Q.2 Select the option that can be used as a one-word substitute for the underlined segment in the following sentence.

Hundreds of people were removed from a place by the government recently due to a war-like situation.

- Ans
- 1. assassinated
 - 2. evacuated
 - 3. invaded
 - 4. terminated

Question ID : 264330152716
Option 1 ID : 264330598466
Option 2 ID : 264330598464
Option 3 ID : 264330598465
Option 4 ID : 264330598463
Status : Answered
Chosen Option : 2

Q.3 Select the most appropriate meaning of the underlined idiom in the following sentence.

Buying a home in the city centre will cost you an arm and a leg.

- Ans
- 1. Nothing extra
 - 2. A large amount of money
 - 3. A small amount of money
 - 4. Physical pain

Question ID : 264330153048
Option 1 ID : 264330599762
Option 2 ID : 264330599760
Option 3 ID : 264330599759
Option 4 ID : 264330599761
Status : Answered
Chosen Option : 2

Q.4 Select the option that can be used as a one-word substitute for the given group of words.

One who has love for mankind

OR

One who makes an active effort to promote human welfare

- Ans
- 1. Philosopher
 - 2. Patriot
 - 3. Autocrat
 - 4. Philanthropist

Question ID : 264330153554
Option 1 ID : 264330601716
Option 2 ID : 264330601717
Option 3 ID : 264330601718
Option 4 ID : 264330601715
Status : Answered
Chosen Option : 4

Q.5 Select the most appropriate meaning of the given idiom.
From scratch

- Ans
- 1. From a skin disease
 - 2. From the beginning
 - 3. From utter disorder
 - 4. From death

Question ID : 264330156173
Option 1 ID : 264330612091
Option 2 ID : 264330612094
Option 3 ID : 264330612092
Option 4 ID : 264330612093
Status : Answered
Chosen Option : 2

Q.6 The following sentence has been divided into four parts. Identify the part that contains an error.

(A) Four divided by / (B) two is coming / (C) out to / (D) be two.

- Ans
- 1. D
 - 2. C
 - 3. B
 - 4. A

Question ID : 264330152628
Option 1 ID : 264330598118
Option 2 ID : 264330598117
Option 3 ID : 264330598116
Option 4 ID : 264330598115
Status : Answered
Chosen Option : 3

Q.7 Select the most appropriate meaning of the underlined idiom.

The detective went the whole nine yards in his investigation.

- Ans
- 1. Measuring every step
 - 2. Everything, all the way
 - 3. Close affinity with the law
 - 4. Taking the distant call

Question ID : 264330153147
Option 1 ID : 264330600148
Option 2 ID : 264330600150
Option 3 ID : 264330600149
Option 4 ID : 264330600147
Status : Answered
Chosen Option : 2

Q.8 Select the most appropriate option to fill in the blank.
Many soldiers marched in _____ at the international border.

- Ans
- 1. dress
 - 2. uniform
 - 3. fabric
 - 4. clothes

Question ID : 264330152583
Option 1 ID : 264330597935
Option 2 ID : 264330597937
Option 3 ID : 264330597938
Option 4 ID : 264330597936
Status : Answered
Chosen Option : 2

Q.9 The following sentence has been split into four segments. Identify the segment that contains a grammatical error.

This scripture / has been /translated in / seventy languages.

- Ans
- 1. seventy languages
 - 2. This scripture
 - 3. has been
 - 4. translated in

Question ID : 264330155431
Option 1 ID : 264330609134
Option 2 ID : 264330609131
Option 3 ID : 264330609132
Option 4 ID : 264330609133
Status : Answered
Chosen Option : 4

Q.10 Select the sentence that has NO spelling errors.

- Ans
- 1. The elderly woman was delighted to receive a bouquet of fragrant flowers from her thoughtful grandson, who had come to visit her at the nursing home
 - 2. The elderly woman was delighted to receive a bouque of fragrant flowers from her thoughtfull grandson, who had come to visit her at the nursing home
 - 3. The elderly woman was deligted to receive a bouque of fregrant flowers from her thoughtful grandson, who had come to visit her at the nursing home
 - 4. The elderly woman was delighed to recive a bouquet of fragrant flowers from her thoughtfull grandson, who had come to visit her at the nursing home

Question ID : 264330152648
Option 1 ID : 264330598196
Option 2 ID : 264330598198
Option 3 ID : 264330598195
Option 4 ID : 264330598197
Status : Answered
Chosen Option : 1

Q.11 Select the most appropriate option to fill in the blank.

She was known for her _____ attention to detail, always making sure everything was perfectly organised and in its proper place.

- Ans
- 1. fastidious
 - 2. scornful
 - 3. tedious
 - 4. exact

Question ID : 264330151863
Option 1 ID : 264330595073
Option 2 ID : 264330595072
Option 3 ID : 264330595071
Option 4 ID : 264330595074
Status : Answered
Chosen Option : 4

Q.12 Select the option that can be used as a one-word substitute for the given group of words.

The killing of a king

- Ans 1. Regicide
 2. Fratricide
 3. Sororicide
 4. Patricide

Question ID : 264330151868
Option 1 ID : 264330595091
Option 2 ID : 264330595094
Option 3 ID : 264330595092
Option 4 ID : 264330595093
Status : Answered
Chosen Option : 1

Q.13 Select the most appropriate option to fill in the blanks.

(Ø = No article)

___ doctor suggested doing some eye exercises and wearing ___ pair of powered glasses.

- Ans 1. A; a
 2. Ø; a
 3. A; Ø
 4. The; a

Question ID : 264330151329
Option 1 ID : 264330592945
Option 2 ID : 264330592944
Option 3 ID : 264330592946
Option 4 ID : 264330592943
Status : Answered
Chosen Option : 1

Q.14 Parts of the following sentence have been given as options. Select the option that contains an error.

They have less books than I have.

- Ans 1. I have
 2. They have
 3. than
 4. less books

Question ID : 264330152802
Option 1 ID : 264330598802
Option 2 ID : 264330598799
Option 3 ID : 264330598801
Option 4 ID : 264330598800
Status : Answered
Chosen Option : 4

Q.15 Select the most appropriate meaning of the given idiom.
Into hot water

- Ans
- 1. Not on good terms
 - 2. In favour with
 - 3. Came to nothing
 - 4. Into trouble

Question ID : 264330152574
Option 1 ID : 264330597899
Option 2 ID : 264330597901
Option 3 ID : 264330597902
Option 4 ID : 264330597900
Status : Answered
Chosen Option : 4

Q.16 Select the most appropriate synonym of the bracketed word in the following sentence to fill in the blank.

The sun was setting over the mountains, painting the sky with _____ (energetic) shades of orange and pink.

- Ans
- 1. vibrant
 - 2. reactive
 - 3. faded
 - 4. bright

Question ID : 264330152661
Option 1 ID : 264330598247
Option 2 ID : 264330598250
Option 3 ID : 264330598248
Option 4 ID : 264330598249
Status : Answered
Chosen Option : 1

Q.17 The following sentence has been split into four segments. Identify the segment that contains an error.

She was writing / a letter to her grandmother / when the power / gone out.

- Ans
- 1. gone out
 - 2. a letter to her grandmother
 - 3. She was writing
 - 4. when the power

Question ID : 264330155319
Option 1 ID : 264330608718
Option 2 ID : 264330608716
Option 3 ID : 264330608715
Option 4 ID : 264330608717
Status : Answered
Chosen Option : 1

Q.18 Select the most appropriate ANTONYM of the given word.
Nonchalant

- Ans 1. Flexible
 2. Caring
 3. Marvellous
 4. Covert

Question ID : 264330153539
Option 1 ID : 264330601661
Option 2 ID : 264330601660
Option 3 ID : 264330601662
Option 4 ID : 264330601659
Status : Answered
Chosen Option : 4

Q.19 Select the most appropriate synonym of the given word.
Grief

- Ans 1. Pleasure
 2. Jollity
 3. Pain
 4. Content

Question ID : 264330151821
Option 1 ID : 264330594911
Option 2 ID : 264330594914
Option 3 ID : 264330594912
Option 4 ID : 264330594913
Status : Answered
Chosen Option : 3

Q.20 There is a spelling error in the given sentence. Select the option that contains the INCORRECTLY spelt word.
The profesor's niece was planning a pleasant surprise for him.

- Ans 1. profesor
 2. planning
 3. pleasant
 4. niece

Question ID : 264330152835
Option 1 ID : 264330598931
Option 2 ID : 264330598933
Option 3 ID : 264330598934
Option 4 ID : 264330598932
Status : Answered
Chosen Option : 1

Comprehension:

In the following passage, some words have been deleted. Read the passage carefully and select the most appropriate option to fill in each blank.

Tim Cook, CEO of Apple who has recently _____(1) India, has some _____ (2) for parents: limit the screen time for children. He says: "Kids are born _____(3), they're digital kids now. And it is, I think, important to set some hard rails around it." Various surveys of Indian children show alarming findings. A Saurashtra University survey of _____ (4) a thousand children and their parents in Rajkot finds that 92% students prefer playing mobile games over playing outside and 78% students _____ (5) to having their phone while having meals. In another survey by Local Circles, nearly 55% of parents admit that their children aged 9-13 have access to a smartphone throughout the day.

SubQuestion No : 21

Q.21 Select the most appropriate option to fill in blank number 1.

- Ans 1. visiting
 2. visited
 3. visit
 4. visits

Question ID : 264330152760
 Option 1 ID : 264330598637
 Option 2 ID : 264330598636
 Option 3 ID : 264330598635
 Option 4 ID : 264330598638
 Status : Answered
 Chosen Option : 2

Comprehension:

In the following passage, some words have been deleted. Read the passage carefully and select the most appropriate option to fill in each blank.

Tim Cook, CEO of Apple who has recently _____(1) India, has some _____ (2) for parents: limit the screen time for children. He says: "Kids are born _____(3), they're digital kids now. And it is, I think, important to set some hard rails around it." Various surveys of Indian children show alarming findings. A Saurashtra University survey of _____ (4) a thousand children and their parents in Rajkot finds that 92% students prefer playing mobile games over playing outside and 78% students _____ (5) to having their phone while having meals. In another survey by Local Circles, nearly 55% of parents admit that their children aged 9-13 have access to a smartphone throughout the day.

SubQuestion No : 22

Q.22 Select the most appropriate option to fill in blank number 2.

- Ans 1. suggesting
 2. advise
 3. suggest
 4. advice

Question ID : 264330152761
 Option 1 ID : 264330598642
 Option 2 ID : 264330598639
 Option 3 ID : 264330598641
 Option 4 ID : 264330598640
 Status : Answered
 Chosen Option : 4

Comprehension:

In the following passage, some words have been deleted. Read the passage carefully and select the most appropriate option to fill in each blank.

Tim Cook, CEO of Apple who has recently _____ (1) India, has some _____ (2) for parents: limit the screen time for children. He says: "Kids are born _____ (3), they're digital kids now. And it is, I think, important to set some hard rails around it." Various surveys of Indian children show alarming findings. A Saurashtra University survey of _____ (4) a thousand children and their parents in Rajkot finds that 92% students prefer playing mobile games over playing outside and 78% students _____ (5) to having their phone while having meals. In another survey by Local Circles, nearly 55% of parents admit that their children aged 9-13 have access to a smartphone throughout the day.

SubQuestion No : 23

Q.23 Select the most appropriate option to fill in blank number 3.

- Ans 1. digitally
 2. digitalise
 3. digital
 4. digitalised

Question ID : 264330152762

Option 1 ID : 264330598644

Option 2 ID : 264330598645

Option 3 ID : 264330598643

Option 4 ID : 264330598646

Status : Answered

Chosen Option : 4

Comprehension:

In the following passage, some words have been deleted. Read the passage carefully and select the most appropriate option to fill in each blank.

Tim Cook, CEO of Apple who has recently _____ (1) India, has some _____ (2) for parents: limit the screen time for children. He says: "Kids are born _____ (3), they're digital kids now. And it is, I think, important to set some hard rails around it." Various surveys of Indian children show alarming findings. A Saurashtra University survey of _____ (4) a thousand children and their parents in Rajkot finds that 92% students prefer playing mobile games over playing outside and 78% students _____ (5) to having their phone while having meals. In another survey by Local Circles, nearly 55% of parents admit that their children aged 9-13 have access to a smartphone throughout the day.

SubQuestion No : 24

Q.24 Select the most appropriate option to fill in blank number 4.

- Ans 1. closer than
 2. bigger than
 3. above than
 4. more than

Question ID : 264330152763

Option 1 ID : 264330598650

Option 2 ID : 264330598649

Option 3 ID : 264330598647

Option 4 ID : 264330598648

Status : Answered

Chosen Option : 4

Comprehension:

In the following passage, some words have been deleted. Read the passage carefully and select the most appropriate option to fill in each blank.

Tim Cook, CEO of Apple who has recently _____ (1) India, has some _____ (2) for parents: limit the screen time for children. He says: "Kids are born _____ (3), they're digital kids now. And it is, I think, important to set some hard rails around it." Various surveys of Indian children show alarming findings. A Saurashtra University survey of _____ (4) a thousand children and their parents in Rajkot finds that 92% students prefer playing mobile games over playing outside and 78% students _____ (5) to having their phone while having meals. In another survey by Local Circles, nearly 55% of parents admit that their children aged 9-13 have access to a smartphone throughout the day.

SubQuestion No : 25

Q.25 Select the most appropriate option to fill in blank number 5.

- Ans 1. habituated
 2. habituating
 3. will be habituating
 4. are habituated

Question ID : 264330152764

Option 1 ID : 264330598653

Option 2 ID : 264330598652

Option 3 ID : 264330598651

Option 4 ID : 264330598654

Status : Answered

Chosen Option : 4

ixamBee

Prepare 50% Faster

Multi Tasking Non Technical Staff and Havaladar CBIC and CBN Examination 2023

Roll Number	
Candidate Name	
Venue Name	iON Digital Zone iDZ 1 GT Karnal Road
Exam Date	08/09/2023
Exam Time	4:00 PM - 6:00 PM
Subject	MTS Non Tech Havaladar CBIC and CBN Examination 2023

Section : Numerical and Mathematical Ability

Q.1 Tea leaves worth ₹108 per kg and ₹120 per kg are mixed with a third variety in the ratio 2 : 3 : 5. If the mixture is worth ₹125 per kg, the price (in ₹, rounded off to the nearest integer) of the third variety of tea leaves per kg will be:

- Ans**
- 1. 130
 - 2. 128
 - 3. 135
 - 4. 133

Question ID : 264330156469

Option 1 ID : 264330613265

Option 2 ID : 264330613264

Option 3 ID : 264330613263

Option 4 ID : 264330613266

Status : Answered

Chosen Option : 3

Q.2 Rima covers a certain distance by car driving at a speed of 59 km/h and she returns to the starting point riding on a bike with a speed of 43 km/h. Find the average speed (in km/h) for the whole journey. (Rounded off to 2 decimal places)

- Ans**
- 1. 52.25
 - 2. 49.75
 - 3. 42.00
 - 4. 45.37

Question ID : 264330155730

Option 1 ID : 264330610323

Option 2 ID : 264330610324

Option 3 ID : 264330610326

Option 4 ID : 264330610325

Status : Answered

Chosen Option : 2

Q.3 If 7 men working 8 hours a day for 5 days can complete a work, then how many men are required to complete the same work if they work 10 hours a day for 7 days?

- Ans**
- 1. 6
 - 2. 4
 - 3. 3
 - 4. 5

Question ID : 264330156535
Option 1 ID : 264330613529
Option 2 ID : 264330613528
Option 3 ID : 264330613530
Option 4 ID : 264330613527
Status : Answered
Chosen Option : 2

Q.4 The LCM of $\frac{1}{6}, \frac{5}{27}, \frac{4}{15}, \frac{8}{3}$ is:

- Ans**
- 1. $\frac{40}{3}$
 - 2. $\frac{3}{28}$
 - 3. $\frac{5}{28}$
 - 4. $\frac{40}{5}$

Question ID : 264330156205
Option 1 ID : 264330612221
Option 2 ID : 264330612220
Option 3 ID : 264330612219
Option 4 ID : 264330612222
Status : Answered
Chosen Option : 1

Q.5 The mean proportional between 0.8 and 7.2 is:

- Ans**
- 1. 2.4
 - 2. 3.4
 - 3. 4.2
 - 4. 1.2

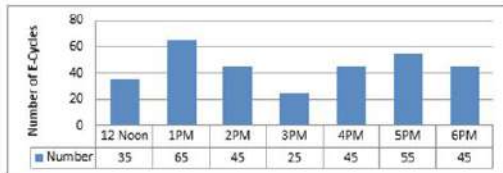
Question ID : 264330153769
Option 1 ID : 264330602541
Option 2 ID : 264330602540
Option 3 ID : 264330602539
Option 4 ID : 264330602542
Status : Answered
Chosen Option : 1

Q.6 The value of $\frac{3 \div 3 \times 2 - 6 \div 3 + 7}{5 \div 5 \times 6 \div 6 + 3 + 3}$ is equal to:

- Ans
- 1. 1
 - 2. $\frac{3}{2}$
 - 3. $1\frac{3}{2}$
 - 4. 2

Question ID : 264330156502
 Option 1 ID : 264330613397
 Option 2 ID : 264330613395
 Option 3 ID : 264330613396
 Option 4 ID : 264330613398
 Status : Answered
 Chosen Option : 1

Q.7 The bar diagram represents the number of E- Cycles parking at a metro station from 12:00 P.M. to 6:00 P.M.
 How many times the number of E- Cycles parked is more than average?



- Ans
- 1. 4
 - 2. 5
 - 3. 2
 - 4. 3

Question ID : 264330154064
 Option 1 ID : 264330603721
 Option 2 ID : 264330603722
 Option 3 ID : 264330603719
 Option 4 ID : 264330603720
 Status : Answered
 Chosen Option : 3

Q.8 A can do a piece of work in 10 days and B can do it in 15 days. They work together for 2 days and then A leaves.
 How long will B take to finish the remaining work?

- Ans
- 1. 10 days
 - 2. 22 days
 - 3. 12 days
 - 4. 5 days

Question ID : 264330153885
 Option 1 ID : 264330603004
 Option 2 ID : 264330603003
 Option 3 ID : 264330603006
 Option 4 ID : 264330603005
 Status : Answered
 Chosen Option : 1

Q.9 A cylinder has a total surface area of 64π square units, where the height of the cylinder is equal to its radius. If the height is doubled and the radius is halved, then the total surface area of the new cylinder is _____ square units.

- Ans**
- 1. 54π
 - 2. 40π
 - 3. 64π
 - 4. 48π

Question ID : **264330153825**
 Option 1 ID : **264330602763**
 Option 2 ID : **264330602764**
 Option 3 ID : **264330602766**
 Option 4 ID : **264330602765**
 Status : **Answered**
 Chosen Option : **2**

Q.10 A boy covers a certain distance between his house and school on a cycle. Having an average speed of 10 km/h, he is late by 10 min. However, with an average speed of 15 km/h, he reaches the school in 5 min. earlier. Find the distance (in km) between his house and school.

- Ans**
- 1. 8.5
 - 2. 8
 - 3. 7
 - 4. 7.5

Question ID : **264330156272**
 Option 1 ID : **264330612490**
 Option 2 ID : **264330612489**
 Option 3 ID : **264330612487**
 Option 4 ID : **264330612488**
 Status : **Answered**
 Chosen Option : **4**

Q.11 A motorboat can row 12 km/h in still water. If the speed of the current is 2 km/h, it takes 1.5 hours more in covering some distance upstream than it does downstream for covering the same distance. The one-side distance is:

- Ans**
- 1. 52.5 km
 - 2. 50 km
 - 3. 51.5 km
 - 4. 53 km

Question ID : **264330156286**
 Option 1 ID : **264330612545**
 Option 2 ID : **264330612543**
 Option 3 ID : **264330612544**
 Option 4 ID : **264330612546**
 Status : **Answered**
 Chosen Option : **1**

Q.12 A and B entered a partnership for 5 years. At the start of the business, they invested ₹36,000 and ₹58,000, respectively. At the end of 5 years, their total profit was ₹94,000. What will be the share of B (in ₹) out of this profit?

- Ans**
- 1. 52,000
 - 2. 46,000
 - 3. 58,000
 - 4. 60,000

Question ID : 264330155742
Option 1 ID : 264330610372
Option 2 ID : 264330610371
Option 3 ID : 264330610373
Option 4 ID : 264330610374
Status : Answered
Chosen Option : 3

Q.13 If the ratio of the principal and the simple interest for 5 years is 10 : 7, then the rate of interest per annum is:

- Ans**
- 1. 18%
 - 2. 16%
 - 3. 12%
 - 4. 14%

Question ID : 264330156523
Option 1 ID : 264330613481
Option 2 ID : 264330613482
Option 3 ID : 264330613479
Option 4 ID : 264330613480
Status : Answered
Chosen Option : 4

Q.14 The table below shows the earning of different schools (in ₹ crores) in different years. Study the table carefully and answer the question that follows.

School/years	2018	2019	2020	2021	2022
P	50	45	49	56	57
Q	46	48	50	55	62
R	70	65	63	68	63
S	38	47	56	60	69
T	48	37	52	69	77

Find the ratio between the total earnings of schools P and R taken together in year 2020 to the total earnings of schools Q, S and T taken together in the year 2022?

- Ans**
- 1. 7 : 13
 - 2. 7 : 19
 - 3. 12 : 7
 - 4. 12 : 13

Question ID : 264330156573
Option 1 ID : 264330613681
Option 2 ID : 264330613682
Option 3 ID : 264330613679
Option 4 ID : 264330613680
Status : Answered
Chosen Option : 1

Q.15 A student's marks were incorrectly entered as 44 instead of 86. Due to this, the average of the class got decreased by $\frac{3}{2}$. What is the number of students in the class?

- Ans
- 1. 24
 - 2. 28
 - 3. 36
 - 4. 30

Question ID : 264330153757
Option 1 ID : 264330602491
Option 2 ID : 264330602494
Option 3 ID : 264330602492
Option 4 ID : 264330602493
Status : Answered
Chosen Option : 2

Q.16 The percentage profit earned by selling an article for ₹955 is equal to the percentage loss incurred by selling the same article for ₹845. At what price should the article be sold to make a 6% profit?

- Ans
- 1. ₹955
 - 2. ₹954
 - 3. ₹925
 - 4. ₹1,014

Question ID : 264330159021
Option 1 ID : 264330623443
Option 2 ID : 264330623446
Option 3 ID : 264330623445
Option 4 ID : 264330623444
Status : Answered
Chosen Option : 2

Q.17 Find the area of a triangle whose base is 7 cm and corresponding height is 82 cm.

- Ans
- 1. 191 cm^2
 - 2. 574 cm^2
 - 3. 143 cm^2
 - 4. 287 cm^2

Question ID : 264330153892
Option 1 ID : 264330603033
Option 2 ID : 264330603031
Option 3 ID : 264330603034
Option 4 ID : 264330603032
Status : Answered
Chosen Option : 4

Q.18 The price of a commodity increased from ₹200 to ₹250. What is the percentage increase in price?

- Ans**
- 1. 27%
 - 2. 20%
 - 3. 25%
 - 4. 22%

Question ID : 264330156260
Option 1 ID : 264330612442
Option 2 ID : 264330612439
Option 3 ID : 264330612441
Option 4 ID : 264330612440
Status : Answered
Chosen Option : 3

Q.19 What will be the compound interest on ₹30,000 at 10% per annum for $1\frac{1}{2}$ years, when interest is compounded half-yearly?

- Ans**
- 1. ₹4,728.75
 - 2. ₹4,800.75
 - 3. ₹5,728.75
 - 4. ₹4,928.75

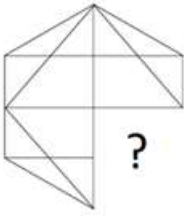
Question ID : 264330154132
Option 1 ID : 264330603993
Option 2 ID : 264330603991
Option 3 ID : 264330603992
Option 4 ID : 264330603994
Status : Answered
Chosen Option : 1

Q.20 Ravi sells a laptop bag to Reeta for ₹1,920 and he sells another similar laptop bag to Vinay for ₹1,280. The percentage profit earned in selling the laptop bag to Reeta is equal to the percentage loss in selling the laptop bag to Vinay. At what price (in ₹) should Ravi sell the laptop bag to make a profit of 25%?

- Ans**
- 1. 1,650
 - 2. 1,600
 - 3. 1,800
 - 4. 2,000

Question ID : 264330155706
Option 1 ID : 264330610228
Option 2 ID : 264330610227
Option 3 ID : 264330610229
Option 4 ID : 264330610230
Status : Answered
Chosen Option : 4

Q.1 Identify the figure that completes the pattern (rotation is NOT allowed).



Ans

✗ 1.



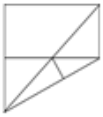
✓ 2.



✗ 3.



✗ 4.



Question ID : 264330154513

Option 1 ID : 264330605515

Option 2 ID : 264330605517

Option 3 ID : 264330605516

Option 4 ID : 264330605518

Status : Answered

Chosen Option : 2

Q.2 What should come in place of ? in the given series based on the English alphabetical order?

HPS, JRU, LTW, NVY, ?

Ans ✓ 1. PXA

✗ 2. MXB

✗ 3. NYB

✗ 4. NZA

Question ID : 264330155765

Option 1 ID : 264330610463

Option 2 ID : 264330610466

Option 3 ID : 264330610464

Option 4 ID : 264330610465

Status : Answered

Chosen Option : 1

Q.3 What will come in place of '?' in the following equation, if '+' and '×' are interchanged and '-' and '+' are interchanged?

$$16 - 4 + 13 \times 5 + 2 = ?$$

- Ans**
- 1. 36
 - 2. 24
 - 3. 48
 - 4. 55

Question ID : 264330154667
 Option 1 ID : 264330606134
 Option 2 ID : 264330606133
 Option 3 ID : 264330606132
 Option 4 ID : 264330606131
 Status : Answered
 Chosen Option : 4

Q.4 In a certain code language, 'PORTAL' is coded as 'RQIVCN' and 'QUIET' is coded as 'SWKGV'. What is the code for 'SIMPLE' in the given code language?

- Ans**
- 1. VKNRMJ
 - 2. UKORNG
 - 3. TJNSMH
 - 4. TNOSMI

Question ID : 264330155813
 Option 1 ID : 264330610658
 Option 2 ID : 264330610655
 Option 3 ID : 264330610656
 Option 4 ID : 264330610657
 Status : Answered
 Chosen Option : 2

Q.5 17 is related to 52 following a certain logic. Following the same logic, 42 is related to 127. To which of the following is 29 related to, following the same logic?

- Ans**
- 1. 84
 - 2. 88
 - 3. 86
 - 4. 82

Question ID : 264330151591
 Option 1 ID : 264330593992
 Option 2 ID : 264330593994
 Option 3 ID : 264330593993
 Option 4 ID : 264330593991
 Status : Answered
 Chosen Option : 2

Q.6 What should come in place of '?' in the given series?

9 26 77 230 689 ?

- Ans
- 1. 2035
 - 2. 2112
 - 3. 2094
 - 4. 2066

Question ID : 264330151478
Option 1 ID : 264330593539
Option 2 ID : 264330593542
Option 3 ID : 264330593541
Option 4 ID : 264330593540
Status : Answered
Chosen Option : 4

Q.7 Which figure should replace the question mark (?) if the following figure series were to be continued?

R	I	K	2	R	D	7	↑	K	T	7	△	
2	△	D	△	I	T	T	2	△	2	↑	I	?
↑	7	T	K	↑	7	D	R	I	K	D	R	

Ans

1.

R	I	K
D	T	7
△	2	↑

2.

R	D	K
I	△	2
↑	7	T

3.

R	I	K
D	△	7
↑	2	T

4.

R	D	K
I	T	2
△	7	↑

Question ID : 264330154737
Option 1 ID : 264330606411
Option 2 ID : 264330606412
Option 3 ID : 264330606413
Option 4 ID : 264330606414
Status : Answered
Chosen Option : 2

Q.8 Read the given statements and conclusions carefully. You have to take the given statements to be true even if they seem to be at variance from commonly known facts. You have to decide which conclusion/s logically follow/s from the given statements.

Statements: All stamps are keys. All keys are black. All black are grey.

Conclusion I: All keys are stamps.

Conclusion II: Some keys are black.

- Ans**
- 1. Both conclusions (I) and (II) are follow.
 - 2. Only conclusion (II) is follow.
 - 3. Only conclusion (I) is follow.
 - 4. Neither conclusion (I) nor (II) is follow.

Question ID : 264330155893
Option 1 ID : 264330610978
Option 2 ID : 264330610976
Option 3 ID : 264330610975
Option 4 ID : 264330610977
Status : Answered
Chosen Option : 4

Q.9 What will come in the place of '?' in the following equation, if '+' and '-' are interchanged and 'x' and '+' are interchanged?
 $17 + 9 - 39 + 225 \times 15 = ?$

- Ans**
- 1. 167
 - 2. 177
 - 3. 157
 - 4. 187

Question ID : 264330155669
Option 1 ID : 264330610082
Option 2 ID : 264330610081
Option 3 ID : 264330610079
Option 4 ID : 264330610080
Status : Answered
Chosen Option : 2

Q.10 What should come in place of '?' in the given series?

1 14 79 404 2029 ?

- Ans**
- 1. 10154
 - 2. 9848
 - 3. 9812
 - 4. 10132

Question ID : 264330151468
Option 1 ID : 264330593502
Option 2 ID : 264330593500
Option 3 ID : 264330593499
Option 4 ID : 264330593501
Status : Answered
Chosen Option : 1

Q.11 In a certain code language, 'do it now' is coded as 'qh tr ce' and 'now or never' is coded as 'lx uk tr'. How is 'now' coded in the given language?

- Ans**
- 1. ce
 - 2. qh
 - 3. tr
 - 4. lx

Question ID : 264330151686
Option 1 ID : 264330594371
Option 2 ID : 264330594374
Option 3 ID : 264330594372
Option 4 ID : 264330594373
Status : Answered
Chosen Option : 3

Q.12 The position of how many letters will remain unchanged if each of the letter in the word 'ABSOLUTE' is arranged in alphabetical order?

- Ans**
- 1. Five
 - 2. Two
 - 3. Three
 - 4. Four

Question ID : 264330154323
Option 1 ID : 264330604758
Option 2 ID : 264330604755
Option 3 ID : 264330604757
Option 4 ID : 264330604756
Status : Answered
Chosen Option : 3

Q.13 Seven people, B, N, M, O, P, Y and S are sitting in a straight line, facing south. Only two people sit between P and S. N is the immediate neighbour of S and M. Only one person sits to the right of P. N sits second to the left of O. Y is an immediate neighbour of P.

Total how many people sit between P and M?

- Ans**
- 1. Two
 - 2. Four
 - 3. Three
 - 4. One

Question ID : 264330161697
Option 1 ID : 264330634116
Option 2 ID : 264330634118
Option 3 ID : 264330634117
Option 4 ID : 264330634115
Status : Answered
Chosen Option : 2

Q.14 Read the given statements and conclusions carefully. You have to take the given statements to be true even if they seem to be at variance from commonly known facts. You have to decide which conclusion/s logically follow/s from the given statements.

Statements: All threads are soft. Some soft are fruit. All fruit is yellow.

Conclusion I: Some thread is fruit.

Conclusion II: Some fruit is yellow.

- Ans**
- 1. Neither conclusion (I) nor (II) is follow.
 - 2. Both conclusions (I) and (II) are follow.
 - 3. Only conclusion (II) is follow.
 - 4. Only conclusion (I) is follow.

Question ID : 264330155921
Option 1 ID : 264330611089
Option 2 ID : 264330611090
Option 3 ID : 264330611088
Option 4 ID : 264330611087
Status : Answered
Chosen Option : 1

Q.15 What should come in place of ? in the given series?

21 24 29 36 47 ?

- Ans**
- 1. 64
 - 2. 60
 - 3. 56
 - 4. 66

Question ID : 264330151715
Option 1 ID : 264330594487
Option 2 ID : 264330594490
Option 3 ID : 264330594488
Option 4 ID : 264330594489
Status : Answered
Chosen Option : 2

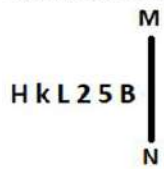
Q.16 Find out the correct alternative that when filled in the blanks in the same sequence will make the series logically complete.

WA_XV_FX_EFXTGF_SI_X

- Ans**
- 1. MNVKD
 - 2. FCUXF
 - 3. FVYNS
 - 4. HKVHU

Question ID : 264330154722
Option 1 ID : 264330606353
Option 2 ID : 264330606351
Option 3 ID : 264330606354
Option 4 ID : 264330606352
Status : Answered
Chosen Option : 2

Q.17 Select the correct mirror image of the given figure when the mirror is placed at MN as shown below.



- Ans
- 1. **H K L 2 5 B**
 - 2. **H K L 2 5 B**
 - 3. **H K L 2 5 B**
 - 4. **H K L 2 5 B**

Question ID : 264330151501

Option 1 ID : 264330593633

Option 2 ID : 264330593631

Option 3 ID : 264330593632

Option 4 ID : 264330593634

Status : Answered

Chosen Option : 2

Q.18 Select the set in which the numbers are related in the same way as are the numbers of the following sets.
(NOTE: Operations should be performed on the whole numbers, without breaking down the numbers into its constituent digits. E.g. 13 – Operations on 13 such as adding / subtracting / multiplying etc. to 13 can be performed. Breaking down 13 into 1 and 3 and then performing mathematical operations on 1 and 3 is not allowed)
(5, 11, 80)
(6, 12, 90)

- Ans
- 1. 4, 19, 148
 - 2. 9, 11, 67
 - 3. 7, 17, 120
 - 4. 2, 16, 123

Question ID : 264330151615

Option 1 ID : 264330594089

Option 2 ID : 264330594090

Option 3 ID : 264330594087

Option 4 ID : 264330594088

Status : Answered

Chosen Option : 3

Q.19 Select the word-pair that best represents a similar relationship to the one expressed in the pair of words given below.
(The words must be considered as meaningful English words and must not be related to each other based on the number of letters/number of consonants/vowels in the word)

Scissors : Cloth

- Ans
- 1. Pen : Ink
 - 2. Razor : Beard
 - 3. Nail : Hammer
 - 4. Furnace : Smoke

Question ID : 264330154631

Option 1 ID : 264330605987

Option 2 ID : 264330605990

Option 3 ID : 264330605989

Option 4 ID : 264330605988

Status : Answered

Chosen Option : 2

Q.20 Select the combination of letters that when sequentially placed in the blanks of the given series will make it logically complete.

HLO_ J_OC LL_E _LOG P_OI

- Ans**
- 1. AONEL
 - 2. ALONL
 - 3. BGHPN
 - 4. BLOEN

Question ID : **264330156321**
Option 1 ID : **264330612684**
Option 2 ID : **264330612683**
Option 3 ID : **264330612685**
Option 4 ID : **264330612686**
Status : **Answered**
Chosen Option : **2**

Section : **General Awareness**

Q.1 What is the maximum time gap between two sessions of the State Legislature?

- Ans**
- 1. Three months
 - 2. Two months
 - 3. Six months
 - 4. One year

Question ID : **264330159927**
Option 1 ID : **264330627056**
Option 2 ID : **264330627055**
Option 3 ID : **264330627057**
Option 4 ID : **264330627058**
Status : **Answered**
Chosen Option : **3**

Q.2 In 1951, the first Asian Games was held in which city?

- Ans**
- 1. Jaipur
 - 2. Pune
 - 3. Mumbai
 - 4. New Delhi

Question ID : **264330158228**
Option 1 ID : **264330620274**
Option 2 ID : **264330620272**
Option 3 ID : **264330620273**
Option 4 ID : **264330620271**
Status : **Answered**
Chosen Option : **4**

Q.3 What is a government budget?

- Ans
- 1. A report on the economic growth of a country.
 - 2. A plan for managing personal finances.
 - 3. A financial statement of a government's expected revenue and expenditure for a specific period.
 - 4. A document outlining foreign policy goals.

Question ID : 264330157270
Option 1 ID : 264330616445
Option 2 ID : 264330616443
Option 3 ID : 264330616444
Option 4 ID : 264330616446
Status : Answered
Chosen Option : 3

Q.4 Who is the author of the novel 'A Suitable Boy'?

- Ans
- 1. Kiran Desai
 - 2. Vikram Seth
 - 3. Chetan Bhagat
 - 4. Anita Desai

Question ID : 264330160967
Option 1 ID : 264330631201
Option 2 ID : 264330631200
Option 3 ID : 264330631199
Option 4 ID : 264330631202
Status : Answered
Chosen Option : 2

Q.5 Which of the following oceans extends into the Mediterranean Sea?

- Ans
- 1. Indian Ocean
 - 2. Pacific Ocean
 - 3. Atlantic Ocean
 - 4. Arctic Ocean

Question ID : 264330157834
Option 1 ID : 264330618695
Option 2 ID : 264330618698
Option 3 ID : 264330618696
Option 4 ID : 264330618697
Status : Answered
Chosen Option : 3

Q.6 What is the meaning of the term 'Collateral' in banking?

- Ans
- 1. An investment portfolio
 - 2. A type of credit card
 - 3. A form of digital payment
 - 4. An asset pledged as security for a loan

Question ID : 264330157306
Option 1 ID : 264330616589
Option 2 ID : 264330616587
Option 3 ID : 264330616588
Option 4 ID : 264330616590
Status : Answered
Chosen Option : 4

Q.7 The word 'kathak' is derived from which of the following words?

- Ans 1. Story
 2. Narrator
 3. Dance steps
 4. Bells

Question ID : 264330160787
Option 1 ID : 264330630479
Option 2 ID : 264330630480
Option 3 ID : 264330630481
Option 4 ID : 264330630482
Status : Answered
Chosen Option : 1

Q.8 Which of the following autobiographies was written by Dr. APJ Abdul Kalam, the former president of India?

- Ans 1. One Life is Not Enough
 2. Waiting for a Visa
 3. Atmakatha
 4. Wings of Fire

Question ID : 264330161755
Option 1 ID : 264330634350
Option 2 ID : 264330634349
Option 3 ID : 264330634348
Option 4 ID : 264330634347
Status : Answered
Chosen Option : 4

Q.9 Which Indian musician got the prestigious Academy Award?

- Ans 1. AR Rahman
 2. Anu Malik
 3. Naushad
 4. Bappi Lahiri

Question ID : 264330162233
Option 1 ID : 264330636262
Option 2 ID : 264330636260
Option 3 ID : 264330636261
Option 4 ID : 264330636259
Status : Answered
Chosen Option : 1

Q.10 In relation to the state of Tamil Nadu, the Constitution (Scheduled Tribes) Order (Second Amendment) Act, 2022 will include the _____ and Kurivikkaran communities in the list of Scheduled Tribes in Tamil Nadu.

- Ans 1. Narikoravan
 2. Irular
 3. Kadar
 4. Kammara

Question ID : 264330161414
Option 1 ID : 264330632983
Option 2 ID : 264330632984
Option 3 ID : 264330632985
Option 4 ID : 264330632986
Status : Answered
Chosen Option : 1

Q.11 Which antibiotic is considered the first miracle drug, used to treat throat infections, meningitis, syphilis and other bacterial infections?

- Ans
- 1. Aciclovir
 - 2. Nifuratel
 - 3. Penicillin
 - 4. Metronidazole

Question ID : 264330161078
Option 1 ID : 264330631644
Option 2 ID : 264330631646
Option 3 ID : 264330631643
Option 4 ID : 264330631645
Status : Not Answered
Chosen Option : --

Q.12 Which of the following is the Fundamental Law of any country which sets out the framework and the principal functions of various organs of the government?

- Ans
- 1. Customs
 - 2. International Law
 - 3. Constitution
 - 4. Ordinance

Question ID : 264330161395
Option 1 ID : 264330632908
Option 2 ID : 264330632910
Option 3 ID : 264330632907
Option 4 ID : 264330632909
Status : Answered
Chosen Option : 3

Q.13 Who was the singer of the famous song 'Mere Desh Ki Dharti Sona Ugle' from the film 'Upkar' (1967)?

- Ans
- 1. KJ Yesudas
 - 2. Suresh Wadkar
 - 3. Manna Dey
 - 4. Mahendra Kapoor

Question ID : 264330155513
Option 1 ID : 264330609457
Option 2 ID : 264330609458
Option 3 ID : 264330609456
Option 4 ID : 264330609455
Status : Answered
Chosen Option : 2

Q.14 Rani Machaiah was awarded with 'Padam Shri' in the year _____ for her contribution to folk dance.

- Ans
- 1. 2015
 - 2. 2018
 - 3. 2012
 - 4. 2023

Question ID : 264330155526
Option 1 ID : 264330609509
Option 2 ID : 264330609508
Option 3 ID : 264330609510
Option 4 ID : 264330609507
Status : Not Answered
Chosen Option : --

Q.15 Jyothi Yarraji created a new national record in 2023 in which of the following sports?

- Ans
- 1. Indoor hurdling
 - 2. High jump
 - 3. Shot put
 - 4. Long jump

Question ID : 264330158373
Option 1 ID : 264330620854
Option 2 ID : 264330620853
Option 3 ID : 264330620852
Option 4 ID : 264330620851
Status : Answered
Chosen Option : 4

Q.16 Which physicist's experiment during a lecture in 1820 showed the connection between electricity and magnetism?

- Ans
- 1. John Cockcroft
 - 2. William Gilbert
 - 3. Heinrich Hertz
 - 4. Hans Christian Oersted

Question ID : 264330161045
Option 1 ID : 264330631512
Option 2 ID : 264330631511
Option 3 ID : 264330631514
Option 4 ID : 264330631513
Status : Answered
Chosen Option : 4

Q.17 In the performance of _____ dance, on one side raasa dances are performed by women, whereas on the opposite side instrumentalists play the pung choloms (drums) and the karataala (cymbals).

- Ans
- 1. Kathakali
 - 2. Yakshagana
 - 3. Odissi
 - 4. Manipuri

Question ID : 264330161342
Option 1 ID : 264330632696
Option 2 ID : 264330632697
Option 3 ID : 264330632695
Option 4 ID : 264330632698
Status : Answered
Chosen Option : 4

Q.18 Who among the following was the founder of the Khudai Khidmatgars, a powerful non-violent movement among the Pathans of North-West Frontier Province?

- Ans
- 1. Khan Abdul Ghaffar Khan
 - 2. Abdul Qayyum Khan Kashmiri
 - 3. Mohammad Ali Jinnah
 - 4. Khan Abdul Jabbar Khan

Question ID : 264330161749
Option 1 ID : 264330634323
Option 2 ID : 264330634326
Option 3 ID : 264330634325
Option 4 ID : 264330634324
Status : Answered
Chosen Option : 1

Q.19 In which year was the Vernacular Press Act passed?

- Ans
- 1. 1757 CE
 - 2. 1878 CE
 - 3. 1888 CE
 - 4. 1600 CE

Question ID : 264330162318
Option 1 ID : 264330636600
Option 2 ID : 264330636602
Option 3 ID : 264330636601
Option 4 ID : 264330636599
Status : Answered
Chosen Option : 2

Q.20 Which state of India is associated with the famous thunderstorms 'Kaal Baisakhi'?

- Ans
- 1. West Bengal
 - 2. Karnataka
 - 3. Gujarat
 - 4. Haryana

Question ID : 264330161519
Option 1 ID : 264330633403
Option 2 ID : 264330633405
Option 3 ID : 264330633406
Option 4 ID : 264330633404
Status : Answered
Chosen Option : 1

Q.21 According to Ministry of Commerce and Industry (2018-19), which state of India is the largest producer of Rubber?

- Ans
- 1. Maharashtra
 - 2. Gujarat
 - 3. Kerala
 - 4. Uttar Pradesh

Question ID : 264330161487
Option 1 ID : 264330633276
Option 2 ID : 264330633278
Option 3 ID : 264330633275
Option 4 ID : 264330633277
Status : Answered
Chosen Option : 3

Q.22 In which year was the first Khelo India Winter Games held?

- Ans
- 1. 2022
 - 2. 2019
 - 3. 2021
 - 4. 2020

Question ID : 264330158238
Option 1 ID : 264330620314
Option 2 ID : 264330620311
Option 3 ID : 264330620313
Option 4 ID : 264330620312
Status : Answered
Chosen Option : 3

Q.23 'Losoong' festival, celebrated by the tribal community in _____, is usually the time when the farmers rejoice and celebrate their harvest.

- Ans
- 1. Sikkim
 - 2. Jharkhand
 - 3. Odisha
 - 4. West Bengal

Question ID : 264330160818
Option 1 ID : 264330630603
Option 2 ID : 264330630606
Option 3 ID : 264330630605
Option 4 ID : 264330630604
Status : Answered
Chosen Option : 1

Q.24 According to the Human Development Index 2021, which group of neighbouring countries has ranked behind India?

- Ans
- 1. Maldives and Bhutan
 - 2. Pakistan and Afghanistan
 - 3. Bangladesh and China
 - 4. Sri Lanka and Bhutan

Question ID : 264330160173
Option 1 ID : 264330628033
Option 2 ID : 264330628032
Option 3 ID : 264330628031
Option 4 ID : 264330628034
Status : Answered
Chosen Option : 2

Q.25 Which of the following statements is true about the Great Bath of the Indus Valley Civilisation?

- Ans
- 1. It was used for grain storage.
 - 2. It was used for farming.
 - 3. It was used as the water tank of the city.
 - 4. It was probably used for religious purpose.

Question ID : 264330160763
Option 1 ID : 264330630385
Option 2 ID : 264330630384
Option 3 ID : 264330630386
Option 4 ID : 264330630383
Status : Answered
Chosen Option : 3

Section : English Language and Comprehension

Q.1 Select the most appropriate option that can substitute the underlined segment in the given sentence.

France is a largest country.

- Ans
- 1. smaller
 - 2. larger
 - 3. smallest
 - 4. large

Question ID : 264330155422
Option 1 ID : 264330609097
Option 2 ID : 264330609096
Option 3 ID : 264330609098
Option 4 ID : 264330609095
Status : Answered
Chosen Option : 4

Q.2 The following sentence has been split into four segments. Identify the segment that contains an error.

Mr Sharma would have left / the station / by this time / tomorrow.

- Ans
- 1. tomorrow
 - 2. by this time
 - 3. the station
 - 4. Mr Sharma would have left

Question ID : 264330143051
Option 1 ID : 264330560482
Option 2 ID : 264330560481
Option 3 ID : 264330560480
Option 4 ID : 264330560479
Status : Answered
Chosen Option : 4

Q.3 Select the most appropriate meaning of the underlined idiom in the following sentence.

“Do not turn a blind eye to all the mischief your child is up to”, the teacher told the young parent.

- Ans
- 1. Close the door
 - 2. Take pride in
 - 3. Give rewards
 - 4. Pretend not to notice

Question ID : 264330153051
Option 1 ID : 264330599772
Option 2 ID : 264330599771
Option 3 ID : 264330599774
Option 4 ID : 264330599773
Status : Answered
Chosen Option : 4

Q.4 Select the most appropriate option to fill in the blank.
The mother _____ the chips because they were soggy.

- Ans
- 1. saved
 - 2. wasted
 - 3. discarded
 - 4. recovered

Question ID : 264330152579
Option 1 ID : 264330597922
Option 2 ID : 264330597920
Option 3 ID : 264330597921
Option 4 ID : 264330597919
Status : Answered
Chosen Option : 3

Q.5 Identify the most appropriate meaning of the given word.
Hope

- Ans
- 1. Caution
 - 2. Realism
 - 3. Cynicism
 - 4. Wish

Question ID : 264330152572
Option 1 ID : 264330597891
Option 2 ID : 264330597893
Option 3 ID : 264330597892
Option 4 ID : 264330597894
Status : Answered
Chosen Option : 4

Q.6 Select the most appropriate meaning of the given idiom.
Have egg on your face

- Ans**
- 1. Defeat someone thoroughly
 - 2. To be made to look foolish or embarrassed
 - 3. Making a choice between two unpleasant choices
 - 4. Reveal a secret

Question ID : 264330155282
Option 1 ID : 264330608571
Option 2 ID : 264330608573
Option 3 ID : 264330608574
Option 4 ID : 264330608572
Status : Answered
Chosen Option : 2

Q.7 The following sentence contains some errors. Select the option that correctly rectifies the error.
The tiger was tranquilized in the morning and kept in a cage to avoid disturbannces by human beings.

- Ans**
- 1. The tiger was tranquilized in the morning and kept in a cage to avoiid disturbaences by human beings.
 - 2. The tiger was tranquilized in the morning and kept in a cage to avoid disturbances by human beings.
 - 3. The tiger was traanquilized in the morning and kept in a cage to avoid dissturbances by human beings.
 - 4. The tiger was tranquillized in the morning and kept in a cage to avoid disturbances by human beings.

Question ID : 264330152692
Option 1 ID : 264330598373
Option 2 ID : 264330598374
Option 3 ID : 264330598372
Option 4 ID : 264330598371
Status : Answered
Chosen Option : 2

Q.8 Select the most appropriate synonym of the bracketed word in the following sentence to fill in the blank.
She's reading a _____(secrecy) novel and can't wait to find out who the killer is.

- Ans**
- 1. crisis
 - 2. complication
 - 3. difficulty
 - 4. mystery

Question ID : 264330152660
Option 1 ID : 264330598246
Option 2 ID : 264330598245
Option 3 ID : 264330598243
Option 4 ID : 264330598244
Status : Answered
Chosen Option : 4

Q.9 The following sentence has been divided into parts. One of them may contain an error. Select the part that contains the error from the given options. If you don't find any error, mark 'No error' as your answer.

The viable of life / depends on a pair / of conflicting realities.

- Ans
- 1. depends on a pair
 - 2. No error
 - 3. The viable of life
 - 4. of conflicting realities

Question ID : 264330153607
Option 1 ID : 264330601911
Option 2 ID : 264330601914
Option 3 ID : 264330601913
Option 4 ID : 264330601912
Status : Answered
Chosen Option : 1

Q.10 Parts of the following sentence have been given as options. Select the option that contains an error.
I shall be playing for four hours.

- Ans
- 1. four hours
 - 2. I
 - 3. shall be playing
 - 4. for

Question ID : 264330152818
Option 1 ID : 264330598866
Option 2 ID : 264330598863
Option 3 ID : 264330598864
Option 4 ID : 264330598865
Status : Answered
Chosen Option : 3

Q.11 Select the most appropriate meaning of the underlined segment in the given sentence.
Our team is all on the same page when it comes to our goals for the upcoming project.

- Ans
- 1. Be confused
 - 2. Be in agreement
 - 3. Be unsure
 - 4. Be in conflict

Question ID : 264330152927
Option 1 ID : 264330599289
Option 2 ID : 264330599287
Option 3 ID : 264330599290
Option 4 ID : 264330599288
Status : Answered
Chosen Option : 2

Q.12 Select the most appropriate meaning of the given idiom.
Bite the dust

- Ans 1. To suffer a defeat
 2. To fall from a height
 3. To remain calm
 4. To fall asleep

Question ID : 264330155285
Option 1 ID : 264330608584
Option 2 ID : 264330608583
Option 3 ID : 264330608586
Option 4 ID : 264330608585
Status : Answered
Chosen Option : 1

Q.13 Select the option that can be used as a one-word substitute for the given group of words.

A person who avoids sensory pleasures and physical comforts

- Ans 1. Frugal
 2. Epicurean
 3. Bohemian
 4. Ascetic

Question ID : 264330151869
Option 1 ID : 264330595097
Option 2 ID : 264330595098
Option 3 ID : 264330595096
Option 4 ID : 264330595095
Status : Answered
Chosen Option : 4

Q.14 Select the INCORRECTLY spelt word.

- Ans 1. Chivalrous
 2. Expose
 3. Confess
 4. Convict

Question ID : 264330152944
Option 1 ID : 264330599355
Option 2 ID : 264330599356
Option 3 ID : 264330599357
Option 4 ID : 264330599358
Status : Answered
Chosen Option : 3

Q.15 Select the option that can be used as a one-word substitute for the given group of words.

A person living in solitude like a saint for religious practices.

- Ans
- 1. Hermit
 - 2. Cretin
 - 3. Heir
 - 4. Heretic

Question ID : 264330151812
Option 1 ID : 264330594875
Option 2 ID : 264330594878
Option 3 ID : 264330594877
Option 4 ID : 264330594876
Status : Answered
Chosen Option : 1

Q.16 Select the most appropriate ANTONYM of the given word.
Clumsy

- Ans
- 1. Jealous
 - 2. Fierce
 - 3. Graceful
 - 4. Nervous

Question ID : 264330151916
Option 1 ID : 264330595279
Option 2 ID : 264330595282
Option 3 ID : 264330595280
Option 4 ID : 264330595281
Status : Answered
Chosen Option : 3

Q.17 Select the most appropriate option that can substitute the underlined segment in the given sentence.

No sooner had the sun risen over the horizon when the birds began to chirp and the squirrels started to scamper around the park.

- Ans
- 1. when the birds begin
 - 2. than birds begin
 - 3. when birds began
 - 4. than the birds began

Question ID : 264330151857
Option 1 ID : 264330595050
Option 2 ID : 264330595047
Option 3 ID : 264330595048
Option 4 ID : 264330595049
Status : Answered
Chosen Option : 4

Q.18 Select the most appropriate option to fill in the blank.

During the meeting, he went on a long and angry _____ about how the project was being mismanaged.

- Ans
- 1. shout
 - 2. whisper
 - 3. rant
 - 4. mutter

Question ID : 264330151860
Option 1 ID : 264330595062
Option 2 ID : 264330595060
Option 3 ID : 264330595059
Option 4 ID : 264330595061
Status : Answered
Chosen Option : 3

Q.19 The following sentence has been split into four segments. Identify the segment that contains a grammatical error.

I had / a bad habit of / waking up / lately.

- Ans
- 1. lately
 - 2. waking up
 - 3. a bad habit of
 - 4. I had

Question ID : 264330153185
Option 1 ID : 264330600302
Option 2 ID : 264330600301
Option 3 ID : 264330600300
Option 4 ID : 264330600299
Status : Answered
Chosen Option : 1

Q.20 Select the most appropriate option to fill in the blank.

Chaitnya was _____ from the school due to his inappropriate behaviour.

- Ans
- 1. expelled
 - 2. xpelled
 - 3. expeled
 - 4. xpeled

Question ID : 264330153305
Option 1 ID : 264330600777
Option 2 ID : 264330600778
Option 3 ID : 264330600775
Option 4 ID : 264330600776
Status : Answered
Chosen Option : 1

Comprehension:

In the following passage, some words have been deleted. Read the passage carefully and select the most appropriate option to fill in each blank.

Once there was a king named Midas who was granted a (1)_____ by Dionysus, the god of wine. For his wish, Midas asked that whatever he (2)_____ would turn to gold. Despite Dionysus' efforts to prevent it, Midas pleaded that this was a fantastic wish, and so, it was bestowed. Excited about his newly-earned (3)_____, Midas started touching all kinds of things, turning each item into pure gold. But soon, Midas became (4)_____. As he picked up a piece of food, he found he couldn't eat it. It had turned to gold in his hand. Hungry, Midas groaned, "I'll starve! Perhaps this was not such an excellent wish after all!" Seeing his dismay, Midas' (5)_____ daughter threw her arms around him to comfort him, and she, too, turned to gold. "The golden touch is no blessing," Midas cried.

SubQuestion No : 21

Q.21 Select the most appropriate option to fill in blank number 1.

- Ans 1. slavery
 2. wish
 3. employment
 4. job

Question ID : 264330153525

Option 1 ID : 264330601610

Option 2 ID : 264330601609

Option 3 ID : 264330601608

Option 4 ID : 264330601607

Status : Answered

Chosen Option : 2

Comprehension:

In the following passage, some words have been deleted. Read the passage carefully and select the most appropriate option to fill in each blank.

Once there was a king named Midas who was granted a (1)_____ by Dionysus, the god of wine. For his wish, Midas asked that whatever he (2)_____ would turn to gold. Despite Dionysus' efforts to prevent it, Midas pleaded that this was a fantastic wish, and so, it was bestowed. Excited about his newly-earned (3)_____, Midas started touching all kinds of things, turning each item into pure gold. But soon, Midas became (4)_____. As he picked up a piece of food, he found he couldn't eat it. It had turned to gold in his hand. Hungry, Midas groaned, "I'll starve! Perhaps this was not such an excellent wish after all!" Seeing his dismay, Midas' (5)_____ daughter threw her arms around him to comfort him, and she, too, turned to gold. "The golden touch is no blessing," Midas cried.

SubQuestion No : 22

Q.22 Select the most appropriate option to fill in blank number 2.

- Ans 1. next felt
 2. touched
 3. kept
 4. left

Question ID : 264330153526

Option 1 ID : 264330601614

Option 2 ID : 264330601612

Option 3 ID : 264330601611

Option 4 ID : 264330601613

Status : Answered

Chosen Option : 2

Comprehension:

In the following passage, some words have been deleted. Read the passage carefully and select the most appropriate option to fill in each blank.

Once there was a king named Midas who was granted a (1)_____ by Dionysus, the god of wine. For his wish, Midas asked that whatever he (2)_____ would turn to gold. Despite Dionysus' efforts to prevent it, Midas pleaded that this was a fantastic wish, and so, it was bestowed. Excited about his newly-earned (3)_____, Midas started touching all kinds of things, turning each item into pure gold. But soon, Midas became (4)_____. As he picked up a piece of food, he found he couldn't eat it. It had turned to gold in his hand. Hungry, Midas groaned, "I'll starve! Perhaps this was not such an excellent wish after all!" Seeing his dismay, Midas' (5)_____ daughter threw her arms around him to comfort him, and she, too, turned to gold. "The golden touch is no blessing," Midas cried.

SubQuestion No : 23

Q.23 Select the most appropriate option to fill in blank number 3.

- Ans 1. legacies
 2. powers
 3. awards
 4. visuals

Question ID : 264330153527

Option 1 ID : 264330601618

Option 2 ID : 264330601615

Option 3 ID : 264330601617

Option 4 ID : 264330601616

Status : Answered

Chosen Option : 2

Comprehension:

In the following passage, some words have been deleted. Read the passage carefully and select the most appropriate option to fill in each blank.

Once there was a king named Midas who was granted a (1)_____ by Dionysus, the god of wine. For his wish, Midas asked that whatever he (2)_____ would turn to gold. Despite Dionysus' efforts to prevent it, Midas pleaded that this was a fantastic wish, and so, it was bestowed. Excited about his newly-earned (3)_____, Midas started touching all kinds of things, turning each item into pure gold. But soon, Midas became (4)_____. As he picked up a piece of food, he found he couldn't eat it. It had turned to gold in his hand. Hungry, Midas groaned, "I'll starve! Perhaps this was not such an excellent wish after all!" Seeing his dismay, Midas' (5)_____ daughter threw her arms around him to comfort him, and she, too, turned to gold. "The golden touch is no blessing," Midas cried.

SubQuestion No : 24

Q.24 Select the most appropriate option to fill in blank number 4.

- Ans 1. mad
 2. hungry
 3. tired
 4. angry

Question ID : 264330153528

Option 1 ID : 264330601620

Option 2 ID : 264330601622

Option 3 ID : 264330601621

Option 4 ID : 264330601619

Status : Answered

Chosen Option : 3

Comprehension:

In the following passage, some words have been deleted. Read the passage carefully and select the most appropriate option to fill in each blank.

Once there was a king named Midas who was granted a (1)_____ by Dionysus, the god of wine. For his wish, Midas asked that whatever he (2)_____ would turn to gold. Despite Dionysus' efforts to prevent it, Midas pleaded that this was a fantastic wish, and so, it was bestowed. Excited about his newly-earned (3)_____, Midas started touching all kinds of things, turning each item into pure gold. But soon, Midas became (4)_____. As he picked up a piece of food, he found he couldn't eat it. It had turned to gold in his hand. Hungry, Midas groaned, "I'll starve! Perhaps this was not such an excellent wish after all!" Seeing his dismay, Midas' (5)_____ daughter threw her arms around him to comfort him, and she, too, turned to gold. "The golden touch is no blessing," Midas cried.

SubQuestion No : 25

Q.25 Select the most appropriate option to fill in blank number 5.

- Ans
- 1. estranged
 - 2. guarded
 - 3. beloved
 - 4. hated

Question ID : **264330153529**

Option 1 ID : **264330601624**

Option 2 ID : **264330601626**

Option 3 ID : **264330601623**

Option 4 ID : **264330601625**

Status : **Answered**

Chosen Option : **3**

Multi Tasking Non Technical Staff and Havaladar CBIC and CBN Examination 2023

Roll Number	
Candidate Name	
Venue Name	iON Digital Zone IDZ Powai
Exam Date	11/09/2023
Exam Time	9:00 AM - 11:00 AM
Subject	MTS Non Tech Havaladar CBIC and CBN Examination 2023

Section : Numerical and Mathematical Ability

Q.1 If the selling price of 16 bulbs is equal to the cost price of 24 bulbs, what is the profit percentage?

- Ans
- 1. 40%
 - 2. 50%
 - 3. 25%
 - 4. 20%

Question ID : 264330161014

Option 1 ID : 264330631388

Option 2 ID : 264330631390

Option 3 ID : 264330631389

Option 4 ID : 264330631387

Status : Answered

Chosen Option : 2

Q.2 If the manufacturer gains 10%, the wholesale dealer gains 12% and the retailer gains 15%, then find the cost production of a table, the retail price of which is ₹1,771.

- Ans
- 1. ₹1,150
 - 2. ₹1,050
 - 3. ₹1,250
 - 4. ₹1,350

Question ID : 264330155998

Option 1 ID : 264330611393

Option 2 ID : 264330611391

Option 3 ID : 264330611392

Option 4 ID : 264330611394

Status : Answered

Chosen Option : 3

Q.3 If the average of two numbers is 12 and the product of the same two numbers is 119, then the difference of those two numbers is:

- Ans**
- 1. 7
 - 2. 6
 - 3. 10
 - 4. 8

Question ID : **264330156508**
Option 1 ID : **264330613420**
Option 2 ID : **264330613422**
Option 3 ID : **264330613421**
Option 4 ID : **264330613419**
Status : **Answered**
Chosen Option : **3**

Q.4 Two cyclists start at the same time from opposite ends of a 200 km long straight road. One cyclist travels at a speed of 20 km/h and the other at a speed of 30 km/h. How long will it take them to meet?

- Ans**
- 1. 5 hours
 - 2. 4 hours
 - 3. 5.5 hours
 - 4. 4.5 hours

Question ID : **264330156274**
Option 1 ID : **264330612497**
Option 2 ID : **264330612495**
Option 3 ID : **264330612498**
Option 4 ID : **264330612496**
Status : **Answered**
Chosen Option : **2**

Q.5 A hollow metal sphere of internal and external radii 5 cm and 6 cm, respectively, is melted into a solid cone of base radius 5.2 cm. What is the height (in cm, rounded off to 1 decimal place) of the cone?

- Ans**
- 1. 11.8
 - 2. 12.8
 - 3. 13.5
 - 4. 14.5

Question ID : **264330153794**
Option 1 ID : **264330602641**
Option 2 ID : **264330602639**
Option 3 ID : **264330602642**
Option 4 ID : **264330602640**
Status : **Answered**
Chosen Option : **3**

Q.6 If Rita's salary increases by 5% in the first year and by 2% in the next year, then what is the net percentage increase in her salary after two years?

- Ans**
- 1. 6.1%
 - 2. 5.1%
 - 3. 8.1%
 - 4. 7.1%

Question ID : 264330156218
Option 1 ID : 264330612272
Option 2 ID : 264330612271
Option 3 ID : 264330612274
Option 4 ID : 264330612273
Status : Answered
Chosen Option : 4

Q.7 Mohan can complete a piece of work in 24 days. He worked for 6 days and left the work. Thereafter, Sohan finished the remaining work in 21 days. In how many days, can Mohan and Sohan together complete it?

- Ans**
- 1. $12\frac{12}{13}$ days
 - 2. $12\frac{9}{13}$ days
 - 3. $12\frac{11}{13}$ days
 - 4. $12\frac{10}{13}$ days

Question ID : 264330156238
Option 1 ID : 264330612354
Option 2 ID : 264330612351
Option 3 ID : 264330612353
Option 4 ID : 264330612352
Status : Answered
Chosen Option : 1

Q.8 The volume (in cm^3) of a sphere with diameter 7 cm is:

Take $\pi = \frac{22}{7}$

- Ans**
- 1. 179.66
 - 2. 168.44
 - 3. 197.66
 - 4. 186.44

Question ID : 264330156368
Option 1 ID : 264330612873
Option 2 ID : 264330612874
Option 3 ID : 264330612871
Option 4 ID : 264330612872
Status : Answered
Chosen Option : 1

Q.9 In a fort, 160 men had food for 94 days. After 10 days, 20 men left the fort. How long (in days) would the food last at the same rate?

- Ans**
- 1. 84
 - 2. 90
 - 3. 96
 - 4. 100

Question ID : 264330156495
Option 1 ID : 264330613368
Option 2 ID : 264330613370
Option 3 ID : 264330613369
Option 4 ID : 264330613367
Status : Answered
Chosen Option : 3

Q.10 What sum of money (in ₹) will earn an interest of ₹1,800 at the rate of 6% per annum simple interest in five years?

- Ans**
- 1. 18,000
 - 2. 6,000
 - 3. 8,000
 - 4. 5,000

Question ID : 264330156484
Option 1 ID : 264330613326
Option 2 ID : 264330613323
Option 3 ID : 264330613325
Option 4 ID : 264330613324
Status : Answered
Chosen Option : 2

Q.11 If the ratio among the time taken by three cars to travel a certain distance is 2 : 3 : 5, then the ratio of speeds of these cars will be:

- Ans**
- 1. 10 : 6 : 15
 - 2. 15 : 9 : 8
 - 3. 10 : 15 : 8
 - 4. 15 : 10 : 6

Question ID : 264330156292
Option 1 ID : 264330612567
Option 2 ID : 264330612570
Option 3 ID : 264330612568
Option 4 ID : 264330612569
Status : Answered
Chosen Option : 4

Q.12 The fourth proportion of 2, a and 5a is _____.

- Ans
- 1. $\frac{2a^2}{5}$
 - 2. $\frac{5a^2}{2}$
 - 3. $\frac{2a^2}{3}$
 - 4. $\frac{5a^2}{3}$

Question ID : 264330153809
 Option 1 ID : 264330602702
 Option 2 ID : 264330602701
 Option 3 ID : 264330602699
 Option 4 ID : 264330602700
 Status : Answered
 Chosen Option : 2

Q.13 Find the LCM of 1288, 230, 276.

- Ans
- 1. 19,320
 - 2. 19,230
 - 3. 9,660
 - 4. 6,440

Question ID : 264330156092
 Option 1 ID : 264330611768
 Option 2 ID : 264330611767
 Option 3 ID : 264330611769
 Option 4 ID : 264330611770
 Status : Answered
 Chosen Option : 1

Q.14 Study the following table and answer the question given below it.
 Distribution of students according to professional courses.

S.No	Course	Faculty			
		Arts		Science	
		Girls	Boys	Girls	Boys
1.	Business Management	25	45	25	65
2.	Type-writing	23	186	20	32
3.	Costing	25	120	12	58
4.	Typewriting & Costing	12	100	3	5

The percentage of students of Arts faculty doing costing only is (round to the nearest integer):

- Ans
- 1. 18
 - 2. 15
 - 3. 10
 - 4. 27

Question ID : 264330156351
 Option 1 ID : 264330612805
 Option 2 ID : 264330612804
 Option 3 ID : 264330612803
 Option 4 ID : 264330612806
 Status : Answered
 Chosen Option : 4

Q.15 In some quantity of water ,four times the quantity of milk is added and the quantity of the mixture is now 7.5 litres. How much more milk is to be added to the mixture to have 90% milk in the mixture ?

- Ans
- 1. 9 liters
 - 2. 9.5 liters
 - 3. 6 liters
 - 4. 7.5 liters

Question ID : 264330153800
 Option 1 ID : 264330602665
 Option 2 ID : 264330602666
 Option 3 ID : 264330602663
 Option 4 ID : 264330602664
 Status : Answered
 Chosen Option : 4

Q.16 Evaluate $3\frac{1}{2} - [2\frac{1}{4} \div \{1\frac{1}{4} - \frac{3}{4}(1\frac{1}{2} - \frac{1}{2} - 2\frac{1}{2})\}]$:

- Ans
- 1. $1\frac{21}{38}$
 - 2. $2\frac{19}{18}$
 - 3. $2\frac{21}{38}$
 - 4. $\frac{47}{38}$


Question ID : 264330154038
 Option 1 ID : 264330603618
 Option 2 ID : 264330603615
 Option 3 ID : 264330603616
 Option 4 ID : 264330603617
 Status : Answered
 Chosen Option : 3

Q.17 Arvind, Bilal, Carmen invest ₹49,000 towards a business. Arvind invests ₹5,000 more than Bilal and Bilal invests ₹4,000 more than Carmen. Out of a total profit of ₹98,000, how much does Bilal receive?

- Ans
- 1. ₹34,400
 - 2. ₹33,200
 - 3. ₹30,500
 - 4. ₹32,000

Question ID : 264330156108
 Option 1 ID : 264330611831
 Option 2 ID : 264330611834
 Option 3 ID : 264330611833
 Option 4 ID : 264330611832
 Status : Answered
 Chosen Option : 4

Q.18 The bar graph shows the average marks scored in Mathematics examination (out of 100) by students of 6 divisions of XIIth standard.



What is the ratio of the average marks scored by Division B to Division D?

- Ans**
- 1. 9 : 13
 - 2. 1 : 3
 - 3. 13 : 9
 - 4. 1 : 9

Question ID : 264330154101
Option 1 ID : 264330603867
Option 2 ID : 264330603869
Option 3 ID : 264330603868
Option 4 ID : 264330603870
Status : Answered
Chosen Option : 1

Q.19 An amount of ₹2,000 amounts to ₹2,880 in 2 years. What will be the rate of interest if compounded annually?

- Ans**
- 1. 12%
 - 2. 28%
 - 3. 10%
 - 4. 20%

Question ID : 264330154054
Option 1 ID : 264330603682
Option 2 ID : 264330603680
Option 3 ID : 264330603679
Option 4 ID : 264330603681
Status : Answered
Chosen Option : 4

Q.20 The average weight of some students in class 12th was 56 kg. When seven students whose average weight was 58 kg joined the class, the average weight of all the students increased by 200 gm. Find the number of students in the class in the beginning?

- Ans**
- 1. 56
 - 2. 77
 - 3. 49
 - 4. 63

Question ID : 264330156548
Option 1 ID : 264330613580
Option 2 ID : 264330613582
Option 3 ID : 264330613579
Option 4 ID : 264330613581
Status : Answered
Chosen Option : 4

Q.1 What will come in the place of '?' in the following equation, if '+' and '-' are interchanged and '×' and '÷' are interchanged?
 $23 \div 2 + 41 - 84 \times 14 = ?$

- Ans**
- 1. 21
 - 2. 1
 - 3. 31
 - 4. 11

Question ID : 264330155668
 Option 1 ID : 264330610075
 Option 2 ID : 264330610078
 Option 3 ID : 264330610077
 Option 4 ID : 264330610076
 Status : Answered
 Chosen Option : 4

Q.2 In a certain code language, 'yes you can' is coded as 'an cf dt' and 'you are enough' is coded as 'sk dt hw'. How is 'you' coded in the given language?

- Ans**
- 1. cf
 - 2. sk
 - 3. dt
 - 4. hw

Question ID : 264330151706
 Option 1 ID : 264330594451
 Option 2 ID : 264330594454
 Option 3 ID : 264330594452
 Option 4 ID : 264330594453
 Status : Answered
 Chosen Option : 3

Q.3 Read the given statements and conclusions carefully. You have to take the given statements to be true even if they seem to be at variance from commonly known facts. You have to decide which conclusion/s logically follow/s from the given statements.

Statements: All phones are flowers. Some flowers are bags. All bags are heavy.

Conclusion I: Some phones are flowers.

Conclusion II: All flowers are bags.

- Ans**
- 1. Neither conclusion (I) nor (II) is follow.
 - 2. Both conclusions (I) and (II) are follow.
 - 3. Only conclusion (II) is follow.
 - 4. Only conclusion (I) is follow.

Question ID : 264330155907
 Option 1 ID : 264330611033
 Option 2 ID : 264330611034
 Option 3 ID : 264330611032
 Option 4 ID : 264330611031
 Status : Answered
 Chosen Option : 1

Q.4 The position of how many letters will remain unchanged if each of the letter in the word 'CHILDREN' is arranged in alphabetical order?

- Ans**
- ✓ 1. One
 - ✗ 2. Four
 - ✗ 3. Three
 - ✗ 4. Two

Question ID : 264330154328
Option 1 ID : 264330604775
Option 2 ID : 264330604776
Option 3 ID : 264330604778
Option 4 ID : 264330604777
Status : Answered
Chosen Option : 1

Q.5 Read the given statements and conclusions carefully. You have to take the given statements to be true even if they seem to be at variance from commonly known facts. You have to decide which conclusion/s logically follow/s from the given statements.

Statements: All torches are guitars. Some guitars are bulbs. No bulb is a stove.

Conclusion I: All bulbs are guitars.

Conclusion II: No guitar is a torch.

- Ans**
- ✓ 1. Neither conclusion (I) nor (II) is follow.
 - ✗ 2. Only conclusion (I) is follow.
 - ✗ 3. Both conclusions (I) and (II) are follow.
 - ✗ 4. Only conclusion (II) is follow.

Question ID : 264330155912
Option 1 ID : 264330611053
Option 2 ID : 264330611051
Option 3 ID : 264330611054
Option 4 ID : 264330611052
Status : Answered
Chosen Option : 1

Q.6 What will come in place of '?' in the following equation, if '+' and '-' are interchanged and 'x' and '÷' are interchanged?

$$15 - 6 + 12 \times 3 \div 4 = ?$$

- Ans**
- ✓ 1. 5
 - ✗ 2. 10
 - ✗ 3. 7
 - ✗ 4. 9

Question ID : 264330154662
Option 1 ID : 264330606112
Option 2 ID : 264330606111
Option 3 ID : 264330606114
Option 4 ID : 264330606113
Status : Answered
Chosen Option : 1

Q.7 Select the combination of letters that when sequentially placed in the blanks of the given series, will complete the series.

NO_N__NO__ON

- Ans
- ✓ 1. NONNN
 - ✗ 2. OONO
 - ✗ 3. ONOON
 - ✗ 4. NONON

Question ID : 264330151653

Option 1 ID : 264330594241

Option 2 ID : 264330594240

Option 3 ID : 264330594242

Option 4 ID : 264330594239

Status : Answered

Chosen Option : 1

Q.8 What should come in place of '?' in the given series?

4 19 79 319 1279 ?

- Ans
- ✗ 1. 4875
 - ✗ 2. 5299
 - ✗ 3. 4913
 - ✓ 4. 5119

Question ID : 264330151459

Option 1 ID : 264330593463

Option 2 ID : 264330593466

Option 3 ID : 264330593464

Option 4 ID : 264330593465

Status : Answered

Chosen Option : 4

Q.9 Six people, Deepak, Gauri, Babita, Ira, Farheen and Hema are sitting in a straight line, facing north. Deepak sits 2nd from the left end. Gauri sits 2nd to the right of Deepak. Ira sits 2nd to the right of Gauri. Farheen sits 3rd to the left of Ira. Babita sits 2nd to the left of Farheen. Who sits 3rd to the right of Deepak?

- Ans
- ✗ 1. Farheen
 - ✓ 2. Hema
 - ✗ 3. Babita
 - ✗ 4. Ira

Question ID : 264330155661

Option 1 ID : 264330610050

Option 2 ID : 264330610047

Option 3 ID : 264330610049

Option 4 ID : 264330610048

Status : Answered

Chosen Option : 2

Q.10 What should come in place of '?' in the given series?

5 23 95 ? 1535 6143 24575

- Ans
- ✓ 1. 383
 - ✗ 2. 347
 - ✗ 3. 312
 - ✗ 4. 361

Question ID : 264330151493
Option 1 ID : 264330593602
Option 2 ID : 264330593600
Option 3 ID : 264330593599
Option 4 ID : 264330593601
Status : Answered
Chosen Option : 1

Q.11 Select the word-pair that best represents a similar relationship to the one expressed in the pair of words given below.

(The words must be considered as meaningful English words and must not be related to each other based on the number of letters/number of consonants/vowels in the word)

Legend : Map

- Ans
- ✗ 1. Volume : Guidebook
 - ✓ 2. Glossary : Text
 - ✗ 3. Column : Essay
 - ✗ 4. Profession : Biography

Question ID : 264330154642
Option 1 ID : 264330606031
Option 2 ID : 264330606033
Option 3 ID : 264330606034
Option 4 ID : 264330606032
Status : Answered
Chosen Option : 1

Q.12 What should come in place of ? in the given series based on the English alphabetical order?

CSP, EUQ, GWR, IYS, ?

- Ans
- ✗ 1. JBS
 - ✗ 2. LBT
 - ✓ 3. KAT
 - ✗ 4. JAR

Question ID : 264330155783
Option 1 ID : 264330610536
Option 2 ID : 264330610538
Option 3 ID : 264330610535
Option 4 ID : 264330610537
Status : Answered
Chosen Option : 3

Q.13 Find out the correct alternative that when filled in the blanks in the same sequence will make the series logically complete.

BK_Y _KUT R_PO MKK_ HK_E

- Ans**
- 1. WKBFP
 - 2. WBHZP
 - 3. ZWKJF
 - 4. ZKWLF

Question ID : 264330154729
Option 1 ID : 264330606379
Option 2 ID : 264330606381
Option 3 ID : 264330606382
Option 4 ID : 264330606380
Status : Answered
Chosen Option : 3

Q.14 In a certain code language, 'BACK' is coded as '17' and 'DTDC' is coded as '31'. What is the code for 'JAAM' in the given code language?

- Ans**
- 1. 35
 - 2. 20
 - 3. 40
 - 4. 25

Question ID : 264330155819
Option 1 ID : 264330610680
Option 2 ID : 264330610681
Option 3 ID : 264330610682
Option 4 ID : 264330610679
Status : Answered
Chosen Option : 4

Q.15 In the following number-pairs, the second number is obtained by applying certain mathematical operations to the first number. Select the set in which the numbers are related in the same way as are the numbers of the following sets.
(NOTE: Operations should be performed on the whole numbers, without breaking down the numbers into its constituent digits. E.g. 13 – Operations on 13 such as adding / subtracting / multiplying etc. to 13 can be performed. Breaking down 13 into 1 and 3 and then performing mathematical operations on 1 and 3 is not allowed)
8, 128
9, 162

- Ans**
- 1. 11, 124
 - 2. 14, 392
 - 3. 12, 149
 - 4. 13, 170

Question ID : 264330151619
Option 1 ID : 264330594103
Option 2 ID : 264330594106
Option 3 ID : 264330594104
Option 4 ID : 264330594105
Status : Answered
Chosen Option : 2

Q.16 Which figure should replace the question mark (?) if the following figure series were to be continued?

7	V	C	7	=	C	□	=	
=	↑	Z	Z	V	=	V	3	7
3	D	↑	3	Z	↑	3	Z	?

Ans

✓ 1.

	V	□
C	Z	=
7	3	

✗ 2.

	=	V
C	Z	□
7	3	

✗ 3.

	V	□
3	7	=
Z	C	

✗ 4.

	=	V
3	7	□
Z	C	

Question ID : 264330154761
Option 1 ID : 264330606507
Option 2 ID : 264330606509
Option 3 ID : 264330606510
Option 4 ID : 264330606508

Status : Answered

Chosen Option : 1

Q.17 What should come in place of '?' in the given series?

11 59 299 1499 7499 ?

- Ans
- ✗ 1. 38199
 - ✗ 2. 37699
 - ✓ 3. 37499
 - ✗ 4. 38499

Question ID : 264330151469
Option 1 ID : 264330593505
Option 2 ID : 264330593504
Option 3 ID : 264330593503
Option 4 ID : 264330593506

Status : Answered

Chosen Option : 3

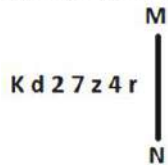
Q.18 In the following number-pairs, the second number is obtained by applying certain mathematical operations to the first number. Select the set in which the numbers are related in the same way as are the numbers of the following sets.
(NOTE : Operations should be performed on the whole numbers, without breaking down the numbers into its constituent digits. E.g. 13 – Operations on 13 such as adding /deleting /multiplying etc. to 13 can be performed. Breaking down 13 into 1 and 3 and then performing mathematical operations on 1 and 3 is not allowed)

16 : 41
11 : 26

- Ans
- 1. 7 : 28
 - 2. 5 : 15
 - 3. 21 : 84
 - 4. 12 : 29

Question ID : 264330154650
Option 1 ID : 264330606065
Option 2 ID : 264330606066
Option 3 ID : 264330606063
Option 4 ID : 264330606064
Status : Answered
Chosen Option : 4

Q.19 Select the correct mirror image of the given figure when the mirror is placed at MN as shown below.



- Ans
- 1. r p 5 7 z 4 r K
 - 2. r q 5 7 z 4 r K
 - 3. r q 2 7 z 4 r K
 - 4. r p 5 7 z 4 r K

Question ID : 264330151506
Option 1 ID : 264330593654
Option 2 ID : 264330593652
Option 3 ID : 264330593651
Option 4 ID : 264330593653
Status : Answered
Chosen Option : 2

Q.20 Select the option figure in which the given figure (X) is embedded as its part (rotation is NOT allowed).



(X)

Ans

✗ 1.



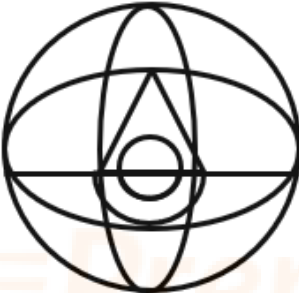
✗ 2.



✓ 3.



✗ 4.



Question ID : 264330151725

Option 1 ID : 264330594527

Option 2 ID : 264330594528

Option 3 ID : 264330594530

Option 4 ID : 264330594529

Status : Answered

Chosen Option : 3

Q.1 What is the purpose of a savings account?

- Ans
- 1. Obtaining a mortgage loan
 - 2. Earning interest on deposits
 - 3. Making day-to-day transactions
 - 4. Paying bills online

Question ID : 264330157301
Option 1 ID : 264330616569
Option 2 ID : 264330616568
Option 3 ID : 264330616567
Option 4 ID : 264330616570
Status : Answered
Chosen Option : 3

Q.2 According to the Census of India 2011, the female literacy rate was recorded as

- Ans
- 1. 75.35%
 - 2. 65.46%
 - 3. 55.84%
 - 4. 70.24%

Question ID : 264330161557
Option 1 ID : 264330633557
Option 2 ID : 264330633558
Option 3 ID : 264330633555
Option 4 ID : 264330633556
Status : Answered
Chosen Option : 2

Q.3 Which of the following crops is most suitable for black soil?

- Ans
- 1. Soybean
 - 2. Maize
 - 3. Cotton
 - 4. Barley

Question ID : 264330161316
Option 1 ID : 264330632591
Option 2 ID : 264330632592
Option 3 ID : 264330632594
Option 4 ID : 264330632593
Status : Answered
Chosen Option : 3

Q.4 In India, the 'Aus', 'Aman' and 'Boro' terms are associated with which crop from the following?

- Ans
- 1. Wheat
 - 2. Gram
 - 3. Sugarcane
 - 4. Paddy

Question ID : 264330161510
Option 1 ID : 264330633367
Option 2 ID : 264330633370
Option 3 ID : 264330633369
Option 4 ID : 264330633368
Status : Answered
Chosen Option : 4

Q.5 The President of India conferred the Padma Shri award to Gurcharan Singh for his distinguished service in the field of _____ in 2023.

- Ans
- 1. Tennis
 - 2. Cricket
 - 3. Football
 - 4. Badminton

Question ID : 264330161443
Option 1 ID : 264330633102
Option 2 ID : 264330633099
Option 3 ID : 264330633100
Option 4 ID : 264330633101
Status : Not Answered
Chosen Option : --

Q.6 Who moved the resolution proposing that the National Flag of India be a 'horizontal tricolour of saffron, white and dark green in equal proportion'?

- Ans
- 1. Sardar Vallabhbhai Patel
 - 2. Jawaharlal Nehru
 - 3. Mahatma Gandhi
 - 4. Dr Rajendra Prasad

Question ID : 264330161747
Option 1 ID : 264330634317
Option 2 ID : 264330634316
Option 3 ID : 264330634315
Option 4 ID : 264330634318
Status : Answered
Chosen Option : 2

Q.7 In which of the following States was the first Janjatiya Khel Mahotsav held?

- Ans
- 1. Odisha
 - 2. Chhattisgarh
 - 3. Jharkhand
 - 4. Andhra Pradesh

Question ID : 264330161127
Option 1 ID : 264330631839
Option 2 ID : 264330631841
Option 3 ID : 264330631840
Option 4 ID : 264330631842
Status : Answered
Chosen Option : 3

Q.8 Identify the Indian singer who sang the song 'Ae mere watan ke logon jara akhon mein bharlo paani...' before the first Prime Minister of India, Pandit Jawaharlal Nehru.

- Ans
- 1. Lata Mangeshkar
 - 2. Mohammad Rafi
 - 3. Mukesh
 - 4. Asha Bhosle

Question ID : 264330160980
Option 1 ID : 264330631251
Option 2 ID : 264330631254
Option 3 ID : 264330631253
Option 4 ID : 264330631252
Status : Answered
Chosen Option : 1

Q.9 Which regulatory body in India is responsible for overseeing and regulating Micro Finance Institutions?

- Ans**
- 1. Securities and Exchange Board of India (SEBI)
 - 2. Small Industries Development Bank of India (SIDBI)
 - 3. Reserve Bank of India (RBI)
 - 4. National Bank for Agriculture and Rural Development (NABARD)

Question ID : 264330157285
Option 1 ID : 264330616504
Option 2 ID : 264330616505
Option 3 ID : 264330616503
Option 4 ID : 264330616506
Status : Answered
Chosen Option : 2

Q.10 Who among the following was the viceroy of India at the time of India's independence from colonial rule on 15 August 1947?

- Ans**
- 1. Lord Wavell
 - 2. Lord Willingdon
 - 3. Lord Mountbatten
 - 4. Lord Linlithgow

Question ID : 264330160824
Option 1 ID : 264330630628
Option 2 ID : 264330630630
Option 3 ID : 264330630627
Option 4 ID : 264330630629
Status : Answered
Chosen Option : 3

Q.11 Which of the following is the legislative organ of the Union Government?

- Ans**
- 1. Cabinet
 - 2. Supreme Court
 - 3. Executive
 - 4. Parliament

Question ID : 264330159920
Option 1 ID : 264330627030
Option 2 ID : 264330627029
Option 3 ID : 264330627027
Option 4 ID : 264330627028
Status : Answered
Chosen Option : 4

Q.12 Due to rapid urbanisation, the human lifestyle has changed severely; obesity is a major health issue in such condition. Which of the following is a reason for obesity?

- Ans**
- 1. Excessive consumption of water
 - 2. Excessive intake of high calorie foods
 - 3. Lack of protein
 - 4. Lack of vitamins in regular diet

Question ID : 264330156610
Option 1 ID : 264330613828
Option 2 ID : 264330613827
Option 3 ID : 264330613830
Option 4 ID : 264330613829
Status : Answered
Chosen Option : 2

Q.13 Who won the Best Playback Singer (Male) award in the 68th Filmfare Awards 2023?

- Ans
- 1. Mohit Chauhan
 - 2. Shaan
 - 3. Arijit Singh
 - 4. Amit Mishra

Question ID : 264330155516
Option 1 ID : 264330609467
Option 2 ID : 264330609469
Option 3 ID : 264330609468
Option 4 ID : 264330609470
Status : Answered
Chosen Option : 3

Q.14 Where was Shree Narayana Dharma Paripalana Yogam founded?

- Ans
- 1. Tamil Nādu
 - 2. Kerala
 - 3. Karnataka
 - 4. Telangana

Question ID : 264330160890
Option 1 ID : 264330630892
Option 2 ID : 264330630891
Option 3 ID : 264330630894
Option 4 ID : 264330630893
Status : Not Answered
Chosen Option : --

Q.15 Who is the renowned kathak dancer, student of 'Pandit Birju Maharaj' and also served as an officer with Indian Audit and Accounts Services?

- Ans
- 1. Sonal Mansingh
 - 2. Guru Bipin Singh
 - 3. Shovana Narayan
 - 4. Padma Subrahmanayam

Question ID : 264330159063
Option 1 ID : 264330623613
Option 2 ID : 264330623611
Option 3 ID : 264330623612
Option 4 ID : 264330623614
Status : Answered
Chosen Option : 3

Q.16 Shama Bhate received the Sangeet Natak Akademi Award-2021 (given in February 2023) for her contribution to which dance form of the following?

- Ans**
- 1. Manipuri
 - 2. Kathak
 - 3. Bharatanatyam
 - 4. Mohiniyattam

Question ID : 264330155518
Option 1 ID : 264330609477
Option 2 ID : 264330609476
Option 3 ID : 264330609475
Option 4 ID : 264330609478
Status : Answered
Chosen Option : 1

Q.17 Which of the following Indus Valley sites is now located in Pakistan?

- Ans**
- 1. Harappa
 - 2. Lothal
 - 3. Alamgirpur
 - 4. Kalibangan

Question ID : 264330162697
Option 1 ID : 264330638108
Option 2 ID : 264330638110
Option 3 ID : 264330638107
Option 4 ID : 264330638109
Status : Answered
Chosen Option : 1

Q.18 In April 2023, Satwiksairaj Rankireddy and Chirag Shetty made history, becoming the first Indian men's doubles pair to win a gold medal at the Badminton Asia Championships. Where was this championship held?

- Ans**
- 1. Singapore
 - 2. Dubai
 - 3. Qatar
 - 4. Malaysia

Question ID : 264330161153
Option 1 ID : 264330631946
Option 2 ID : 264330631944
Option 3 ID : 264330631943
Option 4 ID : 264330631945
Status : Not Answered
Chosen Option : --

Q.19 Which of the following states has introduced a dedicated Semiconductor Policy 2022-27 with a view to generate at least 2,00,000 new employment opportunities in the state?

- Ans 1. Andhra Pradesh
 2. Maharashtra
 3. Gujarat
 4. Kerala

Question ID : 264330161409
Option 1 ID : 264330632965
Option 2 ID : 264330632963
Option 3 ID : 264330632964
Option 4 ID : 264330632966
Status : Answered
Chosen Option : 1

Q.20 The classical dance style of Bharatanatyam belongs to the state of _____.

- Ans 1. Karnataka
 2. Tamil Nadu
 3. Assam
 4. Rajasthan

Question ID : 264330159049
Option 1 ID : 264330623555
Option 2 ID : 264330623556
Option 3 ID : 264330623557
Option 4 ID : 264330623558
Status : Answered
Chosen Option : 2

Q.21 Which of the following peninsular rivers of India is a west flowing river?

- Ans 1. Kaveri
 2. Narmada
 3. Godavari
 4. Krishna

Question ID : 264330161496
Option 1 ID : 264330633312
Option 2 ID : 264330633314
Option 3 ID : 264330633311
Option 4 ID : 264330633313
Status : Answered
Chosen Option : 1

Q.22 Which Articles of the Constitution of India deal with the Union and its territory?

- Ans 1. Articles 5-11
 2. Articles 1-4
 3. Articles 12-35
 4. Article 36-51

Question ID : 264330159894
Option 1 ID : 264330626924
Option 2 ID : 264330626923
Option 3 ID : 264330626925
Option 4 ID : 264330626926
Status : Answered
Chosen Option : 2

Q.23 'The Great Indian Novel' is a satirical novel by _____.

- Ans
- 1. Suryakant Tripathi
 - 2. KR Narayan
 - 3. Munshi Prem Chand
 - 4. Shashi Tharoor

Question ID : 264330155496
Option 1 ID : 264330609387
Option 2 ID : 264330609388
Option 3 ID : 264330609389
Option 4 ID : 264330609390
Status : Not Answered
Chosen Option : --

Q.24 What is the systematic name of a colourless gas with a faint, ethereal odour called acetylene, widely used for welding?

- Ans
- 1. Ethyne
 - 2. Ethanoic anhydride
 - 3. Azoethane
 - 4. Ethyl acetate

Question ID : 264330161050
Option 1 ID : 264330631532
Option 2 ID : 264330631533
Option 3 ID : 264330631534
Option 4 ID : 264330631531
Status : Not Answered
Chosen Option : --

Q.25 Identify the correct pair of novel and its writer from the following.

- Ans
- 1. Seven Summers - Mulk Raj Anand
 - 2. The White Tiger - Kiran Desai
 - 3. A Suitable Boy- Amitav Ghosh
 - 4. The Inheritance of Loss -Aravind Adiga

Question ID : 264330155501
Option 1 ID : 264330609409
Option 2 ID : 264330609410
Option 3 ID : 264330609407
Option 4 ID : 264330609408
Status : Not Answered
Chosen Option : --

Q.1 The following sentence has been divided into four parts. Identify the part that contains an error.

(A) Taylor, Richard, and / (B) Francis plays for / (C) the state / (D) basketball team.

- Ans
- 1. D
 - 2. A
 - 3. C
 - 4. B

Question ID : 264330152616
Option 1 ID : 264330598067
Option 2 ID : 264330598070
Option 3 ID : 264330598068
Option 4 ID : 264330598069
Status : Answered
Chosen Option : 4

Q.2 Select the most appropriate meaning of the given idiom.
Pay an arm and a leg for something

- Ans
- 1. Be devoted to unwanted things
 - 2. Pay a lot of money for something
 - 3. Give a lot of love and care to someone
 - 4. Pay a lot of attention to an incident

Question ID : 264330153438
Option 1 ID : 264330601277
Option 2 ID : 264330601275
Option 3 ID : 264330601278
Option 4 ID : 264330601276
Status : Answered
Chosen Option : 2

Q.3 The following sentence has been divided into parts. One of them may contain an error.
Select the part that contains the error from the given options. If you don't find any error, mark 'No error' as your answer.

As they driven through the dark, twisting lane / down which they had walked earlier, Lucius heard / the whistling of the night air in his ears.

- Ans
- 1. down which they had walked earlier, Lucius heard
 - 2. No error
 - 3. the whistling of the night air in his ears.
 - 4. As they driven through the dark, twisting lane

Question ID : 264330153212
Option 1 ID : 264330600409
Option 2 ID : 264330600410
Option 3 ID : 264330600407
Option 4 ID : 264330600408
Status : Answered
Chosen Option : 3

Q.4 Select the most appropriate synonym of the given word.
Trivial

- Ans 1. Minor
 2. Fatal
 3. Decisive
 4. Formal

Question ID : 264330152683
Option 1 ID : 264330598338
Option 2 ID : 264330598335
Option 3 ID : 264330598337
Option 4 ID : 264330598336
Status : Answered
Chosen Option : 1

Q.5 Select the most appropriate word to fill in the blank.
Ministry of education has announced that students can _____ the Board
Examinations twice.

- Ans 1. take
 2. participate
 3. give
 4. get

Question ID : 264330153506
Option 1 ID : 264330601537
Option 2 ID : 264330601538
Option 3 ID : 264330601536
Option 4 ID : 264330601535
Status : Answered
Chosen Option : 1

Q.6 Select the most appropriate meaning of the underlined idiom in the given sentence.

A man of character, he stuck to his guns even in the most difficult situations.

- Ans 1. To do things that would please people
 2. To behave disrespectfully
 3. To find a treasure
 4. To stand firm against all difficulties and challenges

Question ID : 264330152880
Option 1 ID : 264330599113
Option 2 ID : 264330599111
Option 3 ID : 264330599112
Option 4 ID : 264330599114
Status : Answered
Chosen Option : 4

Q.7 Select the most appropriate meaning of the underlined segment in the given sentence.
After her husband passed away, Jane had to learn to bite the bullet and take care of the household on her own.

- Ans
- 1. Create a difficult situation
 - 2. Accept a difficult situation bravely
 - 3. Criticise someone harshly
 - 4. Run away from a difficult situation

Question ID : 264330152922
Option 1 ID : 264330599269
Option 2 ID : 264330599268
Option 3 ID : 264330599270
Option 4 ID : 264330599267
Status : Answered
Chosen Option : 2

Q.8 Select the option that can be used as a one-word substitute for the given phrase.
One who lends money to others at a very high rate of interest.

- Ans
- 1. Curator
 - 2. Bankrupt
 - 3. Usurer
 - 4. Numismatist

Question ID : 264330152674
Option 1 ID : 264330598301
Option 2 ID : 264330598302
Option 3 ID : 264330598299
Option 4 ID : 264330598300
Status : Answered
Chosen Option : 4

Q.9 Parts of the following sentence have been given as options. Select the option that contains an error.
The platinum is a precious metal.

- Ans
- 1. is
 - 2. The platinum
 - 3. a
 - 4. precious metal

Question ID : 264330155201
Option 1 ID : 264330608264
Option 2 ID : 264330608263
Option 3 ID : 264330608265
Option 4 ID : 264330608266
Status : Answered
Chosen Option : 2

Q.10 Select the most appropriate option to fill in the blank.
All praised him when he soared in the business world, but the same people _____
him when he failed in business.

- Ans
- 1. nourished
 - 2. criticised
 - 3. supported
 - 4. dramatised

Question ID : 264330153576
Option 1 ID : 264330601799
Option 2 ID : 264330601800
Option 3 ID : 264330601802
Option 4 ID : 264330601801
Status : Answered
Chosen Option : 2

Q.11 Parts of the following sentence have been underlined and given as options. Select the option that contains an error.
What most off us want most is to move forward.

- Ans
- 1. most off
 - 2. is to
 - 3. want most
 - 4. move forward

Question ID : 264330153209
Option 1 ID : 264330600395
Option 2 ID : 264330600397
Option 3 ID : 264330600396
Option 4 ID : 264330600398
Status : Answered
Chosen Option : 1

Q.12 Select the word which means the same as the group of words given.
That which can't be read.

- Ans
- 1. Inaccessible
 - 2. Incurable
 - 3. Illegible
 - 4. Irrelevant

Question ID : 264330152570
Option 1 ID : 264330597883
Option 2 ID : 264330597884
Option 3 ID : 264330597885
Option 4 ID : 264330597886
Status : Answered
Chosen Option : 3

Q.13 Select the INCORRECTLY spelt word.

Ans ✓ 1. Acknowledge

✗ 2. Territory

✗ 3. Excellence

✗ 4. Business

Question ID : 264330152688

Option 1 ID : 264330598356

Option 2 ID : 264330598358

Option 3 ID : 264330598357

Option 4 ID : 264330598355

Status : Answered

Chosen Option : 1

Q.14 Select the most appropriate ANTONYM of the given word.

Authentic

Ans ✗ 1. Moderate

✗ 2. Actual

✓ 3. False

✗ 4. Wise

Question ID : 264330152675

Option 1 ID : 264330598306

Option 2 ID : 264330598303

Option 3 ID : 264330598304

Option 4 ID : 264330598305

Status : Answered

Chosen Option : 3

Q.15 Select the most appropriate idiom to fill in the blank.
Please tell me about the meeting _____.

Ans ✓ 1. in a nutshell

✗ 2. in a stew

✗ 3. in a huff

✗ 4. in a spin

Question ID : 264330152597

Option 1 ID : 264330597992

Option 2 ID : 264330597993

Option 3 ID : 264330597994

Option 4 ID : 264330597991

Status : Answered

Chosen Option : 1

Q.16 Select the most appropriate option to fill in the blank.
Augmented Reality (AR) continues to develop and become more _____ among a wide range of applications.

- Ans
- 1. rare
 - 2. amicable
 - 3. idealistic
 - 4. pervasive

Question ID : 264330151905
Option 1 ID : 264330595235
Option 2 ID : 264330595237
Option 3 ID : 264330595238
Option 4 ID : 264330595236
Status : Answered
Chosen Option : 3

Q.17 Select the INCORRECTLY spelt word.

- Ans
- 1. Grammar
 - 2. Pleasant
 - 3. Familiar
 - 4. Aweful

Question ID : 264330152828
Option 1 ID : 264330598905
Option 2 ID : 264330598906
Option 3 ID : 264330598903
Option 4 ID : 264330598904
Status : Answered
Chosen Option : 4

Q.18 Select the INCORRECTLY spelt word in the given sentence.
The handloom shop at the Ring Road has many kinds of bags, such as paper, leather, cloth and cannvas.

- Ans
- 1. Paper
 - 2. Cannvas
 - 3. Leather
 - 4. Cloth

Question ID : 264330153302
Option 1 ID : 264330600763
Option 2 ID : 264330600766
Option 3 ID : 264330600764
Option 4 ID : 264330600765
Status : Answered
Chosen Option : 2

Q.19 Select the most appropriate option to fill in the blank.
A/An _____ fellow cannot become an ideal teacher.

- Ans
- 1. idle
 - 2. bright
 - 3. intelligent
 - 4. honest

Question ID : 264330153355
Option 1 ID : 264330600971
Option 2 ID : 264330600974
Option 3 ID : 264330600972
Option 4 ID : 264330600973
Status : Answered
Chosen Option : 1

Q.20 Select the most appropriate option that can substitute the underlined segment in the given sentence.

I considered Geography as an easier subject.

- Ans
- 1. the easy
 - 2. the easier
 - 3. an easiest
 - 4. an easy

Question ID : 264330155423
Option 1 ID : 264330609100
Option 2 ID : 264330609101
Option 3 ID : 264330609102
Option 4 ID : 264330609099
Status : Answered
Chosen Option : 4

Comprehension:

In the following passage some words have been deleted. Read the passage carefully and select the most appropriate option to fill in each blank.

The most common hazard in forests is forest fire. Forest fires are as old as the forests themselves. They pose a 1. _____ not only to the forest wealth but also to the entire regime to fauna and flora seriously disturbing the biodiversity and the ecology and environment of a region. During summer, when there is no rain for months, the forests 2. _____ littered with dry senescent leaves and twinges, which could burst into flames ignited by the slightest spark. The Himalayan forests, particularly, Garhwal Himalayas have been burning 3. _____ during the last few summers, with colossal loss of vegetation cover of that region. The youngest mountain ranges of the Himalayas are the most 4. _____ stretches of the world susceptible to forest fires. The forests of the Western are more 5. _____ vulnerable to forest fires as compared to those in the Eastern Himalayas. This is because forests of the Eastern Himalayas grow in high rain density.

SubQuestion No : 21

Q.21 Select the most appropriate option to fill in blank no.1.

- Ans
- 1. mercy
 - 2. trend
 - 3. failure
 - 4. threat

Question ID : 264330151933
Option 1 ID : 264330595344
Option 2 ID : 264330595346
Option 3 ID : 264330595343
Option 4 ID : 264330595345
Status : Answered
Chosen Option : 4

Comprehension:

In the following passage some words have been deleted. Read the passage carefully and select the most appropriate option to fill in each blank.

The most common hazard in forests is forest fire. Forest fires are as old as the forests themselves. They pose a 1. _____ not only to the forest wealth but also to the entire regime to fauna and flora seriously disturbing the biodiversity and the ecology and environment of a region. During summer, when there is no rain for months, the forests 2. _____ littered with dry senescent leaves and twinges, which could burst into flames ignited by the slightest spark. The Himalayan forests, particularly, Garhwal Himalayas have been burning 3. _____ during the last few summers, with colossal loss of vegetation cover of that region. The youngest mountain ranges of the Himalayas are the most 4. _____ stretches of the world susceptible to forest fires. The forests of the Western are more 5. _____ vulnerable to forest fires as compared to those in the Eastern Himalayas. This is because forests of the Eastern Himalayas grow in high rain density.

SubQuestion No : 22

Q.22 Select the most appropriate option to fill in blank no.2.

- Ans 1. keep
 2. build
 3. become
 4. drive

Question ID : 264330151934

Option 1 ID : 264330595349

Option 2 ID : 264330595350

Option 3 ID : 264330595348

Option 4 ID : 264330595347

Status : Answered

Chosen Option : 3

Comprehension:

In the following passage some words have been deleted. Read the passage carefully and select the most appropriate option to fill in each blank.

The most common hazard in forests is forest fire. Forest fires are as old as the forests themselves. They pose a 1. _____ not only to the forest wealth but also to the entire regime to fauna and flora seriously disturbing the biodiversity and the ecology and environment of a region. During summer, when there is no rain for months, the forests 2. _____ littered with dry senescent leaves and twinges, which could burst into flames ignited by the slightest spark. The Himalayan forests, particularly, Garhwal Himalayas have been burning 3. _____ during the last few summers, with colossal loss of vegetation cover of that region. The youngest mountain ranges of the Himalayas are the most 4. _____ stretches of the world susceptible to forest fires. The forests of the Western are more 5. _____ vulnerable to forest fires as compared to those in the Eastern Himalayas. This is because forests of the Eastern Himalayas grow in high rain density.

SubQuestion No : 23

Q.23 Select the most appropriate option to fill in blank no.3.

- Ans 1. rarely
 2. regularly
 3. badly
 4. enough

Question ID : 264330151935

Option 1 ID : 264330595354

Option 2 ID : 264330595351

Option 3 ID : 264330595353

Option 4 ID : 264330595352

Status : Answered

Chosen Option : 2

Comprehension:

In the following passage some words have been deleted. Read the passage carefully and select the most appropriate option to fill in each blank.

The most common hazard in forests is forest fire. Forest fires are as old as the forests themselves. They pose a 1. _____ not only to the forest wealth but also to the entire regime to fauna and flora seriously disturbing the biodiversity and the ecology and environment of a region. During summer, when there is no rain for months, the forests 2. _____ littered with dry senescent leaves and twinges, which could burst into flames ignited by the slightest spark. The Himalayan forests, particularly, Garhwal Himalayas have been burning 3. _____ during the last few summers, with colossal loss of vegetation cover of that region. The youngest mountain ranges of the Himalayas are the most 4. _____ stretches of the world susceptible to forest fires. The forests of the Western are more 5. _____ vulnerable to forest fires as compared to those in the Eastern Himalayas. This is because forests of the Eastern Himalayas grow in high rain density.

SubQuestion No : 24

Q.24 Select the most appropriate option to fill in blank no.4.

- Ans 1. outrageous
 2. vulnerable
 3. greasy
 4. mysterious

Question ID : 264330151936

Option 1 ID : 264330595356

Option 2 ID : 264330595358

Option 3 ID : 264330595357

Option 4 ID : 264330595355

Status : Answered

Chosen Option : 2

Comprehension:

In the following passage some words have been deleted. Read the passage carefully and select the most appropriate option to fill in each blank.

The most common hazard in forests is forest fire. Forest fires are as old as the forests themselves. They pose a 1. _____ not only to the forest wealth but also to the entire regime to fauna and flora seriously disturbing the biodiversity and the ecology and environment of a region. During summer, when there is no rain for months, the forests 2. _____ littered with dry senescent leaves and twinges, which could burst into flames ignited by the slightest spark. The Himalayan forests, particularly, Garhwal Himalayas have been burning 3. _____ during the last few summers, with colossal loss of vegetation cover of that region. The youngest mountain ranges of the Himalayas are the most 4. _____ stretches of the world susceptible to forest fires. The forests of the Western are more 5. _____ vulnerable to forest fires as compared to those in the Eastern Himalayas. This is because forests of the Eastern Himalayas grow in high rain density.

SubQuestion No : 25

Q.25 Select the most appropriate option to fill in blank no.5.

- Ans 1. closely
 2. frequently
 3. deeply
 4. barely

Question ID : 264330151937

Option 1 ID : 264330595362

Option 2 ID : 264330595360

Option 3 ID : 264330595361

Option 4 ID : 264330595359

Status : Answered

Chosen Option : 3

Multi Tasking Non Technical Staff and Havaladar CBIC and CBN Examination 2023

Roll Number	
Candidate Name	
Venue Name	Dr. Kalam Academy
Exam Date	11/09/2023
Exam Time	12:30 PM - 2:30 PM
Subject	MTS Non Tech Havaladar CBIC and CBN Examination 2023

Section : Numerical and Mathematical Ability

Q.1 The price of a bed is first increased by 32% and later on decreased by 20% due to reduction in sales. Find the net percentage change in the final price of the bed.

- Ans**
- ✓ 1. 5.6%
 - ✗ 2. 6.2%
 - ✗ 3. 7.5%
 - ✗ 4. 4.9%

Question ID : 264330156179

Option 1 ID : 264330612115

Option 2 ID : 264330612116

Option 3 ID : 264330612117

Option 4 ID : 264330612118

Status : Answered

Chosen Option : 1

Q.2 A cone has base diameter 4 m and height 1.5 m. Find the slant height of the cone (in m).

- Ans**
- ✗ 1. 2.1
 - ✗ 2. 2.3
 - ✗ 3. 2.7
 - ✓ 4. 2.5

Question ID : 264330156244

Option 1 ID : 264330612375

Option 2 ID : 264330612376

Option 3 ID : 264330612378

Option 4 ID : 264330612377

Status : Answered

Chosen Option : 4

Q.3 Robin purchases a fan for ₹2,000 and later sells it at a loss of 15%. At what price did he sell the fan?

- Ans**
- 1. ₹1,900
 - 2. ₹1,800
 - 3. ₹1,700
 - 4. ₹2,100

Question ID : 264330156103
 Option 1 ID : 264330611814
 Option 2 ID : 264330611812
 Option 3 ID : 264330611811
 Option 4 ID : 264330611813
 Status : Answered
 Chosen Option : 3

Q.4 What is the compound interest (in ₹) on ₹20,500 for 2 years at 10% per annum, if the interest is compounded annually?

- Ans**
- 1. 5,403
 - 2. 4,305
 - 3. 4,530
 - 4. 4,350

Question ID : 264330153773
 Option 1 ID : 264330602556
 Option 2 ID : 264330602558
 Option 3 ID : 264330602557
 Option 4 ID : 264330602555
 Status : Answered
 Chosen Option : 2

Q.5 What is the value of R, if, $10(8 + 4R) \div (12 \times 5) - 5 \times 2^3 = 6$?

- Ans**
- 1. 86
 - 2. 68
 - 3. 76
 - 4. 67

Question ID : 264330153756
 Option 1 ID : 264330602488
 Option 2 ID : 264330602487
 Option 3 ID : 264330602489
 Option 4 ID : 264330602490
 Status : Answered
 Chosen Option : 4

Q.6 A and B working separately can do a piece of work in 16 days and 28 days, respectively. If they work on alternate days beginning with B, in how many days will the work be completed?

- Ans**
- 1. $18\frac{1}{2}$
 - 2. $20\frac{1}{2}$
 - 3. $21\frac{1}{2}$
 - 4. $19\frac{1}{2}$

Question ID : 264330155758
Option 1 ID : 264330610438
Option 2 ID : 264330610436
Option 3 ID : 264330610435
Option 4 ID : 264330610437
Status : Answered
Chosen Option : 2

Q.7 The average weight of 15 parcels is 20 kg. Addition of another new parcel increases the average weight by 250 grams. What is the weight of the new parcel?

- Ans**
- 1. 28 kg
 - 2. 24 kg
 - 3. 22 kg
 - 4. 26 kg

Question ID : 264330156291
Option 1 ID : 264330612563
Option 2 ID : 264330612564
Option 3 ID : 264330612565
Option 4 ID : 264330612566
Status : Answered
Chosen Option : 2

Q.8 ₹8,000 becomes ₹9,800 in three years at simple interest rate. If the rate of interest becomes two times of itself, then what will be the amount of the same principle in four years?

- Ans**
- 1. ₹10,800
 - 2. ₹11,800
 - 3. ₹12,800
 - 4. ₹13,500

Question ID : 264330158214
Option 1 ID : 264330620217
Option 2 ID : 264330620215
Option 3 ID : 264330620216
Option 4 ID : 264330620218
Status : Answered
Chosen Option : 3

Q.9 Neha walks at the rate of 8 km/h and crosses a bridge in 27 minutes. What is the length of the bridge in metres?

- Ans**
- 1. 4850
 - 2. 3600
 - 3. 3000
 - 4. 2400

Question ID : 264330156112
 Option 1 ID : 264330611850
 Option 2 ID : 264330611848
 Option 3 ID : 264330611847
 Option 4 ID : 264330611849
 Status : Answered
 Chosen Option : 2

Q.10 Sanjay wants to exactly measure the lengths 7000 mm, 3850 mm and 12950 mm using a single measuring tape. What will be the greatest possible length (in cm) of the measuring tape?

- Ans**
- 1. 40
 - 2. 45
 - 3. 35
 - 4. 30

Question ID : 264330155682
 Option 1 ID : 264330610133
 Option 2 ID : 264330610134
 Option 3 ID : 264330610132
 Option 4 ID : 264330610131
 Status : Answered
 Chosen Option : 3

Q.11 If $A : B = 3 : 4$ and $B : C = 6 : 5$, then $A : B : C$ is:

- Ans**
- 1. 9 : 12 : 20
 - 2. 9 : 10 : 20
 - 3. 9 : 10 : 12
 - 4. 9 : 12 : 10

Question ID : 264330153872
 Option 1 ID : 264330602951
 Option 2 ID : 264330602952
 Option 3 ID : 264330602953
 Option 4 ID : 264330602954
 Status : Answered
 Chosen Option : 4

Q.12 5 pipes are required to fill a tank in 1 hour and 40 minutes. How long (in minutes) will it take to fill the same tank if 4 pipes of the same type are used?

- Ans**
- 1. 115
 - 2. 150
 - 3. 125
 - 4. 140

Question ID : 264330153772
Option 1 ID : 264330602552
Option 2 ID : 264330602554
Option 3 ID : 264330602553
Option 4 ID : 264330602551
Status : Answered
Chosen Option : 3

Q.13 The mean of 23 observations is 36. If the mean of the first 12 observations is 32 and that of the last 12 observations is 39, find the 12th observation.

- Ans**
- 1. 26
 - 2. 23
 - 3. 24
 - 4. 25

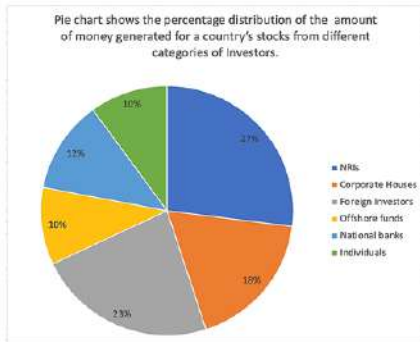
Question ID : 264330156096
Option 1 ID : 264330611785
Option 2 ID : 264330611783
Option 3 ID : 264330611786
Option 4 ID : 264330611784
Status : Answered
Chosen Option : 3

Q.14 By investing ₹12,000 in a scheme, R gets ₹15,500 back in return. What is his percentage of profit?

- Ans**
- 1. 27.19%
 - 2. 29.17%
 - 3. 17.92%
 - 4. 19.17%

Question ID : 264330160010
Option 1 ID : 264330627388
Option 2 ID : 264330627387
Option 3 ID : 264330627390
Option 4 ID : 264330627389
Status : Answered
Chosen Option : 2

Q.15 The following Pie chart shows the amount of money generated for a country's stocks from different categories of Investors.



If the total investment other than by NRIs, foreign investors and corporate houses is ₹456 crore, then the investment by National banks and offshore funds (in crore ₹) will be:

- Ans
- ✗ 1. 231.5
 - ✗ 2. 331.5
 - ✗ 3. 213.5
 - ✓ 4. 313.5

Question ID : 264330153783

Option 1 ID : 264330602597

Option 2 ID : 264330602598

Option 3 ID : 264330602598

Option 4 ID : 264330602596

Status : Answered

Chosen Option : 4

Q.16 A man rows to a place at a distance of 72 km and comes back in 36 hours. He finds that he can row 12 km with the stream in the same time as 4 km against the stream. The speed (in km/h, rounded off to 2 decimal places) of the stream is:

- Ans
- ✗ 1. 3.75
 - ✗ 2. 2.45
 - ✓ 3. 2.67
 - ✗ 4. 2.33

Question ID : 264330153777

Option 1 ID : 264330602573

Option 2 ID : 264330602572

Option 3 ID : 264330602571

Option 4 ID : 264330602574

Status : Answered

Chosen Option : 3

Q.17 A milk vendor mixes water with milk and by selling the mixture at the cost price he gains $16\frac{1}{4}\%$. Find the ratio of milk to water in the mixture.

- Ans
- ✗ 1. 7 : 40
 - ✓ 2. 80 : 13
 - ✗ 3. 13 : 80
 - ✗ 4. 40 : 7

Question ID : 264330153836

Option 1 ID : 264330602810

Option 2 ID : 264330602808

Option 3 ID : 264330602809

Option 4 ID : 264330602807

Status : Answered

Chosen Option : 2

Q.18 If the length of the longest diagonal of a cubical box is $\sqrt{300}$ cm, find its volume.

- Ans
- 1. 10000 cm³
 - 2. 400 cm³
 - 3. 100 cm³
 - 4. 1000 cm³

Question ID : 264330156084
 Option 1 ID : 264330611737
 Option 2 ID : 264330611738
 Option 3 ID : 264330611736
 Option 4 ID : 264330611735
 Status : Answered
 Chosen Option : 4

Q.19 A, B and C can complete a work in 10, 15 and 25 days, respectively. The time taken by A, B and C together to do the work is:

- Ans
- 1. $3\frac{16}{31}$ days
 - 2. $4\frac{26}{31}$ days
 - 3. $3\frac{11}{31}$ days
 - 4. $4\frac{27}{31}$ days

Question ID : 264330156531
 Option 1 ID : 264330613513
 Option 2 ID : 264330613511
 Option 3 ID : 264330613512
 Option 4 ID : 264330613514
 Status : Answered
 Chosen Option : 2

Q.20 A person jogged daily as per the given table:

Day	Monday	Tuesday	Wednesday	Thursday	Friday	Saturday	Sunday
Distance jogged (in kms)	4.5	3.5	2.5	3.0	2.0	4.0	1.5

What is the mean distance jogged by the person in a week?

- Ans
- 1. 2
 - 2. 3.5
 - 3. 2.5
 - 4. 3

Question ID : 264330154097
 Option 1 ID : 264330603852
 Option 2 ID : 264330603851
 Option 3 ID : 264330603854
 Option 4 ID : 264330603853
 Status : Answered
 Chosen Option : 4

Q.1 Read the given statements and conclusions carefully. You have to take the given statements to be true even if they seem to be at variance from commonly known facts. You have to decide which conclusion/s logically follow/s from the given statements.

Statements: All dogs are cats. Some cats are hens. All hens are pink.

Conclusion I: Some dogs are cats.

Conclusion II: Some cats are pink.

- Ans**
- 1. Neither conclusion (I) nor (II) is follow.
 - 2. Both conclusions (I) and (II) are follow.
 - 3. Only conclusion (II) is follow.
 - 4. Only conclusion (I) is follow.

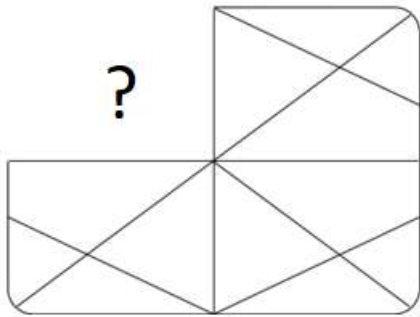
Question ID : 264330155923
 Option 1 ID : 264330611097
 Option 2 ID : 264330611098
 Option 3 ID : 264330611096
 Option 4 ID : 264330611095
 Status : Answered
 Chosen Option : 2

Q.2 5 is related to 24 following a certain logic. Following the same logic, 9 is related to 80. To which of the following is 14 related to, following the same logic?

- Ans**
- 1. 197
 - 2. 195
 - 3. 196
 - 4. 198

Question ID : 264330151585
 Option 1 ID : 264330593969
 Option 2 ID : 264330593967
 Option 3 ID : 264330593968
 Option 4 ID : 264330593970
 Status : Answered
 Chosen Option : 2

Q.3 Identify the figure that completes the pattern (rotation is NOT allowed).

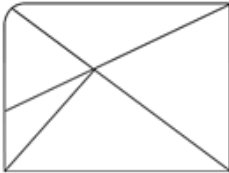


Ans

✗ 1.




✗ 2.



✗ 3.



✓ 4.



Question ID : 264330154521

Option 1 ID : 264330605549

Option 2 ID : 264330605548

Option 3 ID : 264330605547

Option 4 ID : 264330605550

Status : Answered

Chosen Option : 4

Q.4 What should come in place of '?' in the given series?

14 47 146 443 1334 ?

Ans ✓ 1. 4007

✗ 2. 4171

✗ 3. 4078

✗ 4. 4001

Question ID : 264330151489

Option 1 ID : 264330593584

Option 2 ID : 264330593586

Option 3 ID : 264330593585

Option 4 ID : 264330593583

Status : Answered

Chosen Option : 1

Q.5 Select the combination of letters that when sequentially placed in the blanks of the given series, will complete the series.

_ TU _ T _ TT _ _ TU

- Ans**
- 1. UTUTU
 - 2. TTUUT
 - 3. UUTUU
 - 4. TUTUU

Question ID : 264330151647

Option 1 ID : 264330594216

Option 2 ID : 264330594218

Option 3 ID : 264330594215

Option 4 ID : 264330594217

Status : Answered

Chosen Option : 2

Q.6 Shagun, Pragya, Yati, Lovey, Savi and Frooti are sitting around a circular table facing the centre. Shagun sits 2nd to the left of Pragya. Yati sits 2nd to the left of Shagun. Lovey sits 3rd to the left of Yati. Savi sits 2nd to the left of Lovey. Who sits 3rd to the left of Shagun?

- Ans**
- 1. Pragya
 - 2. Lovey
 - 3. Savi
 - 4. Frooti

Question ID : 264330155653

Option 1 ID : 264330610017

Option 2 ID : 264330610016

Option 3 ID : 264330610018

Option 4 ID : 264330610015

Status : Answered

Chosen Option : 4

Q.7 If 15th Feb 2010 is Monday, then what will be the day of the week on 7th July 2011?

- Ans**
- 1. Saturday
 - 2. Monday
 - 3. Wednesday
 - 4. Thursday

Question ID : 264330154333

Option 1 ID : 264330604797

Option 2 ID : 264330604796

Option 3 ID : 264330604798

Option 4 ID : 264330604795

Status : Answered

Chosen Option : 4

Q.8 In a certain code language, 'ARC' is coded as '1-18-3' and 'BOY' is coded as '2-15-25'. What is the code for 'FAD' in the given code language?

- Ans**
- 1. 7-2-5
 - 2. 6-1-4
 - 3. 5-2-6
 - 4. 6-2-4

Question ID : 264330155817
Option 1 ID : 264330610673
Option 2 ID : 264330610672
Option 3 ID : 264330610671
Option 4 ID : 264330610674
Status : Answered
Chosen Option : 2

Q.9 What should come in place of ? in the given series based on the English alphabetical order?

HVP, JZO, LDN, NHM, ?

- Ans**
- 1. PLL
 - 2. NLN
 - 3. MLM
 - 4. OLL

Question ID : 264330155799
Option 1 ID : 264330610600
Option 2 ID : 264330610601
Option 3 ID : 264330610599
Option 4 ID : 264330610602
Status : Answered
Chosen Option : 1

Q.10 Select the set in which the numbers are related in the same way as are the numbers of the following sets.

(NOTE: Operations should be performed on the whole numbers, without breaking down the numbers into its constituent digits. E.g. 13 – Operations on 13 such as adding / subtracting / multiplying etc. to 13 can be performed.

Breaking down 13 into 1 and 3 and then performing mathematical operations on 1 and 3 is not allowed)

(2, 8, 32)

(5, 7, 70)

- Ans**
- 1. 7, 12, 84
 - 2. 3, 5, 15
 - 3. 6, 11, 56
 - 4. 4, 12, 96

Question ID : 264330151616
Option 1 ID : 264330594094
Option 2 ID : 264330594091
Option 3 ID : 264330594093
Option 4 ID : 264330594092
Status : Answered
Chosen Option : 4

Q.11 In a certain code language, 'NEAR' is coded as 4968 and 'REAP' is coded as 9865. What is the code for 'P' in the given code language?

- Ans**
- 1. 9
 - 2. 8
 - 3. 5
 - 4. 6

Question ID : 264330155870
Option 1 ID : 264330610883
Option 2 ID : 264330610884
Option 3 ID : 264330610886
Option 4 ID : 264330610885
Status : Answered
Chosen Option : 3

Q.12 What will come in place of '?' in the following equation, if '+' and '-' are interchanged and 'x' and '+' are interchanged?

$$10 + 6 - 5 \times 5 + 3 = ?$$

- Ans**
- 1. 7
 - 2. 8
 - 3. 5
 - 4. 4

Question ID : 264330154664
Option 1 ID : 264330606121
Option 2 ID : 264330606122
Option 3 ID : 264330606120
Option 4 ID : 264330606119
Status : Answered
Chosen Option : 1

Q.13 EH 11 is related to CF 16 in a certain way. In the same way, JV 15 is related to HI 20. To which of the following is FN 13 related to following the same logic?

- Ans**
- 1. DK 19
 - 2. CL 18
 - 3. EM 17
 - 4. DL 18

Question ID : 264330151659
Option 1 ID : 264330594264
Option 2 ID : 264330594263
Option 3 ID : 264330594265
Option 4 ID : 264330594266
Status : Answered
Chosen Option : 4

Q.14 Find out the correct alternative that when filled in the blanks in the same sequence will make the series logically complete.

G_KPN_RPUXY_BE_PI_MP

- Ans**
- 1. QJLDP
 - 2. JPFLC
 - 3. JQPFL
 - 4. QFDPA

Question ID : 264330154728
Option 1 ID : 264330606376
Option 2 ID : 264330606377
Option 3 ID : 264330606375
Option 4 ID : 264330606378
Status : Answered
Chosen Option : 3

Q.15 What should come in place of '?' in the given series?

7 33 137 553 2217 ?

- Ans**
- 1. 8873
 - 2. 8723
 - 3. 8931
 - 4. 8827

Question ID : 264330151457
Option 1 ID : 264330593457
Option 2 ID : 264330593455
Option 3 ID : 264330593458
Option 4 ID : 264330593456
Status : Answered
Chosen Option : 1

Q.16 Read the given statements and conclusions carefully. You have to take the given statements to be true even if they seem to be at variance from commonly known facts. You have to decide which conclusion/s logically follow/s from the given statements.

Statements: All clowns are bottles. Some bottles are steel. All steel are keys.

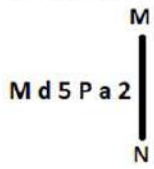
Conclusion I: Some clowns are bottles.

Conclusion II: All steel are bottles.

- Ans**
- 1. Both conclusions (I) and (II) are follow.
 - 2. Only conclusion (I) is follow.
 - 3. Only conclusion (II) is follow.
 - 4. Neither conclusion (I) nor (II) is follow.

Question ID : 264330155905
Option 1 ID : 264330611026
Option 2 ID : 264330611023
Option 3 ID : 264330611024
Option 4 ID : 264330611025
Status : Answered
Chosen Option : 2

Q.17 Select the correct mirror image of the given figure when the mirror is placed at MN as shown below.



- Ans
- 1. a 2 5 P b M
 - 2. 2 a 9 2 b M
 - 3. 2 a p 9 2 b M
 - 4. 2 a p a 2

Question ID : 264330151523

Option 1 ID : 264330593722

Option 2 ID : 264330593719

Option 3 ID : 264330593720

Option 4 ID : 264330593721

Status : Answered

Chosen Option : 2

Q.18 Which figure should replace the question mark (?) if the following figure series were to be continued?

S	4	S	=	
= X 4	A D S	4 V	= X A S	?
D A	X =	A X	V 4	

Ans

✗ 1.

S		
A	4	=
X	V	

✗ 2.

S		
=	A	4
X	V	

✓ 3.

S		
=	6	4
X	V	

✗ 4.

S		
=	6	4
A	X	

Question ID : 264330154752

Option 1 ID : 264330606473

Option 2 ID : 264330606474

Option 3 ID : 264330606471

Option 4 ID : 264330606472

Status : Answered

Chosen Option : 3

Q.19 What should come in place of '?' in the given series?

12 18 30 54 102 ?

Ans

✗ 1. 204

✓ 2. 198

✗ 3. 187

✗ 4. 190

Question ID : 264330151452

Option 1 ID : 264330593438

Option 2 ID : 264330593437

Option 3 ID : 264330593435

Option 4 ID : 264330593436

Status : Answered

Chosen Option : 2

Q.20 What will come in the place of '?' in the following equation, if '+' and '-' are interchanged and 'x' and '+' are interchanged?

$$216 \times 36 - 6 + 17 + 39 = ?$$

Ans ✓ 1. 69

✗ 2. 89

✗ 3. 79

✗ 4. 59

Question ID : 264330155678

Option 1 ID : 264330610117

Option 2 ID : 264330610115

Option 3 ID : 264330610116

Option 4 ID : 264330610118

Status : Answered

Chosen Option : 1

Section : General Awareness

Q.1 Who propounded the concept of 'Rule of Law'?

Ans ✓ 1. AV Dicey

✗ 2. CK Daphtary

✗ 3. Austin

✗ 4. AK Sen

Question ID : 264330159590

Option 1 ID : 264330625719

Option 2 ID : 264330625721

Option 3 ID : 264330625722

Option 4 ID : 264330625720

Status : Answered

Chosen Option : 1

Q.2 In which state is Vijay Stambh situated?

Ans ✓ 1. Rajasthan

✗ 2. Punjab

✗ 3. Uttar Pradesh

✗ 4. Gujarat

Question ID : 264330160771

Option 1 ID : 264330630415

Option 2 ID : 264330630418

Option 3 ID : 264330630417

Option 4 ID : 264330630416

Status : Answered

Chosen Option : 1

Q.3 Which state passed a bill for the protection of advocates and became the first state to do so?

- Ans 1. Punjab
 2. Rajasthan
 3. Haryana
 4. Himachal Pradesh

Question ID : 264330158337
Option 1 ID : 264330620708
Option 2 ID : 264330620710
Option 3 ID : 264330620709
Option 4 ID : 264330620707
Status : Answered
Chosen Option : 3

Q.4 Chaoite, Buckminsterfullerene and Graphene are related to which element?

- Ans 1. Arsenic
 2. Carbon
 3. Sulphur
 4. Bromine

Question ID : 264330161059
Option 1 ID : 264330631569
Option 2 ID : 264330631567
Option 3 ID : 264330631568
Option 4 ID : 264330631570
Status : Answered
Chosen Option : 2

Q.5 Who is credited with the establishment of Servants of India Society?

- Ans 1. Lala Lajpat Rai
 2. Gopal Krishna Gokhale
 3. MG Ranade
 4. CR Das

Question ID : 264330162331
Option 1 ID : 264330636653
Option 2 ID : 264330636654
Option 3 ID : 264330636651
Option 4 ID : 264330636652
Status : Answered
Chosen Option : 2

Q.6 The value of all final goods and services produced within the country during one year is known as _____.

- Ans 1. gross national product
 2. net national product
 3. gross domestic product
 4. net domestic product

Question ID : 264330161457
Option 1 ID : 264330633157
Option 2 ID : 264330633158
Option 3 ID : 264330633156
Option 4 ID : 264330633155
Status : Answered
Chosen Option : 3

Q.7 Who was the first speaker of the Lok Sabha?

Ans 1. NS Reddy

2. GV Mavalankar

3. Ananthasayanam Ayyangar

4. Mira Kumar

Question ID : 264330159921

Option 1 ID : 264330627034

Option 2 ID : 264330627031

Option 3 ID : 264330627032

Option 4 ID : 264330627033

Status : Answered

Chosen Option : 2

Q.8 'The Story of My Experiments with Truth' is an autobiography of _____.

Ans 1. Dr. Rajendra Prasad

2. Mahatma Gandhi

3. Vivekanand

4. Jawaharlal Nehru

Question ID : 264330155489

Option 1 ID : 264330609362

Option 2 ID : 264330609359

Option 3 ID : 264330609361

Option 4 ID : 264330609360

Status : Answered

Chosen Option : 2

Q.9 Who was the music director of the famous film 'Sholay' released in 1975?

Ans 1. Madan Mohan

2. Jatin - Lalit

3. Nadeem - Shravan

4. RD Burman

Question ID : 264330155517

Option 1 ID : 264330609474

Option 2 ID : 264330609473

Option 3 ID : 264330609472

Option 4 ID : 264330609471

Status : Answered

Chosen Option : 4

Q.10 The technique of classical dancing was codified by _____ in about the 5th century B.C.

- Ans
- 1. Sudraka
 - 2. Bharata
 - 3. Chanakya
 - 4. Kalhana

Question ID : 264330159046
Option 1 ID : 264330623543
Option 2 ID : 264330623545
Option 3 ID : 264330623544
Option 4 ID : 264330623546
Status : Answered
Chosen Option : 2

Q.11 Who among the following is the author of the novel 'Animal Farm'?

- Ans
- 1. Thomas Hardy
 - 2. George Orwell
 - 3. Roald Dahl
 - 4. Charles Dickens

Question ID : 264330161759
Option 1 ID : 264330634364
Option 2 ID : 264330634363
Option 3 ID : 264330634365
Option 4 ID : 264330634366
Status : Not Answered
Chosen Option : --

Q.12 Who among the following is credited with starting a Fusion Dance form called 'Hi-Dance'?

- Ans
- 1. Shashadhar Acharya
 - 2. Uday Shankar
 - 3. Kartik Ram
 - 4. Mani Damodara

Question ID : 264330155477
Option 1 ID : 264330609311
Option 2 ID : 264330609313
Option 3 ID : 264330609314
Option 4 ID : 264330609312
Status : Answered
Chosen Option : 2

Q.13 According to the Census of India 2011, which of the following states has the lowest population?

- Ans 1. Sikkim
 2. Goa
 3. Manipur
 4. Mizoram

Question ID : 264330160157
Option 1 ID : 264330627970
Option 2 ID : 264330627969
Option 3 ID : 264330627968
Option 4 ID : 264330627967
Status : Answered
Chosen Option : 1

Q.14 The Lambadi dance is a folk dance form of the _____ tribe and originated in Andhra Pradesh.

- Ans 1. Sugali
 2. Banjara
 3. Nakkala
 4. Dabba Yerukula

Question ID : 264330160798
Option 1 ID : 264330630525
Option 2 ID : 264330630523
Option 3 ID : 264330630526
Option 4 ID : 264330630524
Status : Not Answered
Chosen Option : --

Q.15 In which of the following years was the Child Marriage Restraint Act passed?

- Ans 1. 1856
 2. 1947
 3. 1878
 4. 1929

Question ID : 264330162349
Option 1 ID : 264330636726
Option 2 ID : 264330636725
Option 3 ID : 264330636723
Option 4 ID : 264330636724
Status : Answered
Chosen Option : 4

Q.16 What is the main reason behind the substantial rainfall during summer on the western coasts of India?

- Ans 1. Western Ghats
 2. Eastern winds
 3. Indus River
 4. Eastern Ghats

Question ID : 264330161305
Option 1 ID : 264330632549
Option 2 ID : 264330632547
Option 3 ID : 264330632548
Option 4 ID : 264330632550
Status : Answered
Chosen Option : 1

Q.17 The second edition of Khelo India Youth Games, 2019 was organised in which city?

- Ans 1. Pune
 2. Guwahati
 3. New Delhi
 4. Mumbai

Question ID : 264330158219
Option 1 ID : 264330620236
Option 2 ID : 264330620237
Option 3 ID : 264330620235
Option 4 ID : 264330620238
Status : Answered
Chosen Option : 2

Q.18 ACF conferred Grandmaster _____ with Player of the Year award, who is only the sixth Indian to break the 2700 Elo-rating mark and the youngest Grandmaster from the country to be rated above 2700.

- Ans 1. NR Vignesh
 2. Aadit Khan
 3. Koshy Varugeese
 4. D Gukesh

Question ID : 264330161439
Option 1 ID : 264330633085
Option 2 ID : 264330633084
Option 3 ID : 264330633083
Option 4 ID : 264330633086
Status : Answered
Chosen Option : 3

Q.19 Which condition causes bone pain, poor growth, and soft, weak bones that can lead to bone deformities?

- Ans 1. Rickets
 2. Cerebral Palsy
 3. Pertussis
 4. Asplenia

Question ID : 264330161079
Option 1 ID : 264330631647
Option 2 ID : 264330631649
Option 3 ID : 264330631648
Option 4 ID : 264330631650
Status : Answered
Chosen Option : 1

Q.20 In which Indian musician's name did the state of Massachusetts in the USA declare April 20th in 1984 as a day in his name?

- Ans
- 1. Brij Narayan
 - 2. Ali Akbar Khan
 - 3. Rajeev Taranath
 - 4. Amjad Ali Khan

Question ID : 264330161909
Option 1 ID : 264330634966
Option 2 ID : 264330634965
Option 3 ID : 264330634963
Option 4 ID : 264330634964
Status : Not Answered
Chosen Option : --

Q.21 Which of the following is an advantage of microfinance institutions in India?

- Ans
- 1. Limited impact on poverty reduction
 - 2. Increased reliance on informal lending sources
 - 3. Minimal support for women entrepreneurs
 - 4. Enhanced financial inclusion

Question ID : 264330157291
Option 1 ID : 264330616528
Option 2 ID : 264330616527
Option 3 ID : 264330616530
Option 4 ID : 264330616529
Status : Answered
Chosen Option : 4

Q.22 Which of the following statements about Mahatma Gandhi is INCORRECT?

- Ans
- 1. Mahatma Gandhi was born in 1869 in Porbandar.
 - 2. In 1942, he launched the Quit India Movement.
 - 3. He led the Champaran Satyagraha in 1910.
 - 4. He led the Dandi Salt March in 1930.

Question ID : 264330160826
Option 1 ID : 264330630635
Option 2 ID : 264330630638
Option 3 ID : 264330630637
Option 4 ID : 264330630636
Status : Answered
Chosen Option : 3

Q.23 Which university won the first place in the 3rd Khelo India University Games?

- Ans
- 1. University of Mumbai
 - 2. Panjab University
 - 3. Shivaji University
 - 4. University of Madras

Question ID : 264330158230
Option 1 ID : 264330620282
Option 2 ID : 264330620279
Option 3 ID : 264330620280
Option 4 ID : 264330620281
Status : Answered
Chosen Option : 2

Q.24 In which of the following states of India is the maximum extent of alluvial soil found?

- Ans
- 1. Telangana
 - 2. Uttar Pradesh
 - 3. Karnataka
 - 4. Maharashtra

Question ID : 264330161528
Option 1 ID : 264330633439
Option 2 ID : 264330633442
Option 3 ID : 264330633440
Option 4 ID : 264330633441
Status : Answered
Chosen Option : 2

Q.25 The _____ port was developed after Independence to ease the volume of trade on the Mumbai port.

- Ans
- 1. Kandla
 - 2. Kolkata
 - 3. Chennai
 - 4. Visakhapatnam

Question ID : 264330161513
Option 1 ID : 264330633382
Option 2 ID : 264330633381
Option 3 ID : 264330633380
Option 4 ID : 264330633379
Status : Answered
Chosen Option : 1

Section : English Language and Comprehension

Q.1 Select the INCORRECTLY spelt word.

- Ans
- 1. Curiosity
 - 2. Vehemence
 - 3. Superficial
 - 4. Synagogue

Question ID : 264330153220
Option 1 ID : 264330600442
Option 2 ID : 264330600439
Option 3 ID : 264330600441
Option 4 ID : 264330600440
Status : Answered
Chosen Option : 1

Q.2 Select the most appropriate meaning of the underlined idiom in the following sentence.

Riddhi believes in wearing her heart on her sleeve. That is why she has so many friends.

- Ans
- 1. To criticise everybody
 - 2. To wear a badge of honour
 - 3. To openly and freely express one's emotions
 - 4. To talk aloud

Question ID : 264330153052
Option 1 ID : 264330599778
Option 2 ID : 264330599776
Option 3 ID : 264330599777
Option 4 ID : 264330599775
Status : Answered
Chosen Option : 3

Q.3 Select the most appropriate meaning of the given idiom.
To cross swords

- Ans
- 1. To kill
 - 2. To arrange
 - 3. To fight
 - 4. To defend

Question ID : 264330156174
Option 1 ID : 264330612095
Option 2 ID : 264330612098
Option 3 ID : 264330612097
Option 4 ID : 264330612096
Status : Answered
Chosen Option : 3

Q.4 Select the most appropriate option to fill in the blank.
Virtual worlds are recently new phenomena in that they _____ people to meet and socially interact with others in a variety of online environments.

- Ans
- 1. forbid
 - 2. bring
 - 3. choose
 - 4. enable

Question ID : 264330151904
Option 1 ID : 264330595231
Option 2 ID : 264330595232
Option 3 ID : 264330595234
Option 4 ID : 264330595233
Status : Answered
Chosen Option : 2

Q.5 The following sentence has been split into four segments. Identify the segment that contains an error.

I have seen / a movie / on schooling / yesterday.

- Ans 1. I have seen
 2. on schooling
 3. yesterday
 4. a movie

Question ID : 264330155322
Option 1 ID : 264330608727
Option 2 ID : 264330608729
Option 3 ID : 264330608730
Option 4 ID : 264330608728
Status : Answered
Chosen Option : 1

Q.6 Select the most appropriate ANTONYM of the given word.
Cheap

- Ans 1. Expensive
 2. Ignorant
 3. Old
 4. Untangle

Question ID : 264330152717
Option 1 ID : 264330598468
Option 2 ID : 264330598467
Option 3 ID : 264330598470
Option 4 ID : 264330598469
Status : Answered
Chosen Option : 1

Q.7 Select the most appropriate option that can substitute the underlined segment in the given sentence.

Kavya invited all her friends, isn't it?

- Ans 1. didn't she?
 2. did she?
 3. don't she?
 4. isn't she?

Question ID : 264330152730
Option 1 ID : 264330598521
Option 2 ID : 264330598520
Option 3 ID : 264330598522
Option 4 ID : 264330598519
Status : Answered
Chosen Option : 1

Q.8 Select the most appropriate idiom to fill in the blank.
The deal was _____ for three months.

- Ans
- 1. cut no ice
 - 2. broken the ice
 - 3. tipped of the iceberg
 - 4. put on ice

Question ID : 264330153102
Option 1 ID : 264330599971
Option 2 ID : 264330599972
Option 3 ID : 264330599973
Option 4 ID : 264330599974
Status : Answered
Chosen Option : 4

Q.9 The given sentence contains an error. Select the option that correctly rectifies the error.
This is the eldest standing structure of Chola architecture in India.

- Ans
- 1. This is the more older standing structure of Chola architecture in India.
 - 2. This is the most old standing structure of Chola architecture in India.
 - 3. This is the more elder standing structure of Chola architecture in India.
 - 4. This is the oldest standing structure of Chola architecture in India.

Question ID : 264330152611
Option 1 ID : 264330598047
Option 2 ID : 264330598048
Option 3 ID : 264330598050
Option 4 ID : 264330598049
Status : Answered
Chosen Option : 4

Q.10 The following sentence has been split into four segments. Identify the segment that contains a grammatical error.

They decided to / travel in train / instead of driving / to New Delhi.

- Ans
- 1. They decided to
 - 2. travel in train
 - 3. to New Delhi
 - 4. instead of driving

Question ID : 264330155429
Option 1 ID : 264330609123
Option 2 ID : 264330609124
Option 3 ID : 264330609126
Option 4 ID : 264330609125
Status : Answered
Chosen Option : 2

Q.11 Select the most appropriate ANTONYM of the given word.
Strengthen

- Ans 1. Debilitate
 2. Strain
 3. Fortify
 4. Ascend

Question ID : 264330151875
Option 1 ID : 264330595120
Option 2 ID : 264330595122
Option 3 ID : 264330595119
Option 4 ID : 264330595121
Status : Answered
Chosen Option : 1

Q.12 Select the most appropriate ANTONYM of the given word.
Fame

- Ans 1. Name
 2. Shame
 3. Scandal
 4. Stingy

Question ID : 264330152592
Option 1 ID : 264330597971
Option 2 ID : 264330597974
Option 3 ID : 264330597972
Option 4 ID : 264330597973
Status : Answered
Chosen Option : 2

Q.13 Select the sentence that has NO spelling errors.

- Ans 1. My new phone has a high-resolution screen and powerful processor, which makes it perfect for streaming videos and playing games.
 2. My new phone has a high-resolution screen and a powerfull procesor, which makes it perfect for streaming videos and playing games.
 3. My new phone has a high-resolution screen and a powerful processor, which makes it perfect for streaming videos and playing games.
 4. My new phone has a high-resolution screan and powerfull procesor, which makes it perfect for streming videos and playing games.

Question ID : 264330152647
Option 1 ID : 264330598191
Option 2 ID : 264330598193
Option 3 ID : 264330598192
Option 4 ID : 264330598194
Status : Answered
Chosen Option : 3

Q.14 Identify the INCORRECTLY spelt word in the following sentence.
Being a doktor, my sister Meera is prepared for an emergency usually.

- Ans
- 1. prepared
 - 2. doktor
 - 3. usually
 - 4. emergency

Question ID : 264330152599
Option 1 ID : 264330598000
Option 2 ID : 264330597999
Option 3 ID : 264330598002
Option 4 ID : 264330598001
Status : Answered
Chosen Option : 2

Q.15 Select the option that can be used as a one-word substitute for the underlined group of words.
I suppose dancing that well would require a lot of actual application.

- Ans
- 1. prevention
 - 2. perseverance
 - 3. practice
 - 4. perception

Question ID : 264330153493
Option 1 ID : 264330601487
Option 2 ID : 264330601490
Option 3 ID : 264330601489
Option 4 ID : 264330601488
Status : Answered
Chosen Option : 3

Q.16 The following sentence has been split into four segments. Identify the segment that contains a grammatical error.

A music / is a great way / to express / your emotions.

- Ans
- 1. to express
 - 2. is a great way
 - 3. A music
 - 4. your emotions

Question ID : 264330155414
Option 1 ID : 264330609065
Option 2 ID : 264330609064
Option 3 ID : 264330609063
Option 4 ID : 264330609066
Status : Answered
Chosen Option : 3

Q.17 Select the most appropriate idiom to fill in the blank.
You are an intellectual with a professional degree; you can do wonders as _____.

- Ans
- 1. you are playing with fire
 - 2. you can say it again
 - 3. your mileage may vary
 - 4. the world is your oyster

Question ID : 264330153560
Option 1 ID : 264330601742
Option 2 ID : 264330601739
Option 3 ID : 264330601741
Option 4 ID : 264330601740
Status : Answered
Chosen Option : 4

Q.18 Select the most appropriate option that can substitute the underlined segment in the given sentence.

Rashmi works at the hospital, don't she?

- Ans
- 1. does she?
 - 2. has she?
 - 3. doesn't she?
 - 4. do she?

Question ID : 264330153595
Option 1 ID : 264330601868
Option 2 ID : 264330601867
Option 3 ID : 264330601870
Option 4 ID : 264330601869
Status : Answered
Chosen Option : 3

Q.19 Parts of the following sentence have been given as options. Select the option that contains an error.

Radha will have learnt cooking by the time she will have married.

- Ans
- 1. learnt cooking
 - 2. by the time
 - 3. she will have married
 - 4. Radha will have

Question ID : 264330152820
Option 1 ID : 264330598872
Option 2 ID : 264330598873
Option 3 ID : 264330598874
Option 4 ID : 264330598871
Status : Answered
Chosen Option : 3

Q.20 Select the option that can be used as a one-word substitute for the given group of words.

Fear of closed spaces

- Ans 1. Xenophobia
 2. Claustrophobia
 3. Hydrophobia
 4. Zoophobia

Question ID : 264330151867

Option 1 ID : 264330595087

Option 2 ID : 264330595090

Option 3 ID : 264330595089

Option 4 ID : 264330595088

Status : Answered

Chosen Option : 2

Comprehension:

In the following passage, some words have been deleted. Read the passage carefully and select the most appropriate option to fill in each blank.

A cashless India is the first step towards making the dream of digital India a reality.

Government is trying to (1)_____ a cashless environment in the country.

Demonetisation appears to be a stepping (2)_____ in that direction. To help facilitate this, government even (3)_____ its own app 'BHIM' built for the same purpose. The

(4)_____ of conducting online financial transactions is probably the biggest motivator to go digital. You will no longer need to carry wads of cash, plastic cards or even queue up for ATM withdrawals. It's also safer and easier spending option when you are travelling. Making transactions digitally makes it easy to keep track of your finances. The (5)_____ are enormous for everyone if you leave out the low-income group, which will face a huge challenge. For the rest of the country, it is constructive and simple. However, the convenience of net-banking, m-banking, card or mobile wallet transactions can make you spend more than your budget.

SubQuestion No : 21

Q.21 Select the most appropriate option to fill in blank No. 1.

- Ans 1. preach
 2. determine
 3. precede
 4. create

Question ID : 264330152700

Option 1 ID : 264330598399

Option 2 ID : 264330598400

Option 3 ID : 264330598401

Option 4 ID : 264330598402

Status : Answered

Chosen Option : 4

Comprehension:

In the following passage, some words have been deleted. Read the passage carefully and select the most appropriate option to fill in each blank.

A cashless India is the first step towards making the dream of digital India a reality. Government is trying to (1)_____ a cashless environment in the country. Demonetisation appears to be a stepping (2)_____ in that direction. To help facilitate this, government even (3)_____ its own app 'BHIM' built for the same purpose. The (4)_____ of conducting online financial transactions is probably the biggest motivator to go digital. You will no longer need to carry wads of cash, plastic cards or even queue up for ATM withdrawals. It's also safer and easier spending option when you are travelling. Making transactions digitally makes it easy to keep track of your finances. The (5)_____ are enormous for everyone if you leave out the low-income group, which will face a huge challenge. For the rest of the country, it is constructive and simple. However, the convenience of net-banking, m-banking, card or mobile wallet transactions can make you spend more than your budget.

SubQuestion No : 22

Q.22 Select the most appropriate option to fill in blank No. 2.

- Ans 1. method
 2. matter
 3. stairs
 4. stone

Question ID : 264330152701

Option 1 ID : 264330598405

Option 2 ID : 264330598403

Option 3 ID : 264330598406

Option 4 ID : 264330598404

Status : Answered

Chosen Option : 1

Comprehension:

In the following passage, some words have been deleted. Read the passage carefully and select the most appropriate option to fill in each blank.

A cashless India is the first step towards making the dream of digital India a reality. Government is trying to (1)_____ a cashless environment in the country. Demonetisation appears to be a stepping (2)_____ in that direction. To help facilitate this, government even (3)_____ its own app 'BHIM' built for the same purpose. The (4)_____ of conducting online financial transactions is probably the biggest motivator to go digital. You will no longer need to carry wads of cash, plastic cards or even queue up for ATM withdrawals. It's also safer and easier spending option when you are travelling. Making transactions digitally makes it easy to keep track of your finances. The (5)_____ are enormous for everyone if you leave out the low-income group, which will face a huge challenge. For the rest of the country, it is constructive and simple. However, the convenience of net-banking, m-banking, card or mobile wallet transactions can make you spend more than your budget.

SubQuestion No : 23

Q.23 Select the most appropriate option to fill in blank No. 3.

- Ans 1. followed
 2. sensed
 3. launched
 4. submitted

Question ID : 264330152702

Option 1 ID : 264330598410

Option 2 ID : 264330598409

Option 3 ID : 264330598407

Option 4 ID : 264330598408

Status : Answered

Chosen Option : 3

Comprehension:

In the following passage, some words have been deleted. Read the passage carefully and select the most appropriate option to fill in each blank.

A cashless India is the first step towards making the dream of digital India a reality. Government is trying to (1)_____ a cashless environment in the country. Demonetisation appears to be a stepping (2)_____ in that direction. To help facilitate this, government even (3)_____ its own app 'BHIM' built for the same purpose. The (4)_____ of conducting online financial transactions is probably the biggest motivator to go digital. You will no longer need to carry wads of cash, plastic cards or even queue up for ATM withdrawals. It's also safer and easier spending option when you are travelling. Making transactions digitally makes it easy to keep track of your finances. The (5)_____ are enormous for everyone if you leave out the low-income group, which will face a huge challenge. For the rest of the country, it is constructive and simple. However, the convenience of net-banking, m-banking, card or mobile wallet transactions can make you spend more than your budget.

SubQuestion No : 24

Q.24 Select the most appropriate option to fill in blank No. 4.

- Ans 1. hassle
 2. ease
 3. agony
 4. delay

Question ID : 264330152703

Option 1 ID : 264330598412

Option 2 ID : 264330598414

Option 3 ID : 264330598411

Option 4 ID : 264330598413

Status : Answered

Chosen Option : 2

Comprehension:

In the following passage, some words have been deleted. Read the passage carefully and select the most appropriate option to fill in each blank.

A cashless India is the first step towards making the dream of digital India a reality. Government is trying to (1)_____ a cashless environment in the country. Demonetisation appears to be a stepping (2)_____ in that direction. To help facilitate this, government even (3)_____ its own app 'BHIM' built for the same purpose. The (4)_____ of conducting online financial transactions is probably the biggest motivator to go digital. You will no longer need to carry wads of cash, plastic cards or even queue up for ATM withdrawals. It's also safer and easier spending option when you are travelling. Making transactions digitally makes it easy to keep track of your finances. The (5)_____ are enormous for everyone if you leave out the low-income group, which will face a huge challenge. For the rest of the country, it is constructive and simple. However, the convenience of net-banking, m-banking, card or mobile wallet transactions can make you spend more than your budget.

SubQuestion No : 25

Q.25 Select the most appropriate option to fill in blank No. 5.

- Ans 1. attempts
 2. scenarios
 3. benefits
 4. severity

Question ID : 264330152704

Option 1 ID : 264330598417

Option 2 ID : 264330598415

Option 3 ID : 264330598416

Option 4 ID : 264330598418

Status : Answered

Chosen Option : 3

Multi Tasking Non Technical Staff and Havaladar CBIC and CBN Examination 2023

Roll Number	
Candidate Name	
Venue Name	TCS Gito Bitan
Exam Date	11/09/2023
Exam Time	4:00 PM - 6:00 PM
Subject	MTS Non Tech Havaladar CBIC and CBN Examination 2023

Section : Numerical and Mathematical Ability

Q.1 A thief noticed a policeman at a distance of 500 m away from him. The thief starts running at a speed of 60 km/h and the policeman chased him running at a speed of 70 km/h. Find the time taken by the policeman to catch the thief (in minutes).

- Ans
- 1. 15
 - 2. 10
 - 3. 3
 - 4. 6

Question ID : 264330153852

Option 1 ID : 264330602874

Option 2 ID : 264330602871

Option 3 ID : 264330602873

Option 4 ID : 264330602872

Status : Answered

Chosen Option : 3

Q.2 If the income of T is 8 times his savings, then his expenditure is _____ times his savings.

- Ans
- 1. 6
 - 2. 7
 - 3. 8
 - 4. 5

Question ID : 264330153803

Option 1 ID : 264330602677

Option 2 ID : 264330602676

Option 3 ID : 264330602675

Option 4 ID : 264330602678

Status : Answered

Chosen Option : 2

Q.3 The average marks of 21 papers is 50. The average marks of the first 11 papers is 52 and that of the last 11 papers is 45. Find the marks of the 11th paper.

- Ans**
- 1. 17
 - 2. 14
 - 3. 20
 - 4. 15

Question ID : 264330153834
Option 1 ID : 264330602802
Option 2 ID : 264330602799
Option 3 ID : 264330602800
Option 4 ID : 264330602801
Status : Answered
Chosen Option : 1

Q.4 By selling a cycle for ₹5,800, a man gains 45%. What will be the cost price of the cycle?

- Ans**
- 1. ₹3,000
 - 2. ₹4,500
 - 3. ₹4,000
 - 4. ₹3,500

Question ID : 264330162068
Option 1 ID : 264330635600
Option 2 ID : 264330635602
Option 3 ID : 264330635599
Option 4 ID : 264330635601
Status : Answered
Chosen Option : 3

Q.5 Mayur and Aham enter into a partnership by making investments in the ratio 2 : 3. 10% of the total profit goes to charity. If Aham's share is ₹4,860, then what is the total profit (in ₹) earned?

- Ans**
- 1. 7,200
 - 2. 9,000
 - 3. 8,500
 - 4. 11,000

Question ID : 264330155743
Option 1 ID : 264330610378
Option 2 ID : 264330610376
Option 3 ID : 264330610377
Option 4 ID : 264330610375
Status : Answered
Chosen Option : 4

Q.6 A certain sum of money lent out at simple interest amounts to ₹12,600 in 2 years and ₹16,200 in 4 years. The rate per cent per annum is:

- Ans
- 1. 25 %
 - 2. $12\frac{6}{7}$ %
 - 3. $17\frac{1}{2}$ %
 - 4. 20 %

Question ID : 264330159036
Option 1 ID : 264330623505
Option 2 ID : 264330623506
Option 3 ID : 264330623504
Option 4 ID : 264330623503
Status : Answered
Chosen Option : 4

Q.7 Dev and Goyal together can do a piece of work in 14 days and Dev alone can do it in 27 days. In how many days can Goyal alone do it?

- Ans
- 1. $21\frac{1}{13}$
 - 2. $30\frac{1}{13}$
 - 3. $29\frac{1}{13}$
 - 4. $32\frac{1}{13}$

Question ID : 264330155755
Option 1 ID : 264330610423
Option 2 ID : 264330610425
Option 3 ID : 264330610424
Option 4 ID : 264330610426
Status : Answered
Chosen Option : 1

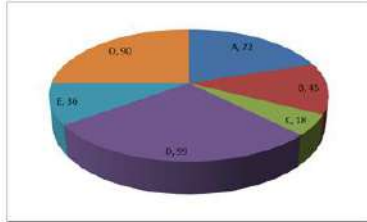
Q.8 A company buys raw materials for ₹10,000 and manufactures a product that costs an additional ₹5,000 in labour and overhead. The product is sold to a distributor for ₹25,000, who marks it up by 20% and sells it to a retailer. The retailer then marks it up by another 25% and sells it to the end customer. What is the overall percentage profit made by the company, distributor, and retailer combined?

- Ans
- 1. 100%
 - 2. 150%
 - 3. 125%
 - 4. 135%

Question ID : 264330156266
Option 1 ID : 264330612463
Option 2 ID : 264330612466
Option 3 ID : 264330612464
Option 4 ID : 264330612465
Status : Answered
Chosen Option : 2

Q.9 The pie diagram represents the export of different types of fabrics (in degree measure) from India during 2015.

Out of the total export, what is the percentage of fabric B?



- Ans**
- 1. 45%
 - 2. 25%
 - 3. 12.5%
 - 4. 18%

Question ID : 264330154065

Option 1 ID : 264330603723

Option 2 ID : 264330603724

Option 3 ID : 264330603725

Option 4 ID : 264330603726

Status : Answered

Chosen Option : 3

Q.10 Find the area (in cm^2) of the rhombus, lengths of whose diagonals are, respectively, 7.5 cm and 5.6 cm.

- Ans**
- 1. 21
 - 2. 28
 - 3. 27
 - 4. 30

Question ID : 264330153862

Option 1 ID : 264330602912

Option 2 ID : 264330602911

Option 3 ID : 264330602913

Option 4 ID : 264330602914

Status : Answered

Chosen Option : 2

Q.11 The average age of 25 students in a group is 14 years. When the teacher's age is included, the average increases by 1.5 years. What is the teacher's age (in years)?

- Ans**
- 1. 42
 - 2. 50
 - 3. 53
 - 4. 46

Question ID : 264330156466

Option 1 ID : 264330613254

Option 2 ID : 264330613251

Option 3 ID : 264330613253

Option 4 ID : 264330613252

Status : Answered

Chosen Option : 3

Q.12 If $a : b = 3 : 7$, then the ratio of $(5a + 7b) : (7a + 5b)$ is:

- Ans
- 1. $3 : 7$
 - 2. $7 : 11$
 - 3. $7 : 9$
 - 4. $8 : 7$

Question ID : 264330154081
Option 1 ID : 264330603788
Option 2 ID : 264330603787
Option 3 ID : 264330603790
Option 4 ID : 264330603789
Status : Answered
Chosen Option : 4

Q.13 Two-fifth of a journey is covered at a speed of 45 km/h, and the remaining distance is covered at the rate of 63 km/h. The average speed for the whole journey (in km/h, rounded off to the nearest integer) is:

- Ans
- 1. 60
 - 2. 58
 - 3. 54
 - 4. 55

Question ID : 264330156470
Option 1 ID : 264330613267
Option 2 ID : 264330613270
Option 3 ID : 264330613268
Option 4 ID : 264330613269
Status : Answered
Chosen Option : 1

Q.14 Some solid metallic right circular cones, each with diameter of the base 8 cm and height 6 cm are melted to form a solid sphere of radius 12 cm. Find the number of right circular cones which are melted.

- Ans
- 1. 60
 - 2. 66
 - 3. 72
 - 4. 70

Question ID : 264330156019
Option 1 ID : 264330611476
Option 2 ID : 264330611478
Option 3 ID : 264330611477
Option 4 ID : 264330611475
Status : Answered
Chosen Option : 3

Q.15 Radha, Prarima and Reena begin to jog around a circular path and they complete their revolutions in 50 seconds, 75 seconds and 100 seconds, respectively. After how much time (in minutes) will they meet together at the starting point for the first time?

- Ans**
- 1. 6
 - 2. 5
 - 3. 4
 - 4. 3

Question ID : 264330155686

Option 1 ID : 264330610150

Option 2 ID : 264330610149

Option 3 ID : 264330610148

Option 4 ID : 264330610147

Status : Answered

Chosen Option : 2

Q.16 A, B and C can complete a piece of work in 12 days, 24 days and 36 days, respectively. A starts working alone on the first day and then A is assisted by B on the second day and C on the third day, respectively. This pattern is repeated till the work gets completed. In how many days does the work will be over?

- Ans**
- 1. 9
 - 2. 10
 - 3. $9\frac{1}{2}$
 - 4. $8\frac{1}{2}$

Question ID : 264330156310

Option 1 ID : 264330612641

Option 2 ID : 264330612639

Option 3 ID : 264330612642

Option 4 ID : 264330612640

Status : Answered

Chosen Option : 4

Q.17 The table shows the annual expenditure of five families during the last 5 years. (In ₹ Thousands)

Year→ Family ↓	2017	2018	2019	2020	2021
F ₁	35	50	55	60	45
F ₂	45	35	60	55	40
F ₃	53	40	45	65	50
F ₄	40	30	35	50	45
F ₅	35	45	55	50	45

Which family had the highest expense throughout the years?

- Ans**
- 1. F₅
 - 2. F₄
 - 3. F₃
 - 4. F₁

Question ID : 264330154061

Option 1 ID : 264330603708

Option 2 ID : 264330603710

Option 3 ID : 264330603709

Option 4 ID : 264330603707

Status : Answered

Chosen Option : 3

Q.18 In how many years will ₹1,60,000 become ₹2,79,841 at a compound interest (Compounded annually) rate of 15% per annum?

- Ans**
- 1. 6
 - 2. 3
 - 3. 5
 - 4. 4

Question ID : 264330156189

Option 1 ID : 264330612155

Option 2 ID : 264330612158

Option 3 ID : 264330612156

Option 4 ID : 264330612157

Status : Answered

Chosen Option : 4

Q.19 Identify the single rational number that may replace the given expression.

$$[1^2 + 2^2 + 3^2 + 4^2] \times \frac{2}{3 \times 5} \div \left(\frac{1}{4}\right)^2$$

- Ans
- 1. 16
 - 2. 64
 - 3. $\frac{1}{64}$
 - 4. $\frac{1}{16}$

Question ID : 264330154115
Option 1 ID : 264330603925
Option 2 ID : 264330603923
Option 3 ID : 264330603924
Option 4 ID : 264330603926
Status : Answered
Chosen Option : 2

Q.20 Two trains A and B, 210 m and 150 m, respectively, in length, are running in the same direction on parallel lines. If the speed of A and B be 110 km/h and 128 km/h, respectively, then what will be the time (in seconds) taken by train B to cross train A?

- Ans
- 1. 72
 - 2. 74
 - 3. 71
 - 4. 70

Question ID : 264330156234
Option 1 ID : 264330612337
Option 2 ID : 264330612338
Option 3 ID : 264330612336
Option 4 ID : 264330612335
Status : Answered
Chosen Option : 2

Section : Reasoning Ability and Problem Solving

Q.1 Read the given statements and conclusions carefully. You have to take the given statements to be true even if they seem to be at variance from commonly known facts. You have to decide which conclusion/s logically follow/s from the given statements.

Statements: All trees are mobiles. Some mobiles are small. All small are ants.

Conclusion I: Some trees are mobiles.

Conclusion II: Some ants are small.

- Ans
- 1. Only conclusion (II) is follow.
 - 2. Neither conclusion (I) nor (II) is follow.
 - 3. Only conclusion (I) is follow.
 - 4. Both conclusions (I) and (II) are follow.

Question ID : 264330155894
Option 1 ID : 264330610980
Option 2 ID : 264330610981
Option 3 ID : 264330610979
Option 4 ID : 264330610982
Status : Answered
Chosen Option : 1

Q.2 If A means '+', E means '×', D means '+', G means '+', then what will come in place of the question mark (?) in the following equation?

$$21 G 14 D 1 A 2 E 8 = ?$$

- Ans
- 1. 11
 - 2. 25
 - 3. 17
 - 4. 19

Question ID : 264330154681
Option 1 ID : 264330606187
Option 2 ID : 264330606190
Option 3 ID : 264330606188
Option 4 ID : 264330606189
Status : Answered
Chosen Option : 4

Q.3 What will come in place of '?' in the following equation, if '+' and '×' are interchanged and '×' and '-' are interchanged?

$$10 + 2 - 6 \times 7 + 1 = ?$$

- Ans
- 1. 24
 - 2. 19
 - 3. 18
 - 4. 15

Question ID : 264330154661
Option 1 ID : 264330606109
Option 2 ID : 264330606110
Option 3 ID : 264330606108
Option 4 ID : 264330606107
Status : Answered
Chosen Option : 4

Q.4 What should come in place of ? in the given series?

$$57 \ 62 \ 72 \ 77 \ 87 \ ?$$

- Ans
- 1. 94
 - 2. 93
 - 3. 92
 - 4. 91

Question ID : 264330151549
Option 1 ID : 264330593826
Option 2 ID : 264330593825
Option 3 ID : 264330593824
Option 4 ID : 264330593823
Status : Answered
Chosen Option : 3

Q.5 What should come in place of ? in the given series based on the English alphabetical order?

LAT, KYS, JWR, IUQ, ?

- Ans**
- 1. GRQ
 - 2. HSP
 - 3. ISP
 - 4. HQR

Question ID : 264330155777

Option 1 ID : 264330610514

Option 2 ID : 264330610513

Option 3 ID : 264330610512

Option 4 ID : 264330610511

Status : Answered

Chosen Option : 2

Q.6 Read the given statements and conclusions carefully. You have to take the given statements to be true even if they seem to be at variance from commonly known facts. You have to decide which conclusion/s logically follow/s from the given statements.

Statements: All apples are fire. All fire is hot. Some hot are crabs.

Conclusion I: No apples are hot.

Conclusion II: Some crabs are fire.

- Ans**
- 1. Only conclusion (II) is follow.
 - 2. Neither conclusion (I) nor (II) is follow.
 - 3. Only conclusion (I) is follow.
 - 4. Both conclusions (I) and (II) are follow.

Question ID : 264330155918

Option 1 ID : 264330611076

Option 2 ID : 264330611077

Option 3 ID : 264330611075

Option 4 ID : 264330611078

Status : Answered

Chosen Option : 2

Q.7 Find out the correct alternative that when filled in the blanks in the same sequence will make the series logically complete.

DFZ_ D_CJ DF_I _FIH DF_G

- Ans**
- 1. DLFFK
 - 2. KFFDL
 - 3. KDFLF
 - 4. FDFKL

Question ID : 264330154724

Option 1 ID : 264330606361

Option 2 ID : 264330606362

Option 3 ID : 264330606360

Option 4 ID : 264330606359

Status : Answered

Chosen Option : 2

Q.8 22 is related to 198 following a certain logic. Following the same logic, 41 is related to 369. To which of the following is 54 related to, following the same logic?

- Ans**
- 1. 286
 - 2. 486
 - 3. 268
 - 4. 468

Question ID : 264330151606
Option 1 ID : 264330594052
Option 2 ID : 264330594051
Option 3 ID : 264330594054
Option 4 ID : 264330594053
Status : Answered
Chosen Option : 2

Q.9 What should come in place of '?' in the given series?

7 16 43 ? 367 1096 3283

- Ans**
- 1. 105
 - 2. 117
 - 3. 124
 - 4. 98

Question ID : 264330151490
Option 1 ID : 264330593588
Option 2 ID : 264330593589
Option 3 ID : 264330593590
Option 4 ID : 264330593587
Status : Answered
Chosen Option : 3

Q.10 Select the word-pair that best represents a similar relationship to the one expressed in the pair of words given below.

(The words must be considered as meaningful English words and must not be related to each other based on the number of letters/number of consonants/vowels in the word)

Bacteria : Decomposition

- Ans**
- 1. Oxygen : Treatment
 - 2. Yeast : Fermentation
 - 3. Volcano : Eruption
 - 4. Antibiotic : Injection

Question ID : 264330154635
Option 1 ID : 264330606006
Option 2 ID : 264330606005
Option 3 ID : 264330606003
Option 4 ID : 264330606004
Status : Answered
Chosen Option : 2

Q.11 Which figure should replace the question mark (?) if the following figure series were to be continued?

L	I	G	Q	B	I	T	2	G	I	Q	2	
	B	6		6	G		Q	L		L	G	?
Q		T	T		L	I	6	6			T	

Ans

✗ 1.

6	I	T
	Q	2
L		G

✗ 2.

Q	2	6
	I	F
T		L

✗ 3.

6	G	T
	I	Q
2		L

✓ 4.

6	F	G
	I	T
2		L

Question ID : 264330154750

Option 1 ID : 264330606465

Option 2 ID : 264330606464

Option 3 ID : 264330606463

Option 4 ID : 264330606466

Status : Answered

Chosen Option : 2

Q.12 11 is related to 123 following a certain logic. Following the same logic, 20 is related to 402. To which of the following is 13 related to, following the same logic?

Ans ✓ 1. 171

✗ 2. 172

✗ 3. 173

✗ 4. 174

Question ID : 264330151582

Option 1 ID : 264330593955

Option 2 ID : 264330593956

Option 3 ID : 264330593957

Option 4 ID : 264330593958

Status : Answered

Chosen Option : 1

Q.13 In a certain code language, 'SCAR' is coded as '2386' and 'RACE' is coded as '8642'. What is the code for 'E' in the given code language?

- Ans**
- 1. 8
 - 2. 4
 - 3. 2
 - 4. 6

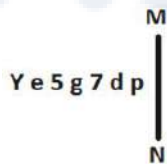
Question ID : 264330151708
Option 1 ID : 264330594462
Option 2 ID : 264330594459
Option 3 ID : 264330594461
Option 4 ID : 264330594460
Status : Answered
Chosen Option : 2

Q.14 In a certain code language, 'QUALIFY' is coded as 'PTZKHVF' and 'PANTHER' is coded as 'OZMSGRE'. What is the code for 'FORCEPS' in the given code language?

- Ans**
- 1. EMOCDRQ
 - 2. DMQCERP
 - 3. DNPCDSQ
 - 4. ENQBDSQ

Question ID : 264330155829
Option 1 ID : 264330610722
Option 2 ID : 264330610720
Option 3 ID : 264330610719
Option 4 ID : 264330610721
Status : Answered
Chosen Option : 4

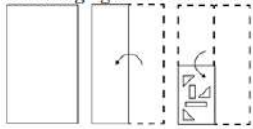
Q.15 Select the correct mirror image of the given figure when the mirror is placed at MN as shown below.



- Ans**
- 1. q b L g 5 e Y
 - 2. q b 7 g 2 e Y
 - 3. q b 7 g 2 e Y
 - 4. d b g 7 2 e Y

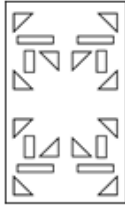
Question ID : 264330151515
Option 1 ID : 264330593687
Option 2 ID : 264330593690
Option 3 ID : 264330593688
Option 4 ID : 264330593689
Status : Answered
Chosen Option : 3

Q.16 The sequence of folding a piece of paper and the manner in which the folded paper is cut is shown in the following figures. How would this paper look when unfolded?

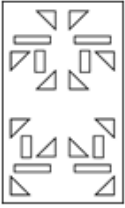


Ans

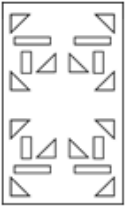
✓ 1.



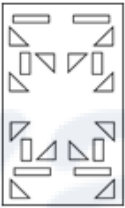
✗ 2.



✗ 3.



✗ 4.



Question ID : 264330155610

Option 1 ID : 264330609843

Option 2 ID : 264330609845

Option 3 ID : 264330609846

Option 4 ID : 264330609844

Status : Answered

Chosen Option : 1

Q.17 If 13th March 2007 is Tuesday then what will be the day of the week on 14th Sep 2017?

Ans ✗ 1. Monday

✗ 2. Tuesday

✓ 3. Thursday

✗ 4. Wednesday

Question ID : 264330154335

Option 1 ID : 264330604803

Option 2 ID : 264330604804

Option 3 ID : 264330604805

Option 4 ID : 264330604806

Status : Answered

Chosen Option : 4

Q.18 Select the combination of letters that when sequentially placed in the blanks of the given series, will complete the series.

ZY _ Z _ Z _ ZZ _ Z

- Ans
- 1. ZYYZZ
 - 2. ZYZYY
 - 3. YZYZZ
 - 4. YYZYZ

Question ID : 264330151643
Option 1 ID : 264330594199
Option 2 ID : 264330594201
Option 3 ID : 264330594202
Option 4 ID : 264330594200
Status : Answered
Chosen Option : 2

Q.19 Seven people, V, F, D, S, R, C, and P are sitting in a straight line, facing south. Only two people sit between V and P. Only two people sit to the right of V. D sits third to the left of S. P is an immediate neighbour of D and F. C is an immediate neighbour of S.

Total how many people sit between S and P?

- Ans
- 1. Four
 - 2. One
 - 3. Three
 - 4. Two

Question ID : 264330161694
Option 1 ID : 264330634106
Option 2 ID : 264330634103
Option 3 ID : 264330634105
Option 4 ID : 264330634104
Status : Answered
Chosen Option : 3

Q.20 What should come in place of ? in the given series?

84 88 96 108 124 ?

- Ans
- 1. 124
 - 2. 154
 - 3. 134
 - 4. 144

Question ID : 264330151543
Option 1 ID : 264330593799
Option 2 ID : 264330593802
Option 3 ID : 264330593800
Option 4 ID : 264330593801
Status : Answered
Chosen Option : 4

Section : General Awareness

Q.1 In which year did the 'Battle of Buxar' take place?

Ans 1. 1764 CE

2. 1769 CE

3. 1757 CE

4. 1761 CE

Question ID : 264330162322

Option 1 ID : 264330636616

Option 2 ID : 264330636618

Option 3 ID : 264330636615

Option 4 ID : 264330636617

Status : Answered

Chosen Option : 1

Q.2 Which Article of the Indian Constitution mandates that the state should protect every monument or place of artistic or historic interest?

Ans 1. Article 39A

2. Article 50

3. Article 49

4. Article 48A

Question ID : 264330162254

Option 1 ID : 264330636346

Option 2 ID : 264330636344

Option 3 ID : 264330636343

Option 4 ID : 264330636345

Status : Answered

Chosen Option : 3

Q.3 To mark the celebration of Gandhi Jayanti, the _____ celebrates it as International Day of Non-Violence.

Ans 1. United Nations

2. BRICS Nations

3. South Asian Association for Regional Cooperation

4. Group of 20

Question ID : 264330160825

Option 1 ID : 264330630633

Option 2 ID : 264330630634

Option 3 ID : 264330630632

Option 4 ID : 264330630631

Status : Answered

Chosen Option : 1

Q.4 Alarvel Valli is a _____ dancer.

Ans 1. Bharatnatyam

2. Odissi

3. Kuchipudi

4. Kathak

Question ID : 264330159068

Option 1 ID : 264330623631

Option 2 ID : 264330623634

Option 3 ID : 264330623632

Option 4 ID : 264330623633

Status : Answered

Chosen Option : 1

Q.5 Which of the following is an example of a microfinance institution (MFI) in India?

Ans 1. State Bank of India (SBI)

2. Bandhan Bank

3. ICICI Bank

4. HDFC Bank

Question ID : 264330157296

Option 1 ID : 264330616547

Option 2 ID : 264330616549

Option 3 ID : 264330616548

Option 4 ID : 264330616550

Status : Answered

Chosen Option : 2

Q.6 Which of the following is an autobiography by Mahatma Gandhi?

Ans 1. The Story of My Experiments with Truth

2. My Truth

3. Matters of Discretion

4. My Country My Life

Question ID : 264330161756

Option 1 ID : 264330634351

Option 2 ID : 264330634354

Option 3 ID : 264330634353

Option 4 ID : 264330634352

Status : Answered

Chosen Option : 1

Q.7 Which of the following has initiated the Village Defence Guards scheme to instil a sense of self protection and ensure the safety and security of villages and infrastructural installations in and around the villages?

Ans 1. Ladakh

2. Uttar Pradesh

3. Jammu and Kashmir

4. Rajasthan

Question ID : 264330161407

Option 1 ID : 264330632957

Option 2 ID : 264330632958

Option 3 ID : 264330632955

Option 4 ID : 264330632956

Status : Answered

Chosen Option : 3

Q.8 The Sirpur Shrine is situated in which of the following states?

Ans 1. Odisha

2. Uttar Pradesh

3. Chhattisgarh

4. Bihar

Question ID : 264330160756

Option 1 ID : 264330630357

Option 2 ID : 264330630358

Option 3 ID : 264330630355

Option 4 ID : 264330630356

Status : Answered

Chosen Option : 4

Q.9 Which of the following factors does NOT affect the climate of India?

- Ans
- 1. Altitude
 - 2. Longitude
 - 3. Latitude
 - 4. Winds

Question ID : 264330157828
Option 1 ID : 264330618671
Option 2 ID : 264330618674
Option 3 ID : 264330618672
Option 4 ID : 264330618673
Status : Answered
Chosen Option : 4

Q.10 What is the common name for a saturated solution of calcium hydroxide widely used as a raw material in the chemical industry?

- Ans
- 1. Slaked lime
 - 2. Calomel
 - 3. Burnt Lime
 - 4. Limestone

Question ID : 264330161053
Option 1 ID : 264330631544
Option 2 ID : 264330631543
Option 3 ID : 264330631545
Option 4 ID : 264330631546
Status : Answered
Chosen Option : 2

Q.11 Who among the following singers is from Andhra Pradesh?

- Ans
- 1. Usha Uthup
 - 2. Asha Bhosle
 - 3. Alka Yagnik
 - 4. S Janaki

Question ID : 264330162234
Option 1 ID : 264330636264
Option 2 ID : 264330636263
Option 3 ID : 264330636266
Option 4 ID : 264330636265
Status : Answered
Chosen Option : 4

Q.12 Who led the Congress in the second round table conference held in London?

- Ans
- 1. Annie Besant
 - 2. Sarojini Naidu
 - 3. Jawahar Lal Nehru
 - 4. Mahatma Gandhi

Question ID : 264330162335
Option 1 ID : 264330636670
Option 2 ID : 264330636669
Option 3 ID : 264330636668
Option 4 ID : 264330636667
Status : Answered
Chosen Option : 4

Q.13 According to the Census of India 2011, which state has the second highest sex ratio?

- Ans 1. Kerala
 2. Tamil Nadu
 3. Assam
 4. Bihar

Question ID : 264330160159
Option 1 ID : 264330627975
Option 2 ID : 264330627976
Option 3 ID : 264330627977
Option 4 ID : 264330627978
Status : Answered
Chosen Option : 3

Q.14 Factor cost is also known as:

- Ans 1. market cost
 2. ex-factory cost
 3. input cost
 4. output cost

Question ID : 264330161458
Option 1 ID : 264330633161
Option 2 ID : 264330633162
Option 3 ID : 264330633159
Option 4 ID : 264330633160
Status : Answered
Chosen Option : 3

Q.15 Which cell found in the bone marrow acts as a repair system for the body?

- Ans 1. Bone Cells
 2. Fat Cells
 3. Muscle cells
 4. Stem cells

Question ID : 264330161085
Option 1 ID : 264330631672
Option 2 ID : 264330631673
Option 3 ID : 264330631674
Option 4 ID : 264330631671
Status : Answered
Chosen Option : 4

Q.16 Which of the following is a famous folk dance of Rajasthan?

- Ans 1. Chang Lo
 2. Daskathia
 3. Kalbelia
 4. Pala Jatra

Question ID : 264330159058
Option 1 ID : 264330623591
Option 2 ID : 264330623594
Option 3 ID : 264330623592
Option 4 ID : 264330623593
Status : Answered
Chosen Option : 3

Q.17 When was the first general election for Lok Sabha held in India?

- Ans
- 1. 1950-51
 - 2. 1949-50
 - 3. 1948-49
 - 4. 1951-52

Question ID : 264330160863
Option 1 ID : 264330630785
Option 2 ID : 264330630784
Option 3 ID : 264330630783
Option 4 ID : 264330630786
Status : Answered
Chosen Option : 4

Q.18 Who among the following female singers has been felicitated with the Bharat Ratna?

- Ans
- 1. Usha Uthup
 - 2. Lata Mangeshkar
 - 3. Asha Bhosle
 - 4. Vani Jayaram

Question ID : 264330160975
Option 1 ID : 264330631233
Option 2 ID : 264330631232
Option 3 ID : 264330631231
Option 4 ID : 264330631234
Status : Answered
Chosen Option : 2

Q.19 Which of the following states of India is the first to receive rainfall from the South West Monsoon?

- Ans
- 1. Himachal Pradesh
 - 2. Kerala
 - 3. Telangana
 - 4. Rajasthan

Question ID : 264330161518
Option 1 ID : 264330633401
Option 2 ID : 264330633400
Option 3 ID : 264330633402
Option 4 ID : 264330633399
Status : Answered
Chosen Option : 2

Q.20 Which famous Indian danseuse became the first woman to be nominated as a member of Rajya Sabha?

- Ans
- 1. Rukmini Devi Arundale
 - 2. Kamala Kumari
 - 3. Sitara Devi
 - 4. Mrinalini Sarabhai

Question ID : 264330155475
Option 1 ID : 264330609303
Option 2 ID : 264330609305
Option 3 ID : 264330609304
Option 4 ID : 264330609306
Status : Answered
Chosen Option : 4

Q.21 Which of the following is a famous novel written by Munshi Premchand?

- Ans
- 1. Gunaho Ka Devta
 - 2. Kitne Pakistan
 - 3. Rag Darbari
 - 4. Godan

Question ID : 264330155502
Option 1 ID : 264330609413
Option 2 ID : 264330609412
Option 3 ID : 264330609411
Option 4 ID : 264330609414
Status : Answered
Chosen Option : 4

Q.22 India played in the finals of the 2023 World Test Championship against Australia.
Where was this match conducted?

- Ans
- 1. Dubai
 - 2. London
 - 3. Kolkata
 - 4. Sydney

Question ID : 264330161144
Option 1 ID : 264330631910
Option 2 ID : 264330631907
Option 3 ID : 264330631909
Option 4 ID : 264330631908
Status : Answered
Chosen Option : 4

Q.23 D Gukesh was awarded player of the year award in March 2023. He plays which sport?

- Ans
- 1. Snooker
 - 2. Boxing
 - 3. Badminton
 - 4. Chess

Question ID : 264330158357
Option 1 ID : 264330620788
Option 2 ID : 264330620790
Option 3 ID : 264330620787
Option 4 ID : 264330620789
Status : Answered
Chosen Option : 2

Q.24 According to the Ministry of Textile 2022-23, which state is the second largest producer of cotton?

- Ans 1. Maharashtra
 2. Bihar
 3. Gujarat
 4. Madhya Pradesh

Question ID : 264330160142
Option 1 ID : 264330627907
Option 2 ID : 264330627909
Option 3 ID : 264330627908
Option 4 ID : 264330627910
Status : Answered
Chosen Option : 1

Q.25 In which of the following States was the final of the 2023 Intercontinental Cup football championship held?

- Ans 1. Maharashtra
 2. Telangana
 3. Karnataka
 4. Odisha

Question ID : 264330161151
Option 1 ID : 264330631936
Option 2 ID : 264330631938
Option 3 ID : 264330631935
Option 4 ID : 264330631937
Status : Not Answered
Chosen Option : --

Section : English Language and Comprehension

Q.1 Select the INCORRECTLY spelt word.

- Ans 1. Humorous
 2. Necassery
 3. Apparent
 4. Definite

Question ID : 264330153107
Option 1 ID : 264330599994
Option 2 ID : 264330599992
Option 3 ID : 264330599991
Option 4 ID : 264330599993
Status : Answered
Chosen Option : 2

Q.2 Select the option that can be used as a one-word substitute for the given group of words.

A small shop that sells fashionable clothes

- Ans 1. Boutique
 2. Store
 3. Tailoring
 4. Couture

Question ID : 264330152587
Option 1 ID : 264330597952
Option 2 ID : 264330597951
Option 3 ID : 264330597954
Option 4 ID : 264330597953
Status : Answered
Chosen Option : 1

Q.3 Parts of the following sentence have been given as options. Select the option that contains an error.

The blue is a beautiful colour.

- Ans 1. The blue
 2. is
 3. a
 4. beautiful colour

Question ID : 264330152790
Option 1 ID : 264330598751
Option 2 ID : 264330598752
Option 3 ID : 264330598753
Option 4 ID : 264330598754
Status : Answered
Chosen Option : 1

Q.4 Select the most appropriate option to fill in the blank.
The Nile is the _____ river of the world.

- Ans 1. long
 2. longer
 3. more longer
 4. longest

Question ID : 264330153198
Option 1 ID : 264330600351
Option 2 ID : 264330600352
Option 3 ID : 264330600354
Option 4 ID : 264330600353
Status : Answered
Chosen Option : 4

Q.5 Parts of the following sentence have been given as options. Select the option that contains an error.

Tuntun and her friends dance beautiful.

- Ans
- 1. dance
 - 2. and her friends
 - 3. Tuntun
 - 4. beautiful

Question ID : 264330155228
Option 1 ID : 264330608369
Option 2 ID : 264330608368
Option 3 ID : 264330608367
Option 4 ID : 264330608370
Status : Answered
Chosen Option : 4

Q.6 Select the most appropriate idiom to fill in the blank.
It's risky to invest all your savings in one company; it's like _____.

- Ans
- 1. going down in flames
 - 2. putting all your eggs in one basket
 - 3. biting the bullet
 - 4. breaking a leg

Question ID : 264330155216
Option 1 ID : 264330608324
Option 2 ID : 264330608325
Option 3 ID : 264330608326
Option 4 ID : 264330608323
Status : Answered
Chosen Option : 2

Q.7 Select the option that can be used as a one-word substitute for the underlined group of words.

Sometimes we have to accept replacing something with something else, if we want to move forward.

- Ans
- 1. evaluation
 - 2. change
 - 3. invasion
 - 4. invention

Question ID : 264330153492
Option 1 ID : 264330601485
Option 2 ID : 264330601486
Option 3 ID : 264330601483
Option 4 ID : 264330601484
Status : Answered
Chosen Option : 1

Q.8 Select the most appropriate ANTONYM of the given word.
Dishevelled

- Ans 1. Assertive
 2. Tidy
 3. Tainted
 4. Rigid

Question ID : 264330152720
Option 1 ID : 264330598480
Option 2 ID : 264330598482
Option 3 ID : 264330598481
Option 4 ID : 264330598479
Status : Not Answered
Chosen Option : --

Q.9 Select the most appropriate option to fill in the blank.
I _____ to many countries to find the source of true happiness.

- Ans 1. triveled
 2. travelled
 3. travalled
 4. travellid

Question ID : 264330153304
Option 1 ID : 264330600773
Option 2 ID : 264330600772
Option 3 ID : 264330600771
Option 4 ID : 264330600774
Status : Answered
Chosen Option : 2

Q.10 Select the INCORRECTLY spelt word.

- Ans 1. Abhorrent
 2. Jugglary
 3. Gesture
 4. Magnificence

Question ID : 264330152785
Option 1 ID : 264330598734
Option 2 ID : 264330598732
Option 3 ID : 264330598731
Option 4 ID : 264330598733
Status : Answered
Chosen Option : 1

Q.11 Select the most appropriate meaning of the underlined idiom in the following sentence.

Irrespective of the chaos in the classroom, our class teacher stays cool as a cucumber.

- Ans
- 1. Stays calm and composed
 - 2. Behaves like a vegetable
 - 3. Scolds all the students in the classroom
 - 4. Develops a fever

Question ID : 264330153050
Option 1 ID : 264330599768
Option 2 ID : 264330599767
Option 3 ID : 264330599770
Option 4 ID : 264330599769
Status : Answered
Chosen Option : 1

Q.12 Select the most appropriate synonym of the given word.
Hazard

- Ans
- 1. Marvel
 - 2. Miracle
 - 3. Ardent
 - 4. Accident

Question ID : 264330151822
Option 1 ID : 264330594917
Option 2 ID : 264330594916
Option 3 ID : 264330594918
Option 4 ID : 264330594915
Status : Answered
Chosen Option : 4

Q.13 Select the most appropriate option to fill in the blank.
He is a smug and very _____ person who thinks only about himself.

- Ans
- 1. arsonist
 - 2. diffident
 - 3. egoistic
 - 4. humble

Question ID : 264330153582
Option 1 ID : 264330601826
Option 2 ID : 264330601824
Option 3 ID : 264330601825
Option 4 ID : 264330601823
Status : Answered
Chosen Option : 3

Q.14 Select the word segment which substitutes the bracketed word correctly and completes the sentence meaningfully.
I (am here) since 1981.

- Ans
- 1. have been here
 - 2. had been here
 - 3. was here
 - 4. has been here

Question ID : 264330152566
Option 1 ID : 264330597869
Option 2 ID : 264330597867
Option 3 ID : 264330597868
Option 4 ID : 264330597870
Status : Answered
Chosen Option : 1

Q.15 Parts of the following sentence have been given as options. Select the option that contains an error.
You shall repented tomorrow for your misdeeds.

- Ans
- 1. for your misdeeds
 - 2. tomorrow
 - 3. shall repented
 - 4. You

Question ID : 264330152815
Option 1 ID : 264330598854
Option 2 ID : 264330598853
Option 3 ID : 264330598852
Option 4 ID : 264330598851
Status : Answered
Chosen Option : 3

Q.16 Select the most appropriate option that can substitute the underlined segment in the given sentence.

She think Alex is abandoning her.

- Ans
- 1. was thinking
 - 2. thought
 - 3. thinks
 - 4. was to think

Question ID : 264330153487
Option 1 ID : 264330601464
Option 2 ID : 264330601465
Option 3 ID : 264330601466
Option 4 ID : 264330601463
Status : Answered
Chosen Option : 3

Q.17 Select the most appropriate segment that can substitute the bracketed word in the following sentence.
The bridge that (connecting) the two valleys across the Brahmaputra river has recently been constructed in Arunachal Pradesh.

- Ans
- 1. will be connecting
 - 2. had connected
 - 3. will be connected
 - 4. connects

Question ID : 264330152631
Option 1 ID : 264330598127
Option 2 ID : 264330598130
Option 3 ID : 264330598128
Option 4 ID : 264330598129
Status : Answered
Chosen Option : 4

Q.18 Select the most appropriate idiom to fill in the blank.
Naina has six children, and I always _____ with their names.

- Ans
- 1. get mixed up
 - 2. get rid of
 - 3. get away clean
 - 4. get cold feet

Question ID : 264330153100
Option 1 ID : 264330599963
Option 2 ID : 264330599966
Option 3 ID : 264330599965
Option 4 ID : 264330599964
Status : Answered
Chosen Option : 1

Q.19 Select the most appropriate option to fill in the blank.
When it comes to planning her wedding, Maria wants _____.

- Ans
- 1. down for the count
 - 2. a black sheep
 - 3. the whole fifteen miles
 - 4. the whole nine yards

Question ID : 264330151884
Option 1 ID : 264330595158
Option 2 ID : 264330595155
Option 3 ID : 264330595156
Option 4 ID : 264330595157
Status : Not Answered
Chosen Option : --

Q.20 Select the most appropriate option to fill in the blank.

I know that I can count on my best friend to be by my side through ____ and thin.

- Ans
- 1. tough
 - 2. heavy
 - 3. thick
 - 4. fat

Question ID : 264330151861

Option 1 ID : 264330595063

Option 2 ID : 264330595066

Option 3 ID : 264330595064

Option 4 ID : 264330595065

Status : Answered

Chosen Option : 3

Comprehension:

In the following passage, some words have been deleted. Read the passage carefully and select the most appropriate option to fill in each blank.

I do not know how the party ended. I do not want to know. I went (1)___ upstairs, and undressed and (2)___ into bed, and lay there in the burning dark while the last guest gurgled in the hall below about the wonderful evening she had spent. I lay there (3)___ the front door shut after her, and Lavinia's steps came up the stairs and passed the door to the guest room beyond. And then after a couple of centuries (4)___, the clock struck three and I (5)___ to sleep.

SubQuestion No : 21

Q.21 Select the most appropriate option to fill in blank no. 1.

- Ans
- 1. over
 - 2. through
 - 3. around
 - 4. straight

Question ID : 264330151843

Option 1 ID : 264330594996

Option 2 ID : 264330594998

Option 3 ID : 264330594995

Option 4 ID : 264330594997

Status : Answered

Chosen Option : 4

Comprehension:

In the following passage, some words have been deleted. Read the passage carefully and select the most appropriate option to fill in each blank.

I do not know how the party ended. I do not want to know. I went (1)___ upstairs, and undressed and (2)___ into bed, and lay there in the burning dark while the last guest gurgled in the hall below about the wonderful evening she had spent. I lay there (3)___ the front door shut after her, and Lavinia's steps came up the stairs and passed the door to the guest room beyond. And then after a couple of centuries (4)___, the clock struck three and I (5)___ to sleep.

SubQuestion No : 22

Q.22 Select the most appropriate option to fill in blank no. 2.

- Ans
- 1. gnawed
 - 2. lurched
 - 3. peeped
 - 4. crawled

Question ID : 264330151844

Option 1 ID : 264330595001

Option 2 ID : 264330595000

Option 3 ID : 264330594999

Option 4 ID : 264330595002

Status : Answered

Chosen Option : 2

Comprehension:

In the following passage, some words have been deleted. Read the passage carefully and select the most appropriate option to fill in each blank.

I do not know how the party ended. I do not want to know. I went (1)___ upstairs, and undressed and (2)___ into bed, and lay there in the burning dark while the last guest gurgled in the hall below about the wonderful evening she had spent. I lay there (3)___ the front door shut after her, and Lavinia's steps came up the stairs and passed the door to the guest room beyond. And then after a couple of centuries (4)___, the clock struck three and I (5)___ to sleep.

SubQuestion No : 23

Q.23 Select the most appropriate option to fill in the blank no. 3.

- Ans
- 1. still
 - 2. toward
 - 3. while
 - 4. down

Question ID : 264330151845

Option 1 ID : 264330595004

Option 2 ID : 264330595005

Option 3 ID : 264330595003

Option 4 ID : 264330595006

Status : Answered

Chosen Option : 3

Comprehension:

In the following passage, some words have been deleted. Read the passage carefully and select the most appropriate option to fill in each blank.

I do not know how the party ended. I do not want to know. I went (1)___ upstairs, and undressed and (2)___ into bed, and lay there in the burning dark while the last guest gurgled in the hall below about the wonderful evening she had spent. I lay there (3)___ the front door shut after her, and Lavinia's steps came up the stairs and passed the door to the guest room beyond. And then after a couple of centuries (4)___, the clock struck three and I (5)___ to sleep.

SubQuestion No : 24

Q.24 Select the most appropriate option to fill in blank no. 4.

- Ans
- 1. crossed
 - 2. eroded
 - 3. elapsed
 - 4. persisted

Question ID : 264330151846

Option 1 ID : 264330595008

Option 2 ID : 264330595010

Option 3 ID : 264330595009

Option 4 ID : 264330595007

Status : Answered

Chosen Option : 3

Comprehension:

In the following passage, some words have been deleted. Read the passage carefully and select the most appropriate option to fill in each blank.

I do not know how the party ended. I do not want to know. I went (1)___ upstairs, and undressed and (2)___ into bed, and lay there in the burning dark while the last guest gurgled in the hall below about the wonderful evening she had spent. I lay there (3)___ the front door shut after her, and Lavinia's steps came up the stairs and passed the door to the guest room beyond. And then after a couple of centuries (4)___, the clock struck three and I (5)___ to sleep.

SubQuestion No : 25

Q.25 Select the most appropriate option to fill in blank no. 5.

- Ans
- 1. dozed off
 - 2. called off
 - 3. took off
 - 4. put off

Question ID : 264330151847

Option 1 ID : 264330595014

Option 2 ID : 264330595011

Option 3 ID : 264330595013

Option 4 ID : 264330595012

Status : Answered

Chosen Option : 1

Multi Tasking Non Technical Staff and Havaladar CBIC and CBN Examination 2023

Roll Number	
Candidate Name	
Venue Name	Career Wings
Exam Date	12/09/2023
Exam Time	9:00 AM - 11:00 AM
Subject	MTS Non Tech Havaladar CBIC and CBN Examination 2023

Section : Numerical and Mathematical Ability

Q.1 Find the diameter of the sphere whose volume is $381\frac{6}{7} \text{ m}^3$.

- Ans
- 1. 8 m
 - 2. 7 m
 - 3. 9 m
 - 4. 18 m

Question ID : 264330156081
Option 1 ID : 264330611725
Option 2 ID : 264330611726
Option 3 ID : 264330611723
Option 4 ID : 264330611724
Status : Answered
Chosen Option : 3

Q.2 Ram purchased a TV for ₹65,500 and sold it for ₹89,080. What is the percentage profit he made on the TV?

- Ans
- 1. 34%
 - 2. 36%
 - 3. 42%
 - 4. 40%

Question ID : 264330156180
Option 1 ID : 264330612119
Option 2 ID : 264330612120
Option 3 ID : 264330612122
Option 4 ID : 264330612121
Status : Answered
Chosen Option : 2

Q.3 A is twice as efficient as B at completing a task, and together they can finish the task in 20 days. How many days would A alone take to complete the task?

- Ans**
- 1. 34 days
 - 2. 30 days
 - 3. 28days
 - 4. 32 days

Question ID : 264330156278
Option 1 ID : 264330612514
Option 2 ID : 264330612512
Option 3 ID : 264330612511
Option 4 ID : 264330612513
Status : Answered
Chosen Option : 2

Q.4 There are 75 students in the hostel. Due to new admissions, 15 new students join the mess, and the daily expenses of the mess increased by ₹240, while the average expenditure per head diminished by ₹5. What was the original expenditure (in ₹) of the mess?

- Ans**
- 1. 3,450
 - 2. 4,530
 - 3. 3,540
 - 4. 4,350

Question ID : 264330153758
Option 1 ID : 264330602495
Option 2 ID : 264330602498
Option 3 ID : 264330602496
Option 4 ID : 264330602497
Status : Answered
Chosen Option : 3

Q.5 Anil sells a car to Bina at a profit of 20%. Bina sells it to Karan at a profit of 25%. If Karan pays ₹2,25,000 for it, then, find the CP of the car for Anil.

- Ans**
- 1. ₹1,75,000
 - 2. ₹2,00,000
 - 3. ₹1,50,000
 - 4. ₹1,25,000

Question ID : 264330156105
Option 1 ID : 264330611820
Option 2 ID : 264330611819
Option 3 ID : 264330611821
Option 4 ID : 264330611822
Status : Answered
Chosen Option : 3

Q.6 The HCF of two numbers is 12. Which of the following can never be their LCM?

- Ans
- 1. 24
 - 2. 74
 - 3. 48
 - 4. 60

Question ID : 264330156091
 Option 1 ID : 264330611763
 Option 2 ID : 264330611765
 Option 3 ID : 264330611764
 Option 4 ID : 264330611766
 Status : Answered
 Chosen Option : 2

Q.7 Find the value of $\frac{9(3-5)-5 \text{ of } 4 \div 10}{-3 \times 5 - 2 \times 4 \div 2}$:

- Ans
- 1. $\frac{20}{19}$
 - 2. $\frac{18}{19}$
 - 3. $\frac{19}{20}$
 - 4. $\frac{13}{14}$

Question ID : 264330154036
 Option 1 ID : 264330603610
 Option 2 ID : 264330603609
 Option 3 ID : 264330603608
 Option 4 ID : 264330603607
 Status : Answered
 Chosen Option : 1

Q.8 A thief is spotted by a policeman from a distance of 600 m. The thief starts running at a speed of 20 km/h and the policeman chases him running at a speed of 25 km/h. Find the distance between them after 6 minutes (in metres).

- Ans
- 1. 300
 - 2. 200
 - 3. 50
 - 4. 100

Question ID : 264330153853
 Option 1 ID : 264330602875
 Option 2 ID : 264330602877
 Option 3 ID : 264330602876
 Option 4 ID : 264330602878
 Status : Answered
 Chosen Option : 4

Q.9 The simple interest on a sum of money is four times the principal. The rate per cent per annum and time in years are equal. Find the rate per cent per annum.

- Ans**
- 1. 10%
 - 2. 12%
 - 3. 15%
 - 4. 20%

Question ID : **264330156003**
 Option 1 ID : **264330611412**
 Option 2 ID : **264330611414**
 Option 3 ID : **264330611411**
 Option 4 ID : **264330611413**
 Status : **Answered**
 Chosen Option : **4**

Q.10 The falling height of an object is directly proportional to the square of the time. An object falls 80 cm in 4 seconds. Then in 8 seconds, from how much height (in cm) will the object fall?

- Ans**
- 1. 420
 - 2. 320
 - 3. 480
 - 4. 360

Question ID : **264330153848**
 Option 1 ID : **264330602857**
 Option 2 ID : **264330602855**
 Option 3 ID : **264330602858**
 Option 4 ID : **264330602856**
 Status : **Answered**
 Chosen Option : **2**

Q.11 The bar chart below shows the production of fertilizers by a company (in tonnes) over the years. Study the bar chart and answer the question based on it.



What was the percentage increase (rounded off to the nearest integer) in the production of fertilizers in 2009 compared to that in 2006?

- Ans**
- 1. 124%
 - 2. 118%
 - 3. 122%
 - 4. 120%

Question ID : **264330153780**
 Option 1 ID : **264330602584**
 Option 2 ID : **264330602583**
 Option 3 ID : **264330602586**
 Option 4 ID : **264330602585**
 Status : **Answered**
 Chosen Option : **3**

Q.12 The average age of the boys in the class was 16 years. When 4 boys whose average age was 13 years are admitted to the class, the average age of the class was reduced by 6 months. How many boys were there initially in the class?

- Ans**
- 1. 22
 - 2. 20
 - 3. 18
 - 4. 25

Question ID : **264330155989**
Option 1 ID : **264330611355**
Option 2 ID : **264330611358**
Option 3 ID : **264330611357**
Option 4 ID : **264330611356**
Status : **Answered**
Chosen Option : **2**

Q.13 If a hollow sphere of an external and internal diameters of 6 cm and 4 cm, respectively, is melted into a cone of base diameter 8 cm, then the height of the cone is:

- Ans**
- 1. $4\frac{3}{4}$ cm
 - 2. $3\frac{1}{4}$ cm
 - 3. $5\frac{1}{4}$ cm
 - 4. $2\frac{3}{4}$ cm

Question ID : **264330154110**
Option 1 ID : **264330603906**
Option 2 ID : **264330603903**
Option 3 ID : **264330603905**
Option 4 ID : **264330603904**
Status : **Answered**
Chosen Option : **1**

Q.14 The monthly income of a person was ₹27,000 and his monthly expenditure was ₹18,000. In the next year, his income increased by 28% and his expenditure increased by 14%. Find the percentage increase in his savings.

- Ans**
- 1. 51.5%
 - 2. 61.5%
 - 3. 56%
 - 4. 50.5%

Question ID : **264330157324**
Option 1 ID : **264330616662**
Option 2 ID : **264330616661**
Option 3 ID : **264330616659**
Option 4 ID : **264330616660**
Status : **Answered**
Chosen Option : **3**

Q.15 Two trains having the same speed are running in opposite directions. If the length of each train is 120 metres and they cross each other in 8 seconds, then, what is the speed of each train (in km/h)?

- Ans**
- ✓ 1. 54
 - ✗ 2. 60
 - ✗ 3. 45
 - ✗ 4. 50

Question ID : 264330156114
Option 1 ID : 264330611857
Option 2 ID : 264330611855
Option 3 ID : 264330611856
Option 4 ID : 264330611858
Status : Answered
Chosen Option : 1

Q.16 The sum of the two numbers is the same as nine times their difference. The ratio of the numbers is:

- Ans**
- ✓ 1. 5 : 4
 - ✗ 2. 3 : 4
 - ✗ 3. 9 : 5
 - ✗ 4. 3 : 7

Question ID : 264330154048
Option 1 ID : 264330603655
Option 2 ID : 264330603658
Option 3 ID : 264330603656
Option 4 ID : 264330603657
Status : Answered
Chosen Option : 1

Q.17 In a school, the average height of the students of the tenth standard is 100 cm. The average height of boys is 118 cm, whereas the average height of girls is 95 cm. What is the number of girls in the class if there are 20 boys?

- Ans**
- ✓ 1. 72
 - ✗ 2. 63
 - ✗ 3. 54
 - ✗ 4. 36

Question ID : 264330155694
Option 1 ID : 264330610182
Option 2 ID : 264330610181
Option 3 ID : 264330610180
Option 4 ID : 264330610179
Status : Answered
Chosen Option : 1

Q.18 The following table gives the annual expenditure of five families during the last 5 years (in ₹ thousand). Study the table and answer the question that follows.

Year→ Family ↓	2017	2018	2019	2020	2021
F ₁	35	50	55	60	45
F ₂	45	35	60	55	40
F ₃	53	40	45	65	50
F ₄	40	30	35	50	45
F ₅	35	45	55	50	45

In which year did the family F₄ have the annual expenditure equal to the average expenditure of family F₄ from 2017 to 2021?

- Ans** ✓ 1. 2017
✗ 2. 2021
✗ 3. 2019
✗ 4. 2020

Question ID : 264330157348
Option 1 ID : 264330616756
Option 2 ID : 264330616758
Option 3 ID : 264330616755
Option 4 ID : 264330616757
Status : Answered
Chosen Option : 1

Q.19 100 workers working 8 hours a day can dig a canal 2000 metres long in 25 days. Find the number of workers required to dig a similar canal of 2800 metres long in 32 days working 5 hours a day.

- Ans** ✗ 1. 170
✗ 2. 180
✓ 3. 175
✗ 4. 165

Question ID : 264330155977
Option 1 ID : 264330611308
Option 2 ID : 264330611310
Option 3 ID : 264330611309
Option 4 ID : 264330611307
Status : Answered
Chosen Option : 3

Q.20 Hema invested ₹1,728 at the rate of compound interest (Compounded annually) for 3 years. She got ₹4,096 after the specified period. Find the rate of interest per annum.

- Ans** ✗ 1. $33\frac{1}{2}\%$
✗ 2. $30\frac{1}{2}\%$
✓ 3. $33\frac{1}{3}\%$
✗ 4. $30\frac{1}{3}\%$

Question ID : 264330155749
Option 1 ID : 264330610401
Option 2 ID : 264330610402
Option 3 ID : 264330610399
Option 4 ID : 264330610400
Status : Answered
Chosen Option : 3

Q.1 If 12th Dec 2009 is a Saturday, then what will be the day of the week on 16th Dec 2014?

- Ans
- 1. Thursday
 - 2. Friday
 - 3. Wednesday
 - 4. Tuesday

Question ID : 264330154339
Option 1 ID : 264330604822
Option 2 ID : 264330604819
Option 3 ID : 264330604821
Option 4 ID : 264330604820
Status : Answered
Chosen Option : 4

Q.2 What should come in place of '?' in the given series?

10 59 353 ? 12701 76205 457229

- Ans
- 1. 2149
 - 2. 2247
 - 3. 2073
 - 4. 2117

Question ID : 264330151487
Option 1 ID : 264330593577
Option 2 ID : 264330593578
Option 3 ID : 264330593575
Option 4 ID : 264330593576
Status : Answered
Chosen Option : 4

Q.3 In a certain code language, 'DOMINATE' is coded as 'TANIMODE' and 'FAITHFUL' is coded as 'UFHTIAFL'. What is the code for 'HIGHWAY' in the given code language?

- Ans
- 1. AWHGIHY
 - 2. IGHWAYH
 - 3. AYWHGIH
 - 4. YAWHGIH

Question ID : 264330155815
Option 1 ID : 264330610663
Option 2 ID : 264330610666
Option 3 ID : 264330610665
Option 4 ID : 264330610664
Status : Answered
Chosen Option : 1

Q.4 What should come in place of ? in the given series based on the English alphabetical order?

MFX, JCU, GZR, DWO, ?

- Ans
- 1. YSM
 - 2. ATL
 - 3. ZRM
 - 4. ZSL

Question ID : 264330155770

Option 1 ID : 264330610485

Option 2 ID : 264330610483

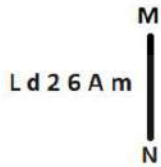
Option 3 ID : 264330610484

Option 4 ID : 264330610486

Status : Answered

Chosen Option : 2

Q.5 Select the correct mirror image of the given figure when the mirror is placed at MN as shown below.



- Ans
- 1. m A ə ɓ J
 - 2. m A 6 ɓ b L
 - 3. w v ə ɓ b J
 - 4. m A ə d 2 J

Question ID : 264330151514

Option 1 ID : 264330593685

Option 2 ID : 264330593686

Option 3 ID : 264330593683

Option 4 ID : 264330593684

Status : Answered

Chosen Option : 1

Q.6 What should come in place of ? in the given series based on the English alphabetical order?

BLS, FJQ, JHO, NEM, ?

- Ans
- 1. QEJ
 - 2. SCK
 - 3. RDK
 - 4. QCI

Question ID : 264330155796

Option 1 ID : 264330610587

Option 2 ID : 264330610590

Option 3 ID : 264330610589

Option 4 ID : 264330610588

Status : Answered

Chosen Option : 3

Q.7 18 is related to 54 following a certain logic. Following the same logic, 21 is related to 63. To which of the following is 72 related to, following the same logic?

- Ans**
- 1. 222
 - 2. 220
 - 3. 218
 - 4. 216

Question ID : **264330151592**
Option 1 ID : **264330593998**
Option 2 ID : **264330593997**
Option 3 ID : **264330593996**
Option 4 ID : **264330593995**
Status : **Answered**
Chosen Option : **4**

Q.8 Read the given statement(s) and conclusions carefully. Assuming that the information given in the statements is true, even if it appears to be at variance with commonly known facts, decide which of the given conclusions logically follow(s) from the statement(s).

Statements: All cups are books. All books are shirts.

Conclusions:

- (I) Some cups are not shirts.
- (II) Some shirts are cups.

- Ans**
- 1. Neither conclusion (I) nor (II) is follows.
 - 2. Both conclusions (I) and (II) are follows.
 - 3. Only conclusion (II) is follows.
 - 4. Only conclusion (I) is follows.

Question ID : **264330154425**
Option 1 ID : **264330605165**
Option 2 ID : **264330605166**
Option 3 ID : **264330605164**
Option 4 ID : **264330605163**
Status : **Answered**
Chosen Option : **3**

Q.9 Six people, Vijay, Harsh, Golu, Satish, Karan and Awadhi are sitting in a straight line, facing north. Vijay sits 3rd from the right end. Harsh sits 3rd to the left of Vijay. Satish is an immediate neighbour of Harsh. Golu sits 3rd to the right of Satish. Awadhi is an immediate neighbour of Golu. Who sits 2nd to the right of Vijay?

- Ans**
- 1. Golu
 - 2. Awadhi
 - 3. Karan
 - 4. Satish

Question ID : **264330155664**
Option 1 ID : **264330610062**
Option 2 ID : **264330610061**
Option 3 ID : **264330610059**
Option 4 ID : **264330610060**
Status : **Answered**
Chosen Option : **2**

Q.10 What should come in place of ? in the given series?

41 45 54 70 95 ?

- Ans
- ✓ 1. 131
 - ✗ 2. 133
 - ✗ 3. 130
 - ✗ 4. 132

Question ID : 264330151557

Option 1 ID : 264330593856

Option 2 ID : 264330593858

Option 3 ID : 264330593855

Option 4 ID : 264330593857

Status : Answered

Chosen Option : 1

Q.11 Read the given statements and conclusions carefully. You have to take the given statements to be true even if they seem to be at variance from commonly known facts. You have to decide which conclusion/s logically follow/s from the given statements.

Statements: Some lipsticks are foundation. All foundation is brown. Some brown are highlighters.

Conclusion I: Some lipsticks are brown.

Conclusion II: All foundation are highlighters.

- Ans
- ✗ 1. Neither conclusion (I) nor (II) is follow.
 - ✗ 2. Both conclusions (I) and (II) are follow.
 - ✗ 3. Only conclusion (II) is follow.
 - ✓ 4. Only conclusion (I) is follow.

Question ID : 264330155936

Option 1 ID : 264330611149

Option 2 ID : 264330611150

Option 3 ID : 264330611148

Option 4 ID : 264330611147

Status : Answered

Chosen Option : 4

Prepare 50% Faster

Q.12 Which figure should replace the question mark (?) if the following figure series were to be continued?

9	5	A	9									
A	C	5	9	Z	O	C	5	9	A	O	Z	?
O	Z	A	C	Z	O	C	5					

Ans

✗ 1.

O		
5	C	A
9	Z	

✗ 2.

C		
Z	A	O
5	9	

✓ 3.

C		
5	9	A
O	Z	

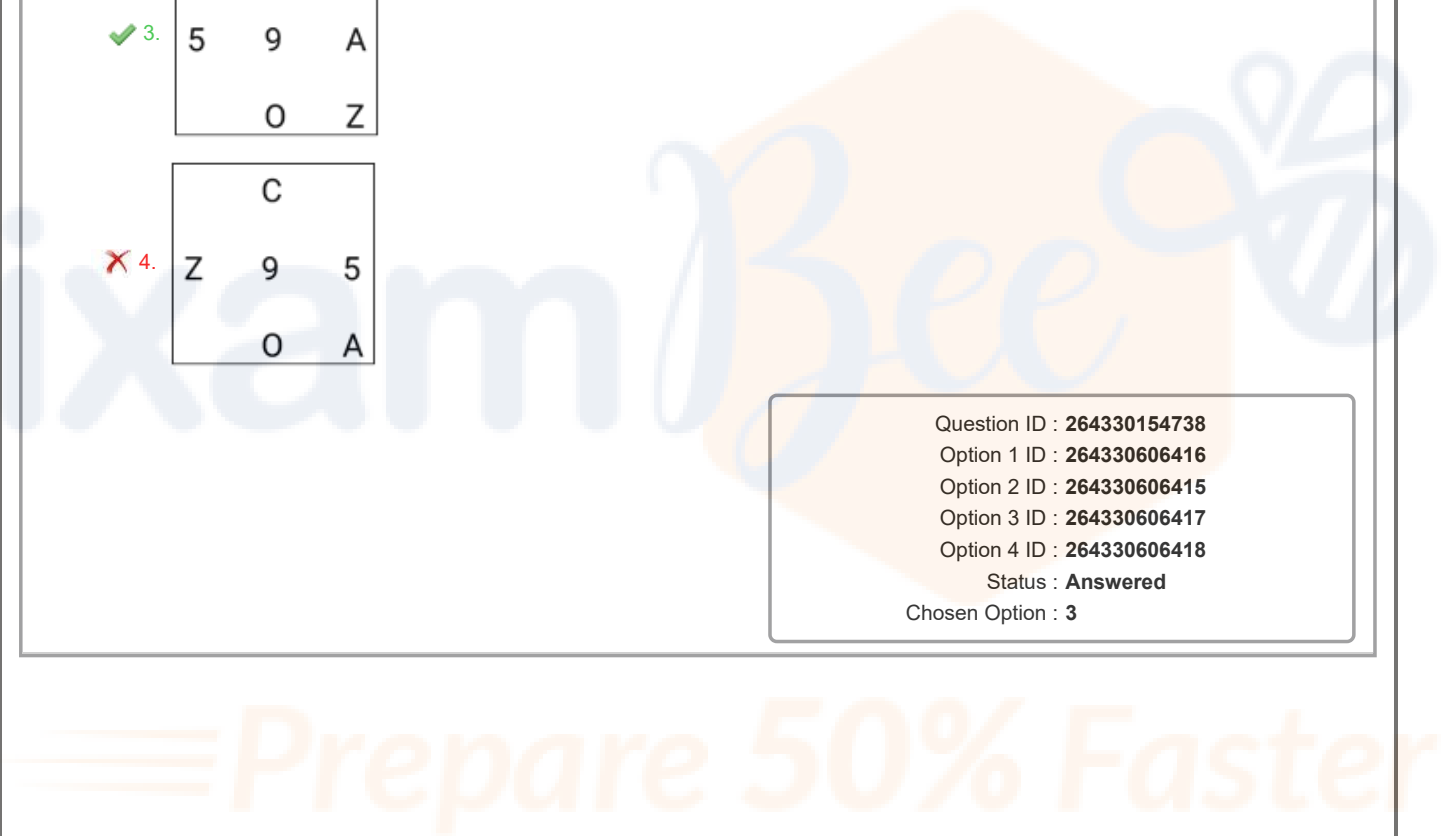
✗ 4.

C		
Z	9	5
O	A	

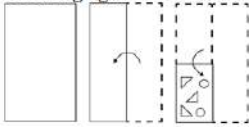
Question ID : 264330154738
Option 1 ID : 264330606416
Option 2 ID : 264330606415
Option 3 ID : 264330606417
Option 4 ID : 264330606418

Status : Answered

Chosen Option : 3

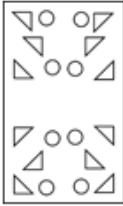


Q.13 The sequence of folding a piece of paper and the manner in which the folded paper is cut is shown in the following figures. How would this paper look when unfolded?

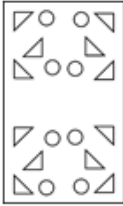


Ans

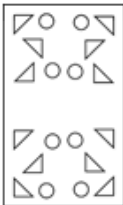
✗ 1.



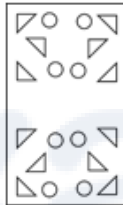
✗ 2.



✗ 3.



✓ 4.



Question ID : 264330155609

Option 1 ID : 264330609842

Option 2 ID : 264330609841

Option 3 ID : 264330609839

Option 4 ID : 264330609840

Status : Answered

Chosen Option : 4

Q.14 Select the set in which the numbers are related in the same way as are the numbers of the following sets.

(NOTE : Operations should be performed on the whole numbers, without breaking down the numbers into its constituent digits. E.g. 13 – Operations on 13 such as adding / subtracting / multiplying etc. to 13 can be performed.

Breaking down 13 into 1 and 3 and then performing mathematical operations on 1 and 3 is not allowed)

(25, 49, 73)

(34, 23, 12)

Ans ✗ 1. 5, 35, 17

✗ 2. 11, 9, 18

✓ 3. 18, 22, 26

✗ 4. 13, 15, 19

Question ID : 264330151610

Option 1 ID : 264330594067

Option 2 ID : 264330594068

Option 3 ID : 264330594070

Option 4 ID : 264330594069

Status : Answered

Chosen Option : 3

Q.15 MEOP is related to KCMN in a certain way based on the English alphabetical order. In the same way, LTDG is related to JRBE. To which of the following is UNTF related to, following the same logic?

- Ans**
- 1. SMRE
 - 2. SLRD
 - 3. VPUH
 - 4. TOSG

Question ID : 264330151681
Option 1 ID : 264330594352
Option 2 ID : 264330594353
Option 3 ID : 264330594351
Option 4 ID : 264330594354
Status : Answered
Chosen Option : 2

Q.16 In a certain code language, 'DRAW' is coded as '7932' and 'WEAR' is coded as '4729'. What is the code for 'E' in the given code language?

- Ans**
- 1. 9
 - 2. 2
 - 3. 7
 - 4. 4

Question ID : 264330151687
Option 1 ID : 264330594375
Option 2 ID : 264330594376
Option 3 ID : 264330594377
Option 4 ID : 264330594378
Status : Answered
Chosen Option : 4

Q.17 What will come in the place of the question mark (?) in the following equation, if '+' and '-' are interchanged and 'x' and '+' are interchanged?
 $90 + 4 + 75 - 93 \times 3 = ?$

- Ans**
- 1. 316
 - 2. 279
 - 3. 406
 - 4. 165

Question ID : 264330154618
Option 1 ID : 264330605937
Option 2 ID : 264330605936
Option 3 ID : 264330605938
Option 4 ID : 264330605935
Status : Answered
Chosen Option : 1

Q.18 Find out the correct alternative that when filled in the blanks in the same sequence will make the series logically complete.

ZA_J B_BK DAB_ _ABM HA_N

- Ans
- 1. BALPC
 - 2. FCBPL
 - 3. BALFB
 - 4. CHBNK

Question ID : 264330154720
Option 1 ID : 264330606344
Option 2 ID : 264330606346
Option 3 ID : 264330606343
Option 4 ID : 264330606345
Status : Answered
Chosen Option : 3

Q.19 What should come in place of ? in the given series?

51 53 57 59 ? 65 69

- Ans
- 1. 63
 - 2. 64
 - 3. 62
 - 4. 65

Question ID : 264330151546
Option 1 ID : 264330593812
Option 2 ID : 264330593813
Option 3 ID : 264330593811
Option 4 ID : 264330593814
Status : Answered
Chosen Option : 1

Q.20 If A means '-'; G means '×'; D means '+'; E means '÷', then what will come in place of the question mark (?) in the following equation?

18 E 27 D 3 A 2 G 5 = ?

- Ans
- 1. 29
 - 2. 17
 - 3. 43
 - 4. 31

Question ID : 264330154684
Option 1 ID : 264330606200
Option 2 ID : 264330606199
Option 3 ID : 264330606202
Option 4 ID : 264330606201
Status : Answered
Chosen Option : 2

Q.1 समुद्री डकैती विरोधी विधेयक, 2022 (Maritime Anti-Piracy Act, 2022) के संबंध में निम्नलिखित में से कौन-सा कथन सत्य है?

- 1) संसद ने दिसंबर 2022 में समुद्री डकैती विरोधी विधेयक, 2022 को राज्यसभा से मंजूरी दे दी।
- 2) यह अधिनियम भारतीय अधिकारियों को खुले समुद्र में समुद्री डकैती के खिलाफ कार्रवाई करने में सक्षम बनाता है।
- 3) यह विशिष्ट आर्थिक क्षेत्र से परे समुद्र पर लागू होता है, जो भारत के समुद्र तट से 500 समुद्री मील से ऊपर है।
- 4) अधिनियम समुद्री डकैती को किसी निजी जहाज या विमान के चालक दल या यात्रियों द्वारा निजी उद्देश्यों के लिए किसी जहाज, विमान या व्यक्ति के खिलाफ हिंसा, हिरासत या विनाश के किसी भी अवैध कार्य के रूप में परिभाषित करता है।

- Ans
- 1. 2, 3 और 4
 - 2. 1, 2 और 3
 - 3. 1, 2 और 4
 - 4. 1, 3 और 4

Question ID : 264330161417
Option 1 ID : 264330632997
Option 2 ID : 264330632995
Option 3 ID : 264330632998
Option 4 ID : 264330632996
Status : Answered
Chosen Option : 4

Q.2 How long can a person remain a minister without being a member of either House of the State Legislature?

- Ans
- 1. 15 days
 - 2. 6 months
 - 3. 1 year
 - 4. 2 months

Question ID : 264330159930
Option 1 ID : 264330627070
Option 2 ID : 264330627068
Option 3 ID : 264330627069
Option 4 ID : 264330627067
Status : Answered
Chosen Option : 1

Q.3 The world's largest camel fair is held in which of the following cities?

- Ans
- 1. Bikaner
 - 2. Pushkar
 - 3. Barmer
 - 4. Udaipur

Question ID : 264330159084
Option 1 ID : 264330623697
Option 2 ID : 264330623696
Option 3 ID : 264330623698
Option 4 ID : 264330623695
Status : Answered
Chosen Option : 2

Q.4 Who among the following Indian musicians is the inventor of Mohan Veena?

- Ans
- 1. Totaram Sharma
 - 2. Braj Bhushan Kabra
 - 3. Pandit Vishwa Mohan Bhatt
 - 4. Sandeep Das

Question ID : 264330161778
Option 1 ID : 264330634442
Option 2 ID : 264330634441
Option 3 ID : 264330634440
Option 4 ID : 264330634439
Status : Answered
Chosen Option : 3

Q.5 Mulk Raj Anand is the author of _____.

- Ans
- 1. The Guide
 - 2. Untouchable
 - 3. The Invisible Man
 - 4. A Passage to India

Question ID : 264330160973
Option 1 ID : 264330631223
Option 2 ID : 264330631226
Option 3 ID : 264330631225
Option 4 ID : 264330631224
Status : Answered
Chosen Option : 3

Q.6 Which of the following musicians of medieval India is referred to as 'Tuti-e-Hind' and is also regarded as the father of qawwali?

- Ans
- 1. Miyan Tansen
 - 2. Amir Khusrau
 - 3. Purandara Dasa
 - 4. Swami Haridas

Question ID : 264330161770
Option 1 ID : 264330634409
Option 2 ID : 264330634410
Option 3 ID : 264330634407
Option 4 ID : 264330634408
Status : Answered
Chosen Option : 2

Q.7 The blue green alga Anabaena lives in the leaves of Azolla, a freshwater fern, forming which of the following relationships?

- Ans
- 1. Autotrophic
 - 2. Symbiotic
 - 3. Parasitic
 - 4. Saprophytic

Question ID : 264330156603
Option 1 ID : 264330613802
Option 2 ID : 264330613799
Option 3 ID : 264330613801
Option 4 ID : 264330613800
Status : Answered
Chosen Option : 2

Q.8 Who was famous for publishing a formula in 1827 that shows the mathematical relationship between current, resistance and voltage?

- Ans
- 1. William Gilbert
 - 2. William Watson
 - 3. Gustav Kirchhoff
 - 4. Georg Simon Ohm

Question ID : 264330161047
Option 1 ID : 264330631519
Option 2 ID : 264330631522
Option 3 ID : 264330631521
Option 4 ID : 264330631520
Status : Answered
Chosen Option : 4

Q.9 Identify the correct pair (name of shifting agriculture and related state) from the following.

- Ans
- 1. Bewar – Madhya Pradesh
 - 2. Kuruwa – Punjab
 - 3. Podu – Tamil Nadu
 - 4. Bringa – Uttar Pradesh

Question ID : 264330161509
Option 1 ID : 264330633363
Option 2 ID : 264330633364
Option 3 ID : 264330633366
Option 4 ID : 264330633365
Status : Answered
Chosen Option : 4

Q.10 The Balti dance of _____ is distinct as it has its own costume, music and songs in the Balti language. The dance is only performed on rare occasions, such as feasts or celebrations.

- Ans
- 1. Uttarakhand
 - 2. Ladakh
 - 3. Kashmir
 - 4. Himachal Pradesh

Question ID : 264330160797
Option 1 ID : 264330630522
Option 2 ID : 264330630519
Option 3 ID : 264330630520
Option 4 ID : 264330630521
Status : Answered
Chosen Option : 4

Q.11 The Fundamental Duties of Indian Citizens were adopted from the Constitution of which country?

- Ans 1. Soviet Union
 2. Japan
 3. United Kingdom
 4. United States of America

Question ID : 264330162244
Option 1 ID : 264330636306
Option 2 ID : 264330636305
Option 3 ID : 264330636304
Option 4 ID : 264330636303
Status : Answered
Chosen Option : 1

Q.12 Which state hosted the 36th National Games of India?

- Ans 1. Maharashtra
 2. Karnataka
 3. Gujarat
 4. Punjab

Question ID : 264330158220
Option 1 ID : 264330620240
Option 2 ID : 264330620241
Option 3 ID : 264330620239
Option 4 ID : 264330620242
Status : Answered
Chosen Option : 4

Q.13 Jet streams are a particular form of:

- Ans 1. weather fronts
 2. atmospheric pollution
 3. geostrophic winds
 4. periodic water motion

Question ID : 264330161304
Option 1 ID : 264330632545
Option 2 ID : 264330632543
Option 3 ID : 264330632546
Option 4 ID : 264330632544
Status : Answered
Chosen Option : 2

Q.14 According to the Global Multidimensional Poverty Index Report 2022, a total of 415 million people exited multidimensional poverty in India in the last _____.

- Ans 1. 15 years
 2. 5 years
 3. 10 years
 4. 20 years

Question ID : 264330161568
Option 1 ID : 264330633601
Option 2 ID : 264330633599
Option 3 ID : 264330633600
Option 4 ID : 264330633602
Status : Answered
Chosen Option : 3

Q.15 What is the primary function of a commercial bank?

- Ans
- 1. Issuing currency notes and coins
 - 2. Conducting monetary policy
 - 3. Granting loans and accepting deposits
 - 4. Regulating the money supply

Question ID : 264330157304
Option 1 ID : 264330616579
Option 2 ID : 264330616582
Option 3 ID : 264330616581
Option 4 ID : 264330616580
Status : Answered
Chosen Option : 3

Q.16 Which of the following is an example of revenue receipt in the government budget?

- Ans
- 1. Sale of government-owned land
 - 2. Repayment of a loan by a state-owned company
 - 3. Dividends received from a state-owned enterprise
 - 4. Borrowing money from international organisations

Question ID : 264330157277
Option 1 ID : 264330616471
Option 2 ID : 264330616473
Option 3 ID : 264330616474
Option 4 ID : 264330616472
Status : Answered
Chosen Option : 1

Q.17 Birsa Munda Hockey Stadium was built in which state?

- Ans
- 1. Gujarat
 - 2. Maharashtra
 - 3. Jharkhand
 - 4. Odisha

Question ID : 264330158242
Option 1 ID : 264330620328
Option 2 ID : 264330620329
Option 3 ID : 264330620330
Option 4 ID : 264330620327
Status : Answered
Chosen Option : 3

Q.18 Who received the title Pandita from the faculty of Calcutta University for her knowledge of Sanskrit?

- Ans
- 1. Rokaya Sakhawat Hossain
 - 2. Ramabai Sarasvati
 - 3. Sarojini Naidu
 - 4. Rash Sundari Devi

Question ID : 264330160887
Option 1 ID : 264330630880
Option 2 ID : 264330630882
Option 3 ID : 264330630881
Option 4 ID : 264330630879
Status : Answered
Chosen Option : 2

Q.19 Rani Machaiah from Karnataka was awarded the Padma Shri for her contribution to popularising _____ in and outside Karnataka.

- Ans
- 1. Kamsale Nritya
 - 2. Kuniitha
 - 3. Karadi Majalu
 - 4. Ummathat

Question ID : 264330160804
Option 1 ID : 264330630549
Option 2 ID : 264330630547
Option 3 ID : 264330630550
Option 4 ID : 264330630548
Status : Answered
Chosen Option : 3

Q.20 Shri Domar Singh Kunvar from Chhattisgarh was honoured with _____ in the year 2023 for his contribution to 'Natya Nach'.

- Ans
- 1. Padma Bhushan
 - 2. Bharat Ratna
 - 3. Padma Shri
 - 4. Padma Vibhushan

Question ID : 264330155527
Option 1 ID : 264330609512
Option 2 ID : 264330609514
Option 3 ID : 264330609511
Option 4 ID : 264330609513
Status : Answered
Chosen Option : 3

Q.21 Which of the following hills are located in Purvachal?

- Ans
- 1. Mizo hills and Naga hills
 - 2. Shevroy hills and avadi hills
 - 3. Khasi and dintia hills
 - 4. Anai Mudi and Doda Betta

Question ID : 264330160150
Option 1 ID : 264330627939
Option 2 ID : 264330627942
Option 3 ID : 264330627940
Option 4 ID : 264330627941
Status : Answered
Chosen Option : 3

Q.22 The mausoleum of the Taj Mahal was designed by _____.

- Ans
- 1. Bhaktiyar Lahori
 - 2. Mohammad Isha
 - 3. Shah ahan
 - 4. Ustad Ahmad Lahori

Question ID : 264330160766
Option 1 ID : 264330630395
Option 2 ID : 264330630397
Option 3 ID : 264330630398
Option 4 ID : 264330630396
Status : Answered
Chosen Option : 4

Q.23 What was the Swadeshi Movement called in the state of Andhra Pradesh?

- Ans
- 1. Gadar Movement
 - 2. Quit India Movement
 - 3. Khilafat Movement
 - 4. Vande Mataram Movement

Question ID : 264330161739
Option 1 ID : 264330634284
Option 2 ID : 264330634285
Option 3 ID : 264330634283
Option 4 ID : 264330634286
Status : Answered
Chosen Option : 1

Q.24 'Midnight's Children' is a novel by which of the following writers?

- Ans
- 1. Jane Austen
 - 2. Vikram Seth
 - 3. Chetan Bhagat
 - 4. Salman Rushdie

Question ID : 264330160968
Option 1 ID : 264330631206
Option 2 ID : 264330631204
Option 3 ID : 264330631203
Option 4 ID : 264330631205
Status : Answered
Chosen Option : 1

Q.25 Which of the following countries hosted the IBA Women's World Boxing Championships for the third time in March 2023?

- Ans
- 1. Hungary
 - 2. United Kingdom
 - 3. Malaysia
 - 4. India

Question ID : 264330161442
Option 1 ID : 264330633096
Option 2 ID : 264330633095
Option 3 ID : 264330633097
Option 4 ID : 264330633098
Status : Answered
Chosen Option : 3

Section : English Language and Comprehension

Q.1 Select the most appropriate meaning of the given idiom.

Castles in the air

- Ans 1. Unrealistic and impossible plan
 2. Unexpected change in the climate
 3. Realistic and possible plan
 4. Strong hope to get success

Question ID : 264330152905
Option 1 ID : 264330599207
Option 2 ID : 264330599210
Option 3 ID : 264330599208
Option 4 ID : 264330599209
Status : Answered
Chosen Option : 1

Q.2 Four words of the following sentence have been underlined and given as options. Select the option that contains a spelling error.

Ongoing climate change, caused by the acumulation of greenhouse gases in the atmosphere, is happening on a timescale of decades to centuries and is driving environmental changes worldwide.

- Ans 1. environmental
 2. atmosphere
 3. acumulation
 4. decades

Question ID : 264330151929
Option 1 ID : 264330595334
Option 2 ID : 264330595332
Option 3 ID : 264330595331
Option 4 ID : 264330595333
Status : Answered
Chosen Option : 3

Q.3 Select the most appropriate synonym of the given word.
Laconic

- Ans 1. Reasonable
 2. Fanciful
 3. Concise
 4. Certain

Question ID : 264330152682
Option 1 ID : 264330598334
Option 2 ID : 264330598333
Option 3 ID : 264330598332
Option 4 ID : 264330598331
Status : Answered
Chosen Option : 1

Q.4 Select the most appropriate option to fill in the blank.

Make-up was _____ she hardly wore.

- Ans
- 1. anything
 - 2. something
 - 3. anybody
 - 4. someone

Question ID : 264330153494
Option 1 ID : 264330601494
Option 2 ID : 264330601492
Option 3 ID : 264330601493
Option 4 ID : 264330601491
Status : Answered
Chosen Option : 2

Q.5 Select the most appropriate option that can substitute the underlined segment in the given sentence.

The manager asked me if I have completed my projects.

- Ans
- 1. if he has completed my projects
 - 2. if I has completed my projects
 - 3. if I had completed my projects
 - 4. if I shall have completed my projects

Question ID : 264330152713
Option 1 ID : 264330598453
Option 2 ID : 264330598451
Option 3 ID : 264330598454
Option 4 ID : 264330598452
Status : Answered
Chosen Option : 3

Q.6 Select the option that can be used as a one-word substitute for the given group of words.

Pause indecisively

- Ans
- 1. Hibernate
 - 2. Hesitate
 - 3. Hoist
 - 4. Hobble

Question ID : 264330151910
Option 1 ID : 264330595256
Option 2 ID : 264330595255
Option 3 ID : 264330595258
Option 4 ID : 264330595257
Status : Answered
Chosen Option : 1

Q.7 The following sentence has been split into four segments. Identify the segment that contains a grammatical error and select the option which rectifies that error.

The SNAP-10 A / was launched on 3 April 1965 / on a Atlas-Agena D rocket / from Vandenberg Air Force Base.

- Ans
- 1. at Vandenberg Air Force Base.
 - 2. A SNAP-10 A
 - 3. was launch on 3 April 1965
 - 4. on an Atlas-Agena D rocket

Question ID : 264330141342
Option 1 ID : 264330553704
Option 2 ID : 264330553705
Option 3 ID : 264330553703
Option 4 ID : 264330553706
Status : Answered
Chosen Option : 4

Q.8 Select the correct spelling of the underlined word in the following sentence.

He dispised the taste of black coffee.

- Ans
- 1. despisid
 - 2. disspised
 - 3. despised
 - 4. despeded

Question ID : 264330153082
Option 1 ID : 264330599891
Option 2 ID : 264330599893
Option 3 ID : 264330599894
Option 4 ID : 264330599892
Status : Answered
Chosen Option : 3

Q.9 Parts of the given sentence have been underlined. One of them contains an error. The underlined parts are given as options with some changes. Select the option that correctly rectifies the error.

This car is lesser expensive than the one I had come to buy.

- Ans
- 1. for
 - 2. came
 - 3. ones
 - 4. less

Question ID : 264330153176
Option 1 ID : 264330600266
Option 2 ID : 264330600265
Option 3 ID : 264330600264
Option 4 ID : 264330600263
Status : Answered
Chosen Option : 4

Q.10 Select the appropriate meaning of the given idiom.

Grasping at straws

- Ans 1. Futile attempts to win
 2. Desperate attempt to succeed
 3. Holding the last strands of straw
 4. Wasting time enjoying and relaxing

Question ID : 264330152979
Option 1 ID : 264330599490
Option 2 ID : 264330599488
Option 3 ID : 264330599487
Option 4 ID : 264330599489
Status : Answered
Chosen Option : 2

Q.11 Select the most appropriate idiom to fill in the blank.
She told me, _____, that she was going to live in New York.

- Ans 1. blue blood
 2. black and blue
 3. out of the blue
 4. once in a blue moon

Question ID : 264330153097
Option 1 ID : 264330599954
Option 2 ID : 264330599952
Option 3 ID : 264330599953
Option 4 ID : 264330599951
Status : Answered
Chosen Option : 3

Q.12 Select the most appropriate synonym of the bracketed word in the following sentence to fill in the blank.

The medical procedure was successful, but the patient experienced some minor _____(troubles) during recovery.

- Ans 1. applications
 2. complications
 3. transformations
 4. obligations

Question ID : 264330152659
Option 1 ID : 264330598239
Option 2 ID : 264330598242
Option 3 ID : 264330598240
Option 4 ID : 264330598241
Status : Answered
Chosen Option : 2

Q.13 The following sentence has been divided into four parts. Identify the part that contains an error.

(A) It is said / (B) that fortune / (C) favour the / (D) brave.

- Ans 1. B
 2. C
 3. A
 4. D

Question ID : 264330152625
Option 1 ID : 264330598104
Option 2 ID : 264330598105
Option 3 ID : 264330598103
Option 4 ID : 264330598106
Status : Answered
Chosen Option : 2

Q.14 Select the most appropriate option that can substitute the underlined segment in the given sentence.

Teenage is that phase of life when you are proposed to the world outside.

- Ans 1. you are exposed to
 2. you are excited with
 3. one are proposed to
 4. you are interrupted to

Question ID : 264330151808
Option 1 ID : 264330594860
Option 2 ID : 264330594861
Option 3 ID : 264330594859
Option 4 ID : 264330594862
Status : Answered
Chosen Option : 1

Q.15 Select the INCORRECTLY spelt word.

- Ans 1. Sergeant
 2. Playwright
 3. Experiace
 4. Leisure

Question ID : 264330153597
Option 1 ID : 264330601878
Option 2 ID : 264330601875
Option 3 ID : 264330601876
Option 4 ID : 264330601877
Status : Answered
Chosen Option : 3

Q.16 Select the most appropriate option to fill in the blank.
Ravi has little in _____ with his friend, Senthil.

- Ans 1. common
 2. contention
 3. formal
 4. normal

Question ID : 264330153421
Option 1 ID : 264330601218
Option 2 ID : 264330601215
Option 3 ID : 264330601217
Option 4 ID : 264330601216
Status : Answered
Chosen Option : 2

Q.17 Select the most appropriate ANTONYM of the given word.
Dense

- Ans 1. Sparse
 2. Opaque
 3. Closed
 4. Thick

Question ID : 264330152589
Option 1 ID : 264330597959
Option 2 ID : 264330597961
Option 3 ID : 264330597962
Option 4 ID : 264330597960
Status : Answered
Chosen Option : 1

Q.18 The following sentence has been divided into parts. One of them may contain an error.
Select the part that contains the error from the given options. If you don't find any error, mark 'No error' as your answer.

The fight of the cobra and the mongoose / is a classic drama often seen in India, / and the outcome was largely the same.

- Ans 1. The fight of the cobra and the mongoose
 2. No error
 3. is a classic drama often seen in India
 4. and the outcome was largely the same

Question ID : 264330153617
Option 1 ID : 264330601951
Option 2 ID : 264330601954
Option 3 ID : 264330601953
Option 4 ID : 264330601952
Status : Answered
Chosen Option : 1

Q.19 The following sentence has been split into four segments. Identify the segment that contains a grammatical error.
The little child / wrote his name / quick / on the wall.

- Ans** ✓ 1. quick
✗ 2. wrote his name
✗ 3. on the wall
✗ 4. The little child

Question ID : 264330153183
Option 1 ID : 264330600293
Option 2 ID : 264330600292
Option 3 ID : 264330600294
Option 4 ID : 264330600291
Status : Answered
Chosen Option : 1

Q.20 Select the most appropriate meaning of the given idiom.

Bone to pick

- Ans** ✓ 1. To be angry about something and want to discuss it
✗ 2. To stop trying hard
✗ 3. To not give up
✗ 4. Putting in extra effort

Question ID : 264330153012
Option 1 ID : 264330599620
Option 2 ID : 264330599619
Option 3 ID : 264330599622
Option 4 ID : 264330599621
Status : Answered
Chosen Option : 1

Comprehension:

In the following passage, some words have been deleted. Read the passage carefully and select the most appropriate option to fill in each blank.

Health is the most valuable of all earthly possessions. Without it all the rest are worth (1)_____. To enjoy good health we should refrain from excess in eating. We should eat moderately and devour whatever (2)_____ get. When you sit among many for a dinner, do not reach your hand out (3)_____ of all. A little food is sufficient for us. Sound sleep comes of a light stomach. Such a man rises (4)_____ in the morning and is at ease with himself. So to (5)_____ good health we should eat moderately, for a man who does not overeat enjoys sound sleep and rises early completely refreshed.

SubQuestion No : 21

Q.21 Select the most appropriate option to fill in blank no. 1.

- Ans** ✗ 1. it
✓ 2. nothing
✗ 3. everything
✗ 4. all

Question ID : 264330153371
Option 1 ID : 264330601033
Option 2 ID : 264330601032
Option 3 ID : 264330601034
Option 4 ID : 264330601031
Status : Answered
Chosen Option : 2

Comprehension:

In the following passage, some words have been deleted. Read the passage carefully and select the most appropriate option to fill in each blank.

Health is the most valuable of all earthly possessions. Without it all the rest are worth (1)_____. To enjoy good health we should refrain from excess in eating. We should eat moderately and devour whatever (2)_____ get. When you sit among many for a dinner, do not reach your hand out (3)_____ of all. A little food is sufficient for us. Sound sleep comes of a light stomach. Such a man rises (4)_____ in the morning and is at ease with himself. So to (5)_____ good health we should eat moderately, for a man who does not overeat enjoys sound sleep and rises early completely refreshed.

SubQuestion No : 22

Q.22 Select the most appropriate option to fill in blank no. 2.

- Ans
- 1. us
 - 2. he
 - 3. we
 - 4. it

Question ID : 264330153372

Option 1 ID : 264330601037

Option 2 ID : 264330601035

Option 3 ID : 264330601036

Option 4 ID : 264330601038

Status : Answered

Chosen Option : 3

Comprehension:

In the following passage, some words have been deleted. Read the passage carefully and select the most appropriate option to fill in each blank.

Health is the most valuable of all earthly possessions. Without it all the rest are worth (1)_____. To enjoy good health we should refrain from excess in eating. We should eat moderately and devour whatever (2)_____ get. When you sit among many for a dinner, do not reach your hand out (3)_____ of all. A little food is sufficient for us. Sound sleep comes of a light stomach. Such a man rises (4)_____ in the morning and is at ease with himself. So to (5)_____ good health we should eat moderately, for a man who does not overeat enjoys sound sleep and rises early completely refreshed.

SubQuestion No : 23

Q.23 Select the most appropriate option to fill in blank no. 3.

- Ans
- 1. first
 - 2. second
 - 3. last
 - 4. end

Question ID : 264330153373

Option 1 ID : 264330601039

Option 2 ID : 264330601042

Option 3 ID : 264330601040

Option 4 ID : 264330601041

Status : Answered

Chosen Option : 1

Comprehension:

In the following passage, some words have been deleted. Read the passage carefully and select the most appropriate option to fill in each blank.

Health is the most valuable of all earthly possessions. Without it all the rest are worth (1)_____. To enjoy good health we should refrain from excess in eating. We should eat moderately and devour whatever (2)_____ get. When you sit among many for a dinner, do not reach your hand out (3)_____ of all. A little food is sufficient for us. Sound sleep comes of a light stomach. Such a man rises (4)_____ in the morning and is at ease with himself. So to (5)_____ good health we should eat moderately, for a man who does not overeat enjoys sound sleep and rises early completely refreshed.

SubQuestion No : 24

Q.24 Select the most appropriate option to fill in blank no. 4.

- Ans
- 1. late
 - 2. early
 - 3. active
 - 4. idle

Question ID : 264330153374

Option 1 ID : 264330601044

Option 2 ID : 264330601045

Option 3 ID : 264330601043

Option 4 ID : 264330601046

Status : Answered

Chosen Option : 2

Comprehension:

In the following passage, some words have been deleted. Read the passage carefully and select the most appropriate option to fill in each blank.

Health is the most valuable of all earthly possessions. Without it all the rest are worth (1)_____. To enjoy good health we should refrain from excess in eating. We should eat moderately and devour whatever (2)_____ get. When you sit among many for a dinner, do not reach your hand out (3)_____ of all. A little food is sufficient for us. Sound sleep comes of a light stomach. Such a man rises (4)_____ in the morning and is at ease with himself. So to (5)_____ good health we should eat moderately, for a man who does not overeat enjoys sound sleep and rises early completely refreshed.

SubQuestion No : 25

Q.25 Select the most appropriate option to fill in blank no. 5.

- Ans
- 1. lose
 - 2. benefit
 - 3. reward
 - 4. enjoy

Question ID : 264330153375

Option 1 ID : 264330601050

Option 2 ID : 264330601047

Option 3 ID : 264330601048

Option 4 ID : 264330601049

Status : Answered

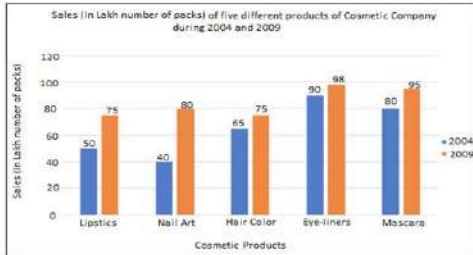
Chosen Option : 4

Multi Tasking Non Technical Staff and Havaldar CBIC and CBN Examination 2023

Roll Number	
Candidate Name	
Venue Name	iON Digital Zone iDZ Sallahapur
Exam Date	12/09/2023
Exam Time	12:30 PM - 2:30 PM
Subject	MTS Non Tech Havaldar CBIC and CBN Examination 2023

Section : Numerical and Mathematical Ability

Q.1 निम्नलिखित दंड आलेख में 2004 और 2009 के बीच एक कंपनी द्वारा पांच कॉस्मेटिक उत्पादों की बिक्री को (पैक की लाख संख्या में) दर्शाया गया है। दंड आलेख का अध्ययन कीजिए और उसके आधार पर प्रश्न का उत्तर दीजिए।



संदर्भ: Sales (in lakh number of packs) of five different products of Cosmetic company during 2004 and 2009 = 2004 और 2009 के दौरान कॉस्मेटिक कंपनी के पांच अलग-अलग उत्पादों की बिक्री (पैक की लाख संख्या में), Sales (in lakh number of packs) = बिक्री (पैक की लाख संख्या में), Cosmetic products = कॉस्मेटिक उत्पाद, Lipstics - लिपस्टिक, Nail Art - नैल आर्ट, Hair color - हेयर कलर, Eye-liners - आइ लाइनर, Mascara - मसकारा

2004 की तुलना में 2009 में सभी कॉस्मेटिक उत्पादों की मिलाकर औसत बिक्री में प्रतिशत वृद्धि (निकटतम पूर्णांक तक सन्निकटित) कितनी है?

- Ans
- 1. 36%
 - 2. 30%
 - 3. 28%
 - 4. 33%

Question ID : 264330153781

Option 1 ID : 264330602588

Option 2 ID : 264330602589

Option 3 ID : 264330602590

Option 4 ID : 264330602587

Status : Not Answered

Chosen Option : --

Q.2

What is the value of $\frac{\left[\frac{1}{5} \div \frac{1}{5} \times \frac{1}{5}\right] \times \frac{1}{5}}{\left[\frac{1}{9} + \frac{1}{9} \times \frac{1}{9}\right] \times \frac{1}{10}} + \left(1 - \frac{6}{25}\right) = ?$

- Ans
- 1. 2
 - 2. 1
 - 3. 3
 - 4. 4

Question ID : 264330153754
 Option 1 ID : 264330602481
 Option 2 ID : 264330602482
 Option 3 ID : 264330602480
 Option 4 ID : 264330602479
 Status : Answered
 Chosen Option : 4

Q.3 The average score of 22 players in an IPL match is 72. Out of these 22 players, the average score of 10 players is 80, the next 5 players got an average score of 75 and the rest 5 players got an average of 55. Then the average score of the remaining two players is:

- Ans
- 1. 65
 - 2. 67
 - 3. 72
 - 4. 80

Question ID : 264330154042
 Option 1 ID : 264330603632
 Option 2 ID : 264330603634
 Option 3 ID : 264330603633
 Option 4 ID : 264330603631
 Status : Not Answered
 Chosen Option : --

Q.4 The product of two numbers is 4107. If the HCF of these numbers is 37, then the greater number is:

- Ans
- 1. 111
 - 2. 74
 - 3. 185
 - 4. 37

Question ID : 264330156246
 Option 1 ID : 264330612385
 Option 2 ID : 264330612384
 Option 3 ID : 264330612386
 Option 4 ID : 264330612383
 Status : Not Answered
 Chosen Option : --

Q.5 If the diameter of a solid sphere is 42 cm, then the surface area of the sphere is: (use $\pi = \frac{22}{7}$)

- Ans
- 1. 5854 cm²
 - 2. 3256 cm²
 - 3. 5544 cm²
 - 4. 6897 cm²

Question ID : 264330156538
 Option 1 ID : 264330613541
 Option 2 ID : 264330613540
 Option 3 ID : 264330613539
 Option 4 ID : 264330613542
 Status : Not Answered
 Chosen Option : --

Q.6 A and B can do a piece of work in 18 and 36 days, respectively. They start working together but A leaves after 3 days. How much time will B take to complete the remaining work?

- Ans
- 1. 22 days
 - 2. 24 days
 - 3. 30 days
 - 4. 27 days

Question ID : 264330154096
 Option 1 ID : 264330603850
 Option 2 ID : 264330603849
 Option 3 ID : 264330603848
 Option 4 ID : 264330603847
 Status : Answered
 Chosen Option : 3

Q.7 जब $x = 1$ होता है तो $y, x + 3$ और $y = 8$ के अनुक्रमानुपाती होता है। जब $z = 6$ होता है तो x, z और $x = 2$ के व्युत्क्रमानुपाती होता है। y और z के बीच संबंध ज्ञात कीजिए।

- Ans
- 1. $(y - 6)/z = 24$
 - 2. $(y - 6)/z = 12$
 - 3. $z(y - 6) = 12$
 - 4. $z(y - 6) = 24$

Question ID : 264330153847
 Option 1 ID : 264330602853
 Option 2 ID : 264330602851
 Option 3 ID : 264330602852
 Option 4 ID : 264330602854
 Status : Not Answered
 Chosen Option : --

Q.8 Sandeep drives a distance of 500 metres to a store in 175 seconds. Then he drives 400 metres to another store in 125 seconds. What is his average speed (in m/s)?

- Ans
- 1. 3.5
 - 2. 3
 - 3. 2
 - 4. 2.5

Question ID : 264330156214
Option 1 ID : 264330612258
Option 2 ID : 264330612257
Option 3 ID : 264330612255
Option 4 ID : 264330612256
Status : Answered
Chosen Option : 2

Q.9 A taxi goes from city P to city Q at an average speed of 60 km/h. On the return journey, due to traffic, the average speed of the taxi falls by 20 km/h. Find the average speed of a taxi (in km/h) for the entire journey.

- Ans
- 1. 46
 - 2. 40
 - 3. 42
 - 4. 48

Question ID : 264330155956
Option 1 ID : 264330611226
Option 2 ID : 264330611223
Option 3 ID : 264330611224
Option 4 ID : 264330611225
Status : Not Answered
Chosen Option : --

Q.10 Two places A and B are 60 km apart from each other on a highway. A car starts from A and another car from B at the same time. If they move in the same direction, they meet each other in 6 hours. If they move in the opposite direction towards each other, they meet in 1 hour 30 minutes. Find the speeds of the cars (in km/h).

- Ans
- 1. 15, 18
 - 2. 15, 20
 - 3. 25, 15
 - 4. 25, 20

Question ID : 264330156006
Option 1 ID : 264330611426
Option 2 ID : 264330611424
Option 3 ID : 264330611423
Option 4 ID : 264330611425
Status : Not Answered
Chosen Option : --

Q.11 A conical tent is set to accommodate 15 persons. Each person must have 5 square metres of space on the ground and 30 cubic metres of air to breathe. What is the height of the cone?

- Ans**
- 1. 15 m
 - 2. 22 m
 - 3. 13 m
 - 4. 18 m

Question ID : **264330156200**
Option 1 ID : **264330612200**
Option 2 ID : **264330612202**
Option 3 ID : **264330612199**
Option 4 ID : **264330612201**
Status : **Not Answered**
Chosen Option : --

Q.12 A thief is spotted by a policeman from a distance of 249 m. When the policeman starts the chase, the thief also starts running. Assuming the speed of the thief is 4 m/s and that of the policeman is 7 m/s, how far the thief would have run before he is overtaken by the policeman?

- Ans**
- 1. 521 m
 - 2. 332 m
 - 3. 747 m
 - 4. 249 m

Question ID : **264330153881**
Option 1 ID : **264330602987**
Option 2 ID : **264330602988**
Option 3 ID : **264330602989**
Option 4 ID : **264330602990**
Status : **Not Answered**
Chosen Option : --

Q.13 Find the simple interest on ₹8,000 at the rate of 10% per annum in 6 years.

- Ans**
- 1. ₹4,200
 - 2. ₹4,400
 - 3. ₹4,800
 - 4. ₹4,600

Question ID : **264330155964**
Option 1 ID : **264330611257**
Option 2 ID : **264330611258**
Option 3 ID : **264330611255**
Option 4 ID : **264330611256**
Status : **Answered**
Chosen Option : **3**

Q.14 By selling at a loss of 12% instead of a loss of 18% an article sells for ₹120 more. Find its CP.

- Ans**
- 1. ₹ 2,100
 - 2. ₹ 2,000
 - 3. ₹ 1,500
 - 4. ₹ 1,800

Question ID : **264330156073**
Option 1 ID : **264330611691**
Option 2 ID : **264330611694**
Option 3 ID : **264330611693**
Option 4 ID : **264330611692**
Status : **Not Answered**
Chosen Option : --

Q.15 If due to a 12% decrease in the price of sugar, Akshat can buy 7 kg more sugar for ₹1,200, then find the actual price (in ₹) of sugar. (Rounded off to 2 decimal places)

- Ans**
- 1. 23.38
 - 2. 28.25
 - 3. 25.79
 - 4. 26.35

Question ID : **264330155732**
Option 1 ID : **264330610334**
Option 2 ID : **264330610331**
Option 3 ID : **264330610333**
Option 4 ID : **264330610332**
Status : **Not Answered**
Chosen Option : --

Q.16 The ratio of number of students in schools A and B is 5 : 8. If the number of students in schools A and B is increased by 20% and 15%, respectively, find the new ratio of students in schools A and B, respectively.

- Ans**
- 1. 15 : 23
 - 2. 15 : 13
 - 3. 13 : 15
 - 4. 12 : 13

Question ID : **264330153843**
Option 1 ID : **264330602838**
Option 2 ID : **264330602835**
Option 3 ID : **264330602836**
Option 4 ID : **264330602837**
Status : **Not Answered**
Chosen Option : --

Q.17 Study the following table carefully and answer the question that follows.

The table shows the total production (in thousands) of Company 1, Company 2, Company 3 and Company 4 in four different years.

Year	Total production of Company 1	Total production of Company 2	Total production of Company 3	Total production of Company 4
2019	65	76	64	76
2020	88	85	72	68
2021	84	75	68	96
2022	71	84	76	72

Which company has the maximum average of production from the year 2019 to 2022?

- Ans 1. Company 2
 2. Company 4
 3. Company 1
 4. Company 3

Question ID : 264330157900

Option 1 ID : 264330618960

Option 2 ID : 264330618962

Option 3 ID : 264330618959

Option 4 ID : 264330618961

Status : Answered

Chosen Option : 1

Q.18 Working 6 hours a day, 15 persons can complete a certain work in 26 days. In how many days would 13 persons complete the same work, working 10 hours a day?

- Ans 1. 17
 2. 15
 3. 20
 4. 18

Question ID : 264330155976

Option 1 ID : 264330611306

Option 2 ID : 264330611305

Option 3 ID : 264330611304

Option 4 ID : 264330611303

Status : Answered

Chosen Option : 4

Q.19 Raman buys an article for ₹1,00,000 and sells it to Mohit for ₹1,20,000. Mohit again sells the same article to Rashmi for ₹1,00,000. What is the percentage loss faced by Mohit?

- Ans**
- ✓ 1. $16\frac{2}{3}\%$
 - ✗ 2. $18\frac{1}{3}\%$
 - ✗ 3. 20%
 - ✗ 4. 15%

Question ID : 264330155710
Option 1 ID : 264330610244
Option 2 ID : 264330610245
Option 3 ID : 264330610246
Option 4 ID : 264330610243
Status : Answered
Chosen Option : 1

Q.20 A bank offers compound interest at the rate 5% per annum calculated half yearly on its deposits. A customer deposits ₹2,400 each on 1st January and 1st July of a year. Find the amount he received at the end of the year.

- Ans**
- ✗ 1. ₹180.50
 - ✓ 2. ₹4,981.50
 - ✗ 3. ₹181.50
 - ✗ 4. ₹4,081.50

Question ID : 264330153851
Option 1 ID : 264330602867
Option 2 ID : 264330602869
Option 3 ID : 264330602868
Option 4 ID : 264330602870
Status : Not Answered
Chosen Option : --

Section : Reasoning Ability and Problem Solving

Prepare 50% Faster

Q.1 Which figure should replace the question mark (?) if the following figure series were to be continued?

A	<input type="checkbox"/>	<input type="checkbox"/>	A	E	D	D	E	
E	3		C	E	<input type="checkbox"/>	C	A	<input type="checkbox"/>
C	D	D	3	A	8	8	C	?

Ans

✗ 1.

<input type="checkbox"/>		8
	E	D
A	☆	

✗ 2.

☆		8
	E	C
A	<input type="checkbox"/>	

✓ 3.

<input type="checkbox"/>		8
	D	A
E	☆	

✗ 4.

<input type="checkbox"/>		☆
	D	A
C	8	

Question ID : 264330154766

Option 1 ID : 264330606528

Option 2 ID : 264330606529

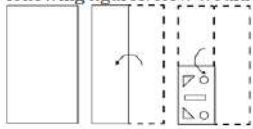
Option 3 ID : 264330606530

Option 4 ID : 264330606527

Status : Not Answered

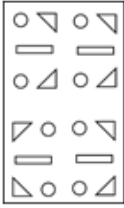
Chosen Option : --

Q.2 The sequence of folding a piece of paper and the manner in which the folded paper is cut is shown in the following figures. How would this paper look when unfolded?

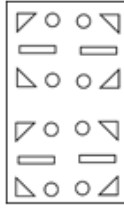


Ans

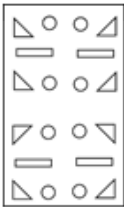
1.



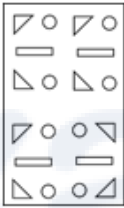
2.



3.



4.



Question ID : 264330155611

Option 1 ID : 264330609848

Option 2 ID : 264330609850

Option 3 ID : 264330609849

Option 4 ID : 264330609847

Status : Not Answered

Chosen Option : --

Q.3 In a certain code language, 'DROP' is coded as '9375' and 'POND' is coded as '7839'. What is the code for 'N' in the given code language?

1. 3

2. 7

3. 8

4. 9

Question ID : 264330151710

Option 1 ID : 264330594467

Option 2 ID : 264330594468

Option 3 ID : 264330594470

Option 4 ID : 264330594469

Status : Not Answered

Chosen Option : --

Q.4 2 is related to 5 following a certain logic. Following the same logic, 6 is related to 37. To which of the following is 9 related to, following the same logic?

- Ans**
- 1. 81
 - 2. 83
 - 3. 82
 - 4. 84

Question ID : **264330151595**
Option 1 ID : **264330594007**
Option 2 ID : **264330594009**
Option 3 ID : **264330594008**
Option 4 ID : **264330594010**
Status : **Answered**
Chosen Option : **3**

Q.5 If 4 December 1987 is a Friday, then what will be the day of the week on 12 December 2009?

- Ans**
- 1. Sunday
 - 2. Friday
 - 3. Wednesday
 - 4. Saturday

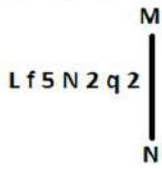
Question ID : **264330154357**
Option 1 ID : **264330604894**
Option 2 ID : **264330604892**
Option 3 ID : **264330604891**
Option 4 ID : **264330604893**
Status : **Not Answered**
Chosen Option : **--**

Q.6 Ranjan, Pari, Yash, Charu, Reetu and Gunjan are sitting around a circular table facing the centre. Ranjan sits 3rd to the left of Pari. Yash sits 2nd to the left of Ranjan. Charu sits 2nd to the right of Ranjan. Reetu is an immediate neighbour of Charu. Who sits 2nd to the right of Pari?

- Ans**
- 1. Yash
 - 2. Reetu
 - 3. Gunjan
 - 4. Charu

Question ID : **264330155655**
Option 1 ID : **264330610025**
Option 2 ID : **264330610024**
Option 3 ID : **264330610023**
Option 4 ID : **264330610026**
Status : **Not Answered**
Chosen Option : **--**

Q.7 Select the correct mirror image of the given figure when the mirror is placed at MN as shown below.



- Ans
- 1. $\Sigma p 2 N 5 \uparrow J$
 - 2. $q 2 \Sigma N 2 \uparrow L$
 - 3. $\Sigma p \Sigma N 2 \uparrow J$
 - 4. $\Sigma p 2 N 2 \uparrow J$

Question ID : 264330151522
 Option 1 ID : 264330593715
 Option 2 ID : 264330593716
 Option 3 ID : 264330593717
 Option 4 ID : 264330593718
 Status : Answered
 Chosen Option : 3

Q.8 What should come in place of '?' in the given series?

8 27 84 255 768 ?

- Ans
- 1. 2235
 - 2. 2297
 - 3. 2307
 - 4. 2271

Question ID : 264330151497
 Option 1 ID : 264330593615
 Option 2 ID : 264330593617
 Option 3 ID : 264330593618
 Option 4 ID : 264330593616
 Status : Not Answered
 Chosen Option : --

Q.9 Read the given statement(s) and conclusions carefully. Assuming that the information given in the statements is true, even if it appears to be at variance with commonly known facts, decide which of the given conclusions logically follow(s) from the statement(s).

Statements: Some cows are crows. Some crows are elephants.

Conclusions:

- (I) Some cows are elephants.
- (II) All crows are elephants.

- Ans
- 1. Only conclusion (I) is follows.
 - 2. Neither conclusion (I) nor (II) is follows.
 - 3. Only conclusion (II) is follows.
 - 4. Both conclusions (I) and (II) are follows.

Question ID : 264330154426
 Option 1 ID : 264330605167
 Option 2 ID : 264330605169
 Option 3 ID : 264330605168
 Option 4 ID : 264330605170
 Status : Answered
 Chosen Option : 2

Q.10 What should come in place of ? in the given series?

108 103 98 93 88 ?

- Ans
- 1. 82
 - 2. 83
 - 3. 84
 - 4. 81

Question ID : 264330151550
 Option 1 ID : 264330593828
 Option 2 ID : 264330593829
 Option 3 ID : 264330593830
 Option 4 ID : 264330593827
 Status : Answered
 Chosen Option : 2

Q.11 If 'A' stands for '+', 'B' stands for '×', 'C' stands for '+' and 'D' stands for '-'; what will come in place of the question mark (?) in the following equation?
 27 B 3 C (54 A 2) B 5 D 55 = ?

- Ans
- 1. 161
 - 2. 167
 - 3. 153
 - 4. 159

Question ID : 264330151787
 Option 1 ID : 264330594775
 Option 2 ID : 264330594778
 Option 3 ID : 264330594776
 Option 4 ID : 264330594777
 Status : Answered
 Chosen Option : 1

Q.12 What should come in place of ? in the given series?

227 226 218 191 127 ?

- Ans
- 1. 3
 - 2. 4
 - 3. 2
 - 4. 1

Question ID : 264330151559
 Option 1 ID : 264330593865
 Option 2 ID : 264330593866
 Option 3 ID : 264330593864
 Option 4 ID : 264330593863
 Status : Answered
 Chosen Option : 3

Q.13 PD 17, TH 19 से एक निश्चित प्रकार से संबंधित है। उसी प्रकार, HK 23, LO 29 से संबंधित है। समान तर्क का अनुसरण करते हुए FJ 11 निम्नलिखित में से किससे संबंधित है?

- Ans**
- 1. IM 13
 - 2. HL 17
 - 3. IN 15
 - 4. JN 13

Question ID : **264330151673**
Option 1 ID : **264330594322**
Option 2 ID : **264330594321**
Option 3 ID : **264330594320**
Option 4 ID : **264330594319**
Status : **Not Answered**
Chosen Option : --

Q.14 What should come in place of ? in the given series based on the English alphabetical order?

BPR, FRV, JTZ, NVD, ?

- Ans**
- 1. QYG
 - 2. SXI
 - 3. QXG
 - 4. RXH

Question ID : **264330155780**
Option 1 ID : **264330610525**
Option 2 ID : **264330610523**
Option 3 ID : **264330610524**
Option 4 ID : **264330610526**
Status : **Answered**
Chosen Option : 4

Q.15 What should come in place of ? in the given series based on the English alphabetical order?

ZKP, DHR, HET, LBV, ?

- Ans**
- 1. PYX
 - 2. QZY
 - 3. RYX
 - 4. QYZ

Question ID : **264330155802**
Option 1 ID : **264330610612**
Option 2 ID : **264330610611**
Option 3 ID : **264330610613**
Option 4 ID : **264330610614**
Status : **Not Answered**
Chosen Option : --

Q.16 Select the set in which the numbers are related in the same way as are the numbers of the following sets.
(NOTE: Operations should be performed on the whole numbers, without breaking down the numbers into its constituent digits. E.g. 13 – Operations on 13 such as adding / subtracting /multiplying etc. to 13 can be performed. Breaking down 13 into 1 and 3 and then performing mathematical operations on 1 and 3 is not allowed)
(32, 99, 67)
(22, 77, 55)

- Ans**
- 1. 53, 98, 33
 - 2. 23, 87, 64
 - 3. 35, 87, 12
 - 4. 12, 45, 14

Question ID : 264330151613
Option 1 ID : 264330594082
Option 2 ID : 264330594080
Option 3 ID : 264330594081
Option 4 ID : 264330594079
Status : Answered
Chosen Option : 2

Q.17 Read the given statements and conclusions carefully. You have to take the given statements to be true even if they seem to be at variance from commonly known facts. You have to decide which conclusion/s logically follow/s from the given statements.

Statements: Some alphabets are chairs. Some chairs are high. All high are buildings.

Conclusion I: Some alphabets are buildings.

Conclusion II: Some high are buildings.

- Ans**
- 1. Only conclusion (II) is follow.
 - 2. Only conclusion (I) is follow.
 - 3. Both conclusions (I) and (II) are follow.
 - 4. Neither conclusion (I) nor (II) is follow.

Question ID : 264330155924
Option 1 ID : 264330611100
Option 2 ID : 264330611099
Option 3 ID : 264330611102
Option 4 ID : 264330611101
Status : Answered
Chosen Option : 1

Q.18 What should come in place of ? in the given series based on the English alphabetical order?

JVC, LXD, NZE, PBF, ?

- Ans**
- 1. QCF
 - 2. RDG
 - 3. SCH
 - 4. QDH

Question ID : 264330155772
Option 1 ID : 264330610491
Option 2 ID : 264330610492
Option 3 ID : 264330610494
Option 4 ID : 264330610493
Status : Answered
Chosen Option : 2

Q.19 In a certain code language, 'CRAFT' is coded as 'DSBGU' and 'FRIDAY' is coded as 'GSJEBZ'. What is the code for 'MANGO' in the given code language?

- Ans**
- ✓ 1. NBOHP
 - ✗ 2. MBPGQ
 - ✗ 3. NCOGQ
 - ✗ 4. MCOGP

Question ID : 264330155811
Option 1 ID : 264330610650
Option 2 ID : 264330610648
Option 3 ID : 264330610647
Option 4 ID : 264330610649
Status : Answered
Chosen Option : 1

Q.20 What will come in the place of '?' in the following equation, if '+' and '-' are interchanged and '×' and '÷' are interchanged?
 $83 + 17 + 4 - 64 \times 16 = ?$

- Ans**
- ✗ 1. 29
 - ✗ 2. 9
 - ✓ 3. 19
 - ✗ 4. 18

Question ID : 264330155670
Option 1 ID : 264330610084
Option 2 ID : 264330610086
Option 3 ID : 264330610085
Option 4 ID : 264330610083
Status : Answered
Chosen Option : 3

Section : General Awareness

Q.1 How many countries participated in the FIFA U-17 Women's World Cup 2022?

- Ans**
- ✗ 1. 18
 - ✗ 2. 14
 - ✓ 3. 16
 - ✗ 4. 12

Question ID : 264330158227
Option 1 ID : 264330620270
Option 2 ID : 264330620268
Option 3 ID : 264330620269
Option 4 ID : 264330620267
Status : Not Answered
Chosen Option : --

Q.2 'Wings of Fire' is the autobiography of a former president of India. Who is he?

Ans 1. Shankar Dayal Sharma

2. APJ Abdul Kalam

3. Zakir Hussain

4. VV Giri

Question ID : 264330160963

Option 1 ID : 264330631186

Option 2 ID : 264330631184

Option 3 ID : 264330631183

Option 4 ID : 264330631185

Status : Answered

Chosen Option : 2

Q.3 In which of the following states is the Statue of Unity situated?

Ans 1. Gujarat

2. Rajasthan

3. Maharashtra

4. Punjab

Question ID : 264330160774

Option 1 ID : 264330630428

Option 2 ID : 264330630429

Option 3 ID : 264330630430

Option 4 ID : 264330630427

Status : Answered

Chosen Option : 1

Q.4 When was the Defence of India Act enacted?

Ans 1. 1920

2. 1918

3. 1915

4. 1921

Question ID : 264330160878

Option 1 ID : 264330630845

Option 2 ID : 264330630844

Option 3 ID : 264330630843

Option 4 ID : 264330630846

Status : Not Answered

Chosen Option : --

Q.5 Which festival brings out the fusion rich culture of Chhattisgarh and Odisha?

Ans 1. Rath Yatra

2. Bastar Goncha

3. Shoolini fair

4. Madhavpur fair

Question ID : 264330159083

Option 1 ID : 264330623693

Option 2 ID : 264330623692

Option 3 ID : 264330623691

Option 4 ID : 264330623694

Status : Not Answered

Chosen Option : --

Q.6 Which flag of the Indian National Congress was adopted in 1931?

- Ans
- 1. A two colour flag with charkha made by cloth
 - 2. A tricolour flag made by Khadi with a Charkha symbol
 - 3. One colour flag with charkha symbol
 - 4. A blue colour flag made by cloth

Question ID : 264330160880
Option 1 ID : 264330630854
Option 2 ID : 264330630853
Option 3 ID : 264330630851
Option 4 ID : 264330630852
Status : Answered
Chosen Option : 2

Q.7 Among the following pairs, which ones denote two scalar quantities?

- Ans
- 1. Momentum and Angular velocity
 - 2. Distance and Speed
 - 3. Linear momentum and Acceleration
 - 4. Electric field and Force

Question ID : 264330157781
Option 1 ID : 264330618484
Option 2 ID : 264330618486
Option 3 ID : 264330618483
Option 4 ID : 264330618485
Status : Answered
Chosen Option : 4

Q.8 Which of the following music directors won the Oscar award in the year 2009?

- Ans
- 1. Bappi Lahiri
 - 2. AR Rahman
 - 3. Vishal Bhardwaj
 - 4. Rajesh Roshan

Question ID : 264330155503
Option 1 ID : 264330609417
Option 2 ID : 264330609415
Option 3 ID : 264330609418
Option 4 ID : 264330609416
Status : Answered
Chosen Option : 2

Q.9 Which of the following vitamins prevents major birth defects of the brain and spine of a newborn baby?

- Ans
- 1. Vitamin E
 - 2. Vitamin A
 - 3. Vitamin C
 - 4. Folic acid

Question ID : 264330156611
Option 1 ID : 264330613833
Option 2 ID : 264330613831
Option 3 ID : 264330613832
Option 4 ID : 264330613834
Status : Not Answered
Chosen Option : --

Q.10 In India, the National Sports Day is celebrated on which date?

- Ans
- 1. 6th December
 - 2. 29th August
 - 3. 1st September
 - 4. 14th November

Question ID : 264330158233
Option 1 ID : 264330620294
Option 2 ID : 264330620291
Option 3 ID : 264330620292
Option 4 ID : 264330620293
Status : Not Answered
Chosen Option : --

Q.11 Who among the following was the founding member of Sri Sai Nataraja Academy of Kuchipudi that offers training and higher studies in Kuchipudi?

- Ans
- 1. P Ramadevi
 - 2. Kaushalya Reddy
 - 3. Yamini Krishnamurthy
 - 4. Aparna Satheesan

Question ID : 264330155483
Option 1 ID : 264330609337
Option 2 ID : 264330609336
Option 3 ID : 264330609335
Option 4 ID : 264330609338
Status : Answered
Chosen Option : 2

Q.12 Which of the following playback singers of India received the Padma Shri in 2009 and Padma Bhushan in 2016?

- Ans
- 1. Sonu Nigam
 - 2. Abhijit Bhattacharya
 - 3. Kumar Sanu Bhattacharjee
 - 4. Udit Narayan Jha

Question ID : 264330161769
Option 1 ID : 264330634406
Option 2 ID : 264330634403
Option 3 ID : 264330634404
Option 4 ID : 264330634405
Status : Answered
Chosen Option : 3

Q.13 When the 'trans-boundary economic activities' of an economy and depreciation are included into account, the aggregate measure is known as _____.

- Ans
- 1. GNP
 - 2. NNP
 - 3. PCI
 - 4. GDP

Question ID : 264330166033
Option 1 ID : 264330651207
Option 2 ID : 264330651209
Option 3 ID : 264330651210
Option 4 ID : 264330651208
Status : Answered
Chosen Option : 1

Q.14 Tamil Nadu's _____ marked a national record in men's long jump in the second AFI National Jumps Competition in March 2023.

- Ans
- 1. Suresh Babu
 - 2. Anees Yahiya
 - 3. Murali Sreeshankar
 - 4. Jeswin Aldrin

Question ID : 264330161440
Option 1 ID : 264330633090
Option 2 ID : 264330633089
Option 3 ID : 264330633087
Option 4 ID : 264330633088
Status : Not Answered
Chosen Option : --

Q.15 वसंत ऋतु के आगमन पर _____ गांव 'बागुरुम्बा (Bagurumba)' के मधुर गायन से झूम उठता है।

- Ans
- 1. बोडो (Bodo)
 - 2. खासी (Khasi)
 - 3. गारो (Garo)
 - 4. कार्बी (Karbi)

Question ID : 264330160796
Option 1 ID : 264330630516
Option 2 ID : 264330630515
Option 3 ID : 264330630517
Option 4 ID : 264330630518
Status : Not Answered
Chosen Option : --

Q.16 Which mountain range from the following is associated with Rajasthan state?

- Ans
- 1. Satpura Range
 - 2. Sahyadri Range
 - 3. Aravalli Range
 - 4. Vindhya Range

Question ID : 264330161530
Option 1 ID : 264330633447
Option 2 ID : 264330633450
Option 3 ID : 264330633448
Option 4 ID : 264330633449
Status : Answered
Chosen Option : 3

Q.17 According to the National Multidimensional Poverty Index 2021, which state has the lowest percentage of population being multidimensionally poor?

- Ans
- 1. Kerala
 - 2. Uttar Pradesh
 - 3. Madhya Pradesh
 - 4. Rajasthan

Question ID : 264330160169
Option 1 ID : 264330628018
Option 2 ID : 264330628017
Option 3 ID : 264330628015
Option 4 ID : 264330628016
Status : Answered
Chosen Option : 3

Q.18 Which of the following represents disposable income?

- Ans
- 1. The income earned by individuals and households after taxes and other deductions
 - 2. The total income earned by businesses and corporations in an economy
 - 3. The income earned by individuals through their own business or self-employment
 - 4. The total income earned by individuals and households before taxes and other deductions

Question ID : 264330157319
Option 1 ID : 264330616641
Option 2 ID : 264330616639
Option 3 ID : 264330616642
Option 4 ID : 264330616640
Status : Not Answered
Chosen Option : --

Q.19 Which of the following states receives rainfall during the winter season?

- Ans 1. Tamil Nadu
 2. Jharkhand
 3. Maharashtra
 4. Rajasthan

Question ID : 264330161308
Option 1 ID : 264330632562
Option 2 ID : 264330632559
Option 3 ID : 264330632561
Option 4 ID : 264330632560
Status : Answered
Chosen Option : 1

Q.20 Who among the following is the author of the book 'Revolution 2020'?

- Ans 1. Chetan Bhagat
 2. Omair Ahmad
 3. Siddhartha Sarma
 4. Joy Goswami

Question ID : 264330155459
Option 1 ID : 264330609239
Option 2 ID : 264330609240
Option 3 ID : 264330609241
Option 4 ID : 264330609242
Status : Answered
Chosen Option : 3

Q.21 Who was our first Prime Minister?

- Ans 1. Rajendra Prasad
 2. Indira Gandhi
 3. Jawaharlal Nehru
 4. Gulzarilal Nanda

Question ID : 264330159912
Option 1 ID : 264330626996
Option 2 ID : 264330626995
Option 3 ID : 264330626997
Option 4 ID : 264330626998
Status : Answered
Chosen Option : 3

Q.22 Which state is ranked fourth in India according to the first Multidimensional Poverty Index (MPI) 2021 report of the NITI Aayog?

- Ans 1. Meghalaya
 2. Madhya Pradesh
 3. Assam
 4. Himachal Pradesh

Question ID : 264330166020
Option 1 ID : 264330651156
Option 2 ID : 264330651157
Option 3 ID : 264330651155
Option 4 ID : 264330651158
Status : Not Answered
Chosen Option : --

Q.23 Which Schedule of the Indian Constitution deals with the division of powers between the Union and the states?

- Ans
- 1. 9th
 - 2. 7th
 - 3. 5th
 - 4. 2nd

Question ID : 264330159896
Option 1 ID : 264330626934
Option 2 ID : 264330626933
Option 3 ID : 264330626932
Option 4 ID : 264330626931
Status : Not Answered
Chosen Option : --

Q.24 पथ या सड़क विक्रेताओं (street vendors) के वित्तीय समावेशन के लिए भारत सरकार द्वारा शुरू की गई योजना का नाम क्या है, जिसकी वर्षगांठ का समारोह 9 जुलाई से 31 जुलाई 2022 तक आयोजित किया गया था?

- Ans
- 1. पीएम आवासनिधि योजना (PM AVASNidhi Scheme)
 - 2. पीएम स्वाधीन योजना (PM SVAdhin Scheme)
 - 3. पीएम स्वनिधि योजना (PM SVANidhi Scheme)
 - 4. पीएम स्वाधार योजना (PM SVAdhar Scheme)

Question ID : 264330161411
Option 1 ID : 264330632971
Option 2 ID : 264330632973
Option 3 ID : 264330632972
Option 4 ID : 264330632974
Status : Not Answered
Chosen Option : --

Q.25 Renowned _____ folk dance artist Domar Singh Kunwar, who has dedicated his life to preserving the tradition of the dance for over five decades, was awarded the Padma Shri 2023.

- Ans
- 1. Pandwani
 - 2. Raut Nacha
 - 3. Natya Nacha
 - 4. Soowa

Question ID : 264330160803
Option 1 ID : 264330630544
Option 2 ID : 264330630545
Option 3 ID : 264330630543
Option 4 ID : 264330630546
Status : Not Answered
Chosen Option : --

Q.1 Select the most appropriate meaning of the given idiom.
Beat around the bush

Ans ✓ 1. To avoid talking about what is important

✗ 2. To talk about important things

✗ 3. To have patience

✗ 4. To avoid people

Question ID : 264330152723

Option 1 ID : 264330598494

Option 2 ID : 264330598493

Option 3 ID : 264330598491

Option 4 ID : 264330598492

Status : Answered

Chosen Option : 1

Q.2 Select the option that can be used as a one-word substitute for the given group of words.

A person who is kept captive for fulfilment of demands of money or conditions.

Ans ✗ 1. Doyen

✗ 2. Bait

✓ 3. Hostage

✗ 4. Scion

Question ID : 264330151811

Option 1 ID : 264330594873

Option 2 ID : 264330594871

Option 3 ID : 264330594874

Option 4 ID : 264330594872

Status : Not Answered

Chosen Option : --

Q.3 Select the most appropriate synonym of the given word.
Peril

Ans ✓ 1. Danger

✗ 2. Entertainment

✗ 3. Joke

✗ 4. Ignorance

Question ID : 264330152748

Option 1 ID : 264330598593

Option 2 ID : 264330598592

Option 3 ID : 264330598591

Option 4 ID : 264330598594

Status : Answered

Chosen Option : 1

Q.4 There is a spelling error in the given sentence. Select the option that contains the **INCORRECTLY** spelt word.
As per manager's opinion, the laser sprinkler malfunctioned.

- Ans** ✓ 1. malfunctioned
✗ 2. sprinkler
✗ 3. laser
✗ 4. opinion

Question ID : 264330152840
Option 1 ID : 264330598954
Option 2 ID : 264330598953
Option 3 ID : 264330598952
Option 4 ID : 264330598951
Status : Answered
Chosen Option : 1

Q.5 Select the most appropriate **ANTONYM** of the given word.
Amiable

- Ans** ✗ 1. Restless
✓ 2. Unfriendly
✗ 3. Sad
✗ 4. Joyful

Question ID : 264330151914
Option 1 ID : 264330595273
Option 2 ID : 264330595271
Option 3 ID : 264330595272
Option 4 ID : 264330595274
Status : Answered
Chosen Option : 2

Q.6 Select the most appropriate idiom to fill in the blank.
Rahul speaks easily in front of a small group, but he seems _____ before a large audience.

- Ans** ✓ 1. ill at ease
✗ 2. think ill of
✗ 3. man of ill repute
✗ 4. ill-disposed to

Question ID : 264330153103
Option 1 ID : 264330599977
Option 2 ID : 264330599976
Option 3 ID : 264330599975
Option 4 ID : 264330599978
Status : Not Answered
Chosen Option : --

Q.7 Select the most appropriate idiom for the following sentence.
He made the business profitable from unprofitable in about a year of joining.

- Ans
- 1. Easy come, easy go
 - 2. Throw up
 - 3. Where there is a will, there is a way
 - 4. Still waters run deep

Question ID : 264330141304
Option 1 ID : 264330553551
Option 2 ID : 264330553552
Option 3 ID : 264330553554
Option 4 ID : 264330553553
Status : Answered
Chosen Option : 3

Q.8 Parts of the following sentence have been underlined and given as options. Select the option that contains a misspelt word.

Obesity is rapidly becoming the leading cause of prevantable deaths in the United States.

- Ans
- 1. rapidly
 - 2. leading
 - 3. obesity
 - 4. prevantable

Question ID : 264330151837
Option 1 ID : 264330594976
Option 2 ID : 264330594977
Option 3 ID : 264330594975
Option 4 ID : 264330594978
Status : Answered
Chosen Option : 4

Q.9 Identify and correct the INCORRECTLY spelt word in the given sentence.
Sliding each bead from one side to the other, the student used the abacus to count out the number of days in a week.

- Ans
- 1. beed
 - 2. number
 - 3. Slaiding
 - 4. abacuss

Question ID : 264330153598
Option 1 ID : 264330601880
Option 2 ID : 264330601882
Option 3 ID : 264330601879
Option 4 ID : 264330601881
Status : Answered
Chosen Option : 2

Q.10 Select the most appropriate option that can substitute the underlined segment in the given sentence. If there is no need to substitute it, select 'No improvement required'.
Very early in the morning, at the beginning of January, Opu was lying in bed waiting for the sun having rose.

- Ans**
- 1. waited for the sun rising
 - 2. waited for the sun having rose
 - 3. No improvement required
 - 4. waiting for the sun to rise

Question ID : 264330152669
 Option 1 ID : 264330598281
 Option 2 ID : 264330598279
 Option 3 ID : 264330598282
 Option 4 ID : 264330598280
 Status : Answered
 Chosen Option : 4

Q.11 Choose the sentence that contains an error.

- Ans**
- 1. I love the taste of fresh strawberries in the summer.
 - 2. She is the winner of the Nobel Peace Prize.
 - 3. He is chef who specialises in Italian cuisine.
 - 4. The Earth revolves around the Sun.

Question ID : 264330155181
 Option 1 ID : 264330608184
 Option 2 ID : 264330608185
 Option 3 ID : 264330608186
 Option 4 ID : 264330608183
 Status : Answered
 Chosen Option : 3

Q.12 Select the most appropriate option that can substitute the underlined segment in the given sentence. If there is no need to substitute it, select 'No improvement required'.
Newton, after seeing the apple falling from a tree, began to wonder whether if it moved towards the earth and not upwards towards the sky.

- Ans**
- 1. No improvement required
 - 2. began to wondering if
 - 3. began his wondering how
 - 4. began to wonder why

Question ID : 264330152668
 Option 1 ID : 264330598278
 Option 2 ID : 264330598276
 Option 3 ID : 264330598277
 Option 4 ID : 264330598275
 Status : Answered
 Chosen Option : 4

Q.13 Select the most appropriate option that can substitute the underlined word in the following sentence.
They serve stuffed garlic bread and molten chocolate in the birthday party of their son, Parth, last week.

- Ans
- 1. served
 - 2. serves
 - 3. are serving
 - 4. be served

Question ID : 264330152576
Option 1 ID : 264330597909
Option 2 ID : 264330597907
Option 3 ID : 264330597910
Option 4 ID : 264330597908
Status : Answered
Chosen Option : 1

Q.14 Select the most appropriate synonym of the given word.
Barbed

- Ans
- 1. Passive
 - 2. Kind
 - 3. Gentle
 - 4. Spiteful

Question ID : 264330151880
Option 1 ID : 264330595142
Option 2 ID : 264330595139
Option 3 ID : 264330595141
Option 4 ID : 264330595140
Status : Answered
Chosen Option : 4

Q.15 Select the most appropriate meaning of the underlined segment in the given sentence.
I can't believe you let the cat out of the bag about my surprise party!

- Ans
- 1. Ask a question
 - 2. Reveal a secret
 - 3. Keep a secret
 - 4. Make a joke

Question ID : 264330152684
Option 1 ID : 264330598342
Option 2 ID : 264330598340
Option 3 ID : 264330598339
Option 4 ID : 264330598341
Status : Answered
Chosen Option : 2

Q.16 Select the option that can be used as a one-word substitute for the given group of words.

Endless period of time

- Ans
- 1. Eternity
 - 2. Longevity
 - 3. Impurity
 - 4. Frailty

Question ID : 264330153639

Option 1 ID : 264330602030

Option 2 ID : 264330602029

Option 3 ID : 264330602028

Option 4 ID : 264330602027

Status : Answered

Chosen Option : 1

Q.17 Parts of the given sentence have been underlined. One of them contains an error. The underlined parts are given as options with some changes. Select the option that correctly rectifies the error.

Sohan is the older brother of my best friend.

- Ans
- 1. to my
 - 2. an
 - 3. elder
 - 4. good

Question ID : 264330153173

Option 1 ID : 264330600253

Option 2 ID : 264330600251

Option 3 ID : 264330600252

Option 4 ID : 264330600254

Status : Answered

Chosen Option : 3

Q.18 Parts of the following sentence have been underlined and given as options. Select the option that contains an error.

We think of the past history of the world as fixed but of the future as undecided and open to a wealth off possibilities.

- Ans
- 1. of the past
 - 2. as undecided
 - 3. as fixed
 - 4. wealth off

Question ID : 264330153203

Option 1 ID : 264330600371

Option 2 ID : 264330600374

Option 3 ID : 264330600372

Option 4 ID : 264330600373

Status : Answered

Chosen Option : 4

Q.19 Parts of the following sentence have been given as options. Select the option that contains an error.

My teacher told me that / all that / glitters was not gold.

- Ans
- 1. My teacher told me that
 - 2. all that
 - 3. glitters was not gold
 - 4. No error

Question ID : 264330155378
Option 1 ID : 264330608927
Option 2 ID : 264330608928
Option 3 ID : 264330608929
Option 4 ID : 264330608930
Status : Answered
Chosen Option : 3

Q.20 Parts of the following sentence have been underlined and given as options. Select the option that contains an error.

When I bought the book, I thought it will be interesting.

- Ans
- 1. When
 - 2. bought
 - 3. will
 - 4. thought

Question ID : 264330153190
Option 1 ID : 264330600319
Option 2 ID : 264330600320
Option 3 ID : 264330600322
Option 4 ID : 264330600321
Status : Answered
Chosen Option : 2

Comprehension:

In the following passage, some words have been deleted. Read the passage carefully and select the most appropriate option to fill in each blank.
Education should be free to all because it is a (1)___ human right. It is essential for the (2)___ of a fully functioning society and for the advancement of humanity. While some argue that education should not be free because it has value or that free education would be a (3)___ on taxpayers, the reality is that education is a public good that (4)___ everyone in society. Not only does education provide individuals with the skills and knowledge they need to participate in the workforce, but it also improves social cohesion and creates more (5)___ citizens.

SubQuestion No : 21

Q.21 Select the most appropriate option to fill in blank number 1.

- Ans
- 1. lovely
 - 2. precious
 - 3. fundamental
 - 4. joyful

Question ID : 264330153569
Option 1 ID : 264330601771
Option 2 ID : 264330601772
Option 3 ID : 264330601773
Option 4 ID : 264330601774
Status : Answered
Chosen Option : 3

Comprehension:

In the following passage, some words have been deleted. Read the passage carefully and select the most appropriate option to fill in each blank.

Education should be free to all because it is a (1)___ human right. It is essential for the (2)___ of a fully functioning society and for the advancement of humanity. While some argue that education should not be free because it has value or that free education would be a (3)___ on taxpayers, the reality is that education is a public good that (4)___ everyone in society. Not only does education provide individuals with the skills and knowledge they need to participate in the workforce, but it also improves social cohesion and creates more (5)___ citizens.

SubQuestion No : 22

Q.22 Select the most appropriate option to fill in blank number 2.

- Ans 1. celebration
 2. development
 3. enthusiasm
 4. distribution

Question ID : 264330153570

Option 1 ID : 264330601775

Option 2 ID : 264330601776

Option 3 ID : 264330601778

Option 4 ID : 264330601777

Status : Answered

Chosen Option : 2

Comprehension:

In the following passage, some words have been deleted. Read the passage carefully and select the most appropriate option to fill in each blank.

Education should be free to all because it is a (1)___ human right. It is essential for the (2)___ of a fully functioning society and for the advancement of humanity. While some argue that education should not be free because it has value or that free education would be a (3)___ on taxpayers, the reality is that education is a public good that (4)___ everyone in society. Not only does education provide individuals with the skills and knowledge they need to participate in the workforce, but it also improves social cohesion and creates more (5)___ citizens.

SubQuestion No : 23

Q.23 Select the most appropriate option to fill in blank number 3.

- Ans 1. focus
 2. contentment
 3. burden
 4. blessing

Question ID : 264330153571

Option 1 ID : 264330601780

Option 2 ID : 264330601781

Option 3 ID : 264330601782

Option 4 ID : 264330601779

Status : Not Answered

Chosen Option : --

Comprehension:

In the following passage, some words have been deleted. Read the passage carefully and select the most appropriate option to fill in each blank.

Education should be free to all because it is a (1)___ human right. It is essential for the (2)___ of a fully functioning society and for the advancement of humanity. While some argue that education should not be free because it has value or that free education would be a (3)___ on taxpayers, the reality is that education is a public good that (4)___ everyone in society. Not only does education provide individuals with the skills and knowledge they need to participate in the workforce, but it also improves social cohesion and creates more (5)___ citizens.

SubQuestion No : 24

Q.24 Select the most appropriate option to fill in blank number 4.

- Ans
- 1. sections
 - 2. emphasises
 - 3. burdens
 - 4. benefits

Question ID : 264330153572

Option 1 ID : 264330601783

Option 2 ID : 264330601784

Option 3 ID : 264330601785

Option 4 ID : 264330601786

Status : Answered

Chosen Option : 4

Comprehension:

In the following passage, some words have been deleted. Read the passage carefully and select the most appropriate option to fill in each blank.

Education should be free to all because it is a (1)___ human right. It is essential for the (2)___ of a fully functioning society and for the advancement of humanity. While some argue that education should not be free because it has value or that free education would be a (3)___ on taxpayers, the reality is that education is a public good that (4)___ everyone in society. Not only does education provide individuals with the skills and knowledge they need to participate in the workforce, but it also improves social cohesion and creates more (5)___ citizens.

SubQuestion No : 25

Q.25 Select the most appropriate option to fill in blank number 5.

- Ans
- 1. easy going
 - 2. apprehensive
 - 3. productive
 - 4. authentic

Question ID : 264330153573

Option 1 ID : 264330601790

Option 2 ID : 264330601787

Option 3 ID : 264330601789

Option 4 ID : 264330601788

Status : Answered

Chosen Option : 4

Multi Tasking Non Technical Staff and Havaladar CBIC and CBN Examination 2023

Roll Number	
Candidate Name	
Venue Name	iON Digital Zone iDZ 2 Mathura Road
Exam Date	12/09/2023
Exam Time	4:00 PM - 6:00 PM
Subject	MTS Non Tech Havaladar CBIC and CBN Examination 2023

Section : Numerical and Mathematical Ability

Q.1 A seller marked the price of a sofa 25% more than its cost price. If he allows 12% discount on the marked price to the customer, then what is his gain percentage? If the cost price of the sofa is ₹15,000, then what is his gain money?

- Ans**
- 1. 9%; ₹1,480
 - 2. 8%; ₹1,350
 - 3. 10%; ₹1,500
 - 4. 9.5%; ₹1,600

Question ID : 264330156183

Option 1 ID : 264330612133

Option 2 ID : 264330612131

Option 3 ID : 264330612134

Option 4 ID : 264330612132

Status : **Not Attempted and Marked For Review**

Chosen Option : --

Q.2 Lucknow Shatabdi Express leaves Varanasi at 3:30 p.m. and reaches Lucknow at 8:30 p.m. on the same day. The average speed of the train is 140 km/h. What is the distance (in km) from Varanasi to Lucknow?

- Ans**
- 1. 725
 - 2. 675
 - 3. 750
 - 4. 700

Question ID : 264330156230

Option 1 ID : 264330612320

Option 2 ID : 264330612322

Option 3 ID : 264330612319

Option 4 ID : 264330612321

Status : **Answered**

Chosen Option : 4

Q.3 The time taken by a boat to cover a distance of x km upstream is double the time taken by the boat to cover the same distance downstream. The sum of the speeds of the boat and the stream is 90 km/h. The speed of the stream is _____ km/h.

- Ans**
- ✓ 1. 22.5
 - ✗ 2. 37.5
 - ✗ 3. 27.5
 - ✗ 4. 33.5

Question ID : 264330153813
 Option 1 ID : 264330602716
 Option 2 ID : 264330602717
 Option 3 ID : 264330602718
 Option 4 ID : 264330602715
 Status : Not Answered
 Chosen Option : --

Q.4 Find the volume of a cuboid whose dimensions are 34 m, 7 m and 4 m.

- Ans**
- ✓ 1. 952 m³
 - ✗ 2. 476 m³
 - ✗ 3. 238 m³
 - ✗ 4. 1904 m³

Question ID : 264330153896
 Option 1 ID : 264330603048
 Option 2 ID : 264330603049
 Option 3 ID : 264330603050
 Option 4 ID : 264330603047
 Status : Answered
 Chosen Option : 1

Q.5 What is the HCF of the polynomials $(x^3 - 8)$, $(x^3 - 6x^2 + 12x - 8)$ and $(x^3 - 4x^2 + 4x)$?

- Ans**
- ✗ 1. $(x - 1)$
 - ✓ 2. $(x - 2)$
 - ✗ 3. $(x - 8)$
 - ✗ 4. $(x - 4)$

Question ID : 264330156204
 Option 1 ID : 264330612215
 Option 2 ID : 264330612216
 Option 3 ID : 264330612218
 Option 4 ID : 264330612217
 Status : Answered
 Chosen Option : 2

Q.6 Aditya sold two bags for ₹630 each. On one bag he gains 33% and on the other he loses 33%. Find his gain or loss per cent on the whole transaction.

- Ans**
- 1. 12.37% gain
 - 2. 10.89% gain
 - 3. 10.89% loss
 - 4. 12.37% loss

Question ID : 264330155735
Option 1 ID : 264330610345
Option 2 ID : 264330610343
Option 3 ID : 264330610346
Option 4 ID : 264330610344
Status : Answered
Chosen Option : 3

Q.7 In a subject, there are 40 marks for practical and 110 marks for theory. In another subject, the practical marks are 60 and the theory marks are 40. If R gets an average mark of 40 in practical and an average mark of 60 in theory, then his average marks per subject are _____.

- Ans**
- 1. 80
 - 2. 60
 - 3. 100
 - 4. 40

Question ID : 264330153799
Option 1 ID : 264330602661
Option 2 ID : 264330602660
Option 3 ID : 264330602659
Option 4 ID : 264330602662
Status : Not Answered
Chosen Option : --

Q.8 If the average of 7, x , 13, 16 and 9 is 10, then the value of x is:

- Ans**
- 1. 4
 - 2. 6
 - 3. 8
 - 4. 5

Question ID : 264330155952
Option 1 ID : 264330611210
Option 2 ID : 264330611209
Option 3 ID : 264330611207
Option 4 ID : 264330611208
Status : Answered
Chosen Option : 4

Q.9 The simple interest on a certain sum at 10% per annum for two years and three years differ by ₹500. Find the sum.

- Ans**
- 1. ₹5,500
 - 2. ₹5,000
 - 3. ₹6,000
 - 4. ₹4,500

Question ID : 264330156560
 Option 1 ID : 264330613629
 Option 2 ID : 264330613628
 Option 3 ID : 264330613630
 Option 4 ID : 264330613627
 Status : Answered
 Chosen Option : 2

Q.10 Find a single discount equivalent to a discount series of 10%, 15% and 20%.

- Ans**
- 1. 39.20%
 - 2. 42.20%
 - 3. 38.80%
 - 4. 40.80%

Question ID : 264330156362
 Option 1 ID : 264330612849
 Option 2 ID : 264330612847
 Option 3 ID : 264330612850
 Option 4 ID : 264330612848
 Status : Answered
 Chosen Option : 3

Q.11 A steel sphere of radius 1 cm is melted and cast into a wire of diameter 4 mm, then the length of the wire is:

- Ans**
- 1. $31\frac{1}{3}$ cm
 - 2. $35\frac{1}{7}$ cm
 - 3. $37\frac{1}{7}$ cm
 - 4. $33\frac{1}{3}$ cm

Question ID : 264330154109
 Option 1 ID : 264330603899
 Option 2 ID : 264330603902
 Option 3 ID : 264330603901
 Option 4 ID : 264330603900
 Status : Not Answered
 Chosen Option : --

Q.12 A and B can do a piece of work in 10 days. B and C can do the same work in 15 days. If A is twice as good a workman as C, find in what time B alone can do the work (in days).

- Ans**
- 1. 10
 - 2. 25
 - 3. 20
 - 4. 30

Question ID : 264330156011
Option 1 ID : 264330611443
Option 2 ID : 264330611444
Option 3 ID : 264330611446
Option 4 ID : 264330611445
Status : Answered
Chosen Option : 4

Q.13 Study the given table and answer the question that follows.
The tables shows the number of pages printed by four printers in three days.

Days	Printers			
	M	N	O	P
Friday	880	885	877	898
Saturday	972	989	990	786
Sunday	980	790	782	690

If the total number of pages printed by all the given printers together on Monday was 15% more than the total number of pages printed by all the given printers together on Friday, then what was the total number of pages printed by all the given printers together on Monday?

- Ans**
- 1. 4071
 - 2. 4026
 - 3. 4580
 - 4. 4128

Question ID : 264330157908
Option 1 ID : 264330618992
Option 2 ID : 264330618994
Option 3 ID : 264330618991
Option 4 ID : 264330618993
Status : Not Answered
Chosen Option : --

Q.14 A sum of ₹15,000 was lent for 3 years at the rate of 4%, 5%, 6% per annum, respectively, at compound interest for the first year, second year and third year compounded annually. Find the compound interest for 3 years.

- Ans**
- 1. ₹2,380.60
 - 2. ₹2,382.60
 - 3. ₹2,362.80
 - 4. ₹2,380.80

Question ID : 264330153850
Option 1 ID : 264330602865
Option 2 ID : 264330602863
Option 3 ID : 264330602864
Option 4 ID : 264330602866
Status : Not Answered
Chosen Option : --

Q.15 In a class of 50 students, there are 30 girls who scored an average of 88 marks. If the class average is 78, what are the average marks of boys?

- Ans**
- 1. 72
 - 2. 63
 - 3. 80
 - 4. 83

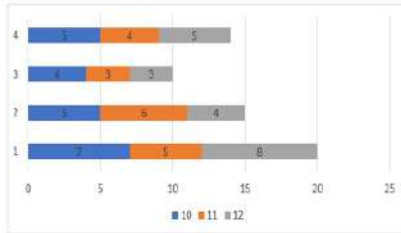
Question ID : **264330156468**
Option 1 ID : **264330613261**
Option 2 ID : **264330613262**
Option 3 ID : **264330613260**
Option 4 ID : **264330613259**
Status : **Answered**
Chosen Option : **2**

Q.16 The mean proportion between 17 and some unknown number is 51. What is the unknown number?

- Ans**
- 1. 17
 - 2. 153
 - 3. 51
 - 4. 151

Question ID : **264330154127**
Option 1 ID : **264330603973**
Option 2 ID : **264330603972**
Option 3 ID : **264330603971**
Option 4 ID : **264330603974**
Status : **Not Answered**
Chosen Option : **--**

Q.17 Consider the percentage of failed students in class 10, class 11 and class 12 in four different schools: 1, 2, 3 and 4 given in the bar graph.



The difference in the average percentage of failed students per class in school 1 and school 3 is _____.

- Ans
- 1. $\frac{11}{3}$
 - 2. $\frac{8}{3}$
 - 3. $\frac{13}{3}$
 - 4. $\frac{10}{3}$

Question ID : 264330153820

Option 1 ID : 264330602744

Option 2 ID : 264330602745

Option 3 ID : 264330602746

Option 4 ID : 264330602743

Status : Not Attempted and Marked For Review

Chosen Option : --

Q.18 The weight of a circular disc varies directly as the product of the square of the radius and its thickness. Two identical/similar discs have their thickness in the ratio of 16 : 9. What is the ratio of their radii if the weight of the first is four times that of the second?

- Ans
- 1. 3 : 2
 - 2. 2 : 3
 - 3. 1 : 2
 - 4. 2 : 1

Question ID : 264330153771

Option 1 ID : 264330602549

Option 2 ID : 264330602547

Option 3 ID : 264330602548

Option 4 ID : 264330602550

Status : Answered

Chosen Option : 1

Q.19 Simplify the following expression.

$$12 \times 6 \div [\{18 \div (6 - 3)\} - 3] + 6$$

- Ans
- 1. 96
 - 2. 84
 - 3. 20
 - 4. 30

Question ID : 264330155945
Option 1 ID : 264330611182
Option 2 ID : 264330611179
Option 3 ID : 264330611180
Option 4 ID : 264330611181
Status : Answered
Chosen Option : 4

Q.20 A certain number of men complete a piece of work in 60 days. If there were 8 more men called, then the work can be finished in 10 days less than usual. The number of men originally was:

- Ans
- 1. 40
 - 2. 30
 - 3. 60
 - 4. 50

Question ID : 264330156534
Option 1 ID : 264330613524
Option 2 ID : 264330613523
Option 3 ID : 264330613526
Option 4 ID : 264330613525
Status : Answered
Chosen Option : 1

Section : Reasoning Ability and Problem Solving

Q.1 Which figure should replace the question mark (?) if the following figure series were to be continued?

N	O	S	E	O	N	E	S	V	E	X	O	E	V	O	X	
	△				X				N			△				?
X		V	V			△	△		S	S			N			

Ans

✗ 1.

X	△	V	N
	O		
E			S

✗ 2.

X	O	△	N
	V		
E			S

✗ 3.

X	S	V	△
	E		
N			O

✓ 4.

S	O	△	E
	V		
N			X

Question ID : 264330154739

Option 1 ID : 264330606421

Option 2 ID : 264330606422

Option 3 ID : 264330606420

Option 4 ID : 264330606419

Status : Answered

Chosen Option : 4

Q.2 What should come in place of ? in the given series?

92 91 87 78 62 ?

Ans ✓ 1. 37

✗ 2. 38

✗ 3. 35

✗ 4. 36

Question ID : 264330151558

Option 1 ID : 264330593861

Option 2 ID : 264330593862

Option 3 ID : 264330593859

Option 4 ID : 264330593860

Status : Answered

Chosen Option : 1

Q.3 Read the given statements and conclusions carefully. You have to take the given statements to be true even if they seem to be at variance from commonly known facts. You have to decide which conclusion/s logically follow/s from the given statements.

Statements: All clay is metal. Some metal are bricks. All bricks are tablets.

Conclusion I: Some clay are bricks.

Conclusion II: All metal are tablets.

- Ans**
- 1. Both conclusions (I) and (II) are follow.
 - 2. Only conclusion (II) is follow.
 - 3. Neither conclusion (I) nor (II) is follow.
 - 4. Only conclusion (I) is follow.

Question ID : 264330155934

Option 1 ID : 264330611142

Option 2 ID : 264330611140

Option 3 ID : 264330611141

Option 4 ID : 264330611139

Status : Answered

Chosen Option : 4

Q.4 In a certain code language, 'just do it' is coded as 'ct ns kw' and 'do your best' is coded as 'mb kw du'. How is 'do' coded in the given language?

- Ans**
- 1. ns
 - 2. ct
 - 3. kw
 - 4. mb

Question ID : 264330151698

Option 1 ID : 264330594421

Option 2 ID : 264330594422

Option 3 ID : 264330594419

Option 4 ID : 264330594420

Status : Answered

Chosen Option : 3

Q.5 78 is related to 69 following a certain logic. Following the same logic, 57 is related to 48. To which of the following is 94 related to, following the same logic?

- Ans**
- 1. 83
 - 2. 85
 - 3. 82
 - 4. 84

Question ID : 264330151603

Option 1 ID : 264330594040

Option 2 ID : 264330594042

Option 3 ID : 264330594039

Option 4 ID : 264330594041

Status : Answered

Chosen Option : 2

Q.6 What should come in place of ? in the given series?

124 114 104 94 84 ?

- Ans
- 1. 72
 - 2. 73
 - 3. 71
 - 4. 74

Question ID : 264330151551
 Option 1 ID : 264330593832
 Option 2 ID : 264330593833
 Option 3 ID : 264330593831
 Option 4 ID : 264330593834
 Status : Answered
 Chosen Option : 4

Q.7 What will come in the place of '?' in the following equation, if '+' and '-' are interchanged and 'x' and '+' are interchanged?

$$105 \times 7 + 43 - 37 + 3 = ?$$

- Ans
- 1. 53
 - 2. 83
 - 3. 73
 - 4. 63

Question ID : 264330155666
 Option 1 ID : 264330610070
 Option 2 ID : 264330610069
 Option 3 ID : 264330610068
 Option 4 ID : 264330610067
 Status : Answered
 Chosen Option : 3

Q.8 Read the given statement(s) and conclusions carefully. Assuming that the information given in the statements is true, even if it appears to be at variance with commonly known facts, decide which of the given conclusions logically follow(s) from the statement(s).

Statements: All cars are cats. All fans are cats.

Conclusions:

(I) All cars are fans.

(II) Some fans are cars.

- Ans
- 1. Only conclusion (I) is follows.
 - 2. Only conclusion (II) is follows.
 - 3. Neither conclusion (I) nor (II) is follows.
 - 4. Both conclusions (I) and (II) are follows.

Question ID : 264330154430
 Option 1 ID : 264330605183
 Option 2 ID : 264330605184
 Option 3 ID : 264330605185
 Option 4 ID : 264330605186
 Status : Answered
 Chosen Option : 3

Q.9 In the following number-pairs, the second number is obtained by applying certain mathematical operations to the first number. Select the set in which the numbers are related in the same way as are the numbers of the following sets.
(NOTE: Operations should be performed on the whole numbers, without breaking down the numbers into its constituent digits. E.g. 13 – Operations on 13 such as adding /deleting /multiplying etc. to 13 can be performed. Breaking down 13 into 1 and 3 and then performing mathematical operations on 1 and 3 is not allowed)
12 : 44
8 : 28

- Ans**
- ✓ 1. 9 : 32
 - ✗ 2. 7 : 28
 - ✗ 3. 15 : 35
 - ✗ 4. 10 : 38

Question ID : 264330154645
Option 1 ID : 264330606046
Option 2 ID : 264330606043
Option 3 ID : 264330606045
Option 4 ID : 264330606044
Status : Answered
Chosen Option : 4

Q.10 What should come in place of ? in the given series based on the English alphabetical order?

EVO, HSR, KPU, NMX, ?

- Ans**
- ✗ 1. RIC
 - ✗ 2. PHB
 - ✓ 3. QJA
 - ✗ 4. PIB

Question ID : 264330155797
Option 1 ID : 264330610591
Option 2 ID : 264330610593
Option 3 ID : 264330610594
Option 4 ID : 264330610592
Status : Answered
Chosen Option : 3

Q.11 What should come in place of ? in the given series based on the English alphabetical order?

MCT, JEU, GGV, DIW, ?

- Ans**
- ✗ 1. CJY
 - ✗ 2. BKZ
 - ✗ 3. BIY
 - ✓ 4. AKX

Question ID : 264330155804
Option 1 ID : 264330610619
Option 2 ID : 264330610622
Option 3 ID : 264330610620
Option 4 ID : 264330610621
Status : Answered
Chosen Option : 4

Q.12 DTGB is related to FVID in a certain way based on the English alphabetical order. In the same way, VRCK is related to XTEM. To which of the following is JAHM related to, following the same logic?

- Ans**
- 1. KBJP
 - 2. LDKO
 - 3. MCKP
 - 4. LCJO

Question ID : 264330151661
Option 1 ID : 264330594273
Option 2 ID : 264330594274
Option 3 ID : 264330594271
Option 4 ID : 264330594272
Status : Answered
Chosen Option : 4

Q.13 What will come in the place of the question mark (?) in the following equation, if '+' and '-' are interchanged and '×' and '÷' are interchanged?

$$29 + 6 + 5 - 98 \times 2 = ?$$

- Ans**
- 1. 217
 - 2. 219
 - 3. 218
 - 4. 220

Question ID : 264330154617
Option 1 ID : 264330605931
Option 2 ID : 264330605933
Option 3 ID : 264330605932
Option 4 ID : 264330605934
Status : Answered
Chosen Option : 3

Q.14 A, B, C, D, E, F, G and H are sitting around a square table facing the center of the table. Some of them are sitting at the corners while some are sitting at the exact center of the sides. H sits third to the left of B. H does not sit in any of the corners. C sits third to the right of F. C sits in one of the corners. H is the immediate neighbour of D and E. A is not the neighbour of B. E sits immediate next to A.

How many people sit between A and H, when counted from the left of A?

- Ans**
- 1. Three
 - 2. Six
 - 3. Four
 - 4. Five

Question ID : 264330155538
Option 1 ID : 264330609555
Option 2 ID : 264330609558
Option 3 ID : 264330609556
Option 4 ID : 264330609557
Status : Answered
Chosen Option : 4

Q.15 In a certain code language, 'TOP' is coded as '22-17-18' and 'BIZ' is coded as '4-11-28'. What is the code for 'MAR' in the given code language?

- Ans**
- 1. 15-5-21
 - 2. 16-5-20
 - 3. 14-4-21
 - 4. 15-3-20

Question ID : 264330155824
Option 1 ID : 264330610701
Option 2 ID : 264330610702
Option 3 ID : 264330610700
Option 4 ID : 264330610699
Status : Answered
Chosen Option : 4

Q.16 Select the option figure in which the given figure (X) is embedded as its part (rotation is NOT allowed).



(X)

Ans

- 1.
- 2.
- 3.
- 4.

Question ID : 264330151727
Option 1 ID : 264330594535
Option 2 ID : 264330594538
Option 3 ID : 264330594536
Option 4 ID : 264330594537
Status : Answered
Chosen Option : 4

Q.17 What should come in place of ? in the given series?

15 26 48 81 125 ?

- Ans
- 1. 155
 - 2. 180
 - 3. 169
 - 4. 194

Question ID : 264330151716
 Option 1 ID : 264330594493
 Option 2 ID : 264330594492
 Option 3 ID : 264330594491
 Option 4 ID : 264330594494
 Status : Answered
 Chosen Option : 2

Q.18 The position of how many letters will remain unchanged if each of the letters in the word COMPUTER is arranged in alphabetical order?

- Ans
- 1. two
 - 2. none
 - 3. one
 - 4. three

Question ID : 264330156444
 Option 1 ID : 264330613169
 Option 2 ID : 264330613167
 Option 3 ID : 264330613168
 Option 4 ID : 264330613170
 Status : Answered
 Chosen Option : 1

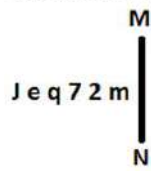
Q.19 Select the combination of letters that when sequentially placed in the blanks of the given series, will complete the series.

BA _ B _ B _ _ BB _ B

- Ans
- 1. ABABB
 - 2. AABAB
 - 3. BABAA
 - 4. BAABB

Question ID : 264330151637
 Option 1 ID : 264330594177
 Option 2 ID : 264330594176
 Option 3 ID : 264330594178
 Option 4 ID : 264330594175
 Status : Answered
 Chosen Option : 3

Q.20 Select the correct mirror image of the given figure when the mirror is placed at MN as shown below.



- Ans
- 1. $\omega \zeta \Gamma b \theta l$
 - 2. $m \zeta \Gamma p \theta l$
 - 3. $m \zeta 7 p \theta J$
 - 4. $m 7 2 p e l$

Question ID : 264330151511

Option 1 ID : 264330593673

Option 2 ID : 264330593671

Option 3 ID : 264330593672

Option 4 ID : 264330593674

Status : Answered

Chosen Option : 2

Section : General Awareness

Q.1 Instituted in 1984, the National-level Lata Mangeshkar Award is given to promote excellence in the area of light music annually by the _____ government's culture department.

- Ans
- 1. Madhya Pradesh
 - 2. Rajasthan
 - 3. Karnataka
 - 4. Goa

Question ID : 264330155468

Option 1 ID : 264330609277

Option 2 ID : 264330609278

Option 3 ID : 264330609275

Option 4 ID : 264330609276

Status : Answered

Chosen Option : 2

Q.2 The Sakraat festival is celebrated with the 'Budigali' or 'Kalasi' dance in _____, where women take part in this dance, carrying decorative pots on their heads.

- Ans
- 1. Odisha
 - 2. Nagaland
 - 3. Madhya Pradesh
 - 4. Manipur

Question ID : 264330160801

Option 1 ID : 264330630536

Option 2 ID : 264330630538

Option 3 ID : 264330630537

Option 4 ID : 264330630535

Status : Answered

Chosen Option : 1

Q.3 The National Social Assistance Programme (NSAP) is a welfare programme being administered by which Ministry of Government of India?

- Ans
- 1. Ministry of Tribal Affairs
 - 2. Ministry of Home Affairs
 - 3. Ministry of Agriculture and Farmers Welfare
 - 4. Ministry of Rural Development

Question ID : 264330161570
Option 1 ID : 264330633610
Option 2 ID : 264330633608
Option 3 ID : 264330633607
Option 4 ID : 264330633609
Status : Answered
Chosen Option : 4

Q.4 What is the main source of income for commercial banks?

- Ans
- 1. Donations from customers
 - 2. Profits from stock market investments
 - 3. Government grants
 - 4. Interest earned on loans and advances

Question ID : 264330157308
Option 1 ID : 264330616596
Option 2 ID : 264330616598
Option 3 ID : 264330616595
Option 4 ID : 264330616597
Status : Answered
Chosen Option : 4

Q.5 The Taj Mahal was built by:

- Ans
- 1. Humayun
 - 2. Jahangir
 - 3. Akbar
 - 4. Shah Jahan

Question ID : 264330160768
Option 1 ID : 264330630403
Option 2 ID : 264330630404
Option 3 ID : 264330630405
Option 4 ID : 264330630406
Status : Answered
Chosen Option : 4

Q.6 Who among the following made Ganesh Chaturthi popular as a public celebration in Maharashtra?

- Ans
- 1. Lokmanya Bal Gangadhar Tilak
 - 2. Khudiram Bose
 - 3. Vinayak Damodar Savarkar
 - 4. Lala Lajpat Rai

Question ID : 264330160828
Option 1 ID : 264330630644
Option 2 ID : 264330630643
Option 3 ID : 264330630646
Option 4 ID : 264330630645
Status : Answered
Chosen Option : 3

Q.7 Which country's Constitution was the inspiration behind the Directive Principles of the Indian Constitution?

- Ans
- 1. The Constitution of Australia
 - 2. The Constitution of the United States
 - 3. The Constitution of the United Kingdom
 - 4. The Constitution of Ireland

Question ID : 264330162252
Option 1 ID : 264330636338
Option 2 ID : 264330636335
Option 3 ID : 264330636336
Option 4 ID : 264330636337
Status : Answered
Chosen Option : 4

Q.8 When one stone is thrown upwards, what type of energy conversion would occur?

- Ans
- 1. Kinetic energy would change to mechanical energy
 - 2. Potential energy would change to gravitational energy
 - 3. Mechanical energy would change to kinetic energy
 - 4. Kinetic energy would change to gravitational potential energy

Question ID : 264330156581
Option 1 ID : 264330613711
Option 2 ID : 264330613713
Option 3 ID : 264330613712
Option 4 ID : 264330613714
Status : Answered
Chosen Option : 4

Q.9 Lack of functional small intestine can cause a malabsorption disorder leading to diarrhoea, malnutrition, weight loss etc. This particular condition is known as:

- Ans
- 1. Down syndrome
 - 2. short bowel syndrome
 - 3. hypoglycaemia
 - 4. hyperglycaemia

Question ID : 264330156613
Option 1 ID : 264330613840
Option 2 ID : 264330613839
Option 3 ID : 264330613842
Option 4 ID : 264330613841
Status : Not Answered
Chosen Option : --

Q.10 In December 2022, Government of India launched Grih Pravesh scheme. This scheme aims to provide benefits to the residents of ____ areas.

- Ans
- 1. only urban
 - 2. only rural
 - 3. only tribal
 - 4. both rural and urban

Question ID : 264330158324
Option 1 ID : 264330620656
Option 2 ID : 264330620655
Option 3 ID : 264330620657
Option 4 ID : 264330620658
Status : Answered
Chosen Option : 4

Q.11 Indian Industrialists reacted against colonial policies that restricted business activities and formed an organisation in 1927. What was it called?

- Ans
- 1. Indian Industrial and Commercial Congress(IICC)
 - 2. Organization of Industries of India (OII)
 - 3. Federation of the Indian Chamber of Commerce and Industries (FICCI)
 - 4. Confederation of Indian Industries (CII)

Question ID : 264330161742
Option 1 ID : 264330634295
Option 2 ID : 264330634296
Option 3 ID : 264330634298
Option 4 ID : 264330634297
Status : Not Answered
Chosen Option : --

Q.12 Who founded the All-India Forward Bloc Party?

- Ans
- 1. Chandra Shekar Azad
 - 2. Bhagat Singh
 - 3. Rasbehari Bose
 - 4. Subhas Chandra Bose

Question ID : 264330162330
Option 1 ID : 264330636648
Option 2 ID : 264330636647
Option 3 ID : 264330636650
Option 4 ID : 264330636649
Status : Answered
Chosen Option : 4

Q.13 The Constitution allows _____ maximum members in Lok Sabha as of June 2023.

- Ans
- 1. 546
 - 2. 550
 - 3. 545
 - 4. 543

Question ID : 264330160864
Option 1 ID : 264330630789
Option 2 ID : 264330630790
Option 3 ID : 264330630788
Option 4 ID : 264330630787
Status : Answered
Chosen Option : 2

Q.14 Which of the following novels is based on the partition of India and was written by Khushwant Singh?

- Ans
- 1. The Great Indian Novel
 - 2. Untouchables
 - 3. Narcopolis
 - 4. Train to Pakistan

Question ID : 264330161760
Option 1 ID : 264330634369
Option 2 ID : 264330634368
Option 3 ID : 264330634370
Option 4 ID : 264330634367
Status : Answered
Chosen Option : 4

Q.15 Which institution mainly provides financial assistance and support to microfinance institutions in India?

- Ans
- 1. Department of Economic Affairs (DEA)
 - 2. Ministry of Corporate Affairs
 - 3. Indian Banks' Association (IBA)
 - 4. Small Industries Development Bank of India (SIDBI)

Question ID : 264330157295
Option 1 ID : 264330616546
Option 2 ID : 264330616545
Option 3 ID : 264330616544
Option 4 ID : 264330616543
Status : Answered
Chosen Option : 4

Q.16 Mango showers are associated with which two states?

- Ans
- 1. Kerala and Karnataka
 - 2. Uttar Pradesh and Bihar
 - 3. Kerala and Andhra Pradesh
 - 4. Andhra Pradesh and Karnataka

Question ID : 264330160146
Option 1 ID : 264330627926
Option 2 ID : 264330627925
Option 3 ID : 264330627923
Option 4 ID : 264330627924
Status : Not Answered
Chosen Option : --

Q.17 The Padma Shri awardee (2016) Gulabo Sapera is known as the Queen of _____ dance.

- Ans
- 1. Chari
 - 2. Bhavai
 - 3. Kalbeliya
 - 4. Kacchi Ghodi

Question ID : 264330155524
Option 1 ID : 264330609501
Option 2 ID : 264330609500
Option 3 ID : 264330609499
Option 4 ID : 264330609502
Status : Answered
Chosen Option : 3

Q.18 Who among the following is the author of the novel 'Untouchable'?

- Ans
- 1. Mulik Raj Anand
 - 2. Salman Rushdie
 - 3. Vikram Seth
 - 4. Amitav Ghosh

Question ID : 264330155453
Option 1 ID : 264330609217
Option 2 ID : 264330609218
Option 3 ID : 264330609215
Option 4 ID : 264330609216
Status : Answered
Chosen Option : 2

Q.19 Lachhu Maharaj is a celebrated _____ dancer.

- Ans
- 1. Kuchipudi
 - 2. Bharatnatyam
 - 3. Odissi
 - 4. Kathak

Question ID : 264330159067
Option 1 ID : 264330623628
Option 2 ID : 264330623627
Option 3 ID : 264330623630
Option 4 ID : 264330623629
Status : Answered
Chosen Option : 4

Q.20 What is the name of the mascot for the 37th National Games?

- Ans
- 1. Jelly
 - 2. Pandi
 - 3. Olly
 - 4. Moga

Question ID : 264330161138
Option 1 ID : 264330631884
Option 2 ID : 264330631886
Option 3 ID : 264330631885
Option 4 ID : 264330631883
Status : Not Answered
Chosen Option : --

Q.21 Ustad Allah Rakha and Ustad Zakir Hussain are both famous _____ players of India.

- Ans
- 1. veena
 - 2. bansuri
 - 3. tabla
 - 4. sarangi

Question ID : 264330155505
Option 1 ID : 264330609424
Option 2 ID : 264330609425
Option 3 ID : 264330609423
Option 4 ID : 264330609426
Status : Answered
Chosen Option : 3

Q.22 Manika Batra won bronze medal in Asian Cup tournament. She is related to which sport?

- Ans
- 1. Judo
 - 2. Chess
 - 3. Table Tennis
 - 4. Gymnastic

Question ID : 264330158371
Option 1 ID : 264330620846
Option 2 ID : 264330620845
Option 3 ID : 264330620843
Option 4 ID : 264330620844
Status : Answered
Chosen Option : 3

Q.23 What is the name of the geographic feature that serves as a boundary between India and Sri Lanka?

- Ans
- 1. Strait of Gibraltar
 - 2. Dardanelles Strait
 - 3. Bosporus Strait
 - 4. Palk Strait

Question ID : 264330161328
Option 1 ID : 264330632641
Option 2 ID : 264330632642
Option 3 ID : 264330632639
Option 4 ID : 264330632640
Status : Answered
Chosen Option : 4

Q.24 FIFA U-17 Women's World Cup 2022 final was held in which city?

- Ans
- 1. Margo
 - 2. Navi Mumbai
 - 3. Bhubaneswar
 - 4. Ahmedabad

Question ID : 264330158224
Option 1 ID : 264330620257
Option 2 ID : 264330620255
Option 3 ID : 264330620256
Option 4 ID : 264330620258
Status : Answered
Chosen Option : 4

Q.25 The Tata Iron and Steel Company Limited (TISCO) was started in the year _____ at Sakchi in Jharkhand state.

- Ans 1. 1989
 2. 1907
 3. 1951
 4. 1975

Question ID : 264330161514
Option 1 ID : 264330633385
Option 2 ID : 264330633383
Option 3 ID : 264330633384
Option 4 ID : 264330633386
Status : Answered
Chosen Option : 2

Section : English Language and Comprehension

Q.1 The following sentence has been split into four segments. Identify the segment that contains a grammatical error.
By the time I turn thirty / I would had visited every / continent in the world and have gained / a wealth of knowledge and experience.

- Ans 1. By the time I turn thirty
 2. a wealth of knowledge and experience
 3. I would had visited every
 4. continent in the world and have gained

Question ID : 264330144177
Option 1 ID : 264330564971
Option 2 ID : 264330564974
Option 3 ID : 264330564972
Option 4 ID : 264330564973
Status : Answered
Chosen Option : 1

Q.2 The following sentence has been divided into four parts. Identify the part that contains an error.
(A) It is a / (B) state of chaos / (C) since the / (D) chairman resigned.

- Ans 1. D
 2. A
 3. B
 4. C

Question ID : 264330152624
Option 1 ID : 264330598099
Option 2 ID : 264330598102
Option 3 ID : 264330598101
Option 4 ID : 264330598100
Status : Answered
Chosen Option : 2

Q.3 Select the most appropriate meaning of the given idiom.

The apple of one's eye

- Ans
- 1. Very cheerful
 - 2. Very dear
 - 3. Very nice
 - 4. Very pleasing

Question ID : 264330155393
Option 1 ID : 264330608985
Option 2 ID : 264330608983
Option 3 ID : 264330608984
Option 4 ID : 264330608986
Status : Answered
Chosen Option : 2

Q.4 Select the most appropriate ANTONYM of the given word.
Harmony

- Ans
- 1. Adaptability
 - 2. Clarity
 - 3. Unity
 - 4. Conflict

Question ID : 264330152743
Option 1 ID : 264330598571
Option 2 ID : 264330598574
Option 3 ID : 264330598572
Option 4 ID : 264330598573
Status : Answered
Chosen Option : 4

Q.5 Select the most appropriate option that can substitute the underlined segment in the given sentence.
Pandemics have often been caused by a disease that spreads by physical touch or contact.

- Ans
- 1. are contagious
 - 2. are vigorous
 - 3. are robust
 - 4. are fastidious

Question ID : 264330153386
Option 1 ID : 264330601089
Option 2 ID : 264330601090
Option 3 ID : 264330601088
Option 4 ID : 264330601087
Status : Answered
Chosen Option : 1

Q.6 Select the most appropriate meaning of the underlined idiom in the given sentence.
The two neighbours will probably stop fighting when pigs fly.

- Ans
- 1. When their families meet
 - 2. When there is magic
 - 3. Something that is impossible
 - 4. When it rains

Question ID : 264330161581
Option 1 ID : 264330633654
Option 2 ID : 264330633651
Option 3 ID : 264330633653
Option 4 ID : 264330633652
Status : Answered
Chosen Option : 2

Q.7 Select the most appropriate option to fill in the blank.

Her dedication to her work was _____ what anyone had expected.

- Ans
- 1. over
 - 2. beyond
 - 3. beside
 - 4. through

Question ID : 264330151862
Option 1 ID : 264330595069
Option 2 ID : 264330595070
Option 3 ID : 264330595068
Option 4 ID : 264330595067
Status : Answered
Chosen Option : 2

Q.8 There is a spelling error in the given sentence. Select the option that contains the INCORRECTLY spelt word.
He was in despare because of the expiry of his licence.

- Ans
- 1. expiry
 - 2. because
 - 3. licence
 - 4. despare

Question ID : 264330152838
Option 1 ID : 264330598945
Option 2 ID : 264330598944
Option 3 ID : 264330598946
Option 4 ID : 264330598943
Status : Answered
Chosen Option : 4

Q.9 Select the most appropriate ANTONYM of the given word.
Demolish

- Ans
- 1. Invite
 - 2. Criticise
 - 3. Construct
 - 4. Appreciate

Question ID : 264330152742
Option 1 ID : 264330598568
Option 2 ID : 264330598569
Option 3 ID : 264330598567
Option 4 ID : 264330598570
Status : Answered
Chosen Option : 3

Q.10 Parts of the following sentence have been given as options. Select the option that contains an error.
Tushar is junior than all his colleagues.

- Ans
- 1. junior than all
 - 2. is
 - 3. Tushar
 - 4. his colleagues

Question ID : 264330152800
Option 1 ID : 264330598793
Option 2 ID : 264330598792
Option 3 ID : 264330598791
Option 4 ID : 264330598794
Status : Answered
Chosen Option : 1

Q.11 Select the most appropriate synonym of the given word.
Enchanted

- Ans
- 1. Disgusted
 - 2. Cursed
 - 3. Appealing
 - 4. Repelling

Question ID : 264330152594
Option 1 ID : 264330597979
Option 2 ID : 264330597980
Option 3 ID : 264330597981
Option 4 ID : 264330597982
Status : Answered
Chosen Option : 3

Q.12 Select the most appropriate meaning of the given idiom.
By the skin of your teeth

- Ans 1. By a very narrow margin
 2. To be less affected by criticisms and rebuffs
 3. Very protective
 4. Saved by others

Question ID : 264330155284
Option 1 ID : 264330608582
Option 2 ID : 264330608579
Option 3 ID : 264330608581
Option 4 ID : 264330608580
Status : Answered
Chosen Option : 3

Q.13 The following sentence has been divided into four parts. Identify the part that contains an error.
(A) One of / (B) my brothers write / (C) novels for / (D) leisure.

- Ans 1. D
 2. A
 3. B
 4. C

Question ID : 264330152617
Option 1 ID : 264330598073
Option 2 ID : 264330598071
Option 3 ID : 264330598074
Option 4 ID : 264330598072
Status : Answered
Chosen Option : 3

Q.14 The following sentence has been split into four segments. Identify the segment that contains a grammatical error.

Henry is known / as an excellent writer / and good communicator / in English.

- Ans 1. as an excellent writer
 2. in English
 3. Henry is known
 4. and good communicator

Question ID : 264330155413
Option 1 ID : 264330609060
Option 2 ID : 264330609062
Option 3 ID : 264330609059
Option 4 ID : 264330609061
Status : Answered
Chosen Option : 2

Q.15 Select the option that can be used as a one-word substitute for the given group of words.

The arrangement of events or dates in the order of their occurrence

- Ans
- 1. Chronology
 - 2. Theology
 - 3. Entomology
 - 4. Psychology

Question ID : 264330152773
Option 1 ID : 264330598685
Option 2 ID : 264330598684
Option 3 ID : 264330598686
Option 4 ID : 264330598683
Status : Answered
Chosen Option : 1

Q.16 Choose the most appropriate meaning of the underlined idiom in the given sentence.

As soon as Rohan learned that he had topped the examination, he was on cloud nine.

- Ans
- 1. Very tense
 - 2. Very sad
 - 3. Very happy
 - 4. Very confused

Question ID : 264330153324
Option 1 ID : 264330600852
Option 2 ID : 264330600853
Option 3 ID : 264330600851
Option 4 ID : 264330600854
Status : Answered
Chosen Option : 3

Q.17 Select the most appropriate option that can substitute the underlined segment in the following sentence.

His research on the migratory patterns of the birds is run-of-the-mill.

- Ans
- 1. absurd
 - 2. one in a million
 - 3. trash
 - 4. average

Question ID : 264330152634
Option 1 ID : 264330598142
Option 2 ID : 264330598140
Option 3 ID : 264330598141
Option 4 ID : 264330598139
Status : Answered
Chosen Option : 3

Q.18 Select the option that rectifies the spelling of the underlined word in the given sentence.

The politician gauranteed that he would create jobs if elected.

- Ans
- 1. gurranted
 - 2. gauaranteed
 - 3. guarranteed
 - 4. guaranteed

Question ID : 264330153227
Option 1 ID : 264330600468
Option 2 ID : 264330600470
Option 3 ID : 264330600469
Option 4 ID : 264330600467
Status : Answered
Chosen Option : 1

Q.19 Select the most appropriate option to fill in the blank.
The old man distributed his property _____ his ten grandchildren equally.

- Ans
- 1. within
 - 2. among
 - 3. towards
 - 4. between

Question ID : 264330152731
Option 1 ID : 264330598525
Option 2 ID : 264330598524
Option 3 ID : 264330598526
Option 4 ID : 264330598523
Status : Answered
Chosen Option : 4

Q.20 Select the INCORRECTLY spelt word.

- Ans
- 1. Paraphernalia
 - 2. Handkerchiefs
 - 3. Conjuror
 - 4. Indispensible

Question ID : 264330152962
Option 1 ID : 264330599425
Option 2 ID : 264330599424
Option 3 ID : 264330599423
Option 4 ID : 264330599426
Status : Answered
Chosen Option : 1

Comprehension:

In the following passage, some words have been deleted. Read the passage carefully and select the most appropriate option to fill in each blank.

Medical hand practices have been an integral part of healthcare for centuries, but with technological advancements, machines are (1)_____ taking over. Robotic surgeries, for instance, have become increasingly popular, allowing surgeons to perform complex (2)_____ with minimal invasive techniques. Machine learning and artificial intelligence have transformed medical diagnosis by analysing large amounts of patient data and providing highly detailed medical images. However, there are still challenges to overcome in the use of these technologies in healthcare. For example, the cost of purchasing and maintaining medical machines can be high, and there are concerns around the ethical use of AI in medicine. Nonetheless, it is clear that medical hand practices are (3)_____ to machines, and these developments have the potential to revolutionise the healthcare industry. Additionally, the use of telemedicine and remote monitoring devices allows patients to receive medical care from the (4)_____ of their homes, particularly beneficial for those in rural or remote areas. Furthermore, medical machines provide healthcare professionals with real-time information, (5)_____ them to make informed decisions and adjust treatment plans accordingly.

SubQuestion No : 21

Q.21 Select the most appropriate option to fill in blank no. 1.

- Ans
- 1. sincerely
 - 2. partially
 - 3. gradually
 - 4. deliberately

Question ID : 264330153645
 Option 1 ID : 264330602050
 Option 2 ID : 264330602047
 Option 3 ID : 264330602048
 Option 4 ID : 264330602049
 Status : Answered
 Chosen Option : 3

Comprehension:

In the following passage, some words have been deleted. Read the passage carefully and select the most appropriate option to fill in each blank.

Medical hand practices have been an integral part of healthcare for centuries, but with technological advancements, machines are (1)_____ taking over. Robotic surgeries, for instance, have become increasingly popular, allowing surgeons to perform complex (2)_____ with minimal invasive techniques. Machine learning and artificial intelligence have transformed medical diagnosis by analysing large amounts of patient data and providing highly detailed medical images. However, there are still challenges to overcome in the use of these technologies in healthcare. For example, the cost of purchasing and maintaining medical machines can be high, and there are concerns around the ethical use of AI in medicine. Nonetheless, it is clear that medical hand practices are (3)_____ to machines, and these developments have the potential to revolutionise the healthcare industry. Additionally, the use of telemedicine and remote monitoring devices allows patients to receive medical care from the (4)_____ of their homes, particularly beneficial for those in rural or remote areas. Furthermore, medical machines provide healthcare professionals with real-time information, (5)_____ them to make informed decisions and adjust treatment plans accordingly.

SubQuestion No : 22

Q.22 Select the most appropriate option to fill in blank no. 2.

- Ans
- 1. therapies
 - 2. diagnosis
 - 3. analysis
 - 4. procedures

Question ID : 264330153646
 Option 1 ID : 264330602053
 Option 2 ID : 264330602051
 Option 3 ID : 264330602052
 Option 4 ID : 264330602054
 Status : Answered
 Chosen Option : 1

Comprehension:

In the following passage, some words have been deleted. Read the passage carefully and select the most appropriate option to fill in each blank.

Medical hand practices have been an integral part of healthcare for centuries, but with technological advancements, machines are (1)_____ taking over. Robotic surgeries, for instance, have become increasingly popular, allowing surgeons to perform complex (2)_____ with minimal invasive techniques. Machine learning and artificial intelligence have transformed medical diagnosis by analysing large amounts of patient data and providing highly detailed medical images. However, there are still challenges to overcome in the use of these technologies in healthcare. For example, the cost of purchasing and maintaining medical machines can be high, and there are concerns around the ethical use of AI in medicine. Nonetheless, it is clear that medical hand practices are (3)_____ to machines, and these developments have the potential to revolutionise the healthcare industry. Additionally, the use of telemedicine and remote monitoring devices allows patients to receive medical care from the (4)_____ of their homes, particularly beneficial for those in rural or remote areas. Furthermore, medical machines provide healthcare professionals with real-time information, (5) _____ them to make informed decisions and adjust treatment plans accordingly.

SubQuestion No : 23

Q.23 Select the most appropriate option to fill in blank no. 3.

- Ans 1. diminishing
 2. evolving
 3. depleting
 4. stagnating

Question ID : 264330153647
 Option 1 ID : 264330602056
 Option 2 ID : 264330602057
 Option 3 ID : 264330602055
 Option 4 ID : 264330602058
 Status : Not Answered
 Chosen Option : --

Comprehension:

In the following passage, some words have been deleted. Read the passage carefully and select the most appropriate option to fill in each blank.

Medical hand practices have been an integral part of healthcare for centuries, but with technological advancements, machines are (1)_____ taking over. Robotic surgeries, for instance, have become increasingly popular, allowing surgeons to perform complex (2)_____ with minimal invasive techniques. Machine learning and artificial intelligence have transformed medical diagnosis by analysing large amounts of patient data and providing highly detailed medical images. However, there are still challenges to overcome in the use of these technologies in healthcare. For example, the cost of purchasing and maintaining medical machines can be high, and there are concerns around the ethical use of AI in medicine. Nonetheless, it is clear that medical hand practices are (3)_____ to machines, and these developments have the potential to revolutionise the healthcare industry. Additionally, the use of telemedicine and remote monitoring devices allows patients to receive medical care from the (4)_____ of their homes, particularly beneficial for those in rural or remote areas. Furthermore, medical machines provide healthcare professionals with real-time information, (5) _____ them to make informed decisions and adjust treatment plans accordingly.

SubQuestion No : 24

Q.24 Select the most appropriate option to fill in blank no. 4.

- Ans 1. locality
 2. comfort
 3. range
 4. inconvenience

Question ID : 264330153648
 Option 1 ID : 264330602061
 Option 2 ID : 264330602059
 Option 3 ID : 264330602062
 Option 4 ID : 264330602060
 Status : Answered
 Chosen Option : 1

Comprehension:

In the following passage, some words have been deleted. Read the passage carefully and select the most appropriate option to fill in each blank.

Medical hand practices have been an integral part of healthcare for centuries, but with technological advancements, machines are (1)_____ taking over. Robotic surgeries, for instance, have become increasingly popular, allowing surgeons to perform complex (2)_____ with minimal invasive techniques. Machine learning and artificial intelligence have transformed medical diagnosis by analysing large amounts of patient data and providing highly detailed medical images. However, there are still challenges to overcome in the use of these technologies in healthcare. For example, the cost of purchasing and maintaining medical machines can be high, and there are concerns around the ethical use of AI in medicine. Nonetheless, it is clear that medical hand practices are (3)_____ to machines, and these developments have the potential to revolutionise the healthcare industry. Additionally, the use of telemedicine and remote monitoring devices allows patients to receive medical care from the (4)_____ of their homes, particularly beneficial for those in rural or remote areas. Furthermore, medical machines provide healthcare professionals with real-time information, (5) _____ them to make informed decisions and adjust treatment plans accordingly.

SubQuestion No : 25

Q.25 Select the most appropriate option to fill in blank no. 5.

- Ans
- 1. reimagining
 - 2. adapting
 - 3. neglecting
 - 4. enabling

Question ID : 264330153649

Option 1 ID : 264330602064

Option 2 ID : 264330602063

Option 3 ID : 264330602065

Option 4 ID : 264330602066

Status : Answered

Chosen Option : 4

Multi Tasking Non Technical Staff and Havaladar CBIC and CBN Examination 2023

Roll Number	
Candidate Name	
Venue Name	iON Digital Zone iDZ Jamshedpur
Exam Date	13/09/2023
Exam Time	9:00 AM - 11:00 AM
Subject	MTS Non Tech Havaladar CBIC and CBN Examination 2023

Section : Numerical and Mathematical Ability

Q.1 By selling a calculator for ₹1,080, there is a loss of 10%, if the article is sold for ₹1,350, the net result in the transaction is:

- Ans
- 1. $12\frac{1}{2}\%$ loss
 - 2. 12% gain
 - 3. $12\frac{1}{2}\%$ gain
 - 4. 12% loss

Question ID : 264330159027
Option 1 ID : 264330623468
Option 2 ID : 264330623469
Option 3 ID : 264330623467
Option 4 ID : 264330623470
Status : Answered
Chosen Option : 3

Q.2 If the $\frac{5}{6}$ of a number is 10 less than the number itself, then $\frac{7}{5}$ of the number is _____.

- Ans
- 1. 72
 - 2. 96
 - 3. 60
 - 4. 84

Question ID : 264330153806
Option 1 ID : 264330602687
Option 2 ID : 264330602690
Option 3 ID : 264330602688
Option 4 ID : 264330602689
Status : Answered
Chosen Option : 4

Q.3 A boat travels upstream from B to A and downstream from A to B in 3 hours. If the speed of the boat in still water is 9 km/h and the speed of the current is 3.5 km/h, the distance between A and B is: (correct up to two decimal places)

- Ans**
- 1. 14.46 km
 - 2. 13.46 km
 - 3. 12.46 km
 - 4. 11.46 km

Question ID : 264330156348
Option 1 ID : 264330612794
Option 2 ID : 264330612792
Option 3 ID : 264330612791
Option 4 ID : 264330612793
Status : Marked For Review
Chosen Option : 4

Q.4 Two trains are travelling in the same direction on parallel tracks. Train A is travelling at 30 km/h and Train B is travelling at 60 km/h. If Train A is 400 m long and it takes Train B two minutes to pass Train A, what is the length of Train B?

- Ans**
- 1. 700 m
 - 2. 500 m
 - 3. 400 m
 - 4. 600 m

Question ID : 264330156275
Option 1 ID : 264330612502
Option 2 ID : 264330612500
Option 3 ID : 264330612499
Option 4 ID : 264330612501
Status : Answered
Chosen Option : 1

Q.5 Some oranges were purchased at ₹150 per hundred and sold at ₹24 per dozen. It gave a gain of ₹1,000. How many oranges were purchased?

- Ans**
- 1. 3000
 - 2. 2500
 - 3. 1500
 - 4. 2000

Question ID : 264330156074
Option 1 ID : 264330611696
Option 2 ID : 264330611698
Option 3 ID : 264330611697
Option 4 ID : 264330611695
Status : Answered
Chosen Option : 2

Q.6 The average weight of 20 students in a class is 55 kg. If the weight of the class teacher is included, the average is increased by 0.5 kg. The weight of the class teacher is:

- Ans**
- 1. 67.2 kg
 - 2. 63.5 kg
 - 3. 65.5 kg
 - 4. 68.4 kg

Question ID : 264330155954
Option 1 ID : 264330611216
Option 2 ID : 264330611217
Option 3 ID : 264330611218
Option 4 ID : 264330611215
Status : Answered
Chosen Option : 3

Q.7 15 kg of ₹25 per kg wheat is mixed with 10 kg of another type of wheat to get a mixture costing ₹30 per kg. Find the price (per kg) of the costlier wheat.

- Ans**
- 1. ₹37.5
 - 2. ₹32.5
 - 3. ₹35.5
 - 4. ₹30.5

Question ID : 264330156213
Option 1 ID : 264330612254
Option 2 ID : 264330612252
Option 3 ID : 264330612253
Option 4 ID : 264330612251
Status : Answered
Chosen Option : 2

Q.8 A and B can do a piece of work in 5 days, while C and D can do the same work in 20 days. In how many days will A, B, C and D do it together?

- Ans**
- 1. 3
 - 2. 4
 - 3. 5
 - 4. 6

Question ID : 264330156116
Option 1 ID : 264330611863
Option 2 ID : 264330611865
Option 3 ID : 264330611864
Option 4 ID : 264330611866
Status : Answered
Chosen Option : 2

Q.9 A milk vendor has 2 vessels of milk and water. The first contains 80% milk and the rest is water. The second contains 50% milk. How much mixture (in L) should he mix from each of the vessels so as to get 9 litres of mixture such that the ratio of water to milk is 1 : 2? (Write your answer in the order of vessel 1 and vessel 2)

- Ans**
- 1. 6, 3
 - 2. 4, 5
 - 3. 3, 6
 - 4. 5, 4

Question ID : 264330153760
Option 1 ID : 264330602503
Option 2 ID : 264330602505
Option 3 ID : 264330602504
Option 4 ID : 264330602506
Status : Answered
Chosen Option : 2

Q.10 On what sum of money will the difference between the simple interest and compound interest (Compounded annually) for 3 years at 5% per annum be ₹15,25?

- Ans**
- 1. ₹2,500
 - 2. ₹1,000
 - 3. ₹4,000
 - 4. ₹2,000

Question ID : 264330156345
Option 1 ID : 264330612782
Option 2 ID : 264330612781
Option 3 ID : 264330612779
Option 4 ID : 264330612780
Status : Answered
Chosen Option : 1

Q.11 Study the given bar-graph and answer the question that follows.

The bar-graph presents the number of books sold by a bookseller during different months of a particular year.



The number of books sold in the month of December is how much less than the average number of books sold per month?

- Ans**
- 1. 120
 - 2. 93
 - 3. 39
 - 4. 95

Question ID : 264330153819
Option 1 ID : 264330602742
Option 2 ID : 264330602739
Option 3 ID : 264330602741
Option 4 ID : 264330602740
Status : Not Attempted and Marked For Review
Chosen Option : --

Q.12 The length of an edge of a cube is 3.5 cm. Find its total surface area.

- Ans
- ✓ 1. 73.5 cm^2
 - ✗ 2. 36 cm^2
 - ✗ 3. 27 cm^2
 - ✗ 4. 154 cm^2

Question ID : 264330156086

Option 1 ID : 264330611743

Option 2 ID : 264330611745

Option 3 ID : 264330611744

Option 4 ID : 264330611746

Status : Answered

Chosen Option : 1

Q.13 Study the given table and answer the question that follows.

The table shows the milk exported from India from 2011 to 2015.

Year	Quantity (in lakh litres)	Value (in ₹ crores)
2011	130	240
2012	115	220
2013	142	420
2014	165	550
2015	195	610

In which year is the value per litre the maximum?

- Ans
- ✗ 1. 2012
 - ✓ 2. 2014
 - ✗ 3. 2015
 - ✗ 4. 2013

Question ID : 264330157334

Option 1 ID : 264330616699

Option 2 ID : 264330616701

Option 3 ID : 264330616702

Option 4 ID : 264330616700

Status : Answered

Chosen Option : 3

Q.14 A family spends 20% of its monthly income on house rent. Out of the remaining amount, the family spends 50% on household expenditure and 20% on children's education. If after doing so, its monthly saving is ₹6,600, then what is the total monthly income of the family?

- Ans**
- 1. ₹25,000
 - 2. ₹27,500
 - 3. ₹30,000
 - 4. ₹28,000

Question ID : 264330154121
Option 1 ID : 264330603947
Option 2 ID : 264330603949
Option 3 ID : 264330603950
Option 4 ID : 264330603948
Status : Answered
Chosen Option : 2

Q.15 If $6\frac{1}{2} \times 2\frac{4}{5} \div x = \frac{7}{10}$, then find x :

- Ans**
- 1. 26
 - 2. 6
 - 3. 32
 - 4. 12

Question ID : 264330153867
Option 1 ID : 264330602932
Option 2 ID : 264330602931
Option 3 ID : 264330602934
Option 4 ID : 264330602933
Status : Answered
Chosen Option : 1

Q.16 Two numbers are in the ratio of 13 : 15. If their HCF is 3, then what is the difference between these two numbers?

- Ans**
- 1. 4
 - 2. 2
 - 3. 8
 - 4. 6

Question ID : 264330155681
Option 1 ID : 264330610128
Option 2 ID : 264330610127
Option 3 ID : 264330610130
Option 4 ID : 264330610129
Status : Answered
Chosen Option : 4

Q.17 A and B can complete a task in 6 and 8 days, respectively. They work on alternate days, with A starting the task on the first day. How many days will it take them to complete the task?

Ans 1. 6

2. $6\frac{3}{4}$

3. $6\frac{1}{2}$

4. $6\frac{1}{4}$

Question ID : 264330156280

Option 1 ID : 264330612519

Option 2 ID : 264330612522

Option 3 ID : 264330612521

Option 4 ID : 264330612520

Status : Answered

Chosen Option : 4

Q.18 In how many years will ₹2,000 invested at the rate of 11% p.a. simple interest, amount to ₹3,100?

Ans 1. 3

2. 4

3. 2

4. 5

Question ID : 264330156226

Option 1 ID : 264330612304

Option 2 ID : 264330612305

Option 3 ID : 264330612303

Option 4 ID : 264330612306

Status : Answered

Chosen Option : 1

Q.19 If the diameter of the base of a cone is 70 cm and its curved surface area is 4070 cm^2 , then what will be its volume (in cm^3)? (use $\pi = \frac{22}{7}$)

Ans 1. 1180

2. 16,300

3. 15,400

4. 17,600

Question ID : 264330156539

Option 1 ID : 264330613543

Option 2 ID : 264330613544

Option 3 ID : 264330613546

Option 4 ID : 264330613545

Status : Answered

Chosen Option : 2

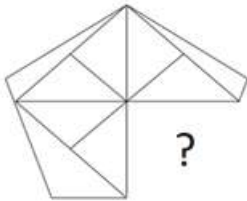
Q.20 The ratio of the number of boys to the number of girls in a school of 1650 students is 6 : 5. If 124 new boys are admitted and few new girls are admitted, the ratio changes to 4 : 3. What is the ratio of the newly admitted girls to the newly admitted boys?

- Ans**
- 1. 3 : 4
 - 2. 62 : 9
 - 3. 4 : 3
 - 4. 9 : 62

Question ID : 264330156307
 Option 1 ID : 264330612628
 Option 2 ID : 264330612629
 Option 3 ID : 264330612627
 Option 4 ID : 264330612630
 Status : Answered
 Chosen Option : 2

Section : Reasoning Ability and Problem Solving

Q.1 Identify the figure that completes the pattern (rotation is NOT allowed).



Ans

- 1.
- 2.
- 3.
- 4.

Question ID : 264330154516
 Option 1 ID : 264330605528
 Option 2 ID : 264330605530
 Option 3 ID : 264330605527
 Option 4 ID : 264330605529
 Status : Answered
 Chosen Option : 3

Q.2 8 is related to 59 following a certain logic. Following the same logic, 9 is related to 76. To which of the following is 25 related to, following the same logic?

- Ans**
- ✓ 1. 620
 - ✗ 2. 635
 - ✗ 3. 630
 - ✗ 4. 625

Question ID : 264330151599
Option 1 ID : 264330594023
Option 2 ID : 264330594026
Option 3 ID : 264330594025
Option 4 ID : 264330594024
Status : Answered
Chosen Option : 1

Q.3 What will come in the place of '?' in the following equation, if '+' and '-' are interchanged and '×' and '÷' are interchanged?

$$108 \times 9 + 15 - 17 \div 2 = ?$$

- Ans**
- ✗ 1. 51
 - ✗ 2. 21
 - ✗ 3. 41
 - ✓ 4. 31

Question ID : 264330155665
Option 1 ID : 264330610066
Option 2 ID : 264330610065
Option 3 ID : 264330610063
Option 4 ID : 264330610064
Status : Answered
Chosen Option : 4

Q.4 In a certain code language, 'ENIRUST' is coded as 'FOURVTU' and 'CUSHION' is coded as 'DVTHJPO'. What is the code for 'CLEAVER' in the given code language?

- Ans**
- ✓ 1. DMFAWFS
 - ✗ 2. DNGBWGT
 - ✗ 3. ENGBWT
 - ✗ 4. EMFBWGT

Question ID : 264330155826
Option 1 ID : 264330610709
Option 2 ID : 264330610710
Option 3 ID : 264330610708
Option 4 ID : 264330610707
Status : Answered
Chosen Option : 1

Q.5 What should come in place of '?' in the given series?

2 21 97 401 1617 ?

- Ans
- ✓ 1. 6481
 - ✗ 2. 6507
 - ✗ 3. 6235
 - ✗ 4. 6493

Question ID : 264330151470
 Option 1 ID : 264330593508
 Option 2 ID : 264330593510
 Option 3 ID : 264330593507
 Option 4 ID : 264330593509
 Status : Answered
 Chosen Option : 4

Q.6 Read the given statements and conclusions carefully. You have to take the given statements to be true even if they seem to be at variance from commonly known facts. You have to decide which conclusion/s logically follow/s from the given statements.

Statements: All shoes are leather. Some leather are belts. Some belts are gold.

Conclusion I: Some shoes are belts.

Conclusion II: All belts are gold.

- Ans
- ✓ 1. Neither conclusion (I) nor (II) is follow.
 - ✗ 2. Only conclusion (I) is follow.
 - ✗ 3. Only conclusion (II) is follow.
 - ✗ 4. Both conclusions (I) and (II) are follow.

Question ID : 264330155935
 Option 1 ID : 264330611145
 Option 2 ID : 264330611143
 Option 3 ID : 264330611144
 Option 4 ID : 264330611146
 Status : Answered
 Chosen Option : 1

Q.7 Select the correct mirror image of the given figure when the mirror is placed at MN as shown below.



- Ans
- ✗ 1. K t P 4 7 F
 - ✗ 2. K t P 4 7 F
 - ✓ 3. F 7 4 P t K
 - ✗ 4. F 7 4 P t K

Question ID : 264330151526
 Option 1 ID : 264330593733
 Option 2 ID : 264330593734
 Option 3 ID : 264330593732
 Option 4 ID : 264330593731
 Status : Answered
 Chosen Option : 3

Q.8 Read the given statements and conclusions carefully. You have to take the given statements to be true even if they seem to be at variance from commonly known facts. You have to decide which conclusion/s logically follow/s from the given statements.

Statements: Some leaves are old. All old are clothes. Some clothes are papers.

Conclusion I: All leaves are old.

Conclusion II: Some old are clothes.

- Ans**
- 1. Only conclusion (I) is follow.
 - 2. Both conclusions (I) and (II) are follow.
 - 3. Only conclusion (II) is follow.
 - 4. Neither conclusion (I) nor (II) is follow.

Question ID : 264330155906
Option 1 ID : 264330611027
Option 2 ID : 264330611030
Option 3 ID : 264330611028
Option 4 ID : 264330611029
Status : Answered
Chosen Option : 3

Q.9 What should come in place of ? in the given series based on the English alphabetical order?

GAR, KEV, OIZ, SMD, ?

- Ans**
- 1. WPH
 - 2. WQH
 - 3. VRF
 - 4. VPG

Question ID : 264330155766
Option 1 ID : 264330610467
Option 2 ID : 264330610470
Option 3 ID : 264330610468
Option 4 ID : 264330610469
Status : Answered
Chosen Option : 2

Q.10 What should come in place of ? in the given series?

710 720 730 740 750 ?

- Ans**
- 1. 770
 - 2. 780
 - 3. 790
 - 4. 760

Question ID : 264330151548
Option 1 ID : 264330593821
Option 2 ID : 264330593822
Option 3 ID : 264330593819
Option 4 ID : 264330593820
Status : Answered
Chosen Option : 4

Q.11 What should come in place of the question mark (?) in the given series based on the English alphabetical order?

AOS, DMV, GKY, JIB, ?

- Ans
- ✓ 1. MGE
 - ✗ 2. NGF
 - ✗ 3. NHF
 - ✗ 4. OHE

Question ID : 264330156299

Option 1 ID : 264330612596

Option 2 ID : 264330612595

Option 3 ID : 264330612597

Option 4 ID : 264330612598

Status : Answered

Chosen Option : 1

Q.12 What should come in place of '?' in the given series?

18 32 60 116 228 ?

- Ans
- ✓ 1. 452
 - ✗ 2. 474
 - ✗ 3. 480
 - ✗ 4. 468

Question ID : 264330151496

Option 1 ID : 264330593611

Option 2 ID : 264330593613

Option 3 ID : 264330593614

Option 4 ID : 264330593612

Status : Answered

Chosen Option : 1

Q.13 If 'I' stands for '+', 'J' stands for '×', 'K' stands for '÷' and 'L' stands for '-', what will come in place of the question mark (?) in the following equation?

$(48 \text{ K } 8) \text{ J } 4 \text{ L } 15 \text{ I } (12 \text{ J } 3) \text{ I } 20 = ?$

- Ans
- ✗ 1. 55
 - ✓ 2. 65
 - ✗ 3. 60
 - ✗ 4. 70

Question ID : 264330151789

Option 1 ID : 264330594783

Option 2 ID : 264330594785

Option 3 ID : 264330594784

Option 4 ID : 264330594786

Status : Answered

Chosen Option : 2

Q.14 In a certain code language, 'let it be' is coded as 'sd am ht' and 'be the change' is coded as 'vn sd ek'. How is 'be' coded in the given language?

- Ans**
- ✓ 1. sd
 - ✗ 2. ht
 - ✗ 3. ek
 - ✗ 4. vn

Question ID : 264330151709
Option 1 ID : 264330594464
Option 2 ID : 264330594463
Option 3 ID : 264330594465
Option 4 ID : 264330594466
Status : Answered
Chosen Option : 1

Q.15 IDWP is related to RBUN in a certain way based on the English alphabetical order. In the same way, FJMH is related to DHKF. To which of the following is SENP related to, following the same logic?

- Ans**
- ✗ 1. PDKN
 - ✓ 2. QCLN
 - ✗ 3. RCMN
 - ✗ 4. QDKO

Question ID : 264330151662
Option 1 ID : 264330594276
Option 2 ID : 264330594278
Option 3 ID : 264330594277
Option 4 ID : 264330594275
Status : Answered
Chosen Option : 2

Q.16 Select the combination of letters that when sequentially placed in the blanks of the given series will make it logically complete.

DZL_G_JD_ZHDM_FDPZ_D

- Ans**
- ✗ 1. DNMVH
 - ✗ 2. KJBVD
 - ✗ 3. NVKDM
 - ✓ 4. DZJZD

Question ID : 264330156318
Option 1 ID : 264330612672
Option 2 ID : 264330612674
Option 3 ID : 264330612671
Option 4 ID : 264330612673
Status : Answered
Chosen Option : 4

Q.17 D, E, F, G, H, I, J and K are sitting around a square table facing the center of the table. Some of them are sitting at the corners while some are sitting at the exact center of the sides. K sits third to the right of I. K sits at one of the corners. E sits second to the left of G. G sits at any of the corners. E is an immediate neighbour of I and D. F sits third to the right of J. H is the immediate neighbour of F and K.

How many people sit between I and F, when counted from the left of I?

- Ans**
- ✓ 1. Two
 - ✗ 2. Four
 - ✗ 3. One
 - ✗ 4. Three

Question ID : 264330155533

Option 1 ID : 264330609536

Option 2 ID : 264330609538

Option 3 ID : 264330609535

Option 4 ID : 264330609537

Status : Answered

Chosen Option : 1

Q.18 Which figure should replace the question mark (?) if the following figure series were to be continued?

□	6	A	T	
A P T □	3 P L □	3 A 6 □		?
6	3 A T T	6 L 3		

Ans

✗ 1.

3		
6	□	S
T		L

✗ 2.

3		
6	□	A
T		L

✓ 3.

L		
S	A	6
3		T

✗ 4.

L		
□	A	6
3		T

Question ID : 264330154742

Option 1 ID : 264330606432

Option 2 ID : 264330606433

Option 3 ID : 264330606434

Option 4 ID : 264330606431

Status : Answered

Chosen Option : 3

Q.19 If 11 December 2009 is a Friday, then what will be the day of the week on 18 December 2014?

- Ans**
- 1. Tuesday
 - 2. Monday
 - 3. Thursday
 - 4. Wednesday

Question ID : **264330154351**
Option 1 ID : **264330604868**
Option 2 ID : **264330604867**
Option 3 ID : **264330604869**
Option 4 ID : **264330604870**
Status : **Answered**
Chosen Option : **3**

Q.20 8 is related to 88 following a certain logic. Following the same logic, 11 is related to 121. To which of the following is 15 related to, following the same logic?

- Ans**
- 1. 163
 - 2. 165
 - 3. 164
 - 4. 162

Question ID : **264330151589**
Option 1 ID : **264330593984**
Option 2 ID : **264330593986**
Option 3 ID : **264330593985**
Option 4 ID : **264330593983**
Status : **Answered**
Chosen Option : **2**

Section : **General Awareness**

Q.1 According to Census of India 2011, what was the total population of India (approx)?

- Ans**
- 1. 131 Crore
 - 2. 121 Crore
 - 3. 111 Crore
 - 4. 101 Crore

Question ID : **264330161549**
Option 1 ID : **264330633526**
Option 2 ID : **264330633524**
Option 3 ID : **264330633523**
Option 4 ID : **264330633525**
Status : **Answered**
Chosen Option : **2**

Q.2

Chhau is a major dance tradition of India. In which of the following Indian states is the dance form NOT prevalent?

- Ans
- 1. Odisha
 - 2. West Bengal
 - 3. Jharkhand
 - 4. Madhya Pradesh

Question ID : 264330161343
Option 1 ID : 264330632699
Option 2 ID : 264330632702
Option 3 ID : 264330632700
Option 4 ID : 264330632701
Status : Answered
Chosen Option : 4

Q.3 In November 2022, which state became the first North-East state to approve Mental Health and Social Care Policy?

- Ans
- 1. Assam
 - 2. Meghalaya
 - 3. Tripura
 - 4. Arunachal Pradesh

Question ID : 264330158332
Option 1 ID : 264330620689
Option 2 ID : 264330620688
Option 3 ID : 264330620687
Option 4 ID : 264330620690
Status : Answered
Chosen Option : 3

Q.4 In which state is Vishakhapatnam Port located?

- Ans
- 1. Maharashtra
 - 2. Andhra Pradesh
 - 3. Odisha
 - 4. Gujarat

Question ID : 264330160143
Option 1 ID : 264330627911
Option 2 ID : 264330627912
Option 3 ID : 264330627914
Option 4 ID : 264330627913
Status : Answered
Chosen Option : 2

Q.5 Who among the following is the Indian classical dancer who masters both Bharatanatyam and Odissi dancing style?

- Ans
- 1. Shovana Narayan
 - 2. Guru Bipin Singh
 - 3. Padma Subrahmanayam
 - 4. Sonal Mansingh

Question ID : 264330159064
Option 1 ID : 264330623616
Option 2 ID : 264330623615
Option 3 ID : 264330623618
Option 4 ID : 264330623617
Status : Answered
Chosen Option : 2

Q.6 Which bacteria was discovered by Barry Marshall and Robin Warren that colonises the human stomach and causes chronic superficial gastritis ulcers?

- Ans
- 1. Campylobacter jejuni
 - 2. Helicobacter pylori
 - 3. Neisseria gonorrhoeae
 - 4. Entamoeba histolytica

Question ID : 264330161076
Option 1 ID : 264330631637
Option 2 ID : 264330631636
Option 3 ID : 264330631635
Option 4 ID : 264330631638
Status : Answered
Chosen Option : 1

Q.7 Which of the following states witnesses the first onset of the monsoon?

- Ans
- 1. Punjab
 - 2. Haryana
 - 3. Kerala
 - 4. Uttar Pradesh

Question ID : 264330157826
Option 1 ID : 264330618663
Option 2 ID : 264330618666
Option 3 ID : 264330618664
Option 4 ID : 264330618665
Status : Answered
Chosen Option : 3

Q.8 What is a prominent trend in the microfinance sector in India?

- Ans
- 1. Integration of mobile banking services
 - 2. Excessive bureaucracy in loan approvals
 - 3. Decreased reliance on digital technology
 - 4. Limited focus on women entrepreneurs

Question ID : 264330157293
Option 1 ID : 264330616537
Option 2 ID : 264330616538
Option 3 ID : 264330616535
Option 4 ID : 264330616536
Status : Answered
Chosen Option : 2

Q.9 Ustad Bismillah Khan was associated with which of the following musical instruments?

- Ans
- 1. Shehnai
 - 2. Sarod
 - 3. Sitar
 - 4. Sarangi

Question ID : 264330155508
Option 1 ID : 264330609437
Option 2 ID : 264330609435
Option 3 ID : 264330609438
Option 4 ID : 264330609436
Status : Answered
Chosen Option : 1

Q.10 The famous coal mining region 'Korba' is located in which state of India?

- Ans
- 1. Kerala
 - 2. Tamil Nadu
 - 3. Chhattisgarh
 - 4. Himachal Pradesh

Question ID : 264330161525
Option 1 ID : 264330633427
Option 2 ID : 264330633429
Option 3 ID : 264330633428
Option 4 ID : 264330633430
Status : Answered
Chosen Option : 3

Q.11 What do you mean by balanced budget?

- Ans
- 1. Expenditure not equal to revenue
 - 2. Expenditure equal to revenue
 - 3. Expenditure more the revenue
 - 4. Expenditure is less than revenue

Question ID : 264330161453
Option 1 ID : 264330633141
Option 2 ID : 264330633139
Option 3 ID : 264330633142
Option 4 ID : 264330633140
Status : Answered
Chosen Option : 2

Q.12 Rajgir Mahotsav is a beautiful representation of history, religion, art and culture. It is a three-day celebration in _____.

- Ans
- 1. Madhya Pradesh
 - 2. Uttarakhand
 - 3. Uttar Pradesh
 - 4. Bihar

Question ID : 264330160834
Option 1 ID : 264330630667
Option 2 ID : 264330630670
Option 3 ID : 264330630669
Option 4 ID : 264330630668
Status : Answered
Chosen Option : 4

Q.13 The famous novel 'The God Of Small Things' is written by _____.

- Ans
- 1. Shashi Tharoor
 - 2. Ruskin Bond
 - 3. Vikram Seth
 - 4. Arundhati Roy

Question ID : 264330162284
Option 1 ID : 264330636466
Option 2 ID : 264330636464
Option 3 ID : 264330636465
Option 4 ID : 264330636463
Status : Answered
Chosen Option : 4

Q.14 The Men's Junior Hockey Asia Cup 2023, which was won by India, was held at _____.

- Ans
- 1. Saudi Arabia
 - 2. Oman
 - 3. Dubai
 - 4. Qatar

Question ID : 264330161147
Option 1 ID : 264330631922
Option 2 ID : 264330631919
Option 3 ID : 264330631920
Option 4 ID : 264330631921
Status : Answered
Chosen Option : 2

Q.15 In the context of the Revolt of 1857, Mangal Pandey belonged to which Bengal native Infantry?

- Ans
- 1. 34
 - 2. 52
 - 3. 70
 - 4. 64

Question ID : 264330162328
Option 1 ID : 264330636639
Option 2 ID : 264330636640
Option 3 ID : 264330636642
Option 4 ID : 264330636641
Status : Answered
Chosen Option : 1

Q.16 Which of the following countries did India beat in the final to win the 2021 SAFF Championship?

- Ans 1. Nepal
 2. Lebanon
 3. Maldives
 4. Kuwait

Question ID : 264330161137
Option 1 ID : 264330631882
Option 2 ID : 264330631881
Option 3 ID : 264330631880
Option 4 ID : 264330631879
Status : Answered
Chosen Option : 1

Q.17 Vinesh Phogat became the first Indian woman wrestler to win how many medals at World Championships?

- Ans 1. 6
 2. 5
 3. 2
 4. 3

Question ID : 264330158358
Option 1 ID : 264330620794
Option 2 ID : 264330620793
Option 3 ID : 264330620791
Option 4 ID : 264330620792
Status : Not Answered
Chosen Option : --

Q.18 What is the purpose of the Cultural and Educational Rights?

- Ans 1. To promote a particular religion
 2. To protect the language, culture, and religion of the minority communities
 3. To protect the majority community
 4. To prevent exploitation

Question ID : 264330162250
Option 1 ID : 264330636328
Option 2 ID : 264330636329
Option 3 ID : 264330636327
Option 4 ID : 264330636330
Status : Answered
Chosen Option : 2

Q.19 In optics, which term refers to the opening of the diaphragm of a lens that spatially limits the propagation of light?

- Ans 1. Collimator
 2. Aperture
 3. Apostilb
 4. Meniscus

Question ID : 264330161400
Option 1 ID : 264330632928
Option 2 ID : 264330632930
Option 3 ID : 264330632929
Option 4 ID : 264330632927
Status : Not Answered
Chosen Option : --

Q.20 Lata Mangeshkar was awarded by the India's highest civilian honour 'Bharat Ratna' in the year _____.

- Ans**
- 1. 2015
 - 2. 2019
 - 3. 2001
 - 4. 2009

Question ID : **264330155507**
Option 1 ID : **264330609433**
Option 2 ID : **264330609434**
Option 3 ID : **264330609431**
Option 4 ID : **264330609432**
Status : **Answered**
Chosen Option : **3**

Q.21 Nirmala Panikar received the Sangeet Natak Akademi Award-2019 (given in February 2023) for her contribution to _____ dance form.

- Ans**
- 1. Mohiniyattam
 - 2. Kuchipudi
 - 3. Kathak
 - 4. Bharatanatyam

Question ID : **264330155523**
Option 1 ID : **264330609495**
Option 2 ID : **264330609496**
Option 3 ID : **264330609498**
Option 4 ID : **264330609497**
Status : **Answered**
Chosen Option : **4**

Q.22 In which city is the Rajghat memorial situated?

- Ans**
- 1. Ahmedabad
 - 2. Surat
 - 3. Delhi
 - 4. Agra

Question ID : **264330160772**
Option 1 ID : **264330630422**
Option 2 ID : **264330630419**
Option 3 ID : **264330630421**
Option 4 ID : **264330630420**
Status : **Answered**
Chosen Option : **3**

Q.23 In the 1939 Tripuri Congress Presidential Election, Pattabhi Sitaramayya was defeated by:

- Ans
- 1. Mahatma Gandhi
 - 2. Rajendra Prasad
 - 3. Subhas Chandra Bose
 - 4. Jawaharlal Nehru

Question ID : 264330162323
Option 1 ID : 264330636619
Option 2 ID : 264330636622
Option 3 ID : 264330636621
Option 4 ID : 264330636620
Status : Answered
Chosen Option : 3

Q.24 Whose autobiography is titled 'Waiting for a Visa'?

- Ans
- 1. Dr. Ram Manohar Lohia
 - 2. Dr. Rajendra Prasad
 - 3. Dr. Bhimrao Ambedkar
 - 4. Dr. Kamal Ranadive

Question ID : 264330155449
Option 1 ID : 264330609201
Option 2 ID : 264330609199
Option 3 ID : 264330609202
Option 4 ID : 264330609200
Status : Answered
Chosen Option : 1

Q.25 In which year was the Jammu and Kashmir Reorganization Act passed?

- Ans
- 1. 2019
 - 2. 2009
 - 3. 2015
 - 4. 2017

Question ID : 264330159928
Option 1 ID : 264330627062
Option 2 ID : 264330627061
Option 3 ID : 264330627059
Option 4 ID : 264330627060
Status : Answered
Chosen Option : 1

Section : English Language and Comprehension

Q.1 Select the most appropriate option to fill in the blank.
The toddler decided to make a mess because he wanted to _____ the attention of its parents.

- Ans**
- 1. seek
 - 2. elicit
 - 3. please
 - 4. extract

Question ID : 264330152637
Option 1 ID : 264330598152
Option 2 ID : 264330598153
Option 3 ID : 264330598154
Option 4 ID : 264330598151
Status : Answered
Chosen Option : 1

Q.2 Select the most appropriate synonym of the given word.
Glimpse

- Ans**
- 1. Examine
 - 2. Glance
 - 3. Stare
 - 4. Observe

Question ID : 264330152596
Option 1 ID : 264330597989
Option 2 ID : 264330597987
Option 3 ID : 264330597988
Option 4 ID : 264330597990
Status : Answered
Chosen Option : 2

Q.3 Identify the sentence that contains correct spellings in the given context.

- Ans**
- 1. She acid the test despite being sleep-deprived from studying for nearly 24 hours straight.
 - 2. She acad the test desspite being sleep-deprived from studying for nearly 24 hours straight.
 - 3. She aced the test daspite being sleep-deprived from studying for nearly 24 hours strait.
 - 4. She aced the test despite being sleep-deprived from studying for nearly 24 hours straight.

Question ID : 264330153650
Option 1 ID : 264330602067
Option 2 ID : 264330602068
Option 3 ID : 264330602070
Option 4 ID : 264330602069
Status : Answered
Chosen Option : 4

Q.4 Select the most appropriate option to fill in the blank.
The teacher assured: "You have completed your homework, _____?"

- Ans
- 1. had you
 - 2. hadn't you
 - 3. haven't you
 - 4. have you

Question ID : 264330152641
Option 1 ID : 264330598170
Option 2 ID : 264330598169
Option 3 ID : 264330598167
Option 4 ID : 264330598168
Status : Answered
Chosen Option : 3

Q.5 Select the most appropriate ANTONYM of the word given in brackets to fill in the blank.

A _____ (distinct) sense of restlessness was bothering me when I left the cemetery.

- Ans
- 1. terrible
 - 2. critical
 - 3. prior
 - 4. vague

Question ID : 264330152697
Option 1 ID : 264330598393
Option 2 ID : 264330598391
Option 3 ID : 264330598394
Option 4 ID : 264330598392
Status : Answered
Chosen Option : 4

Q.6 The following sentence has been divided into parts. One of them may contain an error. Select the part that contains the error from the given options. If you don't find any error, mark 'No error' as your answer.

With cloud streaming, people can play games from a / internet-connected device, avoiding the need for pricey / dedicated hardware such as a game console.

- Ans
- 1. No error
 - 2. dedicated hardware such as a game console
 - 3. With cloud streaming, people can play games from a
 - 4. internet-connected device, avoiding the need for pricey

Question ID : 264330153196
Option 1 ID : 264330600346
Option 2 ID : 264330600345
Option 3 ID : 264330600343
Option 4 ID : 264330600344
Status : Answered
Chosen Option : 3

Q.7 Select the most appropriate meaning of the given idiom.
Keep someone at arm's length

- Ans** 1. To ruin someone's plans
 2. To avoid becoming too close or friendly with someone
 3. Angry about something
 4. Having energy again after being tired

Question ID : 264330155283
Option 1 ID : 264330608577
Option 2 ID : 264330608578
Option 3 ID : 264330608575
Option 4 ID : 264330608576
Status : Answered
Chosen Option : 2

Q.8 The following sentence has been divided into four parts. Identify the part that contains an error.
(A) This fridge / (B) comes including / (C) a 5-year / (D) warranty.

- Ans** 1. B
 2. C
 3. D
 4. A

Question ID : 264330152615
Option 1 ID : 264330598066
Option 2 ID : 264330598065
Option 3 ID : 264330598063
Option 4 ID : 264330598064
Status : Answered
Chosen Option : 1

Q.9 Select the option that can be used as a one-word substitute for the given group of words.
One who looks at the dark side of life

- Ans** 1. Physicist
 2. Optimist
 3. Pessimist
 4. Idealist

Question ID : 264330153361
Option 1 ID : 264330600996
Option 2 ID : 264330600997
Option 3 ID : 264330600998
Option 4 ID : 264330600995
Status : Answered
Chosen Option : 3

Q.10 Select the most appropriate option that can substitute the underlined segment in the given sentence.
Many a things are used for the show.

- Ans
- 1. a things is
 - 2. a things were
 - 3. a thing is
 - 4. a thing were

Question ID : 264330153350
Option 1 ID : 264330600954
Option 2 ID : 264330600951
Option 3 ID : 264330600953
Option 4 ID : 264330600952
Status : Answered
Chosen Option : 3

Q.11 Select the most appropriate option that can rectify the underlined segment in the given sentence. If there is no need to rectify it, select 'no rectification needed'.

This film is a non-stop riot that many cite as one of the funny films of all time.

- Ans
- 1. no rectification needed
 - 2. funniest
 - 3. more funny
 - 4. funnier

Question ID : 264330153467
Option 1 ID : 264330601386
Option 2 ID : 264330601383
Option 3 ID : 264330601384
Option 4 ID : 264330601385
Status : Answered
Chosen Option : 2

Q.12 Select the INCORRECTLY spelt word.

- Ans
- 1. Essence
 - 2. Aggregate
 - 3. Transmissible
 - 4. Assembly

Question ID : 264330152781
Option 1 ID : 264330598718
Option 2 ID : 264330598717
Option 3 ID : 264330598715
Option 4 ID : 264330598716
Status : Answered
Chosen Option : 3

Q.13 Select the option that can be used as a one-word substitute for the given group of words.

A person who regards the whole world as his country

- Ans
- 1. Cosmopolitan
 - 2. Pacifist
 - 3. Contemporary
 - 4. Celibate

Question ID : 264330153537
Option 1 ID : 264330601653
Option 2 ID : 264330601652
Option 3 ID : 264330601651
Option 4 ID : 264330601654
Status : Answered
Chosen Option : 1

Q.14 The following sentence has been split into four segments. Identify the segment that contains an error.

The team played / really well, but / they lose the game / in the final minutes.

- Ans
- 1. really well, but
 - 2. in the final minutes
 - 3. they lose the game
 - 4. The team played

Question ID : 264330155320
Option 1 ID : 264330608720
Option 2 ID : 264330608722
Option 3 ID : 264330608721
Option 4 ID : 264330608719
Status : Answered
Chosen Option : 3

Q.15 The following sentence has been split into four segments. Identify the segment that contains an error.

The school shall reopened / after summer / vacations of / one month.

- Ans
- 1. one month
 - 2. vacations of
 - 3. The school shall reopened
 - 4. after summer

Question ID : 264330151287
Option 1 ID : 264330592786
Option 2 ID : 264330592785
Option 3 ID : 264330592783
Option 4 ID : 264330592784
Status : Answered
Chosen Option : 3

Q.16 Select the most appropriate ANTONYM of the underlined word.
They waited with anxiety for the final results.

- Ans
- 1. Shrewdness
 - 2. Wilderness
 - 3. Feebleness
 - 4. Calmness

Question ID : 264330151817
Option 1 ID : 264330594896
Option 2 ID : 264330594898
Option 3 ID : 264330594897
Option 4 ID : 264330594895
Status : Answered
Chosen Option : 4

Q.17 Select the most appropriate idiom to fill in the blank.
Jack took on three jobs at once but soon realised he had _____.

- Ans
- 1. cut corners
 - 2. taken it with a grain of salt
 - 3. bitten off more than he could chew
 - 4. played by the ear

Question ID : 264330151883
Option 1 ID : 264330595152
Option 2 ID : 264330595154
Option 3 ID : 264330595151
Option 4 ID : 264330595153
Status : Answered
Chosen Option : 3

Q.18 Select the most appropriate idiom to fill in the blank.
The CEO has _____ than worrying about individual customer complaints.

- Ans
- 1. bigger fish to fry
 - 2. taken a rain check
 - 3. thrown caution to the wind
 - 4. been walking on thin ice

Question ID : 264330151888
Option 1 ID : 264330595172
Option 2 ID : 264330595173
Option 3 ID : 264330595174
Option 4 ID : 264330595171
Status : Answered
Chosen Option : 1

Q.19 Select the INCORRECTLY spelt word.

- Ans
- 1. Perceive
 - 2. Recognition
 - 3. Vaccum
 - 4. Shield

Question ID : 264330152827
Option 1 ID : 264330598902
Option 2 ID : 264330598899
Option 3 ID : 264330598901
Option 4 ID : 264330598900
Status : Answered
Chosen Option : 3

Q.20 Select the most appropriate idiom to fill in the blank.

I know it was wrong to distract his friends, but _____.

- Ans
- 1. all's fair in love and war
 - 2. all's unfair in the world
 - 3. all's unfair in love and war
 - 4. all's fair in the world

Question ID : 264330153077

Option 1 ID : 264330599873

Option 2 ID : 264330599874

Option 3 ID : 264330599871

Option 4 ID : 264330599872

Status : Answered

Chosen Option : 1

Comprehension:

In the following passage, some words have been deleted. Read the passage carefully and select the most appropriate option to fill in each blank.

(1)___ the breakfast table the next morning, there was no sign of my wife. I (2)___ she was sleeping late, but Gladolia, upon being questioned, only (3)___ her head, (4)___ something, and turned the whites of her eyes up to the ceiling. I was glad when the meal was (5)___ and hurried to the library for another try at that story.

SubQuestion No : 21

Q.21 Select the most appropriate option to fill in blank no. 1.

- Ans
- 1. On
 - 2. Above
 - 3. Upon
 - 4. At

Question ID : 264330151849

Option 1 ID : 264330595015

Option 2 ID : 264330595018

Option 3 ID : 264330595016

Option 4 ID : 264330595017

Status : Answered

Chosen Option : 4

Comprehension:

In the following passage, some words have been deleted. Read the passage carefully and select the most appropriate option to fill in each blank.

(1)___ the breakfast table the next morning, there was no sign of my wife. I (2)___ she was sleeping late, but Gladolia, upon being questioned, only (3)___ her head, (4)___ something, and turned the whites of her eyes up to the ceiling. I was glad when the meal was (5)___ and hurried to the library for another try at that story.

SubQuestion No : 22

Q.22 Select the most appropriate option to fill in blank no. 2.

- Ans
- 1. accepted
 - 2. decided
 - 3. examined
 - 4. concluded

Question ID : 264330151850

Option 1 ID : 264330595020

Option 2 ID : 264330595019

Option 3 ID : 264330595021

Option 4 ID : 264330595022

Status : Answered

Chosen Option : 4

Comprehension:

In the following passage, some words have been deleted. Read the passage carefully and select the most appropriate option to fill in each blank.

(1)___ the breakfast table the next morning, there was no sign of my wife. I (2)___ she was sleeping late, but Gladolia, upon being questioned, only (3)___ her head, (4)___ something, and turned the whites of her eyes up to the ceiling. I was glad when the meal was (5)___ and hurried to the library for another try at that story.

SubQuestion No : 23

Q.23 Select the most appropriate option to fill in blank no. 3.

- Ans 1. adjusted
 2. rotated
 3. shook
 4. stirred

Question ID : 264330151851

Option 1 ID : 264330595025

Option 2 ID : 264330595026

Option 3 ID : 264330595024

Option 4 ID : 264330595023

Status : Answered

Chosen Option : 3

Comprehension:

In the following passage, some words have been deleted. Read the passage carefully and select the most appropriate option to fill in each blank.

(1)___ the breakfast table the next morning, there was no sign of my wife. I (2)___ she was sleeping late, but Gladolia, upon being questioned, only (3)___ her head, (4)___ something, and turned the whites of her eyes up to the ceiling. I was glad when the meal was (5)___ and hurried to the library for another try at that story.

SubQuestion No : 24

Q.24 Select the most appropriate option to fill in blank no. 4.

- Ans 1. mugged
 2. muffed
 3. mutilated
 4. muttered

Question ID : 264330151852

Option 1 ID : 264330595028

Option 2 ID : 264330595029

Option 3 ID : 264330595030

Option 4 ID : 264330595027

Status : Answered

Chosen Option : 4

Comprehension:

In the following passage, some words have been deleted. Read the passage carefully and select the most appropriate option to fill in each blank.

(1)___ the breakfast table the next morning, there was no sign of my wife. I (2)___ she was sleeping late, but Gladolia, upon being questioned, only (3)___ her head, (4)___ something, and turned the whites of her eyes up to the ceiling. I was glad when the meal was (5)___ and hurried to the library for another try at that story.

SubQuestion No : 25

Q.25 Select the most appropriate option to fill in blank no. 5.

Ans 1. removed

2. over

3. through

4. undone

Question ID : 264330151853

Option 1 ID : 264330595033

Option 2 ID : 264330595031

Option 3 ID : 264330595032

Option 4 ID : 264330595034

Status : Answered

Chosen Option : 2

ixamBee

Prepare 50% Faster

Multi Tasking Non Technical Staff and Havaladar CBIC and CBN Examination 2023

Roll Number	
Candidate Name	
Venue Name	iON Digital Zone iDZ 2 Sector 62
Exam Date	13/09/2023
Exam Time	12:30 PM - 2:30 PM
Subject	MTS Non Tech Havaladar CBIC and CBN Examination 2023

Section : Numerical and Mathematical Ability

Q.1 A policeman sees a thief and starts chasing him. The distance between the thief and the policeman is 200 m and the speed of the thief is 8 km/h. If the policeman was able to catch the thief in 20 minutes, then the speed of the policeman is ____ km/h.

- Ans**
- 1. 8.4
 - 2. 9.2
 - 3. 8.6
 - 4. 8.2

Question ID : 264330153812

Option 1 ID : 264330602713

Option 2 ID : 264330602711

Option 3 ID : 264330602714

Option 4 ID : 264330602712

Status : Answered

Chosen Option : 3

Q.2 What sum of money (in ₹) will amount to ₹20,400 at the rate of 9% per annum simple interest in four years?

- Ans**
- 1. 18,000
 - 2. 12,000
 - 3. 20,000
 - 4. 15,000

Question ID : 264330156485

Option 1 ID : 264330613327

Option 2 ID : 264330613329

Option 3 ID : 264330613328

Option 4 ID : 264330613330

Status : Answered

Chosen Option : 4

Q.3 A medical store owner purchased medicines worth ₹18,000 from a company. He sold $\frac{2}{5}$ part of the medicine at a 35% loss. On which gain, he should sell the rest of the medicines so that he has neither gain nor loss?

- Ans**
- 1. $23\frac{2}{3}\%$
 - 2. $20\frac{2}{3}\%$
 - 3. $20\frac{1}{3}\%$
 - 4. $23\frac{1}{3}\%$

Question ID : 264330155736
Option 1 ID : 264330610348
Option 2 ID : 264330610350
Option 3 ID : 264330610347
Option 4 ID : 264330610349
Status : Answered
Chosen Option : 4

Q.4 A mixture contains spirit and water in the ratio 3 : 2. If 2 litres of water is added to the mixture, the ratio becomes 5 : 4. Find the quantity of spirit in the mixture (in litres).

- Ans**
- 1. 15
 - 2. 20
 - 3. 25
 - 4. 10

Question ID : 264330153844
Option 1 ID : 264330602840
Option 2 ID : 264330602839
Option 3 ID : 264330602841
Option 4 ID : 264330602842
Status : Answered
Chosen Option : 1

Q.5 A table showing the percentages of the total population of a Town by age group for the year 2016 is given below.

Age Group (in years)	Per cent
up to 15	35
16-30	18.5
30-40	12.5
40-50	25.77
51 and above	8.23

Out of every 1920 persons, the number of persons below 16 years is:

- Ans**
- 1. 672
 - 2. 355
 - 3. 312
 - 4. 1027

Question ID : 264330153886
Option 1 ID : 264330603008
Option 2 ID : 264330603007
Option 3 ID : 264330603009
Option 4 ID : 264330603010
Status : Answered
Chosen Option : 1

Q.6 A number decreased by $\frac{75}{2}\%$ gives 378. What is the number?

- Ans
- 1. 606.4
 - 2. 608.0
 - 3. 603.2
 - 4. 604.8

Question ID : 264330155698
 Option 1 ID : 264330610197
 Option 2 ID : 264330610198
 Option 3 ID : 264330610195
 Option 4 ID : 264330610196
 Status : Answered
 Chosen Option : 4

Q.7 The LCM of the two numbers is 1440 and their HCF is 32. If the first number is 288, then find the second number.

- Ans
- 1. 150
 - 2. 145
 - 3. 180
 - 4. 160

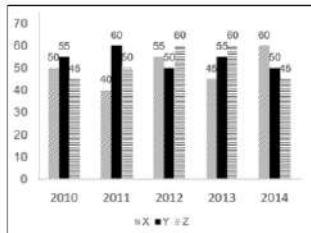
Question ID : 264330155724
 Option 1 ID : 264330610300
 Option 2 ID : 264330610301
 Option 3 ID : 264330610302
 Option 4 ID : 264330610299
 Status : Answered
 Chosen Option : 4

Q.8 A lady travels a distance of 150 metres in 30 minutes and the next 350 metres in 50 minutes. Her average speed during the whole journey is:

- Ans
- 1. $\frac{21}{24}$ km/h
 - 2. $\frac{11}{24}$ km/h
 - 3. $\frac{9}{24}$ km/h
 - 4. $\frac{7}{24}$ km/h

Question ID : 264330156513
 Option 1 ID : 264330613441
 Option 2 ID : 264330613439
 Option 3 ID : 264330613440
 Option 4 ID : 264330613442
 Status : Answered
 Chosen Option : 3

Q.9 The graph shows the production of tyres (in Lakhs) by three different companies X, Y, and Z over the years.
Directions: Study the following graph carefully to answer the question given below it.



What is the difference between the production of company Z in 2010 and the production of company X in 2014?

- Ans**
- 1. 20 lakhs
 - 2. 15 lakhs
 - 3. 10 lakhs
 - 4. 5 lakhs

Question ID : 264330153888
Option 1 ID : 264330603018
Option 2 ID : 264330603016
Option 3 ID : 264330603015
Option 4 ID : 264330603017
Status : Answered
Chosen Option : 2

Q.10 Three years ago, the value of car was ₹2,50,000. If the value depreciates by 6% every year, its value now is:

- Ans**
- 1. ₹2,04,676
 - 2. ₹2,07,646
 - 3. ₹2,07,466
 - 4. ₹2,04,766

Question ID : 264330153879
Option 1 ID : 264330602981
Option 2 ID : 264330602980
Option 3 ID : 264330602979
Option 4 ID : 264330602982
Status : Answered
Chosen Option : 2

Q.11 The income of A and B are in the ratio of 5 : 4 and the income of B and C are in the ratio of 5 : 6. What is the ratio of incomes of A and C?

- Ans**
- 1. 5 : 6
 - 2. 24 : 25
 - 3. 25 : 24
 - 4. 6 : 5

Question ID : 264330153805
Option 1 ID : 264330602685
Option 2 ID : 264330602684
Option 3 ID : 264330602683
Option 4 ID : 264330602686
Status : Answered
Chosen Option : 3

Q.12 Find the volume a cube, each of whose sides measures 7 cm.

- Ans
- ✓ 1. 343 cm^3
 - ✗ 2. 282 cm^3
 - ✗ 3. 294 cm^3
 - ✗ 4. 49 cm^3

Question ID : 264330153895
Option 1 ID : 264330603045
Option 2 ID : 264330603044
Option 3 ID : 264330603046
Option 4 ID : 264330603043
Status : Answered
Chosen Option : 1

Q.13 A person crosses a 750 m long street in 5 minutes. Find his speed in km/h.

- Ans
- ✗ 1. 8.40
 - ✓ 2. 9.00
 - ✗ 3. 7.20
 - ✗ 4. 10.80

Question ID : 264330156365
Option 1 ID : 264330612860
Option 2 ID : 264330612861
Option 3 ID : 264330612859
Option 4 ID : 264330612862
Status : Answered
Chosen Option : 2

Q.14 While calculating the average marks of a class, the score increased by 0.5 when marks of one student is wrongly entered as 54 instead of 45. The number of students in the class is:

- Ans
- ✗ 1. 36
 - ✓ 2. 18
 - ✗ 3. 45
 - ✗ 4. 54

Question ID : 264330154041
Option 1 ID : 264330603630
Option 2 ID : 264330603629
Option 3 ID : 264330603628
Option 4 ID : 264330603627
Status : Answered
Chosen Option : 2

Q.15 Two cuboids of dimension $2 \times 3 \times 4$ units and $2 \times 5 \times 4$ units are melted and a single cube is made. What is the side of the cube in units?

- Ans**
- 1. 3.5
 - 2. 3.0
 - 3. 4.0
 - 4. 2.5

Question ID : 264330153828

Option 1 ID : 264330602777

Option 2 ID : 264330602776

Option 3 ID : 264330602778

Option 4 ID : 264330602775

Status : Answered

Chosen Option : 3

Q.16 Simplify the following expression.

$$\left(\frac{5}{3} + \frac{6}{5} \div \frac{18}{5}\right) \text{ of } \frac{5}{12} - \left(\frac{5}{6} \div \frac{5}{12}\right) \text{ of } \frac{5}{12} + \frac{2}{3} \text{ of } \frac{3}{2}$$

- Ans**
- 1. 1
 - 2. $\frac{5}{6}$
 - 3. $\frac{6}{5}$
 - 4. 0

Question ID : 264330153832

Option 1 ID : 264330602792

Option 2 ID : 264330602793

Option 3 ID : 264330602794

Option 4 ID : 264330602791

Status : Answered

Chosen Option : 1

Q.17 A can complete a piece of work in 40 days and B can complete the same work in 60 days. They work together for 8 days. How much work is left?

- Ans**
- 1. $\frac{2}{5}$
 - 2. $\frac{1}{5}$
 - 3. $\frac{2}{3}$
 - 4. $\frac{1}{3}$

Question ID : 264330155973

Option 1 ID : 264330611294

Option 2 ID : 264330611293

Option 3 ID : 264330611292

Option 4 ID : 264330611291

Status : Answered

Chosen Option : 3

Q.18 Ramesh purchased a bag for ₹1,275 and sold it at a gain of 15% but calculated on the selling price. Find the selling price of the bag.

- Ans
- 1. ₹1,325
 - 2. ₹1,400
 - 3. ₹1,475
 - 4. ₹1,500

Question ID : 264330158210
Option 1 ID : 264330620199
Option 2 ID : 264330620200
Option 3 ID : 264330620201
Option 4 ID : 264330620202
Status : Answered
Chosen Option : 3

Q.19 If the average marks of three sections of Class IX, having 25, 35 and 40 students, respectively, is 60, 70 and 80, then the average marks of all the students of Class IX is:

- Ans
- 1. 75
 - 2. 71.5
 - 3. 70.5
 - 4. 72

Question ID : 264330156467
Option 1 ID : 264330613255
Option 2 ID : 264330613256
Option 3 ID : 264330613257
Option 4 ID : 264330613258
Status : Answered
Chosen Option : 2

Q.20 A and B can do a piece of work in 5 days. B and C can do the same work in 8 days, while C and A can do it in 16 days. Find the time (in days) in which A, B and C can finish the work, working together.

- Ans
- 1. $5\frac{4}{31}$
 - 2. $4\frac{5}{31}$
 - 3. $5\frac{5}{17}$
 - 4. $5\frac{5}{31}$

Question ID : 264330155756
Option 1 ID : 264330610428
Option 2 ID : 264330610427
Option 3 ID : 264330610430
Option 4 ID : 264330610429
Status : Answered
Chosen Option : 4

Q.1 What should come in place of ? in the given series?

10 21 43 87 175 ?

- Ans
- 1. 308
 - 2. 351
 - 3. 376
 - 4. 367

Question ID : 264330151556

Option 1 ID : 264330593853

Option 2 ID : 264330593854

Option 3 ID : 264330593851

Option 4 ID : 264330593852

Status : Answered

Chosen Option : 2

Q.2 If 'P' stands for '×', 'Q' stands for '+', 'R' stands for '-' and 'S' stands for '÷', what will come in place of the question mark (?) in the following equation?

9 P 9 R (7 P 3) S 24 R 6 P 2 = ?

- Ans
- 1. 76
 - 2. 72
 - 3. 63
 - 4. 54

Question ID : 264330151794

Option 1 ID : 264330594804

Option 2 ID : 264330594806

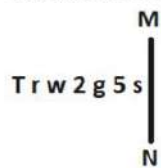
Option 3 ID : 264330594805

Option 4 ID : 264330594803

Status : Answered

Chosen Option : 2

Q.3 Select the correct mirror image of the given figure when the mirror is placed at MN as shown below.



- Ans
- 1. s 5 g 2 w 1 T
 - 2. s 2 g 5 w 1 T
 - 3. s 2 g 5 w 1 T
 - 4. s 2 g w 2 1 T

Question ID : 264330151517

Option 1 ID : 264330593696

Option 2 ID : 264330593695

Option 3 ID : 264330593698

Option 4 ID : 264330593697

Status : Answered

Chosen Option : 3

Q.4 Select the word-pair that best represents a similar relationship to the one expressed in the pair of words given below.

(The words must be considered as meaningful English words and must not be related to each other based on the number of letters/number of consonants/vowels in the word)

Lava : Volcano

- Ans**
- 1. Avalanche : Ice
 - 2. Ice : Glass
 - 3. Steam : Geyser
 - 4. Cascade : Precipice

Question ID : 264330154637

Option 1 ID : 264330606014

Option 2 ID : 264330606011

Option 3 ID : 264330606013

Option 4 ID : 264330606012

Status : Answered

Chosen Option : 3

Q.5 In a certain code language, 'krishi might be coming' is written as 'gi ji hi fi' and 'prem will be going' is written as 'li mi ri hi'. How is 'be' written in the given language?

- Ans**
- 1. li
 - 2. ri
 - 3. hi
 - 4. mi

Question ID : 264330155636

Option 1 ID : 264330609947

Option 2 ID : 264330609950

Option 3 ID : 264330609949

Option 4 ID : 264330609948

Status : Answered

Chosen Option : 3

Q.6 What should come in place of ? in the given series?

16 20 28 40 56 ?

- Ans**
- 1. 78
 - 2. 69
 - 3. 75
 - 4. 76

Question ID : 264330151714

Option 1 ID : 264330594484

Option 2 ID : 264330594485

Option 3 ID : 264330594486

Option 4 ID : 264330594483

Status : Answered

Chosen Option : 4

Q.7 10 is related to 97 following a certain logic. Following the same logic, 12 is related to 141. To which of the following is 14 related to, following the same logic?

- Ans** 1. 193
 2. 191
 3. 194
 4. 192

Question ID : 264330151600
Option 1 ID : 264330594029
Option 2 ID : 264330594027
Option 3 ID : 264330594030
Option 4 ID : 264330594028
Status : Answered
Chosen Option : 1

Q.8 If F means '-', G means 'x', D means '+', B means '=', then what will come in place of the question mark (?) in the following equation?

$$15 \text{ G } 10 \text{ D } 30 \text{ B } 43 \text{ F } 28 = ?$$

- Ans** 1. 30
 2. 20
 3. 25
 4. 10

Question ID : 264330154683
Option 1 ID : 264330606198
Option 2 ID : 264330606196
Option 3 ID : 264330606197
Option 4 ID : 264330606195
Status : Answered
Chosen Option : 2

Q.9 What should come in place of '?' in the given series?

$$46 \text{ ? } 358 \text{ } 1060 \text{ } 3166 \text{ } 9484 \text{ } 28438$$

- Ans** 1. 132
 2. 122
 3. 116
 4. 124

Question ID : 264330151444
Option 1 ID : 264330593404
Option 2 ID : 264330593403
Option 3 ID : 264330593406
Option 4 ID : 264330593405
Status : Not Answered
Chosen Option : --

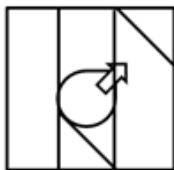
Q.10 Select the option figure in which the given figure (X) is embedded as its part (rotation is NOT allowed).



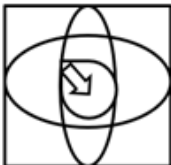
(X)

Ans

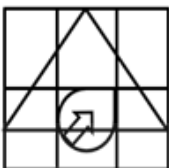
✗ 1.



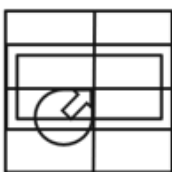
✗ 2.



✗ 3.



✓ 4.



Question ID : 264330151731

Option 1 ID : 264330594554

Option 2 ID : 264330594552

Option 3 ID : 264330594553

Option 4 ID : 264330594551

Status : Answered

Chosen Option : 4

Q.11 12 is related to 59 following a certain logic. Following the same logic, 17 is related to 84. To which of the following is 19 related to, following the same logic?

Ans ✗ 1. 91

✓ 2. 94

✗ 3. 93

✗ 4. 92

Question ID : 264330151588

Option 1 ID : 264330593979

Option 2 ID : 264330593982

Option 3 ID : 264330593981

Option 4 ID : 264330593980

Status : Answered

Chosen Option : 2

Q.12 In a certain code language, 'DEAF' is coded as '5718' and 'HEAD' is coded as '8137'. What is the code for 'H' in the given code language?

- Ans**
- 1. 1
 - 2. 3
 - 3. 8
 - 4. 7

Question ID : 264330151694
Option 1 ID : 264330594405
Option 2 ID : 264330594403
Option 3 ID : 264330594406
Option 4 ID : 264330594404
Status : Answered
Chosen Option : 2

Q.13 What should come in place of ? in the given series based on the English alphabetical order?

YIQ, AKR, CMS, EOT, ?

- Ans**
- 1. HPV
 - 2. GQU
 - 3. FPU
 - 4. FRV

Question ID : 264330155785
Option 1 ID : 264330610546
Option 2 ID : 264330610544
Option 3 ID : 264330610545
Option 4 ID : 264330610543
Status : Answered
Chosen Option : 2

Q.14 What should come in place of ? in the given series based on the English alphabetical order?

FQS, IUT, LYU, OCV, ?

- Ans**
- 1. QFV
 - 2. QHU
 - 3. SHV
 - 4. RGW

Question ID : 264330155798
Option 1 ID : 264330610595
Option 2 ID : 264330610597
Option 3 ID : 264330610598
Option 4 ID : 264330610596
Status : Answered
Chosen Option : 4

Q.15 Read the given statements and conclusions carefully. You have to take the given statements to be true even if they seem to be at variance from commonly known facts. You have to decide which conclusion/s logically follow/s from the given statements.

Statements: All wool is crochet. Some crochet are skirts. All skirts are bread.

Conclusion I: Some crochet is wool.

Conclusion II: Some bread is crochet.

- Ans**
- 1. Neither conclusion (I) nor (II) is follow.
 - 2. Only conclusion (I) is follow.
 - 3. Both conclusions (I) and (II) are follow.
 - 4. Only conclusion (II) is follow.

Question ID : 264330155933

Option 1 ID : 264330611137

Option 2 ID : 264330611135

Option 3 ID : 264330611138

Option 4 ID : 264330611136

Status : Answered

Chosen Option : 3

Q.16 K, L, M, N, O, P, Q and R are sitting around a square table facing the center of the table. Some of them are sitting at the corners while some are sitting at the exact center of the sides. R sits second to the right of Q. Q sits in one of the corners. M sits third to the left of N. M does not sit in any of the corners. O is the immediate neighbour of Q and R. K is not the neighbour of N. L sits third to the left of R.

How many people sit between K and Q, when counted from the right of K?

- Ans**
- 1. Two
 - 2. One
 - 3. Three
 - 4. Four

Question ID : 264330155537

Option 1 ID : 264330609552

Option 2 ID : 264330609551

Option 3 ID : 264330609553

Option 4 ID : 264330609554

Status : Answered

Chosen Option : 3

Q.17 Read the given statements and conclusions carefully. You have to take the given statements to be true even if they seem to be at variance from commonly known facts. You have to decide which conclusion/s logically follow/s from the given statements.

Statements: Some chairs are fans. All fans are pots. Some pots are hot.

Conclusion I: Some fans are chairs.

Conclusion II: Some hot are pots.

- Ans**
- 1. Only conclusion (I) is follow.
 - 2. Both conclusions (I) and (II) are follow.
 - 3. Only conclusion (II) is follow.
 - 4. Neither conclusion (I) nor (II) is follow.

Question ID : 264330155897

Option 1 ID : 264330610991

Option 2 ID : 264330610994

Option 3 ID : 264330610992

Option 4 ID : 264330610993

Status : Answered

Chosen Option : 2

Q.18 Select the combination of letters that when sequentially placed in the blanks of the given series, will complete the series.

P _ Q _ QQ _ Q P _ Q

- Ans
- 1. PPQQP
 - 2. QPPQQ
 - 3. PPQPP
 - 4. QPQPQ

Question ID : 264330151651

Option 1 ID : 264330594231

Option 2 ID : 264330594232

Option 3 ID : 264330594233

Option 4 ID : 264330594234

Status : Answered

Chosen Option : 2

Q.19 Which figure should replace the question mark (?) if the following figure series were to be continued?

Z	7	4	=	
B 4 7 =	= Z S B	S B = Z	Z 4 F S	?
S	4	F	B	

Ans

1.

S
= F 4 B
Z

2.

B
S Z 4 F
△

3.

B
F S 4 Z
△

4.

B
F S Z 4
△

Question ID : 264330154749

Option 1 ID : 264330606459

Option 2 ID : 264330606461

Option 3 ID : 264330606462

Option 4 ID : 264330606460

Status : Answered

Chosen Option : 3

Q.20 If 7th Nov 2005 is Monday, then what will be the day of the week on 17th Nov 2015?

- Ans
- 1. Monday
 - 2. Tuesday
 - 3. Saturday
 - 4. Friday

Question ID : 264330154336
Option 1 ID : 264330604808
Option 2 ID : 264330604807
Option 3 ID : 264330604810
Option 4 ID : 264330604809
Status : Answered
Chosen Option : 2

Section : General Awareness

Q.1 The novel 'God of Small Things' is a creation of which novelist?

- Ans
- 1. Kamala Das
 - 2. Amrita Pritam
 - 3. Ashapurna Devi
 - 4. Arundhati Roy

Question ID : 264330160970
Option 1 ID : 264330631212
Option 2 ID : 264330631213
Option 3 ID : 264330631211
Option 4 ID : 264330631214
Status : Not Answered
Chosen Option : --

Q.2 Which of the following terms best describes the average number of runs a batter makes per 100 deliveries in cricket?

- Ans
- 1. Economy rate
 - 2. Batting average
 - 3. Strike rate
 - 4. Batting rate

Question ID : 264330161160
Option 1 ID : 264330631971
Option 2 ID : 264330631973
Option 3 ID : 264330631972
Option 4 ID : 264330631974
Status : Answered
Chosen Option : 3

Q.3 Yuki Bhambri and Saketh Myneni won the Bangkok Open Challenger title 2023. They are related to which sport?

- Ans
- 1. Badminton
 - 2. Squash
 - 3. Tennis
 - 4. Table Tennis

Question ID : 264330158368
Option 1 ID : 264330620832
Option 2 ID : 264330620834
Option 3 ID : 264330620831
Option 4 ID : 264330620833
Status : Not Answered
Chosen Option : --

Q.4 Deba Prasad Das, Pankaj Charan Das and Gangadhar Pradhan are associated with which of the following dance forms?

- Ans
- 1. Odissi
 - 2. Bharatanatyam
 - 3. Manipuri
 - 4. Kathak

Question ID : 264330160814
Option 1 ID : 264330630587
Option 2 ID : 264330630589
Option 3 ID : 264330630590
Option 4 ID : 264330630588
Status : Not Answered
Chosen Option : --

Q.5 Which of the following is NOT a fundamental duty listed in the Indian Constitution?

- Ans
- 1. To uphold and protect the sovereignty, unity and integrity of India
 - 2. To engage in political activities to promote democracy
 - 3. To value and preserve the rich heritage of our composite culture
 - 4. To safeguard public property and to abjure violence

Question ID : 264330162246
Option 1 ID : 264330636311
Option 2 ID : 264330636314
Option 3 ID : 264330636313
Option 4 ID : 264330636312
Status : Answered
Chosen Option : 1

Q.6 As of 2022, 12-foot statue of Adi Shankaracharya, which was unveiled by the Prime Minister of India is located in _____

- Ans
- 1. Pune
 - 2. Ahmedabad
 - 3. Varanasi
 - 4. Kedarnath

Question ID : 264330162698
Option 1 ID : 264330638113
Option 2 ID : 264330638114
Option 3 ID : 264330638112
Option 4 ID : 264330638111
Status : Answered
Chosen Option : 1

Q.7 During cell division, the formation of a new cell wall is followed by the accumulation of:

- Ans
- 1. peristome
 - 2. periplasm
 - 3. phragmoplast
 - 4. protoplast

Question ID : 264330156616
Option 1 ID : 264330613854
Option 2 ID : 264330613853
Option 3 ID : 264330613851
Option 4 ID : 264330613852
Status : Answered
Chosen Option : 4

Q.8 Bhanu Ji is associated with which of the following Gharanas of Kathak?

- Ans
- 1. Lucknow
 - 2. Raigarh
 - 3. Banaras
 - 4. Jaipur

Question ID : 264330160808
Option 1 ID : 264330630564
Option 2 ID : 264330630566
Option 3 ID : 264330630565
Option 4 ID : 264330630563
Status : Not Answered
Chosen Option : --

Q.9 Which of the following is an example of capital expenditure in the government budget?

- Ans
- 1. Interest payment on a loan
 - 2. Purchase of military equipment
 - 3. Maintenance of government buildings
 - 4. Subsidies provided to farmers

Question ID : 264330157276
Option 1 ID : 264330616469
Option 2 ID : 264330616468
Option 3 ID : 264330616470
Option 4 ID : 264330616467
Status : Answered
Chosen Option : 2

Q.10 FIH Men's Hockey World Cup 2023 was held in which Indian state/UT?

- Ans
- 1. Maharashtra
 - 2. New Delhi
 - 3. Odisha
 - 4. Gujarat

Question ID : 264330158218
Option 1 ID : 264330620232
Option 2 ID : 264330620233
Option 3 ID : 264330620231
Option 4 ID : 264330620234
Status : Answered
Chosen Option : 3

Q.11 An image of which of the following elements is shown by the map of Cyprus from which the element got its name?

- Ans
- 1. Silver
 - 2. Cobalt
 - 3. Copper
 - 4. Sulphur

Question ID : 264330161058
Option 1 ID : 264330631564
Option 2 ID : 264330631566
Option 3 ID : 264330631565
Option 4 ID : 264330631563
Status : Answered
Chosen Option : 3

Q.12 Consider the following statements about Abhinav Bharat Society.

- 1) The society was a community of socialists believed in an armed revolution.
- 2) The society was founded by Jaya Prakash Narayan.
- 3) Mitra Mela, a revolutionary secret society was renamed Abhinav Bharat in 1904.

Select the correct statement(s) using the codes given below.

- Ans
- 1. Both 1 and 2
 - 2. 1, 2 and 3
 - 3. Both 2 and 3
 - 4. Both 1 and 3

Question ID : 264330160884
Option 1 ID : 264330630867
Option 2 ID : 264330630870
Option 3 ID : 264330630869
Option 4 ID : 264330630868
Status : Answered
Chosen Option : 3

Q.13 The Pradhan Mantri Garib Kalyan Rojgar Abhiyaan (PMGKRA) was launched in the year 2020 by which Ministry of Government of India?

- Ans
- 1. Ministry of Ports, Shipping and Waterways
 - 2. Ministry of Social Justice and Empowerment
 - 3. Ministry of Micro, Small and Medium Enterprises
 - 4. Ministry of Rural Development

Question ID : 264330161577
Option 1 ID : 264330633637
Option 2 ID : 264330633636
Option 3 ID : 264330633635
Option 4 ID : 264330633638
Status : Answered
Chosen Option : 4

Q.14 Who among the following is the author of the Hindi novel 'Raag Darbari'?

- Ans 1. Shrilal Shukla
 2. Rahul Sankrityayan
 3. Premchand
 4. Kashinath Singh

Question ID : 264330161763
Option 1 ID : 264330634382
Option 2 ID : 264330634380
Option 3 ID : 264330634381
Option 4 ID : 264330634379
Status : Not Answered
Chosen Option : --

Q.15 Who is the first female classical dancer in Indian history to be nominated as a Member of Rajya Sabha, the upper house of the Parliament of India?

- Ans 1. Mukti Mohan
 2. Shobha Naidu
 3. Sanjukta Panigrahi
 4. Rukmini Devi Arundale

Question ID : 264330160982
Option 1 ID : 264330631262
Option 2 ID : 264330631259
Option 3 ID : 264330631260
Option 4 ID : 264330631261
Status : Not Answered
Chosen Option : --

Q.16 What does the term 'Overdraft' mean in banking?

- Ans 1. The process of transferring funds between bank accounts
 2. The maximum withdrawal limit from an ATM
 3. Short-term financing facility
 4. The interest charged on loans

Question ID : 264330161586
Option 1 ID : 264330633671
Option 2 ID : 264330633673
Option 3 ID : 264330633674
Option 4 ID : 264330633672
Status : Answered
Chosen Option : 3

Q.17 Which of the following is an example of Eastern Ghats peak?

- Ans 1. Doddabetta
 2. Mahendragiri
 3. Guru Shikhar
 4. Anamudi

Question ID : 264330161494
Option 1 ID : 264330633303
Option 2 ID : 264330633306
Option 3 ID : 264330633305
Option 4 ID : 264330633304
Status : Answered
Chosen Option : 4

Q.18 Indian musician, Pandit Hari Prasad Chaurasia used to play which of the following musical instruments?

- Ans
- 1. Veena
 - 2. Flute
 - 3. Sarangi
 - 4. Guitar

Question ID : 264330161766
Option 1 ID : 264330634391
Option 2 ID : 264330634394
Option 3 ID : 264330634392
Option 4 ID : 264330634393
Status : Not Answered
Chosen Option : --

Q.19 Which of the following was the first major and decisive victory for the East India Company on the soil of India?

- Ans
- 1. Battle of Sindhuli
 - 2. First Anglo-Maratha War
 - 3. Battle of Plassey
 - 4. Battle of Tiruvannamalai

Question ID : 264330161736
Option 1 ID : 264330634274
Option 2 ID : 264330634272
Option 3 ID : 264330634273
Option 4 ID : 264330634271
Status : Answered
Chosen Option : 3

Q.20 Which of the following locations receives the most rainfall in India?

- Ans
- 1. Prayagraj
 - 2. Guwahati
 - 3. Jaisalmer
 - 4. Mawsynram

Question ID : 264330161306
Option 1 ID : 264330632551
Option 2 ID : 264330632553
Option 3 ID : 264330632554
Option 4 ID : 264330632552
Status : Answered
Chosen Option : 4

Q.21 According to the Census of India 2011, what was the literacy rate recorded in Kerala?

- Ans
- 1. 85.8%
 - 2. 90.3%
 - 3. 87.9%
 - 4. 94.0%

Question ID : 264330161556
Option 1 ID : 264330633554
Option 2 ID : 264330633552
Option 3 ID : 264330633553
Option 4 ID : 264330633551
Status : Answered
Chosen Option : 2

Q.22 The Digital Lok Adalat, powered by AI (Artificial Intelligence) and Blockchain, was launched by the then National Legal Services Authority Chairman _____ during the 18th All India Legal Services Authorities' meet held in Jaipur in July 2022.

- Ans
- 1. Justice RN Mishra
 - 2. Justice DY Chandrachud
 - 3. Justice AS Anand
 - 4. Justice Uday Umesh Lalit

Question ID : 264330161412
Option 1 ID : 264330632978
Option 2 ID : 264330632976
Option 3 ID : 264330632977
Option 4 ID : 264330632975
Status : Answered
Chosen Option : 2

Q.23 Janmashtami is a Hindu festival that celebrates the birth (janma) of the god, Krishna on the eighth (ashtami) day of the dark fortnight of the Hindu month of _____.

- Ans
- 1. Bhadrapada
 - 2. Ashwin
 - 3. Shraavan
 - 4. Ashadha

Question ID : 264330160829
Option 1 ID : 264330630647
Option 2 ID : 264330630649
Option 3 ID : 264330630648
Option 4 ID : 264330630650
Status : Answered
Chosen Option : 1

Q.24 Which of the following music directors is known as 'Mozart of Madras'?

- Ans
- 1. AR Rahman
 - 2. Madan Mohan
 - 3. RD Burman
 - 4. Himesh Reshammiya

Question ID : 264330162285
Option 1 ID : 264330636468
Option 2 ID : 264330636470
Option 3 ID : 264330636467
Option 4 ID : 264330636469
Status : Answered
Chosen Option : 3

Q.25 What is the tenure of the Vice-President of India?

- Ans
- 1. Until the age of 65
 - 2. Until he wants to hold the office
 - 3. 6 years
 - 4. 5 years

Question ID : 264330159911
Option 1 ID : 264330626991
Option 2 ID : 264330626994
Option 3 ID : 264330626992
Option 4 ID : 264330626993
Status : Answered
Chosen Option : 4

Section : English Language and Comprehension

Q.1 Select the most appropriate option that can substitute the underlined segment in the given sentence.

If I hand her a flower and say, "Give it to mamma," she take it to her mother.

- Ans
- 1. was taking it
 - 2. takes it
 - 3. had took it
 - 4. had taken it

Question ID : 264330153488
Option 1 ID : 264330601468
Option 2 ID : 264330601470
Option 3 ID : 264330601469
Option 4 ID : 264330601467
Status : Answered
Chosen Option : 2

Q.2 Select the most appropriate ANTONYM of the given word.
Divergent

- Ans
- 1. Addition
 - 2. Similar
 - 3. Disrespectful
 - 4. Obvious

Question ID : 264330152721
Option 1 ID : 264330598485
Option 2 ID : 264330598484
Option 3 ID : 264330598483
Option 4 ID : 264330598486
Status : Answered
Chosen Option : 2

Q.3 Parts of the following sentence have been underlined and given as options. Select the option that contains an error.

To much seriousness hardens the world, pinning it down with rules.

- Ans
- 1. with rules
 - 2. hardens the
 - 3. to much
 - 4. world, pinning

Question ID : 264330153204
Option 1 ID : 264330600378
Option 2 ID : 264330600375
Option 3 ID : 264330600376
Option 4 ID : 264330600377
Status : Answered
Chosen Option : 3

Q.4 Select the most appropriate meaning of the underlined idiom.
He managed to save his father's business by the sweat of his brow.

- Ans
- 1. incidentally
 - 2. hard work
 - 3. tricks and strategies
 - 4. any way possible

Question ID : 264330153641
Option 1 ID : 264330602038
Option 2 ID : 264330602037
Option 3 ID : 264330602035
Option 4 ID : 264330602036
Status : Answered
Chosen Option : 3

Q.5 Select the option that can be used as a one-word substitute for the given phrase.
A place where water is collected and stored for future use.

- Ans
- 1. Aquarium
 - 2. Resort
 - 3. Sanatorium
 - 4. Reservoir

Question ID : 264330152670
Option 1 ID : 264330598285
Option 2 ID : 264330598286
Option 3 ID : 264330598283
Option 4 ID : 264330598284
Status : Answered
Chosen Option : 4

Q.6 Select the option that will improve the underlined part of the given sentence. In case no improvement is needed, select 'No improvement required'.

The new chairman of the company announced attracted bonus for the employees on the occasion of the new year.

- Ans
- 1. No improvement required
 - 2. announced an attractive bonus for the employees
 - 3. announcing attracted bonus for the employees
 - 4. announced attracting bonus for the employees

Question ID : 264330153612
Option 1 ID : 264330601934
Option 2 ID : 264330601933
Option 3 ID : 264330601932
Option 4 ID : 264330601931
Status : Answered
Chosen Option : 2

Q.7 The following sentence has been divided into four parts. Identify the part that contains an error.

(A) The institute / (B) have been / (C) divided into / (D) multiple departments

- Ans
- 1. A
 - 2. B
 - 3. C
 - 4. D

Question ID : 264330152623
Option 1 ID : 264330598096
Option 2 ID : 264330598095
Option 3 ID : 264330598098
Option 4 ID : 264330598097
Status : Answered
Chosen Option : 2

Q.8 Select the option that can be used as a one-word substitute for the underlined group of words.

They allowed us to powder by crushing the spices, pick over the raisins and lick the stirring spoons.

- Ans
- 1. gain
 - 2. greet
 - 3. guess
 - 4. grind

Question ID : 264330153491
Option 1 ID : 264330601482
Option 2 ID : 264330601479
Option 3 ID : 264330601480
Option 4 ID : 264330601481
Status : Answered
Chosen Option : 4

Q.9 Select the most appropriate synonym of the given word.
Mild

- Ans
- 1. Scathing
 - 2. Brittle
 - 3. Gentle
 - 4. Severe

Question ID : 264330151823
Option 1 ID : 264330594921
Option 2 ID : 264330594920
Option 3 ID : 264330594919
Option 4 ID : 264330594922
Status : Answered
Chosen Option : 3

Q.10 Select the most appropriate idiom to fill in the blank.
Instead of answering the question directly, the politician kept _____.

- Ans
- 1. crying over spilt milk
 - 2. pointing at his laurels
 - 3. beating around the bush
 - 4. spilling the bean

Question ID : 264330151889
Option 1 ID : 264330595177
Option 2 ID : 264330595176
Option 3 ID : 264330595178
Option 4 ID : 264330595175
Status : Answered
Chosen Option : 3

Q.11 Select the most appropriate option that can substitute the underlined segment in the given sentence.
Rishi asked Karan will he get a new football for him?

- Ans
- 1. would he get a new football for him?
 - 2. if he would get a new football for him.
 - 3. if would he get a new football for him?
 - 4. if he will get a new football for him?

Question ID : 264330153504
Option 1 ID : 264330601529
Option 2 ID : 264330601530
Option 3 ID : 264330601527
Option 4 ID : 264330601528
Status : Answered
Chosen Option : 2

Q.12 Select the INCORRECTLY spelt word.

- Ans 1. Omitted
 2. Retrospect
 3. Conscience
 4. Admission

Question ID : 264330152690
Option 1 ID : 264330598363
Option 2 ID : 264330598364
Option 3 ID : 264330598366
Option 4 ID : 264330598365
Status : Answered
Chosen Option : 2

Q.13 Select the most appropriate ANTONYM of the given word.
Often

- Ans 1. Generally
 2. Rarely
 3. Periodically
 4. Usually

Question ID : 264330152775
Option 1 ID : 264330598691
Option 2 ID : 264330598692
Option 3 ID : 264330598694
Option 4 ID : 264330598693
Status : Answered
Chosen Option : 2

Q.14 Parts of the following sentence have been given as options. Select the option that contains an error.
The boy whose the sister is ill has left.

- Ans 1. is ill
 2. has left
 3. The boy
 4. whose the sister

Question ID : 264330152795
Option 1 ID : 264330598773
Option 2 ID : 264330598774
Option 3 ID : 264330598771
Option 4 ID : 264330598772
Status : Answered
Chosen Option : 4

Q.15 Select the most appropriate option to fill in the blank.

A strong _____ for mathematics and problem-solving can be very useful.

- Ans 1. strength
 2. aptitude
 3. functioning
 4. perception

Question ID : 264330151865
Option 1 ID : 264330595080
Option 2 ID : 264330595081
Option 3 ID : 264330595079
Option 4 ID : 264330595082
Status : Answered
Chosen Option : 2

Q.16 Select the INCORRECTLY spelt word.

- Ans 1. Recommendation
 2. Priviledge
 3. Affiliate
 4. Parachute

Question ID : 264330152689
Option 1 ID : 264330598361
Option 2 ID : 264330598359
Option 3 ID : 264330598360
Option 4 ID : 264330598362
Status : Answered
Chosen Option : 2

Q.17 Select the most appropriate idiom to fill in the blank.

My manager forced me to resign from my job as a chef since I underwent a spine surgery. I was depressed and had lost all hope. Later my father motivated me to open my own café and showed me ways to be independent. After all it is true that one should not _____.

- Ans 1. grease the palm
 2. blow one's own trumpet
 3. cry over spilt milk
 4. blow hot and cold

Question ID : 264330152879
Option 1 ID : 264330599108
Option 2 ID : 264330599110
Option 3 ID : 264330599107
Option 4 ID : 264330599109
Status : Answered
Chosen Option : 3

Q.18 Select the most appropriate meaning of the underlined idiom in the following sentence.

He was quaking in his boots when he had to give a speech on the stage.

- Ans
- 1. To tremble in excitement
 - 2. To shake in happiness
 - 3. To tremble with fear
 - 4. To shake in excitement

Question ID : 264330153075
Option 1 ID : 264330599864
Option 2 ID : 264330599866
Option 3 ID : 264330599865
Option 4 ID : 264330599863
Status : Answered
Chosen Option : 1

Q.19 Select the most appropriate option that can substitute the underlined segment in the given sentence. If there is no need to substitute it, select 'No substitution required'.
If I will get good marks, my father will buy me a laptop.

- Ans
- 1. No substitution required
 - 2. am getting
 - 3. gets
 - 4. get

Question ID : 264330152728
Option 1 ID : 264330598514
Option 2 ID : 264330598513
Option 3 ID : 264330598511
Option 4 ID : 264330598512
Status : Answered
Chosen Option : 4

Q.20 Four words of the following sentence have been underlined and given as options.
Select the option that contains a spelling error.
Human activities that release longlived greenhouse gases into the atmosphere also lead to the enhancement of concentrations of shorterlived ozone and particulate matter in the atmosphere.

- Ans
- 1. concentrations
 - 2. particulate
 - 3. release
 - 4. leed

Question ID : 264330151930
Option 1 ID : 264330595337
Option 2 ID : 264330595338
Option 3 ID : 264330595335
Option 4 ID : 264330595336
Status : Answered
Chosen Option : 4

Comprehension:

In the following passage, some words have been deleted. Read the passage carefully and select the most appropriate option to fill in each blank.

Fruits and vegetables contain important vitamins, minerals and plant (1)_____. They also contain fibre. There are many (2)_____ of fruits and vegetables available and many ways to prepare, cook and serve them. A diet (3)_____ in fruit and vegetables can help protect you against cancer, diabetes and heart disease. Eat five kinds of vegetable and two kinds of fruit every day for good health. Most Indians do not eat (4)_____ fruit and vegetables. When buying and serving fruit and vegetables, aim for variety to get the most (5)_____ and appeal.

SubQuestion No : 21

Q.21 Select the most appropriate option to fill in blank number 1.

- Ans 1. residue
 2. bacteria
 3. chemicals
 4. organisms

Question ID : 264330153326

Option 1 ID : 264330600855

Option 2 ID : 264330600858

Option 3 ID : 264330600856

Option 4 ID : 264330600857

Status : Answered

Chosen Option : 3

Comprehension:

In the following passage, some words have been deleted. Read the passage carefully and select the most appropriate option to fill in each blank.

Fruits and vegetables contain important vitamins, minerals and plant (1)_____. They also contain fibre. There are many (2)_____ of fruits and vegetables available and many ways to prepare, cook and serve them. A diet (3)_____ in fruit and vegetables can help protect you against cancer, diabetes and heart disease. Eat five kinds of vegetable and two kinds of fruit every day for good health. Most Indians do not eat (4)_____ fruit and vegetables. When buying and serving fruit and vegetables, aim for variety to get the most (5)_____ and appeal.

SubQuestion No : 22

Q.22 Select the most appropriate option to fill in blank number 2.

- Ans 1. traits
 2. characters
 3. varieties
 4. uses

Question ID : 264330153327

Option 1 ID : 264330600860

Option 2 ID : 264330600861

Option 3 ID : 264330600862

Option 4 ID : 264330600859

Status : Answered

Chosen Option : 3

Comprehension:

In the following passage, some words have been deleted. Read the passage carefully and select the most appropriate option to fill in each blank.

Fruits and vegetables contain important vitamins, minerals and plant (1)_____. They also contain fibre. There are many (2)_____ of fruits and vegetables available and many ways to prepare, cook and serve them. A diet (3)_____ in fruit and vegetables can help protect you against cancer, diabetes and heart disease. Eat five kinds of vegetable and two kinds of fruit every day for good health. Most Indians do not eat (4)_____ fruit and vegetables. When buying and serving fruit and vegetables, aim for variety to get the most (5)_____ and appeal.

SubQuestion No : 23

Q.23 Select the most appropriate option to fill in blank number 3.

- Ans 1. immersed
 2. rich
 3. content
 4. varied

Question ID : 264330153328

Option 1 ID : 264330600863

Option 2 ID : 264330600865

Option 3 ID : 264330600864

Option 4 ID : 264330600866

Status : Answered

Chosen Option : 2

Comprehension:

In the following passage, some words have been deleted. Read the passage carefully and select the most appropriate option to fill in each blank.

Fruits and vegetables contain important vitamins, minerals and plant (1)_____. They also contain fibre. There are many (2)_____ of fruits and vegetables available and many ways to prepare, cook and serve them. A diet (3)_____ in fruit and vegetables can help protect you against cancer, diabetes and heart disease. Eat five kinds of vegetable and two kinds of fruit every day for good health. Most Indians do not eat (4)_____ fruit and vegetables. When buying and serving fruit and vegetables, aim for variety to get the most (5)_____ and appeal.

SubQuestion No : 24

Q.24 Select the most appropriate option to fill in blank number 4.

- Ans 1. some
 2. enough
 3. many
 4. plenty

Question ID : 264330153329

Option 1 ID : 264330600869

Option 2 ID : 264330600868

Option 3 ID : 264330600867

Option 4 ID : 264330600870

Status : Answered

Chosen Option : 2

Comprehension:

In the following passage, some words have been deleted. Read the passage carefully and select the most appropriate option to fill in each blank.

Fruits and vegetables contain important vitamins, minerals and plant (1)_____. They also contain fibre. There are many (2)_____ of fruits and vegetables available and many ways to prepare, cook and serve them. A diet (3)_____ in fruit and vegetables can help protect you against cancer, diabetes and heart disease. Eat five kinds of vegetable and two kinds of fruit every day for good health. Most Indians do not eat (4)_____ fruit and vegetables. When buying and serving fruit and vegetables, aim for variety to get the most (5)_____ and appeal.

SubQuestion No : 25

Q.25 Select the most appropriate option to fill in blank number 5.

- Ans 1. assortment
 2. fun
 3. nutrients
 4. advancement

Question ID : 264330153330

Option 1 ID : 264330600872

Option 2 ID : 264330600873

Option 3 ID : 264330600874

Option 4 ID : 264330600871

Status : Answered

Chosen Option : 3

ixamBee

Prepare 50% Faster

Multi Tasking Non Technical Staff and Havaladar CBIC and CBN Examination 2023

Roll Number	
Candidate Name	
Venue Name	iON Digital Zone iDZ 1 Bhauti
Exam Date	13/09/2023
Exam Time	4:00 PM - 6:00 PM
Subject	MTS Non Tech Havaladar CBIC and CBN Examination 2023

Section : Numerical and Mathematical Ability

Q.1 A microwave and a dish washing machine were sold for ₹27,000 each. If the microwave was sold at a gain of 25% and the dish washing machine at a loss of 25%. What is the overall profit% or loss% on the entire transaction?

- Ans**
- 1. 5.50% loss
 - 2. 7.75% profit
 - 3. 6.25% loss
 - 4. 8.25% profit

Question ID : 264330156285
Option 1 ID : 264330612542
Option 2 ID : 264330612540
Option 3 ID : 264330612539
Option 4 ID : 264330612541
Status : Answered
Chosen Option : 3

Q.2 A, B and C started a business. A's capital is 7 times the capital of C and B's capital is 2 times the capital of A. If the profit is ₹7,920, then find the share of C (in ₹).

- Ans**
- 1. 350
 - 2. 360
 - 3. 365
 - 4. 355

Question ID : 264330156225
Option 1 ID : 264330612299
Option 2 ID : 264330612301
Option 3 ID : 264330612302
Option 4 ID : 264330612300
Status : Answered
Chosen Option : 2

Q.3 The average expenditure of 32 persons is ₹6,000 and that of another 40 persons is ₹3,300. The average expenditure of the whole group is:

- Ans**
- 1. ₹4,800
 - 2. ₹4,500
 - 3. ₹4,650
 - 4. ₹4,162

Question ID : 264330153869
Option 1 ID : 264330602942
Option 2 ID : 264330602939
Option 3 ID : 264330602940
Option 4 ID : 264330602941
Status : Answered
Chosen Option : 2

Q.4 A person invests ₹5,000 at a simple interest rate of 5% per annum for 5 years. At the end of 5 years, she reinvests the entire amount at the same rate of interest for another 3 years. What will be the total interest earned by the person at the end of 8 years?

- Ans**
- 1. ₹2,156.50
 - 2. ₹2,256.50
 - 3. ₹2,323.50
 - 4. ₹2,187.50

Question ID : 264330156270
Option 1 ID : 264330612480
Option 2 ID : 264330612481
Option 3 ID : 264330612482
Option 4 ID : 264330612479
Status : Answered
Chosen Option : 4

Q.5 A shopkeeper bought an oven for ₹25,000 and sold it for ₹29,500. He spent ₹1,500 as overheads. What is his loss or gain percentage (rounded off to the nearest integer)?

- Ans**
- 1. Loss by 11%
 - 2. Gain by 13%
 - 3. Loss by 13%
 - 4. Gain by 11%

Question ID : 264330163011
Option 1 ID : 264330639361
Option 2 ID : 264330639360
Option 3 ID : 264330639359
Option 4 ID : 264330639362
Status : Answered
Chosen Option : 4

Q.6 A motorboat travelling at some speed can cover 28 km upstream and 40 km downstream in 11 hours. At the same speed it can travel 30 km downstream and 16 km upstream in 7 hours, then the speed of the stream is:

- Ans**
- 1. 2 km/h
 - 2. 4 km/h
 - 3. 3 km/h
 - 4. 1 km/h

Question ID : **264330154094**
Option 1 ID : **264330603839**
Option 2 ID : **264330603842**
Option 3 ID : **264330603841**
Option 4 ID : **264330603840**
Status : **Answered**
Chosen Option : **3**

Q.7 The longest diagonal of a cube is $6\sqrt{3}$ cm. Find the total surface area of the cube.

- Ans**
- 1. 648 cm^2
 - 2. 216 cm^2
 - 3. 36 cm^2
 - 4. 324 cm^2

Question ID : **264330153897**
Option 1 ID : **264330603053**
Option 2 ID : **264330603051**
Option 3 ID : **264330603052**
Option 4 ID : **264330603054**
Status : **Answered**
Chosen Option : **2**

Q.8 The following table gives the national income and the population of a country for the years 1984-85 to 1989-90.

Year	National Income (in crores)	Population (In crore)
1984-85	₹229.225	74.0
1985-86	₹261.174	75.0
1986-87	₹291.556	77.0
1987-88	₹329.200	78.5
1988-89	₹389.500	80.0
1989-90	₹434.500	81.5

What was the average national income (in crores) for the years 1987-88, 1988-89 and 1989-90?

- Ans**
- 1. ₹392.4
 - 2. ₹384.4
 - 3. ₹398.2
 - 4. ₹396.2

Question ID : **264330156281**
Option 1 ID : **264330612524**
Option 2 ID : **264330612523**
Option 3 ID : **264330612526**
Option 4 ID : **264330612525**
Status : **Answered**
Chosen Option : **2**

Q.9 Find a fourth proportional to the numbers 3, 9, 8.

- Ans
- 1. 10
 - 2. 12
 - 3. 20
 - 4. 24

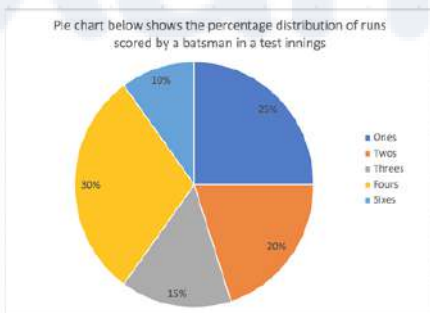
Question ID : 264330153878
 Option 1 ID : 264330602976
 Option 2 ID : 264330602978
 Option 3 ID : 264330602975
 Option 4 ID : 264330602977
 Status : Answered
 Chosen Option : 4

Q.10 What is the average of natural numbers from 1 to 73?

- Ans
- 1. 28
 - 2. 37
 - 3. 30
 - 4. 34

Question ID : 264330155726
 Option 1 ID : 264330610307
 Option 2 ID : 264330610310
 Option 3 ID : 264330610308
 Option 4 ID : 264330610309
 Status : Answered
 Chosen Option : 2

Q.11 The following Pie chart shows the percentage distribution of runs scored by a batsman in a test innings.



If the batsman has scored a total of 360 runs, how many 4's and 6's did he hit?

- Ans
- 1. 30 and 3
 - 2. 31 and 2
 - 3. 27 and 6
 - 4. 25 and 8

Question ID : 264330153784
 Option 1 ID : 264330602600
 Option 2 ID : 264330602602
 Option 3 ID : 264330602601
 Option 4 ID : 264330602599
 Status : Answered
 Chosen Option : 3

Q.12 The Value of $\{[2^4(20 \times 5 + 10) \div 11] - (2^3 \times 15 \div 20) - (9 \times 16)\}$ is:

- Ans
- 1. 8
 - 2. 16
 - 3. 10
 - 4. 12

Question ID : 264330156459
Option 1 ID : 264330613224
Option 2 ID : 264330613226
Option 3 ID : 264330613225
Option 4 ID : 264330613223
Status : Answered
Chosen Option : 3

Q.13 A can complete a task in 10 days. He worked for 4 days and then stopped. B completed the remaining work in 9 days.
In how many days can A and B together complete the task?

- Ans
- 1. 6 days
 - 2. 5 days
 - 3. 4 days
 - 4. 7 days

Question ID : 264330156276
Option 1 ID : 264330612505
Option 2 ID : 264330612504
Option 3 ID : 264330612503
Option 4 ID : 264330612506
Status : Answered
Chosen Option : 1

Q.14 Find the compound interest (in ₹) on ₹500 in 2 years at 20% per annum if the interest being compounded half-yearly.

- Ans
- 1. 232.05
 - 2. 132.05
 - 3. 225.08
 - 4. 264.05

Question ID : 264330155748
Option 1 ID : 264330610397
Option 2 ID : 264330610395
Option 3 ID : 264330610396
Option 4 ID : 264330610398
Status : Answered
Chosen Option : 1

Q.15 A solid metallic cuboid of length 11 cm, breadth 8 cm and height 6 cm is melted and reshaped to form a cone of height 14 cm. What is the radius of the cone thus formed?

- Ans**
- ✓ 1. 6 cm
 - ✗ 2. 9 cm
 - ✗ 3. 7 cm
 - ✗ 4. 8 cm

Question ID : 264330154140

Option 1 ID : 264330604023

Option 2 ID : 264330604026

Option 3 ID : 264330604025

Option 4 ID : 264330604024

Status : Answered

Chosen Option : 1

Q.16 P can complete $\frac{1}{5}$ of a work in 12 days and Q can complete $\frac{1}{6}$ of a work in 8 days. In how many days can both P and Q together complete the work?

- Ans**
- ✓ 1. $26\frac{2}{3}$
 - ✗ 2. $24\frac{2}{3}$
 - ✗ 3. $25\frac{4}{5}$
 - ✗ 4. $22\frac{4}{5}$

Question ID : 264330155975

Option 1 ID : 264330611300

Option 2 ID : 264330611299

Option 3 ID : 264330611302

Option 4 ID : 264330611301

Status : Answered

Chosen Option : 1

Q.17 A bike crosses a bridge with a speed of 75 km/h. What will be the length (in km) of the bridge, if the bike takes 20 minutes to cross the bridge?

- Ans**
- ✗ 1. 30
 - ✓ 2. 25
 - ✗ 3. 45
 - ✗ 4. 20

Question ID : 264330155751

Option 1 ID : 264330610409

Option 2 ID : 264330610408

Option 3 ID : 264330610410

Option 4 ID : 264330610407

Status : Answered

Chosen Option : 2

Q.18 What is the greatest three-digit number which when divided by 4, 8 and 9, leaves no remainder?

- Ans**
- 1. 924
 - 2. 963
 - 3. 932
 - 4. 936

Question ID : 264330155685
Option 1 ID : 264330610143
Option 2 ID : 264330610146
Option 3 ID : 264330610144
Option 4 ID : 264330610145
Status : Answered
Chosen Option : 4

Q.19 The price of a bottle is first increased by 15% and later the price was decreased by 24% due to a reduction in sales. Find the net percentage change in the final price of the bottle.

- Ans**
- 1. Decrease of 13.9%
 - 2. Decrease of 12.6%
 - 3. Increase of 13.9%
 - 4. Increase of 12.6%

Question ID : 264330155734
Option 1 ID : 264330610339
Option 2 ID : 264330610341
Option 3 ID : 264330610340
Option 4 ID : 264330610342
Status : Answered
Chosen Option : 2

Q.20 A car covers 60 km at a speed of 84 km/h. If the average speed for the whole journey is 72 km/h, then the speed of the car for the next 60 km of the journey is:

- Ans**
- 1. 63 km/h
 - 2. 68 km/h
 - 3. 78 km/h
 - 4. 75 km/h

Question ID : 264330157894
Option 1 ID : 264330618937
Option 2 ID : 264330618936
Option 3 ID : 264330618935
Option 4 ID : 264330618938
Status : Answered
Chosen Option : 1

Section : Reasoning Ability and Problem Solving

Q.1 What should come in place of '?' in the given series?

14 43 130 391 1174 ?

- Ans
- 1. 3519
 - 2. 2476
 - 3. 3416
 - 4. 3523

Question ID : 264330151479
Option 1 ID : 264330593545
Option 2 ID : 264330593544
Option 3 ID : 264330593543
Option 4 ID : 264330593546
Status : Answered
Chosen Option : 4

Q.2 What should come in place of ? in the given series?

22 24 28 30 34 ?

- Ans
- 1. 38
 - 2. 40
 - 3. 42
 - 4. 36

Question ID : 264330151720
Option 1 ID : 264330594510
Option 2 ID : 264330594507
Option 3 ID : 264330594508
Option 4 ID : 264330594509
Status : Answered
Chosen Option : 4

Q.3 Which figure should replace the question mark (?) if the following figure series were to be continued?

T	□	O	Y	♥	↑	T	N	
O	N	L	Y	♥	□	A	↑	T
♥	↑	T	N	A	Y	♥	2	?

Ans

✗ 1.

△	Y
T	K
♥	2
A	N

✓ 2.

A	Y
♥	K
T	2
△	N

✗ 3.

♥	2
△	A
↑	N
T	Y

✗ 4.

A	Y
♥	△
↑	2
T	N

Question ID : 264330154748
 Option 1 ID : 264330606457
 Option 2 ID : 264330606455
 Option 3 ID : 264330606456
 Option 4 ID : 264330606458
 Status : Answered
 Chosen Option : 4

Q.4 Select the word-pair that best represents a similar relationship to the one expressed in the pair of words given below.

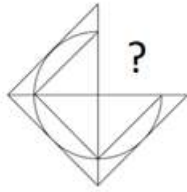
(The words must be considered as meaningful English words and must not be related to each other based on the number of letters/number of consonants/vowels in the word)

Horse : Mare

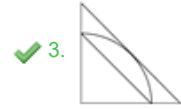
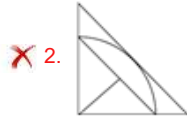
- Ans
- ✓ 1. Fox : Vixen
 - ✗ 2. Duck : Geese
 - ✗ 3. Donkey : Pony
 - ✗ 4. Dog : Puppy

Question ID : 264330154632
 Option 1 ID : 264330605991
 Option 2 ID : 264330605992
 Option 3 ID : 264330605994
 Option 4 ID : 264330605993
 Status : Answered
 Chosen Option : 1

Q.5 Identify the figure that completes the pattern (rotation is NOT allowed).



Ans



Question ID : 264330154515

Option 1 ID : 264330605523

Option 2 ID : 264330605525

Option 3 ID : 264330605524

Option 4 ID : 264330605526

Status : Answered

Chosen Option : 3

Q.6 What should come in place of ? in the given series based on the English alphabetical order?

PVC, SUF, VII, YSL, ?

Ans

✗ 1. CQR

✗ 2. DRP

✗ 3. CSP

✓ 4. BRO

Question ID : 264330155791

Option 1 ID : 264330610570

Option 2 ID : 264330610568

Option 3 ID : 264330610567

Option 4 ID : 264330610569

Status : Answered

Chosen Option : 4

Q.7 Select the combination of letters that when sequentially placed in the blanks of the given series, will complete the series.

DE _ D _ D _ E _ _ ED

- Ans**
- 1. EDDED
 - 2. DDEDE
 - 3. DEDDD
 - 4. DEDEE

Question ID : 264330151652

Option 1 ID : 264330594237

Option 2 ID : 264330594235

Option 3 ID : 264330594238

Option 4 ID : 264330594236

Status : Answered

Chosen Option : 3

Q.8 What will come in place of '?' in the following equation, if '+' and '-' are interchanged and '×' and '÷' are interchanged?

$$12 + 6 \times 5 - 7 \div 2 = ?$$

- Ans**
- 1. -13
 - 2. -14
 - 3. -31
 - 4. -46

Question ID : 264330154657

Option 1 ID : 264330606093

Option 2 ID : 264330606091

Option 3 ID : 264330606094

Option 4 ID : 264330606092

Status : Answered

Chosen Option : 3

Q.9 4 is related to 14 following a certain logic. Following the same logic, 7 is related to 26. To which of the following is 9 related to, following the same logic?

- Ans**
- 1. 37
 - 2. 36
 - 3. 34
 - 4. 35

Question ID : 264330151604

Option 1 ID : 264330594046

Option 2 ID : 264330594045

Option 3 ID : 264330594043

Option 4 ID : 264330594044

Status : Answered

Chosen Option : 3

Q.10 If 15 July 2010 is a Thursday, then what will be the day of the week on 5 June 2022?

- Ans
- 1. Wednesday
 - 2. Tuesday
 - 3. Monday
 - 4. Sunday

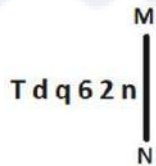
Question ID : 264330154354
Option 1 ID : 264330604882
Option 2 ID : 264330604881
Option 3 ID : 264330604880
Option 4 ID : 264330604879
Status : Answered
Chosen Option : 2

Q.11 2 is related to 7 following a certain logic. Following the same logic, 4 is related to 63. To which of the following is 9 related to, following the same logic?

- Ans
- 1. 730
 - 2. 728
 - 3. 731
 - 4. 729

Question ID : 264330151586
Option 1 ID : 264330593973
Option 2 ID : 264330593971
Option 3 ID : 264330593974
Option 4 ID : 264330593972
Status : Answered
Chosen Option : 2

Q.12 Select the correct mirror image of the given figure when the mirror is placed at MN as shown below.



- Ans
- 1. n 5 3 d q T
 - 2. n 5 3 p b T
 - 3. n 2 3 p b 1
 - 4. u 5 6 p b T

Question ID : 264330151504
Option 1 ID : 264330593643
Option 2 ID : 264330593646
Option 3 ID : 264330593645
Option 4 ID : 264330593644
Status : Answered
Chosen Option : 2

Q.13 What should come in place of ? in the given series based on the English alphabetical order?

WAP, VEO, UIN, TMM, ?

- Ans
- 1. RPM
 - 2. QPN
 - 3. SQL
 - 4. QSN

Question ID : 264330155793

Option 1 ID : 264330610575

Option 2 ID : 264330610578

Option 3 ID : 264330610576

Option 4 ID : 264330610577

Status : Answered

Chosen Option : 3

Q.14 In a certain code language, 'TUNE' is coded as '4368' and 'UNIT' is coded as '8423'. What is the code for 'T' in the given code language?

- Ans
- 1. 4
 - 2. 3
 - 3. 2
 - 4. 8

Question ID : 264330151701

Option 1 ID : 264330594434

Option 2 ID : 264330594431

Option 3 ID : 264330594432

Option 4 ID : 264330594433

Status : Answered

Chosen Option : 3

Q.15 Read the given statements and conclusions carefully. You have to take the given statements to be true even if they seem to be at variance from commonly known facts. You have to decide which conclusion/s logically follow/s from the given statements.

Statements: Some laptops are pencils. Some pencils are rulers. All rulers are white.

Conclusion I: Some pencils are laptops.

Conclusion II: All rulers are pencils.

- Ans
- 1. Both conclusions (I) and (II) are follow.
 - 2. Only conclusion (I) is follow.
 - 3. Neither conclusion (I) nor (II) is follow.
 - 4. Only conclusion (II) is follow.

Question ID : 264330155892

Option 1 ID : 264330610974

Option 2 ID : 264330610971

Option 3 ID : 264330610973

Option 4 ID : 264330610972

Status : Answered

Chosen Option : 2

Q.16 If D means '-'; C means '*'; F means '+'; B means '+', then what will come in place of the question mark (?) in the following equation?

28 B 72 F 6 D 8 C 4 - ?

- Ans**
- 1. 14
 - 2. 26
 - 3. 18
 - 4. 8

Question ID : 264330154692

Option 1 ID : 264330606232

Option 2 ID : 264330606234

Option 3 ID : 264330606233

Option 4 ID : 264330606231

Status : Answered

Chosen Option : 4

Q.17 Seven people, W, D, J, S, H, G and Y are sitting in a straight line, facing south. G sits second to the left of S. G is the immediate neighbour of D and H. Y sits third to the right of D. Only two people sit to the right of W.

Who sits at the extreme right end of the line?

- Ans**
- 1. W
 - 2. Y
 - 3. J
 - 4. G

Question ID : 264330161692

Option 1 ID : 264330634098

Option 2 ID : 264330634095

Option 3 ID : 264330634096

Option 4 ID : 264330634097

Status : Answered

Chosen Option : 3

Q.18 Read the given statements and conclusions carefully. You have to take the given statements to be true even if they seem to be at variance from commonly known facts. You have to decide which conclusion/s logically follow/s from the given statements.

Statements: All crows are bananas. Some bananas are pink. All pink are white.

Conclusion I: Some crows are bananas.

Conclusion II: All bananas are pink.

- Ans**
- 1. Only conclusion (II) is follow.
 - 2. Neither conclusion (I) nor (II) is follow.
 - 3. Only conclusion (I) is follow.
 - 4. Both conclusions (I) and (II) are follow.

Question ID : 264330155916

Option 1 ID : 264330611068

Option 2 ID : 264330611069

Option 3 ID : 264330611067

Option 4 ID : 264330611070

Status : Answered

Chosen Option : 3

Q.19 What should come in place of '?' in the given series?

11 91 811 ? 65611 590491 5314411

- Ans
- 1. 7129
 - 2. 7291
 - 3. 7921
 - 4. 7912

Question ID : 264330151442
Option 1 ID : 264330593397
Option 2 ID : 264330593396
Option 3 ID : 264330593395
Option 4 ID : 264330593398
Status : Answered
Chosen Option : 2

Q.20 In a certain code language, 'people talk about' is written as 'ki li ni' and 'let them talk' is written as 'si ki hi'. How is 'talk' written in the given language?

- Ans
- 1. li
 - 2. ki
 - 3. hi
 - 4. ni

Question ID : 264330155635
Option 1 ID : 264330609944
Option 2 ID : 264330609943
Option 3 ID : 264330609946
Option 4 ID : 264330609945
Status : Answered
Chosen Option : 2

Section : General Awareness

Q.1 In which year was the Pradhan Mantri Rojgar Protsahan Yojana (PMRPY) launched?

- Ans
- 1. 2018
 - 2. 2015
 - 3. 2016
 - 4. 2022

Question ID : 264330161505
Option 1 ID : 264330633347
Option 2 ID : 264330633349
Option 3 ID : 264330633350
Option 4 ID : 264330633348
Status : Answered
Chosen Option : 4

Q.2 The film based on which of the following novels by Amrita Pritam won the National Film Award?

- Ans
- 1. Nagmani
 - 2. Raseedi Ticket
 - 3. Village No.36
 - 4. Pinjar

Question ID : 264330161764
Option 1 ID : 264330634384
Option 2 ID : 264330634386
Option 3 ID : 264330634385
Option 4 ID : 264330634383
Status : Answered
Chosen Option : 4

Q.3 Which Indian Musician was awarded with the Bharat Ratna in 2001?

- Ans
- 1. Shivkumar Sharma
 - 2. Bhimsen Joshi
 - 3. Bismillah Khan
 - 4. Hariprasad Chaurasia

Question ID : 264330155460
Option 1 ID : 264330609243
Option 2 ID : 264330609245
Option 3 ID : 264330609244
Option 4 ID : 264330609246
Status : Answered
Chosen Option : 3

Q.4 Who was the Prime Minister of India when the Fundamental Duties were first incorporated in the Constitution of India?

- Ans
- 1. Jawaharlal Nehru
 - 2. Indira Gandhi
 - 3. Atal Bihari Vajpayee
 - 4. Rajiv Gandhi

Question ID : 264330159900
Option 1 ID : 264330626948
Option 2 ID : 264330626949
Option 3 ID : 264330626950
Option 4 ID : 264330626947
Status : Answered
Chosen Option : 2

Q.5 Who said the following?

“Money is what money does.”

- Ans
- 1. Prof. Seligman
 - 2. Prof. Cole
 - 3. Prof. Walker
 - 4. Prof. Robertson

Question ID : 264330166032
Option 1 ID : 264330651206
Option 2 ID : 264330651204
Option 3 ID : 264330651203
Option 4 ID : 264330651205
Status : Answered
Chosen Option : 2

Q.6 Which of the following ports is located in Odisha?

- Ans
- 1. Haldia port
 - 2. Kandla port
 - 3. Paradip Port
 - 4. Tuticorin Port

Question ID : 264330161492
Option 1 ID : 264330633296
Option 2 ID : 264330633297
Option 3 ID : 264330633298
Option 4 ID : 264330633295
Status : Answered
Chosen Option : 3

Q.7 Rohini Bhate, Pandit Munnalal Shukla, Kumudini Lakhia and Uma Sharma are famous exponents of which of the following classical dance forms?

- Ans
- 1. Bharatanatyam
 - 2. Kathakali
 - 3. Kathak
 - 4. Kuchipudi

Question ID : 264330160788
Option 1 ID : 264330630483
Option 2 ID : 264330630485
Option 3 ID : 264330630486
Option 4 ID : 264330630484
Status : Answered
Chosen Option : 3

Q.8 The forces exerted on a body during a short period are known as:

- Ans
- 1. Impulse
 - 2. Pressure
 - 3. Surface tension
 - 4. Tensile stress

Question ID : 264330157783
Option 1 ID : 264330618491
Option 2 ID : 264330618492
Option 3 ID : 264330618493
Option 4 ID : 264330618494
Status : Answered
Chosen Option : 1

Q.9 India played the final of ODI Cricket World Cup 2011 against which country?

- Ans
- 1. Australia
 - 2. Sri Lanka
 - 3. England
 - 4. Pakistan

Question ID : 264330158229
Option 1 ID : 264330620277
Option 2 ID : 264330620278
Option 3 ID : 264330620276
Option 4 ID : 264330620275
Status : Answered
Chosen Option : 2

Q.10 Mohiniyattam is a classical dance style belongs to _____.

- Ans
- 1. Kerala
 - 2. Odisha
 - 3. Manipur
 - 4. Tamil Nadu

Question ID : 264330159050
Option 1 ID : 264330623561
Option 2 ID : 264330623559
Option 3 ID : 264330623562
Option 4 ID : 264330623560
Status : Answered
Chosen Option : 1

Q.11 Which of the following is NOT a feature of the Indian political party system?

- Ans
- 1. Lack of effective opposition
 - 2. Single party system
 - 3. Multi-party system
 - 4. Factions and defections

Question ID : 264330159913
Option 1 ID : 264330627001
Option 2 ID : 264330627002
Option 3 ID : 264330626999
Option 4 ID : 264330627000
Status : Answered
Chosen Option : 2

Q.12 Which of the following was the first Satyagraha Movement led by Mahatma Gandhi in British India?

- Ans
- 1. Champaran Satyagraha
 - 2. Kheda Satyagraha
 - 3. Rowlatt Satyagraha
 - 4. Bardoli Satyagraha

Question ID : 264330161750
Option 1 ID : 264330634330
Option 2 ID : 264330634328
Option 3 ID : 264330634327
Option 4 ID : 264330634329
Status : Answered
Chosen Option : 1

Q.13 Dr. Teejan Bai, who was awarded by Padma Vibhushan (2019) is a renowned Indian folk singer and performer from the state of _____.

- Ans
- 1. Himachal Pradesh
 - 2. Chhattisgarh
 - 3. Assam
 - 4. Rajasthan

Question ID : 264330155525
Option 1 ID : 264330609503
Option 2 ID : 264330609506
Option 3 ID : 264330609504
Option 4 ID : 264330609505
Status : Answered
Chosen Option : 4

Q.14 The fundamental vocabulary of _____ dance constitutes mock combat techniques, stylised gaits of birds and animals and movements modelled on the chores of village housewives and mostly performed by male dancers in Eastern India.

- Ans
- 1. Manipuri
 - 2. Kathakali
 - 3. Chhau
 - 4. Sattariya

Question ID : 264330161890
Option 1 ID : 264330634890
Option 2 ID : 264330634889
Option 3 ID : 264330634888
Option 4 ID : 264330634887
Status : Answered
Chosen Option : 3

Q.15 The Red Fort is located in:

- Ans 1. Lucknow
 2. Delhi
 3. Indore
 4. Ahmedabad

Question ID : 264330160769
Option 1 ID : 264330630408
Option 2 ID : 264330630410
Option 3 ID : 264330630407
Option 4 ID : 264330630409
Status : Answered
Chosen Option : 2

Q.16 The Goa government launched a new scheme in November 2022 for which of the following?

- Ans 1. Ithihas Darshan
 2. Goa Darshan
 3. Bharat Darshan
 4. Dev Darshan

Question ID : 264330158326
Option 1 ID : 264330620666
Option 2 ID : 264330620665
Option 3 ID : 264330620663
Option 4 ID : 264330620664
Status : Answered
Chosen Option : 2

Q.17 Rituraj Gaikwad became the first batsman in List-A cricket to hit how many sixes in an over?

- Ans 1. 4
 2. 5
 3. 6
 4. 7

Question ID : 264330158366
Option 1 ID : 264330620823
Option 2 ID : 264330620824
Option 3 ID : 264330620825
Option 4 ID : 264330620826
Status : Answered
Chosen Option : 4

Q.18 The author of 'Malgudi Days' is:

- Ans
- 1. Chetan Bhagat
 - 2. Rabindranath Tagore
 - 3. Vikram Seth
 - 4. RK Narayan

Question ID : 264330155497
Option 1 ID : 264330609391
Option 2 ID : 264330609394
Option 3 ID : 264330609393
Option 4 ID : 264330609392
Status : Answered
Chosen Option : 4

Q.19 Camels are found in which type of forests in India from the following?

- Ans
- 1. Montane forests
 - 2. The thorn forest and scrubs
 - 3. Mangrove forests
 - 4. Tropical evergreen forests

Question ID : 264330161498
Option 1 ID : 264330633322
Option 2 ID : 264330633319
Option 3 ID : 264330633320
Option 4 ID : 264330633321
Status : Answered
Chosen Option : 2

Q.20 Under whom among the following British Governor-Generals was the new policy of 'paramountcy' initiated in British India by the East India Company?

- Ans
- 1. Lord Hastings
 - 2. Lord Amherst
 - 3. Lord Wellesley
 - 4. Lord Cornwallis

Question ID : 264330161738
Option 1 ID : 264330634279
Option 2 ID : 264330634281
Option 3 ID : 264330634280
Option 4 ID : 264330634282
Status : Answered
Chosen Option : 3

Q.21 Paryushana Parva is a festival of which of the following communities?

- Ans
- 1. Jain
 - 2. Christian
 - 3. Parsi
 - 4. Hindu

Question ID : 264330159079
Option 1 ID : 264330623678
Option 2 ID : 264330623677
Option 3 ID : 264330623676
Option 4 ID : 264330623675
Status : Answered
Chosen Option : 1

Q.22 Who coined the word 'cell' in the 1600s, from the Latin word 'cellula', meaning 'small room'?

- Ans
- 1. Louis Pasteur
 - 2. Robert Hooke
 - 3. Theodor Schwann
 - 4. Lynn Margulis

Question ID : 264330161081
Option 1 ID : 264330631657
Option 2 ID : 264330631655
Option 3 ID : 264330631656
Option 4 ID : 264330631658
Status : Answered
Chosen Option : 2

Q.23 Which of the following is a feature of Micro Finance Institutions?

- Ans
- 1. Financial service to government employees
 - 2. Finance service to Union ministers
 - 3. Financial service to corporate
 - 4. Financial service to disadvantaged people

Question ID : 264330161455
Option 1 ID : 264330633149
Option 2 ID : 264330633150
Option 3 ID : 264330633148
Option 4 ID : 264330633147
Status : Answered
Chosen Option : 4

Q.24 Which of the following States became the overall champions in both the men's and women's categories in the 2023 Janjatiya Khel Mahotsav?

- Ans
- 1. Chhattisgarh
 - 2. Karnataka
 - 3. Jharkhand
 - 4. Odisha

Question ID : 264330161131
Option 1 ID : 264330631857
Option 2 ID : 264330631855
Option 3 ID : 264330631856
Option 4 ID : 264330631858
Status : Answered
Chosen Option : 1

Q.25 The Mohorovicic (Moho) discontinuity separates?

- Ans
- 1. Earth's lithosphere and asthenosphere
 - 2. Earth's atmosphere and hydrosphere
 - 3. Earth's crust and the inner core
 - 4. Earth's crust and the mantle

Question ID : 264330157831
Option 1 ID : 264330618683
Option 2 ID : 264330618684
Option 3 ID : 264330618686
Option 4 ID : 264330618685
Status : Answered
Chosen Option : 4

Section : English Language and Comprehension

Q.1 The following sentence has been split into four segments. Identify the segment that contains a grammatical error and select the option which rectifies that error.

The space agency wanted / to test with a chimp / before orbiting an astronaut / in a Mercury capsule.

- Ans
- 1. The space agency want
 - 2. in an Mercury capsule.
 - 3. before orbiting an astronaut
 - 4. to test with an chimp

Question ID : 264330141339
Option 1 ID : 264330553691
Option 2 ID : 264330553693
Option 3 ID : 264330553692
Option 4 ID : 264330553694
Status : Answered
Chosen Option : 3

Q.2 Select the most appropriate option that can substitute the underlined segment in the given sentence.

They said that he is not going to call them.

- Ans
- 1. he shall not call them
 - 2. he has not gone to call them
 - 3. they are not going to call them
 - 4. he was not going to call them

Question ID : 264330152711
Option 1 ID : 264330598445
Option 2 ID : 264330598444
Option 3 ID : 264330598446
Option 4 ID : 264330598443
Status : Answered
Chosen Option : 1

Q.3 Parts of the following sentence have been underlined and given as options. Select the option that contains a misspelt word.
For every endeavour-whether in the area of career, academics, music, sports or even in spirituality, it is a long ardous journey.

- Ans
- 1. ardous
 - 2. endeavour
 - 3. academics
 - 4. career

Question ID : 264330151836
Option 1 ID : 264330594974
Option 2 ID : 264330594971
Option 3 ID : 264330594973
Option 4 ID : 264330594972
Status : Answered
Chosen Option : 1

Q.4 Select the most appropriate meaning of the underlined idiom.

The entrepreneur decided to throw caution to the wind.

- Ans
- 1. Take a risk
 - 2. Take the best option
 - 3. Think innovatively
 - 4. In extreme windy conditions

Question ID : 264330153146
Option 1 ID : 264330600145
Option 2 ID : 264330600143
Option 3 ID : 264330600144
Option 4 ID : 264330600146
Status : Answered
Chosen Option : 1

Q.5 Select the most appropriate synonym of the given word.
Tedious

- Ans
- 1. Carefree
 - 2. Hostile
 - 3. Dynamic
 - 4. Dreary

Question ID : 264330152681
Option 1 ID : 264330598328
Option 2 ID : 264330598330
Option 3 ID : 264330598327
Option 4 ID : 264330598329
Status : Answered
Chosen Option : 4

Q.6 Select the option that can be used as a one-word substitute for the given group of words.
Not fit for eating

- Ans**
- 1. Inept
 - 2. Ineligible
 - 3. Ineluctable
 - 4. Inedible

Question ID : 264330151907
Option 1 ID : 264330595246
Option 2 ID : 264330595243
Option 3 ID : 264330595244
Option 4 ID : 264330595245
Status : Answered
Chosen Option : 4

Q.7 The following sentence has been split into four segments. Identify the segment that contains an error.
If he had paid / attention to the announcement, / he had not / missed the train.

- Ans**
- 1. If he had paid
 - 2. he had not
 - 3. attention to the announcement
 - 4. missed the train

Question ID : 264330143054
Option 1 ID : 264330560491
Option 2 ID : 264330560493
Option 3 ID : 264330560492
Option 4 ID : 264330560494
Status : Answered
Chosen Option : 2

Q.8 Select the most appropriate meaning of the given idiom.
Child's play

- Ans**
- 1. In someone's role
 - 2. Something very easy
 - 3. Weakness
 - 4. Just behaviour

Question ID : 264330151827
Option 1 ID : 264330594938
Option 2 ID : 264330594937
Option 3 ID : 264330594936
Option 4 ID : 264330594935
Status : Answered
Chosen Option : 2

Q.9 Select the option that rectifies the spelling of the underlined word in the given sentence.

The tour company has included all the activities that you have requested in your itenarary.

- Ans
- 1. itinerarey
 - 2. itenerarey
 - 3. itinerary
 - 4. itenerary

Question ID : 264330153228
Option 1 ID : 264330600472
Option 2 ID : 264330600471
Option 3 ID : 264330600474
Option 4 ID : 264330600473
Status : Answered
Chosen Option : 3

Q.10 Select the most appropriate meaning of the given idiom.

Spill the beans

- Ans
- 1. To believe something as it seems
 - 2. To tell a secret
 - 3. To do things in a fair way
 - 4. To cry over what is done

Question ID : 264330153011
Option 1 ID : 264330599618
Option 2 ID : 264330599617
Option 3 ID : 264330599616
Option 4 ID : 264330599615
Status : Answered
Chosen Option : 2

Q.11 Select the most appropriate meaning of the underlined idiom.
The mother requested the nurse to keep an eye on the baby while she went for tea.

- Ans
- 1. Keep informed
 - 2. Mistreat
 - 3. Watch and take care
 - 4. Watch for the arrival or appearance

Question ID : 264330151832
Option 1 ID : 264330594955
Option 2 ID : 264330594957
Option 3 ID : 264330594958
Option 4 ID : 264330594956
Status : Answered
Chosen Option : 3

Q.12 Select the most appropriate option that can substitute the underlined segment in the given sentence.
If you need any help tomorrow, let him knows.

- Ans
- 1. let me know
 - 2. let us known
 - 3. let him known
 - 4. let them knew

Question ID : 264330153596
Option 1 ID : 264330601873
Option 2 ID : 264330601874
Option 3 ID : 264330601872
Option 4 ID : 264330601871
Status : Answered
Chosen Option : 1

Q.13 Select the most appropriate option that can substitute the underlined segment in the given sentence.

Helena loves to dig and played in the dirt like any other child.

- Ans
- 1. playing on dirt
 - 2. playing with in dirt
 - 3. plays of dirt
 - 4. play in the dirt

Question ID : 264330153485
Option 1 ID : 264330601455
Option 2 ID : 264330601458
Option 3 ID : 264330601457
Option 4 ID : 264330601456
Status : Answered
Chosen Option : 4

Q.14 Select the most appropriate option that can substitute the underlined segment in the given sentence.

The development of skills can contribute to structural transformation and economic growth in enhance employability and labour productivity and helping countries to become more competitive.

- Ans
- 1. about enhancing employability
 - 2. by enhanced employability
 - 3. by enhancing employability
 - 4. for enhanced employability

Question ID : 264330151900
Option 1 ID : 264330595215
Option 2 ID : 264330595216
Option 3 ID : 264330595218
Option 4 ID : 264330595217
Status : Answered
Chosen Option : 3

Q.15 Select the most appropriate option that can substitute the underlined segment in the given sentence.

Everyone likes in watch a magic show.

- Ans
- 1. likes to watching
 - 2. like in watching
 - 3. likes to watch
 - 4. liked in watch

Question ID : 264330153472
Option 1 ID : 264330601404
Option 2 ID : 264330601405
Option 3 ID : 264330601403
Option 4 ID : 264330601406
Status : Answered
Chosen Option : 3

Q.16 The given sentence contains an error. Select the option that correctly rectifies the error.

He is the better-looking hero in the entire film industry.

- Ans
- 1. He is the best-looking hero in the entire film industry.
 - 2. He is the good-looking hero than the entire film industry.
 - 3. He is the best-looking hero more than the entire film industry.
 - 4. He is the good-looking hero in the entire film industry.

Question ID : 264330152608
Option 1 ID : 264330598036
Option 2 ID : 264330598037
Option 3 ID : 264330598038
Option 4 ID : 264330598035
Status : Answered
Chosen Option : 1

Q.17 Select the most appropriate option to fill in the blank.
He is first _____ to his job and then to his family.

- Ans
- 1. enabled
 - 2. committed
 - 3. confirmed
 - 4. convinced

Question ID : 264330153550
Option 1 ID : 264330601702
Option 2 ID : 264330601701
Option 3 ID : 264330601700
Option 4 ID : 264330601699
Status : Answered
Chosen Option : 2

Q.18 Select the most appropriate synonym of the given word.
Pretend

- Ans 1. Feign
 2. Benign
 3. Align
 4. Reign

Question ID : 264330151826
Option 1 ID : 264330594933
Option 2 ID : 264330594934
Option 3 ID : 264330594931
Option 4 ID : 264330594932
Status : Answered
Chosen Option : 1

Q.19 Select the most appropriate ANTONYM of the given word.
Align

- Ans 1. Position
 2. Disrupt
 3. Centre
 4. Coincide

Question ID : 264330152590
Option 1 ID : 264330597964
Option 2 ID : 264330597963
Option 3 ID : 264330597965
Option 4 ID : 264330597966
Status : Answered
Chosen Option : 2

Q.20 Select the option that rectifies the spelling of the underlined word in the given sentence.

One of her colleagues had agreed to act as the arbitrator in finalising the contract.

- Ans 1. arbitetator
 2. arbitor
 3. arbitraitor
 4. arbitrator

Question ID : 264330153226
Option 1 ID : 264330600464
Option 2 ID : 264330600465
Option 3 ID : 264330600466
Option 4 ID : 264330600463
Status : Answered
Chosen Option : 4

Comprehension:

In the following passage, some words have been deleted. Read the passage carefully and select the most appropriate option to fill in each blank.

There will only be two types of human beings in the future: the minority having enormous brains and (1)_____ bodies, and the majority with tiny brains and muscular bodies. The size of the average brain will (2)_____ diminish; not because of our innate laziness, but because of our over-concern about our physical appearance. In the old days, most people dreamt of having shelter and a stable food supply. As we no longer struggle for the basic (3)_____, our dreams focus instead on the search for physical beauty, how to obtain and maintain the 'ideal body shape' and healthy life the media promotes. Physical beauty will become the main goal of the majority. They'll do exercises every day, taking (4)_____ to maintain their shape while not noticing that their brains are shrinking. Actually, there is no doubt that they'll work (5)_____ hard to make their brains smaller.

SubQuestion No : 21

Q.21 Select the most appropriate option to fill in blank number 1.

- Ans
- 1. cute
 - 2. minor
 - 3. tiny
 - 4. minute

Question ID : 264330153054

Option 1 ID : 264330599780

Option 2 ID : 264330599781

Option 3 ID : 264330599779

Option 4 ID : 264330599782

Status : Answered

Chosen Option : 3

Comprehension:

In the following passage, some words have been deleted. Read the passage carefully and select the most appropriate option to fill in each blank.

There will only be two types of human beings in the future: the minority having enormous brains and (1)_____ bodies, and the majority with tiny brains and muscular bodies. The size of the average brain will (2)_____ diminish; not because of our innate laziness, but because of our over-concern about our physical appearance. In the old days, most people dreamt of having shelter and a stable food supply. As we no longer struggle for the basic (3)_____, our dreams focus instead on the search for physical beauty, how to obtain and maintain the 'ideal body shape' and healthy life the media promotes. Physical beauty will become the main goal of the majority. They'll do exercises every day, taking (4)_____ to maintain their shape while not noticing that their brains are shrinking. Actually, there is no doubt that they'll work (5)_____ hard to make their brains smaller.

SubQuestion No : 22

Q.22 Select the most appropriate option to fill in blank number 2.

- Ans
- 1. properly
 - 2. gradually
 - 3. appropriately
 - 4. slightly

Question ID : 264330153055

Option 1 ID : 264330599783

Option 2 ID : 264330599784

Option 3 ID : 264330599786

Option 4 ID : 264330599785

Status : Answered

Chosen Option : 2

Comprehension:

In the following passage, some words have been deleted. Read the passage carefully and select the most appropriate option to fill in each blank.

There will only be two types of human beings in the future: the minority having enormous brains and (1)_____ bodies, and the majority with tiny brains and muscular bodies. The size of the average brain will (2)_____ diminish; not because of our innate laziness, but because of our over-concern about our physical appearance. In the old days, most people dreamt of having shelter and a stable food supply. As we no longer struggle for the basic (3)_____, our dreams focus instead on the search for physical beauty, how to obtain and maintain the 'ideal body shape' and healthy life the media promotes. Physical beauty will become the main goal of the majority. They'll do exercises every day, taking (4)_____ to maintain their shape while not noticing that their brains are shrinking. Actually, there is no doubt that they'll work (5)_____ hard to make their brains smaller.

SubQuestion No : 23

Q.23 Select the most appropriate option to fill in blank number 3.

- Ans 1. necessities
 2. identities
 3. facilities
 4. amenities

Question ID : 264330153056

Option 1 ID : 264330599789

Option 2 ID : 264330599790

Option 3 ID : 264330599788

Option 4 ID : 264330599787

Status : Answered

Chosen Option : 1

Comprehension:

In the following passage, some words have been deleted. Read the passage carefully and select the most appropriate option to fill in each blank.

There will only be two types of human beings in the future: the minority having enormous brains and (1)_____ bodies, and the majority with tiny brains and muscular bodies. The size of the average brain will (2)_____ diminish; not because of our innate laziness, but because of our over-concern about our physical appearance. In the old days, most people dreamt of having shelter and a stable food supply. As we no longer struggle for the basic (3)_____, our dreams focus instead on the search for physical beauty, how to obtain and maintain the 'ideal body shape' and healthy life the media promotes. Physical beauty will become the main goal of the majority. They'll do exercises every day, taking (4)_____ to maintain their shape while not noticing that their brains are shrinking. Actually, there is no doubt that they'll work (5)_____ hard to make their brains smaller.

SubQuestion No : 24

Q.24 Select the most appropriate option to fill in blank number 4.

- Ans 1. nutrition
 2. nutrients
 3. preservatives
 4. additives

Question ID : 264330153057

Option 1 ID : 264330599792

Option 2 ID : 264330599791

Option 3 ID : 264330599794

Option 4 ID : 264330599793

Status : Answered

Chosen Option : 4

Comprehension:

In the following passage, some words have been deleted. Read the passage carefully and select the most appropriate option to fill in each blank.

There will only be two types of human beings in the future: the minority having enormous brains and (1)_____ bodies, and the majority with tiny brains and muscular bodies. The size of the average brain will (2)_____ diminish; not because of our innate laziness, but because of our over-concern about our physical appearance. In the old days, most people dreamt of having shelter and a stable food supply. As we no longer struggle for the basic (3)_____, our dreams focus instead on the search for physical beauty, how to obtain and maintain the 'ideal body shape' and healthy life the media promotes. Physical beauty will become the main goal of the majority. They'll do exercises every day, taking (4)_____ to maintain their shape while not noticing that their brains are shrinking. Actually, there is no doubt that they'll work (5)_____ hard to make their brains smaller.

SubQuestion No : 25

Q.25 Select the most appropriate option to fill in blank number 5.

- Ans
- 1. so
 - 2. rarely
 - 3. impishly
 - 4. extremely

Question ID : 264330153058

Option 1 ID : 264330599795

Option 2 ID : 264330599796

Option 3 ID : 264330599798

Option 4 ID : 264330599797

Status : Answered

Chosen Option : 3

Multi Tasking Non Technical Staff and Havalдар CBIC and CBN Examination 2023

Roll Number	
Candidate Name	
Venue Name	UNZIP TECHNOLOGY LLP.
Exam Date	14/09/2023
Exam Time	9:00 AM - 11:00 AM
Subject	MTS Non Tech Havalдар CBIC and CBN Examination 2023

Section : Numerical and Mathematical Ability

Q.1 A and B can do a piece of work in 30 days and 40 days, respectively. They began the work together but after a certain time, A leaves off and B completed the remaining work in 25 days. After how many days did A leave?

- Ans**
- ✓ 1. $6\frac{3}{7}$
 - ✗ 2. $5\frac{3}{7}$
 - ✗ 3. $5\frac{2}{7}$
 - ✗ 4. $6\frac{1}{7}$

Question ID : 264330155757

Option 1 ID : 264330610434

Option 2 ID : 264330610433

Option 3 ID : 264330610432

Option 4 ID : 264330610431

Status : Answered

Chosen Option : 1

Q.2 6 skilled workers can complete a work in 4 days. After three days 3 more skilled workers joined them. How many days will they now take to complete the remaining work?

- Ans**
- ✓ 1. $\frac{2}{3}$
 - ✗ 2. $\frac{1}{2}$
 - ✗ 3. $\frac{1}{3}$
 - ✗ 4. $\frac{3}{4}$

Question ID : 264330155760

Option 1 ID : 264330610446

Option 2 ID : 264330610444

Option 3 ID : 264330610443

Option 4 ID : 264330610445

Status : Answered

Chosen Option : 1

Q.3 In a class of boys and girls, the number of girls is twice the number of boys. If 20 more boys join the class, the ratio of girls and boys is 1 : 1. How many total students were there in the class initially?

- Ans
- 1. 60
 - 2. 75
 - 3. 45
 - 4. 90

Question ID : 264330153807
Option 1 ID : 264330602692
Option 2 ID : 264330602693
Option 3 ID : 264330602691
Option 4 ID : 264330602694
Status : Answered
Chosen Option : 1

Q.4 Atul sells goods to a customer at a profit of P%. If the cost price of the goods for the customer is ₹1,50,000 and Atul makes a profit of ₹30,000, then what is the value of P?

- Ans
- 1. 22
 - 2. 25
 - 3. 20
 - 4. 28

Question ID : 264330159631
Option 1 ID : 264330625884
Option 2 ID : 264330625885
Option 3 ID : 264330625883
Option 4 ID : 264330625886
Status : Answered
Chosen Option : 1

Q.5 Mixture 1 with a volume of 8 litres has 80% milk and Mixture 2 with a volume of 6 litres has 60% milk. Both the mixtures are mixed. Find the percentage of milk in the final mixture.

- Ans
- 1. $\frac{600}{7}$
 - 2. $\frac{500}{9}$
 - 3. $\frac{500}{7}$
 - 4. $\frac{800}{9}$

Question ID : 264330153801
Option 1 ID : 264330602668
Option 2 ID : 264330602667
Option 3 ID : 264330602669
Option 4 ID : 264330602670
Status : Answered
Chosen Option : 1

Q.6 Study the given table and answer the question that follows.

The table shows the number of students appeared and passed in different fields in a University.

Years	Medical		Engineering		Commerce		Management	
	Appeared	Passed	Appeared	Passed	Appeared	Passed	Appeared	Passed
2010	300	250	460	256	380	352	365	322
2011	345	320	440	365	401	354	314	314
2012	280	240	384	327	460	400	378	344
2013	310	230	390	290	430	392	387	353
2014	450	380	415	358	388	352	270	227
2015	380	286	486	456	366	315	290	257

What percentage of total students appearing in 2011, appeared in the medical field?

- Ans**
- ✓ 1. 23%
 - ✗ 2. 21%
 - ✗ 3. 20%
 - ✗ 4. 25%

Question ID : **264330156241**
Option 1 ID : **264330612365**
Option 2 ID : **264330612364**
Option 3 ID : **264330612363**
Option 4 ID : **264330612366**
Status : **Answered**
Chosen Option : **4**

Q.7 A thief is spotted by a policeman from a distance of 250 m. When the policeman starts chase, the thief also starts running. Assuming that the speed of the thief is 10 km/h and that of the policeman is 12.5 km/h. How far will have the thief run before he is caught?

- Ans**
- ✗ 1. 3 km
 - ✓ 2. 1 km
 - ✗ 3. 4 km
 - ✗ 4. 2 km

Question ID : **264330156347**
Option 1 ID : **264330612789**
Option 2 ID : **264330612787**
Option 3 ID : **264330612790**
Option 4 ID : **264330612788**
Status : **Answered**
Chosen Option : **1**

Q.8 Simplify: $6\frac{4}{5} \div \left[4\frac{1}{4} \div \left\{ 5\frac{1}{3} \times \frac{3}{8} + \left(3\frac{1}{2} + \frac{2}{3} \right) \times \frac{4}{5} \right\} \right]$

- Ans
- ✓ 1. $8\frac{8}{15}$
 - ✗ 2. $7\frac{8}{25}$
 - ✗ 3. $8\frac{8}{25}$
 - ✗ 4. $7\frac{8}{15}$

Question ID : 264330153752
 Option 1 ID : 264330602473
 Option 2 ID : 264330602472
 Option 3 ID : 264330602471
 Option 4 ID : 264330602474
 Status : Answered
 Chosen Option : 1

Q.9 Amit drove for 6 hours at a speed of 60 miles per hour and for 6 hours at 40 miles per hour. What was his average speed (in miles per hour) for the whole journey?

- Ans
- ✗ 1. 48
 - ✗ 2. 44
 - ✗ 3. 46
 - ✓ 4. 50

Question ID : 264330156215
 Option 1 ID : 264330612261
 Option 2 ID : 264330612259
 Option 3 ID : 264330612260
 Option 4 ID : 264330612262
 Status : Answered
 Chosen Option : 1

Q.10 A jewel was sold passing through 3 hands and on the whole, its price is raised by 80%. The first seller earns 20% profit and the second seller earns 25% profit, respectively. Find the percentage of profit earned by the third seller.

- Ans
- ✓ 1. 20%
 - ✗ 2. 10%
 - ✗ 3. 15%
 - ✗ 4. 5%

Question ID : 264330153839
 Option 1 ID : 264330602821
 Option 2 ID : 264330602822
 Option 3 ID : 264330602819
 Option 4 ID : 264330602820
 Status : Answered
 Chosen Option : 1

Q.11 A certain sum is invested at a simple interest rate of 12% per annum for a certain period of time. If the sum becomes four times the principal at the end of the period, what is the duration of the investment?

- Ans**
- 1. 22 years
 - 2. 24 years
 - 3. 25 years
 - 4. 20 years

Question ID : 264330156271
Option 1 ID : 264330612484
Option 2 ID : 264330612485
Option 3 ID : 264330612486
Option 4 ID : 264330612483
Status : Answered
Chosen Option : 1

Q.12 Mr. Kalra borrowed ₹1,35,000 to meet the expenses of his son's education. If the rate of interest is 12% per annum compounded annually, then how much amount will he have to make after 2 years and 3 months to settle the account?

- Ans**
- 1. ₹1,74,424.32
 - 2. ₹1,50,640.40
 - 3. ₹1,49,920.32
 - 4. ₹1,74,760

Question ID : 264330154131
Option 1 ID : 264330603988
Option 2 ID : 264330603990
Option 3 ID : 264330603989
Option 4 ID : 264330603987
Status : Answered
Chosen Option : 1

Q.13 The ratio of two numbers is 7 : 11 and their LCM is 462. What is the difference between these two numbers?

- Ans**
- 1. 24
 - 2. 26
 - 3. 30
 - 4. 28

Question ID : 264330155688
Option 1 ID : 264330610155
Option 2 ID : 264330610156
Option 3 ID : 264330610158
Option 4 ID : 264330610157
Status : Answered
Chosen Option : 1

Q.14 The diameter of the base of a cylindrical vessel is 30 cm and its height is 56 cm. Find its curved surface area (in cm^2).

- Ans**
- 1. 6080
 - 2. 6280
 - 3. 5280
 - 4. 5080

Question ID : 264330153863
 Option 1 ID : 264330602916
 Option 2 ID : 264330602918
 Option 3 ID : 264330602917
 Option 4 ID : 264330602915
 Status : Answered
 Chosen Option : 4

Q.15 The length, breadth and height of a cuboid are in the ratio of 6 : 4 : 3. If the total surface area of the cuboid is 972 cm^2 , what is the length (in cm) of the diagonal of the cuboid?

- Ans**
- 1. $5\sqrt{65}$
 - 2. $3\sqrt{61}$
 - 3. $3\sqrt{65}$
 - 4. $5\sqrt{61}$

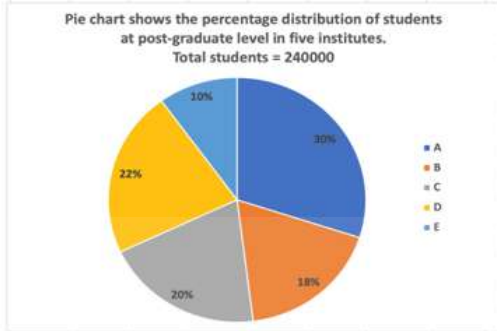
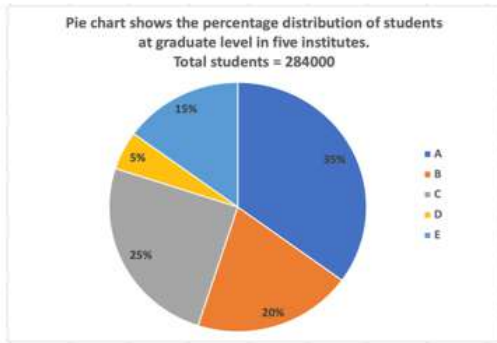
Question ID : 264330153792
 Option 1 ID : 264330602631
 Option 2 ID : 264330602633
 Option 3 ID : 264330602632
 Option 4 ID : 264330602634
 Status : Answered
 Chosen Option : 4

Q.16 Three numbers are in the ratio 1 : 2 : 3. By adding 5 to each of the numbers then the ratio changes to 2 : 3 : 4. The smallest number is:

- Ans**
- 1. 5
 - 2. 15
 - 3. 12
 - 4. 20

Question ID : 264330154049
 Option 1 ID : 264330603662
 Option 2 ID : 264330603660
 Option 3 ID : 264330603661
 Option 4 ID : 264330603659
 Status : Answered
 Chosen Option : 4

Q.17 The following pie-charts show the distribution of students of graduate and post-graduate levels in five different institutes in a city.



What is the total number of students from institutes A, C and E at the graduate level and from institutes B and D at the post-graduate level?

- Ans
- 1. 390000
 - 2. 300900
 - 3. 300090
 - 4. 309000

Question ID : 264330153786

Option 1 ID : 264330602607

Option 2 ID : 264330602609

Option 3 ID : 264330602608

Option 4 ID : 264330602610

Status : Answered

Chosen Option : 1

Q.18 The distance between two towns is covered in 9 hours at a speed of 60 kmph. By how much should the speed (in km/h) be increased so that 1 hour of the travelling time is saved?

- Ans
- 1. 7.5
 - 2. 10
 - 3. 15
 - 4. 12.5

Question ID : 264330156489

Option 1 ID : 264330613343

Option 2 ID : 264330613345

Option 3 ID : 264330613344

Option 4 ID : 264330613346

Status : Answered

Chosen Option : 4

Q.19 A man decided to cover 7.5 km in 72 minutes. He decided to cover two thirds of the distance at 5 km/h and the remaining at some different speed. Find the speed after two third distance has been covered.

- Ans**
- 1. 14.3 km/h
 - 2. 15.5 km/h
 - 3. 12.5 km/h
 - 4. 10 km/h

Question ID : 264330156361
Option 1 ID : 264330612845
Option 2 ID : 264330612846
Option 3 ID : 264330612844
Option 4 ID : 264330612843
Status : Answered
Chosen Option : 1

Q.20 Rickey spends 35% of his salary on groceries, 15% on loans, 14% on electricity bills and 6% on miscellaneous. If his savings at the end of a month are ₹2,400, then his salary per month (in ₹) is:

- Ans**
- 1. 8,000
 - 2. 5,828
 - 3. 4,000
 - 4. 6,000

Question ID : 264330156431
Option 1 ID : 264330613116
Option 2 ID : 264330613117
Option 3 ID : 264330613118
Option 4 ID : 264330613115
Status : Answered
Chosen Option : 2

Section : Reasoning Ability and Problem Solving

Q.1 Read the given statements and conclusions carefully. You have to take the given statements to be true even if they seem to be at variance from commonly known facts. You have to decide which conclusion/s logically follow/s from the given statements.

Statements: All trucks are bikes. All bikes are carts. Some carts are pens.

Conclusion I: Some trucks are carts.

Conclusion II: No bikes are pens.

- Ans**
- 1. Only conclusion (II) is follow.
 - 2. Both conclusions (I) and (II) are follow.
 - 3. Neither conclusion (I) nor (II) is follow.
 - 4. Only conclusion (I) is follow.

Question ID : 264330155922
Option 1 ID : 264330611092
Option 2 ID : 264330611094
Option 3 ID : 264330611093
Option 4 ID : 264330611091
Status : Answered
Chosen Option : 1

Q.2 What will come in the place of '?' in the following equation, if '+' and '-' are interchanged and '×' and '÷' are interchanged?
 $357 \times 7 + 19 \div 2 - 38 = ?$

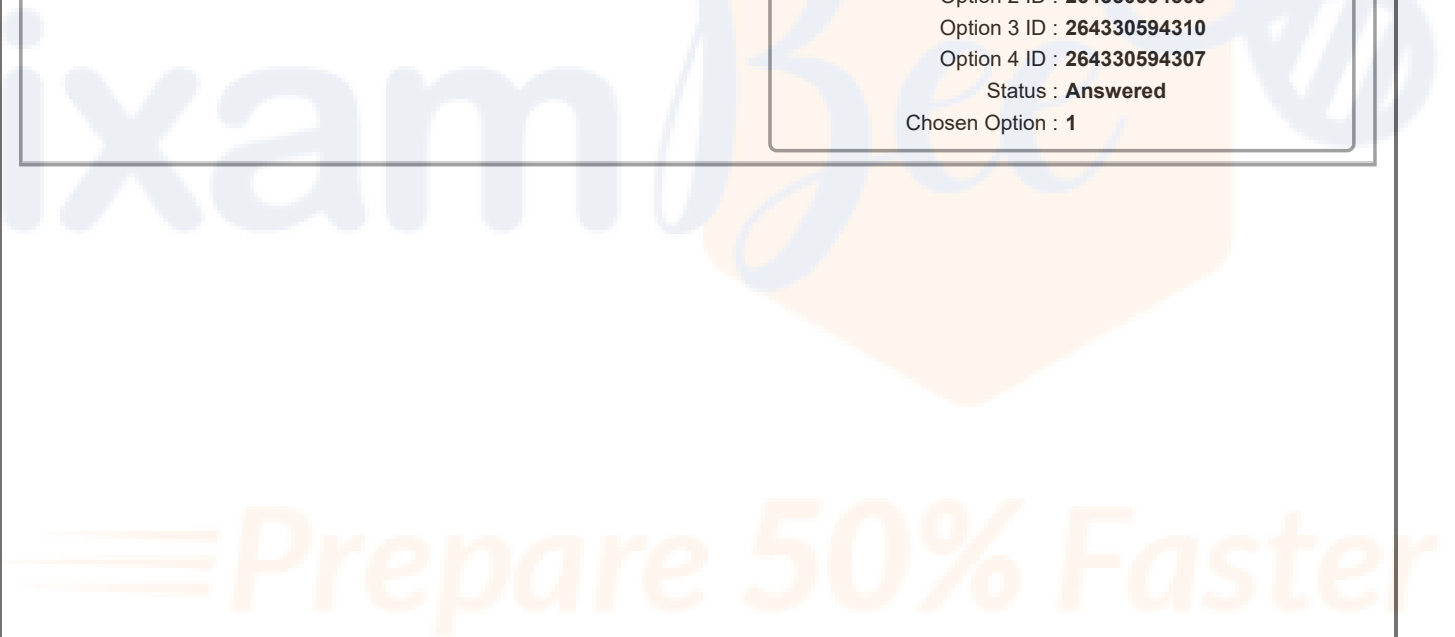
- Ans**
- ✓ 1. 51
 - ✗ 2. 71
 - ✗ 3. 61
 - ✗ 4. 41

Question ID : **264330155679**
 Option 1 ID : **264330610119**
 Option 2 ID : **264330610121**
 Option 3 ID : **264330610120**
 Option 4 ID : **264330610122**
 Status : **Answered**
 Chosen Option : **1**

Q.3 RN 12 is related to PL 16 in a certain way. In the same way, EJ 17 is related to CH 21. To which of the following is FL 15 related to following the same logic?

- Ans**
- ✓ 1. DJ 19
 - ✗ 2. HN 18
 - ✗ 3. CI 20
 - ✗ 4. DK 19

Question ID : **264330151670**
 Option 1 ID : **264330594308**
 Option 2 ID : **264330594309**
 Option 3 ID : **264330594310**
 Option 4 ID : **264330594307**
 Status : **Answered**
 Chosen Option : **1**



Q.4 Which figure should replace the question mark (?) if the following figure series were to be continued?

X	9	B	☆	T	L	9	X	
	☆		L		X		B	
B	L	T	X	T	9	9	B	☆
							T	☆
								L
								?

Ans

✗ 1.

L		B
	T	
☆	X	9

✗ 2.

X		B
	9	
L	T	☆

✓ 3.

☆		B
	T	
L	9	X

✗ 4.

L		T
	☆	
X	B	9

Question ID : 264330154744

Option 1 ID : 264330606442

Option 2 ID : 264330606439

Option 3 ID : 264330606440

Option 4 ID : 264330606441

Status : Answered

Chosen Option : 4

Q.5 Select the combination of letters that when sequentially placed in the blanks of the given series will make it logically complete.

PY_ S_LM _YNM YY_M B_RM

Ans ✗ 1. PMGHY

✗ 2. HAPPY

✗ 3. MHAPV

✓ 4. MYVPY

Question ID : 264330156317

Option 1 ID : 264330612670

Option 2 ID : 264330612667

Option 3 ID : 264330612669

Option 4 ID : 264330612668

Status : Answered

Chosen Option : 4

Q.6 What should come in place of '?' in the given series?

3 21 111 561 2811 ?

- Ans
- 1. 12952
 - 2. 13468
 - 3. 14061
 - 4. 12786

Question ID : 264330151471
 Option 1 ID : 264330593512
 Option 2 ID : 264330593513
 Option 3 ID : 264330593514
 Option 4 ID : 264330593511
 Status : Answered
 Chosen Option : 1

Q.7 Select the combination of letters that when sequentially placed in the blanks of the given series, will complete the series.

_ FFEF _ _ FF _ F _

- Ans
- 1. EEEFE
 - 2. EFFE F
 - 3. EFEE F
 - 4. EFFE E

Question ID : 264330151654
 Option 1 ID : 264330594244
 Option 2 ID : 264330594246
 Option 3 ID : 264330594243
 Option 4 ID : 264330594245
 Status : Answered
 Chosen Option : 3

Q.8 Read the given statements and conclusions carefully. You have to take the given statements to be true even if they seem to be at variance from commonly known facts. You have to decide which conclusion/s logically follow/s from the given statements.

Statements: Some chargers are metal. All metal are hard. Some hard are stools.

Conclusion I: All chargers are metal.

Conclusion II: Some stools are hard.

- Ans
- 1. Both conclusions (I) and (II) are follow.
 - 2. Neither conclusion (I) nor (II) is follow.
 - 3. Only conclusion (I) is follow.
 - 4. Only conclusion (II) is follow.

Question ID : 264330155902
 Option 1 ID : 264330611014
 Option 2 ID : 264330611013
 Option 3 ID : 264330611011
 Option 4 ID : 264330611012
 Status : Answered
 Chosen Option : 4

Q.9 Kiran, Pihu, Siya, Leena, Reena and Jiya are sitting around a circular table facing the centre. Kiran sits 3rd to the right of Pihu. Siya sits 2nd to the right of Kiran. Leena sits 3rd to the left of Siya. Reena is an immediate neighbour of Leena. Who sits to the immediate left of Jiya?

- Ans**
- 1. Leena
 - 2. Siya
 - 3. Pihu
 - 4. Kiran

Question ID : **264330155652**
 Option 1 ID : **264330610014**
 Option 2 ID : **264330610012**
 Option 3 ID : **264330610013**
 Option 4 ID : **264330610011**
 Status : **Answered**
 Chosen Option : **4**

Q.10 If 'I' stands for '+', 'J' stands for '×', 'K' stands for '-' and 'L' stands for '÷', what will come in place of the question mark (?) in the following equation?
 $(95 \text{ K } 19) \text{ J } 7 \text{ L } 15 \text{ I } (10 \text{ J } 4) = ?$

- Ans**
- 1. 50
 - 2. 40
 - 3. 70
 - 4. 60

Question ID : **264330151795**
 Option 1 ID : **264330594809**
 Option 2 ID : **264330594808**
 Option 3 ID : **264330594810**
 Option 4 ID : **264330594807**
 Status : **Answered**
 Chosen Option : **4**

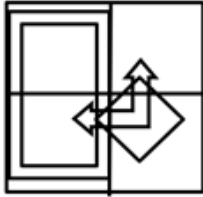
Q.11 Select the option figure in which the given figure (X) is embedded as its part (rotation is NOT allowed).



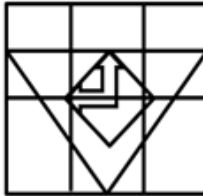
(X)

Ans

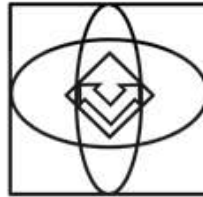
✗ 1.



✓ 2.



✗ 3.



✗ 4.



Question ID : 264330151732

Option 1 ID : 264330594556

Option 2 ID : 264330594557

Option 3 ID : 264330594558

Option 4 ID : 264330594555

Status : Answered

Chosen Option : 2

Q.12 428 is related to 317 following a certain logic. Following the same logic, 285 is related to 174. To which of the following is 597 related to, following the same logic?

Ans ✗ 1. 386

✗ 2. 368

✗ 3. 468

✓ 4. 486

Question ID : 264330151597

Option 1 ID : 264330594015

Option 2 ID : 264330594016

Option 3 ID : 264330594017

Option 4 ID : 264330594018

Status : Answered

Chosen Option : 4

Q.13 Select the set in which the numbers are related in the same way as are the numbers of the following sets.
(NOTE: Operations should be performed on the whole numbers, without breaking down the numbers into its constituent digits. E.g. 13 – Operations on 13 such as adding / subtracting /multiplying etc. to 13 can be performed. Breaking down 13 into 1 and 3 and then performing mathematical operations on 1 and 3 is not allowed)
(14, 42, 7)
(12, 34, 5)

- Ans**
- ✓ 1. 43, 144, 29
 - ✗ 2. 17, 102, 5
 - ✗ 3. 25, 131, 2
 - ✗ 4. 36, 702, 2

Question ID : **264330151612**
Option 1 ID : **264330594078**
Option 2 ID : **264330594077**
Option 3 ID : **264330594075**
Option 4 ID : **264330594076**
Status : **Answered**
Chosen Option : **2**

Q.14 If 5th May 2010 is Wednesday, then what will be the day of the week on 5th June 2022?

- Ans**
- ✗ 1. Tuesday
 - ✗ 2. Monday
 - ✗ 3. Wednesday
 - ✓ 4. Sunday

Question ID : **264330154338**
Option 1 ID : **264330604817**
Option 2 ID : **264330604816**
Option 3 ID : **264330604818**
Option 4 ID : **264330604815**
Status : **Answered**
Chosen Option : **2**

Q.15 What should come in place of the question mark (?) in the given series based on the English alphabetical order?

YFD, VJA, SNX, PRU, ?

- Ans**
- ✗ 1. MXS
 - ✓ 2. MVR
 - ✗ 3. NWS
 - ✗ 4. NWR

Question ID : **264330156301**
Option 1 ID : **264330612606**
Option 2 ID : **264330612605**
Option 3 ID : **264330612604**
Option 4 ID : **264330612603**
Status : **Answered**
Chosen Option : **2**

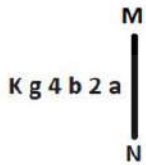
Q.16 What should come in place of ? in the given series?

26 37 59 92 136 ?

- Ans
- 1. 192
 - 2. 191
 - 3. 190
 - 4. 193

Question ID : 264330151555
 Option 1 ID : 264330593849
 Option 2 ID : 264330593848
 Option 3 ID : 264330593847
 Option 4 ID : 264330593850
 Status : Answered
 Chosen Option : 2

Q.17 Select the correct mirror image of the given figure when the mirror is placed at MN as shown below.



- Ans
- 1. a 2 b 4 g K
 - 2. a z q p g K
 - 3. a 2 p 2 g K
 - 4. a 2 p 2 g K

Question ID : 264330151518
 Option 1 ID : 264330593699
 Option 2 ID : 264330593702
 Option 3 ID : 264330593701
 Option 4 ID : 264330593700
 Status : Answered
 Chosen Option : 4

Q.18 What should come in place of '?' in the given series?

14 85 511 3067 18403 ?

- Ans
- 1. 110279
 - 2. 110581
 - 3. 110119
 - 4. 110419

Question ID : 264330151486
 Option 1 ID : 264330593572
 Option 2 ID : 264330593574
 Option 3 ID : 264330593571
 Option 4 ID : 264330593573
 Status : Answered
 Chosen Option : 4

Q.19 In a certain code language, 'NAIL' is coded as '2637' and 'LANE' is coded as '3278'. What is the code for 'E' in the given code language?

- Ans**
- 1. 8
 - 2. 7
 - 3. 2
 - 4. 3

Question ID : 264330151699
Option 1 ID : 264330594424
Option 2 ID : 264330594423
Option 3 ID : 264330594426
Option 4 ID : 264330594425
Status : Answered
Chosen Option : 1

Q.20 In a certain code language, 'MENTOR' is coded as 'EMOUPS' and 'OCTAGON' is coded as 'COUBHPO'. What is the code for 'PENCIL' in the given code language?

- Ans**
- 1. EPLICN
 - 2. LINCENP
 - 3. PLICNE
 - 4. EPODJM

Question ID : 264330155828
Option 1 ID : 264330610717
Option 2 ID : 264330610715
Option 3 ID : 264330610718
Option 4 ID : 264330610716
Status : Answered
Chosen Option : 4

Section : General Awareness

Q.1 Identify the vector quantity among these listed physical quantities?

- Ans**
- 1. Energy
 - 2. Mass
 - 3. Density
 - 4. Gravitational Intensity

Question ID : 264330157782
Option 1 ID : 264330618490
Option 2 ID : 264330618488
Option 3 ID : 264330618487
Option 4 ID : 264330618489
Status : Answered
Chosen Option : 4

Q.2 'The Palace of Illusions', a rendition of the Hindu epic 'Mahabharata', was written by which of the following novelists?

- Ans 1. Chitra Banerjee Divakaruni
 2. Pratibha Ray
 3. Devi Yesodharan
 4. Indu Sundaresan

Question ID : 264330161761
Option 1 ID : 264330634374
Option 2 ID : 264330634371
Option 3 ID : 264330634373
Option 4 ID : 264330634372
Status : Answered
Chosen Option : 1

Q.3 G Krishnakumar was appointed chairman of which of the following in 2023?

- Ans 1. Oil and Natural Gas Corporation Limited
 2. Indian Oil Corporation Limited
 3. Bharat Petroleum Corporation Limited
 4. Hindustan Petroleum Corporation Limited

Question ID : 264330158349
Option 1 ID : 264330620755
Option 2 ID : 264330620758
Option 3 ID : 264330620756
Option 4 ID : 264330620757
Status : Answered
Chosen Option : 1

Q.4 _____ was the first Indian woman to write an autobiography and also the first to do so in Bengali in her book titled 'Aamar Jiban', which was published in 1876.

- Ans 1. Rassundari Devi
 2. Manikuntala Sen
 3. Sarala Devi Chaudhurani
 4. Santisudha Ghosh

Question ID : 264330161927
Option 1 ID : 264330635037
Option 2 ID : 264330635038
Option 3 ID : 264330635035
Option 4 ID : 264330635036
Status : Answered
Chosen Option : 3

Q.5 Where is the Vivekanand Rock Memorial situated?

- Ans 1. Port Blair
 2. Vishakhapatnam
 3. Kanyakumari
 4. Chennai

Question ID : 264330160776
Option 1 ID : 264330630437
Option 2 ID : 264330630438
Option 3 ID : 264330630436
Option 4 ID : 264330630435
Status : Answered
Chosen Option : 3

Q.6 Under which Act was the rule of British Crown established over India?

- Ans
- 1. Government of India Act 1833
 - 2. Charter Act of 1813
 - 3. Regulating Act of 1773
 - 4. Government of India Act 1858

Question ID : 264330162319
Option 1 ID : 264330636605
Option 2 ID : 264330636603
Option 3 ID : 264330636604
Option 4 ID : 264330636606
Status : Answered
Chosen Option : 2

Q.7 The Kolar region of Karnataka is famous for which mineral from the following?

- Ans
- 1. Coal
 - 2. Gold
 - 3. Petroleum
 - 4. Copper

Question ID : 264330161523
Option 1 ID : 264330633420
Option 2 ID : 264330633421
Option 3 ID : 264330633422
Option 4 ID : 264330633419
Status : Marked For Review
Chosen Option : 2

Q.8 Match the following performances of Indian naatya, which were presented by the means of variegated components:

- 1) Angika (a) costumes and make-up
- 2) Vachika (b) depiction of mental or psychological states
- 3) Aharya (c) spoken words
- 4) Sattvika (d) gestures and other bodily movements

- Ans
- 1. 1-c, 2-b, 3-d, 4-a
 - 2. 1-a, 2-b, 3-d, 4-c
 - 3. 1-d, 2-c, 3-a, 4-b
 - 4. 1-c, 2-a, 3-b, 4-d

Question ID : 264330159048
Option 1 ID : 264330623551
Option 2 ID : 264330623553
Option 3 ID : 264330623554
Option 4 ID : 264330623552
Status : Answered
Chosen Option : 3

Q.9 In Fencing, a contest between the two fencers is known as:

- Ans
- 1. bout
 - 2. remise
 - 3. parry
 - 4. riposte

Question ID : 264330161162
Option 1 ID : 264330631982
Option 2 ID : 264330631981
Option 3 ID : 264330631979
Option 4 ID : 264330631980
Status : Answered
Chosen Option : 1

Q.10 In which year has the Government of India instituted Arjuna Award to recognise outstanding achievement in national sports events?

- Ans
- 1. 1961
 - 2. 1963
 - 3. 1964
 - 4. 1962

Question ID : 264330158236
Option 1 ID : 264330620304
Option 2 ID : 264330620305
Option 3 ID : 264330620306
Option 4 ID : 264330620303
Status : Not Answered
Chosen Option : --

Q.11 'Atla Taddi', a festival celebrated by married and unmarried women alike to seek the blessings of Devi Gauri for a long and happy married life and a suitable groom, respectively, is celebrated in _____.

- Ans
- 1. Andhra Pradesh
 - 2. Kerala
 - 3. Chhattisgarh
 - 4. Odisha

Question ID : 264330160817
Option 1 ID : 264330630599
Option 2 ID : 264330630600
Option 3 ID : 264330630601
Option 4 ID : 264330630602
Status : Not Answered
Chosen Option : --

Q.12 PT Usha was elected as the president of which association in December 2022?

- Ans
- 1. Indian Olympic Association
 - 2. Haryana Olympic Association
 - 3. National Rifle Association of India
 - 4. Badminton Association of India

Question ID : 264330158370
Option 1 ID : 264330620842
Option 2 ID : 264330620841
Option 3 ID : 264330620840
Option 4 ID : 264330620839
Status : Answered
Chosen Option : 1

Q.13 नीति आयोग (NITI Aayog) की पहली बहुआयामी गरीबी सूचकांक (MPI) 2021 रिपोर्ट के अनुसार, भारत में कौन-सा राज्य पहले स्थान पर है?

- Ans
- 1. झारखंड
 - 2. छत्तीसगढ़
 - 3. बिहार
 - 4. उत्तर प्रदेश

Question ID : 264330166019
Option 1 ID : 264330651152
Option 2 ID : 264330651154
Option 3 ID : 264330651151
Option 4 ID : 264330651153
Status : Answered
Chosen Option : 1

Q.14 What is the full form of UPSC?

- Ans
- 1. United Public Security Commission
 - 2. United Power & Security Commission
 - 3. Union Private Service Committee
 - 4. Union Public Service Commission

Question ID : 264330159909
Option 1 ID : 264330626983
Option 2 ID : 264330626986
Option 3 ID : 264330626984
Option 4 ID : 264330626985
Status : Answered
Chosen Option : 4

Q.15 To which of the state does Sattriya classical dance belong?

- Ans
- 1. Maharashtra
 - 2. Madhya Pradesh
 - 3. Karnataka
 - 4. Assam

Question ID : 264330159051
Option 1 ID : 264330623565
Option 2 ID : 264330623564
Option 3 ID : 264330623563
Option 4 ID : 264330623566
Status : Answered
Chosen Option : 1

Q.16 Who among the following was a renowned dancer and the first person from Odisha to receive 'Padma Vibhushan' in 2000?

- Ans
- 1. Prabhat Swain
 - 2. Gangadhar Pradhan
 - 3. Mayadhar Raut
 - 4. Kelucharan Mohapatra

Question ID : 264330155478
Option 1 ID : 264330609318
Option 2 ID : 264330609317
Option 3 ID : 264330609315
Option 4 ID : 264330609316
Status : Not Answered
Chosen Option : --

Q.17 Which musical instrument does N Rajam play?

- Ans
- 1. Sitar
 - 2. Violin
 - 3. Santoor
 - 4. Guitar

Question ID : 264330155465
Option 1 ID : 264330609263
Option 2 ID : 264330609264
Option 3 ID : 264330609265
Option 4 ID : 264330609266
Status : Marked For Review
Chosen Option : 4

Q.18 Which of the following is NOT a function of money?

- Ans
- 1. Barter system
 - 2. Store of value
 - 3. Unit of account
 - 4. Medium of exchange

Question ID : 264330157298
Option 1 ID : 264330616558
Option 2 ID : 264330616556
Option 3 ID : 264330616557
Option 4 ID : 264330616555
Status : Answered
Chosen Option : 1

Q.19 According to the Census of India 2011, what was the population density recorded in Bihar?

- Ans
- 1. 1106 persons/km²
 - 2. 980 persons/km²
 - 3. 1050persons/km²
 - 4. 1320 persons/km²

Question ID : 264330161551
Option 1 ID : 264330633532
Option 2 ID : 264330633534
Option 3 ID : 264330633533
Option 4 ID : 264330633531
Status : Not Answered
Chosen Option : --

Q.20 Carbohydrates are utilised by the human body in the form of:

- Ans
- 1. glucose
 - 2. nucleotides
 - 3. fibre
 - 4. amino acids

Question ID : 264330157808
Option 1 ID : 264330618592
Option 2 ID : 264330618594
Option 3 ID : 264330618591
Option 4 ID : 264330618593
Status : Answered
Chosen Option : 1

Q.21 Which Indian musician is associated with the tabla?

- Ans
- 1. Ustad Bismillah Khan
 - 2. Zakir Hussain
 - 3. Pandit Ravishankar
 - 4. Ilaiyaraja

Question ID : 264330160976
Option 1 ID : 264330631235
Option 2 ID : 264330631236
Option 3 ID : 264330631237
Option 4 ID : 264330631238
Status : Answered
Chosen Option : 2

Q.22 On whose advice did Gandhiji spend a year travelling around British India to know the people of India?

- Ans
- 1. Krishnashankar Pandya
 - 2. Mohammad Ali Jinnah
 - 3. Shrimad Rajchandra
 - 4. Gopal Krishna Gokhale

Question ID : 264330161744
Option 1 ID : 264330634306
Option 2 ID : 264330634304
Option 3 ID : 264330634305
Option 4 ID : 264330634303
Status : Answered
Chosen Option : 4

Q.23 कौन-सा घाटा सरकार की ऋण-ग्रहण आवश्यकताओं को दर्शाता है?

- Ans
- 1. पूंजीगत घाटा
 - 2. राजस्व घाटा
 - 3. प्राथमिक घाटा
 - 4. राजकोषीय घाटा

Question ID : 264330161582
Option 1 ID : 264330633657
Option 2 ID : 264330633656
Option 3 ID : 264330633655
Option 4 ID : 264330633658
Status : Answered
Chosen Option : 4

Q.24 Which of the following fundamental duties was added to the Indian Constitution by the 86th Constitutional Amendment Act, 2002?

- Ans
- 1. To abide by the Constitution and respect its ideals and institutions, the National Flag and the National Anthem
 - 2. To protect and to improve the natural environment including forests, lakes, rivers and wildlife, and to have compassion for living creatures
 - 3. To provide opportunities for education to his/her child or, as the case may be, ward between the age of six and fourteen years
 - 4. To cherish and follow the noble ideals which inspired our national struggle for freedom

Question ID : 264330162247
Option 1 ID : 264330636315
Option 2 ID : 264330636318
Option 3 ID : 264330636317
Option 4 ID : 264330636316
Status : Answered
Chosen Option : 1

Q.25 शैल कायांतरण के दौरान निम्नलिखित में से कौन-सी चट्टानें बनती हैं?

Ans

- ✓ 1. स्लेट (Slate)
- ✗ 2. पिंडशीला (Conglomerate)
- ✗ 3. बालुकाश्म (Sandstone)
- ✗ 4. बेसाल्ट (Basalt)

Question ID : 264330157829
Option 1 ID : 264330618675
Option 2 ID : 264330618678
Option 3 ID : 264330618677
Option 4 ID : 264330618676
Status : Not Answered
Chosen Option : --

Section : English Language and Comprehension

Q.1 Select the most appropriate option to fill in the blank.
Dr. APJ Abdul Kalam was a great man with a high level of _____.

- Ans
- ✗ 1. intelligent humour
 - ✗ 2. wise boredom
 - ✓ 3. intellect
 - ✗ 4. clever fatigue

Question ID : 264330153508
Option 1 ID : 264330601543
Option 2 ID : 264330601545
Option 3 ID : 264330601544
Option 4 ID : 264330601546
Status : Answered
Chosen Option : 3

Q.2 The following sentence contains some errors. Select the option that correctly rectifies the error.

The forces that generate conditions conducive to crime and riots are stronger in urban communities than in rural areas.

- Ans
- ✗ 1. The force that generate conditions conducive to crime and riots are stronger in urban communities than in rural areas.
 - ✗ 2. The forces that genereta conditions conducieve to crime and riotts are stronger in urban communities than in rural areas.
 - ✓ 3. The forces that generate conditions conducive to crime and riots are stronger in urban communities than in rural areas.
 - ✗ 4. The forces that genarete conditions conducive to crime and riots are stronger in urban communities than in ruraal areas.

Question ID : 264330152693
Option 1 ID : 264330598375
Option 2 ID : 264330598378
Option 3 ID : 264330598377
Option 4 ID : 264330598376
Status : Answered
Chosen Option : 3

Q.3 Select the most appropriate option that can substitute the underlined segment in the given sentence.

I found my teacher's points casual and informal in the group discussion.

- Ans
- 1. flesh and blood
 - 2. free and easy
 - 3. foot the bill
 - 4. fair and square

Question ID : 264330144124
Option 1 ID : 264330564761
Option 2 ID : 264330564760
Option 3 ID : 264330564759
Option 4 ID : 264330564762
Status : Answered
Chosen Option : 4

Q.4 Select the word which means the same as the group of words given.
One who is all powerful.

- Ans
- 1. Omnipresent
 - 2. Omnipotent
 - 3. Optimist
 - 4. Omniscient

Question ID : 264330152571
Option 1 ID : 264330597887
Option 2 ID : 264330597888
Option 3 ID : 264330597890
Option 4 ID : 264330597889
Status : Answered
Chosen Option : 2

Q.5 Select the most appropriate option that can substitute the underlined segment in the given sentence.

Ramesh is owning a beautiful house in Noida.

- Ans
- 1. did owned
 - 2. owns
 - 3. has owning
 - 4. was owned

Question ID : 264330152710
Option 1 ID : 264330598442
Option 2 ID : 264330598439
Option 3 ID : 264330598441
Option 4 ID : 264330598440
Status : Answered
Chosen Option : 2

Q.6 Parts of the following sentence have been given as options. Select the option that contains an error.
When Nisha will have finished her task?

- Ans
- 1. have
 - 2. When Nisha will
 - 3. finished
 - 4. her task

Question ID : 264330152817
Option 1 ID : 264330598860
Option 2 ID : 264330598859
Option 3 ID : 264330598861
Option 4 ID : 264330598862
Status : Answered
Chosen Option : 1

Q.7 Select the most appropriate option that can substitute the underlined segment in the given sentence.

He push the bushes aside and went a little farther.

- Ans
- 1. pushed with bush
 - 2. pushing the bush
 - 3. pushes in bush
 - 4. pushed the bushes

Question ID : 264330153471
Option 1 ID : 264330601399
Option 2 ID : 264330601400
Option 3 ID : 264330601401
Option 4 ID : 264330601402
Status : Answered
Chosen Option : 4

Q.8 Select the option that can be used as a one-word substitute for the given group of words.

Copying someone else's work and trying to submit it as your own

- Ans
- 1. Plagiarism
 - 2. Polygamy
 - 3. Preamble
 - 4. Extempore

Question ID : 264330152771
Option 1 ID : 264330598676
Option 2 ID : 264330598678
Option 3 ID : 264330598677
Option 4 ID : 264330598675
Status : Answered
Chosen Option : 1

Q.9 Select the most appropriate meaning of the given idiom.
Beauty of it

- Ans
- 1. Make things worse
 - 2. Cause for dispute
 - 3. Quite ordinary
 - 4. Good points

Question ID : 264330151830
Option 1 ID : 264330594950
Option 2 ID : 264330594948
Option 3 ID : 264330594947
Option 4 ID : 264330594949
Status : Answered
Chosen Option : 4

Q.10 Select the most appropriate synonym of the underlined word.
The girl was manacled and locked in the room.

- Ans
- 1. unfastened
 - 2. liberated
 - 3. fettered
 - 4. unbinded

Question ID : 264330153521
Option 1 ID : 264330601597
Option 2 ID : 264330601595
Option 3 ID : 264330601598
Option 4 ID : 264330601596
Status : Answered
Chosen Option : 3

Q.11 Select the most appropriate ANTONYM of the underlined word.
Addiction of drugs proved detrimental for his health.

- Ans
- 1. Impartial
 - 2. Potential
 - 3. Beneficial
 - 4. Differential

Question ID : 264330151819
Option 1 ID : 264330594906
Option 2 ID : 264330594905
Option 3 ID : 264330594904
Option 4 ID : 264330594903
Status : Answered
Chosen Option : 3

Q.12 Select the most appropriate synonym of the given word.
Plunge

- Ans
- 1. Transgress
 - 2. Dive
 - 3. Rush
 - 4. Fly

Question ID : 264330151877
Option 1 ID : 264330595129
Option 2 ID : 264330595128
Option 3 ID : 264330595130
Option 4 ID : 264330595127
Status : Answered
Chosen Option : 1

Q.13 Select the INCORRECTLY spelt word.

- Ans
- 1. Tomatos
 - 2. Weather
 - 3. Vehicle
 - 4. Professor

Question ID : 264330153153
Option 1 ID : 264330600172
Option 2 ID : 264330600174
Option 3 ID : 264330600171
Option 4 ID : 264330600173
Status : Answered
Chosen Option : 1

Q.14 Select the most appropriate option that can rectify the underlined segment in the given sentence. If there is no need to rectify it, select 'no rectification needed'.

I used a variety of sources to find the more cheap flight.

- Ans
- 1. no rectification needed
 - 2. cheaper
 - 3. cheapest
 - 4. cheap

Question ID : 264330153462
Option 1 ID : 264330601366
Option 2 ID : 264330601363
Option 3 ID : 264330601365
Option 4 ID : 264330601364
Status : Answered
Chosen Option : 3

Q.15 Select the INCORRECTLY spelt word in the given sentence.
All the members of my family are planning to visit Jammu and Kashmir this Novembur.

- Ans 1. Novembur
 2. Planning
 3. Visit
 4. Members

Question ID : 264330153300
Option 1 ID : 264330600755
Option 2 ID : 264330600756
Option 3 ID : 264330600758
Option 4 ID : 264330600757
Status : Answered
Chosen Option : 1

Q.16 Parts of the following sentence have been given as options. Select the option that contains an error.
Ravi will go to the England.

- Ans 1. the England
 2. will
 3. Ravi
 4. go to

Question ID : 264330152792
Option 1 ID : 264330598762
Option 2 ID : 264330598760
Option 3 ID : 264330598759
Option 4 ID : 264330598761
Status : Marked For Review
Chosen Option : 4

Q.17 Select the most appropriate response in the given situation of the eve of a battle to fill in the blank.
The commander: "Honourable Emperor, all the troops have lined up for the battle and are awaiting your orders." Emperor Chandragupta Maurya:
"_____."

- Ans 1. We will march at dawn.
 2. You should learn how to talk to an emperor.
 3. We will be playing cards.
 4. We are ready for the pilgrimage.

Question ID : 264330152642
Option 1 ID : 264330598173
Option 2 ID : 264330598174
Option 3 ID : 264330598171
Option 4 ID : 264330598172
Status : Answered
Chosen Option : 1

Q.18 Select the most appropriate meaning of the underlined idiom.
We prefer going to movies once in a blue moon.

- Ans 1. Very rarely
 2. Very amazingly
 3. Very diligently
 4. Very often

Question ID : 264330151833
Option 1 ID : 264330594960
Option 2 ID : 264330594962
Option 3 ID : 264330594961
Option 4 ID : 264330594959
Status : Marked For Review
Chosen Option : 1

Q.19 The following sentence has been split into four segments. Identify the segment that contains an error.
My father told me / that in his childhood / he was walking / to school every day.

- Ans 1. he was walking
 2. that in his childhood
 3. My father told me
 4. to school every day

Question ID : 264330155325
Option 1 ID : 264330608741
Option 2 ID : 264330608740
Option 3 ID : 264330608739
Option 4 ID : 264330608742
Status : Answered
Chosen Option : 1

Q.20 Select the most appropriate meaning of the underlined idiom in the given sentence.

Today's question paper felt like a cakewalk.

- Ans 1. Very sweet
 2. Very tasty
 3. Very easy
 4. Very difficult

Question ID : 264330152878
Option 1 ID : 264330599106
Option 2 ID : 264330599103
Option 3 ID : 264330599105
Option 4 ID : 264330599104
Status : Answered
Chosen Option : 3

Comprehension:

In the following passage some words have been deleted. Fill in the blanks with the help of the alternatives given. Select the most appropriate option for each number.

Modern football (1)_____ in Britain in the 19th century. Since before medieval times, 'folk football' games had been played in towns and villages according to local customs and with a (2)_____ of rules. Industrialisation and (3)_____, which reduced the amount of leisure time and space available to the working class, combined with a history of legal prohibitions against particularly (4)_____ and destructive forms of folk football to undermine the game's status from the early 19th century onward. However, football was taken up as a winter game between residence houses at public (independent) schools such as Winchester, Charterhouse and Eton. Each school had its own rules; some allowed limited handling of the ball and others did not. The (5)_____ in rules made it difficult for public schoolboys entering university to continue playing except with former schoolmates.

SubQuestion No : 21

Q.21 Select the most appropriate option to fill in blank no. 1.

- Ans 1. terminated
 2. culminated
 3. originated
 4. fragmented

Question ID : 264330153430

Option 1 ID : 264330601245

Option 2 ID : 264330601244

Option 3 ID : 264330601246

Option 4 ID : 264330601243

Status : Answered

Chosen Option : 3

Comprehension:

In the following passage some words have been deleted. Fill in the blanks with the help of the alternatives given. Select the most appropriate option for each number.

Modern football (1)_____ in Britain in the 19th century. Since before medieval times, 'folk football' games had been played in towns and villages according to local customs and with a (2)_____ of rules. Industrialisation and (3)_____, which reduced the amount of leisure time and space available to the working class, combined with a history of legal prohibitions against particularly (4)_____ and destructive forms of folk football to undermine the game's status from the early 19th century onward. However, football was taken up as a winter game between residence houses at public (independent) schools such as Winchester, Charterhouse and Eton. Each school had its own rules; some allowed limited handling of the ball and others did not. The (5)_____ in rules made it difficult for public schoolboys entering university to continue playing except with former schoolmates.

SubQuestion No : 22

Q.22 Select the most appropriate option to fill in blank no. 2.

- Ans 1. optimum
 2. variance
 3. minimum
 4. maximum

Question ID : 264330153431

Option 1 ID : 264330601249

Option 2 ID : 264330601250

Option 3 ID : 264330601248

Option 4 ID : 264330601247

Status : Answered

Chosen Option : 2

Comprehension:

In the following passage some words have been deleted. Fill in the blanks with the help of the alternatives given. Select the most appropriate option for each number.

Modern football (1)_____ in Britain in the 19th century. Since before medieval times, 'folk football' games had been played in towns and villages according to local customs and with a (2)_____ of rules. Industrialisation and (3)_____, which reduced the amount of leisure time and space available to the working class, combined with a history of legal prohibitions against particularly (4)_____ and destructive forms of folk football to undermine the game's status from the early 19th century onward. However, football was taken up as a winter game between residence houses at public (independent) schools such as Winchester, Charterhouse and Eton. Each school had its own rules; some allowed limited handling of the ball and others did not. The (5)_____ in rules made it difficult for public schoolboys entering university to continue playing except with former schoolmates.

SubQuestion No : 23

Q.23 Select the most appropriate option to fill in blank no. 3.

- Ans 1. normalisation
 2. urbanisation
 3. standardisation
 4. implementation

Question ID : 264330153432

Option 1 ID : 264330601252

Option 2 ID : 264330601251

Option 3 ID : 264330601253

Option 4 ID : 264330601254

Status : Answered

Chosen Option : 2

Comprehension:

In the following passage some words have been deleted. Fill in the blanks with the help of the alternatives given. Select the most appropriate option for each number.

Modern football (1)_____ in Britain in the 19th century. Since before medieval times, 'folk football' games had been played in towns and villages according to local customs and with a (2)_____ of rules. Industrialisation and (3)_____, which reduced the amount of leisure time and space available to the working class, combined with a history of legal prohibitions against particularly (4)_____ and destructive forms of folk football to undermine the game's status from the early 19th century onward. However, football was taken up as a winter game between residence houses at public (independent) schools such as Winchester, Charterhouse and Eton. Each school had its own rules; some allowed limited handling of the ball and others did not. The (5)_____ in rules made it difficult for public schoolboys entering university to continue playing except with former schoolmates.

SubQuestion No : 24

Q.24 Select the most appropriate option to fill in blank no. 4.

- Ans 1. traces
 2. undercurrents
 3. calm
 4. violent

Question ID : 264330153433

Option 1 ID : 264330601258

Option 2 ID : 264330601256

Option 3 ID : 264330601255

Option 4 ID : 264330601257

Status : Answered

Chosen Option : 1

Comprehension:

In the following passage some words have been deleted. Fill in the blanks with the help of the alternatives given. Select the most appropriate option for each number.

Modern football (1)_____ in Britain in the 19th century. Since before medieval times, 'folk football' games had been played in towns and villages according to local customs and with a (2)_____ of rules. Industrialisation and (3)_____, which reduced the amount of leisure time and space available to the working class, combined with a history of legal prohibitions against particularly (4)_____ and destructive forms of folk football to undermine the game's status from the early 19th century onward. However, football was taken up as a winter game between residence houses at public (independent) schools such as Winchester, Charterhouse and Eton. Each school had its own rules; some allowed limited handling of the ball and others did not. The (5)_____ in rules made it difficult for public schoolboys entering university to continue playing except with former schoolmates.

SubQuestion No : 25

Q.25 Select the most appropriate option to fill in blank no. 5.

- Ans
- 1. grouse
 - 2. grunt
 - 3. variance
 - 4. control

Question ID : 264330153434

Option 1 ID : 264330601259

Option 2 ID : 264330601262

Option 3 ID : 264330601261

Option 4 ID : 264330601260

Status : Answered

Chosen Option : 4

Multi Tasking Non Technical Staff and Havaladar CBIC and CBN Examination 2023

Roll Number	
Candidate Name	
Venue Name	iON Digital Zone iDZ 2 Sector 62
Exam Date	14/09/2023
Exam Time	12:30 PM - 2:30 PM
Subject	MTS Non Tech Havaladar CBIC and CBN Examination 2023

Section : Numerical and Mathematical Ability

Q.1 The price of a T-shirt is ₹450, and the price of a jeans is ₹1,650. If you buy three T-shirts and two jeans, what is the average cost of each item?

- Ans**
- 1. ₹900
 - 2. ₹920
 - 3. ₹910
 - 4. ₹930

Question ID : 264330156255
Option 1 ID : 264330612419
Option 2 ID : 264330612421
Option 3 ID : 264330612420
Option 4 ID : 264330612422
Status : Answered
Chosen Option : 4

Q.2 On comparing the following two numeric expressions, we find that _____.

$$\left[\left(2\frac{7}{9}\right)^{2\frac{1}{2}}\right]^{\frac{3}{5}} \text{ and } \left[\left(1\frac{2}{3}\right)^5\right]^{\frac{3}{5}}$$

- Ans**
- 1. both the expressions are equal
 - 2. the first expression is smaller than the second
 - 3. the first expression is larger than the second
 - 4. the given two expressions cannot be compared

Question ID : 264330154113
Option 1 ID : 264330603917
Option 2 ID : 264330603916
Option 3 ID : 264330603915
Option 4 ID : 264330603918
Status : Answered
Chosen Option : 1

Q.3 By selling an article for ₹5,280, Geeta lost 12%. For what amount should she sell it to make a profit of 12%?

- Ans
- 1. ₹6,820
 - 2. ₹7,150
 - 3. ₹5,780
 - 4. ₹6,720

Question ID : 264330159022
Option 1 ID : 264330623447
Option 2 ID : 264330623448
Option 3 ID : 264330623450
Option 4 ID : 264330623449
Status : Answered
Chosen Option : 4

Q.4 Praveen sells a study table to Zoya at a loss of 10%, and Zoya sells the study table to Aadarsh at a profit of 25%. If Aadarsh purchased the study table for ₹2,250, then what was the cost (in ₹) of the study table for Praveen?

- Ans
- 1. 2,000
 - 2. 2,100
 - 3. 1,800
 - 4. 1,900

Question ID : 264330155711
Option 1 ID : 264330610249
Option 2 ID : 264330610250
Option 3 ID : 264330610247
Option 4 ID : 264330610248
Status : Answered
Chosen Option : 1

Q.5 Suresh could save 20% of his income. But 4 years later, when his income increased by 40%, he could save the same amount only as before. By how much percentage did his expenditure increase?

- Ans
- 1. 23%
 - 2. 50%
 - 3. 22%
 - 4. 45%

Question ID : 264330157325
Option 1 ID : 264330616663
Option 2 ID : 264330616664
Option 3 ID : 264330616666
Option 4 ID : 264330616665
Status : Answered
Chosen Option : 2

Q.6 If Mohit, Nitu and Soma can complete a piece of work in 5 days, 6 days and 8 days, respectively, then in how many days will the work be completed if they work on alternate days starting with Mohit on first day, then Nitu on second day, then Soma on third day, then Mohit on fourth day and so on.

- Ans
- 1. $5\frac{7}{12}$
 - 2. $7\frac{1}{60}$
 - 3. $4\frac{7}{15}$
 - 4. $6\frac{1}{12}$

Question ID : 264330156196

Option 1 ID : 264330612185

Option 2 ID : 264330612186

Option 3 ID : 264330612183

Option 4 ID : 264330612184

Status : Answered

Chosen Option : 4

Q.7 A triangle has its sides 5 cm, 12 cm and 13 cm. What will be the area of the triangle formed by joining the mid point of the three sides?

- Ans
- 1. $7\frac{1}{2} \text{ cm}^2$
 - 2. $19\frac{1}{2} \text{ cm}^2$
 - 3. $13\frac{1}{2} \text{ cm}^2$
 - 4. 15 cm^2

Question ID : 264330156501

Option 1 ID : 264330613392

Option 2 ID : 264330613393

Option 3 ID : 264330613394

Option 4 ID : 264330613391

Status : Answered

Chosen Option : 4

Q.8 A sum of ₹800 amounts to ₹1,040 in 3 years at simple interest. If the interest rate is increased by 3%, find the amount.

- Ans
- 1. ₹1,102
 - 2. ₹1,212
 - 3. ₹1,112
 - 4. ₹1,012

Question ID : 264330156002

Option 1 ID : 264330611407

Option 2 ID : 264330611408

Option 3 ID : 264330611410

Option 4 ID : 264330611409

Status : Answered

Chosen Option : 3

Q.9 If a person walks at 18 km/hr instead of 12 km/hr, he would have walked 24 km more. What is the actual distance travelled by him?

- Ans**
- 1. 52 km
 - 2. 60 km
 - 3. 55 km
 - 4. 48 km

Question ID : 264330156289
Option 1 ID : 264330612557
Option 2 ID : 264330612555
Option 3 ID : 264330612558
Option 4 ID : 264330612556
Status : Answered
Chosen Option : 4

Q.10 If $A : B = 2 : 1$ and $B : C = 1 : 3$, then $C : A$ is:

- Ans**
- 1. 3 : 1
 - 2. 2 : 3
 - 3. 3 : 2
 - 4. 1 : 3

Question ID : 264330153873
Option 1 ID : 264330602956
Option 2 ID : 264330602955
Option 3 ID : 264330602957
Option 4 ID : 264330602958
Status : Answered
Chosen Option : 3

Q.11 Find the smallest three digit number which when added to 5 is exactly divisible by 12, 14 and 18.

- Ans**
- 1. 240
 - 2. 225
 - 3. 245
 - 4. 247

Question ID : 264330155985
Option 1 ID : 264330611340
Option 2 ID : 264330611342
Option 3 ID : 264330611339
Option 4 ID : 264330611341
Status : Answered
Chosen Option : 4

Q.12 A, B and C working separately can do a piece of work in 11 days, 20 days and 55 days, respectively. If they work together, then the time taken to complete the work is:

Ans ✓ 1. $6\frac{2}{7}$ days

✗ 2. $5\frac{1}{7}$ days

✗ 3. $4\frac{1}{7}$ days

✗ 4. $\frac{1}{7}$ days

Question ID : 264330156532

Option 1 ID : 264330613516

Option 2 ID : 264330613515

Option 3 ID : 264330613517

Option 4 ID : 264330613518

Status : Answered

Chosen Option : 1

Q.13 The weight of a cube varies directly as the product of its volume and its density. The ratio of densities of the materials of the first cube and second cube is 27 : 16. If the weight of the first cube is 4 times the weight of the second cube, then what is the ratio of the edges of the first cube and second cube?

Ans ✗ 1. 2 : 3

✗ 2. 3 : 2

✗ 3. 3 : 4

✓ 4. 4 : 3

Question ID : 264330156308

Option 1 ID : 264330612633

Option 2 ID : 264330612634

Option 3 ID : 264330612632

Option 4 ID : 264330612631

Status : Answered

Chosen Option : 4

Q.14 The height of a right circular cone is 20 cm, and its base diameter is 30 cm. What is the curved surface area and the total surface area of the right circular cone, respectively?

Ans ✗ 1. $335\pi \text{ cm}^2$ and $525\pi \text{ cm}^2$

✗ 2. $390\pi \text{ cm}^2$ and $475\pi \text{ cm}^2$

✗ 3. $450\pi \text{ cm}^2$ and $625\pi \text{ cm}^2$

✓ 4. $375\pi \text{ cm}^2$ and $600\pi \text{ cm}^2$

Question ID : 264330156201

Option 1 ID : 264330612204

Option 2 ID : 264330612203

Option 3 ID : 264330612205

Option 4 ID : 264330612206

Status : Answered

Chosen Option : 4

Q.15 Study the given table and answer the question that follows.

The table gives the percentage of marks obtained by five students in five different subjects.

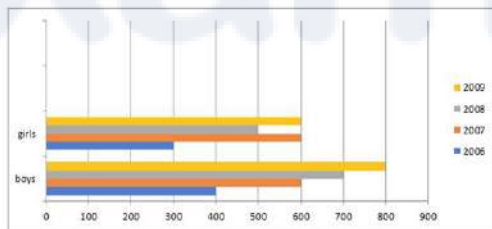
Students	Subjects (Max Marks = 100)				
	Mathematics	Physics	Chemistry	English	Hindi
Rahul	60	80	75	70	80
Vijay	80	90	80	75	85
Nani	70	80	70	70	80
Ganesh	80	75	60	60	65
Rohit	70	70	50	50	75

What is the average marks obtained by all the five students in Mathematics?

- Ans
- 1. 70
 - 2. 75
 - 3. 72
 - 4. 65

Question ID : 264330157333
Option 1 ID : 264330616698
Option 2 ID : 264330616696
Option 3 ID : 264330616695
Option 4 ID : 264330616697
Status : Answered
Chosen Option : 3

Q.16 The following bar graph indicates the enrolment of boys and girls in a school during the years 2006-2009. Study the bar graph carefully and answer the question.



Find the ratio of the total number of boys to girls enrolled in all the years 2006 to 2009.

- Ans
- 1. 3 : 4
 - 2. 3 : 5
 - 3. 5 : 3
 - 4. 5 : 4

Question ID : 264330153857
Option 1 ID : 264330602891
Option 2 ID : 264330602893
Option 3 ID : 264330602892
Option 4 ID : 264330602894
Status : Answered
Chosen Option : 4

Q.17 Money is doubled in a bank account in 7 years, when the interest is compounded annually. What time in years is needed to make an amount 8 times in the bank?

- Ans**
- ✓ 1. 21
 - ✗ 2. 14
 - ✗ 3. 35
 - ✗ 4. 28

Question ID : 264330156284
Option 1 ID : 264330612537
Option 2 ID : 264330612535
Option 3 ID : 264330612538
Option 4 ID : 264330612536
Status : Answered
Chosen Option : 1

Q.18 A car travels 200 km at a speed of 50 km/h and then travels another 200 km at a speed of 80 km/h. What is the average speed of the car for the entire journey? (round to two places of decimals)

- Ans**
- ✗ 1. 59.75km/h
 - ✗ 2. 60.24 km/h
 - ✓ 3. 61.54 km/h
 - ✗ 4. 62.53 km/h

Question ID : 264330156258
Option 1 ID : 264330612431
Option 2 ID : 264330612432
Option 3 ID : 264330612433
Option 4 ID : 264330612434
Status : Answered
Chosen Option : 3

Q.19 A thief noticed a policeman from a distance of 300 m and started to run at a speed of 12 km/h. The policeman chased at a speed of 13 km/h and he caught the thief. What was the distance run by the thief?

- Ans**
- ✗ 1. 7200 m
 - ✗ 2. 4800 m
 - ✗ 3. 1800 m
 - ✓ 4. 3600 m

Question ID : 264330154056
Option 1 ID : 264330603688
Option 2 ID : 264330603690
Option 3 ID : 264330603687
Option 4 ID : 264330603689
Status : Answered
Chosen Option : 4

Q.20 S gets 65, 74, 62, 68 and 68 marks in Hindi, English, Mathematics, Physics and Chemistry, respectively. His average marks in Mathematics, Hindi and English are _____ more than the average marks in Mathematics, Physics and Chemistry.

- Ans**
- 1. 0.5
 - 2. 1.33
 - 3. 1.67
 - 4. 1

Question ID : **264330153798**
Option 1 ID : **264330602655**
Option 2 ID : **264330602657**
Option 3 ID : **264330602658**
Option 4 ID : **264330602656**
Status : **Answered**
Chosen Option : **4**

Section : Reasoning Ability and Problem Solving

Q.1 What should come in place of ? in the given series?

41 43 47 53 61 ?

- Ans**
- 1. 73
 - 2. 74
 - 3. 71
 - 4. 72

Question ID : **264330151541**
Option 1 ID : **264330593793**
Option 2 ID : **264330593794**
Option 3 ID : **264330593791**
Option 4 ID : **264330593792**
Status : **Answered**
Chosen Option : **3**

ixamBee

Prepare 50% Faster

Q.2 Which figure should replace the question mark (?) if the following figure series were to be continued?

R	C	O	2	E	♥	R	S	
O	♥	E	S	C	R	R	O	2
2	S	♥	E	S	C	O	2	?

Ans

✗ 1.

2	O
E	C
S	R

✗ 2.

2	E
S	R
C	♥

✗ 3.

2	R
E	C
S	O

✓ 4.

2	O
E	R
C	♥

Question ID : 264330154755

Option 1 ID : 264330606486

Option 2 ID : 264330606485

Option 3 ID : 264330606484

Option 4 ID : 264330606483

Status : Answered

Chosen Option : 4

Q.3 Find out the correct alternative that when filled in the blanks in the same sequence will make the series logically complete.

B_KPBN_R_OKTB_KVBQK_

Ans

✗ 1. SJORN

✓ 2. MKBPX

✗ 3. JFIEH

✗ 4. MFHID

Question ID : 264330154723

Option 1 ID : 264330606358

Option 2 ID : 264330606356

Option 3 ID : 264330606357

Option 4 ID : 264330606355

Status : Answered

Chosen Option : 2

Q.4 What will come in place of '?' in the following equation, if '+' and '×' are interchanged and '×' and '-' are interchanged?

$$12 - 6 + 3 + 3 \times 7 = ?$$

- Ans**
- 1. 66
 - 2. 14
 - 3. 11
 - 4. 33

Question ID : 264330154663
 Option 1 ID : 264330606116
 Option 2 ID : 264330606118
 Option 3 ID : 264330606115
 Option 4 ID : 264330606117
 Status : Answered
 Chosen Option : 1

Q.5 In a certain code language, 'DIAL' is coded as '1326' and 'IDLE' is coded as '6183'. What is the code for 'E' in the given code language?

- Ans**
- 1. 1
 - 2. 8
 - 3. 3
 - 4. 6

Question ID : 264330151695
 Option 1 ID : 264330594407
 Option 2 ID : 264330594410
 Option 3 ID : 264330594408
 Option 4 ID : 264330594409
 Status : Answered
 Chosen Option : 2

Q.6 If F means '-', C means '×', D means '+', B means '÷', then what will come in place of the question mark (?) in the following equation?

$$44 \text{ F } 18 \text{ C } 3 \text{ B } 108 \text{ D } 6 = ?$$

- Ans**
- 1. 8
 - 2. 18
 - 3. 6
 - 4. 16

Question ID : 264330154680
 Option 1 ID : 264330606184
 Option 2 ID : 264330606186
 Option 3 ID : 264330606183
 Option 4 ID : 264330606185
 Status : Answered
 Chosen Option : 1

Q.7

Select the option figure in which the given figure (X) is embedded as its part (rotation is NOT allowed).



(X)

Ans

✗ 1.



✗ 2.



✗ 3.



✓ 4.



Question ID : 264330151730

Option 1 ID : 264330594548

Option 2 ID : 264330594547

Option 3 ID : 264330594549

Option 4 ID : 264330594550

Status : Answered

Chosen Option : 4

Q.8 What should come in place of ? in the given series based on the English alphabetical order?

HPA, KTD, NXG, QBJ, ?

Ans ✗ 1. UEM

✓ 2. TFM

✗ 3. SEN

✗ 4. SFN

Question ID : 264330155782

Option 1 ID : 264330610531

Option 2 ID : 264330610534

Option 3 ID : 264330610533

Option 4 ID : 264330610532

Status : Answered

Chosen Option : 2

Q.9 In the following number-pairs, the second number is obtained by applying certain mathematical operations to the first number. Select the set in which the numbers are related in the same way as are the numbers of the following sets.

(NOTE: Operations should be performed on the whole numbers, without breaking down the numbers into its constituent digits. E.g. 13 – Operations on 13 such as adding / subtracting /multiplying etc. to 13 can be performed.

Breaking down 13 into 1 and 3 and then performing mathematical operations on 1 and 3 is not allowed)

7, 50

15, 226

Ans 1. 21, 445

2. 11, 131

3. 14, 162

4. 17, 290

Question ID : 264330151621

Option 1 ID : 264330594114

Option 2 ID : 264330594111

Option 3 ID : 264330594112

Option 4 ID : 264330594113

Status : Answered

Chosen Option : 4

Q.10 Read the given statements and conclusions carefully. You have to take the given statements to be true even if they seem to be at variance from commonly known facts. You have to decide which conclusion/s logically follow/s from the given statements.

Statements: Some schools are big. All big are malls. No mall is cheap.

Conclusion I: All big are schools.

Conclusion II: Some malls are big.

Ans 1. Both conclusions (I) and (II) are follow.

2. Only conclusion (II) is follow.

3. Only conclusion (I) is follow.

4. Neither conclusion (I) nor (II) is follow.

Question ID : 264330155895

Option 1 ID : 264330610986

Option 2 ID : 264330610984

Option 3 ID : 264330610983

Option 4 ID : 264330610985

Status : Answered

Chosen Option : 1

Q.11 Read the given statements and conclusions carefully. You have to take the given statements to be true even if they seem to be at variance from commonly known facts. You have to decide which conclusion/s logically follow/s from the given statements.

Statements: All trash are rags. Some rags are big. All big are crabs.

Conclusion I: All big are rags.

Conclusion II: Some crabs are rags.

- Ans**
- 1. Both conclusions (I) and (II) are follow.
 - 2. Only conclusion (I) is follow.
 - 3. Neither conclusion (I) nor (II) is follow.
 - 4. Only conclusion (II) is follow.

Question ID : 264330155909

Option 1 ID : 264330611042

Option 2 ID : 264330611039

Option 3 ID : 264330611041

Option 4 ID : 264330611040

Status : Answered

Chosen Option : 1

Q.12 OE 13 is related to MC 17 in a certain way. In the same way, FL 16 is related to DJ 20. To which of the following is RD 15 related to following the same logic?

- Ans**
- 1. SF 18
 - 2. QE 18
 - 3. PB 19
 - 4. PC 19

Question ID : 264330151676

Option 1 ID : 264330594334

Option 2 ID : 264330594331

Option 3 ID : 264330594332

Option 4 ID : 264330594333

Status : Answered

Chosen Option : 3

Q.13 In the following number-pairs, the second number is obtained by applying certain mathematical operations to the first number. Select the set in which the numbers are related in the same way as are the numbers of the following sets.
(NOTE: Operations should be performed on the whole numbers, without breaking down the numbers into its constituent digits. E.g. 13 – Operations on 13 such as adding /deleting /multiplying etc. to 13 can be performed. Breaking down 13 into 1 and 3 and then performing mathematical operations on 1 and 3 is not allowed)

3 : 7
5 : 23

- Ans**
- 1. 6 : 34
 - 2. 8 : 64
 - 3. 9 : 80
 - 4. 4 : 18

Question ID : 264330154651

Option 1 ID : 264330606069

Option 2 ID : 264330606068

Option 3 ID : 264330606067

Option 4 ID : 264330606070

Status : Answered

Chosen Option : 1

Q.14 What should come in place of ? in the given series?

16 17 20 21 24 ?

- Ans
- 1. 30
 - 2. 25
 - 3. 28
 - 4. 27

Question ID : 264330151721
Option 1 ID : 264330594513
Option 2 ID : 264330594511
Option 3 ID : 264330594512
Option 4 ID : 264330594514
Status : Answered
Chosen Option : 2

Q.15 If 3rd Oct 2011 is Monday, then what will be the day of the week on 4th Nov 2021?

- Ans
- 1. Friday
 - 2. Tuesday
 - 3. Thursday
 - 4. Monday

Question ID : 264330154337
Option 1 ID : 264330604813
Option 2 ID : 264330604814
Option 3 ID : 264330604812
Option 4 ID : 264330604811
Status : Answered
Chosen Option : 2

Q.16 Select the correct mirror image of the given figure when the mirror is placed at MN as shown below.

M
|
R k h 2 9 a
|
N

- Ans
- 1. R k h 2 9 a
 - 2. a 9 2 h k R
 - 3. 9 a 2 k h R
 - 4. R k h 2 9 a

Question ID : 264330151527
Option 1 ID : 264330593736
Option 2 ID : 264330593735
Option 3 ID : 264330593738
Option 4 ID : 264330593737
Status : Answered
Chosen Option : 2

Q.17 What should come in place of '?' in the given series?

13 34 76 160 328 ?

- Ans
- 1. 625
 - 2. 664
 - 3. 672
 - 4. 638

Question ID : 264330151466
Option 1 ID : 264330593491
Option 2 ID : 264330593493
Option 3 ID : 264330593494
Option 4 ID : 264330593492
Status : Answered
Chosen Option : 2

Q.18 In a certain code language, 'ENTER' is coded as 'FOTGT' and 'DICEY' is coded as 'EJCGA'. What is the code for 'CHILD' in the given code language?

- Ans
- 1. DIINF
 - 2. DHIME
 - 3. EJJNE
 - 4. EHIMF

Question ID : 264330155831
Option 1 ID : 264330610727
Option 2 ID : 264330610730
Option 3 ID : 264330610728
Option 4 ID : 264330610729
Status : Answered
Chosen Option : 1

Q.19 Six people, Kajal, Neetu, Lovey, Omar, Meenu and Jay are sitting in a straight line, facing north. Lovey sits 3rd from the left end. Neetu sits 2nd to the right of Lovey. Omar sits to the immediate right of Neetu. Meenu sits 2nd to the left of Omar. Kajal sits 2nd to the left of Meenu. Who sits to the immediate left of Lovey?

- Ans
- 1. Kajal
 - 2. Meenu
 - 3. Omar
 - 4. Jay

Question ID : 264330155662
Option 1 ID : 264330610051
Option 2 ID : 264330610053
Option 3 ID : 264330610052
Option 4 ID : 264330610054
Status : Answered
Chosen Option : 1

Q.20 Select the combination of letters that when sequentially placed in the blanks of the given series, will complete the series.

C _ D _ DD _ _ DC _ D

- Ans**
- 1. DDCCD
 - 2. DCCDD
 - 3. CCDCC
 - 4. DCDCD

Question ID : 264330151642
Option 1 ID : 264330594196
Option 2 ID : 264330594195
Option 3 ID : 264330594198
Option 4 ID : 264330594197
Status : Answered
Chosen Option : 2

Section : General Awareness

Q.1 Swami Dayanand Saraswati founded a reform organisation in 1875 that attempted to reform Hinduism. What was it called?

- Ans**
- 1. Arya Samaj
 - 2. Prarthna Samaj
 - 3. Satyashodhak Samaj
 - 4. Brahmo Samaj

Question ID : 264330161743
Option 1 ID : 264330634300
Option 2 ID : 264330634301
Option 3 ID : 264330634302
Option 4 ID : 264330634299
Status : Answered
Chosen Option : 1

Q.2 The Brihadeswara Temple at Tanjavur built by:

- Ans**
- 1. Rajaraja II
 - 2. Samudragupta
 - 3. Rajendra Chola
 - 4. Rajaraja I

Question ID : 264330160783
Option 1 ID : 264330630466
Option 2 ID : 264330630463
Option 3 ID : 264330630464
Option 4 ID : 264330630465
Status : Answered
Chosen Option : 4

Q.3 Which diseases result from a deficiency of Vitamin B due to its insufficient intake?

- Ans
- 1. Colour blindness
 - 2. Rickets
 - 3. Beri Beri
 - 4. Scurvy

Question ID : 264330157809
Option 1 ID : 264330618595
Option 2 ID : 264330618596
Option 3 ID : 264330618598
Option 4 ID : 264330618597
Status : Answered
Chosen Option : 3

Q.4 What is the minimum voting age for the citizens of India?

- Ans
- 1. 18 years
 - 2. 21 years
 - 3. 30 years
 - 4. 25 years

Question ID : 264330159915
Option 1 ID : 264330627007
Option 2 ID : 264330627008
Option 3 ID : 264330627010
Option 4 ID : 264330627009
Status : Answered
Chosen Option : 1

Q.5 Who among the following singers had a Guinness World Record for recording 28 songs in a single day? (As of December 2022.)

- Ans
- 1. Sonu Nigam
 - 2. Udit Narayan
 - 3. Kumar Sanu
 - 4. Arijit Singh

Question ID : 264330155515
Option 1 ID : 264330609464
Option 2 ID : 264330609465
Option 3 ID : 264330609466
Option 4 ID : 264330609463
Status : Answered
Chosen Option : 3

Q.6 'Anandamath' is a famous _____ novel which was written by Bankim Chandra Chatterjee.

- Ans
- 1. Gujarati
 - 2. Rajasthani
 - 3. Punjabi
 - 4. Bengali

Question ID : 264330155500
Option 1 ID : 264330609405
Option 2 ID : 264330609403
Option 3 ID : 264330609406
Option 4 ID : 264330609404
Status : Answered
Chosen Option : 4

Q.7 The four Nattuvanars namely Ponaiyah, Vadivelu, Sivanandam and Chinnaiya, who are renowned as Tanjaore Bandhu shaped up the modern day _____.

- Ans
- 1. Bharatanatyam
 - 2. Kuchipudi
 - 3. Kodiattam
 - 4. Kathakali

Question ID : 264330160806
Option 1 ID : 264330630556
Option 2 ID : 264330630557
Option 3 ID : 264330630555
Option 4 ID : 264330630558
Status : Answered
Chosen Option : 1

Q.8 In February 2023, Uttar Pradesh government launched a/an _____ called Family ID-One Family One Identity.

- Ans
- 1. Portal
 - 2. News letter
 - 3. WhatsApp Group
 - 4. Email Id

Question ID : 264330158328
Option 1 ID : 264330620673
Option 2 ID : 264330620674
Option 3 ID : 264330620671
Option 4 ID : 264330620672
Status : Answered
Chosen Option : 1

Q.9 Which of the following statements is best related to the 'pacific ring of fire'?

- Ans
- 1. Known for thermal power station
 - 2. Known for volcano and earthquakes
 - 3. Known for only glacial formations
 - 4. Known for tropical rainforests

Question ID : 264330157832
Option 1 ID : 264330618687
Option 2 ID : 264330618688
Option 3 ID : 264330618690
Option 4 ID : 264330618689
Status : Answered
Chosen Option : 2

Q.10 Why are intermediate goods NOT included in the calculation of national income?

- Ans
- 1. Including intermediate goods would result in double counting.
 - 2. Intermediate goods are not produced within the country's borders.
 - 3. Including intermediate goods would decrease the value of national income.
 - 4. Intermediate goods are not important for measuring economic activity.

Question ID : 264330157313
Option 1 ID : 264330616616
Option 2 ID : 264330616615
Option 3 ID : 264330616618
Option 4 ID : 264330616617
Status : Answered
Chosen Option : 1

Q.11 According to the Global Multidimensional Poverty Index (MPI) 2021, India's rank is _____ out of 109 countries.

- Ans
- 1. 66th
 - 2. 71st
 - 3. 59th
 - 4. 63rd

Question ID : 264330166018
Option 1 ID : 264330651149
Option 2 ID : 264330651150
Option 3 ID : 264330651147
Option 4 ID : 264330651148
Status : Not Answered
Chosen Option : --

Q.12 The tribal dancer and singer, Arjun Singh Dhurve from _____ has been conferred with ' Padma Shri' in the year 2022.

- Ans
- 1. Karnataka
 - 2. Tamil Nadu
 - 3. Madhya Pradesh
 - 4. Andhra Pradesh

Question ID : 264330155530
Option 1 ID : 264330609523
Option 2 ID : 264330609524
Option 3 ID : 264330609526
Option 4 ID : 264330609525
Status : Not Answered
Chosen Option : --

Q.13 What is the main purpose of a bank statement?

- Ans
- 1. To track income and expenses
 - 2. To transfer funds to another account
 - 3. To advertise new banking products
 - 4. To have locker facility in the bank

Question ID : 264330157305
Option 1 ID : 264330616583
Option 2 ID : 264330616586
Option 3 ID : 264330616584
Option 4 ID : 264330616585
Status : Answered
Chosen Option : 1

Q.14 The Konark Dance Festival (KDF) has been held at Konark since 1986 between _____ every year.

- Ans
- 1. 1st and 5th October
 - 2. 1st and 5th August
 - 3. 1st and 5th January
 - 4. 1st and 5th December

Question ID : 264330160838
Option 1 ID : 264330630685
Option 2 ID : 264330630684
Option 3 ID : 264330630683
Option 4 ID : 264330630686
Status : Not Answered
Chosen Option : --

Q.15 Identify the southernmost range of the Himalaya from the following.

- Ans
- 1. Shiwaliks Range
 - 2. Trans Himalaya Range
 - 3. Lesser Himalaya Range
 - 4. Greater Himalaya Range

Question ID : 264330161529
Option 1 ID : 264330633443
Option 2 ID : 264330633446
Option 3 ID : 264330633444
Option 4 ID : 264330633445
Status : Not Answered
Chosen Option : --

Q.16 राज्य के नीति निदेशक सिद्धांतों के बारे में निम्नलिखित में से कौन-सा कथन सही नहीं है?

- Ans
- 1. पुरुष, स्त्री और बच्चों के लिए उपर्युक्त रोजगार और कार्य का स्वच्छ वातवरण सुनिश्चित करना
 - 2. स्त्री और पुरुष दोनों के लिए आजीविका के पर्याप्त साधन उपलब्ध कराना
 - 3. केवल पुरुषों के लिए समान कार्य के लिए समान पारिश्रमिक सुनिश्चित करना
 - 4. कुछ हाथों में संपत्ति के संकेंद्रण को रोकने के लिए आर्थिक व्यवस्था को पुनर्गठित करना

Question ID : 264330162149
 Option 1 ID : 264330635926
 Option 2 ID : 264330635923
 Option 3 ID : 264330635925
 Option 4 ID : 264330635924
 Status : Answered
 Chosen Option : 3

Q.17 निम्नलिखित में से कौन-सी घटना 1919 में घटित हुई थी?

- Ans
- 1. चार्टर एक्ट का नवीनीकरण
 - 2. जनप्रतिनिधित्व अधिनियम पारित किया गया
 - 3. ठगी एवं डकैती दमन अधिनियम पारित किया गया
 - 4. रौलेट एक्ट के विरुद्ध सत्याग्रह

Question ID : 264330160877
 Option 1 ID : 264330630839
 Option 2 ID : 264330630842
 Option 3 ID : 264330630841
 Option 4 ID : 264330630840
 Status : Answered
 Chosen Option : 4

Q.18 The novel 'Train to Pakistan' was written by _____.

- Ans
- 1. Khushwant Singh
 - 2. Nawaz Sharif
 - 3. Zakir Hussain
 - 4. Imran Khan

Question ID : 264330160972
 Option 1 ID : 264330631221
 Option 2 ID : 264330631219
 Option 3 ID : 264330631222
 Option 4 ID : 264330631220
 Status : Answered
 Chosen Option : 1

Q.19 Popular Bollywood actor Kriti Sanon is a trained _____ dancer.

- Ans
- 1. Kuchipudi
 - 2. Kathak
 - 3. Odissi
 - 4. Bharatanatyam

Question ID : 264330159069
 Option 1 ID : 264330623636
 Option 2 ID : 264330623637
 Option 3 ID : 264330623638
 Option 4 ID : 264330623635
 Status : Answered
 Chosen Option : 4

Q.20 In which of the following cities was the final match of the 2022 Vijay Hazare Trophy held?

Ans 1. Ahmedabad

2. Raipur

3. Lucknow

4. Ranchi

Question ID : 264330161156

Option 1 ID : 264330631957

Option 2 ID : 264330631955

Option 3 ID : 264330631958

Option 4 ID : 264330631956

Status : Not Answered

Chosen Option : --

Q.21 Who started the chemical revolution in the 18th century by naming oxygen and helping to organize chemical nomenclature?

Ans 1. Dame Kathleen Lonsdale

2. Svante August Arrhenius

3. Joseph Priestley

4. Antoine-Laurent Lavoisier

Question ID : 264330161048

Option 1 ID : 264330631524

Option 2 ID : 264330631523

Option 3 ID : 264330631526

Option 4 ID : 264330631525

Status : Not Answered

Chosen Option : --

Q.22 Aman Sehrawat became the first Indian to win a gold medal in World Wrestling Championship in which category?

Ans 1. U-15

2. U-20

3. U-23

4. U-25

Question ID : 264330158372

Option 1 ID : 264330620847

Option 2 ID : 264330620848

Option 3 ID : 264330620849

Option 4 ID : 264330620850

Status : Answered

Chosen Option : 1

Q.23 Independence Day is celebrated every year in Pakistan on _____.

Ans 1. 30 January

2. 14 August

3. 31 December

4. 23 March

Question ID : 264330161565

Option 1 ID : 264330633588

Option 2 ID : 264330633587

Option 3 ID : 264330633589

Option 4 ID : 264330633590

Status : Answered

Chosen Option : 2

Q.24 Which of the following Indian musicians was called 'Mallika-e-Ghazal'?

- Ans 1. Prabha Bharti
 2. Begum Akhtar
 3. Chitra Singh
 4. Farida Khanum

Question ID : 264330161777
Option 1 ID : 264330634437
Option 2 ID : 264330634435
Option 3 ID : 264330634436
Option 4 ID : 264330634438
Status : Answered
Chosen Option : 2

Q.25 The word 'yorker' is related to which sport?

- Ans 1. Kho Kho
 2. Cricket
 3. Basketball
 4. Kabaddi

Question ID : 264330158243
Option 1 ID : 264330620333
Option 2 ID : 264330620334
Option 3 ID : 264330620331
Option 4 ID : 264330620332
Status : Not Answered
Chosen Option : --

Section : English Language and Comprehension

Q.1 Select the most appropriate option to fill in the blank.

I wish we had _____ come here.

- Ans 1. right
 2. clear
 3. never
 4. agreed

Question ID : 264330153495
Option 1 ID : 264330601495
Option 2 ID : 264330601496
Option 3 ID : 264330601498
Option 4 ID : 264330601497
Status : Answered
Chosen Option : 3

Q.2 Select the most appropriate ANTONYM of the given word.
Carnal

- Ans 1. Material
 2. Spiritual
 3. Temporal
 4. Somatic

Question ID : 264330153577
Option 1 ID : 264330601805
Option 2 ID : 264330601806
Option 3 ID : 264330601803
Option 4 ID : 264330601804
Status : Answered
Chosen Option : 1

Q.3 Select the option that can be used as a one-word substitute for the given group of words.
Fail to function normally

- Ans 1. Maltreat
 2. Mangle
 3. Manipulate
 4. Malfunction

Question ID : 264330151908
Option 1 ID : 264330595247
Option 2 ID : 264330595248
Option 3 ID : 264330595249
Option 4 ID : 264330595250
Status : Answered
Chosen Option : 4

Q.4 Select the most appropriate meaning of the given phrase.

All of a sudden

- Ans 1. Intentionally
 2. Quickly and unexpectedly
 3. Quickly and Expectedly
 4. Accidentally

Question ID : 264330155394
Option 1 ID : 264330608987
Option 2 ID : 264330608989
Option 3 ID : 264330608988
Option 4 ID : 264330608990
Status : Answered
Chosen Option : 2

Q.5 The following sentence has been split into four segments. Identify the segment that contains a grammatical error.

My daughter was / invited to lunch / hosted by the Governor / at his residence.

- Ans
- 1. at his residence
 - 2. invited to lunch
 - 3. hosted by the Governor
 - 4. My daughter was

Question ID : 264330155412
Option 1 ID : 264330609058
Option 2 ID : 264330609056
Option 3 ID : 264330609057
Option 4 ID : 264330609055
Status : Answered
Chosen Option : 2

Q.6 Select the INCORRECTLY spelt word.

- Ans
- 1. Resist
 - 2. Rectifie
 - 3. Recruit
 - 4. Repulse

Question ID : 264330151924
Option 1 ID : 264330595313
Option 2 ID : 264330595311
Option 3 ID : 264330595312
Option 4 ID : 264330595314
Status : Answered
Chosen Option : 2

Q.7 Select the option that rectifies the spelling of the underlined word in the given sentence.

The maintenance department did a fabulous job.

- Ans
- 1. mainteanance
 - 2. maintenance
 - 3. maintenannce
 - 4. meintenance

Question ID : 264330153155
Option 1 ID : 264330600182
Option 2 ID : 264330600179
Option 3 ID : 264330600180
Option 4 ID : 264330600181
Status : Answered
Chosen Option : 2

Q.8 Select the most appropriate synonym of the bracketed word in the following sentence to fill in the blank.

The novel's intricate plot and rich character development kept readers _____(committed) from the beginning to the end.

- Ans
- 1. engaged
 - 2. secluded
 - 3. detached
 - 4. dismantled

Question ID : 264330152658
Option 1 ID : 264330598236
Option 2 ID : 264330598238
Option 3 ID : 264330598237
Option 4 ID : 264330598235
Status : Answered
Chosen Option : 1

Q.9 Select the most appropriate meaning of the underlined idiom.

These things are very hard to swallow.

- Ans
- 1. difficult to resist
 - 2. difficult to speak
 - 3. difficult to believe
 - 4. difficult to eat

Question ID : 264330143186
Option 1 ID : 264330561022
Option 2 ID : 264330561021
Option 3 ID : 264330561020
Option 4 ID : 264330561019
Status : Answered
Chosen Option : 3

Q.10 Select the most appropriate idiom to fill in the blank.

The decision to go on a trip after my vacations was the _____.

- Ans
- 1. ice on the cake
 - 2. icing on the cake
 - 3. apple on the cake
 - 4. icing on the brownie

Question ID : 264330153078
Option 1 ID : 264330599876
Option 2 ID : 264330599877
Option 3 ID : 264330599878
Option 4 ID : 264330599875
Status : Answered
Chosen Option : 2

Q.11 The following sentence has been split into four segments. Identify the segment that contains a grammatical error.

The new software / consists from / several features / and tools.

- Ans 1. consists from
 2. several features
 3. and tools
 4. The new software

Question ID : 264330155430
Option 1 ID : 264330609128
Option 2 ID : 264330609129
Option 3 ID : 264330609130
Option 4 ID : 264330609127
Status : Answered
Chosen Option : 1

Q.12 Select the most appropriate idiom to fill in the blank.
It's easy to say that you'll start exercising every day, but it is _____.

- Ans 1. like fish out of water
 2. easier said than done
 3. crying wolf
 4. going the extra mile

Question ID : 264330151887
Option 1 ID : 264330595168
Option 2 ID : 264330595167
Option 3 ID : 264330595170
Option 4 ID : 264330595169
Status : Answered
Chosen Option : 2

Q.13 Select the INCORRECTLY spelt word.

- Ans 1. Paralysis
 2. Lyricist
 3. Indigestion
 4. Patron

Question ID : 264330151927
Option 1 ID : 264330595324
Option 2 ID : 264330595325
Option 3 ID : 264330595326
Option 4 ID : 264330595323
Status : Answered
Chosen Option : 1

Q.14 Select the most appropriate ANTONYM of the word given in brackets to fill in the blank.
Uncle Joe is _____ (reputable) for spending 10 years of his youth in prison due to armed robbery.

- Ans
- 1. mournful
 - 2. anxious
 - 3. well-known
 - 4. notorious

Question ID : 264330152696
Option 1 ID : 264330598388
Option 2 ID : 264330598389
Option 3 ID : 264330598390
Option 4 ID : 264330598387
Status : Answered
Chosen Option : 4

Q.15 Parts of the following sentence have been given as options. Select the option that contains an error.
If you work hard, you secure good marks.

- Ans
- 1. good marks
 - 2. If you
 - 3. work hard
 - 4. you secure

Question ID : 264330152819
Option 1 ID : 264330598870
Option 2 ID : 264330598867
Option 3 ID : 264330598868
Option 4 ID : 264330598869
Status : Answered
Chosen Option : 4

Q.16 Select the option that can be used as a one-word substitute for the given group of words.

A person who is skilled in making maps

- Ans
- 1. Calligrapher
 - 2. Curator
 - 3. Cacographer
 - 4. Cartographer

Question ID : 264330153342
Option 1 ID : 264330600919
Option 2 ID : 264330600920
Option 3 ID : 264330600922
Option 4 ID : 264330600921
Status : Answered
Chosen Option : 4

Q.17 Select the option that can be used as a one-word substitute for the underlined group of words.

Sita loves her glass container in which she has many fish.

- Ans
- 1. aquarium
 - 2. cannister
 - 3. planetarium
 - 4. museum

Question ID : 264330153514
Option 1 ID : 264330601568
Option 2 ID : 264330601570
Option 3 ID : 264330601569
Option 4 ID : 264330601567
Status : Answered
Chosen Option : 1

Q.18 Select the most appropriate option that can rectify the underlined segment in the given sentence. If there is no need to rectify it, select 'no rectification needed'.

His claim to be the smartly kid in the school was a bit hyperbole!

- Ans
- 1. no rectification needed
 - 2. smartest
 - 3. smarter
 - 4. smart

Question ID : 264330153464
Option 1 ID : 264330601374
Option 2 ID : 264330601372
Option 3 ID : 264330601373
Option 4 ID : 264330601371
Status : Answered
Chosen Option : 2

Q.19 Select the option that can be used as a one-word substitute for the given group of words.

Easily set on fire

- Ans
- 1. Innocuous
 - 2. Ingrained
 - 3. Inflammable
 - 4. Inimical

Question ID : 264330151911
Option 1 ID : 264330595262
Option 2 ID : 264330595260
Option 3 ID : 264330595259
Option 4 ID : 264330595261
Status : Answered
Chosen Option : 3

Q.20 The following sentence has been split into four segments. Identify the segment that contains an error.
She has / bought / a car / two years ago.

- Ans**
- 1. She has
 - 2. bought
 - 3. two years ago
 - 4. a car

Question ID : **264330155321**
Option 1 ID : **264330608723**
Option 2 ID : **264330608724**
Option 3 ID : **264330608726**
Option 4 ID : **264330608725**
Status : **Answered**
Chosen Option : **1**

Comprehension:

In the following passage, some words have been deleted. Read the passage carefully and select the most appropriate option to fill in each blank.
Students put their heart and soul into studies while (1)_____ for examinations. They prepare the syllabus by giving many revisions, making important points on flash cards, preparing notes throughout the year. They read reference books in order to score good marks in the examination. This is the demanding (2)_____ of all the students who are appearing in the examinations. But, most students feel tensed on the day before an examination. Everyone is in a state of (3)_____ as to what questions would be asked in the paper and whether they could write their answers properly to get good marks. Such overthinking is the cause of (4)_____ which definitely affects their performance. They should revise the subject regularly and should not keep their doubts pending. This will not create a (5)_____ of backlog and they will get sufficient time to resolve their problem.

SubQuestion No : 21

Q.21 Select the most appropriate option to fill in blank number 1.

- Ans**
- 1. calculating
 - 2. guiding
 - 3. producing
 - 4. preparing

Question ID : **264330152914**
Option 1 ID : **264330599235**
Option 2 ID : **264330599238**
Option 3 ID : **264330599237**
Option 4 ID : **264330599236**
Status : **Answered**
Chosen Option : **4**

Comprehension:

In the following passage, some words have been deleted. Read the passage carefully and select the most appropriate option to fill in each blank.

Students put their heart and soul into studies while (1)_____ for examinations. They prepare the syllabus by giving many revisions, making important points on flash cards, preparing notes throughout the year. They read reference books in order to score good marks in the examination. This is the demanding (2)_____ of all the students who are appearing in the examinations. But, most students feel tensed on the day before an examination. Everyone is in a state of (3)_____ as to what questions would be asked in the paper and whether they could write their answers properly to get good marks. Such overthinking is the cause of (4)_____ which definitely affects their performance. They should revise the subject regularly and should not keep their doubts pending. This will not create a (5)_____ of backlog and they will get sufficient time to resolve their problem.

SubQuestion No : 22

Q.22 Select the most appropriate option to fill in blank number 2.

- Ans
- 1. principle
 - 2. method
 - 3. routine
 - 4. habit

Question ID : 264330152915

Option 1 ID : 264330599242

Option 2 ID : 264330599239

Option 3 ID : 264330599241

Option 4 ID : 264330599240

Status : Answered

Chosen Option : 3

Comprehension:

In the following passage, some words have been deleted. Read the passage carefully and select the most appropriate option to fill in each blank.

Students put their heart and soul into studies while (1)_____ for examinations. They prepare the syllabus by giving many revisions, making important points on flash cards, preparing notes throughout the year. They read reference books in order to score good marks in the examination. This is the demanding (2)_____ of all the students who are appearing in the examinations. But, most students feel tensed on the day before an examination. Everyone is in a state of (3)_____ as to what questions would be asked in the paper and whether they could write their answers properly to get good marks. Such overthinking is the cause of (4)_____ which definitely affects their performance. They should revise the subject regularly and should not keep their doubts pending. This will not create a (5)_____ of backlog and they will get sufficient time to resolve their problem.

SubQuestion No : 23

Q.23 Select the most appropriate option to fill in blank number 3.

- Ans
- 1. confidence
 - 2. hesitation
 - 3. assurance
 - 4. uncertainty

Question ID : 264330152916

Option 1 ID : 264330599244

Option 2 ID : 264330599245

Option 3 ID : 264330599246

Option 4 ID : 264330599243

Status : Answered

Chosen Option : 2

Comprehension:

In the following passage, some words have been deleted. Read the passage carefully and select the most appropriate option to fill in each blank.

Students put their heart and soul into studies while (1)_____ for examinations. They prepare the syllabus by giving many revisions, making important points on flash cards, preparing notes throughout the year. They read reference books in order to score good marks in the examination. This is the demanding (2)_____ of all the students who are appearing in the examinations. But, most students feel tensed on the day before an examination. Everyone is in a state of (3)_____ as to what questions would be asked in the paper and whether they could write their answers properly to get good marks. Such overthinking is the cause of (4)_____ which definitely affects their performance. They should revise the subject regularly and should not keep their doubts pending. This will not create a (5)_____ of backlog and they will get sufficient time to resolve their problem.

SubQuestion No : 24

Q.24 Select the most appropriate option to fill in blank number 4.

- Ans 1. anxiety
 2. agitation
 3. peace
 4. comfort

Question ID : 264330152917

Option 1 ID : 264330599248

Option 2 ID : 264330599250

Option 3 ID : 264330599247

Option 4 ID : 264330599249

Status : Answered

Chosen Option : 1

Comprehension:

In the following passage, some words have been deleted. Read the passage carefully and select the most appropriate option to fill in each blank.

Students put their heart and soul into studies while (1)_____ for examinations. They prepare the syllabus by giving many revisions, making important points on flash cards, preparing notes throughout the year. They read reference books in order to score good marks in the examination. This is the demanding (2)_____ of all the students who are appearing in the examinations. But, most students feel tensed on the day before an examination. Everyone is in a state of (3)_____ as to what questions would be asked in the paper and whether they could write their answers properly to get good marks. Such overthinking is the cause of (4)_____ which definitely affects their performance. They should revise the subject regularly and should not keep their doubts pending. This will not create a (5)_____ of backlog and they will get sufficient time to resolve their problem.

SubQuestion No : 25

Q.25 Select the most appropriate option to fill in blank number 5.

- Ans 1. burden
 2. mass
 3. weight
 4. power

Question ID : 264330152918

Option 1 ID : 264330599254

Option 2 ID : 264330599252

Option 3 ID : 264330599253

Option 4 ID : 264330599251

Status : Answered

Chosen Option : 1

Multi Tasking Non Technical Staff and Havaldar CBIC and CBN Examination 2023

Roll Number	
Candidate Name	
Venue Name	Sri Balaji College Of Engineering And Technology
Exam Date	14/09/2023
Exam Time	4:00 PM - 6:00 PM
Subject	MTS Non Tech Havaldar CBIC and CBN Examination 2023

Section : Numerical and Mathematical Ability

Q.1 A square and a rhombus have the same base and the rhombus is inclined at 45° , then what will be the ratio of the area of the square to the area of the rhombus?

- Ans**
- 1. $\sqrt{3}:1$
 - 2. $1:\sqrt{3}$
 - 3. $\sqrt{2}:\sqrt{3}$
 - 4. $\sqrt{2}:1$

Question ID : 264330154105

Option 1 ID : 264330603883

Option 2 ID : 264330603884

Option 3 ID : 264330603885

Option 4 ID : 264330603886

Status : Not Answered

Chosen Option : --

Q.2 If $A : B : C = 3 : 4 : 5$, then $\sqrt{A^2 + B^2} : \sqrt{C^2 - B^2}$ is:

- Ans**
- 1. 3 : 2
 - 2. 4 : 5
 - 3. 5 : 3
 - 4. 3 : 5

Question ID : 264330154084

Option 1 ID : 264330603800

Option 2 ID : 264330603802

Option 3 ID : 264330603801

Option 4 ID : 264330603799

Status : Answered

Chosen Option : 3

Q.3 The ratio of two numbers is 3 : 4. If the sum of these two numbers is 70, then what is their LCM?

Ans ✓ 1. 120

✗ 2. 96

✗ 3. 108

✗ 4. 84

Question ID : 264330155689

Option 1 ID : 264330610162

Option 2 ID : 264330610160

Option 3 ID : 264330610161

Option 4 ID : 264330610159

Status : **Answered**

Chosen Option : 1

Q.4 What is the amount (in ₹) due on a sum of money ₹12,500 after one year if the compound interest is payable half-yearly at 12% per annum?

Ans ✗ 1. 14,450

✗ 2. 14,540

✗ 3. 15,440

✓ 4. 14,045

Question ID : 264330153774

Option 1 ID : 264330602559

Option 2 ID : 264330602562

Option 3 ID : 264330602560

Option 4 ID : 264330602561

Status : **Answered**

Chosen Option : 4

Q.5 A sum at simple interest of 5.5% per annum amounts to ₹7,503 in 4 years. Find the sum (in ₹).

Ans ✗ 1. 5,350

✓ 2. 6,150

✗ 3. 5,980

✗ 4. 5,520

Question ID : 264330155745

Option 1 ID : 264330610383

Option 2 ID : 264330610386

Option 3 ID : 264330610385

Option 4 ID : 264330610384

Status : **Not Answered**

Chosen Option : --

Q.6 In what ratio should rice worth ₹140 per kg and ₹90 per kg be mixed so that a mixture of two qualities of rice may become worth ₹110 per kg?

- Ans** 1. 2 : 3
 2. 1 : 3
 3. 3 : 2
 4. 1 : 2

Question ID : 264330154120
Option 1 ID : 264330603944
Option 2 ID : 264330603946
Option 3 ID : 264330603943
Option 4 ID : 264330603945
Status : Answered
Chosen Option : 1

Q.7 30 men can complete a work in 10 days. They started working and after six days, 10 more men joined them. In how many days will the total work be completed?

- Ans** 1. 8
 2. 9
 3. 6
 4. 7

Question ID : 264330156240
Option 1 ID : 264330612361
Option 2 ID : 264330612362
Option 3 ID : 264330612359
Option 4 ID : 264330612360
Status : Answered
Chosen Option : 2

Q.8 What is the value of the following expression?

$$\frac{[27 - (6 \div 3) \times 4] + 18}{84 - 8 \div 4 \times 8 - 2}$$

- Ans** 1. $\frac{37}{66}$
 2. $\frac{33}{7}$
 3. $\frac{29}{20}$
 4. $\frac{8}{9}$

Question ID : 264330156176
Option 1 ID : 264330612106
Option 2 ID : 264330612105
Option 3 ID : 264330612104
Option 4 ID : 264330612103
Status : Answered
Chosen Option : 1

Q.9 In what ratio should coffee powder costing ₹500 per kg be mixed with coffee powder costing ₹750 per kg so that the cost of the mixture is ₹600 per kg?

- Ans**
- 1. 5 : 2
 - 2. 4 : 3
 - 3. 3 : 2
 - 4. 3 : 1

Question ID : 264330155955

Option 1 ID : 264330611221

Option 2 ID : 264330611220

Option 3 ID : 264330611219

Option 4 ID : 264330611222

Status : Answered

Chosen Option : 3

Q.10 The salaries of P and Q together amount to ₹6,40,000. P and Q save 60% and 40%, respectively, of their individual salaries. If their expenditures are the same, then what is the ratio of P's salary to Q's salary?

- Ans**
- 1. 4 : 3
 - 2. 2 : 3
 - 3. 3 : 2
 - 4. 3 : 4

Question ID : 264330153762

Option 1 ID : 264330602514

Option 2 ID : 264330602512

Option 3 ID : 264330602511

Option 4 ID : 264330602513

Status : Not Answered

Chosen Option : --

Q.11 A 228 m long train is running at 125 km/h. In what time (in seconds), will it pass a man running at 17 km/h in the same direction in which the train is going?

- Ans**
- 1. 9.2
 - 2. 7.6
 - 3. 6.2
 - 4. 8.5

Question ID : 264330155754

Option 1 ID : 264330610419

Option 2 ID : 264330610421

Option 3 ID : 264330610422

Option 4 ID : 264330610420

Status : Answered

Chosen Option : 2

Q.12 Find the fourth proportional of 12^{35} , 3^{12} and 4^{12} .

- Ans
- 1. 12^{-23}
 - 2. 3^{24}
 - 3. 12^{-11}
 - 4. 4^{24}

Question ID : 264330154053

Option 1 ID : 264330603676

Option 2 ID : 264330603678

Option 3 ID : 264330603675

Option 4 ID : 264330603677

Status : Not Answered

Chosen Option : --

Q.13 Smita is faster than Pihu. Smita and Pihu each walk 48 km. The sum of their speeds is 14 km/hr, and the sum of times taken by them is 28 hours. What is Smita's speed?

- Ans
- 1. 12.5 km/hr
 - 2. 12 km/hr
 - 3. 8 km/hr
 - 4. 10 km/hr

Question ID : 264330156192

Option 1 ID : 264330612169

Option 2 ID : 264330612170

Option 3 ID : 264330612167

Option 4 ID : 264330612168

Status : Not Answered

Chosen Option : --

Q.14 Arin alone can do a piece of work in 6 days and Selvi alone can do the same in 8 days. Arin and Selvi undertook to do it for ₹7,200. With the help of Kevin, they completed the work in 3 days. How much is to be paid to Kevin?

- Ans
- 1. ₹900
 - 2. ₹700
 - 3. ₹800
 - 4. ₹600

Question ID : 264330156118

Option 1 ID : 264330611873

Option 2 ID : 264330611871

Option 3 ID : 264330611874

Option 4 ID : 264330611872

Status : Answered

Chosen Option : 1

Q.15 A man goes from his house to a vegetable market at the speed of 15 km/h and walked back at the speed of 10 km/h. If the whole journey took 2 hours 30 minutes, find the distance from his house to the vegetable market (in km).

- Ans**
- 1. 15
 - 2. 20
 - 3. 12
 - 4. 18

Question ID : 264330155992
Option 1 ID : 264330611367
Option 2 ID : 264330611370
Option 3 ID : 264330611368
Option 4 ID : 264330611369
Status : Not Answered
Chosen Option : --

Q.16 A closed wooden box measures externally 10 cm long, 8 cm broad and 6 cm high. If the thickness of the wood is 0.5 cm, then the volume of wood required is:

- Ans**
- 1. 165 cm^3
 - 2. 300 cm^3
 - 3. 230 cm^3
 - 4. 150 cm^3

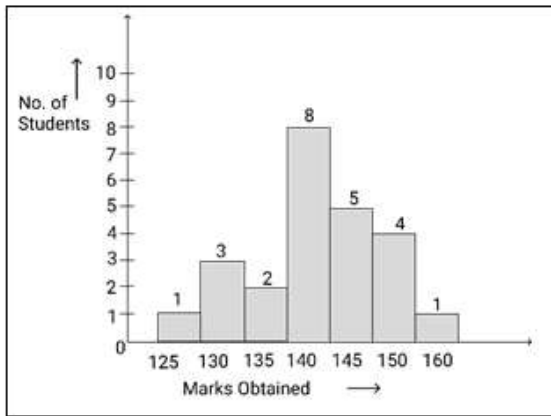
Question ID : 264330154107
Option 1 ID : 264330603893
Option 2 ID : 264330603892
Option 3 ID : 264330603894
Option 4 ID : 264330603891
Status : Not Answered
Chosen Option : --

Q.17 A factory owner earns 12% on the product manufactured by him. The shopkeeper earns 10% profit on the same item. If shopkeeper sells the product for ₹ 98.56, then the cost price of the product for the factory owner is ₹ ____.

- Ans**
- 1. 88
 - 2. 90
 - 3. 84
 - 4. 80

Question ID : 264330153804
Option 1 ID : 264330602679
Option 2 ID : 264330602680
Option 3 ID : 264330602681
Option 4 ID : 264330602682
Status : Answered
Chosen Option : 4

Q.18 Study the given graph and answer the question that follows.



How many students obtained more than 125 marks?

- Ans
- 1. 19
 - 2. 17
 - 3. 15
 - 4. 23

Question ID : 264330156242

Option 1 ID : 264330612369

Option 2 ID : 264330612368

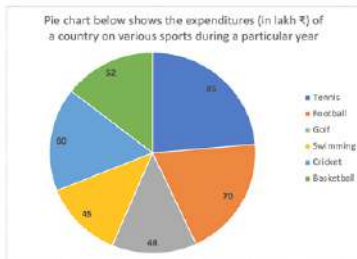
Option 3 ID : 264330612367

Option 4 ID : 264330612370

Status : Answered

Chosen Option : 4

Q.19 The Pie chart below shows the expenditures (in lakh ₹) of a country on various sports during a particular year. Study the graph carefully and answer the questions given below it.



The total expenditure on tennis, football and cricket taken together is what per cent (rounded off to 1 decimal place) more or less than the total expenditure on golf, swimming and basketball taken together?

- Ans
- 1. More, 29.6%
 - 2. less, 48.3%
 - 3. Less, 29.6%
 - 4. More, 48.3%

Question ID : 264330153785

Option 1 ID : 264330602605

Option 2 ID : 264330602604

Option 3 ID : 264330602606

Option 4 ID : 264330602603

Status : Not Answered

Chosen Option : --

Q.20 If a loss is $\frac{1}{8}$ th of the selling price, then the loss percentage is:

Ans 1. $11\frac{1}{9}\%$

2. $7\frac{4}{9}\%$

3. $10\frac{1}{9}\%$

4. $8\frac{5}{9}\%$

Question ID : 264330162069

Option 1 ID : 264330635605

Option 2 ID : 264330635606

Option 3 ID : 264330635603

Option 4 ID : 264330635604

Status : Not Answered

Chosen Option : --

Section : Reasoning Ability and Problem Solving

ExamBee

Prepare 50% Fast

Q.1 Which figure should replace the question mark (?) if the following figure series were to be continued?

B	Y	6	6	Y	△	△	6	=	=	6	B	?
△		↑	↑		B	B		↑	↑		△	

Ans

✗ 1.

△	C	↑
B		=

✗ 2.

B	=	6
△		↑

✓ 3.

B	=	C
△		↑

✗ 4.

C	=	6
△		↑

Question ID : 264330154746

Option 1 ID : 264330606447

Option 2 ID : 264330606449

Option 3 ID : 264330606450

Option 4 ID : 264330606448

Status : Answered

Chosen Option : 2

Q.2 Select the combination of letters that when sequentially placed in the blanks of the given series, will complete the series.

W _ X _ XXW _ X _ _ X

Ans

✗ 1. XWWXW

✗ 2. WWXWX

✓ 3. XWXWX

✗ 4. WXWXW

Question ID : 264330151655

Option 1 ID : 264330594247

Option 2 ID : 264330594248

Option 3 ID : 264330594249

Option 4 ID : 264330594250

Status : Answered

Chosen Option : 3

Q.3 What should come in place of '?' in the given series?

19 40 103 292 859 ?

- Ans
- 1. 2536
 - 2. 2560
 - 3. 2490
 - 4. 2508

Question ID : 264330151454
Option 1 ID : 264330593445
Option 2 ID : 264330593446
Option 3 ID : 264330593443
Option 4 ID : 264330593444
Status : Answered
Chosen Option : 2

Q.4 What should come in place of '?' in the given series?

18 41 110 ? 938 2801 8390

- Ans
- 1. 291
 - 2. 317
 - 3. 325
 - 4. 339

Question ID : 264330151488
Option 1 ID : 264330593579
Option 2 ID : 264330593580
Option 3 ID : 264330593581
Option 4 ID : 264330593582
Status : Answered
Chosen Option : 2

Q.5 14 is related to 57 following a certain logic. Following the same logic, 22 is related to 89. To which of the following is 52 related to, following the same logic?

- Ans
- 1. 209
 - 2. 208
 - 3. 206
 - 4. 204

Question ID : 264330151607
Option 1 ID : 264330594058
Option 2 ID : 264330594057
Option 3 ID : 264330594056
Option 4 ID : 264330594055
Status : Answered
Chosen Option : 1

Q.6 What should come in place of ? in the given series based on the English alphabetical order?

BSL, EUM , HWN , KYO, ?

- Ans
- 1. MBP
 - 2. MBQ
 - 3. NBR
 - 4. NAP

Question ID : 264330155775

Option 1 ID : 264330610506

Option 2 ID : 264330610503

Option 3 ID : 264330610505

Option 4 ID : 264330610504

Status : Answered

Chosen Option : 4

Q.7 BNFT is related to FRJX in a certain way based on the English alphabetical order. In the same way, JOEA is related to NSIE. To which of the following is HERK related to, following the same logic?

- Ans
- 1. LJVP
 - 2. JHVP
 - 3. LIVO
 - 4. KHUN

Question ID : 264330151679

Option 1 ID : 264330594343

Option 2 ID : 264330594345

Option 3 ID : 264330594346

Option 4 ID : 264330594344

Status : Answered

Chosen Option : 3

Q.8 Read the given statements and conclusions carefully. You have to take the given statements to be true even if they seem to be at variance from commonly known facts. You have to decide which conclusion/s logically follow/s from the given statements.

Statements: All buckets are plastic. Some plastic are spoons. All spoons are forks.

Conclusion I: Some plastic are buckets.

Conclusion II: Some plastics are forks.

- Ans
- 1. Only conclusion (II) is follow.
 - 2. Both conclusions (I) and (II) are follow.
 - 3. Only conclusion (I) is follow.
 - 4. Neither conclusion (I) nor (II) is follow.

Question ID : 264330155928

Option 1 ID : 264330611116

Option 2 ID : 264330611118

Option 3 ID : 264330611115

Option 4 ID : 264330611117

Status : Answered

Chosen Option : 2

Q.9 What should come in place of '?' in the given series?

20 104 524 2624 13124 ?

- Ans
- 1. 65282
 - 2. 64586
 - 3. 65624
 - 4. 63457

Question ID : 264330151461
Option 1 ID : 264330593473
Option 2 ID : 264330593472
Option 3 ID : 264330593474
Option 4 ID : 264330593471
Status : Answered
Chosen Option : 3

Q.10 What should come in place of ? in the given series based on the English alphabetical order?

ZHS, YER, XBQ, WYP, ?

- Ans
- 1. VWO
 - 2. WVN
 - 3. WWN
 - 4. VVO

Question ID : 264330155789
Option 1 ID : 264330610561
Option 2 ID : 264330610559
Option 3 ID : 264330610562
Option 4 ID : 264330610560
Status : Answered
Chosen Option : 4

Q.11 Meena, Saroj, Goldy, Priti, Poonam and Baby are sitting around a circular table facing the centre. Meena sits to the immediate left of Saroj. Goldy sits 3rd to the right of Saroj. Priti sits 2nd to the left of Goldy. Poonam sits to the immediate right of Goldy. Who sits 2nd to the left of Baby?

- Ans
- 1. Saroj
 - 2. Goldy
 - 3. Priti
 - 4. Poonam

Question ID : 264330155649
Option 1 ID : 264330609999
Option 2 ID : 264330610001
Option 3 ID : 264330610000
Option 4 ID : 264330610002
Status : Answered
Chosen Option : 1

Q.12 5 is related to 20 following a certain logic. Following the same logic, 7 is related to 26. To which of the following is 2 related to, following the same logic?

- Ans** 1. 11
 2. 13
 3. 10
 4. 12

Question ID : 264330151581
Option 1 ID : 264330593952
Option 2 ID : 264330593954
Option 3 ID : 264330593951
Option 4 ID : 264330593953
Status : Not Answered
Chosen Option : --

Q.13 If 11th June 1987 is Thursday, then what will be the day of the week on 4th Dec 1989?

- Ans** 1. Tuesday
 2. Monday
 3. Saturday
 4. Wednesday

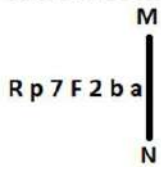
Question ID : 264330154332
Option 1 ID : 264330604792
Option 2 ID : 264330604793
Option 3 ID : 264330604791
Option 4 ID : 264330604794
Status : Answered
Chosen Option : 2

Q.14 In a certain code language, 'how are you' is coded as 'aj ts el' and 'show them how' is coded as 'wn el pd'. How is 'how' coded in the given language?

- Ans** 1. pd
 2. el
 3. aj
 4. wn

Question ID : 264330151711
Option 1 ID : 264330594471
Option 2 ID : 264330594473
Option 3 ID : 264330594472
Option 4 ID : 264330594474
Status : Answered
Chosen Option : 2

Q.15 Select the correct mirror image of the given figure when the mirror is placed at MN as shown below.



- Ans
- 1. a d 5 7 7 q R
 - 2. 5 d 5 7 7 q R
 - 3. a d 7 7 7 q R
 - 4. 5 d 5 7 7 d R

Question ID : 264330151520

Option 1 ID : 264330593710

Option 2 ID : 264330593708

Option 3 ID : 264330593707

Option 4 ID : 264330593709

Status : Answered

Chosen Option : 2

Q.16 What will come in the place of '?' in the following equation, if '+' and '-' are interchanged and 'x' and '÷' are interchanged?

$$37 - 18 + 6 + 325 \times 25 = ?$$

- Ans
- 1. 132
 - 2. 152
 - 3. 142
 - 4. 122

Question ID : 264330155673

Option 1 ID : 264330610098

Option 2 ID : 264330610095

Option 3 ID : 264330610097

Option 4 ID : 264330610096

Status : Answered

Chosen Option : 1

Q.17 What will come in place of '?' in the following equation, if '-' and 'x' are interchanged and '+' and '÷' are interchanged?

$$7 + 7 \times 3 - 4 + 5 = ?$$

- Ans
- 1. -1
 - 2. -6
 - 3. -2
 - 4. -4

Question ID : 264330154659

Option 1 ID : 264330606102

Option 2 ID : 264330606100

Option 3 ID : 264330606101

Option 4 ID : 264330606099

Status : Answered

Chosen Option : 2

Q.18 Read the given statement(s) and conclusions carefully. Assuming that the information given in the statements is true, even if it appears to be at variance with commonly known facts, decide which of the given conclusions logically follow(s) from the statement(s).

Statements: All the trucks are flies. Some scooters are flies.

Conclusions:

(I) All trucks are scooters.

(II) Some scooters are trucks.

Ans ✓ 1. Neither conclusion (I) nor (II) is follows.

✗ 2. Only conclusion (I) is follows.

✗ 3. Both conclusions (I) and (II) are follows.

✗ 4. Only conclusion (II) is follows.

Question ID : 264330154429

Option 1 ID : 264330605181

Option 2 ID : 264330605179

Option 3 ID : 264330605182

Option 4 ID : 264330605180

Status : Answered

Chosen Option : 1

Q.19 In a certain code language, 'FLOWERY' is coded as 'FYREWOL' and 'LINGUIST' is coded as 'LTSIUGNI'. What is the code for 'MANIFEST' in the given code language?

Ans ✓ 1. MTSEFINA

✗ 2. TESFINAM

✗ 3. SEFINAMT

✗ 4. MSTEGJMA

Question ID : 264330155814

Option 1 ID : 264330610661

Option 2 ID : 264330610659

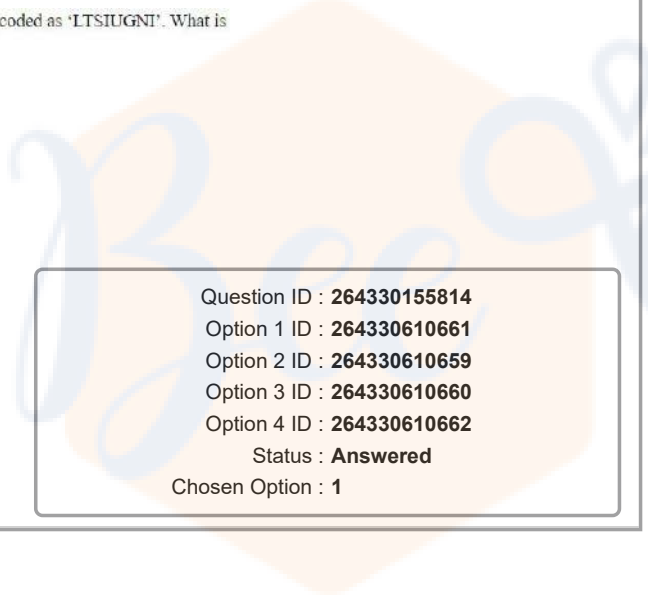
Option 3 ID : 264330610660

Option 4 ID : 264330610662

Status : Answered

Chosen Option : 1

ixam



Prepare 50% Fast

Q.20 Select the option figure in which the given figure (X) is embedded as its part (rotation is NOT allowed).



(X)

Ans

✗ 1.



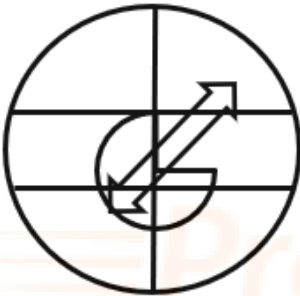
✗ 2.



✓ 3.



✗ 4.



Question ID : 264330151729

Option 1 ID : 264330594546

Option 2 ID : 264330594545

Option 3 ID : 264330594544

Option 4 ID : 264330594543

Status : Answered

Chosen Option : 3

Q.1 Which of the following Indian playback singers received the Bharat Ratna in 2001?

- Ans
- 1. KS Chithra
 - 2. Geeta Dutt
 - 3. Lata Mangeshkar
 - 4. Asha Bhosle

Question ID : 264330161773
Option 1 ID : 264330634422
Option 2 ID : 264330634421
Option 3 ID : 264330634420
Option 4 ID : 264330634419
Status : Answered
Chosen Option : 4

Q.2 Which of the following cricket players wrote the autobiography 'Playing It My Way'?

- Ans
- 1. Yuvraj Singh
 - 2. Sourav Ganguly
 - 3. Sachin Tendulkar
 - 4. Kiran More

Question ID : 264330160960
Option 1 ID : 264330631173
Option 2 ID : 264330631172
Option 3 ID : 264330631171
Option 4 ID : 264330631174
Status : Answered
Chosen Option : 1

Q.3 In which city is the India Gate situated?

- Ans
- 1. Delhi
 - 2. Ahmedabad
 - 3. Lucknow
 - 4. Mumbai

Question ID : 264330160775
Option 1 ID : 264330630431
Option 2 ID : 264330630433
Option 3 ID : 264330630434
Option 4 ID : 264330630432
Status : Answered
Chosen Option : 1

Q.4 Who authored the book 'Poverty and Un-British Rule in India' in 1901, which was highly critical of the economic impact of British Rule?

- Ans
- 1. Pherozeshah Mehta
 - 2. Dadabhai Naoroji
 - 3. WC Bonnerji
 - 4. Badruddin Tyabji

Question ID : 264330161748
Option 1 ID : 264330634319
Option 2 ID : 264330634322
Option 3 ID : 264330634320
Option 4 ID : 264330634321
Status : Answered
Chosen Option : 2

Q.5 The efforts of Malayalam poet Vallathol Narayana Menon and dancer and guru Kalyanikutty Amma brought back and gave a new life to the dance form

- Ans**
- 1. Bharatanatyam
 - 2. Kuchipudi
 - 3. Mohiniyattam
 - 4. Kathakali

Question ID : 264330160790
Option 1 ID : 264330630492
Option 2 ID : 264330630493
Option 3 ID : 264330630494
Option 4 ID : 264330630491
Status : Not Answered
Chosen Option : --

Q.6 Where was All Indian Muslim League formed in 1906?

- Ans**
- 1. Agra
 - 2. Dhaka
 - 3. Lahore
 - 4. Delhi

Question ID : 264330162333
Option 1 ID : 264330636661
Option 2 ID : 264330636660
Option 3 ID : 264330636659
Option 4 ID : 264330636662
Status : Answered
Chosen Option : 3

Q.7 Which of the following writers wrote the autobiography 'Truth, Love and a Little Malice'?

- Ans**
- 1. Khushwant Singh
 - 2. Chetan Bhagat
 - 3. Pratibha Ray
 - 4. Amrita Pritam

Question ID : 264330160962
Option 1 ID : 264330631180
Option 2 ID : 264330631182
Option 3 ID : 264330631181
Option 4 ID : 264330631179
Status : Answered
Chosen Option : 2

Q.8 In 2023, a three-day All-India Taekwondo Championship was organized in _____ to mark 50 years of Korea-India diplomatic relations.

- Ans
- 1. Kolkata
 - 2. Bengaluru
 - 3. Mizoram
 - 4. New Delhi

Question ID : 264330161154
Option 1 ID : 264330631949
Option 2 ID : 264330631947
Option 3 ID : 264330631950
Option 4 ID : 264330631948
Status : Not Answered
Chosen Option : --

Q.9 The outward remittances under the Reserve Bank of India's _____ made a strong comeback in the first quarter of FY23 as Indians increased spending on international travel, maintenance of close relatives and gifts.

- Ans
- 1. Liberalised Remittance Scheme
 - 2. Regular Remittance Scheme
 - 3. Liquid Remittances Scheme
 - 4. Foreign Remittances Scheme

Question ID : 264330161403
Option 1 ID : 264330632939
Option 2 ID : 264330632940
Option 3 ID : 264330632941
Option 4 ID : 264330632942
Status : Not Answered
Chosen Option : --

Q.10 The Pradhan Mantri MUDRA Yojana (PMMY) scheme provide loans up to _____ to the non-corporate, non-farm small and micro entrepreneurs. (As of April 2023).

- Ans
- 1. 5 lakh
 - 2. 10 lakh
 - 3. 2.5 lakh
 - 4. 1 lakh

Question ID : 264330161578
Option 1 ID : 264330633641
Option 2 ID : 264330633642
Option 3 ID : 264330633640
Option 4 ID : 264330633639
Status : Answered
Chosen Option : 4

Q.11 What is the primary cause for the highest precipitation in India?

- Ans
- 1. West Garo Hills
 - 2. South-West Monsoon
 - 3. North-East Monsoon
 - 4. East Khasi Hills

Question ID : 264330157824
Option 1 ID : 264330618658
Option 2 ID : 264330618657
Option 3 ID : 264330618656
Option 4 ID : 264330618655
Status : Answered
Chosen Option : 2

Q.12 The _____ maestros who revived the art form in the late 1940s include Kelucharan Mohapatra and Raghunath Dutta.

- Ans
- 1. Sattriya
 - 2. Odissi
 - 3. Manipuri
 - 4. Chhau

Question ID : 264330160813
Option 1 ID : 264330630584
Option 2 ID : 264330630585
Option 3 ID : 264330630583
Option 4 ID : 264330630586
Status : Not Answered
Chosen Option : --

Q.13 The Guru Kelucharan Mohapatra Award 2022 was conferred upon Guru Niranjana Rout and Guru Ramahari Das for their contribution to the fields of _____ dance and music.

- Ans
- 1. Sattriya
 - 2. Kuchipudi
 - 3. Kathak
 - 4. Odissi

Question ID : 264330155484
Option 1 ID : 264330609339
Option 2 ID : 264330609341
Option 3 ID : 264330609342
Option 4 ID : 264330609340
Status : Not Answered
Chosen Option : --

Q.14 Which of the following is true about disposable income in relation to personal income?

- Ans
- 1. Disposable income is equal to personal income.
 - 2. Disposable income is always less than personal income.
 - 3. Disposable income is always greater than personal income.
 - 4. Disposable income can be greater or less than personal income, depending on taxes and deductions.

Question ID : 264330161589

Option 1 ID : 264330633685

Option 2 ID : 264330633684

Option 3 ID : 264330633683

Option 4 ID : 264330633686

Status : Not Answered

Chosen Option : --

Q.15 Which of the following best describes the process of calorimetry?

- Ans
- 1. Measuring the amount of compressive strength
 - 2. Measuring the amount of force
 - 3. Measuring the amount of electricity
 - 4. Measuring the amount of heat energy transferred

Question ID : 264330161330

Option 1 ID : 264330632649

Option 2 ID : 264330632647

Option 3 ID : 264330632648

Option 4 ID : 264330632650

Status : Not Answered

Chosen Option : --

Q.16 Which Article of the Constitution of India provides early childhood care and education for all children until they complete the age of six years?

- Ans
- 1. Article 38
 - 2. Article 39
 - 3. Article 45
 - 4. Article 40

Question ID : 264330159906

Option 1 ID : 264330626974

Option 2 ID : 264330626973

Option 3 ID : 264330626971

Option 4 ID : 264330626972

Status : Not Answered

Chosen Option : --

Q.17 Which of the following is NOT a constitutional body?

- Ans
- 1. Election Commission
 - 2. Finance Commission
 - 3. Union Public Service Commission
 - 4. NITI Aayog

Question ID : 264330160861

Option 1 ID : 264330630776

Option 2 ID : 264330630778

Option 3 ID : 264330630777

Option 4 ID : 264330630775

Status : Answered

Chosen Option : 3

Q.18 विटामिन B1 की कमी से कौन-सा पोषण संबंधी विकार होता है जिससे परिधीय तंत्रिकाओं (peripheral nerves) और क्षय (wasting) की समस्याएं उत्पन्न होती हैं?

- Ans
- 1. शुष्काक्षिपाक (Xerophthalmia)
 - 2. पर्निसियस एनीमिया (Pernicious anaemia)
 - 3. बेरीबेरी (Beriberi)
 - 4. सूखा रोग (Rickets)

Question ID : 264330161075

Option 1 ID : 264330631634

Option 2 ID : 264330631631

Option 3 ID : 264330631633

Option 4 ID : 264330631632

Status : Not Answered

Chosen Option : --

Q.19 According to the National Multidimensional Poverty Index of NITI Aayog 2021, which of the following states has less than 1% multidimensionally Poor of its total population?

- Ans
- 1. Maharashtra
 - 2. Punjab
 - 3. Telangana
 - 4. Kerala

Question ID : 264330161569

Option 1 ID : 264330633606

Option 2 ID : 264330633604

Option 3 ID : 264330633605

Option 4 ID : 264330633603

Status : Not Answered

Chosen Option : --

Q.20 According to the Hindu calendar, Holi is celebrated on _____.

- Ans
- 1. Chaitra Purnima
 - 2. Pausa Purnima
 - 3. Phalguna Purnima
 - 4. Magha Purnima

Question ID : 264330160827

Option 1 ID : 264330630641

Option 2 ID : 264330630642

Option 3 ID : 264330630639

Option 4 ID : 264330630640

Status : Answered

Chosen Option : 3

Q.21 Who was the music director of the famous song "Aye Mere Watan Ke Logon" sung by Lata Mangeshkar?

- Ans
- 1. Kishore Kumar
 - 2. Rajesh Roshan
 - 3. C Ramchandra
 - 4. Anand Raaj Anand

Question ID : 264330155514
Option 1 ID : 264330609462
Option 2 ID : 264330609459
Option 3 ID : 264330609461
Option 4 ID : 264330609460
Status : Answered
Chosen Option : 4

Q.22 भारत में जंगली गधे और ऊंट किस प्रकार के वनों में पाए जाते हैं?

- Ans
- 1. उष्णकटिबंधीय सदाबहार वन
 - 2. पर्वतीय वन
 - 3. कांटेदार वन और झाड़ियां
 - 4. मैंग्रोव वन

Question ID : 264330161499
Option 1 ID : 264330633325
Option 2 ID : 264330633326
Option 3 ID : 264330633324
Option 4 ID : 264330633323
Status : Answered
Chosen Option : 3

Q.23 Which Indian sprinter bagged two gold medals, one each in the men's 100 and 200-metre races at the Flanders Cup 2023 athletics meet?

- Ans
- 1. Mohammed Afsal P
 - 2. Amlan Borgohain
 - 3. Tejas Shirse
 - 4. Jinson Johnson

Question ID : 264330161132
Option 1 ID : 264330631859
Option 2 ID : 264330631860
Option 3 ID : 264330631862
Option 4 ID : 264330631861
Status : Not Answered
Chosen Option : --

Q.24 Who became the first Indian javelin ace to win the gold at the Zurich Diamond League?

- Ans
- 1. Sahil Silwal
 - 2. Shivpal Yadav
 - 3. Neeraj Chopra
 - 4. Rohit Yadav

Question ID : 264330158363
Option 1 ID : 264330620813
Option 2 ID : 264330620811
Option 3 ID : 264330620812
Option 4 ID : 264330620814
Status : Answered
Chosen Option : 3

Q.25 Which curve examines the relationship between the rate of unemployment and the rate of money wage changes?

- Ans 1. Phillips curve
 2. Indifference curve
 3. Supply curve
 4. Demand curve

Question ID : 264330161456
Option 1 ID : 264330633152
Option 2 ID : 264330633151
Option 3 ID : 264330633154
Option 4 ID : 264330633153
Status : Answered
Chosen Option : 1

Section : English Language and Comprehension

Q.1 The following sentence has been split into four segments. Identify the segment that contains a grammatical error.
When I was in high school / I participated in several extracurricular activities / such as the debate team and the school newspaper / which help me developed my communication and writing skills.

- Ans 1. When I was in high school
 2. which help me developed my communication and writing skills
 3. such as the debate team and the school newspaper
 4. I participated in several extracurricular activities

Question ID : 264330144180
Option 1 ID : 264330564983
Option 2 ID : 264330564986
Option 3 ID : 264330564985
Option 4 ID : 264330564984
Status : Answered
Chosen Option : 2

Q.2 Select the most appropriate option that can substitute the underlined segment in the given sentence.
The rise in temperature is playing havoc with India's rainfall which is pertinent for India's agriculture sector.

- Ans 1. rainfall who is pertinent
 2. rainfall which is significant
 3. rainfall which is decant
 4. rainfall which was mendicant

Question ID : 264330151807
Option 1 ID : 264330594855
Option 2 ID : 264330594857
Option 3 ID : 264330594858
Option 4 ID : 264330594856
Status : Answered
Chosen Option : 2

Q.3 Select the most appropriate idiom to fill in the blank.
Sameera has been in _____ since she got selected for a highly paid job at a multinational company.

- Ans
- 1. seventh heaven
 - 2. all the rage
 - 3. the dark
 - 4. a cold day in July

Question ID : 264330152780
Option 1 ID : 264330598714
Option 2 ID : 264330598713
Option 3 ID : 264330598712
Option 4 ID : 264330598711
Status : Answered
Chosen Option : 1

Q.4 Select the most appropriate meaning of the underlined segment in the given sentence.
I hope you break a leg at your performance tonight!

- Ans
- 1. Give up
 - 2. Make a mistake
 - 3. Perform well
 - 4. Hurt yourself

Question ID : 264330152925
Option 1 ID : 264330599281
Option 2 ID : 264330599282
Option 3 ID : 264330599280
Option 4 ID : 264330599279
Status : Answered
Chosen Option : 3

Q.5 Select the most appropriate option to fill in the blank.
Winning the championship was a dream come true for the team, but being awarded the MVP trophy was _____.

- Ans
- 1. the silver lining
 - 2. the bird in the bush
 - 3. a cold turkey
 - 4. the icing on the cake

Question ID : 264330151886
Option 1 ID : 264330595166
Option 2 ID : 264330595164
Option 3 ID : 264330595163
Option 4 ID : 264330595165
Status : Answered
Chosen Option : 4

Q.6 Select the most appropriate ANTONYM of the underlined word.
We requested grandmother to extend her visit.

- Ans
- 1. Imperil
 - 2. Curtail
 - 3. Assail
 - 4. Bewail

Question ID : 264330151820
Option 1 ID : 264330594910
Option 2 ID : 264330594907
Option 3 ID : 264330594909
Option 4 ID : 264330594908
Status : Answered
Chosen Option : 2

Q.7 Select the most appropriate option that can substitute the underlined segment in the given sentence.
Simon is afraid of closed space.

- Ans
- 1. has xenophobia
 - 2. has ecophobia
 - 3. has claustrophobia
 - 4. has hydrophobia

Question ID : 264330153512
Option 1 ID : 264330601560
Option 2 ID : 264330601559
Option 3 ID : 264330601561
Option 4 ID : 264330601562
Status : Answered
Chosen Option : 3

Q.8 Select the most appropriate synonym of the given word.
Magnificent

- Ans
- 1. Justify
 - 2. Glorious
 - 3. Highest
 - 4. Modest

Question ID : 264330152595
Option 1 ID : 264330597984
Option 2 ID : 264330597986
Option 3 ID : 264330597985
Option 4 ID : 264330597983
Status : Answered
Chosen Option : 2

Q.9 The sentence given below contains some spelling errors. Select the option that has the correct spellings.
Applications of subjects like Physiks and chemmistry in our dayly life also have higher visibelity than those of Biology.

- Ans 1. Aplicasions of subjects like Physiks and Cemistry in our dayly life also have higher visibility than those of Biology.
2. Applications of subjects like Physics and chemistry in our dayly life also have higher visibility than those of Biology.
3. Applications of subjects like Physics and Chemistry in our daily life also have higher visibility than those of Biology.
4. Aplicacions of subjects like Physics and chemmistry in our daily life also have higher visibilty than those of Biology.

Question ID : 264330153542
Option 1 ID : 264330601674
Option 2 ID : 264330601672
Option 3 ID : 264330601671
Option 4 ID : 264330601673
Status : Answered
Chosen Option : 3

Q.10 Parts of the given sentence have been underlined. One of them contains an error. The underlined parts are given as options with some changes. Select the option that correctly rectifies the error.
The weather is cold tonight than it was yesterday.

- Ans 1. its
2. are
3. were
4. colder

Question ID : 264330153175
Option 1 ID : 264330600261
Option 2 ID : 264330600259
Option 3 ID : 264330600262
Option 4 ID : 264330600260
Status : Answered
Chosen Option : 4

Q.11 Select the option that correctly rectifies the underlined spelling error in the given sentence.
Little children are afraid to go to school because of the agressive seniors who tend to bully them.

- Ans 1. Aggressive
2. Aggressive
3. Agresive
4. Agressive

Question ID : 264330155315
Option 1 ID : 264330608699
Option 2 ID : 264330608700
Option 3 ID : 264330608702
Option 4 ID : 264330608701
Status : Answered
Chosen Option : 2

Q.12 Select the most appropriate option to fill in the blank.
The scratches on her hands were clear signs of domestic violence, _____ and said that she got scratched by barbed wire fencing.

- Ans
- 1. and poverty
 - 2. yet she lied
 - 3. which was enough evidence
 - 4. done a while ago

Question ID : 264330152640
Option 1 ID : 264330598165
Option 2 ID : 264330598164
Option 3 ID : 264330598166
Option 4 ID : 264330598163
Status : Answered
Chosen Option : 2

Q.13 Select the most appropriate option that can substitute the underlined segment in the given sentence.

Rahul's sister says that my brother is the best dancer in the city.

- Ans
- 1. her brother is the best dancer in the city
 - 2. my brother was the best dancer in the city
 - 3. her brother was the best dancer in the city
 - 4. his brother was the best dancer in the city

Question ID : 264330152709
Option 1 ID : 264330598437
Option 2 ID : 264330598435
Option 3 ID : 264330598436
Option 4 ID : 264330598438
Status : Answered
Chosen Option : 1

Q.14 Select the most appropriate option that can substitute the underlined segment in the given sentence. If there is no need to substitute it, select 'No improvement required'.
A wonder in the plant kingdom, the Great Banyan Tree of the AJC Bose Botanical Garden at Shibpur in Howrah, occupies a unique position in the world records.

- Ans
- 1. occupying a unique position in
 - 2. occupies an unique position in
 - 3. No improvement required
 - 4. being occupied a unique position of

Question ID : 264330152667
Option 1 ID : 264330598271
Option 2 ID : 264330598273
Option 3 ID : 264330598274
Option 4 ID : 264330598272
Status : Answered
Chosen Option : 3

Q.15 Parts of the following sentence have been given as options. Select the option that contains an error.
The cholera is a frightful disease.

- Ans
- 1. is
 - 2. The cholera
 - 3. frightful disease
 - 4. a

Question ID : 264330152791
Option 1 ID : 264330598756
Option 2 ID : 264330598755
Option 3 ID : 264330598758
Option 4 ID : 264330598757
Status : Answered
Chosen Option : 2

Q.16 The sentence given below has spelling errors. Select the sentence without spelling errors.
Knowledge and awareness about my own self has to preceede my knowledge of things other than me.

- Ans
- 1. Knowledge and awareness about my own self has to preceede my knowledge of things other then me.
 - 2. Knowledge and awareness about my own self has to precede my knowledge of things other than me.
 - 3. Knowlegde and awareness about my own self has to preceede my knowlegde of things other than me.
 - 4. Knowledge and awarenes about my own self has to preceede my knowledge of things other than me.

Question ID : 264330151838
Option 1 ID : 264330594982
Option 2 ID : 264330594981
Option 3 ID : 264330594979
Option 4 ID : 264330594980
Status : Answered
Chosen Option : 2

Q.17 Select the most appropriate idiom to fill in the blank.
If Peter said he would get that book for you, he will do it. He always _____.

- Ans
- 1. keeps under his hat
 - 2. keeps him at arm's length
 - 3. keeps his word
 - 4. keeps his shirt on

Question ID : 264330153101
Option 1 ID : 264330599967
Option 2 ID : 264330599969
Option 3 ID : 264330599968
Option 4 ID : 264330599970
Status : Answered
Chosen Option : 3

Q.18 Select the most appropriate option that can substitute the underlined segment in the given sentence.

It has raining very hard and he has a very large umbrella to keep off the rain-drops.

- Ans
- 1. shall rain
 - 2. is raining
 - 3. will be rainy
 - 4. rained

Question ID : 264330153481

Option 1 ID : 264330601441

Option 2 ID : 264330601439

Option 3 ID : 264330601442

Option 4 ID : 264330601440

Status : Answered

Chosen Option : 2

Q.19 Select the most appropriate synonym of the underlined word in the given sentence.
Shiya had more grit than her other siblings.

- Ans
- 1. power
 - 2. level
 - 3. gap
 - 4. courage

Question ID : 264330152722

Option 1 ID : 264330598487

Option 2 ID : 264330598490

Option 3 ID : 264330598488

Option 4 ID : 264330598489

Status : Answered

Chosen Option : 4

Q.20 The following sentence has been divided into four parts. Identify the part that contains an error.

(A) The twins are / (B) often told that / (C) they are resembling / (D) each other.

- Ans
- 1. C
 - 2. A
 - 3. B
 - 4. D

Question ID : 264330152613

Option 1 ID : 264330598056

Option 2 ID : 264330598055

Option 3 ID : 264330598058

Option 4 ID : 264330598057

Status : Answered

Chosen Option : 3

Comprehension:

In the following passage some words have been deleted. Fill in the blanks with the help of the alternatives given. Select the most appropriate option for each number.

Each essay is set (1)_____ against its background and made simpler by providing (2)_____ summary and critical commentary, short notes on textual issues, and (3)_____ of important critical and theoretical issues under the heading essay topics. (4)_____ of the most commonly used terms in the literature is given at the end and meant to serve as ready reference. This book will cater the (5)_____ of students of literature and teachers teaching this course.

SubQuestion No : 21

Q.21 Select the most appropriate option to fill in blank number 1.

- Ans 1. in
 2. at
 3. on
 4. off

Question ID : 264330153584

Option 1 ID : 264330601830

Option 2 ID : 264330601828

Option 3 ID : 264330601827

Option 4 ID : 264330601829

Status : Answered

Chosen Option : 4

Comprehension:

In the following passage some words have been deleted. Fill in the blanks with the help of the alternatives given. Select the most appropriate option for each number.

Each essay is set (1)_____ against its background and made simpler by providing (2)_____ summary and critical commentary, short notes on textual issues, and (3)_____ of important critical and theoretical issues under the heading essay topics. (4)_____ of the most commonly used terms in the literature is given at the end and meant to serve as ready reference. This book will cater the (5)_____ of students of literature and teachers teaching this course.

SubQuestion No : 22

Q.22 Select the most appropriate option to fill in blank number 2.

- Ans 1. there
 2. its
 3. that
 4. this

Question ID : 264330153585

Option 1 ID : 264330601834

Option 2 ID : 264330601833

Option 3 ID : 264330601832

Option 4 ID : 264330601831

Status : Answered

Chosen Option : 2

Comprehension:

In the following passage some words have been deleted. Fill in the blanks with the help of the alternatives given. Select the most appropriate option for each number.

Each essay is set (1)_____ against its background and made simpler by providing (2)_____ summary and critical commentary, short notes on textual issues, and (3)_____ of important critical and theoretical issues under the heading essay topics. (4)_____ of the most commonly used terms in the literature is given at the end and meant to serve as ready reference. This book will cater the (5)_____ of students of literature and teachers teaching this course.

SubQuestion No : 23**Q.23 Select the most appropriate option to fill in blank number 3.**

- Ans 1. mindset
 2. chats
 3. discussions
 4. thinking

Question ID : 264330153586

Option 1 ID : 264330601838

Option 2 ID : 264330601835

Option 3 ID : 264330601836

Option 4 ID : 264330601837

Status : Answered

Chosen Option : 3

Comprehension:

In the following passage some words have been deleted. Fill in the blanks with the help of the alternatives given. Select the most appropriate option for each number.

Each essay is set (1)_____ against its background and made simpler by providing (2)_____ summary and critical commentary, short notes on textual issues, and (3)_____ of important critical and theoretical issues under the heading essay topics. (4)_____ of the most commonly used terms in the literature is given at the end and meant to serve as ready reference. This book will cater the (5)_____ of students of literature and teachers teaching this course.

SubQuestion No : 24**Q.24 Select the most appropriate option to fill in blank number 4.**

- Ans 1. figures
 2. glossary
 3. grammar
 4. data

Question ID : 264330153587

Option 1 ID : 264330601841

Option 2 ID : 264330601839

Option 3 ID : 264330601840

Option 4 ID : 264330601842

Status : Answered

Chosen Option : 2

Comprehension:

In the following passage some words have been deleted. Fill in the blanks with the help of the alternatives given. Select the most appropriate option for each number.

Each essay is set (1)_____ against its background and made simpler by providing (2)_____ summary and critical commentary, short notes on textual issues, and (3)_____ of important critical and theoretical issues under the heading essay topics. (4)_____ of the most commonly used terms in the literature is given at the end and meant to serve as ready reference. This book will cater the (5)_____ of students of literature and teachers teaching this course.

SubQuestion No : 25

Q.25 Select the most appropriate option to fill in blank number 5.

- Ans 1. desires
 2. whims
 3. feelings
 4. needs

Question ID : 264330153588

Option 1 ID : 264330601846

Option 2 ID : 264330601845

Option 3 ID : 264330601843

Option 4 ID : 264330601844

Status : Answered

Chosen Option : 4

ixam

Bee

Prepare 50% Fast